

Chemical Equilibrium

Long Answer Questions

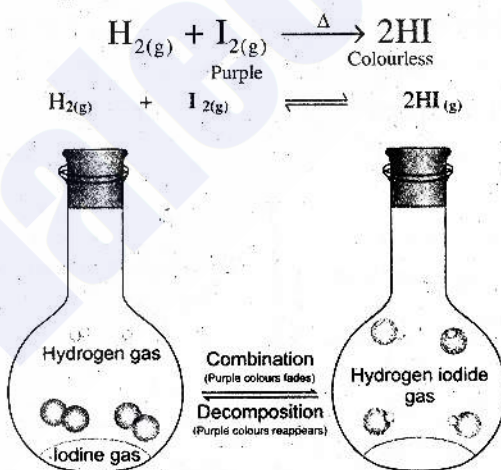
Q.1 Describe a reversible reaction with the help of an example and graph.

Ans. Reversible Reaction

The reaction in which the products can recombine to form reactants, are called reversible reactions. These reactions never go to completion. They are represented by a double arrow (\rightleftharpoons) between reactants and products. These reactions proceed in both ways, i.e., they consist of two reactions; forward and reverse. So, a reversible reaction is one which can be made to proceed in either direction depending upon the conditions.

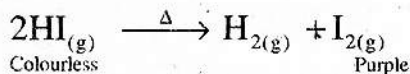
Example:

The reaction between hydrogen and iodine. Because one of the reactant, iodine is purple, while the product hydrogen iodide is colourless, proceedings of the reaction are easily observable. On heating hydrogen and iodine vapours in a closed flask, hydrogen iodide is formed. As a result purple colour of iodide fades as it reacts to form colourless hydrogen iodide, as shown in figure.



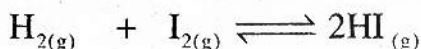
This reaction is called as forward reaction.

On the other hand, when only hydrogen iodide is heated in a closed flask, purple colour appears because of formation of iodine vapours. Such as



In this case hydrogen iodide acts as reactant and produces hydrogen and iodine vapours. This reaction is reverse of the above. Therefore, it is called as reverse reaction.

When both of these reactions are written together as a reversible reaction, they are represented as:



Chemical Equilibrium State

When we think of the term equilibrium, the first word that usually comes to mind is “balance”. However, the balance may be achieved in a variety of ways.

Thus, when the rate of the forward reaction takes place at the rate of reverse reaction, the composition of the reaction mixture remains constant, it is called a chemical equilibrium state. At equilibrium state there are two possibilities

- When reaction ceases to proceed, it is called static equilibrium. This happens mostly in physical phenomenon. For example a building remains standing rather than falling down because all the forces acting on it are balanced. This is an example of static equilibrium.
- When reaction does not stop, only the rates of forward and reverse reactions become equal to each other but take place in opposite directions. This is called dynamic equilibrium state. Dynamic means reaction is still continuing. At dynamic equilibrium state:

$$\text{Rate of forward reaction} = \text{Rate of reverse reaction}$$

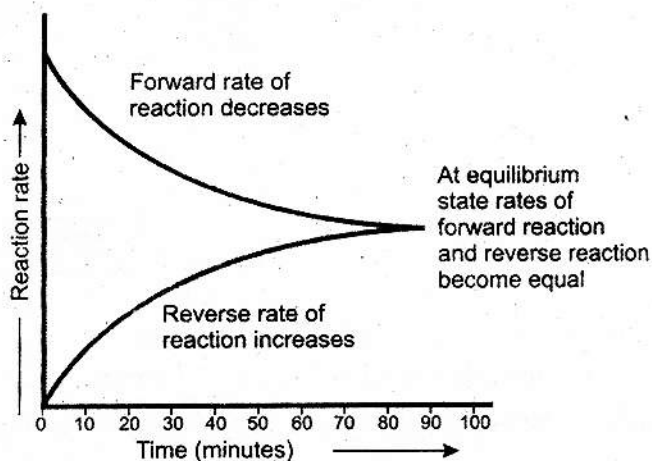
In a reversible reaction, dynamic equilibrium is established before the completion of reaction. It is represented graphically in figure.

At initial stage:

At initial stage the rate of forward reaction is very fast and reverse reaction is taking place at a negligible rate.

By passing time:

But gradually forward reaction slows down and reverse reaction speeds up. Eventually, both reactions attain the same rate, it is called a dynamic equilibrium state.



Q.2 Define chemical equilibrium state. Describe it with examples.

Ans. Chemical Equilibrium state:

When the rate of the forward reaction takes place at the rate of reverse reaction, then the composition of the reaction mixture remains constant, it is called a chemical equilibrium state.

At equilibrium state:

$$\text{Rate of forward reaction} = \text{Rate of reverse reaction}$$

Example 1:

Our existence based on the equilibrium phenomenon taking place in atmosphere. We inhale oxygen and exhale carbon dioxide, while plants consume carbon dioxide and release oxygen. This natural process is responsible for the existence of life on the Earth.

Many other environmental systems depend for their existence on delicate equilibrium phenomenon.

Other examples from nature:

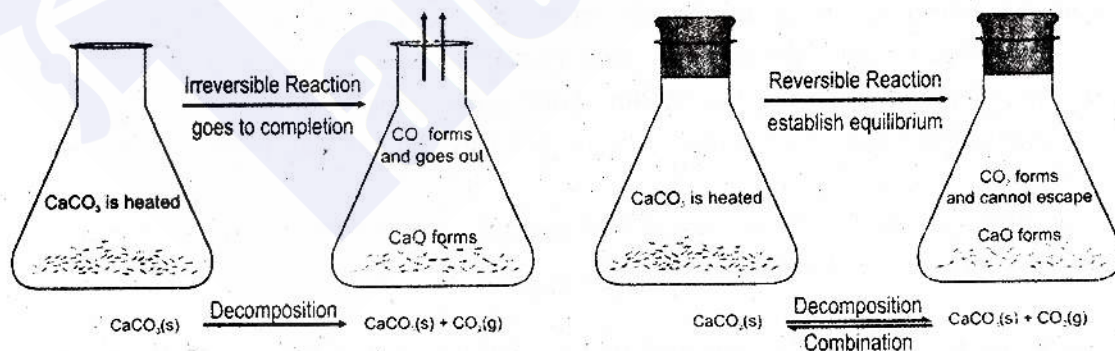
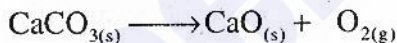
- The lives of aquatic plants and animals are indirectly related to concentration of dissolved oxygen in water.
- Concentration of gases in lake water is governed by the principles of equilibrium.

Example 2:

When calcium oxide and carbon dioxide react, they produce calcium carbonate.

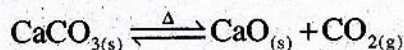


On the other hand, when CaCO_3 is heated in an open flask, it decomposes to form calcium oxide and carbon dioxide. CO_2 escapes out and reaction goes to completion.



In these two reactions, decomposition is reverse to combination or vice versa. When calcium carbonate is heated in a closed flask, so that CO_2 can't escape out as shown in figure. For some time only decomposition goes on (forward reaction) but after a while CO_2 starts combining with CaO to form CaCO_3 .

In the beginning, forward reaction is fast and reverse reaction is slow. But eventually the reverse reaction speeds up and both reactions go on at the same rate. At this stage decomposition and combination take place at the same rate but in opposite directions, as result amounts of CaCO_3 , CaO and CO_2 do not change. It is written as:



This is the chemical equilibrium state of this reaction.

Q.3 Write macroscopic characteristics of forward and reverse reactions.

Ans. Macroscopic characteristics of forward and reverse reactions:

Forward Reaction	Reverse Reaction
i) It is a reaction in which reactants react to form products.	It is reaction in which products react to produce reactants.
ii) It takes place from left to right	It takes place from right to left.
iii) At initial stage the rate of forward reaction is very fast.	In the beginning the rate of reverse reaction is negligible.
iv) It slows down gradually.	It speeds up gradually.

Q.4 Write down macroscopic characteristics of dynamic equilibrium.

Ans. Macroscopic characteristics of dynamic equilibrium:

A few important characteristic features of dynamic-equilibrium are given below:

- (i) An equilibrium is achievable only in a closed system (in which substances can neither leave nor enter)
- (ii) At equilibrium state a reaction does not stop. Forward and reverse reactions keep on taking place at the same rate but in opposite direction.
- (iii) At equilibrium state, the amount (concentration) of reactants and products do not change. Even physical properties like colour, density, etc. remain the same.
- (iv) An equilibrium state is attainable from either way, i.e. starting from reactants or from products.
- (v) An equilibrium state can be disturbed and again achieved under the given conditions of concentration, pressure and temperature.

Q.5 State the law of mass action and derive the expression for equilibrium constant for a general reaction

Ans. Law of mass action:

Guldberg and Waage in 1869 put forward this law. According to this law "The rate at which a substance reacts is directly proportional to its active mass and the rate of reaction is

directly proportional to the product of the active masses of the reacting substances". Generally an active mass is considered as the molar concentration in units of mol dm^{-3} , expressed as square brackets [].

Derivation of the expression for equilibrium constant for general reaction

Let us apply the law of Mass Action for a general reaction. According to this law, the rate of a chemical reaction is directly proportional to the product of the molar concentrations of its reactants raised to power equal to their number of moles in the balanced chemical equation of the reaction.

Let us first discuss the forward reaction. A and B are the reactants whereas 'a' and 'b' are their number of moles.

The rate of forward reaction according to law of Mass Action is

$$R_f \propto [A]^a [B]^b$$

$$R_f = K_f [A]^a [B]^b$$

Where K_f is the rate constant for the forward reaction. Similarly, the rate of the reverse reaction R_r , is directly proportional to the product of $[C]^c [D]^d$, where 'c' and 'd' are the number of moles as given in the balanced equation. Thus,

$$R_r \propto [C]^c [D]^d$$

$$R_r = k_r [C]^c [D]^d$$

Where K_r is the rate constant for the reverse reaction. We know that at equilibrium state the rate of both the reactions are equal to each other.

The rate of forward reaction = The rate of reverse reaction

$$R_f = R_r$$

And putting the values of R_f and R_r

$$k_f [A]^a [B]^b = k_r [C]^c [D]^d$$

By taking the constants on one side and the variable on other side of the equation, the above equation turns into;

$$\frac{k_f}{k_r} = \frac{[C]^c [D]^d}{[A]^a [B]^b}$$

or $K_c = \frac{[C]^c [D]^d}{[A]^a [B]^b}$

Where, $K_c \left(K_c = \frac{k_f}{k_r} \right)$ is called equilibrium constant. So

$$K_c = \frac{[C]^c [D]^d}{[A]^a [B]^b}$$

Q.6 Define equilibrium constant. Also describe its unit.

Ans. Equilibrium constant is a ratio of the product of concentration of products raised to the power of coefficient to the product of concentration of reactants raised to the power of coefficient as expressed in the balanced chemical equation.

Formula:

$$K_c = \frac{\text{Product of concentration of products raised to the power of coefficients}}{\text{Product of concentration of reactants raised to the power of coefficients}}$$

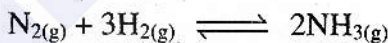
It is conventional to write the product side numerator and the substances on the reactant side as denominator. By knowing the balanced chemical equation for a reversible reaction we can write the equilibrium expression. Thus we can calculate the numerical value of K_c by putting actual equilibrium concentrations of the reactants and products into equilibrium expression. The value of K_c depends only on temperature, it does not depend on the initial concentrations of the reactants and products. A few problems have been solved to make the concept understandable.

K_c has no units in reactions with equal number of moles on both sides of the equation. This is because concentration units cancel out in the expression for K_c , e.g., for the reaction



$$K_c = \frac{[HI_{(g)}]^2}{[H_{2(g)}][I_{2(g)}]} \quad \text{Units} = \frac{(\cancel{\text{mol dm}^{-3}})^2}{(\cancel{\text{mol dm}^{-3}})(\cancel{\text{mol dm}^{-3}})} = \text{no units}$$

For reactions in which the number of moles of reactants and product are not equal in the balanced chemical equation, K_c of course, have units, e.g., for the reaction



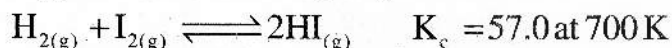
$$K_c = \frac{[NH_3]^2}{[N_{2(g)}][H_{2(g)}]^3} = \frac{(\text{mol dm}^{-3})^2}{(\text{mol dm}^{-3})(\text{mol dm}^{-3})^3} = \frac{1}{(\text{mol dm}^{-3})^2} = \text{mol}^{-2} \text{ dm}^6$$

Q.7 How can you predict the direction of a reaction by using the equilibrium constant?

Ans. Knowing the numerical value of equilibrium constant of a chemical reaction, direction as well as extent of the reaction can be predicted.

(i) Predicting Direction of Reaction

Direction of a reaction at a particular moment can be predicted by inserting the concentration of the reactants and products at that particular moment in the equilibrium expression. Consider the gaseous reaction of hydrogen with iodine.



We withdraw the samples from the reaction mixture and determine the concentrations of $\text{H}_{2(g)}$, $\text{I}_{2(g)}$ and $\text{HI}_{(g)}$. Suppose concentrations of the components of the mixture are:

$$[\text{H}_2]_t = 0.10 \text{ mol dm}^{-3}, [\text{I}_2]_t = 0.20 \text{ mol dm}^{-3} \text{ and } [\text{HI}]_t = 0.40 \text{ mol dm}^{-3}$$

The subscript 't' with the concentration symbols means that the concentrations are measured at some time t, not necessarily at equilibrium. When we put these concentrations into the equilibrium constant expression, we obtain a value called the reaction quotient Q_c . The reaction quotient for this reaction is calculated as:

$$Q_c = \frac{[\text{HI}]_t^2}{[\text{H}_2]_t [\text{I}_2]_t} = \frac{(0.40)^2}{(0.10)(0.20)} = 8.0$$

As the numerical value of Q_c (8.0) is less than K_c (57.0), the reaction is not at equilibrium. It requires more concentration of product. Therefore, reaction will move in the forward direction.

The reaction quotient Q_c is useful because it predicts the direction of the reaction by comparing the value of Q_c with K_c .

Thus, we can make the following generalization about the direction of the reaction.

If $Q_c < K_c$ the reaction goes from left to right, i.e., in forward direction to attain equilibrium.



If $Q_c > K_c$ of a reaction is more than K_c , the reaction goes from right to left, i.e., in reverse direction to attain equilibrium.



If $Q_c = K_c$, forward and reverse reactions take place at equal rates i.e., equilibrium has been attained



Q.8 How can you predict the extent of reaction by using equilibrium constant?

Ans. Predicting extent of a reaction

Numerical value of the equilibrium constant predicts the extent of a reaction. It indicates to which extent reactants are converted to products. In fact, it measures how far a reaction proceeds before establishing equilibrium state.

In general there are three possibilities of predicting extent of reactions as explained below.

(a) Large numerical value of K_c

The large value of K_c indicates that at equilibrium position the reaction mixture consists of almost all products and reactants are negligible. The reaction has almost gone to completion. For example, oxidation of carbon monoxide goes to completion at 1000 K.



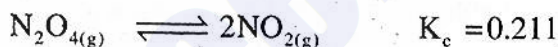
(b) Small numerical value of K_c

When the K_c value of reaction is small it may indicate the equilibrium has established with a very small conversion of reactants to products. At equilibrium position almost all reactants are present but amount of products is negligible. Such type of reaction never goes to completion, for example,



(c) Numerical value of K_c is neither small nor large

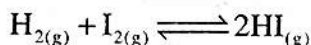
Such reactions have comparable amounts of reactants and products at equilibrium position. For example:



Solved Book Examples

Example 1:

When hydrogen reacts with iodine at 25°C to form hydrogen iodide by a reversible reaction as follows:



The equilibrium concentrations are:

$$[\text{H}_2] = 0.05 \text{ mol dm}^{-3}; [\text{I}_2] = 0.06 \text{ mol dm}^{-3} \text{ and } [\text{HI}] = 0.49 \text{ mol dm}^{-3}$$

Calculate the equilibrium constant for this reaction?

Solution:

Given equilibrium concentrations are;

$[H_2] = 0.05 \text{ mol dm}^{-3}$; $[I_2] = 0.06 \text{ mol dm}^{-3}$ and $[HI] = 0.49 \text{ mol dm}^{-3}$

Write the equilibrium constant expression as

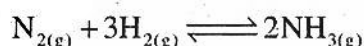
$$K_c = \frac{[HI]^2}{[H_2][I_2]}$$

Now put the equilibrium concentration values in the equilibrium expression

$$K_c = \frac{[0.49]^2}{[0.05][0.06]} = \frac{0.2401}{0.0030} = 80$$

Examples 2:

For the formation of ammonia by Haber's process hydrogen and nitrogen react reversibly at 500°C as follows



The equilibrium concentrations of these gases are: nitrogen $0.602 \text{ mol dm}^{-3}$; hydrogen $0.420 \text{ mol dm}^{-3}$ and ammonia $0.113 \text{ mol dm}^{-3}$. What is value of K_c .

Solution:

The equilibrium concentrations are

$[N_2] = 0.602 \text{ mol dm}^{-3}$, $[H_2] = 0.420 \text{ mol dm}^{-3}$ and $[NH_3] = 0.113 \text{ mol dm}^{-3}$

The equilibrium constant expression for this reaction is:

$$K_c = \frac{[NH_3]^2}{[N_2][H_2]^3}$$

Now put the equilibrium concentration values into the equilibrium expression

$$K_c = \frac{[0.113]^2}{[0.602][0.420]^3} = 0.286 \text{ mol}^{-2} \text{ dm}^6$$

Example 3:

For a reaction between PCl_3 and Cl_2 to form PCl_5 , the equilibrium constant is $0.13 \text{ mol}^{-1} \text{ dm}^3$ at a particular temperature. When the equilibrium concentrations of PCl_3 and Cl_2 are 10.0 and 9.0 mol dm^{-3} respectively, what is the equilibrium concentration of PCl_5 .

Solution:

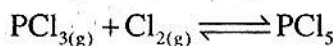
$[PCl_3] = 10 \text{ mol dm}^{-3}$

$[Cl_2] = 9.0 \text{ mol dm}^{-3}$

$K_c = 0.13 \text{ mol}^{-1} \text{ dm}^3$

$[PCl_5] = ?$

Now write the balanced chemical equation and equilibrium constant expression



$$K_c = \frac{[PCl_5]}{[PCl_3][Cl_2]}$$

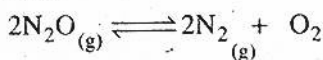
Now put the known values in above equation and rearrange

$$0.13 = \frac{[\text{PCl}_5]}{(10.0)(9.0)}$$

$$[\text{PCl}_5] = 0.13 \times 10.0 \times 9.0 = 11.7 \text{ mol dm}^{-3}$$

Numericals

1. For the decomposition of di-nitrogen oxide (N_2O) into nitrogen and oxygen reversible reaction take place as follows:



The concentration of N_2O , N_2 and O_2 are 1.1 mol dm^{-3} , 3.90 mol dm^{-3} and 1.95 mol dm^{-3} , respectively, at equilibrium. Find out K_c for this reaction.

Ans.

Data:

The concentration of

$$\begin{array}{rcl} \text{N}_2\text{O} & = & 1.1 \text{ mol dm}^{-3} \\ \text{N}_2 & = & 3.90 \text{ mol dm}^{-3} \\ \text{O}_2 & = & 1.95 \text{ mol dm}^{-3} \\ K_c & = & ? \end{array}$$

Solution

The equilibrium constant expression for this reaction is

$$K_c = \frac{[\text{N}_2]^2 [\text{O}_2]}{[\text{N}_2\text{O}]^2}$$

$$K_c = \frac{[3.90]^2 [1.95]}{[1.1]^2}$$

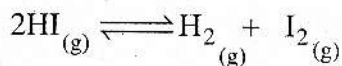
$$K_c = \frac{[15.21] [1.95]}{[1.21]^2}$$

$$K_c = 24.51 \text{ mol dm}^{-3} \text{ Ans.}$$

2. Hydrogen iodide decomposes to form hydrogen and iodine. If the equilibrium concentration of HI is $0.078 \text{ mol dm}^{-3}$, H_2 and I_2 is same $0.011 \text{ mol dm}^{-3}$. Calculate the equilibrium constant value for this reversible reactions.

Ans.

Data:



The equilibrium concentration of

HI	=	0.078 mol dm ⁻³
H ₂	=	0.011 mol dm ⁻³
I ₂	=	0.011 mol dm ⁻³
K _c	=	?

Solution

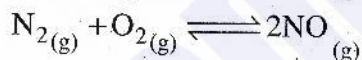
The equilibrium constant expression for this reaction is

$$K_c = \frac{[\text{H}_2][\text{I}_2]}{[\text{HI}]^2}$$

$$K_c = \frac{[0.011][0.011]}{[0.078]^2}$$

$$K_c = 0.019 \quad \text{Ans.}$$

3. For the fixation of nitrogen following reaction takes place



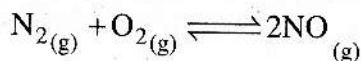
When the reaction takes place at 1500 K, the K_c for this is 1.1 × 10⁻⁵. If equilibrium concentration of nitrogen and oxygen are 1.7 × 10⁻³ mol dm⁻³ and 6.4 × 10⁻³ mol dm⁻³, respectively, how much NO is formed?

Ans.

Data:

Temperature = 1500 K

K _c	=	1.1 × 10 ⁻⁵
N ₂	=	1.7 × 10 ⁻³ mol dm ⁻³
O ₂	=	6.4 × 10 ⁻³ mol dm ⁻³
NO	=	?



Solution:

The equilibrium constant expression for this reaction is

$$K_c = \frac{[\text{NO}]^2}{[\text{N}_2][\text{O}_2]}$$

$$1.1 \times 10^{-5} = \frac{[NO]^2}{[1.7 \times 10^{-3}][6.4 \times 10^{-3}]}$$

$$[NO]^2 = 1.1 \times 10^{-5} \times 1.7 \times 10^{-3} \times 6.4 \times 10^{-3}$$

$$[NO]^2 = 11.96 \times 10^{-11}$$

$$[NO]^2 = 1.196 \times 10^{-10}$$

Taking square root on both sides

$$\sqrt{[NO]^2} = \sqrt{1.196 \times 10^{-10}}$$

$$NO = 0.09 \times 10^{-5} \text{ mol dm}^{-3}$$

4. When nitrogen reacts with hydrogen to form ammonia, the equilibrium mixture contains 0.31 mol dm^{-3} and 0.50 mol dm^{-3} of nitrogen and hydrogen respectively, if the K_c is $0.50 \text{ mol}^{-2} \text{ dm}^6$, what is the equilibrium concentration of ammonia?

Ans.

Data:

$$[N_2] = 0.3 \text{ mol dm}^{-3}$$

$$[H_2] = 0.50 \text{ mol dm}^{-3}$$

$$K_c = 0.50 \text{ mol}^{-2} \text{ dm}^6$$

$$[NH_3] = ?$$

Solution:



The equilibrium constant expression for this reaction is

$$K_c = \frac{[NH_3]^2}{[N_2][H_2]^3}$$

$$K_c = \frac{[NH_3]^2}{[0.3][0.50]^3}$$

$$[NH_3]^2 = 0.50 \times [0.3][0.50]^3$$

taking sq.root on both sides

$$\sqrt{[NH_3]^2} = \sqrt{0.01875}$$

$$[NH_3] = 0.136 \text{ mol dm}^{-3}$$

Short Answer Questions

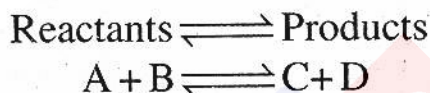
Q.1 Why at equilibrium state reaction does not stop?

Ans. At equilibrium state the reaction does not stop because the rate of forward reaction is exactly equal to the reverse reaction but in opposite direction.

Q.2 Why equilibrium state is attainable from either way?

Ans. Equilibrium state is attainable from either way because a reversible reaction proceeds in both way.

Equilibrium state is attained when a reaction moves forward as well as reaction moves backward.



Q.3 What are the characteristics of a reaction that establishes equilibrium state at once?

Ans. The reactions which attain the equilibrium are called reversible reactions.

(i) In these reactions dynamic state of equilibrium is established in which

Rate of forward reaction = Rate of reverse reaction

(ii) These reaction does not go to stop.

(iii) These can be proceed in both directions.

(iv) For these reactions value of K_c is neither too large nor too small.

Q.4 Which natural process is responsible for existence of life on earth?

Ans. We inhale oxygen and exhale carbon dioxide while plants consume carbon dioxide and release oxygen. This natural process is responsible for existence of life on earth.

Q.5 Differentiate between reactants and products.

Ans.

Reactants	Products
In a chemical reaction the substances that combine are called reactants	In a chemical reaction, reactants combine to form new substances which are called products

Q.6 Differentiate between irreversible reaction and reversible reaction.

Ans.

Irreversible reaction	Reversible reaction
i. The reactions in which products do not recombine to form reactants	i. The reaction in which products react to produce reactants are called reversible reactions
ii. They are supposed to complete	ii. These reactions never go to completion
iii. These are represented by a single arrow (\rightarrow) between reactants and products	iii. They are represented by a double arrow (\rightleftharpoons) between reactants and products

Q.7 What is static equilibrium state?

Ans. When reaction ceases to proceed. It is called static equilibrium.

Example:

A building remains standing rather than falling down because all the forces acting on it are balanced.

Q.8 What is dynamic equilibrium state?

Ans. When reaction does not stop only the rate of forward and reverse reaction become equal to each other but take place in opposite directions. This is called dynamic equilibrium state.

Q.9 What is equilibrium constant?

Ans. Equilibrium constant is a ratio of the product of concentration of products raised to the power of coefficient to the product of concentration of reactants raised to the power of coefficient as expressed in the balance chemical equation.

$$K_c = \frac{\text{Product of conc. of products raised to the power of coefficient}}{\text{Product of conc. of reactants raised to power of coefficients}}$$

Q.10 Why the reaction mixture does not have 50% reactants and 50% products at equilibrium position?

Ans. At equilibrium state the conc. of reactants and products are constants so it is not necessary that the reactants and products are in 50% ratio.

Q.11 If a reaction has large value of K_c , will it go to completion and why?

Ans. The large value of K_c indicates that at equilibrium position the reaction mixture consists of almost all products and reactants are negligible the reaction has almost gone to completion.

Q.12 What do you mean by the extent of reaction?

Ans. Extent of reaction means the degree of completion of a chemical reaction. It also tells stability of reactants and products.

Q.13 Why the reversible reaction does not go to completion?

Ans. The reversible reaction does not go to completion because, it proceeds in both directions. After the equilibrium attained the product start to convert back into the reactants at this state the composition of reaction mixture remains constant.

Q.14 What are irreversible reactions? Give few characteristics of them?

Ans. The reactions in which products do not recombine to form reactants are called irreversible reactions.

- i. In the reversible reaction static equilibrium is attained or established.
- ii. These are represented by a single arrow (\rightarrow) between reactants and products.
- iii. Irreversible reactions go to completion and 100 % conversion of reactants to products take place.

Q.15 Define chemical equilibrium state.

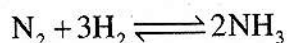
Ans. When the rate of the forward reaction takes place at the rate of reverse reaction, the composition of the reaction mixture remains constant, it is called a chemical equilibrium state.

Q.16 What is relationship between active mass and rate of reaction?

Ans. According to Guldberg and Waage's law the rate of reaction is directly proportional to the product of the active masses of the reacting substances.

Q.17 Derive equilibrium constant expression for the synthesis of ammonia from nitrogen and hydrogen.

Ans. For the reaction of nitrogen with hydrogen to form ammonia, the balanced chemical equation is



For the reaction

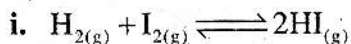
The rate of forward reaction $R_f = k_f [\text{N}_2] [\text{H}_2]^3$

The rate of reverse reaction $R_r = k_r [\text{NH}_3]^2$

The expression for the equilibrium constant for this reaction is:

$$K_c = \frac{[\text{NH}_3]^2}{[\text{N}_2][\text{H}_2]^3}$$

Q.18 Write the equilibrium constant expression for the following reactions:



Ans. The equilibrium constant expression for these reactions

i. $K_c = \frac{[\text{HI}]^2}{[\text{H}_2][\text{I}_2]}$

ii. $K_c = \frac{[\text{CH}_4][\text{H}_2\text{O}]}{[\text{CO}][\text{H}_2]^3}$

Q.19 How direction of reaction can be predicted?

Ans. Direction of a reaction at a particular moment can be predicted by measuring reaction quotient Q_c . The reaction quotient Q_c is useful because it predicts the direction of the reaction by comparing the value of Q_c with K_c . If Q_c is less than K_c the reaction is forward.

Q.20 How can you know that a reaction has achieved an equilibrium state?

Ans. If $Q_c = K_c$, forward and reverse reactions takes place at equal rates i.e equilibrium has been established.

Q.21 If reaction quotient Q_c of a reaction is more than K_c . What will be the direction of the reaction?

Ans. If Q_c of a reaction is more than K_c the reaction goes from right to left, i.e. in reverse direction to attain equilibrium.



Q.22 What are the uses of atmospheric gases in the manufacture of chemicals?

Ans. The two major components of atmospheric are nitrogen and oxygen gases. Both of these gases constitute 99% of the atmosphere.

These gases are being used to manufacture chemicals since the advent of 20th century.

Nitrogen is used to prepare ammonia, which is further used to manufacture nitrogenous fertilizers.

Oxygen is used to prepare sulphur dioxide which is further used to manufacture king of chemicals sulphuric acid.

Q.23 Define the law of Mass Action.

Ans. The rate at which a substance reacts is directly proportional to its active mass and the rate of a reaction is directly proportional to the product of the active masses of the reacting substances.

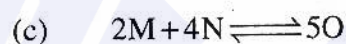
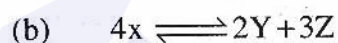
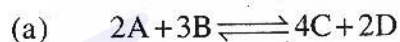
Q.24 How the active mass is represented?

Ans. An active mass is considered as the molar mass concentration in unit of mol dm^{-3} , expressed as square brackets []

Q.25 How dynamic equilibrium is established?

Ans. In a reversible reaction, dynamic equilibrium is established before the completion of reaction. At initial stage the rate of forward reaction is very fast and reverse reaction is taking place at a negligible rate. But gradually forward reaction slows down and reverse reaction speeds up. Eventually, both reactions attain the same rate and dynamic equilibrium state is established.

Q.27 Point out the coefficient of each in the following hypothetical reactions.



Ans. (a) Coefficients of this reactions are (a) 2, 3, 4, 2

(b) 4, 2, 3

(c) 2, 4, 5

Q.27 An industry was established based upon a reversible reaction. It failed to achieve products on commercial level. Can you point out the basic reasons of its failure being a chemist?

Ans. In a reversible reaction, the amounts of reactants and products remain same when the equilibrium state is achieved. If industry is based on reversible reaction, it cannot achieve desired commercial product and its required amount because expected yield is not achieved and industry fails.

Q.28 Write the importance of equilibrium constant.

Ans. (i) It is used to predict the direction of reaction.

- (ii) It is used to predict the extent of reaction, means how much reactants are converted into products.

Q.29 Which physical factor effects the value of K_c ?

Ans. Temperature highly effect the numeric value of K_c . Temperature change will effect both equilibrium position and equilibrium constant.

Q.30 Write the names of two chemicals in which nitrogen is used?

Ans. (i) Urea (ii) Nitric Acid

Q.31 What is the proportion of oxygen and nitrogen in our atmosphere?

Ans. In our atmosphere, the total proportion of O_2 and N_2 is 99%.

Nitrogen = 78% Oxygen = 21%

Multiple Choice Questions

1. The reaction in which the products do not recombine to form reactants are called;

- (a) Irreversible reactions
- (b) Reversible reactions
- (c) Decomposition (d) Addition

2. The reaction in which the products can recombine to form reactants are called;

- (a) Irreversible reactions
- (b) Reversible reactions
- (c) Decomposition (d) Addition

3. The colour of iodine is;

- (a) purple (b) Black
- (c) red (d) Pink

4. The colour of hydrogen iodide is;

- (a) colourless (b) black
- (c) red (d) pink

5. When the rate of the forward reaction takes place at the rate of reverse reaction the composition of the

reaction mixture remains constant it is called;

- (a) Chemical equilibrium
- (b) Dynamic equilibrium
- (c) Static equilibrium
- (d) all

6. When the reaction ceases to proceed, it is called;

- (a) Chemical equilibrium state
- (b) static equilibrium
- (c) Dynamic equilibrium
- (d) all

7. Guldberg and waage put forward law of mass action in;

- (a) 1860 (b) 1869
- (c) 1870 (d) 1879

8. The % age of nitrogen and oxygen in our atmosphere is;

- (a) 80 (b) 90
- (c) 95 (d) 99

9. Which gas is used to prepare ammonia?

- (a) N_2 (b) O_2
(c) Cl_2 (d) S

10. Which gas is used to manufacture king of chemicals sulphuric acid?

- (a) N_2 (b) O_2
(c) Cl_2 (d) S

11. Equilibrium constant has no unit when number of moles of reactants and products are;

- (a) same (b) different
(c) both a & b (d) none

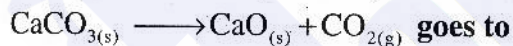
12. For reactions having large K_c value, the reaction proceeds to;

- (a) completion
(b) equilibrium state
(c) back ward (d) None

13. The characteristics of reversible reactions are the following except;

- (a) products never recombine to form reactants
(b) they never complete
(c) they proceed in both ways
(d) they have a double arrow between reactants and products

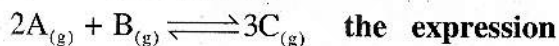
14. In the lime kiln, the reaction



goes to completion because;

- (a) of high temperature
(b) CaO is more stable than $CaCO_3$
(c) CO_2 escapes continuously
(d) CaO is not dissociated

15. For the reaction,



the expression for the equilibrium constant is:

- (a) $\frac{[2A][B]}{[3C]}$ (b) $\frac{[A]^2[B]}{[C]^3}$

- (c) $\frac{[3C]}{[2A][B]}$ (d) $\frac{[C]^3}{[A]^2[B]}$

16. When a system is at equilibrium states?

- (a) the concentration of reactants and products becomes equal
(b) the opposing reactions (forward and reverse) stop
(c) the rate of the reverse reaction becomes very low
(d) the rates of the forward and reverse reactions becomes equal.

17. Which one of the following statements is not correct about active mass?

- (a) rate of reaction is directly proportional to active mass.
(b) active mass is taken in molar concentration
(c) active mass is represented by square brackets
(d) active mass means total mass of substances

18. When the magnitude of K_c is very large it indicates;

- (a) reaction mixture consists of almost all products
(b) reaction mixture has almost all reactants
(c) reaction has not gone to completion
(d) reaction mixture has negligible products

19. When the magnitude of K_c is very small it indicates;

- (a) equilibrium will never establish

(b) all reactants will be converted to products

(c) reaction will go to completion

(d) the amount of products is negligible

20. Reactions which have comparable amounts of reactants and products at equilibrium state have;

(a) very small K_c value

(b) very large K_c value

(c) moderate K_c value

(d) none of these

21. At dynamic equilibrium;

(a) the reaction stops to proceed

(b) the amounts of reactants and products are equal

(c) the speed of the forward is reverse reactions are equal

(d) the reaction can no longer be reversed

22. In an irreversible reaction dynamic equilibrium;

(a) never establishes

(b) establishes before the completion of reaction

(c) establishes after the completion of reaction

(d) establishes readily

23. A reverse reaction is one that;

(a) which proceeds from left to right

(b) In which reactants react to form products

(c) which slows down gradually

(d) which speeds up gradually

24. Nitrogen and hydrogen were reacted together to make ammonia



What will be present in the equilibrium mixture?

(a) NH_3 only

(b) N_2 , H_2 and NH_3

(c) N_2 and H_2 only

(d) H_2 only

25. For a reaction between PCl_3 and Cl_2 to form PCl_5 , the units of K_c are;

(a) mol dm^{-3} (b) $\text{mol}^{-1} \text{ dm}^{-3}$

(c) $\text{mol}^{-1} \text{ dm}^3$ (d) mol dm^3

26. The two major components of Atmosphere are

(a) carbon and nitrogen

(b) Nitrogen and oxygen

(c) oxygen and chlorine

(d) None of these

27. Which type of reactions do not go to completion?

(a) Irreversible reaction

(b) Reversible reactions

(c) Addition reactions

(d) Decomposition reactions

28. Which type of reactions speed up gradually?

(a) Irreversible reactions

(b) Reversible reactions

(c) Forward reactions

(d) Decomposition reactions

29. Which type of reactions take place in both directions?

(a) addition reactions

(b) reversible reactions

(c) irreversible reactions

(d) decomposition reactions

30. In a chemical reaction, the

substance that combine are called;

(a) reactant

(b) products

(c) mass

(d) material

31. When a reaction ceases to proceed further, it is called;

(a) chemical states

(b) static state

(c) physical state

(d) dynamic equilibrium state

32. Dynamic means, reaction is:

(a) in forward direction

(b) stop

(c) in reverse direction

(d) still continuing

33. The forward reaction takes place:

(a) right to left

(b) left to right

(c) only to right

(d) only to left

34. The units of molar concentration:

(a) mol.dm^{-2}

(b) mol. dm^{-1}

(c) mol. dm

(d) mol.dm^{-3}

35. Equilibrium constant value " K_c " is equal to;

(a) K_f/K_r

(b) K_r/K_f

(c) K_c/Q_c

(d) Q_c/K_r

36. Which chemical is called king of chemicals?

(a) KNO_3

(b) H_2SO_4

(c) HCl

(d) NHO_3

Answer Keys

1.	a	2.	b	3.	a	4.	a	5.	b
6.	b	7.	b	8.	d	9.	a	10.	b
11.	a	12.	a	13.	a	14.	c	15.	d
16.	d	17.	d	18.	a	19.	d	20.	c
21.	c	22.	a	23.	d	24.	b	25.	a
26.	b	27.	b	28.	b	29.	b	30.	a
31.	b	32.	d	33.	b	34.	d	35.	a
36.	b								