

ETEA

SOLVED PAPERS 2005-2019
Topicwise & Chapterwise
LATEST EDITION

2020

BOM
BANK OF MCQS

Since 2016

Main Features

- 4000+ solved MCQs
- Summarize tables
- Biology numerical values
- Text book references
- Physics formulas
- Explanation with MCQs
- ETEA tips & Tricks
- With hints solution & extra points
- Arrange topicwise
- Arrange chapterwise
- Arrange subject wise
- For Quick revision
- For practice
- Fresh MCQs
- According to new books.
- 300 physics formulas
- 2005-2019 ETEA MCQs



A SOLUTION TO
ETEA
PAST PAPERS
2010-2019
TOPICWISE & CHAPTERWISE

ALL RIGHTS RESERVED

No part of this publication may be reproduced, stored in retrieval system, or transmitted by any means, electronic, mechanical, photocopies, recording or otherwise without the prior permission of the BOM admisitorator team.

BANK OF MCQS

PHYSICS

Chapter-1:	MEASUREMENT	10
Chapter#2:	VECTORS & EQUILIBRIUM.....	14
Chapter-3:	MOTION & FORCES.....	19
Chapter-4:	WORK & ENERGY	29
Chapter-5:	ROTATIONAL & CIRCULAR MOTION	32
Chapter-6	FLUID DYNAMICS	38
Chapter-7:-	OSCILLATIONS.....	40
Chapter-8:-	WAVES	44
Chapter-9:	PHYSICAL OPTICS.....	51
Chapter-10:	THERMODYNAMICS.....	54
Chapter-11:	Electrostatics	59
Chapter-12:	CURRENT ELECTRICITY	65
Chapter-14:	ELECTROMAGNETIC INDUCTION.....	74
Chapter-15:	ALTERNATING CURRENT	78
Chapter-16:	PHYSICS OF SOLIDS	81
Chapter-17:	ELECTRONICS	84
Chapter-18:	DAWN OF MODERN PHYSICS.....	86
Chapter-19:	ATOMIC SPECTRA.....	91
Chapter-20:	NUCLEAR PHYSICS.....	95
1 ST YEAR CHEMISTRY		102
Chapter-1:	STOICHIOMETRY	107
Chapter-2:	ATOMIC STRUCTURE.....	112
Chapter-3:	THEORIES OF COVALENT & SHAPES OF MOLECULES	116
Chapter-4:-	GASES.....	119
Chapter-7	CHEMICAL EQUILIBRIUM.....	126
Chapter: 8	acids, basis and salts	130
Chapter-9:	CHEMICAL KINETICS	132
Chapter-10:	SolutionS & COLLOIDS	135
Chapter-11:	THERMOCHEMISTRY	139
Chapter-12:	ELECTROCHEMISTRY	141
Chapter-13	S & P block elements	145
Chapter-14:	D & f BLOCK ELEMENTS	153
CHAPTER-15:	ORGANIC COMPOUNDS	159
Chapter-16:	HYDROCARBONS.....	161
Chapter-17:	ALKYL HALIDES	169
Chapter-18:	ALCOHOLS, PHENOLS & ETHERS	172
Chapter-19:	176
CARBONYL COMPOUNDS 1: ALDEHYDES & KETONES		176

Chapter-20: CARBONYL COMPOUNDS 2: CARBOXYLIC ACIDS & FUNCTIONAL DERIVATIVES	178
Chapter-21: BIOCHEMISTRY	181
chapter-22: INDUSTRIAL CHEMISTRY	182
Chapter-23: ENVIRONMENTAL CHEMISTRY	184
CHAPTER-24: ANALYTICAL CHEMISTRY	186
ETEA MEDICAL 2019 biology portion	189
Chapter-1: CELL STRUCTURES & FUNCTIONS	193
Chapter-2: Biological Molecules.....	195
Chapter-3: Enzymes	196
Chapter-04: Bioenergetics	197
Chapter-5: A Cellular Life	199
Chapter-6: Prokaryotes.....	200
Chapter-7: Protista & Fungi	201
Chapter-8: Diversity among Plants	203
Chapter-9: Diversity Among Animals.....	205
Chapter-10: Forms & Functions in Plants	208
Chapter-11: Digestion	210
Chapter-12: Circulation.....	211
Chapter-14: Respiration	213
Chapter-15: Homeostasis.....	214
Chapter-16: Support & Movement.....	215
Chapter 17 Nervous coordination.....	216
Chapter-20: Reproduction	219
Chapter-21: Development & Aging	220
Chapter-22: Inheritance.....	221
Chapter-23: Chromosome & DNA.....	223
Chapter-24: Evolution.....	226
Chapter-25: Man and his Environment	226
Chapter-27: Biology and Human Welfare.....	229
Maths.....	230
Chap No 1 Complex Numbers.....	233
Chap No 2 Matrices & Determinants	239
Chap No 3 Vectors	241
Chap No 4 Sequences	244
Chap No 5 Miscellaneous Series	246
Chap No 6 Permutation, Combination & Probability	247
Chap No 7 Mathematical Induction & Binomial Theorem.....	249
Chap No 8 Functions & Graphs.....	251
Chapter No 9	252
Linear Programming	252

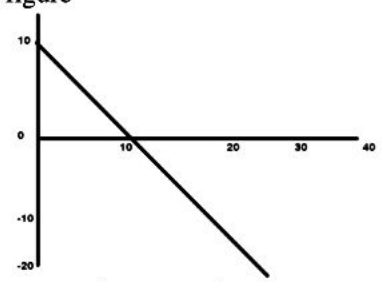
Chap No 10	Trigonometric Identities of Sum and Difference of angles	252
Chap No 11	Application of Trigonometry.....	255
Chap No 12	Graphs of Trigonometric and Inverse Trigonometric Functions and Solutions of Trigonometric Equations	256
Chap No 1	Functions & Limits.....	258
Chap No 2	Differentiation	261
Chap No 3	Higher Order Derivatives and Applications	264
Chap No 5	Integration	265
Chap No 6	Plane Analytic Geometry-Straight Line	268
Chapter No 7	Conics-I.....	272
Chapter No 9	277
Differential Equations	277
Chapter No 10	278
Partial Differentiation	278
English;	280
Vocabulary:	281

Physics

ETEA Medical+Engineering 2019

1. Newton-second is the unit of; Med a) work b) angular momentum c) power d) linear momentum ans; d reason; $p = mv$ $p = m at = Ft = N s$	2019- D	d) No force acts	
2. The dimension of electric dipole is 2019-Med a) [M ³ L ² T ⁰ A ¹] b) [M ⁰ L ¹ T ¹ A ¹] c) [M ⁰ L ¹ T ¹ A ⁰] d) [M ² L ¹ T ³ A ²] ans; b reason ; $p = qd = Itd$ $= A s m = [M^0 L^1 T^1 A^1]$	B	8. The motional EMF depends upon a) Strength of magnetic field b) Speed of the conductor c) Length of conductor d) All of the above	D
3. If the velocity of the body become half, then kinetic energy of the body becomes; 2019-Med a) one forth b) double c) four times d) half ans; a reason; $K.E = 1/2 mv^2$ $K.E' = 1/2 m (v/2)^2$ $K.E' = 1/2 m v^2 /4$ $K.E' = 1/4 [1/2 mv^2]$ $K.E' = 1/4 K.E$	A	9. Which one of the following physical quantity does not have dimension of force per unit area? a) Stress b) strain c) young modulus d) pressure	B
4. The angular acceleration of second hand minute of watch is; 2019-Med a) π rad/sec ² b) 2π rad/sec ² c) $\pi/2$ rad/sec ² d) non of the above	D	10. In case of germanium, the value of potential barrier develops across the depletion region is a) 0V b) 0.3V c) 0.7V d) 0.9V	B
5. The viscous drag on a small spherical body (moving with slow speed v) is proportional to a) v b) \sqrt{v} c) $1/\sqrt{v}$ d) v^2	A	11. Electron microscope makes practical use of the a) Particle nature of electron b) Wave nature of electron c) Dual nature of electron d) None of the above	B
6. the transverse nature of light is shown by a) interference of light b) refraction of light c) polarization of light d) dispersion of light	C	12. Projectile is thrown in such a way that its maximum height equals to its range, the angle of projection is a) $\tan^{-1} 45$ b) $\tan^{-1} 60$ c) $\tan^{-1} 30$ d) None	D
7. An electron is moving along the axis of a solenoid carrying a current. Which of the following is a correct statement about the magnetic force acting on the electron? a) The force acts radially inwards b) The force acts radially downwards c) The force acts in the direction of motion	C	13. Which of the following pollutant decolorize the skin? 2019-Med a) mercury b) arsenic c) lead d) cadmium	B
		14. Car "X" is travelling at half speed of car "Y" and mass of car "X" is twice as compared to mass of car "Y" Which of the following statement is correct 2019-Med a) Car "X" has half the kinetic energy of car "Y" b) Car "X" has one quarter the K.E of car "Y" c) Car "X" has twice K.E of car "Y" d) The two cars have the same KE	A
		15. If the wavelength of a transverse is 2cm and the period is 2 sec then the wave speed in CGS is 2019-Med a) 0.1cms-1 b) 0.2cms-1 c) 11 cms-1 d) 1 cms-1	D
		16. A car battery has EMF of 12 volts and internal resistance 5×10 ohm. If it draws 60 ampere current, then terminal voltage of the battery will be 2019-Med a) 5 volts b) 3 volts c) 15 volts d) 9 volts	D
		17. The cyclotron frequency of an electron projected with velocity V perpendicular to	C

<p>a magnetic field B is given 2019-Med</p> <p>a) $f = mB/\pi C$ b) $f = 2\pi eB/m$ c) $f = eB/2\pi m$ d) $f = 2\pi c/mB$</p>	<p>energy stored is equal to</p> <p>a) CV b) $\frac{1}{2} nCV^2$ c) CV^2 d) $CV^2/2n$</p>
<p>18. if $A \cdot B = \frac{1}{2}$, the angle between A and B is 2019-Med C</p> <p>a) Zero b) 300 c) 600 d) 900</p>	<p>28. The electric field strength between a pair of plates is "E". if the separation of the plates is doubled and potential difference between the plates is increased by factor of four, the new field strength is B</p> <p>a) E b) 2E c) 4E d) 8E</p>
<p>19. A train is 200 m long and is moving with uniform velocity of 36 km/hr, the time it will take to cross a bridge of 1km is 2019-Med B</p> <p>a) 100 sec b) 120 sec c) 60 sec d) 50 sec</p>	<p>29. Two satellites of masses $3M$ and "M" orbit the earth in a circular orbit of radius Y and "$3r$" respectively, the ratio of their speed is B</p> <p>a) 1:1 b) $\sqrt{3} : 1$ c) 3:1 d) 9:1</p>
<p>20. Choose the wrong statement. The escape velocity of a body from planet depend upon 2019-Med A</p> <p>a) The mass of a body b) the mass of the planet c) the average radius of the planet d) the density of the planet</p>	<p>Two wires A and B are made of same material. The wire A has length L and diameter R. while the wire B has length 2L. and diameter R/2. If the two wires are stretched by the same force, the elongation in A divided by elongation in B is; A</p>
<p>21. In order to increase the stopping potential, there should be increase in 2019-Med C</p> <p>a) Intensity of radiation b) Wavelength c) Frequency of radiation d) Both wavelength and intensity</p>	<p>a) 1/8 b) $\frac{1}{2}$ c) 4 d) 8</p>
<p>22. Two meter high tank is full of water. A hole is made in the middle of the tank. The speed of efflux is C</p> <p>a) 4.9m/s b) 9.8m/s c) 4.42 m/s d) 3.75 m/s</p>	<p>30. A wire can sustain the weight of 20kg before breaking If the wire is cut into two equal parts each part can sustain a weight of B</p> <p>a) 10kg b) 20kg c) 40kg d) 80kg</p>
<p>23. A hail and a rain drop of same radius are released from same height, the rain drop will reach B</p> <p>a) Before hail b) after hail c) at the same time d) none of the above</p>	<p>31. Which of the following is not EM wave D</p> <p>a) Radio waves b) X-rays c) light waves d) sound waves</p>
<p>24. Two springs A and B ($K_g = 2 \text{ Kg}$) are stretched by applying forces of equal magnitudes at the four ends. If the energy stored in A is E, that is B is B</p> <p>a) E/2 b) 2E c) E d) E/4</p>	<p>32. A shell of mass m moving with velocity v suddenly breaks into two pieces. The part having mass m/4 remains stationary. The velocity of the other shell will be D</p> <p>a) v b) 2v c) $3v/4$ d) $4v/3$</p>
<p>25. The general form of path difference in Young's double slit experiment is its corresponding phase shift (in radians) is B</p> <p>a) $m\pi$ b) $2m\pi$ c) $m\pi/2$ d) None of the above</p>	<p>33. Two blocks "A" and "B" having masses 3kg and 4kg are raised to the same height from earth surface. The ratio of gravitational potential of "A" to that of "B" is C</p> <p>a) 3:4 b) 4:3 c) 1:1 d) None of the above</p>
<p>26. An a particle is accelerated through a potential difference of 10 volts. Its K.E is B</p> <p>a) 1 MeV b) 2 MeV c) 4MeV d) 8 MeV</p>	<p>34. Heat and work are equivalent. This means 2019-Med C</p> <p>a) When we supply heat to a body we do work on b) When we do work on a body we supply heat to it. c) The temperature of a body can be increased by doing work on it d) Heat and work are neither inter convertible</p>
<p>27. If there are n capacitors each of capacity "C" connected in parallel to "V" volt source then B</p>	

35. The velocity time plot for a particular moving on a straight line is shown in the figure	C	30m/sec. the speed of sound is 330m/s. The frequency heard by the observer is a) 550 Hz b) 458.3Hz c) 530Hz d) 545 Hz
		
2019-Med a) The particle has a constant acceleration b) The particle has never turned around c) The particle has zero displacement d) The data is insufficient		42. If the area of hysteresis loop of a material is large the hysteresis loss in this material will be a) Zero b) small c) large d) none of the above
36. Mark out the correct options 2019-Med	B	43. In Young's slit experiment, the separation between the slits is halved and distance between the slits and screen is doubled the fringe width is a) Unchanged b) halved c) double d) quadrupled
a) The energy of any small part of a string remains constant in a travelling wave. b) The energy of any small part of a string remains constant in standing wave. c) The energies of all small parts of equal length are equal in a travelling wave. d) The energies of all the small parts of equal length are equal in a standing wave.		44. An object at the surface of the earth weighs 90N its weight at a distance 3R from the center of earth is a) 8N b) 9N c) 12N d) 10N
37. A system can be taken from the initial state P. V to the final state P1 V1 to the final state P2V2 by two different methods. Let ΔQ and ΔW represent the heat given to the system and the work done by the system. Which of the following must be same in both the methods? 2019-Med	C	45. Capacitance of parallel plate capacitors independent of a) Area of plates of capacitor b) Medium between plates of capacitor c) Potential difference between plates d) Distance between plates of capacitor
a) ΔQ b) ΔW c) $\Delta Q + \Delta W$ d) $\Delta Q - \Delta W$		46. The emf of a battery is equal to its terminal potential difference: a) Under all condition b) Only when the battery is being charged c) When a large current is in the battery d) Only when there is no current in the external circuit
38. At what angle two forces $2F$ and $\sqrt{2}F$ must act so that their resultant is $F\sqrt{10}$; 2019-Med	A	47. A laser must be pumped to achieve a) A metastable state b) fast response c) stimulated emission d) population inversion
a) $\pi/4$ b) $\pi/2$ c) 2π d) none of the above		48. Your best friend in going on a near light speed trip. When at rest you measure her spaceship to be 100 feet long. Now she is in flight and you are on the earth, and you measure her spacecraft to be a) Exactly 100 feet long b) less than a 100 feet long c) more than 100 feet long d) none of the above
39. When 20 J of work was done on a gas. 40J of heat energy was released. If the initial internal energy of the gas was 70J. What is the final internal energy? 2019-Med	C	49. What happens to the half life of a radioactive substance as it decays? a) It remains constant b) it increases c) it decreases d) it could do any of these
a) 50 J b) 60J c) 90J d) 110J		50. The area of a book having length 1m and breadth 0.5m, in cm^3 is given by a) 5000 b) 5 c) 500 d) 50
40. Time required by the projectile to reach the summit point is 2019-Med	C	51. 2π rad/s is approximately equal to
a) $T = \sqrt{\frac{2H}{g}}$ b) $T = \sqrt{\frac{3H}{g}}$ c) $T = \sqrt{\frac{4H}{g}}$ d) $T = \sqrt{\frac{H}{g}}$		
41. A source of sound of frequency 500 Hz is moving towards an observer with velocity	A	

a 30 revolutions b) 40 revolution c) 50 revolutions d) 60 revolutions			a) 167m/s b) 334m/s c) 668m/s d) 1336 m/s		
52.	The equation of continuity can be derived from a) Law of conservation of energy b) Law of conservation of momentum c) Law of conservation of mass d) Law of conservation of charge	C	63.	In monochromatic red light a blue book will probably appear to be a) Purple b) green c) black d) none of the above	C
53.	Lorentz force is based on a) Dot product b) cross product c) both dot and cross product d) independent of both	B	64.	Two identical heat engines "A" and "B" have their sources at 600k and 400k and their sinks at 300k and 250k respectively. What can you say about their efficiency? a) A is more than B b) A is less than B c) both have equal efficiency d) the data given is not sufficient	A
54.	$\frac{\text{volt}}{\text{ampere}}$ farad, expected dimension is a) $M^0 L^0 T^{-1} A^{-2}$ b) $M^1 L^1 T^{-2} A^{+2}$ c) $M^0 L^0 T^1 A^2$ d) None	D	65.	Two parallel conducting wires placed closer to each other carry current in the opposite direction will a) Attract each other b) repel each other c) no effect d) None of the above	B
55.	In Compton scattering from stationary particles the maximum shift in wavelength can be made smaller by using a) Higher frequency radiation b) More massive particles c) Lower frequency radiation d) Less frequency radiation	A	66.	If we increase the resistance of coil, the induced emf will a) Increase b) decrease c) remains same d) none	B
56.	Which of the following system below are not inertial reference frames? a) A person standing still b) An airplane in mid flight c) A merry-go-round rotating at constant rate d) All of the above are IFRs	D	67.	In a capacitive circuit, current and voltage phase relation is a) In phase b) current leads voltage by 90° c) voltage leads current by 90° d) None of the above	B
57.	A wire carrying current 10mA experiences a force of 2N in a uniform field. What is the force on it when current rises to 30mA? a) 2N b) 4N c) 6N d) 8N	C	68.	The ability of solids to resist bending is called a) Strength b) hardness c) toughness d) stiffness	D
58.	The efficiency of electric heater is a) 45% b) 60% c) 75% d) 100%	D	69.	Which one is known as antimatter or antiparticle? a) Proton b) electron c) neutron d) positron	D
59.	The velocity of disc at the bottom of an inclined plane is independent of a) Mass of disc b) radius of disc c) height of inclined plane d) both a and b	D	70.	Laser light is the result of a) Ordinary emission b) spontaneous emission c) stimulated emission d) all of the above	C
60.	Water flows through a 1cm diameter pipe with speed of 1m/s. what should be the diameter of the nozzle if the water is to emerge at 4m/s? a) 2.1cm b) 1.6cm c) 1cm d) 0.5cm	D	71.	Radioactivity is affected by a) Temperature b) pressure c) humidity level d) None of the above	D
61.	The ratio of P.E and total energy at extreme position in SHM will be equal to a) 1 b) $\frac{1}{2}$ c) $\frac{1}{4}$ d) zero	A	72.	A car in motion hits and gets embedded in a tree trunk. What is conserved? a) Momentum and K.E b) Kinetic energy alone c) neither K.E nor momentum d) Momentum alone	B
62.	The speed of sound in air is 334m/s at a pressure P. what will be the speed of sound if the pressure becomes 4P?	B	73.	The work done by a magnetic field on a moving charge is a) $BqvL$ b) Bqv/L c) zero d) positive	C

74. Four wires meet at a junction. The first carries 4A into junction, the second carries 5A out of the junction and 3 rd carries 2A out of the junction. The 4 th carries	D	a) 7A out of the junction b) 7A into the junction c) 3A out of the junction d) 3A into the junction
75. A 10 turn conducting loop spins at 60 revolutions per second in a magnetic field of 0.50T, the maximum emf generated is	D	a) $200 \pi^2 r^2$ b) $300 \pi^2 r^2$ c) $400 \pi^2 r^2$ d) $600 \pi^2 r^2$
76. According to the theory of relativity	D	a) Moving clock runs fast b) Energy is not conserved in high speed collision c) The speed of light must be measured relative to the ether d) None of the above are true
77. Which one of the following has the greatest effect in decrease the oscillation frequency of an LC circuit using instead?	D	a) $\frac{L}{2}$ and $\frac{C}{2}$ b) $\frac{L}{2}$ and $2C$ c) $2L$ and $\frac{C}{2}$ d) $2L$ and $2C$
78. The relation between the disintegration constant λ and the half life T of a radioactive substance is	C	a) $\lambda = 1/T$ b) $\lambda = 2/T$ c) $\lambda T = \ln 2$ d) $\lambda T = \ln(1/2)$
79. A small block oscillates back and forth on a smooth concave surface of radius R. the time period of small oscillation is	A	a) $T = 2\pi \sqrt{\frac{R}{g}}$ b) $T = 2\pi \sqrt{\frac{2R}{g}}$ c) $T = 2\pi \sqrt{\frac{R}{2g}}$ d) None of the above
80. The dimension of pressure is	A	a) $ML^{-1}T^{-2}$ b) $ML^{-2}T^{-2}$ c) $[MLT^{-2}]$ d) $ML^{-1}T^{-1}$
81. The magnitude of two forces each of them is 10N are added together such that the magnitude of their resultants is also 10N. then the angle between the forces is	D	a) 30° b) 60° c) 90° d) 120°
82. Two railway trucks of masses m and 5m move towards each other in opposite direction with speed 3v and v respectively. These trucks collide and stuck together. What is the speed of the truck after collision?	A	a) v/3 b) v/2 c) v d) 5v/4
83. An emf of 16 volts is induced in a coil of inductance 4 H The rate of change of current must be	D	a) 64 A/s b) 32A/s c) 16 A/s d) 4 A/s
84. In an RLC series phasor, we start drawing the phasor from which quantity?	C	a) Voltage b) resistance c) impedance d) current
85. What is the average value of sinusoidal voltage that has a peak value of 15 volts?	B	a) 0V b) 9.56V c) 10.6V d) 19.1V
86. Which of the following has the largest kinetic energy?	C	a) 2M and 3V b) 5M and 2V c) 3M and 4V d) M and V
87. The SI unit of electric charge is	A	a) AS^{-1} b) VS^{-1} c) A d) S
88. If two charges experience a force of 10N when medium is air. If medium is change whose relative permittivity is 2 then force will be	B	a) 3N b) 5N c) 10N d) 0.2N
89. The time rate of change of linear momentum is	A	a) Force b) tension c) inertia d) impulse
90. A body moving in a circle of radius 1m transverses an angle of 57.3%. The distance covered by the body along circle is	B	a) 1 m b) 57.3m c) π m d) $\pi/2$ m.
91. The restoring force in the simple pendulum of mass m is	B	a) $mg \cos\theta$ b) $mg \sin\theta$ c) $mg \tan\theta$ d) mg
92. if temperature of medium increases by 1C then speed of sound will rise	C	a) 0.61cm/s b) 6.1cm/s c) 61cm/s d) 61m/s
93. Fringe spacing is a function of (young's double slit Exp)	D	a) Separation between slits b) Wavelength of light c) Distance between slits and screen d) All of the above
94. Which one of the following properties is common between sound and light?	D	a) Nature of sound and light b) Polarization c) medium d) diffraction
95. In isothermal process the internal energy of the system	A	a) Remains constant b) increases c) decreases

d) none of the above		a) 2E	b) 4E
96. An isolated charged point particle produced an electric field with magnitude E at point 2m away a point m from the particle the magnitude of the field is	B	c) E/2	d) E

CHAPTER-1:

MEASUREMENT

1.1 Physical Quantities & International System of Units

97. Which expression using SI base units is equivalent to the volt; 2018-Med	D	$V=W/q=fd/q=mad/It=mvd/tIt=msd/ttIt=kgmm/ssAs=kg\ m^2/s^3\ A^1=kg\ m^2\ s^{-3}\ A^{-1}$
a. $kg\ m^2\ s^{-1}\ A^{-1}$ b. $kg\ m\ s^{-2}\ A$ c. $kg\ m^{-2}\ s^{-1}\ A$ d. $kg\ m^2\ s^{-3}\ A^{-1}$		
98. What is the circumference of the circle whos area is 100π 2018-Eng	B	Circumfrnce of circle(c)= $2\pi r$ and area of circle(a)= πr^2 NOW $a=\pi r^2=100\pi \rightarrow r^2=100 \rightarrow r=10$ to find $C=2\pi r=2\pi 10=20\pi$
a. 10π b. 20π c. 10 d. 290		
99. The force of one Newton per meter square is equal to one. 2005 Med:	C	$P=F/A$
(a) Bar (b) Atm (c) Pascal (d) Erg.		
100. Which of following is unit of Pressure? 2013 Med:	B	$Kg\ m^{-1}\ s^{-2}$ Hints: $P = \frac{F}{A} = \frac{Kg\ m/s^2}{m^2} = Kg\ m^{-1}\ s^{-2}$
(a) $Kg\ m\ s^{-1}$ (b) $Kg\ m^{-1}\ s^{-2}$ (c) $Kg\ m^2\ s^{-2}$ (d) $Kg\ m^{-2}\ s^{-1}$		
101. If p is a pressure and δ is a density then $p/\delta ha$ units of: 2016 Med	A	$P = F/A=ma/A=kg.\ ms^{-2}/m^2=kg/m\ s$ and $\delta ha=(m/V)ha=kg.\ m.m^2/m^3=kg$ now $p/\delta ha=kg/ms/kg=m\ s$
(a) m^2/s^2 (b) N/m^2 (c) Kg/m^2 (d) m^3/Kg		
102. Which of the following is closest to a yard: 2016 Med	C	1 m is closed to year
(a) 0.01 m (b) 0.1 m (c) 1 m (d) 100 m		

1.2 Scientific Notation, Error & Uncertainties

103.	A student measure current as 0.5A. which of the following correctly expresses the result	2018-Eng	C	0.5 A= 0.5 mA/m = 0.5/10 ⁻³ mA= 0.5 x 10 ³ mA= 5x 1000 mA=500 mA		
	a. 50Ma c. 500mA	b. 50MA d. 500MA				
104.	The prefix “tetra” stands for	2018-Eng		exa →E →10 ¹⁸ peta →P→ 10 ¹⁵ tera →T →10 ¹² giga →G→ 10 ⁹ mega→ M→ 10 ⁶	kilo →k→ 10 ³ hecto →h→ 10 ² deka →da→ 10 ¹ deci →d→ 10 ⁻¹ centi →c→ 10 ⁻²	milli→ m→ 10 ⁻³ nano →n→ 10 ⁻⁹ pico →p→ 10 ⁻¹² femto →f→ 10 ⁻¹⁵ atto →a→ 10 ⁻¹⁸

105. What is the ratio of 1 Gm/1 μ m? **2012 Eng:** **D** 1Gm =Gaga meter = 10^9 , 1 μ m = micro meter = 10^{-6} Thus; $1\text{Gm}/1\mu\text{m} = \frac{10^9}{10^{-6}} = 10^9 \times 10^6 = 10^{15}$
 (a) 10^{-3} (b) 10^{-7}
 (c) 10^{-18} (d) 10^{15}
-
106. The prefix 'Pico' stands for: **2014 Med:** **C** Pice = 10^{-12}
 (a) 10^6 (b) 10^9
 (c) 10^{-12} (d) 10^{12}
-
107. 9.5×10^{15} m when rounded off 40 is 10^{16} m which is equal to **2011 Eng:** **D** as Peta = 10^{15} so Light year = 9.5×10^{15} m = peta meter
 (a) Tera meter (b) Atto meter
 (c) Exa meter (d) Light year
-
108. The measurement of physical quantity may be subject to random errors and to systematic errors. Which statement is correct? **2015 Eng:** **C** **Random errors can be reduced by taking average of several measurements**
 (a) Random errors are always caused by the person taking the measurement.
 (b) A systematic error cannot be reduced
 (c) Random errors can be reduced by taking the average of several measurements
 (d) A systematic error results in a different reading each time the measurement is taken.
-
- 1.4 Rounding Off Numbers & Significant Figures**
-
109. The number of significant fiures in the measurement of 5.005×10^{-5} s is; **2018-Eng** **c** The zero between two significant figure is also significant and power is not counted in significant figures.
 a. 2 b. 3
 c. 4 d 5
-
110. The scientific notation of a number 0.0023 is expressed as: **2015 Eng** **A** 2.3×10^{-3} . Decimal moved to right after first non zero digit and sign of power will be negative while moving to right
 A) 2.3×10^{-3} B) 0.023×10^{-2}
 C) 2.3×10^{-4} D) 0.2×10^3
-
111. If 7.635 & 4.81 are two significant numbers, their multiplication in significant digit is **2011 Eng:** **B** Answer should be carried to least significant figure operation i.e. 4.81 which are to be multiplied.
 (a) 36.72435 (b) 36.724
 (c) 36.72 (d) 36.7
-
112. The number of significant figures in 4.0030 is; **2009 Med:** **B** Zero after decimal to the right are also significant
 (a) Four (b) Five
 (c) Two (d) Three
-
113. The number of significant figures in the measurement $x = 10.00300$ **2012 Med:** **A** Zero after decimal to the right are also significant because it sow least count of measuring instrument
 (a) 7 (b) 8
 (c) 5 (d) 3
-
114. The number of significant figures in the measurement of 5.05×10^{-3} m/s is; **2008 Med:** **b** Number in powers are in included in significant figures
 (a) 2 (b) 3
 (c) 4 (d) 8
-
115. During the experiment one measured the mass of Mosquito and fount it 1.20×10^{-5} Kg. The numbers of significant figures in this case are: **2014 Med** **D** Number in powers are in included in significant figures
 (a) Five (b) One

(c) Two (d) Three

116. In a cricket match 500 spectators are counted one by one. How many significant figures will be there in the final result? **2016 Med**
 (a) 0 (b) 1
 (c) 2 (d) 3
117. A value for the acceleration of free fall on earth is given $(10 \pm 2) \text{ ms}^{-2}$. Which statement is the most correct **2017-MEd**
 a. the value is accurate but not precise
 b. the value is both accurate and precise
 c. the value is neither precise nor accurate
 d. the value is precise but not accurate
118. The maximum error in measurement of mass and length of the sides of the cube are 3% and 2% respectively. The maximum error in the measurement of its density is **2017-Eng**
 a. 3% b. 5%
 c. 6% d. 9%
119. In simple electrical circuit the current in a resistor is measured as $2.50 \pm 0.05 \text{ mA}$. the resistor is marked as having a value of $4.7 \pm 2\%$. if these values were used to calculate the power dissipated in the percentage uncertainty in the value obtained **2017-Med**
 a. 2% b. 4% c. 6% d. 8%
120. The power loss in resistor is calculated by formula $P = V^2/R$. the uncertainty in V is 3% and in R is 2%. Uncertainty in P is: **2018-MEd**
 a. 4% b. 7% c. 8% d. 11%
121. A quantity x is to be determined by the equation $x = P - Q$. P is measured as $1.27 \pm 0.02 \text{ m}$ and Q is measured as $0.83 \pm 0.01 \text{ m}$. what is percentage uncertainty in x to one significant figures; **2018-MEd**
 a. 0.04% b. 2% c. 3% d. 7%
122. The quantity x is to be determined from the equation $x = p - Q$. p is measured as $(1.27 \pm 0.02) \text{ m}$ and Q is measured as $(0.03 \pm 0.01) \text{ m}$. What is the percentage uncertainty in x to one significant figure. **2012-150 Eng:**
 (a) 4% (b) 2%
 (c) 3% (d) 7%
123. The density of the steel ball was determined by measuring the mass and diameter. The mass was measured with 1% and diameter 3% of the error. In the calculated density of the steel ball is at most. **2009-61 Med:**
 (a) 2% (b) 4%
 (c) 8% (d) 10%
124. The power loss, P in resistor is calculated using the formula $P = V^2/R$. The uncertainty in the potential difference V is 3% and the uncertainty in the resistance R is 2%, what is the uncertainty in P? **2012-51 Eng:**
- D If L.C is 100 than 1 significant figure.
 If L.C is 10 than 2 significant figure.
 As there are 500 spectators and are counted one by one means L.C is 1 So there will be 3 significant figure
- A Accurate because value is near to 9.8 but not precise because least count is little more.
- d $D = m/V = m/LLL = 3/2222 = 3+2+2+2 = 9\%$
- c $P = VI = I^2 R = 2+2+2 = 6\%$
 Uncertainty in $I = 0.05/2.50 \times 100 = 2\%$
- $P = V^2/R = VV/R = 3\%3\%/2\% = 3+3+2 = 8\%$
- D Hints; $x = P - Q = 1.27 - 0.03 = 1.24$, Error = $0.02 + 0.01 = 0.03$
 Percentage uncertainty = $\frac{\text{Error}}{\text{Measured quantity}} \times 100 = \frac{0.03}{1.24} \times 100 = 2.4 \approx 2$
- D By formula of density $D = m/V$, the error is $1\% + 3\% = 4\%$
- C $P = \frac{V^2}{R} = \frac{(3\%)^2}{2\%} = \frac{3\% \times 2}{2\%} = 6\% + 2\% = 8\%$
 Note: power is multiplied to the error

125. The uncertainty recorded in the radius of a sphere is 1.6%. The uncertainty in the area of that sphere is; **2012-61 Med:**
 (a) 4.8% (b) 3.2%
 (c) 1.6% (d) 0.8%
- B Area of sphere = $4\pi r^2 \Rightarrow$ Thus uncertainty in area = $(1.6\%)^2 = 1.6\% \times 2 = 3.2\%$ (In uncertainty power is multiplied)
-
126. The percentage error in the measurement of mass and speed are 5% or 6% respectively the maximum error in the measurement of K.E is: **2015-07 Med**
 A) 17% B) 30%
 C) 15% D) 90%
- A Maximum Error in K.E = $\frac{1}{2} mv^2 = (5\%)(6\%)^2 = (5\%) + (6\% \times 2) = 17\%$
-
127. A precise measurement is one which has; **2010-85 Eng:**
 (a) Less uncertainty (b) Max precision
 (c) Absolute precision (d) None of these
- A Smaller L.C \rightarrow More precise measurement. Relative Error \rightarrow More Accurate

1.5 Dimentions

128. The dimesnsional formula for change in momentum is same for: **2018-Med**
 a. force b. impulse
 c. acceleration d. velocity
- A $\Delta P/t = \Delta mv/t = \Delta ma = \Delta F$
-
129. Suppose $A=BC$, where A has the dimesnsion L/M and C has the dimension L/T. then B has the dimension **2017-Med**
 a. T/M b. L^2/TM
 c. TM/L^2 d. $L^2 T/M$
- A $A=BC$ thus $B=A/C$ (putting dimesnsion of both A and C) we get $B = \frac{L/M}{L/T} = T/M$
-
130. The unit of planks constant is same is that of: **2017-med**
 a. angular momentum b. work
 c. force d. torque
- A $L=rp=rmv=rms/t = m \text{ kg m/s} = \text{kg m}^2/\text{s}$
 $E=hf \rightarrow h=E/f=ET=wt=Fdt=madt=mdvt/t=mdv=mds/t = \text{kg m m/s} = \text{kg m}^2/\text{s}$
-
131. Which one of the following is both unitless and dimentionless **2017-Eng**
 a. angle b. solid angle
 c. mechanical equivalent of heat d. refractive index
- A Angle is ration between two length so it has no unit and no dimension.
-
132. The dimensions of Planck constant are; **2010-Med**
 a. $[MLT^{-2}]$ b. $[ML^2T^{-1}]$
 c. $[MLT^{-3}]$ d. $[ML^2T^{-2}]$
- b $E=hf \rightarrow h=E/f=ET=k.E \text{ t} = M (L^2/T^2) T = ML^2T^{-1}$. Not dimesntion for all types of energy are same
-
133. The Dimension of work are similar to the dimensions of; **2011 Eng:**
 (a) Impulse (b) Torque
 (c) Power (d) Angular momentum.
- B $W=Fd$ and torque = Fr as r and d have same dimensionso work and torwue have also same dimension.
-
134. $ML^{-1}T^{-1}$ are dimensions of; **2011- Med:**
 (a) Augular Momentum (b) Power
 (c) Impulse (d) Viscosity
- D $F=6\pi\eta rv \rightarrow \eta = F/6\pi rv = F/rv = ma/rv = \frac{mv/t}{rv} = ML^{-1}T^{-1}$
-
135. The dimensions of energy are the same as those of ; **2007-Med**
 a . Momentum b. Acceleration
 c. Force d. Work
- D Work is ability to do work and its type of energy so it has same dimension.
-
136. The dimensions of the gravitational constant are: **2010-Med:**
 a. $[M^2L^2T]$ b. $[M^{-1}L^3T^{-2}]$
 c. $[M^2L^{-2}T^{-2}]$ d. $[ML^{-2}T^{-1}]$
- B $F = \frac{GM_1M_2}{R^2} \rightarrow g = \frac{FR^2}{M_1M_2} \rightarrow MLT^{-2}L^2M^{-2} \rightarrow M^{-1}L^3T^{-2}$

137. The dimensions of torque are: **2008-Med,** D Torque = $rf = L MLT^{-2} = ML^2 T^{-2}$
2010-Eng:
 a. $[MLT^{-2}]$ b. $[ML^2T^{-2}]$
 c. $[MLT^{-1}]$ d. $[ML^2T^{-2}]$
-
138. The dimensions of impulse are similar to the dimensions of: **2010-Eng** C Impulse = $Ft = mv/t \times t = mv$ and momentum = mv
 a. Torque b. Work
 c. Momentum d. Force
-
139. The dimensions of angular acceleration are ; **2007-Med** C Angular acceleration = $a/r = s/ttr = 1/t^2 = T^{-2}$
 a. $[L^{-1}T^{-1}]$ b. $[LT^{-2}]$
 c. $[T^{-2}]$ d. $[L^2T^{-2}]$
-
140. Planck's constant has the dimension of: **2009-Med** D $E = hf \rightarrow h = E/f = Et = Wt = Frt = m\alpha r t = mvr/t = mvr = pr =$ Angular momentum
 a. Energy b. Work
 c. Linear momentum d. Angular momentum
-
141. $M^0 L^0 T^0$ are the dimension of **2011-Med:** D All of these are rariion of same wuantity so all are dimensionless.
 (a) Strain (b) Refractive Index
 (c) Magnification (d) All
-
142. The time rate of change of magnetic flux has the same dimensions as that of: **2012-, Med:** D
 A) Current B) Resistance
 C) Magnetic induction D) Potential difference
-
143. Which of the following pairs have the same units and dimensions? **2012-Med:** C Electromotive force & potential differenc both have same dimension
 A) Resistance and resistivity
 B) Conductivity and resistivity
 C) Electromotive force & potential difference
 D) Resistivity & temperature coefficient of resistivity
-
144. Which one is correct formula for finding the speed, V of ocean waves in terms of the density ρ of sea water, the acceleration of free fall g , depth, h of the ocean & the wavelength λ ? **2012-Eng:** A For valid formula dimension of both sides are same; $v = \sqrt{g\lambda} = \sqrt{\frac{m}{s^2} \times m} = \sqrt{\frac{m^2}{s^2}} = m/s =$ Velocity.
 (a) $v = \sqrt{g\lambda}$ (b) $v = \sqrt{g/4}$
 (c) $v = \sqrt{\rho gh}$ (d) $v = \sqrt{g/\rho}$
-
145. Suppose $A = BC$, where A has the dimension L/M and C has the dimension L/T . Then B has the dimension: **2016-Eng** A $A = BC \rightarrow B = \frac{A}{C} = \frac{L/M}{L/T} = \frac{LT}{ML} = \frac{T}{M} =$
 (a) T/M (b) L^2/TM
 (c) TM/L^2 (d) L^2T/M

CHAPTER#2:

VECTORS & EQUILIBRIUM

2.1 VECTORS:

146. Which pair contain one vector and one scalar quantity; **2017-Eng** B Force is scalar and kinetic energy is vector because force have proper direction while kinetic energy have not
 a. displacement and acceleration
 b. force and kinetic energy
 c. momentum and velocity
 d. power and speed

147. The correct representation of the vector \vec{A} in the xy-plane is given. In terms of the rectangular components as: 2008-94 Med; A

a. $\vec{A} = Ax\hat{i} + Ay\hat{j}$ b. $\vec{A} = +A\hat{x} + Ay\hat{i}$
 c. $\vec{A} = A\times\hat{i} + Ay\hat{i}$ d. $\vec{A} = +A\times\hat{i} + Ay\hat{i}$

148. If \hat{A} is unit vector in the direction of vector \vec{A} than 2009-Med, A
2015- Eng

$$\vec{A} = |A|\hat{A} \Rightarrow \hat{A} = \frac{\vec{A}}{|A|}$$

(a) $\hat{n} = \frac{\vec{A}}{|A|}$ (b) $\hat{n} = \vec{A}|A|$
 (c) $\hat{n} = \hat{n}\vec{A}$ (d) $\hat{n} = \frac{A}{A}$

149. Which one of the following is scalar quantity? 2012-42 Eng, A
 (a) Mass (b) Acceleration
 (c) Momentum (d) E. Intensity

150. Which one of the following is not a vector quantity? 2012-7 Med; D
 (a) E. F. Intensity (b) G.F Intensity
 (c) Magnetic Induction (d) Emf

2.2 Addition, Subtraction & Multiplication & Products of Vector

151. The magnitude of horizontal component of force is 10N and 6N. the magnitude of its vertical component is 2018-Eng c
 a. 10N b. 4N c. 8N d. 12N

152. Two forces having magnitude 3.5 N and 5.5 N are acting on a body. Which one of the following cannot be resultant measurent 2018-Eng c The resultant of two vectors is in between of their sum and subtraction. the possible resultants are $5.5+3.5 \rightarrow 5.5-3.5 = 9$ to 2 so 1.5 is not possible.

153. The vector P makes 120° with x-axis and vector Q makes 30° with y-axis, then their resultant is 2017-Eng C
 a. $P+Q$ b. $P-Q$
 c. $\sqrt{P^2 + Q^2}$ d. $\sqrt{P^2 - Q^2}$

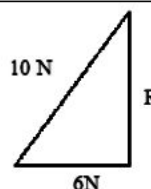
154. If $|\vec{a} + \vec{b}| = |\vec{a} - \vec{b}|$, for two non zero vectors \vec{a} and \vec{b} , then it holds that 2017-Eng A
 a. \vec{a} and \vec{b} perpendicular b. \vec{a} and \vec{b} are parallel
 c. \vec{a} and \vec{b} are coplanar d. \vec{a} and \vec{b} are non coplanar

155. The sum of two forces acting at a point is 16N. if the resultant is 8N and its direction is perpendicular to minimum force, then force is 2017-Med A
 a. 6N and 10N b. 8N and 8N
 c. 4N and 12 N d. 5N and 11N

$$10^2 = R^2 + 6^2$$

$$R^2 = 10^2 - 6^2$$

$$R = 8$$



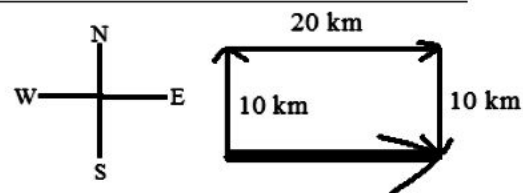
156. Two vectors \vec{A} and \vec{B} are such that $\vec{A} + \vec{B} = \vec{A} - \vec{B}$ then select the correct statement: 2015-09 Med B
 A) $\vec{A} = 0$ B) $\vec{B} = 0$
 C) neither \vec{A} nor \vec{B} is zero D) None of the above

157. Two forces having magnitudes 3.5N and 5.5N are acting on a body. Which one of the following cannot be the resultant of their possible sum? 2014-Med A The resultant of two vectors is in between of their sum and subtraction. the possible resultants are $5.5+3.5 \rightarrow 5.5-3.5 = 9$ to 2 so 1.5 is not possible.

158. If "x" component of a vector is 3N & Y component is 3N, than angle made by the resultant with x-axis is;
2012- Eng:
(a) 45° (b) 315°
(c) 135° (d) 225°
159. The vectors A and B are such that $|A + B| = |A - B|$, Then the angle between the two vectors is: 2014-; Med
(a) 0° (b) 90°
(c) 60° (d) 180°
160. The horizontal & vertical component of forces are 10N each. The direction of the resultant force with x-axis. 2011- Eng:
(a) 30° (b) 45°
(c) 60° (d) 75°
161. Two forces of 12N and 6N applied simultaneously to a body. The maximum magnitude of their resultant is
2010- Eng:
(a) 24N (b) 30N
(c) 18N (d) 36N
162. The resultant of a 6N force & 8N force acting at right angle to each other is of magnitude. 2006-10 Med:
(a) 14N (b) 2N
(c) 10N (d) 48N
163. The magnitude of the resultant two forces is F. The magnitude of each force is F. The angle between the forces must be: 2009=Med, 2013- Eng:
(a) 30° (b) 60°
(c) 45° (d) 120°
164. The magnitude of the resultant of two forces is 2F. If the magnitude of each force is F, than the angle between these forces is: 2011-Med
(a) 0° (b) 90°
(c) 120° (d) 180°
165. The vectors \vec{A} and \vec{B} are such that, $|\vec{A} + \vec{B}| = |\vec{A} - \vec{B}|$, The angle b/w the two vectors is; 2013-13Med;2012, Med:
(a) 0° (b) 60°
(c) 90° (d) 180°
166. If $\vec{A} = 2\hat{i} + \hat{j} + 2\hat{k}$ then its magnitude is; 2010-, Med:
(a) 9 (b) 5
(c) 3 (d) 1
167. Two forces of magnitude 20N & 10N act at a point that which one of the following cannot be their possible sum. 2012- Med:
(a) 30N (b) 10N
(c) 35N (d) 15N
168. Two concurrent forces have a maximum resultant of 45N and minimum result of 5N. What is the magnitude of each these? 2009- Med:
(a) 0, 45N (b) 5N, 9N
(c) 20, 25N (d) 0N, 45N
169. Let \vec{a} and \vec{b} be any two vectors and θ be the angle between them then $|\vec{b}| \cos \theta$ is projection of:
(a) \vec{b} in the direction of \vec{a}
(b) \vec{a} in the direction of \vec{b}
- A $\tan \theta = \frac{F_y}{F_x} = \theta = \tan^{-1} \frac{F_y}{F_x}$
 $= \tan^{-1} \frac{3}{3} = \tan^{-1} 1 = 45^\circ$
- B $\tan \theta = \frac{F_y}{F_x} \rightarrow \theta = \tan^{-1} \frac{F_y}{F_x} =$
 $\tan^{-1} \frac{10}{10} = \tan^{-1} 1 = 45^\circ$
- C \vec{R} is maximum, when $\theta = 0^\circ, \rightarrow$
 $\vec{R} = \vec{A} + \vec{B} = 12 + 6 = 18\text{N}$
- C $\theta = 90^\circ, \rightarrow \cos 90 = 0$ then $\vec{R} =$
 $\sqrt{(F_1)^2 + F_2^2 + 2F_1F_2 \cos \theta} =$
 $\sqrt{6^2 + 8^2} = \sqrt{36 + 64} = \sqrt{100} = 10\text{N}$
- D The angle is 120, just remember the answer in this case, this is example in the book, you can see solution in book, just try example and remember answer.
- a When $\theta = 0^\circ$ than R is maximum or forces are added of they are in same direction and have zero angle, $\Rightarrow \vec{R} \rightarrow \vec{F} + \vec{F} = 2\text{F}$
- C Special case of vectors addition.
- C 2,1,2 are the numbers with x,y and z
 $= \sqrt{(2)^2 + (1)^2 + (2)^2} = \sqrt{4 + 1 + 4}$
 $= \sqrt{9} = \sqrt{(3)^2} = 3$
- C The resultant of two vectors is in between of their sum and subtraction. the possible resultants are $20+10 \rightarrow 20-10 = 30 \rightarrow 10$ so 35 is not possible
- C For maximum their sum is 45 and for minimum their difference is 5 so option c right because its sum is 45 and difference is 5.
- A \vec{b} in the direction of \vec{a}

- (c) \vec{b} in the direction of x-axis
(d) \vec{a} in the direction of y-axis

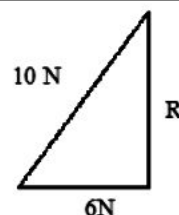
170. The dot product of force & velocity is equal to; **2011-Med:** A Power = $W = t \rightarrow Fd/t = Fv$
(a) Power (b) Impulse
(c) Couple (d) Momentum
171. Which of the following is an example of vector product of two vectors? **2011-Med:** B
(a) Linear Momentum (b) Angular Momentum
(c) force (d) Electric flux
172. If the scalar product of two non-zero vectors A & B is zero, the magnitude of their vector product will be **2010-Eng:** a scalar product is zero when $\theta = 90$ because $\cos 90 = 0$ so from first statement we are told about angle & $A \times B = AB \sin 90 = AB$
(a) AB (b) Zero
(c) $AB \sin \phi$ (d) $AB \cos \theta$
173. If $\vec{A} \cdot \vec{B} = 0$ then $\vec{A} \times \vec{B}$ will be equal to: **2011-Eng:** A Dot product is zero when angle is 90 and $\sin 90 = 1$
(a) $AB \hat{n}$ (b) Zero
(c) $AB \sin \theta \hat{n}$ (d) $AB \cos \theta$
174. If each vector have unit magnitude than $\vec{A} \cdot \vec{A}$ is: **2016-Med:** B
(a) South (b) One
(c) North (d) West
175. A vector of magnitude 20 is added to a vector of magnitude 25. The magnitude of this sum might be: **2016-Med:** C The resultant of two vectors is in between of their sum and subtraction. the possible resultants are $20+25$ to $25-20 = 45 \rightarrow 5$ so only 12 is in options
(a) Zero (b) 3
(c) 12 (d) 47
176. If $\vec{A} \cdot \vec{B} = 1$, $A = 2$, $B = 1$ then the angle between them is: **2016-Med:** B $\vec{A} \cdot \vec{B} = AB \cos \theta$, $\cos \theta = \vec{A} \cdot \vec{B} / AB = 1/2$
(a) 30° (b) 60° $\theta = \cos^{-1}(0.5)$ Thus $\cos^{-1}(0.5) = 60^\circ$
(c) 90° (d) 45°
177. A person walks 10 km north, 20 km east and 10 km south, then the result displacement is: **2016-Eng:** C
(a) 10 km north-east (b) 20 km north-east
(c) 20 km east (d) 20 km west
178. The sum of magnitudes of two forces is 16N. the resultant force is 8N and its direction is perpendicular to minimum force, then the forces are: **2016-Eng:** a



$$10^2 = R^2 + 6^2$$

$$R^2 = 10^2 - 6^2$$

$$R = 8$$



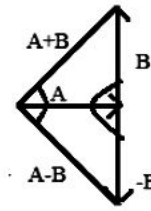
179.

If $|\vec{A}| = |\vec{B}|$, then what is the angle between $\vec{A} + \vec{B}$ and

$\vec{A} - \vec{B}$?

- (a) 0° (b) 45°
(c) 60° (d) 90°

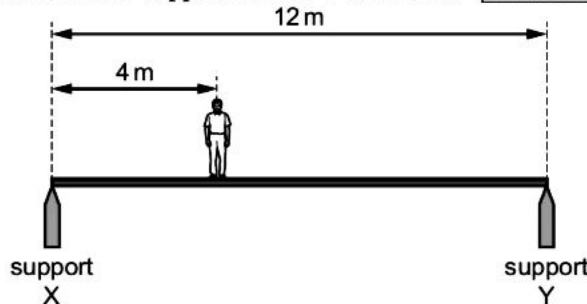
d



2.3 Torque and Equilibrium

180. A uniform horizontal footbridge is 12 m long and weighs 4000 N. It rests on two supports X and Y as shown. [2018-MED]

C



A man of weight 600 N is at a distance of 4 m from support x. What is the upward force on the footbridge from support X?

- A) 2200 N B) 2300 N
C) 2400 N D) 2600 N

181. A body in equilibrium must not have
a. kinetic energy b. velocity
c. momentum d. acceleration

[2018-Eng]

D For body in complete equilibrium it must have zero acceleration

182. In three dimensional space two vectors are said to be collinear if they lie ;

[2015- Eng]

A

- A) along the same line B) along the different lines
C) Above the line D) Below the line

183. Three vectors of equal magnitude are acting on the three sides of an equilateral triangle. The magnitude of their resultant is. [2011- Med]

A

- (a) Zero (b) 3
(c) $\sqrt{3}$ (d) 1.73

184. The minimum number of unequal forces whose vector sum can be zero are; [2010- Med]

C Three unequal forces

- (a) One (b) Two
(c) Three (d) Four

185. A body in equilibrium must not have; [2012-150 Med]

D

- (a) K.E (b) Momentum
(c) Velocity (d) Acceleration

186. The minimum number of equal forces that keep the body in equilibrium are; [2012- 97 Med]

A

- (a) Two (b) Three
(c) Four (d) Five

187. Two or more vectors are said to be collinear if they are:

[2012- 25 Eng]

B Two vectors are collinear if they have the same direction or are parallel or anti-parallel.

- (a) Intersecting the same line
(b) parallel to the same line
(c) perpendicular to the same line
(d) both a. and c.

188. If three coplanar forces acting on a body keep it in equilibrium, then these forces pass are: **2007- 188 Med;**
 (a) Concurrent (b) Non concurrent
 (c) Parallel (d) Antiparallel
189. The physical quantity which produces angular acceleration in body: **2011-18,2010- 47 Med**
 (a) Force (b) Centripetal force
 (c) Impulse (d) Torque
190. The direction of torque is: **2009- 46 Med**
 a. Parallel to the plane of F and r
 b. Perpendicular to the plane of F and r
 c. Anti – parallel to the plane of F and r
 d. is the same as that of the plane of F and r
191. The moment arm of force of 0.6N to produce maximum torque of 0.48 N.m is **2011-23 Eng;**
 (a) 2.88m (b) 8m
 (c) 0.8m (d) 0.288m
192. Newton's first law of motion provides: **2011-19 Eng;**
 (a) 1st condition of equilibrium
 (b) 2nd condition of equilibrium
 (c) Complete equilibrium
 (d) Rotational equilibrium
193. The point at which an applied force produces linear motion but no rotatory motion is: **2011-22 Med;2010-24 Eng;**
 (a) Mid-point (b) Centre of gravity
 (c) Optical centre (d) Pole
194. Two equal, anti parallel and non concurrent forces that produce only angular acceleration are: **2012- 94 Med;**
 A) Couple B) Couple arm
 C) Collinear forces D) Torque

CHAPTER-3:

MOTION & FORCES

3.1 velocity, acceleration and Newton laws

195. A ball of iron of mass 2 kg is dropped from the top of the building. The ball reaches the ground in 10 s. what is the velocity in m/s when it strikes the ground **2018-Eng**
 a. 150 b. 99 c. 49 d. 27
196. A man walks for some time with velocity v due east, then he walks for same time with velocity v due north. the average velocity of the man is **2017-med**
 a. 2v b. $\sqrt{2}v$
 c. v d. $v/\sqrt{2}$
197. The area under the acceleration time graph represents **2017-Eng**
 a. displacement b. velocity
 c. change in velocity d. distance travelled

Main Features:

- ✓ ETEA PAST PAPERS solution 20015-2019
- ✓ Topic wise
- ✓ Chapter wise
- ✓ Physics ; 1000+ MCQs
- ✓ Chemistry; 800+ MCQs
- ✓ Biology 700+ MCQs
- ✓ Maths; 700+ MCQs
- ✓ English : 400 MCQs
- ✓ A solution to each and every MCQs
- ✓ Year written with each mcqs
- ✓ For quick revision.
- ✓ Subject wise

EOM BANK OF MCQS

**BOM
SERIES**

A SOLUTION TO **ETEA** PAST PAPERS 2005-2019 CHAPTERWISE & TOPICWISE

PHYSICS: 1000+ MCQS
CHEMISTRY: 800+ MCQS
BIOLOGY: 600+ MCQS
MATHS: 700+ MCQS
ENGLISH: 400+ MCQS

By:
Shamsul Amin
Dr. Akhtar Amin
Dr. Akhtar Amin

3500+ SOLVED MCQS

3200+ SOLVED MCQS

Key Features:

→ **70+ MCQs in ETEA 2019.**

1. Easy language
2. For class 11 and 12
3. 200+ MCQs per chapter
4. with key
5. To the point
6. Cover 80% ETEA from this book.
7. Chapterwise key points.

BANK OF MCQs ROM SERIES

5000 BIOLOGY MCQs

COVER 90% ETEA

Main Features:

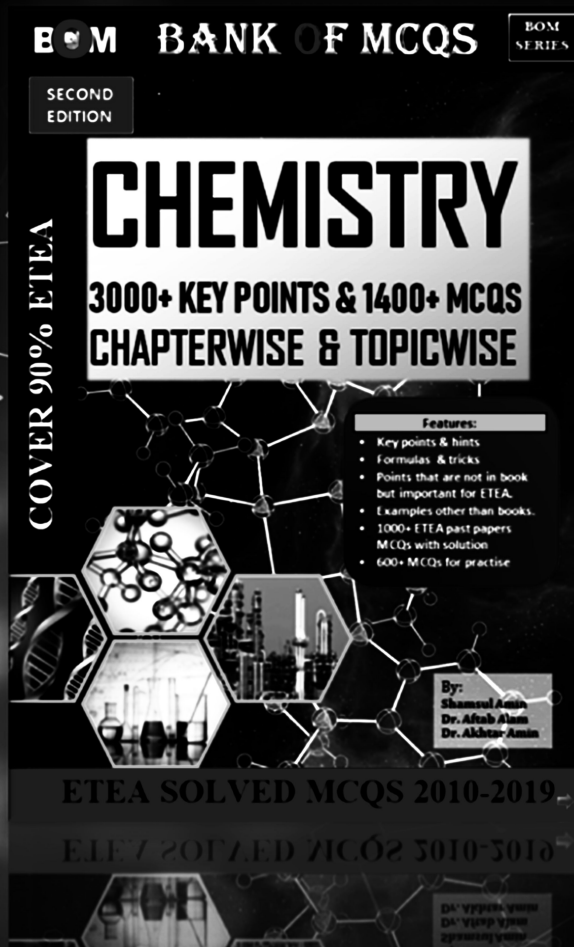
- 5000 MCQs with key
- Arranged chapterwise
- Arranged in sequence
- ETEA solved MCQs 2005-2019 chapterwise
- 2 full mock tests for first year and second year.
- Cover 80% course

By: **Shamsul Sohal**
Dr. A. Cab Akbar
Dr. Akhter Anjum

f Bankofmcqs | Bk of mcqs | 0342 196 3944 | Bankofmcqs@gmail.com

Main Features:

- ✓ Topicwise Key points
- ✓ Topic wise MCQS with solution.
- ✓ Extra examples for ETEA.
- ✓ Important relations
- ✓ Easy language
- ✓ Cover 90% ETEA MCQs.
- ✓ Best diagrams
- ✓ Formulas & tricks
- ✓ Points that are not in book but important for ETEA.
- ✓ Examples other than books.
- ✓ 1000+ ETEA past papers MCQs with solution
- ✓ 600+ MCQs for practice.
- ✓ Many more



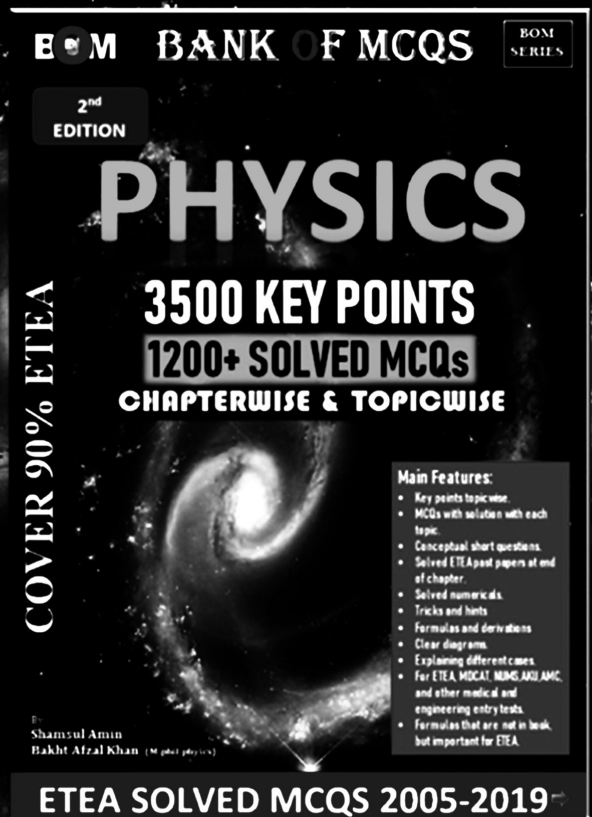
Key Features:
[TEST YOURSELF]

1. Easy language
2. For class 11 and 12
3. original papers
4. with key
5. yearwise



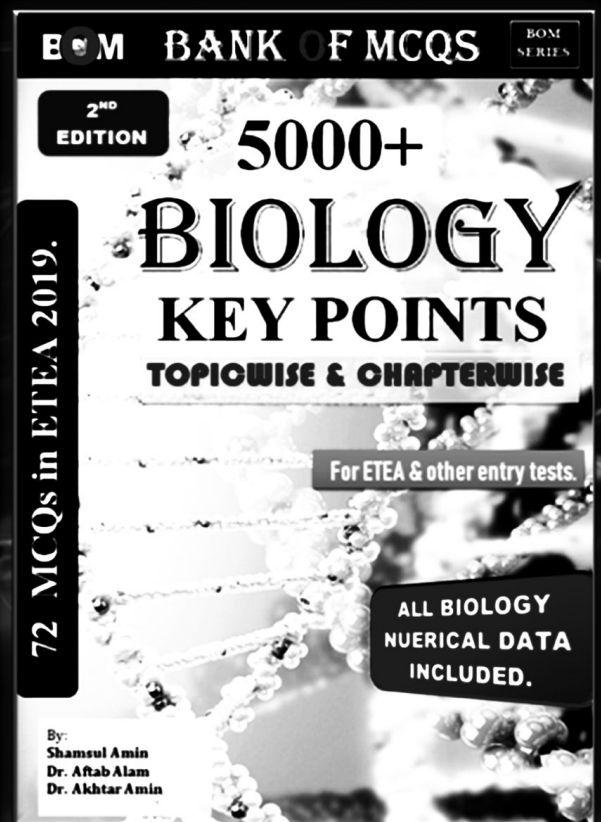
Main Features:

- ✓ Key points topicwise.
- ✓ MCQs with solution with each topic.
- ✓ Conceptual short questions.
- ✓ Solved ETEA past papers at end of chapter.
- ✓ Solved numericals.
- ✓ Tricks and hints
- ✓ Formulas and derivations
- ✓ Clear diagrams.
- ✓ Explaining different cases.
- ✓ For ETEA, MDCAT, NUMS, AKU, AMC, and other medical and engineering entry tests.
- ✓ Formulas that are not in book, but important for ETEA.



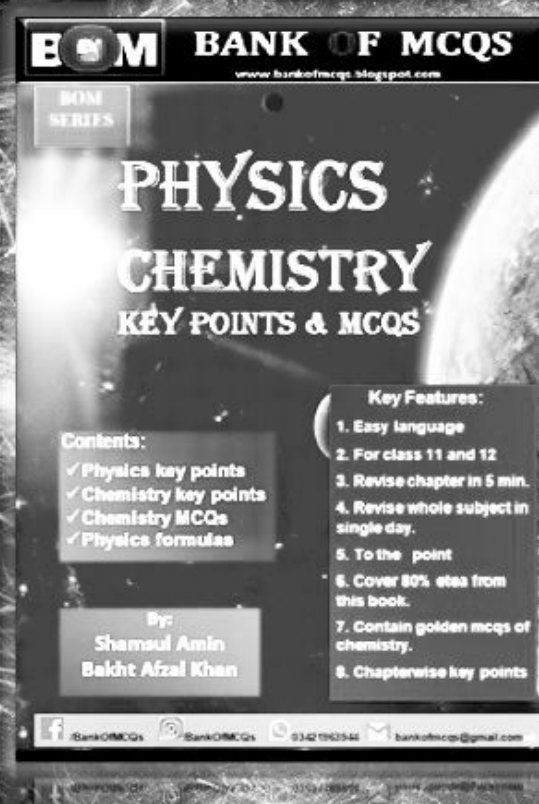
MAIN FEATURES:

- ✓ 72+ MCQs in ETEA 2019 from this book.
- ✓ Topic wise and subject wise
- ✓ Clear diagrams
- ✓ Easy language
- ✓ To the points
- ✓ 5000 key points
- ✓ 700 numerical data
- ✓ Revise chapter in 10 min.
- ✓ Revise whole subject in single day.
- ✓ New tabular style , so you can learn it easily



Key Features:

1. Easy language
2. For class 11 and 12
3. Revise chapter in 5 min.
4. Revise whole subject in single day.
5. To the point
6. Cover 80% ETEA from this book.
7. Golden MCQs of chemistry.
8. Chapterwise key points



198. A car travels a distance S on a straight road in 2 hours and then returns to the starting point in the next 3 hours. Its average velocity is **2017-Eng**
 a. $S/5$ b. $2S/5$
 c. $S/2+S/3$ d. zero
199. When we kick a stone, we get hurt, it happens due to **C**
2017-Eng
 a. inertia b. velocity
 c. reaction d. momentum
200. The numerical value of displacement to distance is **D**
2017-Eng
 a. always less than one b. always equal to one
 c. always more than one d. equal to or less than one
201. If the 100 gram mass having 32 ft/sec^2 , then its force is **2017-Eng** **D**
 a. 320 lb b. 9.8N
 c. 320 dyne d. non of these
 $M=100\text{g}=0.1 \text{ kg}$ and $a=32 \text{ ft/sec}^2=9.8 \text{ m/sec}^2$ so $F=9.8 \times 0.1=0.98 \text{ N}$
 As $1\text{N}=10^5 \text{ dyne}$ so $F=0.98 \times 10^5 \text{ dyne}$ and lb is unit of mass called pound.
202. A ball is thrown vertically upward with a velocity of 98 m/s . If it takes 10 seconds to reach the highest point, then the acceleration of the ball is; **2011-25 Med** **D**
 (a) 9.8 m/s^2 (b) 980 m/s^2
 (c) 98 m/s^2 (d) -9.8 m/s^2
 $a = \frac{v_f - v_i}{t} = \frac{0 - 9.8}{10} = \frac{-9.8}{10} = -9.8$
203. A ball of mass 5 kg is dropped from height of 78.4 m . the time taken by the ball to hit the ground is **2012-98 Med** **B**
 (a) 2 sec (b) 4 sec
 (c) 8 sec (d) 16 sec
 $t = \sqrt{2h/g} = \sqrt{2(78.4)/9.8} = \sqrt{16} = 4$
204. On a railway track a driver applies the brakes of the train at a yellow signal, a distance 1 km from red signal, where it stops. The max deceleration of the train is 0.2 m/s^2 . Assuming uniform deceleration, what is the maximum safe speed of the train at the yellow signal? **2012-65 Eng** **A**
 (a) 20 m/s (b) 40 m/s
 (c) 200 m/s (d) 400 m/s
205. A racing car accelerates uniformly through their gear changes with the following average speeds: 20 ms^{-1} for 2.0 s , 40 ms^{-1} for 2.0 s and 60 ms^{-1} for 6.0 s . What is the overall average speed of the car? **C**
 a) 12 ms^{-1} b) 13.3 ms^{-1}
 c) 48 ms^{-1} d) 40 ms^{-1}
 First we will find S_1, S_2, S_3, \dots . Since $S_1 = v_1 t_1 = 20 \times 2 = 40 \text{ m}$, & $S_2 = 40 \times 2 = 60 \text{ m}$, & $S_3 = 60 \times 6 = 360 \text{ m}$
 Thus; Total distance $= 40 + 60 + 360 = 460 \text{ m}$ So, Average speed $= 460/10 = 46 \text{ ms}^{-1}$
206. A mass accelerates uniformly when the resultant force acting on it: **2014-146; Med** **C**
 (a) Is zero
 (b) Is constant but not zero
 (c) Increases uniformly with respect to time.
 (d) Is proportional to the displacement of the mass from a fixed point.

207. A ball is dropped from the roof of a very tall building. What is its velocity after falling for 5.0s? **C** $V_f = V_i + gt = 0 + 9.8(5) = 49$
 a) 1.96 m/s b) 9.80m/s
 c) 49.0m/s d) 98.0m/s
-
208. The acceleration of free fall on a planet, P is $1/6^{\text{th}}$ of the acceleration of free fall on earth. The mass of a body on planet P is 30 Kg, what is the weight on planet? **D** $g \text{ on planet} = \frac{9.8}{6}$, $m = 30 \text{ Kg}$, $W = m \times \frac{9.8}{6} = 30 \times \frac{9.8}{6} = 30 \times 1.63 = 48.9 = 49\text{N}$
2012- 128 Eng
 (a) 4.9N (b) 100N
 (c) 290N (d) 49N
-
- 3.1 Velocity, Acceleration & Newton's Laws of Motion;**
209. The acceleration of free fall on the moon is one-sixth of that of earth. On earth it takes time 't' for a stone to fall from rest at distance of 2m. what is the time taken for a stone to fall from rest at 2m distance starting from rest. **C** $S = vit + \frac{1}{2} at^2$
 $S = \frac{1}{2} a t^2$
 $T = \sqrt{2S/g}$
2017-medical
 a. 6t b. T/6 c. $t\sqrt{6}$ d. $t\sqrt{2}$
-
210. A man walk for sometime with velocity v due to east. Then he walks for same time with velocity v due north. The average velocity of the man. **C**
2017-medical
 a. 2v b. $\sqrt{2}v$ c. v d. $v/\sqrt{2}$
-
211. The area under acceleration time graph represents. **C** **2017-eng**
 a. displacement b. velocity
 c. change in velocity d. distance travelled
-
212. A car travels a distance S on a straight road in 2 hours and then returns to the starting point in the next three hours, its average velocity as. **B** **2017-eng**
 a. S/5 b. $2S/5$ c. $S/2 + S/3$ d. zero
-
213. When we kick a stone, we get hurt. It happens due to : **C** **2017- eng**
 a. inertia b. velocity
 c. reaction d. momentum
-
214. The numerical ratio of displacement to distance is : **D** **2017-eng**
 a. always less than one b. always equal to one
 c. always more than one d. equal or less than one
-
215. If the 100g mass having 32 ft/sec^2 , then its force is : **D** **2017-eng**
 a. 320 lb b. 9.8 N
 c. 320 Dynes d. none of the above
-
216. A ball of iron, mass 1kg, is dropped from the top of the building. The ball reaches the ground in 5s. what is the velocity, in m/s, of the ball when it strikes the ground. **C** **2018-eng**
 a. 150 m/s b. 99m/s
 c. 49 m/s d. 27 m/s
-
217. The symbol "g" represents the acceleration of free fall. Which of these – statements is correct? **B** **2012- 156 Eng**
 (a) g is gravity
 (b) g is the ratio weight/mass
 (c) g is the weight of an object
 (d) g is reduced by air resistance.
-
218. Bodies which fall freely under the action of gravity is an example of: **A** **2011- 26 Eng**
 (a) uniform acceleration (b) variable acceleration
 (c) uniform velocity (d) average acceleration

219. Newton second law of motion establishes relationship between. **A**
 2010-101 Med
 a. Force and acceleration b. Mass and force
 c. Mass and velocity d. Acceleration and mass
-
220. Two blocks of masses 1.0 kg and 3.0 kg placed in contact are acted upon by a forces of 40 N. the acceleration of 1.0 Kg mass will be; **B**
 2012-145 Med
 (a) 40 m/sec² (b) 10 m/sec²
 (c) 30 m/sec² (d) 50 m/sec²

$$a = \frac{F}{m_1+m_2} = \frac{40}{1+3} = \frac{40}{4} = 10 \text{ m/s}^2$$
-
221. The property of moving object by virtue of which it exerts force on the object that tries to stop it is: **A**
 2011-35 Med
 (a) Inertia of the body (b) quantity of motion of body
 (c) Acceleration of body (d) All of these
-
222. A mass accelerates uniformly when the resultant force acting on it is: **B**
 2016-186 Med
 (a) Zero
 (b) **Constant but not zero**
 (c) Increases uniformly with respect to time
 (d) Both (a) & (c)
-
223. A stone is thrown upward from the top CA = 59.4m high cliff with an upward velocity component of 19.6m/s. How long is stone in the air? **C**
 2016-93 Eng
 (a) 4.00 s (b) 5.00 s
 (c) **6.00 s** (d) 7.00 s
-
224. A science museum designs an experiment to show the fall of a feather in a vertical glass vacuum tube. The time of fall from rest is too close to 0.5 s. What length of tube is required? **A**
 2016-71 Eng
 (a) **1.3 m** (b) 2.5 m
 (c) 5.0 m (d) 10.0 m

3.3 Linear Momentum & Collision

225. Two objects, P and Q have the same momentum. Q has more kinetic energy than P if it: **B**
 2016
 A) weight more than P B) is moving faster than P
 C) weight same as P D) is moving slower than P
-
226. A 5 kg stone is released from rest and falls towards the earth after 4 sec. The magnitude of its momentum is; **A**
 A) 98 kgm/s B) 78 kgm/s
 C) 39 kgm/s D) non of these
-
227. Two bodies of unequal mass, placed at rest on a frictionless surface, are acted on by equal horizontal forces for equal times. Just after these forces are removed, the body of greater mass will have: **C**
 A) greater acceleration
 B) smaller momentum
 C) **greater momentum**
 D) same momentum as other body
-
228. Two bodies of mass 1 and 4 m are moving with equal kinetic energies. The ratio of their linear momentum will be: **C**
 2017-97 Eng
 A. 1:4 B. 4:1
 C. 1:2 D. 2:1

Hints: $\frac{K.E_1}{K.E_2} = \frac{m_1}{m_2}$ and $\frac{p_1}{p_2} = \sqrt{\frac{m_1}{m_2}}$

229. The kinetic energy of a body of mass 1 kg and momentum 2 Ns is equal to: **D**

2017-98 Eng

- A. 1J B. 10J
C. 5J D. 2J

230. Two bodies are dropped from different heights h_1 and h_2 . Their ratio of the times taken by them to reach the ground will be: **C**

- A. $h_2^2 : h_1^2$ B. $h_2 : h_1^2$
C. $\sqrt{h_1} = \sqrt{h_2}$ D. Non of the above

Hints: $t^2 = 2h/g$

231. A bullet of mass m moving with a velocity v is fired into a large wooden block of mass M . If the bullet remains embedded in the wooden block, the velocity of the system will be: 2017/136 Med **B**

- A) $\frac{M}{M+m}$ B) $\frac{m}{M-m}$
C) $\frac{M}{M+m}$ D) $\frac{m}{M-m}$

Firstly wooden block of mass, M has zero initial momentum (P_i) because it is at rest but after fired (strike), bullet moves block along its velocity. Momentum of system (P_f) i.e. (bullet + wooden block) is conserved as $P_i = P_f$

232. Two railway trucks of masses m and $3m$ move towards each other in opposite directions with speeds $2v$ and v respectively. These trucks collide and stick together. What is the speed of the trucks after the collision? **B**

- A) $v/4$ B) $v/2$
C) v D) $5v/4$

233. Two objects of different masses falling freely from the same heights above the earth's surface will experience the same **B**

- A) Change in momentum per unit time.
B) Change in velocity per unit time.
C) Decrease in gravitational potential energy per unit time.
D) Increase in kinetic energy per unit time.

234. The symbol "g" represents the acceleration of free fall. Which of these statements is correct? 2012- 156 Eng: **B**

- (a) g is gravity
(b) g is the ratio weight/mass
(c) g is the weight of an object
(d) g is reduced by air resistance.

235. Bodies which fall freely under the action of gravity are an example of: 2011- 26 Eng: **A**

- (a) uniform acceleration (b) variable acceleration
(c) uniform velocity (d) average acceleration

236. Newton's second law of motion establishes a relationship between. **A**

2010-101 Med

- a. Force and acceleration b. Mass and force
c. Mass and velocity d. Acceleration and mass

237. Two blocks of masses 1.0 kg and 3.0 kg placed in contact are acted upon by a forces of 40 N. the acceleration of 1.0 Kg mass will be; **B**
 $a = \frac{F}{m_1+m_2} = \frac{40}{1+3} = \frac{40}{4} = 10 \text{ m/s}^2$
 2012-145 Med
 (a) 40 m/sec² (b) 10 m/sec²
 (c) 30 m/sec² (d) 50 m/sec²
-
238. The property of moving object by virtue of which it exerts force on the object that tries to stop it is: **A**
 2011-35 Med
 (a) Inertia of the body (b) quantity of motion of body
 (c) Acceleration of body (d) All of these
-
239. A mass accelerates uniformly when the resultant force acting on it is: **B**
 2016-186 Med
 (a) Zero
 (b) **Constant but not zero**
 (c) Increases uniformly with respect to time
 (d) Both (a) & (c)
-
240. A stone is thrown upward from the top CA = 59.4m high cliff with an upward velocity component of 19.6m/s. How long is stone in the air? **C**
 2016-93 Eng
 (a) 4.00 s (b) 5.00 s
 (c) **6.00 s** (d) 7.00 s
-
241. A science museum designs an experiment to show the fall of a feather in a vertical glass vacuum tube. The time of fall from rest is too close to 0.5 s. What length of tube is required? **A**
 2016-71 Eng
 (a) **1.3 m** (b) 2.5 m
 (c) 5.0 m (d) 10.0 m
-
242. Elastic collision involves **2010-21 Eng: D**
 (a) Loss of Energy
 (b) Gain of Energy
 (c) No relation b/w energy & elastic collision
 (d) No gain, no loss of energy
-
243. Which is a statement of the principle of conservation of momentum? **D**
 2014-135; Med
 (a) Momentum is the product of mass and velocity.
 (b) Momentum is conserved only in elastic collisions
 (c) Momentum is conserved by all bodies in a collision.
 (d) **Momentum is conserved providing no external forces act.**
-
244. Light and heavy bodies have equal kinetic energies. Which one has the greater momentum? **A**
 2009-87 Med
 a. Heavy body b. Light body
 c. Both have same momentum d. None of these
-
245. In order to change the momentum of an objective there must be; **A**
 2005-78 Med
 a. A force applied
 b. A change in time
 c. A change in distance
 d. A change in temperature
-
246. The rate of change of momentum of a body falling freely under gravity is equal to its: **D**
 2013-136 Med
 A) Impulse B) Kinetic energy
 C) Power D) weight
 $\Delta P/t = F \text{ (mg = } \Delta P/t) \left\{ w = \frac{\Delta P}{t} \right\}$
-
247. A 2N force acts on a mass. If the momentum of the mass changes by 120 **C**
 $F = \Delta p/t, T = \frac{\Delta p}{F} =$

Kg m/sec then the force acts for a time of;

2005-49 Med;

$$\frac{120}{2} = 60 \text{ Sec}$$

- (a) 8 Sec (b) 30 Sec
(c) 60 sec (d) 120 sec

248. The change in momentum of the body is equal to; 2011-Eng: C
(a) Force (b) Torque
(c) Impulse (d) Pressure

249. The motion of the rocket in space in according to law of conservation of; D
(a) Energy (b) Charge
(c) Mass (d) Momentum

250. A constant force, F is applied on a body of mass m for time interval, t b/c C
of this force, the velocity of body changes from V_i to V_f . Then the
changes in momentum during the interval Δt will be; 2005- 24
Med

- (a) $-m (v_f^2 - V_i^2)$ (b) $\Delta t/ma$
(c) $\frac{m(v_f - v_i)}{\Delta t}$; $\frac{\Delta p}{t}$ (d) $m a/t$

251. A particle of mass moving with a velocity, makes head on elastic D
collision with another particle of mass same with that, and initially at
rest. The velocity of the first particle after collision. 2009-124
Med

- (a) $2V$ (b) $-V$
(c) $+V$ (d) Zero

252. Newton second is the unit of: 2015-83 Eng: D
A) Work B) Angular Momentum
C) Power D) Linear momentum

253. Conservation of linear momentum is equivalent to:
2015-19 Med
A) Newton's 1st law of motion
B) Newton's 2nd law of motion
C) Newton's 3rd law of motion
D) None of the above

254. If P is momentum of an object of mass m, than expression P^2/m has same B
unit as; 2015-18 Med
A) Acceleration B) Energy
C) Force D) Impulse

255. A particle of mass m has momentum P, its K.E will be: D
2015-37 Med
A) mP B) P^2m
C) P^2/m D) $P^2/2m$

A rifle of mass M is initially at rest but free to recoil. It fires a bullet of
mass m and velocity v (relative to the ground). After firing, the velocity
of the rifle (relative to the ground) is: 2015-30 Eng

- A) $-mv$ B) $-Mv/m$
C) $-mv/M$ D) $-v$

C According to the law of
conservation of
momentum; Initial
momentum is equal to the
final

Momentum.i.e
 $P_i = P_f$. Thus; if Initial
momentum is equal to
zero than final momentum
must be

equal to zero; So,
 $P_f = mv + Mv = 0$, $V = -mv/M$
MS

256. Two objects, P and Q have the same momentum. Q has more kinetic B
energy than P if it: 2016-195Med

$$P = \sqrt{2mK.E}$$

- (a) Weighs more than P
(b) Is moving faster than P
 (c) Weighs same as P
 (d) Is moving slower than P

257. A 2.5kg stone is released from rest and falls towards Earth after 4.0s, the magnitude of its momentum is: **A**

2016-171 Eng

- (a) 98 kg .m/s (b) 78 kg . m/s
 (c) 39 kg .m/s

258. Two bodies of unequal mass, placed at rest on a frictionless surface, are acted on by equal horizontal forces for equal times. Just after these forces are removed, the body of greater mass will have: **B**

2016-161 Eng

- (a) Greater acceleration
(b) Smaller momentum
 (c) Greater momentum
 (d) Same momentum as other body (d) (0)

3.4 Projectile Motion

259. The range of projectile is the same for two angles which are mutually; **C**

2017-med

- A) Perpendicular B) Supplementary
 C) Complementary D) 270°

260. A cone is 9 cm high and has a vertical angle of 60°, then the diameter of its base is: **D**

2017-Eng

- A) $3\sqrt{3}$ B) $6\sqrt{3}$
 C) $9\sqrt{3}$ D) $18\sqrt{3}$

if you are given the height and the vertical angle formed at the cone apex, then multiply the height of the cone with the tangent of angle to get radius and multiply it with 2 to get diameter.

261. A ball is projected upwards. Its acceleration at the highest point is: **C**

2017-Eng

- A. Zero
 B. Directed upwards
 C. Directed downward
 D. Can't be predicted

262. On a planet, a vertically-launched projectile takes 12.5 s to return to its starting position. The projectile gains a maximum height of 170 m. The planet does not have an atmosphere. What is the acceleration of free fall on this planet? **B**

2017-Eng

- a) 2.2 m s^{-2} b) 8.7 m s^{-2}
 c) 27 m s^{-2} d) 54 m s^{-2}

$$s = vit + \frac{1}{2} at^2 \rightarrow a = \frac{(s-vit)^2}{t^2} \\ \rightarrow a = \frac{(170-0 \times 6.25)^2}{6.25^2} = 8.7 \text{ ms}^{-2}$$

263. A stone is projected vertically upwards from ground at an initial speed of 15 m/s. Air resistance is negligible. What is maximum height reached by stone? **B**

2018-Med

- A) 0.76 m B) 11 m
 C) 23 m D) 110 m

$$2gh = v^2 - v_i^2 \\ \Rightarrow h = \frac{v^2}{2g} = \frac{(15)^2}{2 \times 9.8} = 11 \text{ m}$$

264. A basketball is thrown upward along a parabolic path. What is the ball's acceleration while moving upward? **C**

2018-Med

- A) g, upward B) $\frac{1}{2} g$, upward
 C) g, downward D) g, upward.

265. A ball is just allowed to fall from the window of a moving train, it will hit the ground following. **D**

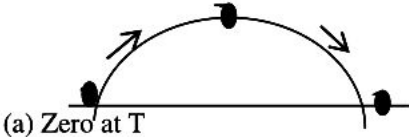
2005- 67 Med:

- a) Circular path (b) Hyperbolic
 (c) Straight line path (d) Parabolic path

266. At maximum height the velocity of projectile is; **2012-78Med** **B** B/c at Max height $V_y = 0$ & $V_x = V_o \cos \theta$
 (a) Zero (b) Minimum
 (c) Maximum (d) In b/w min & max
-
267. A projectile is launched at 45° to the horizontal with initial K. Energy, E. Assuming air resistance to be negligible, what will be the kinetic energy of the projectile when it reaches its highest point? **2012-193 Eng; 2014-136; Med** **B** Initial K.E = E, **K.E At highest point** $= \frac{1}{2} m v^2 \cos^2 \theta = (E) \cos^2 45^\circ$, $E \times (0.7)^2 = .49E = .50E$
 (a) $0.71E$ (b) $0.50E$
 (c) $0.87E$ (d) E
-
268. A projectile is throw horizontally from a 490m high diff with velocity of 10m/s, the time taken by projectile to reach to reach the ground is..... **2007-41 Med** **D** $t = \sqrt{2h/g} = \sqrt{2(490/9.8)} = \sqrt{100} = 10, 5:$
 (a) 2.5 sec (b) 7.5 sec
 (c) 5.0 sec (d) 10 sec
-
269. The maximum height, H attained by a projectile projected with initial velocity $v = v_0$ is given by; **2008-88 Med:** **B**
 (a) $H = V^2 \cos^2 \theta / 2g$ (b) $H = V^2 \sin^2 \theta / 2g$
 (c) $H = V^2 \cos^2 \theta / g$ (d) $H = V^2 \cos^2 \theta / g$
-
270. The horizontal range of the projector is; **2009-30** **D** **Med:**
 (a) $R = \frac{v_o^2}{g} \sin \theta \cos \theta$ (b) $R = \frac{v_1^2}{2g} \sin \theta$
 (c) $R = \frac{v^2}{g} \cos \theta (2\theta)$ (d) $R = \frac{v_1^2}{g} \sin 2\theta$
-
271. The range of proejctile is the same for two angles which are mutually **C** When Angles θ & $(90 - \theta)$ are mutually complementary, Ranges for angles 30° & 60° or 20° & 70° etc. are same
 (a) Orthogonal (b) Supplementary
 (c) Complementary (d) Sum is 45°
-
272. A bomber drops a bomb, when it is vertically above the target. It misses the target b/c of: **2011-32 Med:** **D**
 (a) Vertical component of the velocity of bomber
 (b) force of gravity
 (c) Acceleration of bomber
 (d) Horizontal component of the velocity of bomber
-
273. To improve the jumping record a long jumper should jump at an angle; **2010-22 Med** **B**
 (a) 30° (b) 45°
 (c) 60° (d) 90°
-
274. The span of broad jump depends upon; **2010-49 Eng:** **C** $R = \frac{v_o^2 \sin 2\theta}{g} = R_{\max} = \frac{v_o^2}{g} [\theta = 45^\circ]$
 (a) Mass of jumper
 (b) vision of jumper
 (c) Angle of projection of jumper
 (d) Height of jumped
-
275. A hunter aiming a bird in tree should aim; **2012-65Med** **A**
 (a) A little above the bird
 (b) A little belo
 (c) Exactly at the bird
 (d) Very high
-
276. A person throws a ball vertically upward while standing in a train moving with uniform velocity. The ball will fall. **2007-148, 2011-29 Eng:** **A**
 (a) In his hand (b) Behind him
 (c) In from of him (d) Beside him
-
277. A man throws a ball vertically upward in a compartment of an **C**

"accelerated" train. The ball will fall 2011-28 Med

- (a) In front of him (b) In his hand
(c) Behind him (d) beside him

278. A missile is fired with a speed of 98 m/sec at 30° with horizontal. The missile is airborne for 2011-33 Med A $T = \frac{2V\theta \sin\theta}{g} = \frac{2 \times 98 \times \sin 30^\circ}{9.8} = \frac{2 \times 98 \times 0.5}{9.8} = 10,$
- (a) 10 sec (b) 20 sec
(c) 30 sec (d) 40 sec
-
279. In the absence of air resistance, a stone is thrown from P and follows a parabolic path in which the highest point reached is "T". The point reaches point Q just before landing. The vertical component of acceleration of stone is 2013-08 Eng: d The vertical component of acceleration is "g" which is same during the projectile motion.
- 
- (a) Zero at T
(b) larger at T than at Q
(c) Larger at Q than at T
(d) The same at Q as at T
-
280. At what angle should a projectile be fired in order for its range to be at maximum? 2014-199;Eng: B
- (a) 30° (b) 45°
(c) 90° (d) 60°
-
281. A shot is fired at an angle of 60° to the horizontal with kinetic energy E. If air resistance is ignored, the kinetic energy at the top of the trajectory is: 2014-194;Med C
- (a) Zero (b) E/8
(c) E/4 (d) E/2
-
282. A basketball is thrown upward along a parabolic path. What is the ball's acceleration at its highest point? 2014-43;Med A
- (a) 0 (b) $1/2g$, horizontally
(c) g, upward (d) g, downward
-
283. When an object slides at constant speed down an inclined plane, the coefficient of friction may be approximately 2005- Med A
- (a) $\sin \theta$ (b) $\cos \theta$
(c) $\tan \theta$ (d) $\cot \theta$
-
284. When a body moves against the force of friction on a horizontal plane, the work done by the body is: 2010-80 Med A
- (a) Negative (b) Positive
(c) Zero (d) Max & positive
-
285. A helicopter of mass 3.0×10^3 Kg rises vertically with a constant speed of 2m/s, what resultant force acts on the helicopter? 2015-37 Eng A As the magnitude and direction of velocity is constant hence net force is equal to zero.
- (A) Zero (B) 3×10^4 N downwards
(C) 4.5N upwards (D) 7.5×10^4 N upwards
-
286. The velocity of projectile equal to its initial velocity added to: 2015-37 Eng A
- (A) A constant horizontal velocity
(B) A constant vertical velocity
(C) A constantly increasing horizontally
(D) A constantly increasing downward vertically

287. Two projectiles are in flight at the same time. The acceleration of one relative to other **2015-28 Med** **D**
 A) Always 9.8 m/s^2
 B) Can be horizontal
 C) Can be as large as 19.8 m/s^2
 D) Is zero
-
288. A stone thrown horizontally from the top of a tall building follows a path that is: **2015-119 Eng** **D**
 A) Circular
 B) Made of two straight line segments
 C) Hyperbolic
 D) Parabolic
-
289. Two projectiles are in flight at the same time. The acceleration of one relative to the other: **2016-11 Med** **D** **Individually it is always 9.8 m/s^2 and acceleration of one relative to the other is zero.**
 (a) Is always 9.8 m/s^2
 (b) Can be as large as 19.8 m/s^2
 (c) Can be horizontal
 (d) Is zero

CHAPTER-4: WORK & ENERGY

4.1 Work & Power;

290. When a force retards the motion of a body, the work done is: **2017-Eng** **B**
 A. Zero
 B. Negative
 C. Positive
 D. +ve or -ve depending upon magnitude of force and displacement
-
291. The product of pressure and volume has the same SI base units as; **2017-Eng** **A**
 A. Energy
 B. Force
 C. Power
 D. Heat Capacity
-
292. When a body moves against the force of friction on a horizontal plane, the work done by the body is; **2017-Eng** **A**
 A) negative
 B) positive
 C) zero
 D) max and positive
-
293. An engine pumps out 40 kg of water in second. The water comes out of vertically upward with a velocity of 3 ms the power of engine in kilowatt is; **2018-med** **A** $P = FV = mgV = 40 \times 10 \times 3 = 1200 = 1.2 \text{ kW}$
 A. 1.2 kW
 B. 12 kW
 C. 120 kW
 D. 1200 kW
-
294. Two boys weighting in the ratio 4:5 goes up stair taking time in the ratio 5:4. The ratio of their power is; **2018-med** **B** $P_1/P_2 = \frac{m_1gh/t_1}{m_2gh/t_2} = \frac{m_1/t_1}{m_2/t_2} = \frac{4/5}{5/4} = \frac{4}{5} \times \frac{4}{5} = 16/25$
 A. 1
 B. 16/25
 C. 25/16
 D. 4/5
-
295. A man has a mass of 80 kg. He ties himself to one end of a rope which passes over a single fixed pulley. He pulls on the other end of the rope to lift himself up at an average speed of 50 cm/s. What is the average useful power at which he is **B** $P = W/t = F.S/t = F.v = mg.v = 80 \times 9.8 \times 0.5 = 0.392 \text{ kW} = 0.39 \text{ kW}$

working? **2018-med**

- a) 40 W b) 0.39 kW
c) 4.0 kW D) 39 kW

- 296.** A steam turbine is used to drive a generator. The input power to the turbine is P_1 and the output power is P_o , the power loss in the turbine is P_a shown below. What is the efficiency of the turbine? **2018-med** **D**
- A) $\frac{P_1}{P_o}$ B) $\frac{P_1}{P_o + P_a}$
C) $\frac{P_o}{P_1}$ D) $\frac{P_o}{P_1 + P_a}$
-
- 297.** The total energy input E_{in} in a process is partly transferred to useful energy output U , and partly to energy that is wasted W . what is the efficiency of the process? **2018-med** **C**
- A) $(U/W) \times 100\%$ B) $(W/E_{in}) \times 100\%$
C) $U/E_{in} \times 100\%$ D) $(U+W)/E_{in} \times 100\%$
-
- 298.** A man carries a 1 Kg body 10m horizontally on a level ground. The work done by the man is; **2008-103 Med** **C**
- (a) 10J (b) 1 J
(c) 0 J (d) 5J
- As force, F he exerts on body and the displacement \vec{s} are mutually Perpendicular, So $\cos 90^\circ = 0$ work = $FS \cos \theta = 0$
-
- 299.** A 2 kg object is moving at $3^m/s$. A 10 N force is applied in the direction of motion & then removed after the object has moved 5m. The work done by the force is. **2005-64 Med** **A**
- (a) 50J (b) 40 J
(c) 110 J (d) 100J
- $F = 10N, S = 5m, W = FS = 5 \times 10 = 50 J$
-
- 300.** If work is done at a rate of 240 watt x min by a machine. Its power is; **A**
- (a) 240 watt (b) 14400 watt
(c) 4 watt (d) 120 watt
- $Power = \frac{work}{time} = \frac{240 \text{ watt} \times min}{60} = \frac{240 \times 60}{60} = 240 \text{ watt}$
-
- 301.** The heat energy dissipated by 40 watt also in one hour is **C**
- (a) 1440 J (b) 14400 J
(c) 144000 J (d) 1440,000 J
- 2010-138 Eng:** $W = P \times t$ $P = 40 \text{ watt } t = 60 \times 60 = 3600 \text{ sec}$
 $W = P \times t = 40 \times 3600 = 144000 \text{ Joule}$
-
- 302.** If a machine does 550 foot pound work in one second its power will be; **2010-27 Eng:** **B**
- (a) 550 watt (b) 746 watt
(c) 746 horse power (d) 550 horse power
- 1 horse power = 746 watt = 550 foot pound/sec
-
- 303.** A body of mass " m " moves at constant speed " v " for a distance " s " against a constant force, F . What is the power required to sustain this motion? **2013-33 Med** **A**
- (a) $F \cdot v$ (b) $\frac{1}{2} mv^2$
(c) $\frac{1}{2} FS$ (d) $F \cdot S$
-
- 304.** An object of mass 1 g is whirled in a horizontal circle of radius 0.5m at a constant speed of 2m/s. The work done on the object during one revolution is: **2016-178 Med** **A**
- (a) 0 (b) 1 J
(c) 2 J (d) 4 J
- Because Work done along a closed path is zero.

Energy, Escape Velocity & Conservation of Energy

- 305.** A parachutist is falling constant terminal velocity. Which **B** the parachute is falling with

statement is not correct? **2017-med**

- A. Gravitational potential energy is converted into kinetic energy of the air
- B. Gravitational potential energy is converted into kinetic energy of the parachutist.
- C. Gravitational potential energy is converted into thermal energy of the air.
- D. Gravitational potential energy is converted into thermal energy of the parachutist.

constant terminal velocity. Means its velocity remain the same. As $K.E = \frac{1}{2}mv^2$, It means K.E remain the same. Option B is correct. i. The gravitational potential energy is not converting into K.E of the Parachute

- | | | | |
|------|---|----------|---|
| 306. | If the momentum of a body decreases by 20% the percentage decrease in K.E will be: 2018-eng
A) 44% B) 36%
C) 28% D) 20% | B | |
| 307. | The gravitational field strength on the surface of the Earth is g . the gravitational field strength on the surface of a planet of thrice the radius and the same density is: 2018-eng
A) 4 g B) 6 g
C) 3 g D) $g/9$ | C | $g \propto \frac{1}{r^2}$ |
| 308. | Two bodies with kinetic energies in the ratio of 4:1 are moving with equal linear momentum. The ratio of their masses is: 2018-eng
A) 1:2 B) 1:1
C) 4:1 D) 1: 4 | D | |
| 309. | A 6.0-kg block is released from rest 80m above the ground. When it has fallen 60m its K.E is approximately: 2015-Med
A) 4800 J B) 3500 J
C) 1200 J D) 120 J | B | According to work energy-principle $W = K.E$,
$\Rightarrow mgh = K.E = 6 \times 9.8 \times 60 = 3528 \text{ J}$ i.e approximately 3500 J |
| 310. | A light and a heavy body have equal kinetic energies, which one have greater momentum? 2009-87 Med, 2015-105 Eng
A) The light body
B) The heavy body
C) Both have equal momentum
D) Not possible to say anything | B | The body which has greater mass has greater momentum because;
$K.E = \frac{P^2}{2m}$ & $P^2 = 2m(K.E)$
$\Rightarrow P = \sqrt{2m(K.E)}$ As; $P \propto \sqrt{m}$,
For the same K.E the body which has greater mass has greater momentum |
| 311. | Resistive forces are; 2010-161 Med
(a) Non conservative (b) conservative
(c) Both (d) None | A | |
| 312. | Which of the following is conservative field; 2007 Med
(a) Gravitational field (b) electric field
(c) Magnetic field (d) All | D | |
| 313. | A force of 6N acts horizontally on a stationary mass of 2 kg for 4 sec. The K.E in joule is: 2012-162 Med
(a) 12 (b) 144
(c) 72 (d) 48 | B | $K.E = \frac{P^2}{2m} = \frac{(F \times t)^2}{2m} = \frac{(6 \times 4)^2}{2 \times 2} = \frac{(24)^2}{4} = \frac{576}{4} = 144$ |
| 314. | The centripetal force acting on a body rotating in a circle of radius "r" is F. If the body moves in a circle of radius half of the initial value keeping other quantities const: than the %age change in the centripetal force is; 2012-113 Med
(a) 300% (b) 100%
(c) 200% (d) 200% | | |
| 315. | If the mass of the body is made three times and the velocity becomes double then the kinetic energy will increase: 2011-46 Eng | B | $K.E = \frac{1}{2}mv^2$: $K.E \propto m$ & $K.E \propto v^2$ |

- (a) 6 times (b) 12 times
(c) 24 times (d) 18 times

316. If the velocity of a body becomes half, the kinetic energy of the body will become: **2011-114 Med** **A** $K.E \propto v^2 \rightarrow K.E = \left(\frac{1}{2}\right)^2 = \frac{1}{4}$ (one fourth)
(a) On fourth (b) Double
(c) Four times (d) Half
317. A car of mass 1000 kg first travels forwards at 25m/s^2 and then backwards at 5m/s^{-1} . what is the change in the kinetic energy of the car? **2012-45 Eng:** **B** Forward K.E – Backward K.E
(a) 200kj (b) 300kj
(c) 325kj (d) 450 kj
318. Two bodies with masses m_1 and m_2 have equal kinetic energies. If M_1 and M_2 are their respective momentum then the rati on between M_1 and M_2 is: **2009-71 Med** **B** For two bodies having equal momentum: $= \frac{K.E_1}{K.E_2} = \frac{m_2}{m_1}$
Hints: For two bodies having equal K.E $= \frac{p_2}{p_1} = \sqrt{\frac{m_1}{m_2}}$
(a) $m^1 : m^2$ (b) $\sqrt{m_2}$
(c) $m_1^2 : m_2^2$ (d) $\sqrt{m_1} : \sqrt{m_2}$
319. If the speed at which a car is traveling is tripled, by what factor does its kinetic energy increase? **2013-192 Eng:** **D** $K.E \propto v^2$
(a) $\frac{1}{2}$ (b) 3
(c) 6 (d) 9
320. If the momentum of a body decreases by 20% the percentage decrease in K.E will be: **2013-83 Med** **B** $K.E = \frac{p^2}{2m} = \frac{p^2}{2m} (Pf - pi) = \frac{p^2}{2m} (0.8)^2 - (1)^2 = 0.36, = 36\%$
(a) 44% (b) 36%
(c) 28% (d) 20%
321. The gravitational potential energy per unit mass is called; **A**
(a) Gravitational potential
(b) Absolute potential energy
(c) Potential energy
(d) Potential hill
322. 14: The escape velocity from the earth gravitational field depends upon: **2011-42 Med:** **C**
(a) Rotation of earth (b) Mass of body
(c) Radius of earth (d) Mass of earth
323. The escape velocity for a ball of mass 0.25 kg will be: **B** **2010-31 Eng:**
(a) 44km sec^{-1} (b) 11km sec^{-1}
(c) 2.75m sec^{-1} (d) 0.25m sec^{-1}

CHAPTER-5:ROTATIONAL & CIRCULAR MOTION

5.1 Angular Motion, Velocity & Acceleration

324. The angular velocity of a second hand in watch is: **2017-Eng** **A**
a) $\pi/30$ B) 2π
C) π D) $60/\pi$

325. A fly wheel rotates at a constant speed of 3000 rpm(rev/min). C
The angle described by the shaft in radian in one second is:
2017-Eng
A. 2π B. 30π
C. 100π D. 3000π
-
326. The minute hand of a large clock is 3.0m long, what is its B
mean angular speed? **2018-Eng**
A) 1.4×10^{-4} rad/ s
B) 1.7×10^{-3} rad/ s
C) 5.2×10^{-4} rad/ s
D) 3.0×10^{-1} rad/ s
 $W = 2\pi \text{rad}/\text{time} = 2 \times 3.14 \text{ rad}/3600 \text{ sec} = 1.7 \times 10^{-4} \text{ rad/sec}$
-
327. The angular velocity for daily rotation of the earth is: **2015-18: Eng** C
 $\omega = \frac{\text{Distance covered}}{\text{time}} = \frac{2\pi \text{radian}}{24 \text{ hr}}, \omega$
(earth) = $\frac{\pi}{12} \text{ rad/sec}$
(a) $\frac{\pi}{3} \text{ radian hr}^{-1}$ (b) $\frac{\pi}{6} \text{ radian hr}^{-1}$
(c) $\frac{\pi}{12} \text{ radian hr}^{-1}$ (d) $12\pi \text{ radian hr}^{-1}$
-
328. The minute hand of large clock is 3.0 in long. What is its B
mean angular speed? **2013-18: Eng**
(a) $1.4 \times 10^{-4} \text{ rad/sec}$ (b) $1.7 \times 10^{-3} \text{ rad/sec}$
(c) $5.2 \times 10^{-3} \text{ rad/sec}$ (d) $3.0 \times 10^{-1} \text{ rad/sec}$
 $W = \frac{2\pi \text{ rad}}{\text{time}} = \frac{2 \times 3.14 \text{ rad}}{3600 \text{ sec}} = 1.7 \times 10^{-3} \text{ rad/sec}$
-
329. When a body moves in a circle the angle between its linear A
velocity and angular velocity is always: **2010 Med**
(a) 0° (b) 180°
(c) 360° (d) 90°
-
330. A wheel starts from rest and has an angular acceleration of D
 4.0 rad/s^2 . When it has made 10 rev its angular velocity is:
2016-142 Med
(a) 16 rad/s (b) 22 rad/s
(c) 32 rad/s (d) 250 rad/s
Equation of motion
 $\omega_f - \omega_i = 2\alpha\theta$ Thus; $\omega_f = \sqrt{2\alpha\theta}$ As $\theta = 10 \text{ rev}$
As; $1 \text{ rev} = 2\pi \text{ rad}$ So, $10 \text{ rev} = 20\pi \text{ rad} = 20 \times 3.14 \text{ rad} = 63.2 \text{ rad}$
 $\omega_f = \sqrt{2 \times 4 \times 63.2} = 22 \text{ rad/s}$
-
331. Angle that a body traverses at the centre of a circle in two B
turns is: **2016-164 Med**
(a) $4\pi \text{ Rads}$ (b) 720°
(c) 12.6 Rads (d) All of the above
 $4\pi \text{ Rads} = 4 \times 3.14 \text{ Rads} = 12.6 \text{ Rads}$
-
332. A child, riding on a large merry-go-round, travels a distance of 3000m in a circle of diameter 40m. the total angle through D
which she revolves is: **2016-196 Med**
(a) 50 rad (b) 75 rad
(c) 150 rad (d) 314 rad
 $s = r\theta$, As $r = d/2 = 40/2 = 20$ & $s = 3000$
 $\theta = s/r = 3000/20 = 150 \text{ rad}$
-
333. The angular speed of the minute hand of a watch is: **2016-171 Eng** D
(a) $(60/\pi) \text{ m/s}$ (b) $(1800/\pi) \text{ m/s}$
(c) $(\pi) \text{ m/s}$ (d) $(\pi/1800) \text{ m/s}$

Centripetal Force, acceleration

334. A centripetal force acts on a body moving with angular speed ω . B
If the angular speed is tripled, then the magnitude of centripetal force becomes;
2017-Eng
A. $8F$ B. $9F$
C. $3F$ D. $4F$

335. The unit of gravitational potential is: **2017-Eng** **B**
 A. Joule. B. Joule / kilogram
 C. Joule Kilogram D. Kilogram
-
336. A circular disc of mass M and radius R is rotating about its axis with uniform speed v . Its kinetic energy is: **2017-med** **B**
 A. Mv^2 B. $\frac{1}{2} Mv^2$
 C. $\frac{1}{2} Mv^2$ D. $\frac{1}{8} Mv^2$
-
337. An object travels at constant speed around a circle of radius 1.0 m in 1.0 s . What is the magnitude of its acceleration? **2018-eng** **D**
 A) Zero B) 1.0 ms^{-2}
 C) $2\pi\text{ ms}^{-2}$ D) $4\pi^2\text{ ms}^{-2}$
-
338. A particle is moving in a circle of radius r with constant angular speed ω . Its acceleration, directed towards the center of the circle is: **2008-48: Med** **C** Centripetal acceleration is given by : $a_R = v^2/r$, $\omega = \frac{v}{r}$
 (a) $\frac{\omega}{r}$ (b) $\frac{\omega^2}{r}$
 (c) $\omega^2 r$ (d) ωr^2
-
339. The vector form of centripetal force is; **2007-105 Med:** **C**
 (a) $\vec{F}_C = \frac{mv^2}{r}$ (b) $\vec{F}_C = \frac{mv^2}{r} \vec{r}$
 (c) $\vec{F}_C = \frac{mv^2}{r^2} \vec{r}$ (d) $\vec{F}_C = \frac{mv^2}{r^2} \hat{r}$
-
340. The centripetal acceleration of a car traveling at constant speed around a frictionless circular racetrack: **2013-155 Eng:** **B**
 (a) Is zero
 (b) Has constant magnitude but varying direction
 (c) Has constant direction but varying magnitude
 (d) Has varying magnitude and direction
-
341. Which of the following type of force can do no work? **2010-30 Eng:** **D**
 (a) Elastic force (b) Frictional force
 (c) Gravitational force (d) Centripetal force
-
342. A body is moving in a circle of radius (r) with a variable speed, the acceleration of the body is: **2015-29Med** **A** When a body moves in a circular path then its speed is constant but direction is changing due to which acceleration is produced and this acceleration is called Centripetal acceleration.
 A) Centripetal acceleration B) Tangential acceleration
 C) angular acceleration D) All of the above
-
343. An object moves in a circle. If the mass is tripled, the speed halved, and the radius unchanged, then the magnitude of the centripetal force must be multiplied by a factor of: **2016-163 Eng** **B**
 (a) $3/2$ (b) $3/4$
 (c) $9/4$ (d) 6
-
- Torque, Moment of Inertia & Angular Momentum**
344. The angular momentum of a wheel changes from $2L$ to $5L$ in 3 seconds. The magnitude of the torque acting on it is: **2017-eng** **D**
 a) $L/5$ B) $L/3$
 C) $L/2$ D) L
-
345. Angular momentum has the same units as: **2017-eng** **A**
 A. Impulse X distance
 B. Linear momentum x time

- C. Work x frequency
D. Power x time

346. For a body moving with constant speed in a horizontal circle, which of the following remains constant: **2017-eng** D
A. Velocity B. Centripetal force
C. Acceleration D. Kinetic Energy
347. If a gymnast sitting on a rotating stool with his arms outstretched, suddenly lowers his hands, **2017-eng** b
A. The angular velocity decrease
B. His moment of inertia decreases
C. The angular velocity stays constant
D. The angular momentum increases
348. A ring and a disc have same mass and same radius. If we denote the moment of inertia of disc by I_d and that of ring by I_r , then: **2017-eng** D
A. $I_r > I_d$ B. $I_r < I_d$
C. $I_r = I_d$ D. $I_r = 2I_d$
349. Moment of inertia of an object does not depend upon: **2017-Med** C
A. Mass of object B. Mass of distribution
C. Angular velocity D. Axis of rotation
350. A girl sitting on a spinning bar stool with her legs folded, suddenly put spreads them. Her angular velocity will: **2018-eng** A
A) Decrease B) Increase
C) Remain the same D) First increase and then decrease.
351. The rotational analogue of mass in linear motion is: **2015-38 Med** C
A) Torque B) Weight
C) Moment of inertia D) Angular momentum
352. When a mass is rotating in a plane about a fixed point, its angular momentum is directed along; **2015-149 Eng** C
A) Radius
B) Tangent to orbit
C) A line perpendicular to plane of rotation
D) None of the above.
353. If the mass of a moving body is doubled, the inertia of the body will be: **2013-188 Eng** D
(a) Half as great as its original value
(b) Four times as great as its original value
(c) Unchanged from its original value
(d) Twice as great as its original value
354. A particle, held by a string whose other end is attached to a fixed point C, moves in a circle on a horizontal frictionless surface. If string is cut, angular momentum of the particle about point: C. **2016-136 Med** C
(a) Increases (b) Decreases
(c) **Does not change** (d) Changes direction but not magnitude
355. The rotational inertia of a disk about its axis is $0.70 \text{ Kg} \cdot \text{m}^2$. When a 2.0-kg weight is added to its rim, 0.40m from the axis, the rotational inertia becomes: **2016-138 Med** C
(a) $0.38 \text{ Kg} \cdot \text{m}^2$ (b) $0.54 \text{ kg} \cdot \text{m}^2$
(c) **$0.86 \text{ kg} \cdot \text{m}^2$** (d) $1.0 \text{ kg} \cdot \text{m}^2$

Artificial Satellite, Orbital Velocity & Geo-Stationary Orbits

356. If a sphere is rolling, the ratio of its rotational energy to total energy is given by: **2017-eng** D
A. 7:10 B. 2:5
C. 01:7 D. 2:7
-
357. Two particles having masses M and m are moving in a circular path having radii R and r respectively. If their time periods are same, then the ratio of their angular velocity will be: **2017-eng** C
A) r/R B) R/r
C) 1 D) $\sqrt{\frac{R}{r}}$
-
358. The orbital velocity 'v' and the radius 'r' of the satellite are related by: **2017-eng** D
A. $v \propto r$ B. $v \propto 1/r^2$
C. $v \propto 1/r$ D. $v \propto 1/\sqrt{r}$
-
359. Planets travel in _____ paths. **2017-eng** C
A. Circular B. Parabolic
C. Elliptical D. Hyperbolic
-
360. Satellites revolve around the earth in a circular orbit. What is the relationship between the radii r of their orbits and the orbital speeds? **2018-eng** C
A) $V \propto r^2$ B) $V \propto r$
C) $V^2 \propto 1/r$ D) $V \propto 1/r$
-
361. The orbital speed of the satellite in an orbit depends: **2011-56Eng:** B
(a) $\sqrt{\frac{GM}{R_e}}$ (b) $\sqrt{\frac{GM_e}{R}}$
(c) $\sqrt{\frac{GM_e}{R^2}}$ (d) $\sqrt{\frac{GM_e}{h}}$
-
362. The orbital velocity of satellite in an orbit around the earth depends upon, **2008-Eng:** C $V = \sqrt{\frac{GM_e}{r}}$ & $V \propto \frac{1}{\sqrt{r}}$
(a) value of 'g' (b) radius of earth
(c) radius of the orbit (d) all of these
-
363. A Satellite is revolve around the earth in a circular orbit. What is the relationship between the radii r of their orbits and their speeds? **2013-179 Med** C $v \propto \frac{1}{\sqrt{r}}$ & $V^2 \propto 1/r$,
(a) $V \propto r^2$ (b) $V \propto r$
(c) $V^2 \propto 1/r$ (d) $V \propto 1/r^2$
-
364. On the ground the gravitational force on a satellite is W. What is the gravitational force on the satellite when at a height R/50, where R is the radius of the earth? **2013-05 Med** D $W = \frac{GMm}{R^2}$ & $W' = \frac{GMm}{(R + \frac{R}{50})^2} = 0.96W$,
(a) 1.04W (b) 1.02W
(c) 0.50W (d) 0.96W
-
365. The time period of communication satellites is **2009-94 Med** D
(a) 1 hours (b) 2 Hour
(c) 12 Hour (d) 24 hour

Real & Apparent Weight, Weightlessness in Satellite & Artificial Gravity

366. A man of mass 90 kg is standing in an elevator, whose cable broke suddenly. If the elevator falls freely the force exerted by the floor on the man is; **2017-Eng** A
 A.Zero B.90x9.8 N
 C.90N D.-90N
-
367. A body of mass 10 kg is hanging from a spring inside a lift. If the lift falls with an acceleration 10ms^{-2} then what will; **2017-med** A
 A.Zero B.2.5 kg
 C.5 kg D.10 kg
-
368. A body of mass 1kg is suspended from a balance in the elevator which is accelerating downward with an acceleration of 4ms^{-2} , the reading of the balance will be; **2018-Eng** A
 A)9.8N B)13.8N
 C)5.8N D)Zero
-
369. The paratrooper of mass 80 kg descends vertically at a constant velocity of 3 m/s taking the acceleration of free fall as 10ms^{-2} . Find out what is the net force acting on him? **2018-Eng** C
 A)Zero B)8.00 N upward
 C)8.00 N downward D)240 N downward
-
370. A man stands in a lift that is accelerating vertically downwards. Which statement describes the force exerted by the man on the floor? **2018-med**
 A. It is equal to the weight of man.
 B)It is greater than the force exerted by floor on the man.
 C.It is less than the force exerted by the floor on the man.
 D)It is less than the weight of man.
 As the velocity is constant hence acceleration is zero, so the net force on him is equal to zero, as the is coming with constant terminal velocity.
-
371. A satellite is orbiting close to the surface of the earth, its speed is; **2015-47 Med** B
 A) $\sqrt{2gR}$ B) \sqrt{Rg}
 C) $Rg/2$ D) Rg
 $F_c = F_g \text{ \& } \frac{mv^2}{R} = mg$ Thus; $v = \sqrt{Rg}$
-
372. A parachute of mass 80 kg descends vertically at a constant velocity of 3.0 m-s⁻¹ taking acceleration of free fall as 10m-s^{-1} , what is the net force acting on him? **2015-27Med** B
 A) 800 N upwards? B) Zero
 C) 240 N downwards D) 360 N downwards
 As the velocity is constant hence acceleration is zero, so the net force on him is equal to zero, as the is coming with constant terminal velocity.
-
373. A stone is rotated in vertical circle at the end of a string. When the stone is at the top of the circle then the tension in string is: **2011-49 Eng** C
 (a) Greater than the weight of stone
 (b) Equal to the weight of the stone
 (c) Less than the weight of the stone
 (d) None of the above
-
374. The apparent weight of a man in a an elevator moving up with acceleration 'a' is: **2012-189 Eng** C
 (a) mg (b) mg - ma
 (c) mg + ma (d) ma
 For upward Motion= Apparent Weight = mg + ma,
-
375. A body of mass 1 kg is suspended from a balance in the elevator which is accelerating downward with an acceleration of 4ms^{-2} reading of the balance will be. **2007-110 Med** C
 (a) 9.8 N (b) 13.8 N
 (c) 5.8 N (d) Zero
 For downward Motion= $w' = mg - ma = 1 \times 9.8 - 1 \times 4 = 9.8 - 4 = 5.8\text{ N}$
-
376. A 60 kg man in a lift which is moving upward with an acceleration of 4.9ms^{-2} will have apparent weight of: **2011-53 Eng** D
 (a) 588 N (b) 294 N
 For upward, $W' = mg + ma = (60 \times 9.8) + (60 \times 4.9) = 882\text{N}$

- (c) 58.8 N (d) 882 N

377. The pilot having a weight of 686N diving down with an acceleration of 9.8 m sec^{-2} its apparent weight is **2008, 2011, 2010-Med:** D
 (a) 343N (b) 1372 N
 (c) 686 N (d) **Zero**
378. An object in a satellite orbiting around the earth is weightless because: **2012-33Med** C
 (a) $g = 0$ (b) It is falling freely
 (c) No force acts on it (d) It is far away from the earth
379. Once the space shuttle is in orbit at a radius R from earth's centre, what force does the seat exert on the astronaut? **2005-38 Med:** B
 (a) mg (b) Zero Newton
 (c) m/g (d) Ng/R^2
380. The paratrooper of mass 80 kg descends vertically at a constant velocity of 3.0 m-s^{-1} . Taking the acceleration of free fall as 10 m-s^{-2} find out what is the net force acting on him? ($g = 10 \text{ m/s}^2$) **2009-36 Med:** A
 (a) **Zero** (b) 800N – Upward
 (c) 800N – downward (d) 240N – downward
381. You stand on a spring scale on the floor of an elevator. Of the following, the scale shows the highest reading when the elevator: **2016-141 Med** A
 (a) **Moves upward with increasing speed**
 (b) Moves upward with decreasing speed
 (c) Remains stationary
 (d) Moves downward with increasing speed

CHAPTER-6

FLUID DYNAMICS

Viscous Drag, Stokes Law & Terminal Velocity

382. A metal sphere of radius r is dropped into a tank of water. As it sink at speed v , it experience a drag force F given by $F = krv$, where k is a constant. What are the SI base units of k ? **2017-Med** C $F = krv \rightarrow k = F/rv = ma/rv = \text{kg m}^{-1} \text{s}^{-1}$
 A. $\text{kg m}^2 \text{s}^{-1}$ B. $\text{kg m}^2 \text{s}^{-2}$
 C. $\text{kg m}^{-1} \text{s}^{-1}$ D. kg m s^{-2}
383. Eight drops of water each radius 2mm are falling through air at a terminal velocity of 8cm/s. If they coalesce to form a single drop the terminal velocity of the combined drop will be: **2017-Med** D $V_t' = n^{2/3} V_t$, Here n = no. of drops.
 Thus $V_t' = 8^{2/3} V_t = 4 \times 8 = 32 \text{ cm/s}$
 A. 8 cm/s B. 16 cm/s
 C. 24 cm/s D. 32 cm/s
384. Rain drops falling from sky reach the ground with: **2009-54 Med** B Constant terminal velocity because drag force become equal to weight of the poilet after some time
 (a) Constant acceleration
 (b) Constant terminal velocity
 (c) Acceleration greater than g
 (d) Variable acceleration

385. When the drag force on the object becomes equal to its real weight then the; **2011-59 Eng:** C When the drag force on the object becomes equal to its real weight then the Object will fall with terminal velocity
- (a) Object will become stationary
(b) Object will fall freely
(c) Object will fall with terminal velocity
(d) Object will fall with critical velocity
-
386. The acceleration of falling body in fluid depends upon: **Med-2009** D Acceleration depends on v and v depends upon density, radius and viscosity.
- (a) Velocity (b) Viscosity of fluid
(c) Density of the body (d) All of the above

Equation of Continuity & Its Applications

387. The speed of a liquid leaving a tube depends on the change in pressure ΔP and the density ρ of the liquid. The speed is given by the equation $v = k \left(\frac{\Delta P}{\rho}\right)^{\Delta n}$, where k is a constant that has no units. What is the value of n ? **2018-Med** A
- a) $1/2$ b) 1
c) $3/2$ d) 2
-
388. A fluid is undergoing incompressible flow which represents that: **2016- Eng** C Incompressible means that liquid will not compress and density will remain constant
- (a) Pressure at a given point cannot change with time
(b) Velocity at given point cannot change with time
(c) **The density cannot change with time or location**
(d) The velocity must be the same everywhere
-
389. Water flows through a constriction in horizontal pipe as it enters constriction, water's: **med-2015** C It is simply Bernoulli's Application. Speed is inversely proportional to the pressure
- A) Speed increases and pressure remains constant
B) Speed increases and pressure increases
C) Speed increases and pressure decreases
D) Speed decreases and pressure increases
-
390. A larger water tank open at the top has small hole in the bottom when the water level is 30m above the bottom of the tank the speed of the water leaking from the hole is: **med-2015** B It can be solved by Torricelli Theorem; As speed is given by $v = \sqrt{2gh} = \sqrt{2 \times 10 \times 30} = 24.49$
- A) 2.5m/s B) 24 m/s
C) 444 m/s D) Cannot be calculated unless the area of the hole is given
-
391. The equation of continuity for fluid flow can be derived from the conservation of: **eng-2015** B From the conservation of mass, equation of continuity can be derived $m = m \rightarrow \rho V = \rho V \rightarrow \rho A x = \rho A x \rightarrow \rho A v t = \rho A v t \rightarrow A v = A v$
- A) Volume B) Mass
C) Energy D) Pressure
-
392. Bernoulli's equation can be derived from the conservation of: **med-2015** A Work = K.E + P.E, it is the first step in derivation of Bernoulli's equation, so Bernoulli's equation can be derived from the conservation of: energy.
- A) Energy B) Mass
C) Volume D) Pressure

Bernoulli's Equation & Its Applications

393. One end of cylindrical pipe has a radius of 1.5cm, water stream (density = $1.0 \times 10^3 \text{ kg/m}^3$) steadily out at 7.0m/s, the volume rate is: **Med-2015** A Volume rate $V/t = A v = (\pi r^2) \text{ velocity} = 3.14 \times (0.015)^2 \times 7 = 4.9 \times 10^{-3} \text{ m}^3/\text{s}$
- A) $4.9 \times 10^{-3} \text{ m}^3/\text{s}$ B) $4.9 \text{ m}^3/\text{s}$
C) $7.0 \text{ m}^3/\text{s}$ D) $49 \text{ m}^3/\text{s}$
-
394. An incompressible liquid flow along the pipe with area of cross section A and A_1 with A_2 with velocities V_1 and V_2 respectively. The ratio of the speeds V_1 / V_2 is: **med-2015** B It is equation of continuity; As; $A_1 V_1 = A_2 V_2$ and $V_1 / V_2 = A_2 / A_1$

- A) A_1 / A_2 B) A_2 / A_1
 C) $\sqrt{\frac{A_1}{A_2}}$ D) $\sqrt{\frac{A_2}{A_1}}$
-
395. A two meter high tank is full of water. A hole is made in the middle of the tank. The speed of efflux is; **2011- Med** C At middle of the tank, height of water is 1m so Efflux velocity = $V = \sqrt{2gh} = \sqrt{2 \times 9.8 \times 1} = \sqrt{19.36} = 4.4 \text{ m/s}$
 (a) 4.9 ms^{-1} (b) 9.8 ms^{-1}
 (c) 4.42 ms^{-1} (d) 3.75 ms
-
396. Water flows from a 6.0cm diameter pipe into 8.0cm diameter pipe. The speed in the 6.0cm pipe is 5.0m/s. the speed in the 8cm pipe is: **2016- Med** A $D_1=6 \text{ cm}$ and $D_2=8 \text{ cm}$ or $R_1=3 \text{ cm}$ and $R_2=4 \text{ cm}$ and $v_1=5 \text{ m/s}$ so by $A_1V_1=A_2V_2$ or $r_1^2v_1=r_2^2v_2 \rightarrow 3^2 \times 5 = 4^2 \times v_2 \rightarrow v_2 = 45/16 = 2.8 \text{ m/s}$
 (a) **2.8m/s** (b) 3.7 m/s
 (c) 6.6 m/s (d) 8.8 m/s
-
397. One end of a cylindrical pipe has a radius of 1.5cm. Water (density = $1.0 \times 10^3 \text{ kg/m}^3$) which mass is leaving the pipe is: **2016-172 Eng** B
 (a) 2.5 kg/s (b) **4.9 kg/s**
 (c) 48 kg/s (d) $7.0 \times 10^3 \text{ kg/s}$

CHAPTER-7:- OSCILLATIONS

Oscillation and simple harmonic motion

398. The kinetic energy and potential energy of a particle executing simple harmonic motion will be equal for the displacement (where x_0 is the amplitude); **2017-med** C K.E = P.E
 $\rightarrow \frac{1}{2} k (r^2 - x^2) = \frac{1}{2} kx^2$
 $\rightarrow (r^2 - x^2) = x^2$
 $\rightarrow r^2 = x^2 + x^2$
 $\rightarrow r^2 = 2x^2$
 $\rightarrow x^2 = r^2/2$
 $\rightarrow x = \sqrt{r^2/2}$
 $\rightarrow x = r/\sqrt{2}$
 $x = a/\sqrt{2}$ where x is displacement and a is amplitude
- A. $x \sqrt{\frac{2}{3}}$ B. $x/2$
 C. $x/\sqrt{2}$ D. $x\sqrt{2}$
-
399. If x-component of a vector is $\sqrt{3}$ and y-component is 1, then the angle made by the vector along x-axis is: **2017-med** A $\tan \theta = \text{x-component/y-component}$ the $\tan \theta = \sqrt{3}/1$. $\theta = \tan^{-1} \sqrt{3} = 60^\circ$
 A. 60° B. 30°
 C. 45° D. 90°
-
400. Two springs of spring constants k_1 and k_2 are stretched by the same force. They are stretched by x_1 and x_2 respectively, If $k_1 > k_2$ then: **2017-eng** C
 a) $x_1 = x_2$ B) $x_1 > x_2$
 C) $x_1 < x_2$ D) Depends on the length of the spring
-
401. A spring is stretched by 5 cm. Its potential energy is E. If it is stretched by 10 cm, its potential energy will be **2017-eng** B
 A) 2 B) 4E
 C) 8E D) 16E

402. A particle executes SHM along a straight line. Its amplitude is A. The potential energy of the particle is equal to the kinetic energy when the displacement of the particle from the mean POSITION IS ; **2017-med**
- A. Zero
B. $\pm A/2$
C. $\pm A/\sqrt{2}$
D. 2A
- C $K.E = P.E$
 $\rightarrow \frac{1}{2} k (r^2 - x^2) = \frac{1}{2} kx^2$
 $\rightarrow (r^2 - x^2) = x^2$
 $\rightarrow r^2 = x^2 + x^2$
 $\rightarrow r^2 = 2x^2$
 $\rightarrow x^2 = r^2/2$
 $\rightarrow x = \sqrt{r^2/2}$
 $\rightarrow x = r/\sqrt{2}$
 $x = a/\sqrt{2}$ where x is displacement and a is amplitude
-
403. In S.H.M, the fraction of kinetic energy to total energy when displacement is one-half of the Amplitude is **2017-med**
- A. 1/8
B. 1/2
C. 1/4
D. 3/4
- D $K.E = 1/2 k (x^2 - (x/2)^2)$
 $= K.E = 1/2 k (x^2 - x^2/4)$
 $= 1/2 k (3x^2/4) = 3kx^2/8$
 $= 3/4 (kx^2/2) = 3/4 T.E$
-
404. The time period of the simple pendulum is 2 second. If its length is increased by 4 times, then its period becomes; **2017-med**
- A. 16s
B. 12s
C. 8s
D. 4s
- D $T = 2\pi \sqrt{\frac{l}{g}}$
 $T' = 2\pi \sqrt{\frac{4l}{g}}$
 $= 2[2\pi \sqrt{\frac{l}{g}}] = 2T = 2 \times 2 = 4 \text{ sec}$
-
405. Two springs of spring constant k_1 and k_2 are arranged in parallel and a body of mass m is attached to it then calculate the time period of the system: **2018-med**
- A) $2\pi \sqrt{\frac{m}{k_1+k_2}}$
B) $2\pi \sqrt{\frac{2m}{k_1+k_2}}$
C) $2\pi \sqrt{\frac{mk_1k_2}{k_1+k_2}}$
D) $2\pi \sqrt{\frac{k_1+k_2}{m}}$
- a Spring arranged in parallel, $K_{eq} = k_1+k_2+k_3 \dots$
-
406. In SHM the acceleration of the particle is zero when its: **2018-med**
- A) Velocity is zero
B) Displacement is zero
C) Both velocity and displacement are zero
D) Both velocity and displacement are maximum
Hints: As $a \propto -x$ if $x=0$ then $a=0$
- B
-
407. A mass m is suspended from a spring of spring constant k. The angular frequency of oscillations of the spring is: **2018-med**
- A) k/m
B) $\sqrt{\frac{k}{m}}$
C) m/k
D) $\sqrt{\frac{m}{k}}$
- B
-
408. Which one of the following varies when an object executes simple harmonic motion? **2018-eng**
- A) Angular frequency
B) Total energy
C) Force
D) Amplitude
- C
-
409. If a hole is bored through the center of the earth and a pebble is dropped in it, then it will: **2018-eng**
- A) Stop at the center of the earth
B) Drop to the other side
C) Execute SHM
D) Fall with a constant velocity.
- C
-
410. A body in simple harmonic motion makes n complete oscillation in one second. The angular frequency of this
- C $f = \frac{\text{Number of cycle}}{\text{Seconds}} = \frac{2\pi n \text{ rad}}{s} = 2\pi \text{ rad-s}^{-1}$

motion is:

A) $\pi \text{ rad-s}^{-1}$

C) $2\pi \text{ rad-s}^{-1}$

2015- Eng

B) $1/\pi \text{ rad-s}^{-1}$

D) $\frac{n}{2\pi} \text{ rad-s}^{-1}$

Circular motion and simple harmonic motion

411. A particle performs simple harmonic motion of amplitude 0.02m and freq 2.5 Hz, what is its maximum speed?

Eng-2009-2015

A) 0.0008 ms^{-1}

C) 0.157 ms^{-1}

B) 0.125 ms^{-1}

D) 0.314 ms^{-1}

D Velocity is given by: $v = \omega \sqrt{r^2 - x^2}$, the speed is maximum when $x = 0$ so v becomes $v = \omega \sqrt{r^2} = \omega r = (2\pi f)r = 2 \times 3.14 \times 2.5 \times 0.02 = 0.314 \text{ ms}^{-1}$
NOTE: for maximum velocity $x=0$ and for zero velocity $x=r$

412. If the displacement of a particle executing S.H.M is given by $x = \frac{5}{n} \sin(20\pi f t)$ cms, its amplitude is: Eng-2015

A) $\frac{5}{n} \text{ m}$

C) $20\pi \text{ cms}$

B) $\frac{5}{n} \text{ cm}$

D) 100 cms

B Given; $x = \frac{5}{n} \sin(20\pi f t)$ and we know that; $x = x_0 \sin(\omega t) = x_0 \sin(2\pi f t)$
 Comparing both equations we get; $x_0 = \frac{5}{n} \text{ cm}$ where x_0 = amplitude

Simple pendulum and Hook's law

413. The total energy of the body executing S.H.M is E. The K.E when the displacement is half of the amplitude is: Eng-2015

A) $\frac{E}{4}$

B) $\frac{E}{4}$

C) $\frac{3E}{4}$

D) $\sqrt{\frac{3}{4}} E$

B K.E = $\frac{1}{2} k (x_0^2 - x^2)$
 When $x = x_0/2$ so $= \frac{1}{2} k (x_0^2 - (\frac{x_0}{2})^2) = \frac{1}{2} k (x_0^2 - \frac{x_0^2}{4}) = \frac{1}{2} k x_0^2 (1 - \frac{1}{4}) = \frac{1}{2} k x_0^2 (3/4)$
 We know that $\frac{1}{2} k x_0^2 = E$
 So K.E = $E \cdot \frac{3}{4} = \frac{3E}{4}$

414. At what place, the motion of the bob of simple pendulum will be the slowest? Med-2010

(a) At poles of earth

(b) At equator of earth

(c) Anywhere on the surface of earth

(d) None of these

B As earth is oval shape so at equator radius is more, g is low, time period will high and motion will be slowest.
 $\rightarrow r \propto 1/g$
 $\rightarrow T \propto 1/\text{motion}$

415. A simple pendulum is suspended on the roof of a lift when the lift is moving downward with an acceleration a ($a < g$), then its time period is given by $T = 2\pi \sqrt{\frac{l}{g}}$ where g is equal to; Eng-2015

A) g

C) $(g+a)$

B) $g-a$

D) g^2

B When lift is moving downward, the g decrease by an amount of a, so new g becomes $G' = g-a$

416. If a tunnel is bored through the centre of the earth and a stone is dropped into it then the: Med-2010

(a) Stone will stop at the centre of the earth

(b) Stone will move out from other side of the tunnel

(c) Stone will perform simple harmonic motion

(d) None of these

C The stone is attracted by centre of earth and it will reach to centre, but due to inertia it does not stop at centre but continues its motion but again it is attracted by centre of earth and so on the stone makes simple harmonic motion at the centre.

417. The period of simple pendulum double when: Med-2009

(a) Its length is double

(b) The mass of the bob is double

(c) Its length is made four times

(d) The mass and length of the pendulum is made two times

C We know that $T = 2\pi \sqrt{\frac{l}{g}}$ when length is made four times $T = 2\pi \sqrt{\frac{4l}{g}} = T = 2\pi(2) \sqrt{\frac{l}{g}} = (T = 2\pi \sqrt{\frac{l}{g}}) = 2T$

418. If the length of a simple pendulum is halved and mass is doubled then its time period. **Eng-2012** A
 (a) Increases by $\sqrt{2}$ (b) Remains constant
 (c) Cannot be predicted (d) Decreases by $\sqrt{2}$
 We know that $T = 2\pi\sqrt{\frac{l}{g}}$, so when $L=L/2$ and $m = 2m$ then $T = 2\pi\sqrt{\frac{2l}{g}} = \sqrt{2}(2\pi\sqrt{\frac{l}{g}}) = \sqrt{2}T$
-
419. While determining the expression for time period of simple pendulum, we keep the amplitude, **Med-2005** B
 (a) Large (b) Small
 (c) Maximum (d) Zero
 The amplitude is kept small because for small θ , $\sin \theta = \theta$
-
420. How much will be the length of a simple pendulum if its time period is one second **Med-2010** B
 (a) 2.5 m (b) 0.25 m
 (c) 25 m (d) 0.025 m
 We know that $T = 2\pi\sqrt{\frac{l}{g}}$, $L = \frac{T^2 g}{4\pi^2}$
 Putting $t=1$ and $g=9.8$ and $T=1$ so $L = \frac{T^2 g}{4\pi^2} = \frac{1^2 \times 9.8}{4 \times (3.14)^2} = \frac{9.8}{4 \times 9.8} = \frac{1}{4} = 0.25 \text{ m}$
-
421. The displacement 'x' of a particle at time 't' is given by $x = 10 \sin 4t$. the particle oscillates with period. **Med-2014** D
 (a) $\pi/10s$ (b) $\pi/5s$
 (c) $\pi/4s$ (d) $\pi/2s$
 We know that: $x = x_0 \sin(\omega t)$ $x_0 \sin(2\pi ft)$, given: $x = 10 \sin 4t$. comparing both of these, we get $2\pi f = 4 \rightarrow f = 4/2\pi = 2/\pi$ & $T = 1/f = \pi/2$
-
422. If a hole is bored through the center of the earth and a pebble is dropped in it. Then it will: **Med-2014** A
 (a) Execute SHM
 (b) Drop to the other side
 (c) Stop at the center of the earth
 (d) None of the above
 The stone is attracted by centre of earth and it will reach to centre, but due to inertia it does not stop at centre but continues its motion but again it is attracted by centre of earth and so on the stone makes simple harmonic motion at the centre.
-
423. The period of a simple pendulum can be increased by: **Eng-2014** B
 (a) Decreasing the length of the pendulum.
 (b) Increasing the length of the pendulum.
 (c) Increasing the mass of the bob.
 (d) Decreasing the mass of the bob.
 $T = 2\pi\sqrt{\frac{l}{g}}$, time period is directly proportional to underroot of l , so increasing length will increase the time period;
[NOTE:] time period is independent to mass
-
424. The total energy of a particle executing S.H.M. is: **Med-2016** D
 (a) Inversely proportional to square of amplitude
 (b) Directly proportional to the amplitude
 (c) Zero
 (d) Directly proportional to the square of amplitude
 We know that $E = \frac{1}{2}k x_0^2$ where x_0 is amplitude. so energy is directly proportional to the square of amplitude.
-
425. The time period of a simple pendulum is 2 seconds. If its length is increased by 4 times, then its period becomes: **Med-2016** D
 (a) 16 s (b) 12 s
 (c) 8 s (d) 4 s
 We know that $T = 2\pi\sqrt{\frac{l}{g}}$, if $L=4L$ then $T' = 2\pi\sqrt{\frac{4l}{g}} = (2)2\pi\sqrt{\frac{l}{g}} = (2)T$
 Putting $T=2$ then $T' = 2 \times 2 = 4s$
-
426. The kinetic energy and potential energy of a particle executing simple harmonic motion will be equal when displacement is: (Where 'a' is the amplitude) **Eng-2016** C
 (a) $a\sqrt{\frac{2}{3}}$ (b) $\frac{a}{2}$
 (c) $\frac{a}{\sqrt{2}}$ (d) $a\sqrt{2}$
 $P.E = \frac{1}{2}kx^2$, $K.E = \frac{1}{2}k(x_0^2 - x^2)$, according to conditions $P.E = K.E \rightarrow \frac{1}{2}kx^2 = \frac{1}{2}k(x_0^2 - x^2) \rightarrow x^2 = x_0^2 - x^2 \rightarrow x^2 + x^2 = x_0^2 \rightarrow 2x^2 = x_0^2 \rightarrow x^2 = \frac{x_0^2}{2}$ taking underroot
 $x = \frac{x_0}{\sqrt{2}} = \frac{a}{\sqrt{2}}$

427. A spring obeying Hook's law has an un stretched length of 50 mm and a spring constant of 400 Nm^{-1} . What is the tension in the spring when its overall length is 70mm?
Med-2013
(a) 8.0 N (b) 28 N
(c) 160 N (d) 400 N
428. A spring system executes simple harmonic motion. If a load is added to it then the time period of spring-mass system will be, Med -2012
(a) Increased (b) Decreased
(c) The same (d) Halved
429. A weight suspended from an ideal spring oscillates up and down with a period T. If the amplitude of the oscillation is doubled, the period will be: Med-2016
(a) T (b) 1
(c) 2T (d) T

A By Hook's law $F = K\Delta x$,
Here $\Delta x = 70\text{mm} - 50 \text{ mm} = 20 \text{ mm} = 0.02 \text{ cm}$ and $K = 400 \text{ Nm}^{-1}$. So $F = 400 \times 0.02 = 8\text{N}$.
NOTE; tension is simply a force.

A For mass spring system $T = 2\pi \sqrt{\frac{m}{k}}$, from equation time period is directly proportional to \sqrt{m} so increase in mass will increase the time period.
NOTE: time period of simple pendulum is independent to mass while that of mass spring system directly proportional to \sqrt{m} .

A We know that; $T = 2\pi \sqrt{\frac{m}{k}}$, the time period of SHM is independent of amplitude of oscillation.

Phase

430. The quantity which specified the displacement as well as the direction of motion in simple harmonic motion is the, Med-2011
(a) Phase angle (b) Angular frequency
(c) Path difference (d) None of these

A The angle $\theta = \omega t$ which specifies the displacement x and as well as the direction of motion of the point oscillating SHM is called phase.

Resonance

431.	The heating and cooking of food evenly by micro wave oven is an example of: Eng-2010 (a) Resonance (b) Specific heat (c) Damped oscillation (d) None of these	C	Radio, microwave oven and MRI are example of resonance
432.	MRI works on the principle of: Med-2012 (a) Beats (b) Interference (c) Resonance (d) Standing waves	A	Radio, microwave oven and MRI are example of resonance
433.	It is impossible for two particles, each executing simple harmonic motion, to remain in phase with each other if they have different: Eng-2016 (a) Masses (b) Periods (c) Amplitudes (d) Spring constants	C	To remain in phase for two particle, they must have same amplitude.

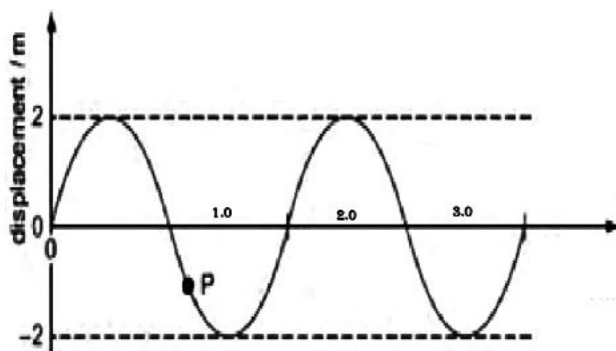
CHAPTER-8:- WAVES

Waves, its types & Characteristics:

434. It is impossible for two particles, each executing simple harmonic motion, to remain in phase with each other if they have different: 2017-Med
(a) Masses (b) Periods
(c) Amplitudes (d) Spring constants

B

435. A wave of amplitude 20 mm has intensity I. another wave of the same frequency but of amplitude 5 mm has intensity I_y . What is I_x/I_y ?
 2017-Med
 A) 2 B) 4
 C) 16 D) 256
- c As we know that; $I(\text{Intensity}) = \frac{\text{Energy}}{\text{Area} \cdot \text{time}}$
 So, $I \propto E$ and $E = \frac{1}{2} k x_0^2$ Thus $E \propto x^2$ So
 $I_x/I_y = x^2/y^2$. Thus $I_x/I_y = (20)^2/(5)^2 = 400/25 = 16$
-
436. In a stationary wave the distance between consecutive antinodes is 25cm. If the wave velocity is 300m/s, then the frequency of the wave will be: 2017-Med
 A) 150 Hz B) 300 Hz
 C) 600 Hz D) 750 Hz
- C In Stationary wave the distance b/w consecutive antinode is $L = \lambda/2$ so $\lambda = 2L = 2(25) = 50\text{cm}$
 But $100\text{cm} = 1\text{m}$ and $50\text{cm} = 50/100 = 0.5\text{m}$
 Now $v = f\lambda$ and $f = v/\lambda = 300/0.5 = 600\text{Hz}$
-
437. A Turning fork A produces 4 beats / second with another turning fork B of frequency 280 Hz. When fork A is loaded with a little wax, the beat frequency change to 2. The frequency of fork A before loading is: 2017-Med
 A. 292 Hz B. 284 Hz
 C. 290 Hz D. 288 Hz
- B
-
438. A man standing next to a stationary train hears sound of frequency 400 Hz emitted from the train's horn. The train then moves directly away from the man and sounds its horn when it has a speed of 50m/s. The speed of sound is 340m/s. What is the difference in frequency of the sound heard by the man on the two occasions? 2017-Eng
 A. 51 Hz B. 69 Hz
 C. 349 Hz D. 469 Hz
- A
-
439. 19. A sound has a speed of 330 m/s and a frequency of 50 Hz. What is a possible distance between two points on the wave, that have a phase difference of 60° ? 2017-Eng
 A) 0.03 m B) 1.1 m
 C) 2m D) 6.6 m
- B
-
440. Standing waves are produced in 10 m long stretched string. If the string vibrates in 5 segments and wave velocity is 20 ms, its frequency is: 2017-Med
 A. 2 Hz B. 4 Hz
 C. 5 Hz D. 10 Hz
- C
 $\lambda_n = 2L/n = 2 \times 10/5 = 4\text{m}$
 As $f = v/\lambda = 20/4 = 5\text{ Hz}$
-
441. A stationary sound wave has a series of nodes. The distance between the first and the sixth node is 30.0 cm. What is the wavelength of the sound wave? 2018-Med
 D) 12.0 cm A) 5.0 cm
 B) 6.0 cm d) 10.0 cm
- D
-
442. A transverse wave travels along a rope. The graph shows the variation of the displacement of the particles in the rope with distance along it at a particular instant. 2018-Med
- A



At which distance along the rope do the particles have maximum upwards velocity?

- A) 0.5 m B) 1.0 m
C) 1.5 m D) 2.0 m

- | | | | |
|------|--|---|--|
| 443. | Which one of the following is not a characteristic of stationary waves? 2018-Med
A) Half wavelength is, half the distance between the adjacent nodes
B) Amplitude is not the same
C) Phase is identical between two adjacent nodes
D) Energy of stationary waves travels outwards | D | |
| 444. | The energy of electromagnetic radiation depends on its: 2015-Eng
A) Frequency B) Wave length
C) Wave number D) All of the above | D | $E = hf$ and $f = c/\lambda$ and so energy depends upon wavelength, frequency and wave number. |
| 445. | The wave velocity in any medium depends upon, 2010-Med
(a) Elasticity (b) Density
(c) Homogeneity (d) All of the above | D | As $v = \sqrt{\frac{E}{\rho}}$, velocity depends upon density, elasticity and also on homogeneity. |
| 446. | Of the following properties of a wave, the one that is independent of the others is its: 2013-183 Med:
(a) Amplitude (b) Wavelength
(c) Speed (d) Frequency | A | $v = f \lambda$ v, f & wavelength depend each other.. The amplitude is the independent parameter. |
| 447. | Which one of the following properties of light does not change with the nature of medium? 2011-Eng:
(a) Frequency of light (b) Wavelength of light
(c) Speed of light (d) All of these | A | Frequency of light is independent to medium it passes and does not change with the medium through which it passes. |
| 448. | When sound waves move from one medium to other medium the quantity which remains unchanged is: 2010-Med
(a) Wavelength (b) Frequency
(c) Speed (d) Intensity | B | Frequency of light is independent to medium it passes and does not change with the medium through which it passes. |
| 449. | Which one of the following properties of electromagnetic waves do not change in vacuum? 2012-Med:
(a) Speed (b) Wavelength
(c) Frequency (d) All of the above | D | All of these |
| 450. | If the speed of the moving particle increases the wavelength associated with it will. Med-2016
(a) Increase (b) Decrease
(c) Not change (d) None of these | A | $V = f\lambda$ so if v increase the wavelength will also increases |
| 451. | The frequency of light having wavelength 3×10^{-3} cm is 2011-Med
(a) 1×10^6 (b) 3.0×10^7 | D | $v = 3 \times 10^8$ cm or 3×10^{-5} c
m so by $v = f\lambda \rightarrow f = v/\lambda = \frac{3 \times 10^8}{3 \times 10^{-5}} = 1 \times 10^{13}$ |

	(c) 1×10^{10}	(d) 1×10^{13}		
452.	The wavelength of sound made from a tuning fork of frequency 330 Hz is nearly: 2009-Med	D	$V = f\lambda$ so $\lambda = v/f = \frac{332}{330} = 1\text{m}$	
	(a) 330 m (b) 100 m (c) 10m (d) 1m			
453.	The wavelength of a wave traveling with speed v and having frequency f is: 2012-Eng, 2008-Med	A	$V = f\lambda$ so $\lambda = v/f$	
	(a) $\lambda = \frac{v}{f}$ (b) $\lambda = vf$ (c) $\lambda = \frac{f}{v}$ (d) None of the above			
454.	What is the relationship between the intensity and the amplitude of a wave? 2012-Eng	C	Intensity is directly proportional to the square to the amplitude $I \propto A^2$ or I/A^2 constant.	
	(a) $\frac{I}{a} = \text{constant}$ (b) $Iu^2 = \text{constant}$ (c) $\frac{I}{a^2} = \text{constant}$ (d) $Ia = \text{constant}$			
455.	The intensity of a wave is: 2012-Med	B	Intensity is directly proportional to the square to the amplitude $I \propto A^2$ or I/A^2 constant.	
	(a) Directly proportional to amplitude (b) Directly proportional to (amplitude) ² (c) Inversely proportional to amplitude (d) Inversely proportional to (amplitude) ²			
456.	What is the relationship between the intensity 'I' and the amplitude 'a' of a wave? 2014-Med	D	Intensity is directly proportional to the square to the amplitude $I \propto A^2$ or I/A^2 constant.	
	(a) $Ia = \text{constant}$ (b) $Ia^2 = \text{constant}$ (c) $I/a = \text{constant}$ (d) $I/a^2 = \text{constant}$			
457.	In vacuum all electromagnetic waves have the same: 2014-Med	A	All electromagnetic waves have same speed in in vacuum.	
	(a) Speed (b) Energy (c) Frequency (d) wavelength			
458.	The waves which do not require any medium for their propagation are called: 2014-Med	d	Electromagnetic wave does not require medium for the propagation while mechanical waves need so.	
	(a) Mechanical waves (b) Sound waves (c) Tidal waves (d) Electromagnetic waves			
459.	The frequency of green light is 6×10^{14} Hz. Its wave length is: 2015-Med	B	$v = f\lambda \rightarrow \lambda = v/f = \frac{3 \times 10^8}{6 \times 10^{14}} = 0.5 \times 10^{-6} = 500 \times 10^{-3} \times 10^{-6} = 500 \times 10^{-9} = 500 \text{ nm}$	
	A) 50 nm B) 500 nm C) 5000 nm D) 100 nm			
460.	If the amplitude of wave at a distance r from a point source is A then amplitude at a distance $2r$ will be : 2015-eng	A	Amplitude is directly proportional to distance.	
	A) $2A$ B) A C) $A/2$ D) $A/4$			
461.	A science museum designs an experiment to show the fall of a feather in a vertical glass vacuum tube. The time of fall from test is too close to 0.5 s. What length of tube is required? 2015-Med	A	$S = vit + \frac{1}{2}at^2$ as $vi=0$ so $s = \frac{1}{2}gt^2 \rightarrow s = \frac{1}{2}gt^2 = \frac{1}{2} \times 10 \times (0.5)^2 = 1.25 = 1.3 \text{ m}$	
	A) 1.3 m B) 2.5 m C) 5.0 m D) 10.0 m			

462.	The ratio between the velocity of sound in air at 4 atm and that at 3. atm pressure would be: 2015-Med (A) 1 : 1 (B) 4 : 1 (C) 1 : 4 (D) 3 : 1	A	Speed of Sound is independent of pressure. So ratio will same
463.	What will be the effect on the speed of transverse waves on a string if the tension in the string remain constant but the diameter of the string becomes double? (a) Remains constant (b) Becomes Half (c) becomes double (d) Becomes four times	B	
464.	When the light enters from air to glass, it suffers a change in the, 2011- Med (a) wavelength of light (b) speed of light (c) frequency of light (d) wavelength and speed of light	d	When the light enters from air to glass, it suffers a change in the wavlngh and speed byt frequency remains constant.
465.	Speed of sound is independent of, 2007-Med (a) Density of medium (b) "T" of medium (c) "P" of medium (d) Elasticity of medium	C	$V = \sqrt{E/\rho}$, Speed of sound depends on elasticity & density and independent to pressure.
466.	Through which medium the sound waves travel faster? 2010-Eng: (a) O ₂ (b) CO ₂ (c) H ₂ (d) N ₂	C	$V = \sqrt{E/\rho}$, Speed of sound depends on elasticity & density as hydrogen have less mass & less density so in it will have high speed of medium.
467.	If the speed of sound in air is 340 m/sec. what is the wavelength of a 1-KHz sound wave med-2013 (a) 3.40m (b) 2.94m (c) 0.340m (d) 0.294m	C	we know that $v=f\lambda$, here $f = 1\text{kHz} = 1000\text{ Hz}$ so by formula $\lambda = v/f = 340/1000 = 0.340$
468.	When the pressure in a medium increases, the speed of sound in that medium: eng-2013 (a) Increases (b) Decreases (c) Does not change (d) Sometimes increases & sometime decreases	C	Speed of Sound is independent of pressure.
469.	What is the optimum difference in phase for maximum destructive interference between two waves of the same frequency? 2013- Eng (a) 180° (b) 90° (c) 270° (d) 360°	A	What is the optimum difference in phase for maximum destructive interference between two waves of the same frequency is 180° and for constructive is 0°
Beats, phase change & Stationary wave			
470.	In a vibrating cord the point where the particles are stationary is called: 2014-82 Med: (a) Crest (b) Anti-node (c) Node (d) Trough	C	A node is a point along the stading wave where the wave has minimum amplitude and points are stationary.
471.	The phase change of 180° is equal to path difference: 2011- 83 Eng: (a) Zero (b) Half the wavelength (c) Double of wavelength (d) Quarter the wavelength	B	$\lambda = 360^\circ \text{ \& } 180^\circ = \frac{\lambda}{2}$
472.	Two waves of the same frequency and amplitude, traveling in opposite direction along the same path will form, 2008-15 Med: (a) Electromagnetic waves (b) Micro waves (c) Standing waves (d) Sound waves	C	Standing waves are formed when Two waves of the same frequency and amplitude, traveling in opposite direction interferes.
473.	The number of loops in stationary waves depends upon: 2011-75 Med: (a) Velocity of waves (b) Wavelength of waves (c) Nature of the medium (d) Frequency of waves	D	Number of loops in stationary waves depend upon the frequency

474. Sound waves, emitted by small loudspeaker are reflected by wall. B
The frequency of the waves is adjusted until a stationary wave is formed with the antinodes nearest the wall at a distance x from the wall. Which expression goes in terms of x and the speed of sound is: **2012-200 Eng:**
- (a) $f = \frac{c}{2x}$ (b) $f = \frac{2c}{x}$
(c) $f = \frac{c}{x}$ (d) $f = \frac{2x}{c}$
-
475. The frequency of the fundamental mode of a string stretched by a tension T and having mass m and length l is given by: **2008-40 Med:** B
- (a) $f = \frac{1}{2} \sqrt{\frac{T}{ml}}$ (b) $f = \frac{1}{2l} \sqrt{\frac{lT}{m}}$
(c) $f = \frac{1}{2l} \sqrt{\frac{T}{m}}$ (d) $f = \frac{l}{2} \sqrt{\frac{T}{m}}$
-
476. In stationary wave, the distance between a consecutive node and an antinode is equal to; **2012-69 Eng:** D
- (a) $\frac{\lambda}{2}$ (b) $\frac{3\lambda}{4}$
(c) λ (d) $\frac{\lambda}{4}$
-
477. When the light is moving from rare medium to denser medium on reflection it suffers a phase change of; **2011, 2005, 2006-Med: 2012- Eng:** A
- (a) 180° (b) 120°
(c) 90° (d) 0°
-
478. A 3m long string resonates in 3 loops. The frequency of stationary wave having velocity of 30 m/s mainly; C $f_3 = \frac{3v}{2l} = \frac{3 \times 30}{2(3)} = 15 \text{ Hz}$
- (a) 5 Hz (b) 30 Hz
(c) 15 Hz (d) 10 Hz
-
479. In stationary waves: **2016-34 Med** A
- (a) **There is not transfer of energy** (b) Energy is constant at all points
(c) Phase is the same for all points (d) both (a) & (b)
-
480. The number of loops in the standing waves is directly dependent on: **2016-56 Med** B
- (a) Wavelength (b) **Frequency**
(c) Velocity (d) Speed
-
481. Two tuning forks of frequencies 256Hz and 260Hz are sounded together the time interval between two consecutive maximum sound heard by a listener is: **2016-165 Med** D **260 - 254 = 4 hz**
 $T = 1/f = 1/4 = 0.25 \text{ sec}$
- (a) 0.5 Sec (b) 2 Sec
(c) 1 Sec (d) **0.25 Sec**
-
482. In a stationary wave the distance between consecutive antinodes is 25 cm. If the wave velocity is 300 ms^{-1} then the frequency of the wave will be: **2016-23 Eng** C
- (a) 150 Hz (b) 300 Hz
(c) **600 Hz** (d) 750 Hz
- Distance b/w consecutive antinodes $= \lambda/2 = 25 \text{ cm}$ Thus $\lambda = 25 \times 2 = 50 \text{ cm} = 0.5 \text{ m}$
As; $v = f\lambda$ & $f = v/\lambda = 300/0.5 = \mathbf{600 \text{ Hz}}$
-
483. It is impossible for two particles, each executing simple harmonic motion, to remain in phase with each other if they have different: **2016-181 Eng** C
- (a) Masses (b) Periods

(c) Amplitudes

(d) Spring constants

Organ pipes, Doppler Effect & Ultrasonic waves:

484. The sound waves of frequency more than 20 kHz are termed as: **2017-Med** D
 A. Supersonic B. Audible
 C. Infrasonic D. Ultrasonic
-
485. When a car travelling with constant velocity passes a stationary observer, the observer hears a change in frequency of sound emitted by car. Which statement is correct? **2017-Med** B
 A. The change in frequency is greater as a car moves away than as it approaches.
 B. The greater the speed of the car, the greater the change in observed frequency.
 C. The observed frequency is lower as the car moves toward the observer and higher as the car moves away from the observer
 D. The volume of the sound heard by the observer does not change as the car approaches.
-
486. An organ pipe of length l has one end closed but the other end open. What is the wavelength of the fundamental note emitted? **2013-146 Med** B
 (a) Slightly smaller than $4l$.
 (b) Slightly larger than $4l$.
 (c) Roughly equal to $3l/2$.
 (d) Slightly larger than $2l$.
-
487. An organ pipe is open at both ends at its fundamental frequency. Neglecting any end effects, what wavelength is formed by this pipe in this mode of vibration, if the pipe is two meter long? B $\lambda = 2(l) = 2(2) = 4\text{m}$
 (a) 2m (b) 4m
 (c) 6m (d) 8m
-
488. In open organ pipe of length l is the wavelength of fundamental note is: **2009-91 Med** B
 (a) Equal to l (b) Equal to $2l$
 (c) Equal to $4l$ (d) Equal to $\frac{3l}{2}$
-
489. Doppler's effect is applicable to: **2010-28 Eng** D
 (a) Sound waves (b) Light waves
 (c) Light waves (d) Both sound and light waves
-
490. A 30-cm long string, with one end clamped and the other free to move transversely, is vibrating in its second harmonic. The wavelength of the constituent traveling waves is: **2016-171 Med** B
 (a) 10 cm (b) 30 cm
 (c) 40 cm (d) 120 cm

CHAPTER-9: PHYSICAL OPTICS

Coherent Sources ,Interference & Young,s Double Split Experiment:

491. Coloured fringes observed in soap bubbles are the example of: B

2017-Eng

- A.Diffraction B.Interference
C.Reflection D.Refraction

492. Monochromatic green light of wave length 5×10^{-7} m illuminates a pair of slits 1mm apart the separation of bright lines on the interference pattern formed on a screen 2m away is: 2017-Eng

- A. 0.25m B. 0.1mm
C. 1.0mm D. 0.01m

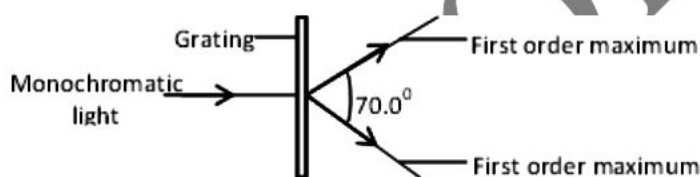
493. Two wave sources are oscillating in phase.Each source produces a wave of wavelength λ . The two waves from the sources meet at point X with a phase difference of 90° . What is a possible difference in the distances from two wave sources to point X?

2018-Med

- A) $\lambda/8$ B) $\lambda/4$
C) $\lambda/2$ D) λ

$\frac{\text{phase difference}}{\text{path difference}} = 2\pi/\lambda \rightarrow \text{path difference} = \text{phase difference} \times \lambda/2\pi$
Here Phase difference = 90° and $\pi = 180^\circ$
path difference = phase difference $\times \lambda/2\pi = 90 \times \lambda/2 \times 180^\circ = \lambda/4$

494. A diffraction grating is used to measure the wavelength of monochromatic light, as shown in the diagram C



The spacing of the slits in the grating is 1.00×10^{-6} m. The angle between the first order diffraction maxima is 60.0° What is the wavelength of the light? 2018-Med

- A)287 nm B)470 nm
C)574 nm D)940 nm.

495. In Young double slit experiment with sodium light, the slit are 0.589 m apart. What is the angular Width of the third maximum given $\lambda=589\text{nm}$: 2017-MED

2017107 Med

- A. $\sin^{-1}(3 \times 10^{-6})$ B. $\sin^{-1}(3 \times 10^{-8})$
C. $\sin^{-1}(3 \times 10^{-6})$ D. $\sin^{-1}(3 \times 10^{-8})$

$d \sin \theta = m \lambda$
 $\theta = \sin^{-1} m \lambda / d = \sin^{-1} 3 \times 589 \times 10^{-9} / 0.589 = \sin^{-1}(3 \times 10^{-6})$

496. When the light from two lamps falls on a screen, no interference pattern can be obtained. Why is this? 2018-Eng

- A)The lamps are not point sources
B)The lamps emit light of different amplitudes.
C)The light from the lamps is not coherent
D)The light from the lamps is white.

497. Two coherent monochromatic sets of waves will interfere constructively in the region of superposition only if the path difference between them is: 2008-132 Med
- (a)Half wavelength

- (b) Integral number of wavelength
(c) Quarter wavelength
(d) Odd integral number of half wavelength
-
498. When the light from two lamps falls on a screen, no interference pattern can be obtained. Why is this? **2013-196 Med** C
- (a) The lamps are not point sources
(b) The lamps emit light of different amplitudes
(c) The light from the lamps is not coherent
(d) The light from the lamps is white.
-
499. If the width of the slit on the young's double slit experiment becomes double the fringe spacing will become: **2011-86 Eng:** D $\Delta y = m\lambda \frac{D}{d}$
- (a) Double (b) One quarter
(c) Four times (d) Half
-
500. If a green light in a Young double slit experiment is replaced by monochromatic orange light of the same intensity. Then: **2009-67 Med** B As λ increases fringe width increase i.e $\Delta y \propto \lambda$
- (a) Fringe width will decrease
(b) Fringe width will increase
(c) Fringe width will remain the same
(d) Fringe width will become less intense
-
501. The colour in the soap bubble are due to; **2012-29 Med** A
- (a) Interference (b) dispersion of light
(c) Scattering of light (d) Refraction of light
-
502. Which of the following color have greater wavelength? **2015-173 Eng** A
- A) Red B) Blue
C) Green D) Orange
-
503. The colour of sky is blue due to: D
- (a) Interference of light (b) Diffraction of light
(c) Polarization of light (d) Scattering of light
-
504. The colour of thin films is a result of: **2016-96 Med** D
- (a) Dispersion (b) Absorption of light
(c) Scattering of light (d) None of the above
-
505. The fringe width in Young's double slit experiment increases when? **2016-42 Eng** A $\Delta y = m\lambda \frac{D}{d}$, As λ increases, fringe width increase i.e $\Delta y \propto \lambda$
- (a) **Wavelength increases**
(b) Distance between the source and slit decreases
(c) Distance between the slits increases
(d) The width of the slits increases
-
506. In Young's double slit experiment both the separation between the slits and the distance between the slits and the screen are halved; then the fringe width is: **2016-189 Med** B $\Delta y = m\lambda \frac{D}{d}$
- (a) Halved (b) **Unchanged**
(c) Doubled (d) Zeros
-
507. The fringe width in Young's double slot experiment increases when? **2016-42 Eng** A
- (a) **Wavelength increases**
(b) Distance between the source and slit decreases
(c) Distance between the slits increases
(d) The width of the slits increases
-
508. In the equation $d \sin \theta = m\lambda$ for the lines of a diffraction grating m is: **2016-121 Eng** d
- (a) The number of slits (b) the slit width
(c) The slit separation (d) **The order of the line**

Michelson's Interferometer & Diffraction:

509. The device which can be used for the precise measurement of wavelength is: **2010-110 Med:** D
 (a) Grating plate (b) Polaroid
 (c) Prism (d) Michelson interferometer
-
510. When a wave comes across an obstacle, it bends around the obstacle. This phenomenon of bending around of a wave is called: **2012-94 Eng., 2005-58 Med:** D
 (a) Polarization (b) Interference (c) Reflection (d) Diffraction
-
511. We can hear sound around the corner but cannot see because of: **2011-85 Med:** B
 (a) Interference (b) Diffraction
 (c) Polarization (d) Dispersion
-
512. Two monochromatic radiations X and Y are incident normally on a diffraction grating. The second order intensity maximum for X coincides with the third order intensity maximum for Y. what is the ratio $\frac{\text{wavelength of } x}{\text{wavelength of } y}$? **2013-169 Med:** B
 (a) $\frac{1}{2}$ (b) $\frac{2}{3}$
 (c) $\frac{3}{2}$ (d) $\frac{2}{1}$
-
513. When monochromatic light of wavelength 5.0×10^{-7} m is incident normally on a plane diffraction grating, the second order diffraction lines are formed at angles of 30° to the normal to the grating. What is the number of lines per millimeter of the grating? **2013-56 Med:** B
 $d = \frac{m\lambda}{\sin \theta}$ & $N = \frac{1 \text{ cm}}{d}$
 (a) 250 (b) 500
 (c) 1000 (d) 4000
-
514. If the movable mirror is displaced through distance of 0.05mm, 200 fringes are observed shifted. The wavelength of light used is? **2006-07 Med:** C
 $d = \frac{n\lambda}{2}$ & $\lambda = \frac{2d}{n} = \frac{2 \times 0.05 \times 10^{-3}}{200}$
 $= 5 \times 10^{-7} \text{ m} = 500 \times 10^{-9} \text{ m} = 500 \text{ nm}$
 (a) $5 \times 10^{-10} \text{ m}$ (b) $5 \times 10^{10} \text{ m}$
 (c) 500nm (d) 50nm
-
515. Light of wavelength 700nm is incident on pair of slits forming fringes 3.0mm apart on a screen. What is the fringe spacing when light of wavelength 350 nm is used and the slit separation is doubled? **2012-179 Eng:** A
 $\Delta y \propto \lambda$, $\Delta y \propto \frac{1}{d}$, $\Delta y \propto D$.,
 $\Delta y = \frac{\lambda D}{d}$
 (a) 0.75mm (b) 1.5mm
 (c) 3.0 mm (d) 6.0 mm
-
516. When the Newton's rings interference ... is seen from above by means of reflected light. The central spot always appears: **2009-97 Med:** B
 (a) White (b) Black
 (c) Red (d) Green
-
517. To obtain greater dispersion by a diffraction grating: **2016-65 Med:** D
 (a) The slit width should be increased
 (b) The slit width should be decreased
 (c) The slit separation should be increased
 (d) The slit separation should be decreased
-
- Bragg's Law & Polarization:**
518. The refractive index is equal to the tangent of the angle of polarization. It is called: **2017-Med:**
 A. Brewster's Law B. Malu's Law
 C. Bragg's Law D. Grimaldi's Law
-
519. Which of the following cannot be polarized? **2017-Med:**
 A. Radio waves B. Ultraviolet rays
 C. X-rays D. Ultrasonic waves
-
520. The transverse nature of light is verified with the phenomenon of: **2012-45 Med:** B

	(a) Interference (c) Diffraction	(b) Polarization (d) Dispersion	
521.	Sound waves cannot be: Med: (a) Polarized (c) Refracted	(b) Reflected (d) Diffracted	2010-169 Eng: 2012-97, 2012-155, 2009-104 A
522.	The sound waves and light waves cannot be both; (a) Polarized (c) Reflected	(b) Refracted (d) Diffracted	2014-51 Med: A
523.	Polaroid glass is used in sun glasses because: (a) It is cheaper (b) It increases the light intensity to one and a half times on account of polarization (c) It reduces the light intensity to half its value on account of polarization (d) It produces irritation in eye		2016-183 Eng C

CHAPTER-10: THERMODYNAMICS

Internal Energy, Law of Thermodynamics

524.	How much kinetic energy will be gained by an (alpha) particle ion going from a point at 70 V to an other point at 50 V? A. 40 eV B. 40 KeV C. 40 MeV D. Zero	2017-Med	A	$\Delta K.E = q\Delta V$ $= 2e \times 20V$ $= 40 \text{ eV}$
525.	For all adiabatic processes; A) The entropy of the system does not change B) The entropy of the system increases C) The entropy of the system decreases D) The entropy of the system does not decreases	2015-67 Med	A	
526.	During a reversible adiabatic expansion of an Ideal gas, which of the following is not true? A) $PVT^{\gamma} = \text{constant}$ B) $PV = \text{constant}$ C) $PV = nRT$ D) $TV^{\gamma} = \text{constant}$	2015-58 Med	d	
527.	The energy absorbed as heat by an ideal gas for an isothermal process is equal to: A) The work done by the gas B) The work done on the gas. C) Change in the internal energy of the gas D) Zero, since the process is isothermal	2015-59 Med	A	
528.	In an adiabatic process there is no: A) Work done B) Exchange of heat C) Change in temperature D) Change in internal energy	2015-48 Med	B	
529.	Pressure exerted by perfect gas is equal to: (a) $1/3$ Mean K.E /volume (c) $2/3$ Mean K.E /volume	2009-117 Med:	C	(b) $1/2$ Mean K.E (d) Mean K.E /volume
530.	Which is the correct statement? (a) The average kinetic energy of the molecules depends on volume in which the gas is enclosed (b) The average kinetic energy of the molecules in the gaseous state is proportional to pressure. (c) The average kinetic energy of the molecules in gaseous state is proportional to temperature. (d) All of the above.	2014-81 Med:	C	

531. If an ideal gas is allowed to expand adiabatically the work done by the gas is equal to: **2011-162 Eng:** A
 (a) The loss of internal energy (b) The loss of entropy
 (c) The rise in temperature (d) The decrease in pressure
-
532. The process which is performed quickly is: **2011-95 Med:** B
 (a) Isobaric process (b) Adiabatic process
 (c) Isothermal process (d) Isochoric process
-
533. The process in which heat neither enters nor leaves the system but still the temperature of the system changes is. **2006-118 Med:** C
 (a) Isobaric process (b) Isothermal process
 (c) Adiabatic process (d) Isochoric process
-
534. The internal energy of a fixed mass of an ideal gas depends on: **2014-67 Med:** D
 (a) Pressure but not volume or temperature.
 (b) Temperature but not pressure or volume.
 (c) volume but not pressure or temperature.
 (d) Pressure and temperature but not volume.
-
535. Which form of matter possesses higher magnitude of internal energy: **2007-86 Med:** D
 (a) Gaseous matter (b) Solid matter
 (c) Liquid matter (d) All have the same magnitude
-
536. Which of the following is a characteristic of an isothermal change? **2010-105 Med:** B
 (a) Enthalpy is constant (b) Temperature is constant
 (c) Pressure is constant (d) No heat enters or leaves the system
-
537. In iso-thermal process there is no change in: **2015-171 Eng:** C
 A) Pressure B) Work done
 C) Internal energy D) Imaginary numbers

Molar Specific Heat, Reversible & Irreversible Process, Heat Engine:

538. The amount of heat required to raise the temperature of 10 moles of water from 70K to 80K (molar heat capacity of water 75.24J) is: **2018-Med:** D
 A) 0.752J B) 7524J
 C) 95.24J D) 752.4J
 $Q = nC\Delta T = 10 \times 75.4 \times 10 = 7524J$
-
539. 1 mole of an ideal gas was allowed to expand from 20dm³ to 30dm³ against a constant external pressure 50atm. The work done is equal to: **2018-Eng:** B
 A) 50 atm dm³ B) 2500 atm dm³
 C) 15 atm dm³ D) 500 atm dm³
 work done at constant pressure = pressure x change in volume
 $= P \times \Delta V = 50 \times 10 = 500 \text{ atm dm}^3$
-
540. The amount of heat required to raise the temperature of 1 Calorie of substance through 1 K is called: **2010-56, 2008-154 Med:** A
 (a) Heat capacity (b) 1 Joule
 (c) Specific heat (d) One calorie
 The **heat capacity** of a defined system is the amount of **heat** (usually expressed in calories, kilocalories, or joules) needed to raise the system's temperature by one degree (usually expressed in Celsius or Kelvin). It is expressed in units of thermal energy per degree temperature. While; The **specific heat** is the amount of **heat** per unit mass required to raise the temperature by one degree Celsius.
-
541. A valid sec of units for specific heat capacity is: **2014-27 Eng:** C
 (a) Kg J-k (b) Kg J-k-1
 (c) JK-1Kg-1 (d) Kg s⁻¹k⁻¹
 $\text{Specific heat} = C = \Delta Q / m \Delta T = JK-1Kg-1$

542. $C_p > C_v$ are because in the case of C_p : 2015- D
172 Eng
 A) More heat is required to do the external work
 B) Heat is needed to do external work
 C) No heat is required to increase internal energy
 D) Heat is required to do external work against external volume
 C_p (specific heat at constant pressure), C_v (specific heat at constant volume).
 When a gas is heated at const: volume, no external work is done and so the heat supplied is consumed only in increasing the internal energy of a gas. But if the gas is heated at const: pressure, the gas expands against external pressure so does some external work. In this case the supplied heat is used up in increasing the internal energy of the gas and in doing some external work. Thus; $C_p > C_v$
-
543. How much heat is absorbed by 100g of water when its temperature decreases from 25°C to 5°C ? (heat capacity is 4.2J/gK); 2010-127 Eng: D
 (a) $84,000\text{J}$ (b) $-2000/4.2\text{J}$
 (c) $2000/4.2\text{J}$ (d) $-84,00\text{J}$
 $Q = mc\Delta T = 100 \times 4.2 \times (-20) = -8400\text{J}$
-
- Second Law of Thermodynamics(Carnot Engine),Refrigerator & Entropy:**
544. A car not engine working between 200K and 400K has a work output of 600J per cycle. How much heat energy is supplied to the engine from the source of each cycle. 2017-Med B
 A. 1400J B. 1200J
 C. 1700J D. 1300J
 $\eta = [T_1 - T_2]/T_1 = 400 - 200/400 = 200/400 = 0.5$
 $\eta = \Delta W/Q_1 \rightarrow Q_1 = \Delta W/\eta = 600/0.5 = 1200\text{J}$
-
545. The efficiency of a heat engine working between the freezing point and the boiling point of water is near to: 2018-Med B
 A) 50% B) 25%
 C) 12.5% D) 6.25%
-
546. "The energy change in a closed cycle from initial to final state is zero". This statement is obeyed by: 2018-Eng D
 A) Born Haber cycle
 B) Law of conservation of energy
 C) First law of thermodynamics
 D) All of the above
-
547. The first law of thermodynamics is a statement which implies that: 2018-Eng D
 A) No heat enters or leaves the system.
 B) The temperature remains constant.
 C) All work is mechanical
 D) Energy is conserved.
-
548. Which thermodynamic temperature is equivalent to 501.85°C ? 2014-69 Med: B
 (a) 775.00K (b) 774.85K
 (c) 228.85K (d) 228.70K
 $K = ^\circ\text{C} + 273 = 501.85^\circ\text{C} + 273 = 774.85\text{K}$
-
549. The statement that heat cannot spontaneously flow from a colder to a hotter body is a result of: 2014-132 Med: C
 (a) Henry's law
 (b) The first law of thermodynamics
 (c) The second law of thermodynamics
 (d) The third law of thermodynamics.
-
550. The heat engine operating in reverse is called; 2010-117 Med: B
 (a) Electric generator (b) Refrigerator

- (c) Cannot engine d) Electric motor

551.	For all irreversible process, the entropy of the system; <u>2011-98 Med:</u> (a) decreases (b) remains constant (c) is zero (d) increases	D	
552.	Net change of entropy in the carnot cycle is: <u>2006-61 Med:</u> (a) Zero (b) Positive (c) Negative (d) None of the above	A	As Carnot cycle is a reversible Cycle, so net change of entropy is Zero.
553.	The temperature scale which is independent of the nature of the working substance is: <u>2010-93 Med:</u> (a) Celsius scale (b) Fahrenheit scale (c) Centigrade scale (d) Thermodynamic scale	D	
554.	Possible units of entropy are; <u>2015-185 Eng</u> A) J B) J/K C) J ⁻¹ D) Cal/K	B	
555.	The ratio of universal gas constant to Avogadro number is equal to: <u>2011-93 Eng:</u> (a) Plank's constant (b) Boltzman's constant (c) Stefan's constant (d) Decay constant	B	
556.	The ratio of the heat accepted to the heat rejected by a car not engine gives: <u>2009-114 Med:</u> (a) The efficiency of the working substances (b) The ideal gas scale temperature. (c) The thermal conductivity at the working substance. (d) The thermal conductivity of the working substance.	A	
557.	If the temperature of the source of heat increases the efficiency of a carnots engine: <u>2010-43 Eng:</u> (a) Increases (b) Decreases (c) Remains constant (d) None of these	A	Efficiency of Carnot engine, $\eta = (T_2 - T_1) / T_2$ Here is T_1 is for Sink Temperature & T_2 is Source Temperature.. Thus; The maximum efficiency of the carnot engine only depends on two factors: 1 - T_1 (Sink Temperature). 2 - T_2 (Source Temperature). Maximum efficiency (100%) would be when the difference of temperatures between the two reservoirs is infinite.
558.	The efficiency of a Carnot engine, that is operating between a cold reservoir at temperature T_c and a hot reservoir T_h , is dependent upon; <u>2005-31 Med:</u> (a) The heat capacity of working substance (b) Only the temperature of two reservoirs (c) The reservoir temperature and the heat capacity of the working substance (d) The reservoir temperature and the volume change during heat absorption	B	
559.	Which of the following is responsible for an increase in the entropy of a gaseous system? <u>2010-115 Eng:</u> (a) Increase in heating (b) Cooling the system (c) Heating followed by cooling (d) Compression at specific temperature	A	

560. A heat engine: 2016-06 Med C
- (a) Converts heat input to an equivalent amount of work
(b) Converts work to an equivalent amount of heat
(c) **Takes heat in, does work, and loses energy as heat**
(d) Uses positive work done on the system to transfer heat from a low temperature reservoir to a high temperature reservoir.
-
561. On a warm day a pool of water transfers energy to the air as heat and freezes. This is a direct violation of: 2016-182 Eng B
- (a) The zeroth law of thermodynamics
(b) The first law of thermodynamics
(c) The second law of thermodynamics
(d) The third law of thermodynamics
-
562. Joule degree⁻¹ is the unit for 2016-162 Eng B
- (a) Solar constant (b) **Boltzmann's constant**
(c) Stefan's constant (d) Planck's constant

2ND YEAR PHYSICS

CHAPTER-11:

ELECTROSTATICS

Coulomb's Law,

563. There are two charges $1\mu\text{C}$ and $5\mu\text{C}$, the ratio of the force acting on them will be: **2017-Eng** C
 A.1:25 B.1:5
 C.1:1 D.5:1
-
564. In the M.K.S. system of units, ϵ_0 equals: **2017-Eng** C
 A) $\frac{1\text{C}^2}{\text{N}\cdot\text{m}^2}$ B) $\frac{9 \times 10^9 \text{Nm}^2}{\text{C}^2}$
 C) $\frac{1}{4\pi \times 10^9 \text{Nm}^2}$ D) $\frac{1}{9 \times 10^9 \text{Nm}^2}$
-
565. There are two charges $+3\mu\text{C}$ and $+8\mu\text{C}$, the ratio of the force acting on them will be: **2018-Med** B
 A)3 : 1 B)1: 1
 C)11: 8 D)3 : 8
-
566. The force between two charged bodies is "F". If one of the charge is doubled and the distance between them is halved, the force acting on each charged body is: **2018-Eng** C
 A)2 F B)4 F
 C)8 F D)16 F.
-
567. If the distance b/w the two charged particles is halved, the Coulomb's force b/w them becomes; **2007-50 Med** D $F=kq_1q_2/r^2$ when $r=r/2$ then $r^2=(r/2)^2=r^2/4$ then $F=kq_1q_2/r^2/4 \rightarrow 4kq_1q_2/r^2 = 4F$
 (a) Half (b) One quarter
 (c) Double (d) Four times
-
568. The coulomb's force between the charges in air is 2.0N the coulomb's force between these charges in insulating medium having $E_r = 3.8$ is: **2011-103 Eng** D $F' = \frac{F}{E_r} = \frac{2}{3.8} = 0.53\text{N}$
 (a) 5.26 N (b) 3.8 N
 (c) 2.0 N (d) 0.53 N
-
569. The correct expression for the coulomb's force is: **2011-102 Med** B
 (a) $\vec{F}^1 = \frac{1}{4\pi\epsilon_0} \times \frac{q_1q_2}{r^2} \vec{r}$ (b) $\vec{F} = \frac{1}{4\pi\epsilon_0} \times \frac{q_1q_2}{r^2} \vec{r}$
 (c) $\vec{F} = \frac{1}{4\pi\epsilon} \times \frac{q_1q_2}{r^2} \vec{r}$ (d) $\vec{F}^1 = \frac{1}{4\pi\epsilon} \times \frac{q_1q_2}{r^2}$
-
570. In 10 minutes 3000 coulomb of free electrons enter one end of a conductor and 3000 coulomb leave the other end. The current is: **2016-32 Eng** A $T = 10 \text{ min} = 600 \text{ sec}$ and $q = 3000 \text{ col} \rightarrow I = q/t = 3000/600 = 5$
 (a) 5A (b) 10A
 (c) 30A (d) Zero
-
571. A charge 'Q' is divided into two parts 'q' and 'Q-q' and separated by a distance 'R'. The force of repulsion between them will be maximum when: **2016-62 Eng** B $F = K (q)(Q/2)/r^2 > K (q)(Q/4)/r^2$ and $K (q)(Q)/r^2$ and $> K (Q)(Q/8)/r^2$
 (a) $q = Q/4$ (b) $q = Q/2$
 (c) $q = Q$ (d) $q = Q/8$

Electric Field Intensity, Electric Field lines & Electric Flux (Gauss's Law):

572. Before a thunder stand on end. A hair with mass 0.50 mg and charge 1.0 pc is supported by a force other than the weight of hair and the electric force. What is the electric field strength ? C
2017-Eng
 A. $4.9 \times 10^3 \text{ NC}^{-1}$ B. $4.9 \times 10^5 \text{ NC}^{-1}$
 C. $4.9 \times 10^6 \text{ NC}^{-1}$ D. $4.9 \times 10^9 \text{ NC}^{-1}$
-
573. Charge is distributed uniformly on the surface of large flat plate. The electric field 2cm from the plate is what is the electric field at 4cm from the plate: **2017-Eng** B
 A. 120 N/C B. 30 N/C
 C) 15 N/C D) 7.5 N/C
-
574. In a uniform electric field, which statement is correct? **2018-Med** D
 A) All charged particles experience the same force
 B) All charged particles move with the same velocity.
 C) All electric field lines are directed towards positive charges
 D) All electric field lines are parallel.
-
575. The number of electrons in one coulomb of charge are: **2018-Med** C
 A) 6.25×10^{21} B) 1.6×10^{19}
 C) 6.25×10^8 D) 9.1×10
-
576. What is the magnitude of a point charge N which produces an electric field of 2 NC^{-1} at a distance of 60 Cm? **2018-Med** A
 A) $8 \times 10^{-11} \text{ C}$ B) $2 \times 10^{-12} \text{ C}$
 C) $3 \times 10^{-11} \text{ C}$ D) $6 \times 10^{-18} \text{ C}$

$$E = kq/r^2 \rightarrow q = Er^2/k = 2 \times (0.6)^2 / 9 \times 10^{-9} = 8 \times 10^{-11} \text{ C}$$
-
577. Two electrically neutral materials are rubbed together. One acquires a net positive charge. **2018-Eng** B
 A) Lost electrons B) Gained electrons
 C) Lost protons D) Gained protons
-
578. If $\frac{\Delta v}{\Delta r}$ is potential gradient, then the intensity of electric field at a point is; **2015-69 Med** C
 A) $\frac{\Delta v}{\Delta r}$ B) $q \frac{\Delta v}{\Delta r}$
 C) $-\frac{\Delta v}{\Delta r}$ D) $\frac{\Delta x}{\Delta r}$
 The negative sign shows that work done on q_0 is against the field.
-
579. The unit of the electric field is: **2015-77 Med** D
 A) N/C B) V/m
 C) J/C.m D) All of the above
 $E = F/q = N/C$ and $E = V/r = V/m$
 also $F/q = W/d/q = W/dq = J/C$
-
580. An electric current of 1 A is passing through a cross section of the coil in 1 second. How many electrons are involved in providing a current of 1A? The charge on 1 electron is $1.602 \times 10^{-19} \text{ C}$. **2012-55 Med.; 2012-110 Eng.** D
 (a) 3.21×10^{18} (b) 2.2×10^{16}
 (c) 1.602×10^{19} (d) 6.42×10^{18}
 $I = \frac{Q}{t} = \frac{ne}{t}$ & $n = \frac{It}{e} = \frac{1 \times 1}{1.602 \times 10^{-19}} = 6.42 \times 10^{18}$
-
581. The electric field at a certain distance from an isolated alpha particle is $3.0 \times 10^7 \text{ N C}^{-1}$. What is the force on an electron when at that distance from the alpha particle? **2012-176 Eng** D
 (a) $4.8 \times 10^{-12} \text{ N}$ (b) $2.6 \times 10^{12} \text{ N}$
 (c) $3.0 \times 10^7 \text{ N}$ (d) $6.0 \times 10^7 \text{ N}$
 $E = F/q \rightarrow F = qE = 1.6 \times 10^{-19} \times 3.0 \times 10^7 = 4.8 \times 10^{-12} \text{ N}$

582. The unit of electric intensity is **2009-101 Med:** D $E=F/q=N/c$ and $E=V/r=V/m$
 (a) Volt/meter (b) Newton / Columb also
 (c) $\frac{joule}{coulomb-meter}$ (d) All of the above $F/q=W/d/q=W/dq=J/C$
-
583. The rate of change of electric potential with respect to displacement is equal to: **2011-106 Eng:** A
 (a) Potential gradient (b) Electric potential energy
 (c) electric intensity (d) Electric flux
-
584. The negative gradient of electric potential is also called: **2012-101 Med:** B
 (a) Potential energy (b) Electric field intensity
 (c) Electric potential difference (d) Electron volt
-
585. In the direction indicated by an electric field line: **2014-23 Med:** B
 (a) The potential must increase
 (b) The potential must decrease
 (c) The electric field strength must increase
 (d) The electric field strength must decrease
-
586. The electric field between the plates of an isolated air-spaced parallel- plate capacitor is E. What is the field between the plates after immersing the capacitor in a liquid of relative permittivity 10? **2014-189 Med:** D Electric Field in Medium = $\frac{E}{\epsilon_r} = \frac{E}{10}$
 (a) $\sqrt{10} E$ (b) $E/\sqrt{10}$
 (c) 10E (d) $\frac{E}{10}$
-
587. If a soap bubble is charged: **2012-153 Med:** B Because same charge repel and size increases
 (a) Its size decreases (b) Its size increases
 (c) No change (d) None of them
-
588. A close surface contains equal and opposite charges. The net electric flux through the close surface is: **2007-161 Med:** C
 (a) Maximum (b) Minimum
 (c) Zero (d) Positive as well as negative
-
589. Two point particles, one with charge $+8 \times 10^{-9} C$ and the other with charge $-2 \times 10^{-9} C$, are separated by 4m. The electric field in N/C midway between them is: **2016-121 Eng:** D
 (a) 9×10^9 (b) 13, 500
 (c) 36×10^{-9} (d) 22.5
-
590. When will 1C of charge pass a point in an electrical circuit? **2016-72 Eng:** C $I=Q/t \rightarrow Q=It \rightarrow 5mA \times 200s = 0.005 \times 200 = 1.000$
 (a) When 1A moves through a voltage of 1V
 (b) When a power of 1W is used for 1s
 (c) When the current is 5mA for 200s
 (d) When the current is 10 A for 10s

ELECTRIC POTENTIAL & ENERGY, POTENTIAL GRADIENT, ELECTRON VOLT:

591. Which one of the following is correct? **2017-Eng:** D $V = W/q$
 a) joule = coulomb/volt $W = qV$
 b) joule = volt x ampere Joule = coulomb x volt
 c) joule = volt /ampere
 d) joule = coulomb x volt

592. A proton is about 1840 times heavier than an electron. When it is accelerated by a potential difference of 1kV, its kinetic energy will be; **2017-Eng**
 A. 1840 keV B. 1/1840 keV
 C. 1 keV D. 920 keV
 C K.E = eV
 Energy depends upon charge not mass so same for proton and electron
 K.E = eV = 1 KVe = 1keV
-
593. Two copper wires S and T of equal lengths are connected in parallel. A potential difference is applied across the ends of this parallel arrangement. Wire S has a diameter of 3.0 mm. Wire T has a diameter of 1.5 mm. What is the value of the ratio $\frac{\text{current in T}}{\text{current in S}}$? **2017-Eng**
 A. 1/4 B. 1/2
 C. 2 D. 4
 A
-
594. A pedal bicycle is fitted with an electric motor. The rider switches on the motor for a time of 3.0 minutes. A constant current of 3.5 A in the electric motor is provided from a battery with a terminal voltage of 24 V. What is the energy supplied by the battery? **2017-Eng**
 A. 84J B. 250
 C. 630 J D. 15000J
 D
-
595. An electron volt is a unit of: **2018-Eng**
 A) Electric potential B) Charge
 C) Electric current D) Energy
 D
-
596. The particle carrying a charge of (2e) falls through a potential difference of 3V. Energy required by the particle is: **2009-11 Med:**
 (a) $9.6 \times 10^{-19} J$ (b) $1.6 \times 10^{-19} J$
 (c) $3.2 \times 10^{-19} J$ (d) $6.9 \times 10^{-19} J$
 A $U = \text{Energy} = qV = neV = 2 \times 1.6 \times 10^{-19} \times 3 = 9.6 \times 10^{-19} J$
-
597. The Potential gradient between the two charged plates having, separation of 0.5cm and potential difference of 12volts is: **2011-105 Med:**
 (a) 240 NC^{-1} (b) 24 NC^{-1}
 (c) 2.4 NC^{-1} (d) 2400 NC^{-1}
 D $E = \frac{\Delta v}{\Delta r} = \frac{12V}{0.005 m} = 2400 \text{ Nc}^{-1}$
-
598. The potential difference between two points is one volt. The work done in moving one coulomb of charge from one point to other point is: **2010-183 Eng:**
 (a) One erg (b) One foot pound
 (c) One electron volt (d) One joule
 D $1 \text{ Volt} = \frac{1 \text{ Volt}}{1 \text{ coulomb}} \Rightarrow 1 \text{ Joule} = 1 \text{ volt} \times 1 \text{ coulomb}$
-
599. Which physical quantity would result from a calculation in which a potential difference is multiplied by an electric charge? **2012-81 Eng:**
 (a) Electric current (b) Electric field strength
 (c) Electric power (d) Electric energy
 D $U (\text{Energy}) = q \times v$
-
600. An electron when accelerated through a potential difference of one volt will gain an energy equal to; **2007-137 Med**
 (a) One erg (b) One joule
 (c) One electron volt (d) One watt sec
 C
-
601. If an electron is accelerated from rest through a potential difference of 100 volts. Its final kinetic energy is: **2009-141 Med:**
 (a) $1.6 \times 10^{-18} J$ (b) $1.6 \times 10^{-17} J$
 D $K.E = qv = 1.6 \times 10^{-19} \times 100 = 1.6 \times 10^{-17} J = \frac{1.6 \times 10^{-17}}{1.6 \times 10^{-19}} = 100 \text{ electron Volt}$

(c) 100 J

(d) 100 electron Volt

602. A total charge of 100C flows through a 12W bulb in a time of 50 second. What is the potential difference across the bulb during this time? **2016-75 Med** C $P=IV=\frac{Q}{t}V$ Thus; $V=\frac{P}{Q}t =$
 $P=IV=\frac{12 \times 50}{100}=6V$
603. An electron has charge-e- and mass m. A proton has charge e and mass 1840m. A "Proton volt" is equal to: **2016-137 Med** A Electron volt and proton volt value will be same because it depends on charge
 (a) 1 eV (b) 1840 eV
 (c) (1/1840) eV (d) $\sqrt{1840}$ eV
- Capacitor, Charging & Discharging a Capacitor:**
604. Two identical capacitors each with capacitance C are connected in parallel and the combination is connected in series to their identical capacitor. The equivalent capacitance of this arrangement is: **2017-Eng** A
 A. $2C/3$ B. C
 C. $2C$ D. $3C$
605. To determine the resistance of a voltmeter by discharging a capacitor through it, the instantaneous voltage is then given by the relation: **2018-Med** A For discharging $q=q_0 e^{-t/RC}$
 (Dividing by C) So; $q/C =$
 $q_0/C (e^{-t/RC}) V = V_0 e^{-t/RC}$
 A) $V_0 e^{-t/RC}$ B) $V_0 e^{t/RC}$
 C) V_0^2 D) $V_0/\sqrt{2}$
606. The energy stored in a charged capacitor is given by: **2018-Med** A
 A. $\frac{1}{2} QVB$ B. $\frac{1}{2} C^2 V^2$
 C. $\frac{1}{2} CV$ D. $\frac{1}{2} QV^2$
607. A battery is permanently connected to a parallel plate capacitor and the energy stored is x joules. When one plate is moved so that separation of the plate is doubled, the energy now stored in joule is: **2015-68 Med** C $U = x = C V^2 / 2 = (A \epsilon_0 \epsilon / d) (V^2 / 2)$ Put $d=2d$ As $U \propto 1/d$, If "d" become doubled than energy will be become half
 A) 4x B) 2x
 C) x/2 D) x/4
608. the quantity $\frac{1}{2} \epsilon_0 \epsilon_r E^2$ has the significant of: **2015-79 Med** C Energy/volume = $\frac{1}{2} \epsilon_0 \epsilon_r E^2$
 A) energy/farad B) Energy/ coulomb
 C) Energy/ volume D) energy/volt
609. The correct expression for the energy of the charged capacitor is: **2011-109 Eng; 2013-103 Med** B Energy in capacitor $= \frac{1}{2} QV =$
 $\frac{1}{2} \frac{Q^2}{C} = \frac{1}{2} C V^2$
 (a) $\frac{1}{2} C^2 V$ (b) $\frac{1}{2} Q^2 / C$
 (c) $\frac{1}{2} V^2 / C$ (d) $\frac{1}{2} C^2 V^2$
610. The charge on electron is equal to: **2009-118 Med:** B The charge on electron is 1.6022×10^{-19} Coulomb
 (a) 1.7588×10^{19} Coulomb
 (b) 1.6022×10^{-19} Coulomb
 (c) 1.2057×10^{19} Coulomb
 (d) 0.6022×10^{19} Coulomb

611. Three capacitors of capacitance $2 \mu F$ each are connected in series to a power supply of 6 volt. The voltage across each capacitor is: **2008-146 Med:** D
 (a) 6 volt (b) 1 volt
 (c) 3 volt (d) 2 volt
-
612. The ratio of the capacitance of the capacitor having dielectric to the capacitance of the capacitor having free space is the dielectric: **2010-67 Med:** A $\epsilon_r = C_{med}/C_{vac}$
 (a) Relative permittivity (b) Permittivity
 (c) Permeability (d) Electric polarization
-
613. The capacitor which charges and discharges quickly will have. A Smaller value of time const: Rc leads to more discharge
 (a) Small value of RC (b) Large value of RC
 (c) Large value of time constant (d) None of these
-
614. Ohm \times farad is equivalent to: **2011-108 Med:** C Henry is unit of RC \rightarrow Henry = oh m farad
 (a) Second (b) Weber
 (c) Henry (d) Tesla
-
615. Which of the following is the same unit as the farad? **2014-34 Med:** C RC is unit constant and its unit is second so $RC=s \rightarrow C=sec/R = s/\Omega = \Omega^{-1} s$
 (a) Ωs (b) Ωs^{-1}
 (c) $\Omega^{-1} s$ (d) $\Omega^{-1} s^{-1}$
-
616. A capacitor which has a capacitance of 1 farad will: **2014-122 Med:** B
 (a) E fully charged in 1 second by a current of 1 ampere.
 (b) Store 1 coulomb of charge at potential difference of 1 volt.
 (c) Gain 1 joule of energy when 1 coulomb of charge is stored on it.
 (d) Discharge in 1 second when connected across a resistor of resistance 3 ohm.
-
617. The potential difference between a pair of similar. Parallel conducting plates is known. What additional information is needed in order to find the electric field strength between the plates? **2014-120 Med:** A
 (a) Separation of the plates.
 (b) Separation and area of the plates.
 (c) Permittivity of the medium separation of the plates.
 (d) Permittivity of the medium separation and area of the plates.
-
618. A battery is marked 9.0V. What does this mean? **2014-62 Med:** C
 (a) Each coulomb of charge from the battery supplies 9.0J of electrical energy to the whole circuit.
 (b) The battery supplies 9.0J to an external circuit for each coulomb of charge.
 (c) The potential difference across any component connected to the battery will be 9.0V.
 (d) There will always be 9.0V across the battery terminals
-
619. A charged capacitor stores 10 C at 40 V. Its stored energy is: **2016-93 Med:** D $U = \frac{1}{2} QV = \frac{1}{2} 10 \times 40 = 200 J$
 (a) 400 J (b) 4 J
 (c) 0.2 J (d) 200 J
-
620. The time constant RC has units of: **2016-121 Eng:** D RC is unit constant and its unit is second
 (a) Second/farad (b) Second/ohm
 (c) 1/second (d) None of the above

621. A 35- μ F capacitor is connected to a source of sinusoidal emf with a frequency of 400 Hz and a maximum emf of 20 V. The maximum current is: C
 (a) 0 (b) 0.28 A
 (c) 1.8 A (d) 230 A

CHAPTER-12: CURRENT ELECTRICITY

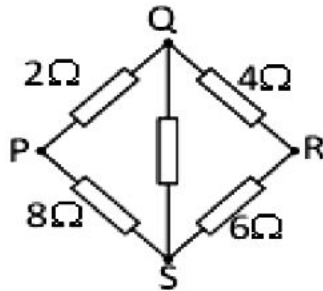
STEADY CURRENT, OHM'S LAW

622. Three bulbs of rating 60W, 80W and 100W are connected in series to work on 240 V which bulb will glow most brightly: A
 (a) 60 W (b) 80 W
 (c) 100W (d) All will glow equally bright.
2018-Eng
623. A thermistor is a semiconductor device whose resistance: A
 (a) Decreases as its temperature increases
 (b) Doesn't vary as its temperature increases
 (c) Decreases as its temperature decreases
 (d) Doesn't vary as its temperature decreases
2018-Eng
624. There is a current of 3.2 amps in a conductor. The number of electrons that cross any section normal to the direction of flow per second is: A
 (a) 2×10^{19} (b) 0.2×10^{19}
 (c) 20×10^{19} (d) 200×10^{19}
2017-Eng
 $I = q/t = ne/t \rightarrow n = It/e = 3.2 \times 1 / 1.6 \times 10^{-19} =$
625. The example of a non-ohmic resistance is: A
 (a) Ge-resistance (b) Carbon resistance
 (c) Copper wire (d) Diode
2017-Eng
626. A student kept her 60 watt and 120 volt study lamp turned on from 2:00 PM until 2:00 AM. How many coulombs of charge went through it? C
 (a) 3600 (b) 7200
 (c) 18000 (d) 21600
2017-Eng
 $Q = It = (P/V)t = (60/120) \times (12 \times 3600) = 21600$
627. Two lamps are connected in series to a 250 V power supply. One lamp is rated 240 V, 60 W and the other rated 10 V, 2.5 W. Which statement most accurately describes what happens? D
 (a) Both lamps light at less than their normal brightness.
 (b) Both lamps light at their normal brightness.
 (c) Only the 240 V lamp lights.
 (d) The 10 V lamp blows.
2017-Med
628. For ohmic substance, the electron drift velocity is proportional to: A
 (a) Cross sectional area of the sample
 (b) The length of sample
 (c) The mass of an electron
 (d) The electric field in the sample
2015-87 Med
 Larger the cross-sectional area lesser will be the resistance
629. Ampere hour is a unit of: C
 (a) Current (b) Time
 (c) Quantity of charge (d) Power
2009-131 Med
 $I = \frac{Q}{t} \Rightarrow Q = I \times t = \text{ampere hour} \rightarrow (\text{Ampere} \times \text{time})$

630. A student measures a current as 0.5A. Which of the following correctly expresses this result? **2012-144 Eng:** D $0.5 \text{ A} = 0.5 \text{ mA/m} = 0.5/10^{-3} \text{ mA} = 0.5 \times 10^3 \text{ mA} = 500 \text{ mA}$
 (a) 50mA (b) 50MA
 (c) 500MA (d) 500 mA
-
631. Which of the following are Ohmic materials? **2012-167, 2008-87, 2013-99 Med:** D Metals are ohmic material.
 (a) Semiconductors (b) Tungsten filament
 (c) Thermistor (d) Metals

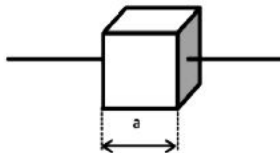
Electrical Resistance, Resistivity & Conductivity:

632. Four resistors are connected in a square as shown B



The resistance may be measured between any two junctions. Between which two junctions is the measured resistance greatest? **2018-Med**

- A) P and Q B) Q and S
 C) R and S D) S and P
-
633. The reciprocal of the conductance is called: **2018-Med** C
 A) Conductivity B) Resistivity
 C) Resistance D) Inductance
-
634. A metal cube with sides of length "a" has electrical resistance R between opposite faces C



What is the resistance between the opposite faces of a cube of the same metal with sides of length 3a? **2018-Med**

- A) 9R B) 3R
 C) R/3 D) R/9
-
635. A filament lamp has a resistance of 180Ω when the current in it is 500 mA. What is the power dissipated in the lamp? **2018-Med** A
 A) 45 W B) 90 W
 C) 290 W D) 360 W
 Hints: $P = IV = I^2 R = (0.5)^2 \times 180 = 45 \text{ W}$
-
636. Wire a has the same length and resistance as wire B. the diameter of A is double that of B. what is the ratio of the resistivity of wire A to that of wire B? **2018-Eng** B
 A) 1:2 B) 4 : 1
 C) 1:4 D) 2: 1
 Hints: $\rho_1/\rho_2 = A_1/A_2 = d_1^2/d_2^2 = (2B)^2/B^2 = 4/1 = 4:1$

637. Three resistors of resistances 20Ω , 4Ω and 6Ω are connected in parallel across a D.C supply. The ratio of the current through the 2Ω resistor to the current through the 4Ω resistor is: **2018-Eng**
 A) 1:2 B) 2:1
 C) 1:4 D) 1:6
-
638. Four 20Ω resistors are connected in parallel and combination is connected to a 20 V emf device. The current in the device is: **2015-97 Med**
 A) 0.25 A B) 1.0 A
 C) 4.0 A D) 5.0 A
 C $\frac{1}{R_{eq}} = \frac{1}{R_1} + \frac{1}{R_2} + \frac{1}{R_3} + \frac{1}{R_4}$, Hence $R_{eq} = 5\Omega$ and $I = \frac{V}{R} = \frac{20}{5} = 4.0\text{ A}$
-
639. Several resistors are connected in parallel the resistance of their equivalent resistor will: **2014-99: Med**
 a) Increase b) Decrease
 c) Not change d) None of these
 B $\frac{1}{R_{eq}} = \frac{1}{R_1} + \frac{1}{R_2} + \frac{1}{R_3} + \dots + \frac{1}{R_n}$
 $= R_{eq}$ is decreased
-
640. What is the current in a 2×10^6 ohms resistor having a potential difference of 6×10^3 volts? **2005-43 Med**
 (a) $1 \times 10^{-3}\text{ A}$ (b) $2 \times 10^{-3}\text{ A}$
 (c) $3 \times 10^{-3}\text{ A}$ (d) $4 \times 10^{-3}\text{ A}$
 C $I = \frac{V}{R} = \frac{6 \times 10^3}{2 \times 10^6} = 3 \times 10^{-3}\text{ A} = 3 \times 10^{-3}\text{ A}$
-
641. A 50Ω resistance wire is stretched such that its length is doubled and its cross section area becomes half. The new resistance is: **2008-195 Med**
 (a) 100Ω (b) 200Ω
 (c) 50Ω (d) 150Ω
 B We know that $R = \rho L/A$ making $L \rightarrow 2L$ and $A \rightarrow A/2$ the R becomes $= \rho 2L/A/2 = 2 \times 2 \rho L/A = 4\rho L/A = 4R$. $4 \times 50 = 200\Omega$
-
642. A wire of uniform cross section A , length l and resistance R is cut into two equal pieces. The resistivity of each piece will be: **2011-112 Med**
 (a) The same (b) One fourth
 (c) Double (d) One half
 A Resistivity depends on nature of material not on its dimension
-
643. A cylindrical wire 4.0 m long has a resistance of 31Ω and is made of metal of resistivity $1.0 \times 10^{-4}\Omega\text{ m}$. What is the radius of cross section of the wire? **2012-117 Eng**
 (a) $1.0 \times 10^{-4}\text{ m}$ (b) $2.0 \times 10^{-21}\text{ m}$
 (c) $6.4 \times 10^{-8}\text{ m}$ (d) $2.0 \times 10^{-4}\text{ m}$
 D $R = \rho L/A = \rho L/\pi r^2 \rightarrow r^2 = \rho L/\pi R$
 putting values $r^2 = 1.0 \times 10^{-4} \times 4/3.14 \times 32$
-
644. The unit of conductance is: **2007-169 Med**
 (a) Ohm (b) Ohm-meter⁻¹
 (c) Ohm-meter (d) mho
 d The unit of resistance is opposite to that of resistance conductance $= 1/\text{ohm} = \text{ohm}^{-1} = \text{mho}$
-
645. The resistance of a conductor having a length of one meter and an area of cross section one square meter is called **2011-113 Eng**
 (a) Conductance (b) Resistivity
 (c) conductivity (d) mho
 B
-
646. Two metallic conductors have the same value of resistivity. These conductors can be differentiated from the values of their: **2011-115 Med**
 (a) Temperature coefficient (b) resistances
 (c) conductance (d) conductivity
 A
-
647. Two wires P and Q have resistances R_P and R_Q respectively. Wire P is twice as long as wire Q and has twice the diameter of wire Q. the wire are made of the same material. What is the ratio R_P / R_Q ? **2012-136 Eng**
 (a) 0.5 (b) 1
 (c) 2 (d) 4
 A $R_P : R_Q = \frac{1}{2} : 1 = 1 : 2 = \frac{1}{2} = 0.5$
-
648. Several resistors are connected in parallel the resistance of their equivalent resistor will: **2010-04 Eng**
 B $\frac{1}{R_{eq}} = \frac{1}{R_1} + \frac{1}{R_2} + \frac{1}{R_3} + \dots + \frac{1}{R_n}$

	(a) Increases (c) Not change	(b) Decreases (d) None		=Req is decreased
649.	The resistances of 3 ohm 4 ohm and 5 ohm are connected in parallel if the potential difference across 3 ohm resistor be 12 volt then the potential difference across 4 ohm and 5 ohm will be: 2010-109 Eng: (a) 3volt (b) 6volt (c) 9 volt (d) 12 volt		D	In parallel voltage remain same
650.	Two heating coils X and Y of resistance R_x and R_y respectively deliver the same power when 12V is applied across x and 6V is applied across y. what is the ration of R_x/R_y ? 2012-172 Eng: (a) $\frac{1}{4}$ (b) 6 (c) 2 (d) 4		d	$P_x : P_y \Rightarrow \frac{v^2}{R_x} : \frac{v^2}{R_y} = \frac{(12)^2}{R_x} : \frac{(6)^2}{R_y} = \frac{144}{R_x} : \frac{36}{R_y} \Rightarrow \frac{R_x}{R_y} = \frac{144}{36} = 4$
651.	Three equal resistors connected in parallel have equivalent resistance $R/3$. When they are connected in series then the equivalent resistance is: 2013-96 Med: (a) $R/3$ (b) R (c) $2R$ (d) $3R$		D	Req: (In Series) = $R+R+R= 3R$
652.	The resistors of 5Ω , 4Ω and 3Ω are connected in parallel. If the potential difference across 4Ω resistor is 6 volt, then the potential difference across 5Ω and 3Ω will be: 2011-116 Eng: (a) 6 volt (b) 3 volt (c) 12 volt (d) 9 volt		A	In parallel voltage remain same while in series the current remains same
653.	A wire of resistance 4Ω is bent into a circle. The resistance between the ends of a diameter of the circle is: 2014-21; Med (a) 4Ω (b) 1Ω (c) $1/4\Omega$ (d) $1/16\Omega$		B	
654.	A wire of resistance 3.0Ω is stretched to twice its original length. The resistance of new wire will be: 2014-12; Med (a) 1.5Ω (b) 3.0Ω (c) 6.0Ω (d) 32.0		C	
655.	By how many times does doubling the diameter of a wire and making it 10 times longer increase its resistance? 2014-196 Med: (a) 2.5 times (b) 5 times (c) 10 times (d) 30 times		A	
656.	A student connect a 6 volt battery and a 12 volt battery in series and then connects this combination across a 10Ω resistor. What is the current is the resistor? 2014-164; Med (a) 0.8 A (b) 1.8 A (c) 0.9 A (d) 2.6 A		B	In series the voltage are added, Hence the net voltage will be $=6V+12V=18V$ Thus; $I=V/R=18/10=1.8A$
657.	The resistance of three arms of the balanced wheat stone bridge are 50 ohm . The resistance in the 4 th ohm: 2007-193 Med: (a) 25ohm (b) 50 ohm (c) 75 ohm (d) 100 ohm		B	
658.	Conductivity is: 2015-48 Eng A) The same as resistivity B) Expressed in Ω^{-1} C) Equal to $1/\text{resistance}$ D) Expressed in $(\Omega\text{-m})^{-1}$		D	$\text{Conductivity} = \sigma = \frac{L}{RA}$
659.	If the potential difference across a resistor is doubled: 2016-24 Med (a) Only the current is doubled (b) Only the current is		A	

halved

(c) Only the resistance is doubled (d) Only the resistance is halved

660. The temperature coefficient of resistance of a semiconductor is: **B**
2016-159 Med
 (a) Positive (b) **Negative**
 (c) Imaginary (d) Zero
-
661. A certain wire has resistance R. Another wire, of the same material, has half the length and half the diameter of the first wire. The resistance of the second wire is: **c**
2016-191 Eng
 (a) R/4 (b) R/2
 (c) **R** (d) 2R
-
- Emf, Kirchhoff's Law, Wheatstone Bridge & Potentiometer:**
662. The resistance of a device is designed to change with temperature. What is the device? **D**
2017-08 Med
 A) A light dependent resistor
 B) A potential divider
 C) A semiconductor diode
 D) A thermistor
-
663. When will 1 C of charge pass a point in an electrical circuit? **C** $Q = It = 5 \times 10^{-3} \times 200 = 1C$
2017-16 Med
 A) When 1A moves through a voltage of 1V
 B) When a power of NOW is used for 1s
 C) When the current is 5mA for 200s
 D) When the current is 10A for 10s
-
664. A cell of internal resistance 2.0Ω and electromotive force (e.m.f) 1.5V is connected a resistor of resistance 3.0Ω . What is the potential difference across the 3.0Ω resistor? **C**
2017-17 Med
 A) 5V B) 1.2V
 C) 0.9V D) 0.6V
 $I = V / R + r$
 $= 1.5 / 3 + 2 = 3/10 =$
 $V = IR$
 $= 3 \times [3/10]$
 $= 9/10 = 0.9 \text{ volt}$
-
665. When we are measuring the internal resistance of a cell by potentiometer, the emf of the battery must be greater than the: **A**
2018-Med
 A) emf of the cell B) P.D in the circuit
 C) Current in the cell D) Current in the circuit
-
666. A typical mobile phone battery has an e.m.f. of 5.0 V and internal resistance of $200 \text{ m}\Omega$, what is the terminal P.D. of battery when it supplies current of 500 mA? **B**
2018-Med
 A) 4.8 V B) 4.9
 C) 5.0 V D) 5.1 V
 $I = V / R + r$
 $\rightarrow \text{Emf} = I(R + r)$
 $E = IR + Ir$
 $= V + Ir =$
 Thus $V = E - Ir = 5 - 0.1 = 4.9$
-
667. Kirchhoff's first law is based upon law of conservation of **A**
2018-Eng
 A) Charge B) Energy
 C) Mass D) Momentum
 First law = KCL $\rightarrow I = Q/t \rightarrow Q$
 $= \text{law of conservation of charge}$
-
668. A generator produces 100 KW of power at a potential difference of 10kV. The power is transmitted through cables of total resistance of 5Ω . How much power is dissipated in the cables? **C**
2018-Eng
 A) 50 W B) 250 W
 C) 500 W D) 1000 W.
-
669. The total driving force of the battery to draw current through a circuit is called: **D**
2011-118 Med:
 (a) voltage of battery (b) power of battery
 (c) Emf of battery (d) all of these

670. The circuit in which the terminal voltage of the battery is equal to the emf of the battery is the: **2011-119 Eng:**
 (a) open circuit (b) close circuit
 (c) short circuit (d) electric circuit
671. Kirchoff's first law is based upon law of conservation of: **2012-29 Eng:**
 (a) charge (b) energy
 (c) mass (d) momentum
672. Potentiometer is the instrument works on the principle of: **2009-57 Med:**
 (a) Kirchhoff's 1st law (b) Wheatstone bridge
 (c) Combination of resistance (d) Kirchhoff's 2nd law
673. The birds sitting on an overhead transmission line suffer no harmful effects because: **2012-191 Med:**
 (a) Their bodies have high resistance
 (b) Their feet are good insulators
 (c) There is negligible potential difference between their feet
 (d) Wires are insulated
674. Which of the following is not vector quantity? **2012-75 Med:**
 (a) E.F. Intensity (b) G.F. Intensity
 (c) Magnetic Induction (d) Emf
675. Which of the following pairs have the same units and dimensions. **2012-182 Med:**
 (a) Resistance and Resistivity (b) Conductivity and Resistivity
 (c) Emf & P.D (d) Resistivity and Temp co-efficient of resistivity
676. A current of 20.0A flows through a battery with an emf of 6.20 V. If the internal resistance of the battery is 0.01Ω , what is the terminal voltage? **2014-01 Med:**
 (a) 6.40V (b) 31.0V
 (c) 1.24V (d) 6.00V
677. Four wires meet at a junction. The first carries 4A in to the junction, the second carries 5A out of the junction, and third carries 2A out of the junction. The fourth carries: **2015-89 Med**
 A) 7A out of junction B) 7A into junction
 C) 3A out of junction D) 3A into the junction
678. Thermocouples convert: **2016-21 Eng**
 (a) Chemical into electrical energy
 (b) Heat into electrical energy
 (c) Mechanical into electrical energy
 (d) Light into electrical energy
679. If two bulbs of 25W and 100W respectively, each rated at 220 volts are connected in series with the supply of 440 volts. Which of the bulb will fuse? **2016-31 Eng**
 (a) 100W bulb (b) 25 W bulb
 (c) Both (a) & (b) (d) None of the above

Chapter-13: ELECTROMAGNETISM

Magnetic Field, Magnetic Flux & Ampere's Law:

680. An electron and a proton enter a magnetic field with equal velocities which one of them experiences more force: **2018-Med**
 A) Electron
 B) Proton
 C) Both experience same force
 D) Cannot be predicted
681. An electron is projected horizontally from south to north in uniform horizontal magnetic field acting from west to east. The direction along which it will be deflected is: **2018-Med**
 A) Northwards
 B) Southwards
 C) Vertically upwards
 D) Vertically downwards
682. The force "F" on a charged "q", moving with velocity "v", parallel to magnetic field "B" is given by: **2018-Eng**
 A) $F = qvb$
 B) $F = Qe$
 C) $F = 0$
 D) $F = ILB$
683. Keeping magnetic field B and velocity of the particles same, which particle will show the most deflection when passes through the magnetic field: **2018-Eng**
 A) β -particles
 B) α -particles
 C) γ -rays
 D) Neutrons
684. The SI unit of magnetic flux density is: **2018-Eng**
 A) $N A^{-1} m$
 B) $N A^{-1} m^{-1}$
 C) $N A m^{-1}$
 D) $N A m$
685. In a magnetic field the charge at rest experiences: **2018-Eng**
 A) No force
 B) Maximum force
 C) Minimum force
 D) Perpendicular force
686. The charged particle is situated in a region of space and it experiences a force only when it is in motion. It can be deduce that the region encloses: **2015-108 Med**
 A) Both electric and magnetic field
 B) Both magnetic and gravitational field
 C) A magnetic field only
 D) An electric field only
687. If the direction of initial velocity of the charged particle is neither along nor perpendicular to that of magnetic field then the orbit will be: **2015-109 Med**
 A) Circle
 B) Helix
 C) Ellipse
 D) Straight line
688. A 0.01A moving coil meter of 5Ω resistance can be converted in in to a 0-2A meter by a resistance R with the meter when R is: **2015-99 Med**
 A) 0.025Ω in parallel
 B) 0.025Ω in series
 C) 0.050Ω in parallel
 D) 0.050Ω in series
689. If the streams of protons moves parallel to each other in the same direction, then they: **2015-50 Eng**
 A) Repel each other
 B) Attract each other
 C) Doesn't exert force on one another
- C $F = qvb \sin \theta$, the force depend on the charge not on the mass. So both will experience same force.
- C $F = qvb \sin \theta \rightarrow$ here $\theta = 0$ so $\sin 0 = 0 \rightarrow qvb (0) = 0$
- A Beta particle contain 2 electrons and 2 neutron so it has more charge and F is directly proportional to the charge. $F = qvb \sin \theta$
- B $\Phi = BA = [F/IL][A] = [N / A m] [m^2] = N/Am = \text{webr}$
- A Magnetic field is due to charge in motion, if charge is entered to magnetic field it will experience a force but if it is rest, it will no experience any force
- C If there were electect field charge particle will experience a force even in rest.
- B When θ is b/w 0° & 90° the perpendicular component will rotate charge particle in circle and horizontal component will move charge ahead so helix will be followed.
- A $R_s = \frac{I_g R_g}{I - I_g}$
- B If protons move in same direction, their magnetic field in their centre are in oposite direction so they cancel the effect of each other and they will attract each other. On the

D) Get rotate

other hand if they move in opposite direction they will repel each other.

690. Two metallic wires are lying parallel. If the current in these wires be flowing in the same direction, the wires will: **2011-122 Med:** A
 (a) Attract each other
 (b) Repel each other
 (c) Have no force of attraction or repulsion
 (d) Remain stationary
691. If the current in parallel conductor be flowing in opposite direction then two conductor will **2011-123 Eng: 2006-70 Med:** B
 (a) Attract each other
 (b) Repel each other
 (c) Neither attract nor repel each
 (d) None of these
 If the current flows in opposite direction the magnetic field in their centre will be in same direction in their centre so they will attract each other and if the current flows in same direction, they will attract each other because magnetic field direction will be opposite in their centre.
692. A wire loop is placed in a magnetic field. The magnetic flux passing through the loop is minimum when the angle between the field lines and the normal to the surface area of the wire loop is: **2012-106 Eng:** C
 (a) 0° (b) 45°
 (c) 90° (d) 270°
 $\phi = B \cdot A = BA \cos \theta = BA \cos 90^\circ = 0$
693. The SI unit of magnetic flux is weber which is equal to: **2011-125 Med:** A
 (a) NmA^{-1} (b) Nm^2A^{-1}
 (c) NA m^{-1} (d) NmA^{-2}
 magnetic flux = $BA \cos \theta = FA/IL = \text{Nm}^2/\text{A m} = \text{Nm/A}$
694. Which derived unit below is equivalent to the SI unit for magnetic field strength, the tesla, T? **2013-168 Eng, 2014-10 Med:** C
 (a) Nm/A (b) NA/m
 (c) N/Am (d) Am/N
695. The time rate of change of magnetic flux has the same dimensions as that of: **2012-42, Med:** D
 A) Current B) Resistance
 C) Magnetic induction D) Potential difference
696. The force exerted on a wire of length one meter carrying a current of one ampere lying normal to magnetic field is called: **2010-124 Med:** B
 (a) Magnetic flux (b) Magnetic flux density
 (c) Magnetic permeability (d) None of these
697. The magnetic field due to current in solenoid can be increased by: **2011-126 Eng:** D
 (a) Increasing the number of turns (b) using soft iron core
 (c) Increasing the current (d) all of these
698. When a charged particle enters a uniform magnetic field, there is a change in: **2012-135 Med:** C
 (a) Kinetic energy (b) Magnitude of velocity
 (c) Direction of velocity (d) All of these
699. If a stationary electron is subjected to a uniform magnetic field it will be: **2013-102 Eng:** A
 (a) Unaffected
 (b) Accelerated in the direction of field

- (c) Caused to move in a circular path
(d) Caused to oscillate about a fixed point
-
700. Which derived unit below is equivalent to the SI unit for magnetic field strength, the tesla, T? C
2014-10 Med:
 (a) Nm/A (b) NA/m
 (c) N/Am (d) Am/N
-
701. Which type of field is present near a moving electric charge? C
2009-137 Med:
 (a) An Electric field only
 (b) A magnetic field only
 (c) Both magnetic and electric field
 (d) Magnetic and gravitational field
-
702. A wire of length 10 cm lying normal to magnetic field of 0.5T is experiencing a force of 5N. The current in the wire is; C
2010-184 Med:
 (a) 10A (b) 50A
 (c) 100A (d) 500A
- $F = ILB \rightarrow I = \frac{F}{LB} = \frac{5}{0.5 \times 0.1} = \frac{5 \times 100}{5} = 100A,$
-
703. Two long parallel wires x and y carrying a current of 3A and 5A respectively. The force per unit length experienced by x is $5 \times 10^{-5} \text{ N}$ to the right, the force per unit length experienced by wire y is; B
2015-107 Med:
 A) $2 \times 10^{-5} \text{ N}$ to left B) $3 \times 10^{-5} \text{ N}$ to the right
 C) $5 \times 10^{-5} \text{ N}$ to the right D) $5 \times 10^{-5} \text{ N}$ to the left
- Two parallel wires carrying current in same direction always attract each other.
-
704. The force on electron in electric field of 10^8 NC^{-1} ; D
2010-126 Med:
 (a) 1.6×10^{-4} (b) 1.6×10^{-8}
 (c) 1.6×10^{-10} (d) 1.6×10^{-11}
- $F = qE = 1.6 \times 10^{-19} \times 10^8 = 1.6 \times 10^{-11}$
-
705. An electron is projected with a velocity V into a region where there exists a uniform electric field of strength E perpendicular to a uniform magnetic field of directly B . if the electron velocity to remain constant, V must be; D
2015-149 Med:
 A) of magnitude B/E and parallel to B
 B) of magnitude E/B and parallel to B
 C) of magnitude B/E and perpendicular to both \vec{E} and \vec{B}
 D) of magnitude E/B and perpendicular to both \vec{E} and \vec{B}
- It is velocity selector and electron will go with constant
-
706. The unit "henry" is equivalent to: A
2016-66 Med:
 (a) Volt-second/ampere (b) Volt/second
 (c) Ohm (d) Ampere volt/ second
-
707. The changing electric flux in a certain region of space produces: B
2016-86 Med:
 (a) An electric field (b) Magnetic field
 (c) both S and A (d) None of the above
-
708. A moving charged particle is surrounded by? C
2016-127 Med:
 (a) 1 fields (b) 3 fields
 (c) 2 fields (d) 4 fields
-
709. An electron enters a magnetic field acting vertically downwards with a velocity V from east. The electron is deflected along. a
2016-33 Eng:
 (a) North (b) South
 (c) East (d) West

Applications of Magnetic Field, Velocity Selector, Galvanometer,

710. The current produced due to induced emf depends upon; **2010-128 Med:** C $B = \mu_0 n I \rightarrow I = \frac{B}{\mu_0 n}$
 (a) Area of coil
 (b) Shape of coil
 (c) Turns of coil
 (d) Strength of M. Field in which coil rotates
-
711. A solenoid has length l and Number of turns. It carries a current I the magnetic field produced inside the solenoid will be: **2008-137 Med:** C $B = \mu_0 \frac{NI}{l}$
 (a) $B = \mu_0 NI l$ (b) $B = \mu_0 \frac{l}{NI}$
 (c) $B = \mu_0 \frac{NI}{l}$ (d) $B = \mu_0 \frac{ll}{N}$
-
712. For the production of electromagnetic waves the charges used are: **2010-71 Med:** C
 (a) Stationary charges (b) Charges moving with uniform (c) Accelerating charges (d) All
-
713. In CRO the time base circuit is connected to: **2010-181 Med:** A
 (a) Vertical plates (b) Electron gun
 (c) Horizontal plates (d) Fluorescent screen
-
714. In CRO, the time bases sweep circuit is connected to the: **2009-127 Med:** A
 a. X-plate b. Y-plate
 c. Electron gun d. Accelerating electrode
-
715. The waveform of sinusoidal voltage, its frequency and phase can be found by: **2012-127 Med:** A
 (a) CRO (b) Diode
 (c) Transistor (d) Radio
-
716. A source of e.m.f. of 9.0 mV has an internal resistance of 6.0 Ω . It is connected across a galvanometer of resistance 30 Ω . What will be the current in the galvanometer? **2013-05 Eng:** B $V = I_g R_g$
 (a) 250 μA (b) 300 μA
 (c) 1.5 mA (d) 2.5 mA
-
717. Which experimental technique reduces the systematic error of the quantity being investigated? **2014-42 Med:** A
 (a) adjusting an ammeter to remove its zero error before measuring a current
 (b) Measuring several intermodal distance on a standing wave to find the mean Internodal distance.
 (c) Measuring the diameter of a wire repeatedly and calculating the average.
 (d) Timing a large number of oscillations to find a period

CHAPTER-14: ELECTROMAGNETIC INDUCTION

ELECTROMAGNETIC INDUCTION, FARADAY'S LAW & LENZ'S LAW:

718. The phenomenon used for producing emf in coil of generator is; **2007-54 Med:** D
 (a) Mutual induction (b) Self induction
 (c) Electrostatic induction (d) Electromagnetic inductions

719. The magnetic force action on a unit charge moving perpendicular to the magnetic field with unit velocity is called; **a**
2007-144 Med:
 (a) Magnetic induction (b) Magnetic permeability
 (c) Magnetic flux (d) Permittivity
-
720. $\frac{\text{volt} \times \text{second}}{\text{ampere}}$ is equal to: **2011-135 Med** **c**
 (a) gauss (b) weber
 (c) henry (d) tesla
-
721. The SI unit of inductance is: **2010-02 Med:** **d**
 (a) Weber (b) Weber meter⁻²
 (c) Tesla (d) Henry
-
722. The mechanical energy spent by the, external agency is converted into electrical energy stored in the coil. This relates to: **2015-117 Med** **C** Induce Emf oppose its cause, this opposition force is converted to electrical energy & simply Lenz's Law is consistent with law of conservation of energy.
 A) Ohm's law B) Coulomb's law
 C) Lenz's law D) Newton's law of motion
-
723. The magnitude of induced e.m.f in the loop depends upon; **2011-133 Eng:** **C** $E = -\Delta\phi \frac{d\phi}{dt}$
 (a) Change of electric flux (b) rate of change electric flux
 (c) rate of change of magnetic flux (d) change of magnetic flux
-
724. Lenz's law is a particular form of law of conservation of : **2012-87 Med:** **C**
 (a) Charge (b) Current
 (c) Energy (d) Magnetic field
-
725. A 100m long conductor. Carrying current of 2A is at right angle to B of 0.5 wb-m². The force experienced by the conductor is: **2009-134 Med:** **C** $F_m = IBL = 2 \times 100 \times 0.5 = 100\text{N} = 10^2 \times 10^5 = 10^7 \text{dynes} (1\text{N} = 10^5 \text{dyne})$
 (a) 1.2N (b) 3 dynes
 (c) Energy (d) 10⁵ dynes
-
726. The magnetic induction at a distance of 0.1m from a straight wire through which 10A current flow is: **2010-141 Eng:** **B** $B = \mu_0 I_n = \mu_0 \frac{N}{l} \times I$,
 (a) $0.2 \times 10^{-5} \text{T}$ (b) $2 \times 10^{-5} \text{T}$
 (c) $0.02 \times 10^{-5} \text{T}$ (d) $0.002 \times 10^{-5} \text{T}$
-
727. The e.m.f that appears in Faradays law is; **2015-180 Eng** **D** Left hand Rule
 A) Around a conducting circuit
 B) Around the boundary of surface used to compute magnetic field
 C) Throughout the surface used to compute magnetic flux
 D) Perpendicular to the surface used to compute magnetic flux
-
728. You push a permanent magnet with its north pole away from you towards the loop of conducting wire in front of you. Before the north pole enters the loop the current in the loop is: **2015-15 Eng** **A** According to Lenz Law induce Emf always opposes its cause.
 A) Clockwise B) Anti-clockwise
 C) Towards left D) Towards right
-
729. A hydrogen atom that has lost its electron is moving east in a region where the magnetic fields directed from south to north. It will be deflected: **2016-94 Med** **A** H^+ is a positive charge and for positive charge we use left hand rule... Fore Finger show Magnetic Field. Middle Finger show Voltage direction and Thumb show deflection, So direction is up by
 (a) Up (b) Down
 (c) North (d) South
 Extra Point;

Note; If this question had H⁺ than answer would DOWN Because of Right Hand Rule. For negative charge we use Right hand Rule..

this Rule..

730. The frequency at which 1 henry inductor have reactance of 500Ω is: **2016-108 Med** A **Hints; $X_L = 2\pi fL$
 $f = X_L / 2\pi L = 500\Omega / 2 \times 3.14 \times 1 = 500 / 6.28 = 79.6 = 80\text{Hz}$**
 (a) 80Hz (b) 800Hz
 (c) 8000Hz (d) 50Hz
-
731. As a loop of wire with a resistance of 10Ω moves in a constant non-uniform magnetic field, it loses kinetic energy at a uniform rate of 4.0 ms/s. The induced current in the loop is: **2016-191 Med** D
 (a) 0 (b) 2 mA
 (c) 2.8 mA (d) 20 mA
-
732. A rectangular loop of wire has area A. It is placed perpendicular to a uniform magnetic field B and then spin around one of its sides at frequency f. the maximum induced emf is: **2016-132 Eng** D
 (a) BAf (b) 1BAf
 (c) 2BAf (d) 2πBAf
-
- INDUCE EMF, SELF & MUTUAL INDUCTION:**
-
733. Solenoid B has twice the radius and six times the number of turns per unit length as solenoid A. The ratio of the magnetic field in the interior of B to that in the interior of A is: **2017-Eng** C $B = \mu_0 nI \rightarrow \frac{B_b = \mu_0 6 nI}{B_a = \mu_0 nI} = \frac{B_b}{B_a} = 1 = \frac{6}{1} = 6$
 A. 2 B. 4
 C. 6 D. 1
-
734. As a loop of wire with a resistance of 10N moves in a constant non uniform magnetic field, it loses K.E. at a uniform rate of 4.0 m/s the induced current in the loop is: **2017-Eng** d
 A. 0 B. 2mA
 C. 2.8mA D. 20Ma
-
735. A long solenoid has length L and total number of N turns, each of which has a cross sectional area A, its Inductance: **2015-Med** D
 A) $\mu_0 N^2 AL$ B) $\mu_0 N^2 A/L$
 C) $\mu_0 N^2 L/A$ D) $\mu_0 NI/A$
-
736. A flat coil of wire having 5 turns, has an inductance L. The inductance of similar coil having 20 turns is: **2015-Med** A $E = \frac{\Delta}{\Delta t} (N\phi)$, Thus $E \propto N$, If N become 4 times E will also increase 4 times.
 A) 4L B) L/4
 C) μL D) L
-
737. The dimension of self inductance is; **2015-Eng** B
 A) MLT^{-2} B) $ML^2T^2A^{-2}$
 C) $M^2L^{-1}T^1$ D) MT^2A^{-1}
-
738. When an iron core is inserted in to coil, its coefficient of self – induction; **2015-Eng** A Iron core effect magnetic field and oppose charges.
 A) Increases B) Decrease
 C) Remains the same D) Become zero
-
739. Self induction of the coil depends upon: **2010-Eng:** D $L = \mu_0 n^2 La$
 (a) Area of coil (b) Number of turns
 (c) Length of coil (d) All of these factors
-
740. The motional e.m.f depends upon **2011-Med:** D $E = BVL$
 (a) Strength of magnetic field (b) length of conductor
 (c) Speed of conductor (d) all of these

741. A wire loop is moved parallel to a uniform magnetic field. The induced emf in the loop will: **2008-Med:** B
 (a) Be maximum (b) be zero
 (c) depend on the size of the coil (d) None of the above..
-
742. A 50 mH coil carries a current of 2 ampere. The energy stored in magnetic field is: **2007-Med:** B
 (a) 10 joule (b) 0.1 joule
 (c) 0.01 joule (d) 1.0 joule

$$\text{Energy stored in M. Field} = \frac{1}{2} LI^2 = \frac{1}{2} (50 \times 10^{-3}) \times 2^2 = \frac{1}{2} \times 50 \times 10^{-3} \times 2 \times 2 = 0.1$$
-
743. The energy stored in 40 mH coil carrying 2 ampere is: **2011-Eng:** C
 (a) 0.1 J (b) 0.8 J
 (c) 0.08 J (d) 0.01 J

$$\text{Energy stored in M. Field} = \frac{1}{2} LI^2 = \frac{1}{2} (40 \times 10^{-3}) \times 2^2 = \frac{1}{2} \times 40 \times 10^{-3} \times 2 \times 2 = 0.08 \text{ J}$$
-
744. A long solenoid has magnetic field strength $3.14 \times 10^{-2} \text{ T}$ inside it when a current of 5A passes through it. The number of turns in 1m of the solenoid is: **2016-Eng** C
 (a) 1000 (b) 3000
 (c) 5000 (d) 10000

EDDY CURRENT, AC MOTOR, BACK EMF & TRANSFORMER:

745. In an ideal transformer connected to a 240v A.C with number of turns in primary coil are 1000 & in secondary coil are 50 turns. The output connected to the load of 10Ω . The current passes through load is: **2015-16 Eng** A
 A) 1.2 A B) 24 A
 C) 48 A D) 120 A

$$\frac{V_s}{V_p} = \frac{N_s}{N_p}, V_s = \frac{N_s}{N_p} V_p, \text{ As } V_p, N_s \text{ \& } N_p \text{ are given So, } V_s = I_s R, \text{ Thus putting } V_s \text{ we get; } \frac{N_s}{N_p} V_p = I_s R, \text{ Now find "I_s" by putting respective values; } \frac{50}{1000} \times 240 = I_s(10) \text{ Hence } I_s = 1.2 \text{ A,}$$
-
746. The efficiency of a transformer which draws a power of 20 watt is 60%, the power supplied by it is: **2015-118 Med** D
 A) 5 W B) 1.2 W
 C) 6 W D) 12 W

$$\text{(Efficiency) } \eta = \frac{P_o}{P_i} = 60\%, \text{ Thus } P_o = P_i \times 60\% = 20 \times 60/100 = 12 \text{ W.}$$
-
747. The counter torque produced in the moving coil of generator is called: **2011-138 Med:** D
 (a) restoring torque (b) deflection torque
 (c) back motor effect (d) all of these
-
748. The phenomenon of mutual induction is induction is practically used is: **2008-19 Med:** A
 (a) Transformer (b) Generator
 (c) Galvanometer (d) Avometer
-
749. The function of a main transformer is to convert: **2013-53 Med:** B
 (a) One direct voltage to another direct voltage of different magnitude.
 (b) One alternating voltage to another alternating voltage of different magnitude.
 (c) A high value alternating voltage to low value direct voltage.
 (d) A high value alternating current to low value direct voltage.
-
750. In step up transformer when the alternating voltage increases then the alternating current. **2010-68 Med:** B
 (a) Will increase (b) Will decrease
 (c) Will not change (d) None of the above
-
751. An ideal transformer steps up or steps down: **2012-69 Med:** B
 (a) Energy (b) AC voltage
 (c) DC voltage (d) Power

752. A transformer changes 12 V to 18000 V and there are 6000 turns in the secondary coil. The number of turns in the primary coil are: **2009-160 Med:** d $\frac{V_s}{V_p} = \frac{N_s}{N_p} \Rightarrow N_p = \frac{N_s}{V_s} \times V_p = \frac{6000 \times 12}{18000} = N_p = 4$
- (a) 40 (b) 20
(c) 20 (d) 4
-
753. The alternating current can be measured from its; **2007-Med:** D
(a) Magnetic effect (b) Heating effect
(c) Chemical effect (d) All of the above effects
-
754. The energy used to magnetize and demagnetize the core of transformer causes power loss which is due to; **2011- Eng:** C
(a) Winding in coil of transformer (b) Eddy current
(c) hysteresis (d) all of these
-
755. A generator produces 100 kW of power at a potential difference of 10KV. The power is transmitted through cables of total resistance 5Ω. How much power is dissipated in the cables? **2013-29 Med:** C $I_i = \frac{P}{V_i} = \frac{100 \times 10^3}{10 \times 10^3} = 10A$
 $P = I^2 R \rightarrow (10)^2 (5) = 500 \text{ Watt}$
(a) 50 W (b) 750 W
(c) 500 W (d) 1000 W
-
- A step-up transformer is one that: **2014-165: Med** C
(a) Increase the power (b) Increase the current
(c) Increase the voltage (d) Increase the energy

CHAPTER-15: ALTERNATING CURRENT

SINUSOIDAL ALTERNATING VOLTAGE & CURRENT & R.M.S VALUE:

756. In the case of AC: average value of current is: **2006-Med:** C The average is zero because in AC the current change its direction and its average is zero.
(a) $\sqrt{2}$ times the maximum
(b) $1/\sqrt{2}$ times the maximum current
(c) Zero
(d) $1/2$ times maximum current
-
757. 9. Which statement is not valid? **2017-Eng** D $V = IR$
A. Current is the speed of the charged particles that carry it. $R = V/I$
B. Electromotive force (e. m.f.) is energy converted to electrical energy from other forms per unit charge
C. The potential difference (p. d.) between two points is the work done per unit charge when moving charge from one point to the other.
D. The resistance between two points is the (p. d.) between the two points per unit current.
-
758. The instantaneous current in a circuit is given by $\sqrt{2} \sin(\omega t + \theta)$ 1 ampere what is the rms value of the current? **2018-Med** C $I_{rms} = I_{max} / \sqrt{2}$ here from equation $I_m = \sqrt{2}$ so $I_{rms} = \sqrt{2} / \sqrt{2} = 1$
A) 2A B) $\sqrt{2}$ A
C) 1A D) $1/\sqrt{2}$ A
-
759. An alternating current in ampere varies with time to second as $I = 4 \sin(200\pi t)$, the frequency of current is: **2015-17 Eng** A $I = I_0 \sin \omega t$ & $\omega = 2\pi f$, If $\omega = 200\pi$ Thus ; $2\pi f = 200\pi$ Hence $f = 100\text{Hz}$.
A) 100 Hz B) 50 Hz
C) 400 Hz D) 150 Hz
-
760. An A.C varies with time (t) sec as $I = 4 \sin(200\pi t)$, the r.m.s value of current in "A" is: **2015-90 Eng** C $I = I_0 \sin \omega t$ & $I(rms) = \frac{I_0}{\sqrt{2}}$, As $I_0 = 4$ Thus $I(rms) = \frac{4}{\sqrt{2}}$
A) 2 B) $4\sqrt{2}$
C) $\frac{4}{\sqrt{2}}$ D) $\frac{2}{\sqrt{2}}$
-
761. Instantaneous emf at instant t is $V = 20 \sin(100\pi t)$. The frequency of alternative current is: **2015-127 Med** C $V = V_0 \sin \omega t$ & $\omega = 2\pi f$, If $\omega = 100\pi$ Thus ; $2\pi f = 100\pi$
A) 100 Hz B) 200Hz

C) 50 Hz

D) 150Hz

Hence $f = 50\text{Hz}$.

762. 4. The sinusoidal AC current in a circuit is $I = 50 \sin(20t)$. The peak value of current is: **2012-195 Med:** C
 (a) 100 A (b) 25 A (c) 50 A (d) 20 A

763. An alternating current is represented by the equation $I = I_0 \sin \omega t$. Which one of the following equations represent an alternating current that has half the amplitude and double the frequency? **2012-09 Eng:** C
 (a) $I = 2I_0 \sin \omega t$ (b) $2I = I_0 \sin \frac{1}{2} \omega t$
 (c) $I = \frac{1}{2} I_0 \sin 2 \omega t$ (d) $2I = I_0 \sin \omega t$

764. In alternating current the average value of current in cycle is: A
 (a) Zero (b) Constant
 (c) Positive (d) Maximum

765. The rms value of alternating voltage; **2010-125 Eng:** C
 (a) 1.77 volt (b) 17.7 volt
 (c) .707 volt (d) 0.0177 volt

766. In the case of AC: average value of current is: **2006-18 Med:** C
 (a) $\sqrt{2}$ times the maximum (b) $\frac{1}{\sqrt{2}}$ times the maximum current
 (c) Zero (d) $\frac{1}{2}$ times maximum current

A.C. THROUGH RESISTANCE, INDUCTANCE & CAPACITANCE, R.L.C CIRCUIT:

767. The phase angle between the voltage and current in A.C through a pure inductor is: **2015-92 Eng:** B
 A) 0° B) 90°
 C) 60° D) 180°

768. An Alternating current of r.m.s. 20mA passes through a $4\text{K}\Omega$ resistor. What is the average power dissipated? **2012-73 Eng:** B
 (a) 0.8w (b) 1.6w
 (c) $8 \times 10^8 \text{w}$ (d) $1.6 \times 10^8 \text{w}$
 $P = (I_{\text{r.m.s}})^2 R = (20 \times 10^{-3})^2 \times 4 \times 10^3 = (2 \times 10^{-2})^2 \times 4 \times 10^3 = 4 \times 4 \times 10^{-4} \times 10^3 = 16 \times 10^{-1} = 1.6 \text{Watt}$

769. In simple A.C capacitive circuit: **2010- Eng:, 2008-Med:** C
 (a) the voltage leads the current by 90°
 (b) the voltage lags behind the current by 90°
 (c) The current leads the voltage by 90°
 (d) the current and voltage are in phase.

770. The capacitive reactance of the AC circuit increases: **2011-20-Med:** B
 $X_c = \frac{1}{\omega C} = \frac{1}{2\pi f C} \Rightarrow X_c \propto \frac{1}{f}$
 (a) By increasing the frequency of AC
 (b) By decreasing the frequency of AC
 (c) Does not depend upon the frequency of AC voltage
 (d) None of these

771. In power loss in a capacitor in A.C circuit is: **2009-163 Med:** D
 (a) $\langle P \rangle = V_0 I_0$ (b) $\langle P \rangle = V_0 I_0 \sin \omega t$

$$(c) < P > = V_0 I_0 \cos \omega t \quad (d) < P > = \text{Zero}$$

772. In an AC capacitive circuit, current and voltage phase relation is: B
 (a) In-phase
 (b) Current leads voltage by 90°
 (c) Voltage leads voltage by 90°
 (d) Current leads voltage by 180°
773. The resonance frequency of an LCR circuit is: 2015-91 Eng D
 A) $\frac{1}{2\pi Lc}$ B) $2\pi\sqrt{Lc}$
 C) $\frac{1}{Lc}$ D) $\frac{1}{2\pi\sqrt{Lc}}$
774. In RLC series circuit when the frequency of AC source is very high then such circuit will be; 2011-143 Eng: D $X_L = \omega L = 2\pi fL \Rightarrow (X_L \propto f)$
 (a) Resistive circuit (b) capacitive circuit
 (c) Resonance circuit (d) Inductive circuit
775. In RLC series circuit when the frequency of AC source is very low, the circuit is a / an; 2011-145 Med: B $X_c \propto \frac{1}{f}$
 (a) resistive circuit (b) capacitive circuit
 (c) inductive circuit (d) resonant circuit
776. A.C and D.C have the same: 2016-58 Med C
 (a) Affect in charging battery
 (b) Affect in charging capacitor
 (c) **Heating effect through a resistance**
 (d) Affect passing through an inductance
777. 11. In a purely resistive circuit the current: 2016-41 Med D
 (a) Leads the voltage by one-half of a cycle
 (b) Leads the voltage by one-fourth of a cycle
 (c) Leads the voltage by one-half of a cycle
 (d) **Is in phase with the voltage**
778. In pure inductance, the average power dissipated is: 2016-190 Med D **No power loss in pure inductive or capacitive circuit takes place**
 (a) 1 (b) Greater than 1
 (c) Less than 1 (d) **Zero**

MAXWELL EQUATIONS, ELECTROMAGNETIC WAVES:

779. In house circuit all the electric appliances are connected in parallel between main line and neutral line appliances will have; 2010-85 Med: D
 (a) Same current
 (b) Same power
 (c) Different potential and same current
 (d) Same potential difference
780. Which arrangement of the Photon is in their decreasing energy? 2012-28 Med: B
 (a) γ rays > i.r. > u.v. > visible
 (b) x rays > u.v. > visible > i.r.
 (c) u.v. > x rays > visible > i.r.
 (d) i.r. > visible > x rays > u.v.
781. Which of the following has least wave length? 2009-01; Med B
 (a) α -rays (b) x-rays
 (c) cosmic rays (d) β -rays
782. Which of the following has the high energy photon? 2007-62 Med: D
 (a) Visible light (b) X-rays

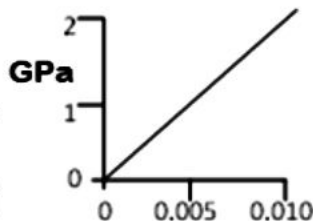
(c) Ultraviolet light (d) γ -rays

783. The radio waves of constant amplitude are called **2007-112 Med** B
 (a) Modulated waves (b) Carrier waves
 (c) Standing waves (d) Rectified waves
784. The process of superposing the sound waves on carrier waves is called: **2010-159 Eng:** B
 (a) Rectification (b) Modulation
 (c) Amplification (d) Transformation
785. The carrier waves on which the low frequency sound waves are superimposed are called C
 (a) micro waves (b) short waves
 (c) modulated waves (d) medium waves
786. The process of combining low frequency signal with high frequency carrier waves is called; **2011-148 Med:** B
 (a) Rectification (b) Amplification
 (c) Modulation (d) Magnification
787. For the production of electromagnetic waves the charges used are: **2010-71 Eng:** C
 (a) Stationary charges (b) Charges moving with uniform
 (c) Accelerating charges (d) All of the above
788. Which of the following rays are not electromagnetic radiations? **2015-135 Eng:** C Cathode rays are electrons and are particles.
 A) X-rays B) UV rays
 C) Cathode rays D) Infrared rays
789. Which of the following electromagnetic waves has the smallest wavelength? **2016-158 Med:** C
 (a) X-rays (b) Gamma rays
 (c) Microwaves (d) Ultraviolet rays

CHAPTER-16: PHYSICS OF SOLIDS

Classification Of Solids, Elastic & Young Modulus, Hook's Law:

790. The stress-strain graph for a metal is shown.



- D Strain energy per unit volume = $\frac{1}{2}$ (stress \times strain)
 $= \frac{1}{2} (2 \times 10^9 \times 0.01)$
 $= 10^{19} \times 10^{-2}$
 $= 10^7 \text{ J/m}^3$
 $= 10 \text{ MJ/m}^3$

What is the strain energy per unit volume of a rod made from this metal when the strain of the rod is 0.0107. **2018-Med**

- (a) 10 kJ m^{-3} (b) 100 kJ m^{-3}
 (c) 1.0 MJ m^{-2} (d) 10 MJ m^{-3}
791. To determine Young's modulus of a material of a given wire of length L we use: **2018-Med** C
 A) Melde's Apparatus
 B) Young's Apparatus
 C) Searle's Apparatus
 D) Cavendish Apparatus

792. The young's modulus of a given rod of uniform length L is given by the relation: **2018-Med** C $Y = F/A \div \Delta l/L = FL / A\Delta l = FL / \pi r^2 l$
 A) FL/A B) FA/L
 C) $FL/\pi r^2 l$ D) $FL/\pi r^2 L$
-
793. What is represented by the gradient of a graph of force F (vertical axis) against extension x (horizontal axis)? **2018-Eng** B $F = kx \rightarrow k = F/x$
 A) Elastic limit B) Spring constant
 C) Stress D) Young modulus
-
794. A spring obeying Hooke's law has an unstretched length of 50 mm and a spring constant of 400 N/m. What is the tension in the spring when its overall length is 70 mm? **2018-Eng**
 A) 8.0 N B) 28 N
 C) 160 N D) 400 N.
-
795. The shear modulus of elasticity G is **2015-138 Med** C
 A) $\frac{Al}{F\theta}$ B) $\frac{Fl}{A\theta}$
 C) $\frac{F}{A\theta}$ D) $\frac{A\theta}{F}$
-
796. Hooke's law correlates the: **2012-119 Med:** D stress/strain = elastic Modulus (Hook's law)
 (a) Force and displacement (b) Force and extension
 (c) Force and compression (d) Stress and strain
-
797. The reciprocal of bulk modulus is called: **2010-167 Eng:** C
 (a) Plasticity (b) Conductivity
 (c) Compressibility (d) Ductility :
-
798. Which of the following is the most elastic one? **2012-113 Eng:** D
 (a) Rubber (b) Wood
 (c) Sponge (d) Steel
-
799. The solids in which the molecules or ions are arranged in a regular repetitive manner are called: D
 (a) Amorphous solids (b) Glassy solids
 (c) Polymers (d) Crystals
-
800. In which of the following pairs are both substances normally crystalline? **2013-36 Med:** A
 (a) Copper and diamond (b) Copper and glass
 (c) Copper and rubber (d) Diamond and glass
-
801. Choose the region of the spectrum which would be used to determine the structure of crystalline solids: **2011-156 Med:** C
 (a) Visible (b) Infrared
 (c) X-rays (d) Ultraviolet
-
802. Sodium chloride crystal structure is: **2014-161 Med:** C
 a) Hexagonal b) Body centered cubic
 c) Face centered cubic d) Tetragonal
-
803. Select the true statement about the amorphous solids: **2014-64: Med** B
 a) The amorphous substances have sharp melting point
 b) The amorphous substances do not have fixed melting point
 c) The amorphous substances have proper geometrical shapes.
 d) The particles in amorphous substances are arranged in an orderly manner.

804. Stiff material is characterized by; **2015-197 Eng** C
 A) High ultimate strength B) High proportional limit
 C) High young modulus D) High breaking length
-
805. Two wires have the same diameter and length. one is opposite direction then the two wires must have the same. Made of copper the other is brass. The wire s are connected to gather end to end when the free end are pulled in; **2015-198 Eng** A
 A) Stress B) Strain
 C) Elongation D) Young's modulus
-
806. What is the ultimate tensile stress of a material? **2012-123 Eng:** C
 (a) the stress at which the material becomes ductile
 (b) the stress at which the material deforms plastically
 (c) the stress at which the material reaches its elastic limit
 (d) the stress at which the material breaks
-
807. The ratio of volumetric strain to volumetric stress is called: **2011-152 Med:** A
 (a) Compressibility (b) young's modulus
 (c) bulk's modulus (d) shear's modulus

Mechanical Properties of Solid;

808. What behaviour is the copper exhibiting? **2017-Eng** b
 A.Brittle Only
 B.Elastic Only
 C.Plastic Only
 D.Both (A) & (B)
-
809. The applied force at which solids can be determined? **2011-149 Eng:** A
 (a) Strength (b) ductily
 (c) stiffness (d) toughness
-
810. The substances which undergo deformation with small force are called; **2010-186 Med:** A
 (a) Elastic substances (b) Inelastic substances
 (c) Diamagnetic substances (d) Ductile substances
-
811. The applied force which the solid can withstand without breaking is calle **2007-74 Med:** B
 (a) Stiffness of solid (b) Strength of solid
 (c) Ductility of solid (d) Toughness of solid
-
812. The substance which breaks just the elastic limit is reached is: **2011-153 Eng:** D
 (a) plastic substance (b) ductile substance
 (c) ordinary substance (d) brittle substance
-
813. The substance which undergoes plastic deformation until it breaks is: **2011-155 Med:** A
 (a) ductile substance (b) brittle substance
 (c) plastic substance (d) all of these

Energy Band Theory, Insulator, Conductor Semiconductor & Superconductor;

814. According to the band theory of solids in the conductors, the conduction band and valance band are: B
 A) Separated by large space B) Overlapped
 C) Separated by forbidden energy gap D) None of the above
-
815. Semi-conductor material have ; **2015-129 Med** B
 A) Ionic bond B) Covalent bond
 C) Mutual bond D) Metallic bond

816. Metals are good conductors of electricity because they contain: 2010-130 Med: A
 (a) Large number of freely mobile electrons
 (b) Large number of bound electrons
 (c) Small number of free electrons
 (d) Small number of bound electrons
-
817. The resistance of the pure semi conductor decreases in a certain range with the: 2009-33 Med: C
 (a) Decrease of temperature (b) Increase in current
 (c) Increase of temperature (d) Decrease in current
-
818. The increase in temp of intrinsic semiconductor will; 2007-44 Med: A
 (a) Increase its conductivity (b) Decrease its conductivity
 (c) Not effect conductivity (d) None of these
-
819. Current in the semiconductors is caused by the movement of: 2012-198 Med: D
 A) Protons B) Electrons only
 C) Holes only D) Both electrons and holes
-
- Paramagnetic, Diamagnetic & Ferromagnetic, Magnetic Hysteresis:**
820. When a permanent magnet is strongly heated? 2015-10 Eng: B
 A) It becomes an induced magnet B) It loses its magnetism
 C) Its magnetism increases D) Its polarity reverses
-
821. The temperature at which the resistance of conductor approaches to zero is called; 2011-156 Eng: B
 (a) Curie temperature (b) Critical temperature
 (c) Absolute temperature (d) Normal temperature
-
822. A p-type crystal is formed when Ge or Si crystal is doped with an impurity which is: 2008-119 Med: C
 (a) Nonvalent (b) Divalent
 (c) Trivalent (d) Pentavalent
-
823. If diamagnetic substance is brought near north or south pole of a bar magnet, it is; 2009-175 Med: D
 (a) Attracted by the poles
 (b) Attracted by North pole and repelled by south pole
 (c) Attracted by South Pole and repelled by North Pole
 (d) Repelled by the poles
-
824. The temperature at which the domains of the ferromagnetic substances disorient is; 2011-158 Med: C
 (a) Critical temperature (b) absolute temperature
 (c) Curie Temperature (d) normal temperature
-
825. Which of the following is not ferromagnetic substance: 2014-50 Med: D
 a) Iron b) Cobalt
 c) Nickel d) Barium
-
826. The behavior of ferromagnetic domains in an applied magnetic field gives rise to ; 2015-137 Med: A
 A) Hysteresis B) Ferromagnetism
 C) The Curie law D) Gauss's law for magnetism
- In applied magnetic field the flux density of material 'B' lags behind the applied magnetizing force 'H' called Hysteresis

CHAPTER-17:**ELECTRONICS**

Intrinsic Semiconductors & Carriers, N & P-Type Semiconductors, PN Junction:

BANK OF MCQS

827.	In N type semi-conductor, conduction is due to mainly by: 2015-25 Eng A) Hole B) Protons C) Electrons D) Neutrons	C	As in N-type semi-conductor is doped with pentavalent so there are free electrons.
828.	Current in the semiconductors is caused by the movement of: 2012-198 Med: (a) Protons (b) Electrons only (c) Holes only (d) Both electrons and holes	D	In semiconductor, electron flow occurs due to electrons and as well as holes
829.	The depletion region contains: 2011-, 2010- Eng: (a) electrons (b) holes (c) electrons and holes (d) No holes and no electrons	D	In depletion region electrons and holes are combined.
830.	In an unbiased PN junction; 2015-14-Med A) The electric potential vanishes every where B) The electric field vanishes every where C) The diffusion current vanishes every where D) The diffusion and drift currents cancel each other	D	
831.	In P type substances, the charge carriers in minorities are: 2015-139 Med A) Holes B) Electrons C) Protons D) Positive ions	B	
832.	The process by which the potential barrier of the depletion region can be increased or decreased is called: 2011- 1620Med: (a) Amplification (b) Biasing (c) Modulation (d) Doping	B	
833.	Intrinsic semi-conductor can be converted into extrinsic semi-conductor by adding: 2016-170 Med (a) Trivalent impurity (b) Pentavalent impurity (c) Pentavalent or trivalent impurities (d) None of the above	C	
Rectification, Transistor			
834.	The diode is used as: 2017-Eng A. A modulator B. An amplifier C. A rectifier D. an oscillator	c	Ac to DC conversion is called rectification and the instrument is called rectifier, Diode is used as rectifier.
835.	Conversion of alternating current into direct current is called: 2012-179 Med: (a) Rectification (b) Amplification (c) Oscillation (d) Regeneration	A	Ac to DC conversion is called rectification and the instrument is called rectifier, Diode is used as rectifier.
836.	Transistor in a circuit basically acts as: 2008-151 Med (a) Voltage amplifier (b) oscillator (c) current amplifier (d) rectifier	C	
837.	In transistor the emitter to base function is: 2010-12 Med: (a) Reversed biased (b) Forward biased (c) Neutral (d) None of these	B	Emitter to base is forward while base to collector is backward bias.
838.	The current gain of transistor having collector current of 10mA and the base current of 40μ A is; 2007-181 Med: (a) 2.5 (b) 25 (c) 250 (d) 2500	C	current Gain $\beta = \frac{I_c}{I_B} = \frac{10 \times 10^{-3} A}{40 \times 10^{-6} A} = 250,$
839.	The ratio of output voltage V_o to the voltage difference V_{in} between the positive (+) input and negative (-) input of opamp is (where $V_{in} = V_+ - V_-$): 2012-12 Med: (a) Current gain (b) Voltage gain	C	

- (c) Open-loop gain (d) Close-Loop gain

840.	Conversion of alternating current to direct current is called: 2014-44: Med a) Amplification b) Rectification c) Modulation d) Both B & C	B	Ac to DC conversion is called rectification and the instrument is called rectifier, Diode is used as rectifier.
841.	The circuit which is built of silicon chip, and of transistor and capacitor is called: 2011-163 Eng: (a) Rectifier circuit (b) Amplifier circuit (c) Operational amplifier (d) Close circuit	B	
842.	For a non inverting amplifier the gain is given by: 2012-23 Eng: (a) $G = 1 + \frac{R_2}{R_1}$ (b) $G = \frac{1 + R_1}{R_2}$ (c) $G = -\frac{R_1}{R_2}$ (d) $G = -\left(\frac{R_1}{R_2} + 1\right)$	A	
Photo Diode, LED, Solar Cell			
843.	The resistance of light dependant resistance LDR: 2012-Med: (a) Increases with light (b) Decreases with light (c) Decreases with darkness (d) None of the above	B	
844.	The diode that converts electrical energy into light energy is called: 2012-24 Med: (a) Solar cell (b) Photodiode (c) Vacuum diode (d) Light emitting diode	D	
845.	The color of light emitted by light emitting diode depends upon: 2011-165 Med: (a) Forward voltage (b) reverse current (c) Forward current (d) type of semiconductor	D	

CHAPTER-18: DAWN OF MODERN PHYSICS

Reference Frames;

846.	The proper time between two events, is measured by clock at rest in a reference frame in which the two events; 2015-159 Med A) Occurs at the same time B) Occurs at the same co-ordinates C) Are separated by distance, a light signal can travel during time interval D) Satisfy none of above	B	
847.	According to the postulates of the theory of Relativity, a fourth dimension has been added to the three dimensions already associated with a Cartesian frame of reference. Which is the fourth dimension? 2005-17 Med: (a) Space (b) Inertial frame of reference (c) Speed of light (d) Time	D	
848.	A meter rod is moving with speed of light with respect to a stationary observer. The length of the rod will appear to the observer as approaching: 2008-160 med: (a) Infinite (b) Zero m (c) 2 meter (d) None of the above	B	$\ell = \ell_0 \sqrt{1 - \frac{v^2}{c^2}}$ when $V = C$ than $\ell = 0$

849. If a material particles starts motion with speed equal to the speed of light, then the mass of this moving particle will; **2007-95 Med:** D $\left(m = \frac{m_0}{\sqrt{1-\frac{v^2}{c^2}}} \right)$ If $v = c$ than $m = \infty$ (infinite)
 (a) Remain constant (b) Become zero
 (c)Decome equal to rest mass of particle (d) Become infinite
-
850. A clock is moving with the relativistic velocity with respect to an observer, this clock with respect to the observer will: **2011-169 Eng:** B
 (a) Run fast (b) run slow
 (c) run normally (d) stop
-
851. To an observer stationary on a plate form compared to a stationary clock and a moving clock clicks: **2008-60 Med:** a
 (a) Slower (b) Faster
 (c) Same rate as stationary clock (d)Clicks negative time
-
852. A charge moving at a relativistic speed has a speed; **2010-35 Med:** C
 (a) Equal to speed of light (b) Greater than speed of light
 (d)None of these (d) both a and b
-
853. Which one of the following is a correct relation? **2008-78 Med:** A
 (a) $m = \frac{m_0}{\sqrt{1-\frac{v^2}{c^2}}}$ (b) $m = \frac{m_0}{\sqrt{1-\frac{v}{c}}}$
 (c) $m = m_0 \left(1 - \frac{V^2}{C^2} \right)$ (d) $m = \frac{m_0}{\sqrt{1-\frac{C^2}{V^2}}}$
-
854. Einstein's universe what is the fourth dimension: **2016-57 Med** C
 (a) Distance (b) Speed
 (c) Time (d) Energy
-
855. The proper time between two events is measured by clocks at rest in a reference frame in which the two events: **2016-142 Eng** b
 (a) Occur at the same time
 (b) **Occur at the same coordinates**
 (c) Are separated by distance a light signal can travel during the time interval
 (d) Occur in Boston

Black Body Radiation,Photoelectric Effect

856. The maximum energy of the electrons released in photocell is independent of: **2018-Med** B The maximum energy of the electrons released in photocell is independent of intensity and it depends upon the frequency
 A)Frequency of incident light
 B)Intensity of incident light
 C)Nature of cathode surface
 D)Wavelength of light
-
857. The maximum kinetic energy of photoelectrons emitted depends upon: **2018-Eng** B The maximum kinetic energy of photoelectrons emitted depends upon frequency of the light, and independent of intensity
 A)Intensity of incident light.
 B)Frequency of incident light
 C) Temperature of the
 d) non of the above
-
858. As the temperature of black body is increased the wavelength of maximum intensity radiation: **2007-77 Med:** B $E = hf$
 $E = hc/\lambda$
 As temperature increase, the energy
 a. will shift towards the longer wavelength

	b. will shift towards the shorter wavelength c. will not changed d. none of these		increase and wavelength decrease.
859.	If the temperature of the black body becomes double the intensity of radiation from it will become: 2011-172 Med: (a) double (b) four times (c) six times (d) sixteen times	D	$E \propto T^4$
860.	The reverse process of photoelectric effect is. 2007-130 Med: (a) X-rays (b) Annihilation of matter (c) Materialization of energy (d) Pair production	A	
861.	If frequency of incident light falling on photo-emissive plate is doubled. Kinetic energy of emitted photoelectron is: 2009-74, 2006-24 Med: (a) Doubled (b) More than double (c) Unchanged (d) Less than double	A	$K.E \propto f$
862.	The maximum KE of emitted photoelectrons depends on: 2012-20 Med, 2012-103 Eng: (a) Intensity of the incident light (b) Frequency of the incident light (c) Temperature of the photosensitive surface (d) None of the above	B	
863.	The number of photoelectrons emitted per second from the metal surface depends upon: 2007-186, 2006-156 Med: (a) Intensity of light (b) Frequency of light (c) Wavelength of light (d) speed of light	A	Intensity of light is directly proportional to the numbers of electrons emitted from the metal surface.
864.	The scientist who was awarded noble prize for explaining photoelectric effect; 2010-177 Med: (a) Max plank (b) Compton (c) Louise (d) Einstein	D	Einstein explained photoelectric effect.
865.	The minimum frequency of incident light required to emit photoelectrons from the metal surface is called: 2014-83 Med: a) Critical frequency b) Intermediate frequency c) Work function d) Threshold frequency	D	Threshold frequency is the minimum frequency required to emit an electron from metal surface.
866.	The number of ejected photoelectrons increases with increase. 2016-51 Med (a) In intensity of flight (b) In wavelength of light (c) In frequency of light (d) Never	a	
867.	In a photoelectric effect experiment the stopping potential is: 2016-143 Eng (a) The energy required to remove an electron from the sample (b) The kinetic energy of the most energetic electron ejected (c) The potential energy of the most energetic electron ejected (d) The electric potential that causes the electron current to vanish	d	

Compton,s Effect,Pair Production,Pair Annihilation:

868. The scattering angle for which the Compton shift in wavelength is equal to Compton wavelength is: **2011-175 Med:**
 (a) $\theta = 90^\circ$ (b) $\theta = 0^\circ$
 (c) $\theta = 45^\circ$ (d) $\theta = 180^\circ$

869. In Compton effect, the photon scattered at an angle of 90° . The Compton's shift of wavelength will be; **2008-189 Med:** A
- (a) $\Delta\lambda = \frac{h}{m_0 C}$ (b) $\Delta\lambda = \frac{h}{m_0 C^2}$
- (c) $\Delta\lambda = \frac{m_0 C}{h}$ (d) $\Delta\lambda = \frac{m_0 C^2}{h}$
-
870. Pair production can take place only if the energy E of the photon is: **2008-142 Med:** D
- (a) $E = 0.52 \text{ Mev}$ (b) $E < 1.02 \text{ Mev}$
- (c) $E < 0.52 \text{ Mev}$ (d) $E > 1.02 \text{ Mev}$
-
871. 4. In Compton scattering from stationary electrons the largest change in wavelength occurs when the photon is scattered through: **2016-23 Med** d
- (a) 0° (b) 45°
- (c) 90° (d) 180°
- $\Delta\lambda = \frac{h}{m_0 C} (1 - \cos 180^\circ)$ As $\cos 180^\circ = -1$
- 1 So, $\Delta\lambda = \frac{h}{m_0 C} \{1 - (-1)\} = \frac{2h}{m_0 C}$
-
- Wave Nature of Particle, Wave Particle Duality & Uncertainty Principle;**
872. Work function for a certain surface is 3.26 eV . Minimum frequency, light must have in order to eject electron from surface will be; **2017-64 Med** D
- A. $1.6 \times 10^{15} \text{ Hz}$ B. $3.2 \times 10^{15} \text{ Hz}$
- C. $4.8 \times 10^{15} \text{ Hz}$ D. $6.4 \times 10^{15} \text{ Hz}$
-
873. The uncertainty in position of an electron in a certain state is $5 \times 10^{-10} \text{ m}$, the uncertainty in its momentum might be: **2017-Eng** D
- A. $5.0 \times 10^{-24} \text{ kg.m/s}$ B. $4.0 \times 10^{-24} \text{ kg.m/s}$
- C. $3.0 \times 10^{-24} \text{ kg.m/s}$ D. $1.5 \times 10^{-24} \text{ kg.m/s}$
- $\Delta P \Delta x = h$
- $\rightarrow \Delta P = h / \Delta x$
- $= 6.6262 \times 10^{-34} / 5 \times 10^{-10}$
- $= 1.5 \times 10^{-24} \text{ kg.m/s}$
-
874. A photon of frequency f has a momentum associated with it if C is the velocity of light this momentum is: **2017-Eng** C
- A. hf B. $2hf$
- C. hf/c D. hf/c^2
-
875. 22 The rest mass of Photon is m_0 . Its linear momentum, when it moves with the speed equal to half of the speed of light in space, will be; **2018-Med** C
- A) $3m_0 c/4$ B) $2m_0 c/4$
- C) $m_0 c/\sqrt{3}$ D) $2m_0 c/\sqrt{3}$
-
876. The rays with a particle nature is of; **2018- Eng** C
- A) γ -rays B) X-rays
- C) Cathode rays D) Cosmic rays
- Cathode rays are not rays these are actually electrons.
-
877. Work function for a certain surface is 13.26 eV , minimum frequency, light must have in order to eject electron from surface will be: **2018-Eng** B
- A) $1.6 \times 10^{15} \text{ Hz}$ B) $3.2 \times 10^{15} \text{ Hz}$
- C) $4.8 \times 10^{15} \text{ Hz}$ D) $6.4 \times 10^{15} \text{ Hz}$
-
878. If 1 ng of mass converts into energy, how many joules of heat will be generated? **2018-Eng** D
- A) $3 \times 10^{-3} \text{ J}$ B) $1 \times 10^3 \text{ J}$
- C) $9 \times 10^{-3} \text{ J}$ D) $9 \times 10^4 \text{ J}$
- $E = mc^2 = 10^{-12} \times (3 \times 10^8)^2 = 9 \times 10^4 \text{ J}$

879. A photon is: **2018-Eng**
 A) A charged particle
 B) An electron-positron pair
 C) A packet of energy
 D) Neutron
880. Choose the correct relationship, when E=energy, h=plank's constant, c=velocity of light, ν = frequency, λ =wavelength: **2015-34 Med**
 A) $E = h\nu c$
 B) $E = \frac{c}{\lambda}$
 C) $E = hf$
 D) $E = \frac{n\lambda}{c}$
881. Which of the following is the best evidence for the wave nature of matter? **2015-17 Med**
 A) The photoelectric effect
 B) The Compton effect
 C) The spectral radiation from cavity radiation
 D) The reflection of electrons by crystal
882. A photon is: **2012-19 Eng**
 (a) a charged particle
 (b) an electron-positron pair
 (c) a quantum of electromagnetic radiation
 (d) neutron
883. The threshold frequency for a metal having work function 6.4 eV is:
 (a) $6.4 \times 10^{-19} \text{ Hz}$ (b) $6.4 \times 10^{-34} \text{ Hz}$
 (c) $1.5 \times 10^{15} \text{ Hz}$ (d) $1.5 \times 10^{-15} \text{ Hz}$
884. What energy in joules would a photon of light have at wavelength $3 \times 10^{-3} \text{ cm}$? ($h = 6.6 \times 10^{-34}$) **2011-168 Eng**
 (a) 2.2×10^{-31} (b) 2.64×10^{-36}
 (c) 6.6×10^{-47} (d) 6.6×10^{-21}
885. Energy of a photon having frequency 10 Hz will be:
 (a) $6.63 \times 10^{-19} \text{ J}$ (b) 6.63 eV
 (c) $6.63 \times 10^{-21} \text{ J}$ (d) $4.125 \times 10^{-14} \text{ eV}$
886. The kinetic energy of electron proton alpha particles and neutron is the same. Which one will have the shortest wavelength? **2011-176 Eng**
 (a) electrons (b) protons
 (c) alpha particles (d) neutrons
887. If your body mass is 66.26 kg and you are running at the speed of 10 ms^{-1} what will be the De Broglie wave length associated with you? ($h = 6.626 \times 10^{-34} \text{ Js}$); **2012-12 Eng**
 (a) $10.0 \times 10^{-36} \text{ m}$ (b) $10.0 \times 10^{34} \text{ m}$
 (c) $5.0 \times 10^{34} \text{ m}$ (d) $2.0 \times 10^{33} \text{ m}$
888. Uncertainty principle can be expressed as: **2008-36 Med**
 (a) $\Delta p \Delta x = h$ (b) $\Delta E \Delta t = h$
 (c) Both (a) and (b) (d) non of these
889. Which of the following particle can move with the speed of light? **2010-116 Eng**
 (a) Electron (b) Positron
 (c) Proton (d) Photon
890. What energy (in joules) would a photon of light with a wavelength $3 \times 10^{-4} \text{ cm}$ ($h = 6.6 \times 10^{-34} \text{ Jsec}$) have; **2013-140**
 (a) $6.6 \times 10^{-19} \text{ J}$ (b) $6.6 \times 10^{-34} \text{ J}$
 (c) $6.6 \times 10^{-21} \text{ J}$ (d) $6.6 \times 10^{-14} \text{ J}$

- Eng:**
 (a) 2.2×10^{-44} (c) 3.3×10^{-21}
 (b) 6.6×10^{-20} (d) 6.6×10^{-48}
891. The de-Broglie wavelength of a rifle bullet of mass 0.02kg which is moving at a speed of 300 ms^{-1} is (where $h = 6.63 \times 10^{-34} \text{ J s}$): **2014-179 Med, 2013-12 Eng:** B $\lambda = \frac{h}{mv} = \frac{6.63 \times 10^{-34}}{0.02 \times 300} = 1.1 \times 10^{-34} \text{ m}$
 (a) $7.3 \times 10^{-34} \text{ m}$ (b) $1.1 \times 10^{-34} \text{ m}$
 (c) $1.8 \times 10^{-34} \text{ m}$ (d) $9.9 \times 10^{-34} \text{ m}$
892. The uncertainty energy of photon which is emitted from an atom, radiating for 10^{-8} seconds is; **2011-178 Med:** B $E \times t = h$
 (a) $4 \times 10^{-7} \text{ J}$ (b) $4 \times 10^{-7} \text{ eV}$
 (c) $6.6 \times 10^{-20} \text{ eV}$ (d) $4 \times 10 \text{ J}$
 $E = \frac{h}{t} = \frac{6.6262 \times 10^{-34}}{10^{-8}} = 6.62 \times 10^{-26} \text{ J} = \frac{6.62 \times 10^{-26}}{1.6 \times 10^{-19}} = 4 \times 10^{-7} \text{ eV}$
893. 14. Select the correct relation between wave and particle nature of radiation? **2014-112 Med:** A $E = hf$ where $f = \frac{c}{\lambda}$ so $E = \frac{hc}{\lambda}$
 a) $E = \frac{hc}{\lambda}$ b) $E = \frac{h\lambda}{c}$ c) $E = \frac{\lambda c}{h}$ d) $E = h\lambda c$
894. The de-Broglie wavelength of a rifle bullet of mass 0.02kg which is moving at a speed of 300 ms^{-1} is (where $h = 6.63 \times 10^{-34} \text{ Js}$): **2014-179 Med:** B $\lambda = \frac{h}{mv} = \frac{6.63 \times 10^{-34}}{0.02 \times 300} = 1.1 \times 10^{-34} \text{ m}$
 (a) $7.3 \times 10^{-34} \text{ m}$ (b) $1.1 \times 10^{-34} \text{ m}$
 (c) $1.8 \times 10^{-35} \text{ m}$ (d) $9.9 \times 10^{-34} \text{ m}$
895. Work function for a certain surface is 3.26 eV. Minimum frequency, light must have in order to eject electron from surface will be: **2016-52 Eng:** C $\phi = h\nu_0 \Rightarrow \nu_0 = \frac{\phi}{h} = \frac{3.26 \text{ eV}}{6.6262 \times 10^{-34}} = \frac{3.26 \times 1.6 \times 10^{-19}}{6.62 \times 10^{-34}} = 0.78 \times 10^{15} = 7.8 \times 10^{14} \text{ Hz}$
 (a) $1.6 \times 10^{14} \text{ Hz}$ (b) $3.2 \times 10^{14} \text{ Hz}$
 (c) $7.8 \times 10^{14} \text{ Hz}$ (d) $6.4 \times 10^{14} \text{ Hz}$
896. The uncertainty in position of an electron in a certain state is $5 \times 10^{-10} \text{ m}$. The uncertainty in its momentum might be **2016-192 Eng:** C
 (a) $5.0 \times 10^{-24} \text{ kg} \cdot \text{m/s}$ (b) $4.0 \times 10^{-24} \text{ kg} \cdot \text{m/s}$
 (c) $3.0 \times 10^{-24} \text{ kg} \cdot \text{m/s}$ (d) All of the above
897. Which of the following properties of an electron is made use of in the electron Microscope? **2016-43 Eng:** B
 (a) High velocity (b) Wave nature
 (c) Interference (d) Diffraction

CHAPTER-19: ATOMIC SPECTRA

Atomic Spectra, Bohr Model of Hydrogen:

898. When a hydrogen atom makes the transition from the second excited state to the ground state (at - 13.6 eV), the energy of the photon emitted is: **2017-Eng:** C $E = E_2 - E_1 = \frac{-13.6 \text{ eV}}{3^2} - \frac{-13.6 \text{ eV}}{1^2} = \frac{-13.6 \text{ eV}}{9} + \frac{13.6 \text{ eV}}{1} = 12.1 \text{ eV}$
 A. 1.5 eV B. 9.1 eV
 C. 12.1 eV D. 10.2 eV
899. The ionization potential of a hydrogen atom is 13.6 eV what will be the energy of the electron in the second orbit? **2018-Med:** B $E_2 = -13.2/2^2 = -13.2/4 = -3.40 \text{ eV}$
 a) -10.2 eV b) -3.40 eV
 c) +3.40 eV d) -1.51 eV
900. Which of the following series lie in the visible region? **2018-Med:** C
 A) Lyman B) Paschen
 C) Balmer D) Pfund
 Lyman → Ultraviolet
 Balmer → Visible
 Paschen → Near IR
 Brackett → Mid IR
 Pfund → Far IR

901. If 13.6eV energy is required to ionize the hydrogen atom, then the required energy to remove an electron from $n = 2$ is; **2018-Eng**
 A) 10.2eV B) 0eV
 C) 3.4eV D) 6.8eV
902. What is the magnitude of the linear momentum of a particle if its de Broglie's wavelength is 0.02 nm? **2018-Eng**
 A) 0.5 h B) 50 h
 C) 5×10^7 h D) 5×10^{10} h
903. In the main postulates of Bohr atomic theory the angular momentum of electron in hydrogen atom is given by the relationship. **2015-56 Med**
 A) $mv = \frac{\lambda}{2\pi}$ B) $r = \frac{ze^2}{4\pi E_0 mv}$
 C) $mvr = \frac{nh}{2\pi}$ D) hvc
904. For a H-atom which one of the following statements is correct? **2008-170 Med**
 (a) the radius of the orbits are integral multiple of the Bohr-radius 0.053nm
 (b) The angular momentum is n times $\frac{h}{2\pi}$
 (c) the energy in the n th-orbit is n times the ground state energy.
 (d) None of the above
905. Who postulated the following equation for energy emission when an electron drops from state n_2 to n_1 ? **2010-118 Eng**
 (a) Einstein (b) Bohr
 (c) Rutherford (d) Heisenberg
906. When atoms in the gaseous state are excited to emit radiations, the spectrum obtained is: **2013-108 Eng**
 (a) Band spectrum (b) Line spectrum
 (c) Continuous spectrum (d) None of the above
907. An electron in a hydrogen atom makes a transition from an energy level with energy E_1 to one with energy E_2 and simultaneously emits a photon. The wavelength of the emitted photon; **2013-92 Eng**
 (a) $h/E_1, E_2$ (b) $hc/E_1 - E_2$
 (c) $h/c (E_1 - E_2)$ (d) $(E_1 - E_2)/hc$
908. When an electron drop from any higher orbit i.e. $n_2 \geq 3$ to the second orbit $n_1 = 2$, the spectral lines produced fall in the region: **2015-194 Med**
 A) Visible B) Ultraviolet
 C) Infrared D) None of the above
909. Hydrogen atom in their ground state absorbs energy from the incident photon. Which makes a transition to energy level characterized by $n = 4$ the number of lines observed are: **2009-81 Med**
 (a) 8 (b) 4
 (c) 6 (d) 10
910. If an atom exists in the excited state $n = 5$, the maximum number of transition takes place is: **2011-182 Med**
 (a) 6 (b) 5
 (c) 10 (d) 3
- C $E_2 = -13.2/2^2$
 $= -13.2/4 = -3.40\text{eV} = +3.40\text{ eV}$
 Positive sign is for giving energy
- D
- C
- B
- B The atomic spectrum is line spectrum.
- B
- A
- C
- C $\text{number of spectral lines} = \frac{n(n-1)}{2} = \frac{4(4-1)}{2} = \frac{4(3)}{2} = \frac{12}{2} = 6,$

911. The shortest wavelength of radiation in Paschen series is: **2012-** B
107 Med:
 (a) $R_H/9$ (b) $9/R_H$
 (c) $9 R_H$ (d) $9 + R_H$
-
912. The emission or absorption of energy by an atom is represented A
 by $\Delta E =$ **2010-10 Med:**
 (a) $h\nu$ (b) $\frac{1}{2}mv^2$
 (c) Mgh (d) Mc^2
-
913. Bohr predicted the radius of the orbit of the electron in hydrogen C
 atom to be: $r = \frac{n^2 \epsilon_0 h^2}{e^2 \pi m}$. If electron moves from $n = 1$ to $n = 2$, by
 how much times the radius of the orbit will increase?
 (a) 2 times (b) 3 times
 (c) 4 times (d) 5 times
-
914. The energy of electron in the excited state $n=4$ in hydrogen atom C
 is: **2010-174 Med:**
 (a) -13.6eV (b) -3.4eV
 (c) -0.85eV (d) -1.5eV
-
915. A ball of mass 1 gram is moving with a velocity of 10^3 m s^{-1} C
 .The De-broglie wavelength of the ball is: **2009-172 Med:**
 (a) $13.26 \times 10^{-36} \text{ m}$ (b) $3.315 \times 10^{-34} \text{ m}$
 (c) $6.63 \times 10^{-34} \text{ m}$ (d) $4.97 \times 10^{-36} \text{ m}$
-
916. The energy level of an electron in a hydrogen atom are given by D
 $E = \frac{13.6}{n^2}$ where $n=1,2,3,\dots$ the energy required to excite an
 electron state is: **2015-136 Eng**
 A) 3.4eV B) 4.5eV
 C) 10.2eV D) 13.6eV
-
917. The total energy of a H-atom in its ground state is: **2012-26** B
Eng:
 (a) Zero (b) Negative
 (c) Positive (d) Can be both (b) & (c)
-
918. The functional group region in infra-red spectrum lies between: C
2016-30 Med
 (a) $500 - 1300\text{cm}^{-1}$ (b) $600 - 1500\text{cm}^{-1}$
 (c) $1500 - 4000\text{cm}^{-1}$ (d) $2500 - 3500\text{cm}^{-1}$
-
919. The ground state energy of H-atom is 13.6 eV . The energy a
 needed to ionize H-atom from its second excited state is:
2016-160 Med
 (a) 1.51 eV (b) 3.4 eV
 (c) 13.6 eV (d) 12.1 eV
-
- X-rays & Its Properties, LASER:**
920. X-rays with lowest energy is: **2018-Eng** D
 A) $K\alpha$ B) $L\alpha$ C
 c) $K\beta$ D) $K\gamma$
-
921. In helium neon LASER, the laser light arises from a transition from a D
 ____ state to _____. **2015-94 Eng**
 A) He-He B) Ne-Ne
 C) He-Ne D) Ne-He
-
922. X rays are: **2015-32 Med** A
 A) Electromagnetic waves B) Negatively charged ions
 C) Rapidly moving electrons D) Rapidly moving protons

923.	A LASER beam can be sharply focused because it is: 2015-168 Med	D
	A) Highly coherent B) Intense C) Plane polarized D) Highly directional	
924.	The excited state which persists for unusually longer period of time is called: 2011-Eng.: 2007Med:	C
	(a) Ground state (b) Ionized state (c) metastable state (d) ordinary excited state	
925.	The best shield against x-rays to absorb it is; 2010-139 Med:	A
	(a) Lead (b) Steel (c) Iron (d) Copper	
926.	Ultraviolet rays differ from the X-rays in that ultraviolet rays: 2013-39 Med:	C
	(a) Cannot be diffracted (b) Cannot be polarized (c) Have a low frequency (d) Do not affect a photographic plate.	
927.	The intensity of x-rays depends upon; 2011-183 Eng:	A
	(a) filament current (b) nature of material of target (c) operating voltage (d) All of these	
928.	When the voltage of the target in the X – ray tube increases then the; 2011-185 Med:	A
	(a) penetrating power of x – ray increases (b) intensity of x – ray increases (c) wavelength of x – ray increases (d) all of these	
929.	The penetrating power of x rays depends upon. 2010-198 Eng:	B
	(a) Filament current (b) operating voltage (c) The nature of the filament (d) none of these	
930.	Choose the region of the spectrum which would be used to determine the structure of crystalline solids: 2011-156 Med:	C
	(a) visible (b) infrared (c) X– rays (d) ultraviolet	
931.	Laser light is the result of; 2007-184 Med:	D
	(a) Spontaneous emission (b) Ordinary emission (c) Absorption of radiation (d) Stimulated emission	
932.	The excited state of an atom which can persist for unusual longer time is called: 2007-48 Med:	A
	(a) Metastable state (b) Ground state (c) Excited state (d) Normal state	
933.	The situation in which the excited state i.e. metastable state contains more number of electrons than the ground is called: 2011-188 Med:	C
	(a) Ionized state (b) Stimulations (c) Population inversion (d) All of these	
934.	If 50 KV is the applied potential in an X-ray tube then minimum wavelength of X-rays produced is: 2016-10 Med	C
	(a) 0.2 nm (b) 2 nm (c) 0.02 nm (d) 2 Å	$eV_0 = hc/\lambda \rightarrow \lambda = hc/eV_0$ $= 0.24 \times 10^{-10} \text{ m} = 0.024 \times 10^{-9} \text{ m} = 0.024 \text{ nm}$
935.	X-rays are widely used as a diagnostic tool in medicine because of its: 2016-64 Med	C
	(a) Particle property (b) Cost of X-ray unit is low (c) High penetrating power (d) It is not electromagnetic waves	
936.	A laser beam can be sharply focused because it is: 2016-92 Med	D
	(a) Highly coherent (b) Plane polarized (c) Intense (d) highly directional	
937.	Soft X-rays have: 2016-153 Eng	b

- (a) High energy (b) Low energy
(c) High frequency (d) Refracted by heavy atom

CHAPTER-20: NUCLEAR PHYSICS

Atomic Nucleus, Isotopes, Mass Defect & Binding Energy:

938. In what way do the atoms of the isotopes $^{12}_6\text{C}$, $^{13}_6\text{C}$ and $^{14}_6\text{C}$ differ? **2018-Med** D Isotopes have same atomic number but different mass number due to different number of neutrons.
 A) different charges
 B) different number of electrons
 C) different number of neutrons
 D) different number of neutrons
939. How many nucleons are there in an atom of $^{235}_{92}\text{U}$? **2011-145** B Protons & neutrons are collectively called nucleons.
Eng:
 (a) 92 (b) 235
 (c) 123 (d) 327
940. The sum of the number of protons and the number of neutrons present in the nucleus of an atom is known as: **2008-63 Med:** B
 (a) Charge number (b) Mass number
 (c) Atomic number (d) Magic number
941. The atoms of an element having same atomic number but different mass number are called. **2010-102 Eng:** B
 (a) Isotones (b) Isotopes
 (c) Isobars (d) Isomers
942. How is it possible to distinguish between the isotopes of uranium. **2013-139 Eng:** B
 (a) their nuclei have different charge and different mass, and they emit different particles when they decay.
 (b) Their nuclei have the same charge but different mass
 (c) Their nuclei have different charge but the same mass
 (d) Their nuclei have the same charge and mass, but they emit different particle, when they decay.
943. The amount of energy required to break the nucleus into constituent nucleons is called: **2011-189 Eng: , 2010-194 Med:** C
 (a) ionization energy (b) exaltation energy
 (c) binding energy (d) work function
944. The expression for binding energy is: **2012-34 Med:** B
 (a) $E_B = fh$
 (b) $E_B = [(ZM_p + NM_n) - ZM^A]C^2$
 (c) $E_B = ZM_pC^2 + NM_nZM^A C$
 (d) $E_B = ZM_p + NM_n - M C^2$
945. The binding energy per-nucleon is greater for: **2012-91 Eng:** C
 (a) lighter nuclei (b) heavy nuclei
 (c) intermediate nuclei (d) None
946. Which statement correctly describes a nucleon? **2014-114** C
Med:
 (a) Any atomic nucleus
 (b) A radioactive atomic nucleus
 (c) A neutron or a proton.
 (d) A neutron proton or an electron.

947. In a nuclear reaction ${}_{92}^{238}\text{U} \rightarrow {}_{Z}^A\text{Th} + {}_2^4\text{He}$ the value of A and Z are ; **2015-184 Eng**
 A) A= 234, Z=94 B) A=238, Z=94
 C) A=234, Z=90 D) A= 238, Z= 90

948. Atomic mass unit (amu) in term of energy is nearly equal to: **B**
2006-21 Med:
 (a) 931 KeV (b) 931 MeV
 (c) 39 MeV (d) 139 KeV

949. The rest mass energy of electron is: **A**
 (a) 0.51 joule (b) 1.02 joule
 (c) 9.11×10^{-32} joule (d) 8.2×10^{-14} joule

950. Which two nuclei contain the same number of neutrons? **C**
2016-12 Eng
 (a) ${}_{6}^{12}\text{C}$ and ${}_{6}^{14}\text{C}$ (b) ${}_{7}^{16}\text{N}$ and ${}_{8}^{15}\text{O}$
 (c) ${}_{11}^{23}\text{Na}$ and ${}_{12}^{24}\text{Mg}$ (d) ${}_{14}^{32}\text{Si}$ and ${}_{15}^{32}\text{P}$

Radioactivity, Alpha, Beta & Gamma Emission:

951. Which of the following will be a better shield against y-rays? **2018-Med C**
 a) Ordinary water b) Heavy water
 c) Lead d) Aluminum

952. The nuclear equation shown has a term missing.
 ${}_{6}^{14}\text{C} \rightarrow {}_{7}^{14}\text{N} + {}_{-1}^{0}\beta + \dots\dots\dots$ What is represented by the missing term? **A**
2010-Med, 2016-Eng
 A) An antineutrino B) An electron
 C) A neutrino D) A positron

953. When lead, ${}_{82}^{214}\text{Pb}$, emits a β^{-} particle, the resultant nucleus will be; **2018-Eng A**
 A) ${}_{83}^{214}\text{Bi}$ B) ${}_{82}^{214}\text{Po}$
 C) ${}_{82}^{214}\text{Pb}$ D) ${}_{82}^{214}\text{Tl}$

954. In the nuclear reaction shown below what is the value of coefficient "y"? **D**
2018-Eng
 ${}_{92}^{235}\text{U} + {}_0^1\text{n} \rightarrow {}_{53}^{141}\text{Ba} + {}_{36}^{92}\text{Kr} + y {}_0^1\text{n} + 200\text{Mev}$
 A) 0 B) 1
 C) 2 D) 3

955. Which equation represents β^{-} decay? **2017-Eng D**
 A. neutron \rightarrow proton + positron + antineutrino
 B. neutron \rightarrow proton + positron + neutrino
 C. proton \rightarrow neutron + positron + antineutrino
 D. proton \rightarrow neutron + positron + neutrino

956. The isotope which decay by β^{-} emission to produce ${}_{48}\text{Cd}^{111}$ is; **D** Emission of β^{-} particle increase the atomic number by 1,
2015-148 Med
 A) ${}_{47}\text{Ag}^{111}$ B) ${}_{47}\text{Ag}^{110}$
 C) ${}_{47}\text{Ag}^{112}$ D) ${}_{49}\text{In}^{111}$

957. An atom has a net charge of -1. it has 18 electrons and 20 neutrons. Its mass number is; **C** Because; it has given one \bar{e} , Which is not considered in mass number.
2008-04 Med
 (a) 38 (b) 39
 (c) 37 (d) 20

958. Which of the following has the same number of electrons as an alpha particle? **C** Because alpha particles have no electrons
2010-74 Med:
 (a) H (b) H_2
 (c) H^{+} (d) H_2O

959. Gamma rays have high penetrating power than α & β ray due to: **2010-116 Med: D**

	(a) No charge (b) Non material nature (c) Small size (d) Lighter particles		
960.	When α particle is emitted by radium ${}_{88}\text{Ra}^{226}$ the daughter nucleus is radon the mass number and charge number of which will be: 2013-185 Eng: (a) ${}_{90}\text{Rn}^{220}$ (b) ${}_{86}\text{Rn}^{222}$ (c) ${}_{89}\text{Rn}^{226}$ (d) ${}_{90}\text{Rn}^{222}$	B	
961.	A particle was ejected from the nucleus of an atom in a radioactive decay and atomic number of the atom increased. The particle was probably; 2005-08 Med: (a) A proton (b) A neutron (c) An alpha particle (d) A beta particle	D	
962.	When β -particle is emitted from lead ${}_{82}\text{Pb}^{214}$ the mass number and charge number of Bismuth formed is; 2007-92 Med: (a) ${}_{83}\text{Pb}^{214}$ (b) ${}_{81}\text{Pb}^{214}$ (c) ${}_{85}\text{Pb}^{214}$ (d) None of the above	A	Emission of β^{-1} particle increase the atomic number by 1.
963.	In the nuclear reaction; 2012-171 Med: ${}_{11}\text{Na}^{24} \rightarrow {}_{12}\text{Mg}^{24} + \text{X}$, the particle X is; (a) Electron (b) Positron (c) Proton (d) Neutron	A	
964.	A zirconium nucleus, is a β -emitter. The product nucleus is also a β -emitter. What is the final resulting nucleus of these two decays? 2013-19 Med: (a) ${}^{100}\text{Sr}_{38}$ (b) ${}^{100}\text{Mo}_{42}$ (c) ${}^{98}\text{Zr}_{40}$ (d) ${}^{102}\text{Zr}_{41}$	B	
965.	When lead, ${}_{81}\text{Pb}^{214}$, emits a β - particle, the resultant nucleus will be: (a) ${}_{82}\text{Bi}^{214}$ (b) ${}_{84}\text{Po}^{214}$ (c) ${}_{82}\text{Pb}^{213}$ (d) ${}_{41}\text{Ti}^{214}$	A	Emission of β^{-1} particle increase the atomic number by 1
966.	Radium ${}_{48}\text{R}^{226}$ when disintegrates into ${}_{46}\text{R}^{222}$ causes the emission of: 2011-193 Eng: (a) α - radiation (b) γ - radiation (c) β - radiation (d) cosmic rays	A	
967.	The following reaction might be used for controlled nuclear fusion;: ${}_{3}\text{Li}^7$ + ${}_1\text{H}^2 \rightarrow 2({}_2\text{He}^4) + \text{X}$. What is the particle X? 2005-09 Med (a) An α -particle (b) An electron (c) A neutron (d) A proton	C	
968.	The path traced by β particles in air is: 2016-163 Med (a) Straight (b) Erratic (c) Circular (d) Elliptical	B	The path traced by α particles in air is Straight
969.	Which of the following has the same number of electron as an alpha particle; 2016-109 Eng (a) He (b) H (c) H^+ (d) Li^+	C	Because H^+ like alpha particles have no electrons..
970.	A radium atom, ${}^{226}\text{Ra}$ ($Z = 86$) emits an alpha particle. The number of protons in the resulting atom is: (a) 84 (b) 85 (c) 86 (d) 88	a	
971.	A nucleus with mass number A and atomic number Z undergoes β decay. The mass number and atomic number, respectively, of the daughter nucleus are: 2016-193 Eng (a) A, Z - 1 (b) A - 1, Z (c) A + 1, Z (d) A, Z + 1	d	

972. Radio active substance has a half-life of 60 minutes. During 3 hours, the percentage of the material that decayed would be: **B**
 2017 Med
 A. 12.5% B. 87.5%
 C. 8.5% D. 25.1%
-
973. The activity of a certain nuclide is governed by the relation **A**
 $\frac{\Delta N}{\Delta t} = -\lambda N$, where $2.4 \times 10^{-8} \text{ s}^{-1}$, what is the half-life of the nuclide? 2018-Med
 a) $2.9 \times 10^7 \text{ s}$ b) $1.3 \times 10^7 \text{ s}$
 c) $1.2 \times 10^{-8} \text{ s}$ d) $3.4 \times 10^{-8} \text{ s}$
-
974. Two radioactive samples S1 and S2 have half-lives 3 hours and 7 hours respectively. If they have the same activity at certain instant t, what is the ratio of the number of atoms of S1 to S2 at instant t? 2018-Med **C**
 A) 9:49 B) 49: 9
 C) 3: 7 D) 7:3
-
975. A radioactive isotope has a half-life of 3 days. The time after which its activity is reduced to 6.25% of its original activity is: **C**
 2018-Med
 A) 6 days B) 8 days
 C) 12 days D) 16 days
-
976. A medical lab has a 16g of sample of radioactive isotopes. After 6 hours it was found that 12g of sample have decayed. The half-life of the isotope is: 2018-Eng **D**
 A) 12 hours B) 6 hours
 C) 2 hours D) 3 hours
-
977. A source contains initially N_0 nuclei of a radioactive nuclide. How many of these nuclei have decayed after a time interval of three half-lives? 2018-Eng **D**
 A) $N_0/8$ B) $2N_0/3$
 C) $N_0/3$ D) $7N_0/8$
-
978. The half-life of a radioactive source is 2.3 days. Its decay constant per day will be: **C**
 (a) 0.1 (b) 0.2
 (c) 0.3 (d) 2.3
 Half life) $T_{1/2} = \frac{0.693}{\lambda} = \lambda = \frac{0.693}{T_{1/2}} = \frac{0.693}{2.3} = 0.3$
-
979. The half-life of $^{22}\text{Na}_{11}$ is 2.6 years. If X grams of this sodium isotope are initially present, how much is left after 13 years? **A**
 2013-152 Eng: 2014-158 Med
 (a) $X/32$ (b) $\frac{X}{2^n}$
 (c) $\frac{X}{25}$ (d) $\frac{X}{32}$
 Undecayed = $\frac{N_0}{2^n}$ ($N_0 \rightarrow$ original sample=X) ($n =$ number of Half live), Number of half life's = $\frac{13}{2.6} = 5$
 Remaining undecayed element = $\frac{N_0}{2^n} = \frac{X}{2^5} = X/32$,
-
980. A source contains initially N_0 nuclei of a radioactive nuclide. How many of these nuclei have decayed after a time interval of three half-lives? 2013-166 Med: **D**
 (a) $N_0/8$ (b) $2N_0/3$
 (c) $N_0/3$ (d) $7N_0/8$
 Remaining undecayed element = $\frac{N_0}{2^n} = \frac{N_0}{2^3} = N_0/8$
 Decayed = 1 - Undecayed = 1 - $N_0/8 = 7N_0/8$
-
981. Half life of given sample is 44 years. The sample will reduce to 50% of the original value after: 2012-38 Med: **D**
 (a) 22 years (b) 88 years
 (c) 11 years (d) None of the above

982. Radioactive activity is affected by: 2012-39 D
 Eng, 2013-139 Med:
 (a) Temperature (b) Pressure
 (c) Humidity level (d) None
-
983. Radioactive materials can be identified by measuring their: D
 2010-73 Eng:
 (a) Density (b) Hardness
 (c) Ductility (d) Half life
-
984. One disintegration per second is equal to; 2011-195 B
 Med:
 (a) one curie (b) one Becquerel
 (c) one half life (d) all of these
-
985. Becquerel is the unit of: 2012-16 Eng: A
 (a) activity (b) decay constant
 (c) half life (d) mean life
-
986. The activity of the radioactive material can be expressed in the units of: D
 2012-185 Med:
 (a) Curie (b) Becquerel
 (c) Tesla (d) Both A) and B)
-
987. The half-life of radium is about 1600 years if a rock initially contains 1g of radium, amount left after 6400 years will be about: A 2015-95
 Eng:
 A) 62mg B) 31mg
 C) 16mg D) Less than 16mg
- Remaining undecayed Element = $\frac{N_0}{2^n}$,
 Here; $N_0 \rightarrow$ Original sample = 1g = 100mg &
 $n =$ number of Half live i.e ; Number of half life's = $\frac{6400}{1600} = 4$. Thus
 Remaining undecayed element = $\frac{100}{2^4} = \frac{100}{16} = 6.25\text{mg}$,
-
988. A radioactive substance has a half-life of four months. Three fourth of the substance will decay in. B 2016-11 Eng
 (a) 6 months (b) 8 months
 (c) 12 months (d) 16 months
- Three fourth ($\frac{3}{4}$) decayed means $\frac{1}{4}$ is remaining
 Remaining undecayed Element = $\frac{N_0}{2^n}$ ($N_0 \rightarrow$ original sample) ($n =$ number of Half lives),
 $2^n = N_0 / \text{Remaining undecayed Element}$
 $2^n = 1/4 \times 1 \Rightarrow 1/(1/2)^2 = (1/0.5)^2 = (2)^2$
 $2^n = (2)^2 \Rightarrow n=2$ i.e number of Half lives = 2
 As one half-life is of four months So 2 half-lives = 8 months
-
989. A radioactive substance has a half-life of 60 minutes. During 3 hours the percentage of the material that decayed would be: A
 2016-53 Eng:
 (a) 12.5% (b) 87.5%
 (c) 8.5% (d) 25.1%
-
990. The half-life of a radioactive isotope is 6.5 h. If there are initially 48×10^{32} atoms of this isotope, the number of atoms of this isotope remaining after 26 h is: C
 2016-141 Eng:
 (a) 12×10^{32} (b) 6×10^{32}
 (c) 3×10^{32} (d) 6×10^4

991. The first artificial radioactive substance was made by bombarding aluminum ${}_{15}\text{Al}^{27}$, with α -particle. This produced an unstable isotope of phosphorus, ${}_{15}\text{P}^{30}$, What was the by product of this reaction? **2014-148 Med:** D
 (a) An α -particles (b) A β -particles
 (c) A γ -ray (d) A neutron
-
992. An example boson is a; **2015-156 Eng** A
 A) Photon B) Electron
 C) Neutron D) Neutron
-
993. Fission fragments usually decay by emitting: **2015-177 Med** B
 A) α -particles B) electrons and neutrons
 C) Positron and neutrinos D) only neutrons
-
994. Nuclear fusion at the sun is increasing its supply of: **2015-178 Med** B
 A) Hydrogen B) Helium
 C) Nucleons D) Neutron
-
995. Any baryon is a combination of: **2015-179 Med** A
 A) Three quarks B) Two quarks
 C) Two quarks & an anti-quark D) One quark & one anti-quark
-
996. Fast neutrons can be slowed down by collisions with; **2007-85 Med:** B Fast neutron also slowed down by collision with protons.
 (a) Electrons (b) Protons
 (c) Phonons (d) Photons
-
997. Cadmium rods are used in a nuclear reactor for: **2008-133 Med:** C
 (a) Slowing down fast neutrons (b) Speeding up slow neutrons
 (c) Absorbing fast neutrons (d) Regulating the power level of the reactor
-
998. Reaction in which two or more light nuclei use together to form a single nuclide is categorized as: **2013-135 Eng:** C
 (a) Nuclear fission (b) Chemical reaction
 (c) Nuclear fusion (d) None of the above
-
999. The hadrons are; **2011-196 Eng:** D
 (a) protons (b) neutrons
 (c) mesons (d) all
-
1000. Which one of the following particles belongs to Hadron group? **2013-112 Eng:** B
 (a) Neutrino (b) Proton
 (c) Electron (d) Antineutrino
-
1001. Nuclear fission occurs when **2012-14 Eng:** D
 (a) Light nucleus is split by neutrons
 (b) Light nucleus is split by alpha particles
 (c) Heavy nucleus is split by alpha heavy particles
 (d) Heavy nucleus is split by neutrons.
-
1002. Uranium = 235 decays the thorium-234 by the process of **2011-176 Med:** A
 (a) fission (b) beta decay
 (c) alpha radiation (d) gamma radiation
-
1003. Which one of the following Isotopes of natural uranium undergoes reaction with slow neutron? **2008-07 Med** A
 (a) U_{92}^{235} (b) U_{92}^{236}
 (c) U_{92}^{238} (d) U_{92}^{239}
-
1004. What is the approximate mass of nucleus of uranium? C
 (a) 10^{-13} Kg (b) 10^{-20} Kg
 (c) 10^{-23} Kg (d) 10^{-30} Kg
-
1005. Fission reaction can be produced in U_{92}^{238} by **2011-198, Med** A
 (a) fast neutrons (b) slow neutrons
 (c) thermal neutrons (d) All of these

1006. The device in which the controlled fission chain reaction is maintained is; D
 2010-163, Med
 (a) Cyclotron (b) betatron
 (c) accelerator (d) Nuclear reactor
-
1007. In liquid metal fast breeder reactor, the moderator used is; 2013-145, D
 Eng
 (a) Graphite (b) Heavy water
 (c) Boron rods (d) Not required
-
1008. A certain radionuclide decays by emitting an α -particle. What is the difference between the atomic numbers of the parent and the daughter nuclides? B
 2014-11; Med
 A) 1 B) 2
 C) 4 D) 6
-
1009. Of the following one particle belongs to lepton group: 2014-32; Med A
 (a) Neutrinos (b) Protons
 (c) Neutrons (d) Mesons
-
1010. In liquid metal fast breeder reactor the moderator used is: 2014-178 Med: D
 (a) Graphite (b) Heavy water
 (c) Boron rods (d) Not required.
-
1011. Which species has no net charge? 2014-149 Med: D
 (a) An α -particle (b) An electron
 (c) A proton (d) A neutrino
-
1012. Carbon-14 is used in carbon dating. Which of the following species has both same number of neutrons and same number of electrons as in atom of ^{14}C ? B
 2014-163 Med:
 (a) $^{14}_7\text{N}^+$ (b) $^{16}_8\text{O}^{2+}$
 (c) $^{17}_9\text{F}^+$ (d) $^{18}_{14}\text{Si}$
-
1013. Choose the correct Statement: 2014-111 Med: C
 (a) $^7_3\text{Li} + ^4_2\text{He} \rightarrow ^{10}_5\text{B} + ^1_0\text{n}$ (b) $^7_3\text{Li} + ^4_2\text{He} \rightarrow ^9_5\text{B} + ^1_0\text{p}$
 (c) $^9_4\text{Be} + ^4_2\text{He} \rightarrow ^{12}_6\text{C} + ^1_0\text{n}$ (d) $^9_4\text{Be} + ^4_2\text{He} \rightarrow ^{12}_6\text{C} + ^1_1\text{p}$
-
1014. A neutron with K.E equal to 0.04 eV is called? 2016-109 Med D
 (a) Slow neutron (b) Thermal neutron
 (c) Fast neutron (d) Both (a) and (b)
-
1015. Nuclear fusion in the sun is increasing in supply of: 2016-25 Med B
 (a) Hydrogen (b) Helium
 (c) Nucleons (d) Positrons
-
1016. In a nuclear reaction there is conservation of: 2016-61 Eng D
 (a) Only mass (b) Only energy
 (c) Only momentum (d) All of the above
-
1017. The function of the control rods in a nuclear reactor is to: 2016-152 Eng D
 (a) Increase fission by slowing down the neutrons
 (b) Decrease the energy of the neutrons without absorbing them
 (c) Increase the ability of the neutrons to cause fission
 (d) Decrease fission by absorbing neutrons

1ST YEAR CHEMISTRY

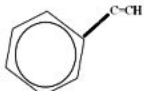
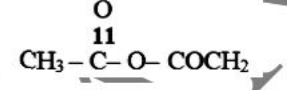
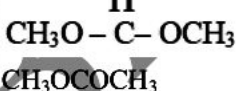
ETEA Medical+Engineering 2019

1. A molecule which contains two lone pairs and two bond pairs of electrons in valence shell of central atom, geometrical shape of molecules will be; 2019-Med a) tetrahedral b) trigonal pyramidal c) angular d) linear ans; c	C	example of completely immiscible liquids 2019-Med a) alcohol and water b) alcohol and ether c) water and ether d) carbon disulphide and water ans;d reason; immiscible liquids are a. carbon disulphide and water b. benzene and water
2. Quantum number which describes the orientation of orbitals in three dimensional space is 2019-Med a) spin quantum number b) azimuthal quantum number c) magnetic quantum number d) principal quantum number ans; c	C	7. Which one of the following is not a state function? a) Work b) enthalpy c) internal energy d) pressure
3. Which one of the following gas has the highest rate of diffusion at same temperature and pressure? 2019-Med a) HCL b) CO ₂ c) C ₂ H ₂ d) C ₂ H ₆ ans; c reason ; because C ₆ H ₆ has least molecular mass than other and rate of diffusion is inversely proportional the molecular mass, this is according to the graham law of diffusion.	C	8. How many elements are there in the 3 period of periodic table? a) 18 b) 8 c) 32 d) 40
4. At higher altitude , the boiling point of water is less than 100°C, this is because of 2019-Med a) higher atmospheric pressure b) weak hydrogen bonding c) no change in atmospheric pressure d) lower atmospheric pressure ans; d reason: at higher altitude atmospheric pressure is lower so water boils at high temperature.	D	9. The number of isomers of pentane is a) 2 b) 4 c) 5 d) 3
5. Substance that has sharp melting point in the following is . 2019-Med a) gemstone b) coal tar c) glass d) diamond ans; d reason; as compared to amorphous solids , crystalline solids have sharp melting point , so here crystalline solid is diamond, others options are amorphous.	D	10. When ammonium cyanide (NH ₄ CN) salt is dissolved in water the solution will be a) Neutral b) acidic c) basic d) both b and
6. Which one of the following pair is an	D	11. The enzyme which is found in saliva, accelerates the conversion of starch into sugar is; a) Pepsin b) thrombin c) Ptyalin d) Fumarase
		12. Consider the reversible reaction. $N_2 + 2NH_3 \rightleftharpoons 2NH_3 + \text{Heat}$ The yield of NH ₃ , will be maximum at a) High temperature and low pressure b) High temperature and high pressure c) Low temperature and low pressure d) Low temperature and high pressure
		13. When zinc electrode is coupled with copper electrode in a galvanic cell a) Reduction takes place at zinc electrode b) Oxidation takes place at copper electrode c) Reduction takes place at copper electrode d) Both a and b
		14. Ozone layer in upper atmosphere is being destroyed by a) Chlorofluorocarbon b) freon c) smog d) both a and b
		15. In the complex, potassium hexacyanoferrate (III). K ₃ Fe(CN) ₆ , the coordination number of Fe is; a) 9 b) 3 c) 6 d) 5
		16. The compound which has the highest

boiling point in the following is		
a) Methyl chloride	b) methyl iodide	
c) methyl bromide	d) both a and b	
17. Which one of the following is addition polymer?		D
a) Nylon	b) PVC	
c) polythene	d) both b and c	
18. Photochemical smog is primarily caused by		B
a) O ₃	b) NO ₂	
c) SO ₃	d) CO ₂	
19. Which of the following is not the major source of organic compound?		D
a) Natural gas	b) petroleum	
c) Coal	d) ammoniacal liquor	
20. Which one of the following concentration units is temperature dependent		C
a) Molality	b) mole fraction	
c) Molarity	d) both a and	
21. Tertiary alcohols are not oxidized into carbon compounds because		B
a) They contain more alkyl group		
b) They have no alpha-hydrogen		
c) Suitable oxidizing agent is not available		
d) None of the above		
22. Which one is more reactive? 2019-Med		A
a) HCHO	b) CH ₃ CHO	
c) (CH ₃) ₂ CO	d) have equal reactivity	
23. Which compound shows the highest boiling point? 2019-Med		A
a) CH ₃ COOH	b) C ₂ H ₅ OH	
c) C ₂ H ₅ -O-C ₂ H ₅	d) (CH ₃ CH ₂) ₃ N	
24. Which contains more atoms? 2019-Med		B
a) 7 gram Mg	b) 8 gram Na	
c) 9 gram Al	d) all same	
25. Which contains highest percentage of nitrogen? 2019-Med		C
a) NO	b) NO ₂	
c) N ₂ O	d) N ₂ O ₅	
26. Fe ²⁺ will form the most ionic bond with 2019-Med		D
a) N-3	b) S-2	
c) P-3	d) F-1	
27. For exothermic reversible reaction activation energy for forward direction depends upon 2019-Med		D
a) Temperature	b) nature of reactant	
c) nature of product	d) both a and b	
28. As the polarizing power of cation increases thermal stability of carbonates 2019-Med		B
a) Increases	b) decreases	
c) not dependent	d) depends upon	
pressure		
29. Which one is more reactive? 2019-Med		B
a) Ester	b) acid halide	
c) amide	d) acid anhydride	
30. Which of the following elements has lowest first ionization energy?		D
a) N	b) O	
c) C	d) B	
31. The anhydride of HClO ₄ is		D
a) ClO ₃	b) ClO ₂	
c) Cl ₂ O ₅	d) Cl ₂ O ₇	
32. A gas diffuses 12 times as fast as hydrogen, its molecular mass is		D
a) 50 amu	b) 25 amu	
c) 16 amu	d) 8 amu	
33. Which one of the following ions has more electrons than protons and more protons than neutrons?		C
a) D ⁺	b) d ⁻	
c) H ⁺	d) He	
34. Ice and water is in equilibrium with each other. By increasing the pressure the equilibrium will shift in		A
a) Forward		
b) reverse		
c) to all system at equilibrium		
d) None of the above		
35. Steam causes severe burns than boiling water. It is due to		B
a) Absence of hydrogen bonding		
b) High latent heat of vaporization		
c) Freely moving molecules		
d) Statement is incorrect		
36. The bond that is formed between two monosaccharide units is called		D
a) ionic bond	b) hydrogen bond	
c) peptide bond	d) Glycosidic bond	
37. They already some of the old ones and them more comfortable		C
a) Repair, make	b) repaired, made	
c) repaired, make	d) repair, made	
38. I was born in Peshawar but most of my childhood in the Mardan		B
a) Spends	b) have spent	
c) was spending	d) is spending	
39. Which oxides of "K" contain more oxygen than its normal oxide?		B
a) Peroxide		
b) super oxide		
c) both contain equal quantity		
d) none of the above		
40. A gas decolorizes alkaline KMnO ₄ solution but does not give any PPT with ammoniacal AgNO ₃		B
a) Methane	b) ethylene	
c) ethane	d) None of the	

above			
41. Why ethanoic acid is a stronger acid in the liquid ammonia than in water?	A	c) He said that wait was not needed by you. d) He said that you must not wait	
a) Ammonia is stronger base than in water b) Ethanoic acid molecules form H-bonding with water c) Ethanoic acid is more soluble in liquid ammonia than in water d) None of the above		52. Which one is more soluble in water?	C
42. Which ions are used as catalyst in the reaction between persulfate ions and iodide ions?	B	a) Secondary amines b) tertiary amines c) quaternary amines d) all are insoluble	
a) Lead b) iron c) copper d) chromium		53. The number of peaks given by ethane thiol in NMR spectrum are	B
43. Which one is stronger nucleophile?	C	a) 2 b) 3 c) 4 d) None of the above.	
a) $C_2H_5O^-$ b) $C_2H_5S^-$ c) both are equally strong d) none of the above		54. $C_4H_{11}N$ gives the type of isomerism	A
44. Which one of the following elements has the largest second ionization energy	C	a) Metamerism b) optical isomerism c) tautomerism d) None of the above	
a) O b) F c) Na d) N		55. The incorrect statement regarding gas having high value of coefficient of attraction	C
45. Which of the following species has the maximum number of unpaired electrons	A	a) Easy to be liquefied b) having higher critical temperature c) less soluble in water d) none of the above	
a) O_2 b) O_2^{+2} c) O_2^{-2} d) O_2^{-2}		56. which one can form more acidic oxide?	B
46. A mixture of 10cm of oxygen and 50cm of hydrogen is sparked continuously. What is the maximum theoretical decrease in volume?	D	a) Sc b) Mn c) V d) Ti	
a) 10cm ³ b) 15cm ³ c) 20cm ³ d) 30cm ³		57. hydration of hydrocarbon give carbonyl compound, the general formula of that hydrocarbon is	C
47. The oxidation state of nitrogen in NH_4NO_3 are	A	a) C_nH_{2n+2} b) C_nH_{2n} c) C_nH_{2n-2} d) both b and c	
a) 3 and 5 b) +5 and 3 c) -3 and -3 d) zero		58. Ethylenediamine Diacetate is 2019-Med	C
48. Which equation relates to the first ionization energy of bromine?	B	a) Didentate b) tridentate c) tetradentate d) hexadentate	
a) $Br(g) \rightarrow Br(g) + e^-$ b) $Br(g) \rightarrow Br^+(g) + e^-$ c) $\frac{1}{2} Br_2(g) \rightarrow Br(g) + e^-$ d) $\frac{1}{2} Br_2(g) \rightarrow Br^+(g) + e^-$		59. Epoxide obtained from isobutylene is further hydrolyzed in the presence of acid. The final product is 2019-Med	C
49. Co-ordination number of $[Co(en)_2Cl_2]$ is;	B	a) 2,3-butanediol! b) 1,2-butanediol c) 2-Methyl-1,2-propanediol d) all of them	
a) -2 b) 6 c) 4 d) None of the above		60. In the direction of nitrogen in an organic compound. The appearance of Prussian blue coloration is due to the formation of	A
50. An olefin "X" on ozonolysis gives $CH_3CH_2COCH_3$ and CH_3COCH_3 . The IUPAC name of X is.	B	a) $Fe_4(Fe(CN)_6)_3$ b) $Na_3[Fe(CN)_6]$ c) $K_3Fe(CN)_6$ d) None of the above	
a) 2-butene b) 2-3 di methyl-2-pentene c) 2-Pentene d) 1-Hexene		61. The bond angle in HS is less than H_2O . it is due to	B
51. He said, "you need not wait" Choose the correct indirect speech	A	a) Small size of oxygen atom b) Greater E.N. of oxygen atom c) Oxygen contain two lone pairs of electrons d) All of the above	
a) He said that I need not wait b) He said you needed to wait		62. The auxochrome not concern with Metanil yellow dye 2019-Med	C
		a) $-SO_3H$ b) $-OH$ c) $-NH_2$ d) both a and c	

- | | |
|--|---|
| <p>63. Consider reversibility in free radical substitution reaction alkane then Kc value is smallest for 2019-Med
 a) Initiation step b) propagation step
 c) Termination step d) all same</p> <p>64. Pollutant which inhibit the synthesis of hemoglobin is
 a) Hg b) Pb
 c) Ni d) Ag</p> <p>65. Which of the following alkyl halides shows higher reactivity?
 a) R-F b) R-Cl
 c) R-Br d) RI</p> <p>66. For a reversible reaction, the catalyst increases the speed of
 a) Forward reaction
 b) Backward reaction
 c) Both forward and backward reactions equally
 d) Forward reaction to a larger extent than backward reaction</p> <p>67. $2\text{N}_2\text{O}_5 \rightarrow 4\text{NO}_2 + \text{O}_2$ this reaction is an example of _____ order reaction
 a) 1st b) 2nd
 c) 3rd d) zero</p> <p>68. Diamond and graphite are
 a) Isomers b) isomorphs
 c) allotropes d) both b and c</p> <p>69. Metal sulfate that is comparatively more soluble in water is
 a) MgSO_4 b) CaSO_4
 c) BaSO_4 d) SrSO_4</p> <p>70. CO_2 is a gas at room temperature but SiO_2 is solid. The reason is that
 a) SiO is ionic
 b) bonds in SiO_2 are very strong
 c) SiO_2 is polymorphic
 d) Si makes double bonds with O</p> <p>71. Which one of the following compounds produce the lowest amount of heat of combustion?
 a) 1-butene b) Trans-2-butene
 c) cis-2-butene d) Isobutylene</p> <p>72. During SN^2 mechanism, the nucleophile attacks on the substrate;
 a) When C-X bond has broken
 b) Before C-X bond has broken
 c) When C-H bond has broken
 d) After the formation of carbocation</p> <p>73. Carat is the unit of purity of gold. 18 carat gold contains _____ % gold
 a) 50-60 b) 70-75
 c) 90-95 d) 99</p> <p>74. Which one of the following reagents is used to distinguish between primary, secondary and tertiary alcohols?
 a) Baeyer's reagent b) Tollen's reagent
 c) Lucas reagent d) Nessler's reagent</p> | <p>75. As the attraction between the nucleus and the foreign electron increases, the potential energy of the system
 a) Increases
 b) unaffected
 c) decreases
 d) first decrease then starts increase</p> <p>76. The formation of but-2-ene always takes place through
 a) SP^2 hybridization
 b) SP^3 hybridization
 c) SP^2, SP^3 both
 d) SP, SP^3 both</p> <p>77. Pentane C_5H_{12} at room temperature does not obey
 a) Charles's law
 b) Boyle's law
 c) Avogadro's law
 d) all of the above</p> <p>78. $20\text{ cm}^3 \text{ CH}_4$ gas was burnt in $10\text{ cm}^3 \text{ O}_2$ to produce CO_2 as
 $\text{CH}_4 + 2\text{O}_2 \rightarrow \text{CO}_2 + 2\text{H}_2\text{O}$
 The limiting reagent in this reaction is
 a) O b) CH
 c) CO_2 d) None of the above</p> <p>79. NO_2 gas shows maximum absorption at about _____ nm
 a) 400 b) 700
 c) 200 d) 120</p> <p>80. Color of the hair dye is mainly due to
 a) Substituted alcohols
 b) stearalkonium hectorite
 c) meta substituted aniline
 d) acetone</p> <p>81. Which one of the following produces an NMR spectrum with more than one peak?
 a) Ethane b) methane
 c) butane d) cyclobutane</p> <p>82. Which one of the following gases is the major contributor greenhouse effect?
 a) Ozone b) CO_2
 c) CH_4 d) NO_2</p> <p>83. Oxidation number of Nickel in tetra carbonyl nickel $\text{Ni}(\text{CO})_4$ is
 a) +4 b) +3
 c) 0 d) -2</p> <p>84. Addition of HCN to acetone forms cyanohydrin. It is an example of
 a) Electrophilic addition reaction
 b) Nucleophilic addition reaction
 c) Electrophilic substitution reaction
 d) Nucleophilic substitution reaction</p> <p>85. In ice there are H-Bonds and covalent bonds. What type of solid is it?
 a) Ionic b) covalent
 c) molecular d) metallic</p> <p>86. Which one of the following liquids is more</p> |
|--|---|

volatile? a) Chloroform b) ethanol c) water d) Glycerin	
87. If the equilibrium constant K_c value for a certain reaction is very small, then a) Reactants are in large amount b) Products are in appreciable amounts c) Reactants and products both are in appreciable amounts d) In such a situation equilibrium cannot be obtained.	A
88. Which one of the following form acidic solution when dissolved in water? a) Na_2CO_3 b) CH_3COONa c) NH_4Cl d) K_2CO_3	C
89. Zinc and copper electrodes are connected for galvanic cell and salt bridge is also immersed in both the half-cell, the salt bridge will give cation to a) Copper half cell b) zinc half cell c) both a and d) None of the above	B
90. When $\text{K}_4[\text{Fe}(\text{CN})_6]$ is dissolved in water. It will furnish _____ ions per molecule. a) 10 b) 2 c) 6 d) 5	D
91. Choose the alkyne that on catalytic hydrolysis form an aldehyde a) $\text{CH}_3\text{-C}\equiv\text{CH}$  b) c) $\text{CH}_3\text{-C}\equiv\text{C-CH}_3$ d) None of the above	D
92. The compound which you can say ester is A) CH_3CONH_2  B) $\text{CH}_3\text{-}\overset{\text{O}}{\underset{\text{O}}{\text{C}}}\text{-O-COCH}_3$  C) $\text{CH}_3\text{O-C-OCH}_3$ D) $\text{CH}_3\text{OCOCH}_3$	D
93. Which one is not endothermic process? a) Atomization of I_2 b) electrolysis of water c) condensation of vapors d) both b and c	C
94. One mole of which of the following bucky ball will have more molecules? a) C_{20} b) C_{50} c) C_{60} d) all same	D
95. The possible peaks (chemical shifts values) for 1 chloro-2-propanol molecules are 3) 2 b) 3 c) 4 d) 7	C
96. For a balanced wheat stone bridge, the current through the galvanometer is a) Maximum b) minimum c) zero d) $1\ \mu\text{A}$	C
97. A metallic carbide on treatment with water gives out a colorless gas, which burns in air readily and gives a red precipitate with CuCl_2 and NH_4OH Identify the gas. a) CH_4 b) C_2H_2 c) C_2H_4 d) C_2H_6	B
98. Acetamide on hydrolysis gives a) Acetaldehyde b) acetic acid c) ethyl amine d) ethanol	B
99. Which one of the following does not have carboxylic acid group? a) Benzoic acid b) ethanoic acid c) picric acid d) adipic acid	C
100. On chlorination, benzene forms single monochlorobenzene without any isomer. It proves that a) Benzene is aromatic b) All C-C in benzene are identical c) All C-H bonds in benzene are identical d) Benzene sometimes behaves as non-aromatic	B
101. Avogadro's constant in the number of a) Atoms in 1g of He b) molecules in 35.5g of chlorine c) electrons present in 2g H d) atoms in 24g of Mg	D
102. A given sample of AlCl_3 contains 6.02×10^{20} Al^{3+} ions. The molecules of Cl^- will be a) 1×10^3 b) 3×10^3 c) 3×10^4 d) 0.33×10^3	
103. The angular momentum of the hydrogen atom in ground state is equal to a) $h/2\pi$ b) $2h/2\pi$ c) $\pi/2h$ d) $2\pi/h$	A
104. which electronic level will allow the hydrogen atom to absorb a photon but not emit? a) 1s b) $2s2p3d$ c) $2p3d$ d) 3d	A
105. Which statement about the following molecules is incorrect? a) NH_3 has pyramidal shape b) CO_2 is linear c) H_2O is angular d) H_2S is linear	D
106. The molecule having zero dipole moment among the following a) NH_3 b) SnCl_2 c) PH_3 d) CCl_4	D
107. For a gas when volume and pressure are 1 dm^3 and 2 atm respectively. What will be its new volume if the pressure is increased to 6 atm at constant temperature? a) $\frac{1}{2}\text{ dm}^3$ b) $\frac{1}{3}\text{ dm}^3$	B

c) $1/4 \text{ dm}^3$	d) $2/3 \text{ dm}$		
108. Vapor pressure of a liquid does not depend on a) Temperature b) intermolecular forces c) amount of liquid d) amount of solid dissolved in liquid	C	d) They have electrophilic carbon and good leaving group	
109. The process or systems that do not involve exchange of heat are called a) Isothermal process b) equilibrium process c) thermal process d) adiabatic process	D	117. Methyl alcohol on oxidation with acidified $\text{K}_2\text{Cr}_2\text{O}_7$, gives a) CH_3COCH_3 b) CH_3CHO c) HCOOH d) CH_3COOH	C
110. When NH_4Cl is added to a solution of $(\text{NH}_4)_2\text{CO}_3$, there will be? a) Decrease in (NH_4^+) ions concentration b) Decrease in CO_3^{2-} ions c) No change in CO_3^{2-} concentration d) No change in concentration of any specie	B	118. Aldehydes are reducing agents, in the reaction with Fehling's solution they reduce a) Cu^{+2} ions b) Ag^+ ions c) NaOH d) Na	A
111. The strongest base among the following is a) Cl^- b) Br^- c) I^- d) CH_3COO^-	D	119. In ice the water molecules are bounded by a) ionic bonds b) hydrogen bonds c) covalent bonds d) metallic bonds	B
112. During the discharge of lead acid battery a) Pb is dissolved at the cathode b) Pb is deposited at the cathode c) PbSO_4 is formed at both anode and cathode d) Concentration of H_2SO_4 increases	C	120. The property of crystalline solid necessary to maintain habit of crystal is called a) Crystal lattice b) lattice site c) geometrical shape d) Polymorphism	C
113. Acidic KMnO_4 can't be used for the estimation of a) Ferrous ions b) oxalic acid c) Potassium iodide d) Ferric ions	D	121. The dispersion phase and dispersion medium for soap lather is respectively a) Gas and solid b) gas and liquid c) liquid and liquid d) solid and liquid	B
114. A compound X is orange red in color, when KOH is added to it, lemon yellow coloration is obtained, compound X is a) K_2CrO_4 b) $\text{K}_2\text{Cr}_2\text{O}_7$ c) KMnO_4 d) PbS	B	122. Which one is not correct for the stability of colloidal solution? a) Greater charge density on colloid b) Less solvation energy c) More Brownian motion d) None of the above	B
115. Ozonolysis of 2-Methyl-2-butene yields a) Only aldehyde b) only ketone c) both aldehyde and ketone d) aldehyde and alcohol	C	123. Which one of the following has highest melting point? a) NaCl b) MgCl_2 c) AlCl_3 d) SiCl_4	A
116. Alkyl halides are reactive towards nucleophilic attack because a) They are ionic in nature b) The C-X bond is non-polar c) They have nucleophilic carbon and bad leaving group	D	124. The main product obtained when acetic acid reacts with PCl_5 ? a) CH_3COCl b) CCl_3CHO c) CH_3Cl d) CH_3OH	A
		125. Hydrolysis of an ester in the presence of alkali is called a) Esterification b) Transesterification c) saponification d) Decarboxylation	C

CHAPTER-1: STOICHIOMETRY

126. Phosphorous exists in nature as tetra atomic molecule. The number of atoms present one gram molecule of phosphorous are: 2018- Eng
A) 6.0323×10^{23} B) $2 \times 6.023 \times 10^{23}$
C) $3 \times 6.023 \times 10^{23}$ D) None of the above

127. Which compound with the given information has greater mass in Kg? 2018- Eng D
 A) $22.4 \text{ km}^3 \text{ N}_2$ at STP B) 2 mole of CO
 C) 6.02×10^{23} molecules of C_2H_4 D) All have equal mass
-
128. $2\text{KClO}_3 \rightarrow 2\text{KCl} + 3\text{O}_2$ C
 Molecular mass of $\text{KClO}_3 = 122.5 \text{ g/mol}$ for the production of 33.6 dm^3 of O_2 at STP the mass of KClO_3 to be decomposed is: 2018-Eng
 A) 245.0g B) 61.25g
 C) 122.5g D) 367.5g
-
129. The volume of CO_2 produced by heating $33.5 \text{ g Li}_2\text{CO}_3$ at room temperature and pressure is (Mr Li_2CO_3 67g/mol): 2018-med B
 A) 22.4 dm^3 B) 12.0 dm^3
 c) 11.2 dm^3 D) 24.0 dm^3
-
130. The number of gram atoms in 3g Hydrogen atoms is the same as the number of gram atoms in 48g of 2018-Med C
 a) N B) C
 c) O D) O_2
-
131. Which of the following is a compound? 2007-148 MEd] A Brass \rightarrow Alloy (Made of Cu + Zn), $\text{O}_2 \rightarrow$ Molecule
 (a) NH_3 (b) Air
 (c) Brass (d) O_2
-
132. Na^+ is Iso-electronic with: 2006-12 MEd] D $\text{Na}^+ = 10 \text{ e}^-$, $\text{Ne} = 10 \text{ e}^- \rightarrow$ Both are Iso-electronic
 (a) Mg (b) He
 (c) Fe (d) Ne
-
133. Which of the following pairs have same electronic structure? 2006-44 MEd] A Ar & Cl^- are Iso-electronic between both have 18 e.
 (a) Ar & Cl^- (b) Ca & Ar
 (c) Mg & Na^+ (d) Ag & Sn
-
134. The anion size are larger than its atomic size because, C
 [2011-03 MEd]
 (a) The addition of electron occupies more space
 (b) It increases the effective nuclear charge
 (c) The repulsion between electrons increases with the addition of electron
 (d) The attraction between electrons and the nucleus increases
-
135. Natural chlorine occurs as a mixture of isotopes if a mixture contains 75% Cl^{35} and 25% Cl^{37} what will be its correct atomic weight? [2010-58 MEd] A
 Amount of $\text{Cl}^{35} = \frac{75}{100} = 0.75$,
 Amount of $\text{Cl}^{37} = \frac{25}{100} = 0.25$
Average atomic weight = (Amount) (At: Mass of 1st isotope) + (Amount) (At mass of 2nd isotope)
 $= (0.75)(35) + (0.25)(37) = 26.25 + 9.25 = 35.5$
-
136. How many hydrogen atoms are present in one mole of water? [2012-104 Eng] C
 (a) 6.02×10^{23} atoms (b) 1.806×10^{24} atoms
 (c) 1.204×10^{24} atoms (d) 3.01×10^{23} atoms
 To find # of Atom = $n \times N_A \times \# \text{ of Atom in formula}$
 $= 1 \times 6.02 \times 10^{23} \times 2$
 $= 12.04 \times 10^{23} = 1.2 \times 10^{24} \text{ atoms}$
-
137. The number of oxygen in 0.5 mole of $\text{Al}_2(\text{CO}_3)_3$ is 2005-124 MEd] C
 (a) 4.5×10^{23} (b) 3.6×10^{24}
 #of Atoms = $n \times N_A \times \# \text{ of Atoms in formula}$
 $0.5 \times 6.02 \times 10^{23} \times 9 = 27.09 \times 10^{23} \Rightarrow 2.7 \times 10^{24} \text{ atoms}$

(c) 2.7×10^{24}

(d) 9.0×10^{23}

138. A sample containing aluminum weighing 10.0g yielded 2.0g of aluminum sulphide. What is the percentage of aluminum (atomic mass = 27.0) in the sample? Sulphur (atomic mass = 32.0) [2011-153 MEd]
- (a) $\frac{2.0 \times 100}{10.0}$ (b) $\frac{2.0}{10} \times \frac{2 \times 27}{150} \times 100$
- (c) $\frac{2.0}{10.0} \times \frac{27}{1500} \times 100$ (d) $\frac{2.0}{10.0} \times \frac{150}{3 \times 27} \times 100$
139. The sample of a compound contains 0.100g of hydrogen and 4.20g of nitrogen. The simplest formula for the compound is... 2005-165 MEd]
- (a) HN_2 (b) NH_3
- (c) HN_3 (d) NH_2
140. Calculate the volume occupied by 2.8g of nitrogen gas at STP. 2005-66 MEd]
- (a) 22.4 dm³ (b) 2.24 dm³
- (c) 4.48 dm³ (d) 44.8 dm³
141. How many atoms are contained in one mole of $\text{Ca}(\text{OH})_2$? [2012-62 MEd]
- (a) $5 \times 6.02 \times 10^{23}$ atoms (b) $30 \times 6.02 \times 10^{23}$ atoms
- (c) $3 \times 6.02 \times 10^{23}$ atoms (d) $6 \times 6.02 \times 10^{23}$ atoms
142. A gas at STP contains only 6.023×10^{23} atoms and is monatomic it will occupy. [2010-115 MEd]
- (a) 1.2L (b) 22.4L
- (c) 30.5L (d) 44.8L
143. How many grams of water are produced in burning 2.24dm³ of hydrogen at STP? [2011-166 MEd]
- (a) 180g (b) 81.g
- (c) 1.8g (d) 0.18g
144. One mole is the amount of substance which contains as many elementary entities as contained in: [2012-58 MEd]
- (a) 0.12 kg of ${}^{12}_6\text{C}$ (b) 1.2 kg of ${}^{12}_6\text{C}$ atom
- (c) 0.012 kg of ${}^{12}_6\text{C}$ atom (d) 0.12 kg of ${}^{16}_8\text{O}$
145. Which one of the following contains the greatest number of atoms: 2008-122 MEd]
- (a) 4g of Hydrogen (b) 4g of magnesium
- (c) 71 g of chlorine (d) 127g of iodine
146. A sample of carbon-12 has a mass of 3.0 g. which expression gives the number of atoms in the sample? (N_A is the symbol for the Avogadro constant. [2013-159 MEd]
- (a) $0.0030N_A$ (b) $0.25 N_A$
- (c) $3.0 N_A$ (d) $4.0 N_A$
- Formua of Aluminum Sulphide=
 Al_2S_3
- %age of an Element =
$$\frac{\text{Given Mass of Al} \times \text{Af: Mass}}{\text{Given Mass of organic Compound} \times \frac{\text{\# of atoms} \times \text{M.Mass of Al}}{\text{M.Mass of organic Compound}}} \times 100 =$$

$$\frac{2.0}{10.0} \times \frac{2 \times 27}{150} \times 100$$
- $n = \frac{V}{V_m} \Rightarrow v = n \times V_m$
$$n = \frac{m}{M} = \frac{2.8}{28} = 0.1$$

$$V = 0.1 \times 22.4 = 2.24 \text{ Dm}^3$$
- # of Atoms = $n \times N_A \times \#$ of Atoms in formula
$$= 1 \times 6.022 \times 10^{23} \times 5$$

$$= (5 \times 6.02 \times 10^{23}) \text{ Atoms}$$
- $22.4 \text{ dm}^3 = 22.4 \text{ L} = 6.023 \times 10^{23} \text{ atoms}$
- $2\text{H}_2 + \text{O}_2 \Rightarrow 2\text{H}_2\text{O}$
2 mole 1 Mole 2 Mole
$$n = \frac{V}{V_m} = \frac{2.24}{22.4} = 0.1 \text{ Moles}$$

$$n = \frac{m}{M}, m = n \times M = 0.1 \times 18 = 1.89$$
- One mole of C-12 = 12 g = (0.012 Kg)
- For $\text{H}_2 = n = \frac{m}{M} = \frac{4}{1.008} = 4 \text{ Mole}$
For $\text{Mg} = n = \frac{m}{M} = \frac{4}{24} = 0.16$
- $N = n \times N_A = n \times \frac{m}{M} = \frac{3}{12} = 0.25$
$$N = 0.25 \times N_A$$

147. Four moles of electrons ($4 \times 6.02 \times 10^{23}$ electrons) would electroplate how many grams of silver from a silver nitrate solution? **2008-145 MEd]** A $\text{AgNO}_3 \longrightarrow \text{Ag}^{+3} + \text{NO}^{-3}$ (Ag = 108)
 $n = \frac{m}{M}$, $m = n \times M$
 $m = 4 \times 108 = 432$
- (a) 216 (b) 324
(c) 432 (d) 540
-
148. How many molecules are present in 0.20 g of Hydrogen gas? **[2013-28 MEd]** C For number of particles = $N = n \times N_A$
 $n = \frac{m}{M} = \frac{0.2}{2.016}$
 $N = \frac{0.2}{2.016} \times 6.02 \times 10^{23}$
- (a) $\frac{0.20}{1.008} \times 6.02 \times 10^{23}$ (b) 0.20×2.016
(c) $\frac{0.20}{2.016} \times 6.02 \times 10^{23}$ (d) $\frac{1.008}{0.70} \times 6.02 \times 10^{23}$
-
149. 1 amu is equal to 1.661×10^{-24} g, then 1.0 g will be equal to: A **[2012-52 MEd]**
- (a) 6.022×10^{23} amu (b) 6.022×10^{-23} amu
(c) 6.022×10^{-24} amu (d) 6.022×10^{24} amu
-
150. Calculate the number of moles of NaCl in 75.0g of table salt **2005-159 MEd]** D $n = \frac{m}{M} = \frac{75}{58} = 1.29$
- (a) 0.643 (b) 0.779
(c) 28.0 (d) 1.28
-
151. If water samples are taken from sea, river, clouds, lakes or snow, they will be found to contain hydrogen and oxygen in the ratio of 1:8 by weight. This indicates the law of **2006-159 MEd]** C
- (a) Definite proportion (b) Multiple proportion
(c) Reciprocal proportion (d) None of the above
-
152. 10 L of Cl_2 gas reacts with 40L of H_2 gas under same conditions of temperature and pressure. How much volume of HCL should be produced? **2008-69 MEd]** C
- (a) 40L (b) 30L (c) 20L (d) 10L
-
153. If 28.0g nitrogen gas is reacted with 8.0g of hydrogen gas to form Ammonia, the limiting reactant among the two will be: **2008-54 MEd]** A
- (a) N_2 (b) H_2 (c) Both a & b (d) None of these
-
154. Choose the correct Statement: **[2014-105 MEd]:** D
- (a) The most direct and accurate method for determining atomic masses uses mass spectroscopy.
(b) The indirect but accurate method for determining molecular masses uses mass spectroscopy.
(c) Collision between the electrons and the atoms produces negative ions by absorption of electrons by atoms or molecules.
(d) The first application of the mass spectroscopy was the demonstration to detect various isotopes of argon.
-
155. Choose the correct relation about the percent yield. It is equal to: **[2014-96 MEd]:** A
- a) $\frac{\text{Actual yield}}{\text{Theoretical yield}} \times 100$ b) $\frac{\text{Theoretical yield}}{\text{Actual yield}} \times 100$
c) $\frac{\text{Actual yield}}{\text{Theoretical yield}} \times 10^6$ d) $\frac{\text{Actual yield}}{\text{Theoretical yield}} \times 10^3$
-
156. What is the number of hydrogen atoms in 5 moles of water? **[2015-55 MEd]** B
- A) 3.0115×10^{24} B) 6.023×10^{24}
C) 6.023×10^{23} D) 5.0×10^{23}
of Atoms = $n \times N_A \times \text{\# of Atoms in formula (Atomicity)} = 5 \times 6.022 \times 10^{23} \times 2 = 6.023 \times 10^{24}$
-
157. $\text{N}_2 + 3\text{H}_2 \rightleftharpoons 2\text{NH}_3$. In the above reaction the limiting reagent is: **[2015-95 MEd]** D
- A) N_2 B) H_2
C) Ammonia D) None of the above

158. Theoretical yield is always: [2015-134 Eng] B
 A) Less than practical yield. B) Greater than actual yield
 C) Both are equal D) None of the above
-
159. Which of the following is iso-electronic pair? B
 [2015-192 Eng]
 A) Ne and Na B) Ne and Mg^{+2}
 C) Al and c D) Ar and Ca
-
160. Consider the following reaction involved in the manufacture of Urea: $CO_2 + 2NH_3 \rightarrow NH_2COONH_4$ C
 If 22.0g of CO_2 react with 34 g of ammonia to form ammonium carbamate, the reaction is taken as irreversible and go to completion. Identify the limiting reagent and the amount of carbamate forMED]:
 (a) CO_2 , 78g (b) NH_3 , 78g
 (c) CO_2 , 39g (d) NH_3 , 39g
-
161. A ring contains 1.2gram of diamond, the number of carbon atoms in the ring are: [2016-78 Eng] A
 (a) $N_A/10$ (b) N_A
 (c) $N_A/2$ (d) $1.2 N_A$
-
162. Cylinder "A" contain 4.6 grams of C_2H_5OH and cylinder "B" has 3 grams C_2H_6 : [2016-79 Eng]
 (a) Both cylinder A and B have equal number of molecules
 (b) Cylinder A has greater number of molecules than cylinder B
 (c) Both cylinders have the equal number of hydrogen atoms
-
163. DDT is used as insecticides its molar mass is 354.5g/mol when DDT was analysed by chemist he found that it contained 47.4% carbon. How many carbon atoms are there in DDT molecule: [2016-108 Eng] C
 (a) 10 (b) 12
 (c) 14 (d) 16
-
164. Which of the following species have the same number of neutron and electron as in C-14:[2016-127 En] C
 (a) $^{17}_7N^{-1}$ (b) $^{19}_9F^{+1}$
 (c) $^{16}_8O^{+2}$ (d) $^{28}_{14}S$
-
165. 60 a.m.u of C-12 contain carbon: atoms [2016-157 Eng] B
 (a) 60 (b) $60 \times 6.02 \times 10^{23}$
 (c) $5 \times 6.02 \times 10^{23}$ (d) 5
-
166. Balance the given equation by using the suitable coefficients from the following sets: A
 $FeS_2 + O_2 \rightarrow Fe_2O_3 + SO_2$ [2016-189 Eng]
 (a) 4:11:2:8 (b) 1:10:2:8
 (c) 6:5:3:7 (d) 2:11:4:8
-
167. $2XeF_6 + SiO_2 \rightarrow 2XeOF_4 + SiF_4$ Consider the above chemical reaction. If 122.6 g of XeF_6 reacts with 60 g of SiO_2 to form the products. Select the limiting reagent and amount of SiF_4 forMED]: (XeF_6 245.3 amu, SiO_2 = 60 amu, SiF_4 = 104 amu) A
 [2016-28 MED]s
 (a) XeF_6 , 26 g (b) SiO_2 , 26 g
 (c) XeF_6 , 52 g (d) SiO_2 , 52 g
-
168. How many oxygen atoms are present in 278g of Hydrated Ferrous Sulphate? B
 ($FeSO_4 \cdot 7H_2O$ = 278 any) [2016-52 MED]
 (a) 6.023×10^{23} (b) 6.525×10^{24}

(c) 2.408×10^{23} (d) 6.023×10^{22}

169. Select the reaction when the supply of air is very limited. D

[2016-146 MEd]

- (a) $\text{CH}_4 + 2\text{O}_2 \rightarrow \text{CO}_2 + 2\text{H}_2\text{O} + \text{heat}$
 (b) $2\text{CH}_4 + 3\text{O}_2 \rightarrow 2\text{CO}_2 + 4\text{H}_2\text{O} + \text{heat}$
 (c) $\text{CH}_3 - \text{CH}_3 + 7\text{O}_2 \rightarrow \text{CO}_2 + 6\text{H}_2\text{O} + \text{heat}$
 (d) $2\text{CH}_4 + 2\text{O}_2 \rightarrow 2\text{C} + 4\text{H}_2\text{O} + \text{heat}$

170. $2\text{XeF}_6 + \text{SiO}_2 \rightarrow 2\text{XeOF}_4 + \text{SiF}_4$ Consider the above chemical reaction. If 122.6 g of XeF_6 reacts with 60 g of SiO_2 to form the products. Select the limiting reagent and amount of SiF_4 for MEd]: (XeF_6 245.3 amu, SiO_2 = 60 amu, SiF_4 = 104 amu) A

[2016-28 MEd]

- (a) XeF_6 , 26 g (b) SiO_2 , 26 g
 (c) XeF_6 , 52 g (d) SiO_2 , 52 g

171. How many oxygen atoms are present in 278g of Hydrated Ferrous Sulphate? [2016-52 MEd] B

(FeSO₄.7H₂O = 278 any)

- (a) 6.023×10^{23} (b) 6.525×10^{24}
 (c) 2.408×10^{23} (d) 6.023×10^{22}

CHAPTER-2: ATOMIC STRUCTURE

172. For production of characteristic K, X-rays, the electron transition if from: 2018-04 Eng C

- A) n 3 to 2 B) n 1 to n-2
 C) n 2 to n-1 D) n 2 to n-3

173. The magnetic quantum number for the last sub orbital having 3 electrons in phosphorous $^{15}_{31}\text{P}$ is: 2018-Eng A

- A) -1, 0, +1 B) -1, 0, -1
 C) 0, -1, +2 D) -1, +1, -2

174. If the required excitation voltage is given, for which element the x-rays spectrum consists of three spectral lines i.e. K_α K_β L_α A

2018-Med

- A) Na b) boron
 C) K D) Ca

175. Energy of electron in first excited state of Hydrogen atom in atom is. B

2018-med

- a) 2.8×10^{-18} b) 0.545×10^{-18}
 c) -2.18×10^{-18} d) -1312.36

Energy of 1st Excited state -
 $3.4\text{eV} = 3.4 \times 1.6 \times 10^{-19} \text{ J/atom} = -$
 $0.545 \times 10^{-18} \text{ J/atom.}$

176. Which list shows electromagnetic waves in order of increasing frequency? B

2018- Med

- A) Radio waves \rightarrow gamma rays \rightarrow ultraviolet \rightarrow infra-red
 B) Radio waves \rightarrow infrared \rightarrow ultraviolet \rightarrow gamma rays
 C) Ultraviolet \rightarrow gamma rays \rightarrow radio waves \rightarrow infrared
 D) Ultraviolet \rightarrow infra-red \rightarrow radio waves \rightarrow gamma rays

177. The charge on the electron and proton is reduced to half. If the present value of Rydberg constant is R , then the new value of Rydberg constant will be
2018-med
A) $R/2$ B) $R/4$
C) $R/8$ D) $R/16$ C
-
178. Two atoms A and Li have the electronic configuration given below: A
[2015-15 MEd]
(x) $1S^2 2S^1 2P^6 3S^1$ (y) $1S^2 2S^2 2P^5$
Which of the following compounds are they likely to form?
A) X_y B) X_y^2
C) X_{1y} D) X_{y3}
-
179. The energy difference between adjacent energy levels of the hydrogen atom: [2015-26 MEd] B
A) Increases with increasing energy
B) Decreases with increasing energy
C) First increases & then decreases with increasing energy
D) First decreases & then increases with increasing energy
-
180. In the discharge tube emission the cathode rays requires: 2008-74 D
[MEd]:
a) Low potential and low pressure
b) low potential and high pressure
c) high potential and high pressure
d) high potential and low pressure
-
181. Particles involved in an ordinary chemical reaction are: 2009-102 C
[MEd]:
(a) Protons (b) Neutrons
(c) Electrons (d) All of the above
-
182. The constancy of e/m ratio for electron shows that ; B
2006-137 [MEd]:
(a) Electron mass is $1/837^{th}$ of proton
(b) Electrons are universal particles of all matter
(c) Electrons are produced in discharge tube only
(d) None of the above
-
183. The charge of electron was determined by the effect of electric field on rate of fall of oil droplets under gravity this was done by: [2010-125 MEd] C
(a) JJ Thomson (b) E Rutherford
(c) R.A. Milliken (d) WC Roentgen
-
184. Which of the following rays has the longest wavelength? A
[2012-33 Eng]:
(a) Infrared rays (b) ultraviolet rays
(c) Gamma rays (d) x-rays
-
185. Continuous adsorption spectrum is obtained from 2005-77 [MEd]: A
(a) Excited atoms (b) Excited molecules
(c) Ground state molecules (d) Ground state atoms
-
186. Who postulated the following equation for energy emission when an electron drops from state n_2 to n_1 ? [2010-118 Eng] B
(a) Einstein (b) Bohr
(c) Rutherford (d) Heisenberg
-
187. For a H-atom which one of the following statements is correct? 2008-170 [MEd] B
(a) the radius of the orbits are integral multiple of the Bohr-radius
.... 0.053nm

(b) the angular momentum is n times $\frac{h}{2\pi}$

(c) the energy in the n th-orbit is n times the ground state energy.(d)

None of the above

-
188. The total energy of a Hydrogen atom in its ground state is: [2012-26 C
MEd]:
(a) zero (b) positive
(c) negative (d) None
-
189. The energy of electron in the excited state $n=4$ in hydrogen atom is:[2010-174 MEd]:
(a) -13.6eV (b) -3.4eV
(c) -0.85eV (d) -1.5eV
-
190. The part of electromagnetic spectrum in which Lyman series lies is: C
[2012-110 MEd]:
(a) Visible region (b) Infrared region
(c) Ultra violet region (d) X-rays
-
191. Which one of the following series are observed in the visible region of electromagnetic radiation. 2005-01 MEd]: B
(a) Lyman series (b) Balmer series
(c) Bracket series (d) Plunds series
-
192. Transition from $n = 4, 5, 6, \dots$ to $n = 3$ in hydrogen spectrum gives 2007-99 MEd]
(a) Balmr series (b) Lyman series
(c) Paschen series (d) Pfund series
-
193. The wave nature of an electron is illustrated by its: [2011-103 MEd] D
(a) photoelectric effect (b) Compton effect
(c) penetrating effect (d) diffraction
-
194. A ball of mass 1 gram is moving with a velocity of $10^3 \text{ m} - \text{s}^{-1}$. The De-broglie wavelength of the ball is: 2009-172 MEd]
(a) $13.26 \times 10^{-36} \text{ m}$ (b) $3.315 \times 10^{-34} \text{ m}$
(c) $6.63 \times 10^{-34} \text{ m}$ (d) $4.97 \times 10^{-36} \text{ m}$
-
195. How many different values can m , assume in the electron sub-shell designated by quantum number $n=5, l=4$? [2013-108 MEd]
(a) 4 (b) 5
(c) 6 (d) 9
-
196. The number of orbital's in 'M' shell of an atom is; [2010-29 MEd] D # of orbital in shell = $n^2 = (3)^2 = 9$
(a) 1 (b) 4
(c) 5 (d) 9
-
197. If an atom exists in the excited state $n = 5$, the maximum number of transition takes place is: [2011-182 MEd] C # of transition (spectral lines) = $\frac{n(n-1)}{2} = \frac{5(5-1)}{2} = \frac{20}{2} = 10$
(a) 6 (b) 5
(c) 10 (d) 3
-
198. An orbital may never be occupied by: 2009-58 MEd] C
(a) 1 electron (b) 2 electrons
(c) 3 electrons (d) 0 electron
-
199. Nitrogen has three unpaired electrons according to: 2009-158 MEd] A
(a) Hund's rule (b) Aulban rule
(c) Paoli's exclusion principle (d) Thumb rule
-
200. The atomic number of scandium is 21. What is its ground state electronic configuration? [2012-08, Eng], [2013-92 MEd] C
(a) $1s^2 2s^2 2p^6 3s^2 3p^3 3d^3$
(b) $1s^2 2s^2 2p^6 3s^2 3p^3 3d^3 4s^1$

- (c) $1s^2 2s^2 2p^6 3s^2 3p^6 3d^1 4s^2$
 (d) $1s^2 2s^2 2p^6 3s^2 3p^6 3d^3 4p^1$

201. The correct electronic configuration of Nickel (28) is: [2012- A
 118 MED]

- (a) $1s^2 2s^2 2p^6 3s^2 3p^6 3d^8 4s^2$
 (b) $1s^2 2s^2 2p^6 3s^2 3p^6 3d^7 4s^2 4p^1$
 (c) $1s^2 2s^2 2p^6 3s^2 3p^6 3d^6 4s^2 4p^2$
 (d) $1s^2 2s^2 2p^6 3s^2 3p^6 3d^6 4s^1 4p^3$

202. The electronic configuration of gallium, atomic number 31 is: A
 [2011-172 MED]

- (a) $[Ar] 4s^2 3d^{10} 4p^1$ (b) $[Ar] 3s^2 3d^{10} 4p^1$
 (c) $[Kr] 3s^2 3d^{10} 4p^1$ (d) $[Kr] 4s^2 3d^{10} 4p^1$

203. Which is incorrect about ionization energy? [2014-98 MED]: D

- (a) Ionization energy Depends upon the magnitude of nuclear charge.
 (b) Ionization energy depends upon the atomic radius
 (c) Ionization energy depends upon the shielding effect.
 (d) Ionization energy does not depend upon the penetration effect of the inner orbital. .

204. Select the incorrect Statement: [2014-104 MED] C

- (a) Molecule may gain electron to form molecular anion.
 (b) Molecule may lose electron to form molecular cation.
 (c) Molecular cations are less abundant than molecular anions.
 (d) These molecular ions can be formed by passing high energy electron beam through a gas.

205. Rutherford's scattering experiment demonstrates: [2014-133 MED] D

- a) The existence of X-rays.
 b) The existence of α -particles.
 c) The mass to charge ratio of electron.
 d) The nuclear model of the atom.

206. Which is incorrect statement? [2014-143 MED] C

- (a) The ionic bonds are non directional in character.
 (b) The crystals of covalent compounds are made up of molecules.
 (c) The covalent bonds are rigid and non directional.
 (d) Ionic compounds have high melting point and boiling point.

207. When hydrogen gas is enclosed in a discharge tube using low pressure, it emits: [2016-08 Eng] B

- (a) Green light (b) Blue light
 (c) Red light (d) Yellow light

208. Which of the following elements with the given electronic configuration has the highest ionization energy? [2016-148 Eng] B

- (a) $1s^2 2s^2 2p^4$ (b) $1s^2 2s^2 2p^3$
 (c) $1s^2 2s^2 2p^6 3s^1$ (d) $1s^2 2s^2 2p^6 3s^2 3p^3$

209. Shown below are portion of orbital diagrams representing the ground state electronic configuration of certain elements. Which of them obeys the Pauli's exclusion principle? Hund's rules? [2016-98 MED] C

- (a) $\uparrow \uparrow \uparrow \uparrow$ (b) $\uparrow \uparrow \downarrow \uparrow$

- (c) $\uparrow \uparrow \uparrow \downarrow$ (d) $\uparrow \uparrow \uparrow \downarrow$

210. Which of the following electromagnetic waves has the smallest wavelength? [2016-158 MED] C

- (a) X-rays (b) Gamma rays
 (c) Microwaves (d) Ultraviolet rays

211. Choose atom that is not having a spin quantum number $\frac{1}{2}$. D
 [2016-198 Med]
 (a) C^{13} (b) N^{15}
 (c) F^{19} (d) O^{16}
-
212. X-rays are widely used as a diagnostic tool in **Med**icine because of C
 its: [2016-64 Med]
 (a) Particle property
 (b) Cost of X-ray unit is low
 (c) High penetrating power
 (d) It is not electromagnetic waves
-
213. What are the values of principal quantum number and azimuthal quantum number for the last electron in Chlorine atom? C
 [2016-87 Med]
 (a) 1.6 (b) 1.3
 (c) 3.1 (d) 6.1
-
214. Choose atom that is not having a spin quantum number $\frac{1}{2}$. D
 [2016-198 Med]
 (a) C^{13} (b) N^{15}
 (c) F^{19} (d) O^{16}

CHAPTER-3: THEORIES OF COVALENT & SHAPES OF MOLECULES

215. The bond energy of H_2 molecule ($H_2 \rightarrow 2H$) is: 2017-21 Med D
 A) 436 Kj/mol B) 40.7 Kj/mol
 C) 272 kj/mol D) 436 Avogadro's no Kj/mol
 Text Book Reference: Page #91(Ch#03, 1st Year)
-
216. Considering the molecular orbital theory (MOT) choose the correct relative energies order: 2017-22 A
 a) $\sigma_{15} < \sigma_{15}^* < \sigma_{25} < \sigma_{25}^* < \sigma_{2px} < \pi_{2pz} = \pi_{2pz}^*$
 b) $\sigma_{15} < \sigma_{15}^* < \sigma_{25} < \sigma_{25}^* < \pi_{2py} = \pi_{2pz} < \pi_{2pz}^*$
 c) $\sigma_{15} < \sigma_{15}^* < \sigma_{25} < \sigma_{25}^* < \pi_{2px} = \pi_{2py} < \sigma_{2pz}$
 d) $\sigma_{15} < \sigma_{15}^* < \sigma_{25} < \sigma_{25}^* < \pi_{2py} < \pi_{2pz} < \pi_{2pz}^*$
-
217. The existence of H_2 is not possible because: 2017-140 Med D
 A. It would be disproportion
 B. It would ratio active
 C. It violate the pauli exclusion principle
 D. No H-H bond would form
-
218. Silver mirror is given by: 2017-17 Eng A
 A. Aldehyde B. Ketone
 C. Ethers D. Acids
-
219. Select the one having half-filled P Orbitals on losing an electron: 2017-72 Eng C
 A Nitrogen B.Lithium
 C.Oxygen D.Fluorine
-
220. Which of the following ions contain one unpaired electron? 2018-47 Eng C
 A) Zn^{+2} B) K^{+1}
 C) Cu^{+2} D) Na^{+1}
-
221. According to VSEPR theory, in which of the following molecules the electron pair geometry is; 2018- Eng B
 A) CH_4 B) NH_3
 C) BF_3 D) None of the above

222.	The orbital with highest energy is A) Hybrid C) Molecular	B) Un-hybrid d) all are of equal energy	C
223.	The unpaired electron in the molecule of NH_3 is: 2018-eng A) 0 c) 2	b) 1 d) 3	A
224.	Unhybrid "P" orbitals on linear overlap: 2018-med A) Always form $\text{Pi}(\pi)$ bond B) Always form $\text{Sigma}(\sigma)$ bond C) Neither form "a" nor "" bond D) Form more reactive and more unstable " π " bond		C
225.	Species with dipole moment equal to zero is: 2018-Med. A) CO_2 B) CH_4 C) 1-4-Dibromobenzene D) all of the above		d
226.	In the compound CO_2 , and H_2O the hybridization in oxygen is respectively; 2018- Med A) Sp^2 and Sp^3 C) Sp^3 and Sp^3	B) Sp^2 and Sp^3 D) Sp^3 and Sp^2	B
227.	Select molecule that has unpaired electrons in anti-bonding molecular orbitals: [2015-05 MEd] A) N_2 C) H_2	B) Cl_2 D) O_2	D
228.	Choose the type of hybridization of carbon atoms in cyclopropane and the bond angle C–C–C. [2015-45 MEd] A) Sp^3 , 109.5° C) Sp^2 , 120°	B) Sp^3 , 60° D) Sp^2 , 107°	B
229.	The shape of SnCl_2 is: [2015-74 MEd] A) Linear C) Trigonal planar	B) Trigonal pyramidal D) Angular	D
230.	What happens to the molecule when its atoms are brought closer than the bond length between them? 2005-12 MEd] (a) Molecule becomes unstable (b) Molecule becomes more stable (c) Molecule starts vibrating (d) Stability of the molecule remains un-changed		A
231.	What causes a sharp increase in the energy with a further decrease in the distance between atoms A and B after bond formation? [2010-158 Eng] (a) Attraction of atoms A and B (b) Repulsion of nuclei of A and B and electrons of A and B (c) Attraction of nucleus of A and electron of B (d) Bond formation		B
232.	During the formation of a chemical bond between two atoms the forces which are operative are: [2010-42 Eng] (a) Both forces of attraction and repulsion (b) Either force of attraction nor repulsion (c) Only force of attraction (d) Only force of repulsion		A

233. Which of the following elements with a given electronic configuration has the highest ionization potential value? [2012-134 MEd] A
 (a) $1s^2 2s^2 2p^3$ (b) $1s^2 2s^2 2p^4$
 (c) $1s^2 2s^2 2p^6 3s^1$ (d) $1s^2 2s^2 2p^6 3s^2 3p^3$
-
234. Which one will show ionic bonding? [2012-04 MEd] A
 (a) NaH (b) $PbCl_4$
 (c) HCl (gas) (d) PCl_3
-
235. The longest bond is of: 2008-175 MEd] A Electronegative difference
 (a) H – I (b) H – O
 (c) H – S (d) H – Cl
 $\propto \frac{1}{\text{bond length}}$
-
236. Which one of the following compounds has the shortest carbon-halogen bond? [2013-190 Eng] A
 (a) CH_3F (b) CH_3Cl
 (c) CH_3Br (d) CH_3I
-
237. CO_2 is ISO-structural with: 2009-125 MEd] A
 (a) $HgCl_2$ (b) $SnCl_2$
 (c) C_2H_2 (d) NO_2
-
238. Oxygen molecule has two unpaired electrons. It is therefore, [2013-132 MEd] D
 (a) Ferromagnetic (b) Diamagnetic
 (c) Electromagnetic (d) Paramagnetic
-
239. Which of the following hybridization can explain the shape of $BeCl_2$? [2012-138 MEd] B
 (a) sp^2 hybridization (b) sp hybridization
 (c) sp^3 hybridization (d) dsp^2 hybridization
-
240. Which of the following pairs of molecules have similar geometry? 2005-51 MEd] D
 (a) CO_2 and SO_2 (b) BF_3 and NH_3
 (c) $MgCl_2$ and $AlCl_3$ (d) CH_4 and SiH_4
-
241. How many sigma bonds are there in $CH_2 = CH - CH = CH_2$: [2012-99 MEd] B
 (a) 6 (b) 9
 (c) 11 (d) 4
-
242. The bond angle between H – C – C bond in ethane is: [2013-52 MEd] A
 (a) 109.5 (b) 120
 (c) 90 (d) 107.5
-
243. What type of hybrid orbits are used by the carbon atoms in C_2H_4 ? [2005-168 MEd] B
 (a) sp (b) sp^2
 (c) d^2sp^2 (d) sp^3
-
244. Species in which the central atom uses Sp hybrid orbital in its bonding is: 2009-148 MEd]
 (a) PH_3 (b) NH_3
 (c) SbH_3 (d) C_2H_2
-
245. The bond form between boron and Hydrogen is: [2010-165 MEd]
 (a) Ionic (b) Covalent
 (c) Coordinate covalent (d) None of the above

246. The behavior of PbCl_2 and PbCl_4 respectively are: [2011-13 MEd] A
 (a) Ionic and covalent
 (b) Covalent and ionic
 (c) Covalent and coordinate covalent
 (d) Ionic and coordinate covalent
-
247. What type(s) of bonds is/are present in NH_4Cl ? 2008-163 MEd] D
 (a) Ionic (b) Covalent
 (c) Co-ordinate covalent (d) All of them
-
248. In which compound the bond angle is maximum? B
 [2014-144 MEd]
 a) Methane b) Beryllium chloride
 c) Ammonia d) Boron trifluoride
-
249. London forces are stronger in: [2015-33 MEd] B
 A) Br_2 B) I_2
 C) F_2 D) Cl_2
-
250. What is true about modern methods used in the determination of the structure of compounds? [2015-146 MEd] D
 A) Accurate but more time consuming
 B) Accurate, rapid but chemicals are used in large amounts
 C) Accurate, rapid but sophisticated and complicated
 D) Accurate, simple and less time consuming
-
251. Bond energy of covalent bond decreases with the increase in: C
 [2016-88 Eng]s
 a) Polarity (b) Multiplicity
 (c) Size of atom (d) All of the above
-
252. In the compound ${}^4\text{CH}_2 = {}^3\text{CH} - {}^2\text{CH} = {}^1\text{CH}_2$ [2016-99 Eng] C
 (a) C-1 and C-2 are SP^2 hybridized
 (b) C-1 and C-2 are SP hybridized and C-2 and C-3 are SP^2 hybridized
 (c) All the carbon atoms are SP^2 hybridized
 (d) All the statements are wrong
-
- ### CHAPTER-4:-GASES
253. When an electric current is passes through neon gas, it produces: C
 2018-35 Eng
 A) Plasma B) Light
 C) Both plasma and light d) plasma, light, sound
-
254. The collision of the gas molecules with the wall of the container is responsible for gaseous pressure. According to van der Waals (after pressure correction) which gas will exert more pressure if temperature is kept constant: 2018101 Eng D
 A) Real gas B) ideal gas
 C) Non ideal gas D) All exert same pressure
-
255. Atmospheric pressure is measured by: 2018-88 Eng B
 A) Hygrometer B) Barometer
 C) Pyrometer D) Spherometer
-
256. Regarding liquefaction of gases, the highest temperature at a fixed pressure of; 2018155 Eng A
 A) SO_3 B) NH_3
 c) Cl_2 D) CO_2
-
257. The equation used to describe the behavior of ideal gases under standard conditions; 2018-73 Med, Paper-D D
 A) $PV=nRT$ b) $PM=dRT$
 c) $PVM=mRT$ D) All of the above

258. An unknown gas diffuses 5 times slower than that of H_2 . The molecular mass of the unknown gas is; 2018192 Med, Paper-D A
 A) 50 b) 10
 c) 15 d) 25.
-
259. At constant temperature if the pressure of the gas is doubled its volume becomes. [2010-46 Eng] A
 (a) One half (b) Double
 (c) Four times (d) Remains the same
-
260. According to Gay-Lussac's variation of the volume of a sample of gas, at constant pressure a straight line was obtained where slope was found to be equal to: [2012-01 Eng] B
 (a) $\frac{V_1}{273}$ (b) $\frac{V_0}{273}$
 (c) $\frac{P_1}{273}$ (d) $\frac{P_0}{273}$
-
261. If absolute temperature of the gas is doubled and pressure is increased 4 times, then the volume becomes: [2015-96 MEd] A $T \propto V$ & $P \propto 1/V$
 A) Half B) Double
 C) 4 times D) Unchanged
-
262. At what temperature both Fahrenheit and Celsius scales coincide? D
 [2010-34 Eng]
 (a) $40^\circ C$ (b) $-30^\circ C$
 (c) $32^\circ C$ (d) $-40^\circ C$
-
263. Which thermodynamic temperature is equivalent to $501.85^\circ C$? [2013-123 MEd] A $= C^\circ + 273.15$
 $K = 501.85 C^\circ + 273.15 = 775.00 K$
 (a) 775.00 K (b) 774.85 K
 (c) 228.85 K (d) 228.70 K
-
264. Which scientist made the following proposal equal volumes of gases under the same conditions of temperature and pressure contain the same number of particles [2010-119 Eng] c
 (a) Gay Lussac (b) Curie
 (c) Dalton (d) None of the above
-
265. At constant temperature, if the volume of the given mass of a gas is doubled, then the density of the gas becomes. [2011-92, 2007-37 MEd]: B
 (a) Double (b) One half
 (c) One quarter (d) Four times
-
266. In a closed room of $1000 m^3$, a perfume bottle is opened up. The room develops smell. This is due to which property of gases? 2007-63 MEd] A
 (a) Diffusion (b) Viscosity
 (c) Density (d) None of the above
-
267. A bottle of dry NH_3 and a bottle of dry HCl connected through a long tube are opened simultaneously at both ends. The white NH_4Cl ring for MEd] will be 2007-89 A Because NH_3 is lighter than HCl and will travel more distance.
 MEd]
 (a) At the centre of the tube (b) Near the NH_3 bottle
 (c) Near the HCl bottle (d) Throughout the length of the tube
-
268. Rate of diffusion on NH_3 is 1.6 times faster than CO_2 . The correct form of the rate law equation for this statement will be 2005-16 MEd] B
 (a) $\frac{r_{NH_3}}{r_{CO_2}} = \frac{1}{1.6}$ (b) $\frac{r_{NH_3}}{r_{CO_2}} = \frac{1.6}{1}$

- (c) $\frac{rCO_2}{rNH_3} = \frac{1}{1.6}$ (d) None of these

269. If a single balloon is filled with equal volumes of hydrogen, helium, nitrogen, and neon, which gas will be depleted first? **B**
 2007-23 **MEd**
 (a) Helium (b) Hydrogen
 (c) Nitrogen (d) Neon
-
270. Consider an equation: $N_2 + O_2 \rightarrow 2NO$. The partial pressure (In atm) of N_2 under normal atmospheric pressure is: **D** **2006-17 MEd**
 (a) 0.05 (b) 0.25
 (c) 0.35 (d) 0.45
- Solution:**
 $P = X P_0$
 $(n = 2 \text{ moles})$
 $P^0 = \text{Total Pressure} = 1 \text{ atm}$
 $X = \text{Mole fraction} = \frac{\text{Moles of Comp}}{\text{Total Moles in Mix}} = \frac{1}{2} = 0.5$
 $P = X P_0 = 0.5 \times 1 = 0.5 \text{ atm}$
 Partial Pressure of $N_2 = 0.45$
-
271. A mixture of 50g H_2 and 50g He has a total pressure of 1.5atm. what is the partial pressure of H_2 gas **A** **2005-54 MEd**
 (a) 1.0atm (b) 2.0atm
 (c) 1.5atm (d) 3.0atm
- Solution:**
 $P = X P^0$
-
272. 4.0 dm³ of O_2 at a pressure 800 atm and 1.0 dm³ of N_2 at a pressure of 100 atm are put into a 2.0 dm³ vessel. The total pressure in the vessel is: **C** **2008-15 Eng**
 (a) 800atm (b) 600 atm
 (c) 900 atm (d) 200 atm
- Solution:**
 $P_{\text{Total}} = P_1 + P_2 = 800 + 100 = 900 \text{ atm}$
-
273. Why does an ideal gas exert pressure on its container? **b** **[2012-62 Eng]**
 (a) The molecules of the gas collide continually with each other.
 (b) The molecules of the gas collide in elastically with the walls of the container.
 (c) The molecules of the gas collide continually with the walls of the container.
 (d) The weight of the molecules exerts a force on the walls of the container.
-
274. 40.0 dm³ of an ideal gas at 25°C and 750 mm Hg is expanded to 50.0 dm³. The pressure of the gas changed to 765 mm Hg. What is the temperature of the gas? **C** **[2013-98 MEd]**
 (a) $\frac{(2912)(750)(50)}{(40)(765)}$ (b) $\frac{(298)(750)(40)}{(50)(765)}$
 (c) $\frac{(2912)(765)(50)}{(750)(40)}$ (d) $\frac{(750)(40)}{(298)(765)(50)}$
- Solution:**
 $\frac{P_1 V_1}{T_1} = \frac{P_2 V_2}{T_2}$
 $T_2 = \frac{P_1 V_1 T_1}{P_2 V_2} = \frac{(765)(50)(298)}{(750)(40)}$
-
275. The ideal gas equation is $PV = nRT$ the symbol n in SI unit represents: **A** **2008-180 MEd**
 (a) The number of molecules in the gas
 (b) Avogadro's number
 (c) The number of kilo-moles
 (d) The number of molecules per unit volume
-
276. The volume occupied by 3.2 g of oxygen at STP is: **B** **[2012-131 MEd]**
 (a) 22.4 dm³ (b) 2.24 dm³
 (c) 11.2 dm³ (d) 16.0 dm³
- Solution:**
 $n = \frac{m}{M} = \frac{3.2}{32} = 0.1$ & $n = \frac{V}{V_m} \Rightarrow V = n \times V_m = 0.1 \times 22.4 = 2.24$

277. The internal energy of fixed masses of an ideal gas depends on: **B**
[2013-116 MEd]
(a) Pressure, but not volume or temperature.
(b) Temperature, but not pressure or volume.
(c) Volume, but not pressure or temperature.
(d) Pressure and temperature, but not volume.
-
278. Which one of the following most closely resembles an ideal gas? **D**
[2011-159 MEd]
(a) Xe (b) H₂
(c) CO₂ (d) He
-
279. Real gases deviate more from ideal behavior at: 2009-98 MEd] **c**
(a) High temperature only
(b) High pressure only
(c) High pressure and low temperature
(d) Low pressure and high temperature
-
280. Which gas deviates most from ideal behavior at room temperature and pressure? 2005-133 MEd] **D** Deviation \propto Polarity
(a) Hydrogen (b) Nitrogen
(c) Methane (d) Sulphur dioxide
-
281. Equal volume of different gases under same condition of temperature and pressure contain the same number of particles. The above statement is of: [2014-80 MEd]: **A**
(a) Avogadro's law (b) Graham's Law
(c) Dalton's law (d) Hund's rule
-
282. The van der Waals equation of state for non-ideal gases differs from the ideal gas law in that it accounts for: [2014-131 MEd]: **D**
I) The mass of each molecule of the gas.
II) The volume of each molecule of the gas.
III) The attractive forces between molecules of the gas.
(a) I, II and III (b) I and II only
(c) I and III only (d) II and III only
-
283. Equal volume of CO and N₂ are taken in identical conditions, the correct relation between masses of two gases is: [2015-08 Eng] **C**
A) CO < N₂ B) CO > N₂
C) CO = N₂ D) N₂ < CO
-
284. A flask contains 6 gram of hydrogen gas and 64 gram oxygen at r.t.p. the partial pressure of hydrogen gas in the flask of the total pressure (p) will be: [2016-178 Eng] **B**
(a) $\frac{2}{3}p$ (b) $\frac{3}{5}p$
(c) $\frac{2}{5}p$ (d) $\frac{1}{3}p$
-
285. A gas diffuses $\frac{1}{2}$ times as fast as hydrogen gas its molecular mass is: [2016-187 Eng] **C**
(a) 32 a.m.u (b) 25 a.m.u
(c) 8 a.m.u (d) 16 a.m.u
-
286. At absolute zero the molecules of hydrogen gas will have: **B**
(a) Only translational motion
(b) Only vibrational motion
(c) Only rotational motion
(d) All the motions are ceased
-
287. If p is a pressure and δ is a density then p/δ has units of: **A**
[2016-169 MEd]
(a) m²/s² (b) N/m²
(c) Kg/m² (d) m³/Kg

288. At absolute zero the molecules of hydrogen gas will have: **B**
[2016-19 MEd]
 (a) Only translational motion
 (b) Only vibrational motion
 (c) Only rotational motion
 (d) All the motion are ceased

Chapter-5+6:-LIQUIDS & SOLIDS

289. The compound with most exothermic lattice energy is: 2017-81 **C**
Med
 A. CaCl_2 B. K_2O
 C. CaO D. BaCl_2

290. Choose the anisotropic behavior; 2017141 **Med** **A**
 A. Coefficient of thermal expansion
 B. Lattice energy
 C. Viscosity
 D. Infrared spectroscopy

291. Amorphous solids are made by fusing silicates with: 2017-93 **D**
Med
 A. Boric acid
 B. Aluminum oxide
 C. Phosphorus pentoxide
 D. All of the above

292. Compound with a greater number of hydrogen bonding is: 2018-81 **B**
Eng
 A) CH_3OH B) H_2O
 C) CdS D) H_2SO_4

293. The liquid with highest rate of evaporation among the following is: **B**
 2018-82 **Eng**
 A) Water B) Ethyl alcohol
 C) Ammonia D) N-pentane

294. All are anisotropic at room temperature except; 2018126 **Eng** **A**
 A) CCl_4 B) AgNO_3
 C) CdS D) BaCO_3

295. At a temperature of -10°C which one doesn't have the property of molecular crystal among the following is: 2018157 **Eng** **D**
 A) Phosphorous
 B) Water
 C) Sucrose
 D) None of the above

296. Evaporation depends upon' 2018119 **Med Paper-D** **D**
 A) Surface area B) Temperature
 C) Both (A) & (B) D) None of the above

297. Hydrogen bonding in H-F is stronger than H_2O and NH_3 . The highest boiling point among the three; 2018193 **Med, Paper-D** **C**
 A) HF B) NH_3
 C) H_2O D) All have equal boiling points.

298. In which of the following compounds hydrogen bonding is possible? **C**
[2012-166 MEd]
 (a) PH_3 (b) CH_4
 (c) NH_3 (d) SiH_4

299. Cleaning action of soap is due to: **A**
 2009-112 MEd]
 (a) Decrease in surface tension of water
 (b) Viscosity of water
 (c) High boiling point of water
 (d) Polarity of water
-
300. What type of intermolecular attractive force are present in CO_2 ? 2008-64 MEd] **C**
 (a) Hydrogen bonding (b) Dipole-dipole interaction (c) London forces (d) Covalent bonding
-
301. Which is true about London forces? [2012-115 MEd]
 (a) London forces are present in non-polar molecules (b) London forces are present in polar molecules
 (c) London forces are created between instantaneous dipole and induced dipole
 (d) All of the above.
-
302. London dispersion forces (forces between the particles) are present in: 2008-185 MEd] **D**
 (a) Gases only (b) Liquids only
 (c) Solids only (d) All of the above
-
303. Evaporation occurs at: [2010-56 Eng] **A**
 (a) All (b) Low temperature
 (c) High temperature (d) Absolute temperature
-
304. The lowest vapor pressure is exerted by. 2006-114 MEd] **C**
 (a) Water (b) Kerosene oil
 (c) Mercury (d) Rectified spirit
-
305. Choose the correct statement: [2012-21 Eng]: **A**
 (a) crystalline solids are usually anisotropic but liquid crystals are isotropic.
 (b) crystalline solids are usually isotropic but liquid crystals are anisotropic.
 (c) liquid crystals have both isotropic and anisotropic properties
 (d) liquid crystals are devoid of isotropic and anisotropic properties.
-
306. The shape or appearance in which a crystal grows is called: 2009-145 MEd]
 (a) Crystal geometry (b) Crystal lattice
 (c) Crystal habit (d) None of the above
-
307. The existence of a substance in more than one solid modification is known as. 2007-122 MEd] **C**
 (a) Isomorphism (b) Amorphism
 (c) Polymorphism (d) None of the above
-
308. KNO_3 exists in two crystalline forms Rhombohedra and orthorhombic the phenomenon is known as: [2011-158 Eng]: **A**
 (a) Polymorphism (b) Isomorphism
 (c) Allotropy (d) None of these
-
309. Choose the correct statement: [2012-122 MEd]: **D** Ionic solid never exists in the form of liquids or gases
 (a) Ionic solids exist in the form of molecules
 (b) Ionic solids have high volatility
 (c) Ionic solids exist in the form of liquids and
 (d) Ionic solids have high melting points and boiling points
-
310. Which one of the following characteristics is not usually attributed to ionic substances? [2010-159 MEd] **c**

- (a) High melting point (b) Deform when struck (c) Fragility (d) Crystalline
-
311. The electrical conductivity of NaCl crystal is: 2008-159 MEd] **d**
 (a) More than NaBr crystal
 (b) Less than NaBr crystal
 (c) Equal to NaBr crystal
 (d) NaCl crystal doesn't conduct electric current
-
312. The type of intermolecular forces (force between the particles) present in solid mercury is: 2008-118 MEd]: **c**
 (a) covalent bonds (b) Ionic Bonds
 (c) Metallic bonds (d) H-bonds
-
313. Both NaNO_3 and CaCO_3 crystallize in Rhombohedral forms therefore they are: [2014-65 MEd]: **D** **Different crystalline solids having same crystal shape are called isomorphs.**
 (a) Allotropes (b) Polymorphous
 (c) Isomorphous (d) None of these
-
314. Pure water freezes at 0°C and boils at 100°C at standard conditions. Calcium chloride was added to pure water. What do you expect about its freezing point and boiling point. [2014-66 MEd]: **D**
 (a) No change in its freezing point and boiling point
 (b) Freezing point increases and boiling point decreases.
 (c) Freezing point increases and boiling point increases
 (d) Freezing point decreases and boiling point increases
-
315. Hydrogen bonding does not exist in the molecule of: [2014-91 MEd]:
 (a) Hydrogen (b) Proteins
 (c) Carbohydrates (d) Ammonia
-
316. Vapour pressure of a liquid can be measured by the Barometric method and Manometric: [2014-97 MEd]:
 (a) Barometric method is more accurate than Manometric method.
 (b) Manometric method is more accurate than Barometric method.
 (c) Both are equally accurate and applicable.
 (d) Both methods are in use but are not reliable.
-
317. Liquid crystalline substances are used to locate tumors in the body because: [2014-119 MEd]:
 (a) These parts of the body are warmer than the surroundings.
 (b) These parts of the body are cooler than the surroundings.
 (c) These parts of the body are constantly increasing and decreasing with the temperature.
 (d) None of the above
-
318. Sodium chloride crystal structure is: [2014-161 MEd]:
 (a) Hexagonal (b) Body centered cubic
 (c) Face centered cubic (d) Tetragonal
-
319. Choose the compound in which hydrogen bonding is not possible: [2014-176 MEd]: **Compounds having F, O & N atoms can form hydrogen bonding.**
 (a) H_2O (b) HCl
 (c) CH_3COOH (d) CH_3OCH_3

320. Atomic size of xenon is larger than Neon. Considering the London dispersion forces which one of the following is true. **A**
[2016-68 Eng]
 (a) Neon molecules have weaker London dispersion forces
 (b) Xenon molecules have weaker London dispersion forces
 (c) Xenon and Neon have almost same London dispersion forces
 (d) Xenon have lower boiling point than neon
-
321. The heat of vaporization of the liquid A, B and C are 60, 30 and 40 recall/mule respectively the order of decreasing inter molecular forces among their molecules is: **C**
[2016-158 Eng]
 (a) $A > B > C$ (b) $C > B > A$
 (c) $A > C > B$ (d) $B > C > A$
-
322. Graphite is one of the allotropic form of Carbon it is: **B**
[2016-119 MEd]
 (a) Isotropic (b) Anisotropic
 (c) Bond conductor of electricity (d) Both (b) & (c)
-
323. Distillation under reduced pressure is used to purify liquids which **D**
[2007 MEd]
 (a) Are explosive
 (b) Are highly volatile
 (c) Decompose at their boiling point
 (d) Have high boiling point
- vacuum distillation decrease the time of distillation and also avoid thermal decompositions of many compounds like glycerine.

CHAPTER-7

CHEMICAL EQUILIBRIUM

324. The specie with a strongest conjugate base in aqueous solution among the following; **C**
2018-196 Eng
 A) HI
 B) HNO_3
 C) CH_3COOH
 D) HClO_4
-
325. Excess of BaSO_4 was dissolved in pure water at 25°C . If its $K_{sp} = 1 \times 10^{-10}$ what is the Conc: of Ba^{2+} ions in water? **C**
[2016-200 MEd]
 (a) 10^{-10} (b) 10^{-20}
 (c) 10^{-5} (d) 10^{-6}
- As K_{sp} value is due to product of B and SO_4 so concentration of Ba^{+2} is :
 $K_{sp} = [\text{Ba}][\text{SO}_4] = 10^{-14}$
 $K_{sp} = [10^{-5}][10^{-5}] = 10^{-14}$
 $\text{Ba}^{+2} = 10^{-5}$
-
326. $\text{NH}_4\text{OH}_{(\text{aq})} \rightleftharpoons \text{NH}_4^+_{(\text{aq})} + \text{OH}^-_{(\text{aq})}$ **B**
 Consider the above ionization, Ammonium chloride is added to the system. Select the correct statement.
[2015-04 MEd]
 A) The equilibrium will shift to the right
 B) The equilibrium will shift to the left
 C) The equilibrium will remain undisturbed
 D) The equilibrium will be attained quickly
- The equilibrium will shift towards left because NH_4OH is suppressed by ammonium chloride due to common ion effect.
-
327. When does a chemical reaction attain equilibrium? **A**
2009-22 MEd]
 (a) When forward and backward reaction taking place at the same rate
 (b) reaction takes place
 (c) The forward and backward
 (d) There are two reactions with one faster than the other
- When forward and backward reaction taking place at the same rate, the equilibrium is established.

328. For a reversible reaction to reach on equilibrium state the reaction said to be carried out in: 2006-149 **MEd]**
 (a) Glass vessel (b) Iron vessel
 (c) Open vessel (d) closed vessel
329. Forces controlling the reactions are proportional to the product of the active masses (concentration) of chemicals. The above statement is of: **[2012 MEd]**
 (a) Raoult's Law
 (b) Le Chatlier's principle
 (c) The law of conservation of energy
 (d) The law of mass action
330. Select the correct equilibrium constant expression, K_c for the following reversible reaction. **[2012-122 MEd]**

$$\text{Ce}^{4+}_{(aq)} + \text{Fe}^{2+}_{(aq)} \rightleftharpoons \text{Ce}^{3+}_{(aq)} + \text{Fe}^{3+}_{(aq)}$$
 (a) $\frac{[\text{Ce}^{3+}_{(aq)}][\text{Fe}^{3+}_{(aq)}]^2}{[\text{Ce}^{4+}_{(aq)}][\text{Fe}^{2+}_{(aq)}]}$ (b) $\frac{[\text{Ce}^{3+}_{(aq)}][\text{Fe}^{3+}_{(aq)}]}{[\text{Ce}^{4+}_{(aq)}][\text{Fe}^{2+}_{(aq)}]}$
 (c) $\frac{[\text{Ce}^{3+}_{(aq)}]^2[\text{Fe}^{3+}_{(aq)}]}{[\text{Ce}^{4+}_{(aq)}][\text{Fe}^{2+}_{(aq)}]}$ (d) $\frac{[\text{Ce}^{3+}_{(aq)}][\text{Fe}^{3+}_{(aq)}]}{[\text{Ce}^{4+}_{(aq)}]^2[\text{Fe}^{2+}_{(aq)}]}$
- Answer:**
331. A reaction between CO and H₂O is:

$$\text{CO}_{(g)} + \text{H}_2\text{O} \rightleftharpoons \text{CO}_{2(g)} + \text{H}_2$$
 the unit of equilibrium for this reaction is: **[2010-92 Eng]**
 (a) Mol/liter (b) Liter/mol
 (c) Dimensionless (d) Mol/cm³
332. If K_c is small, it indicates that the equilibrium occurs 2007-20 **MEd]**
 (a) At a low product concentration
 (b) Only with the help of catalyst
 (c) At a high product concentration
 (d) None of these
333. Consider a chemical reaction

$$2\text{Cl}_{(g)} \rightleftharpoons \text{Cl}_{2(g)}$$
 The extent of completing this reaction depends upon the magnitude of K_c and shows that the equilibrium mixture will consist almost of Cl molecules when. **[2010-156 MEd]**
 (a) K_c is very large
 (b) K_c is very small
 (c) K_c is neither very small nor very large
 (d) K_c is equal to 1
334. If K_c of a certain reaction is large it indicates that at equilibrium: **[2012-114 Eng]**
 (a) The reactants concentration will be high
 (b) the products concentration will be low
 (c) The products concentration will be high
 (d) the reactants and products concentration will be equal
335. The equilibrium constant for a reaction.

$$\text{N}_2(g) + \text{O}_2(g) \rightleftharpoons 2\text{NO}(g)$$
 is 4×10^{-4} at 2000K. in the presence of catalyst the equilibrium is attained 10 times faster. The equilibrium constant in presence of catalyst at 2000 K
- For reaction to reach in equilibrium, reaction must be carried out in closed vessel so no product or reactant can leave the vessel and equilibrium can be established.
- Law of mass action states that Forces controlling the reactions are proportional to the product of the active masses (concentration) of chemicals.
- $K_c = \text{product/reactant} = \frac{[\text{Ce}^{3+}_{(aq)}][\text{Fe}^{3+}_{(aq)}]}{[\text{Ce}^{4+}_{(aq)}][\text{Fe}^{2+}_{(aq)}]}$
- The reaction has not unit and dimensionless because 2 mol reactants gives 2 mol products.
- $K_c = \text{pro/reactant}$
 If K_c is small, it means product is less.
- As mixture contains mostly molecules that I Cl₂ which is product in this case.
 $K_c = \text{product/reactant}$
 As product is more so K_c value is very large.
- If K_c value is large, it means products are large or in high amount.
 Because $K_c = \text{product/reactant}$

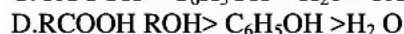
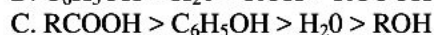
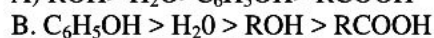
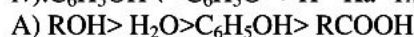
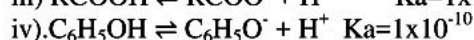
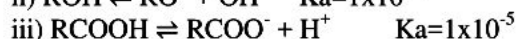
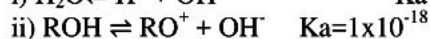
is. 2007-111 MEd]

- (a) 10×10^{-4} (b) 4×10^{-4}
(c) 40×10^{-4} (d) 4×10^{-2}

336.	Consider the reaction $3\text{H}_2(\text{g}) + \text{N}_2(\text{g}) \rightarrow 2\text{NH}_3(\text{g})$ All of the following will lead in this reaction to the production of more NH_3 except 2005-19 MEd] (a) A decrease in the volume of the container (b) An increase in pressure by addition of hydrogen (c) Removal of NH_3 (d) An increase in pressure by addition of nitrogen	A	If we increase the pressure the reaction move in forward direction, also by removing ammonia reaction will move in forward direction. If we decreases the container volume it will effect reaction rate because reactants will not react easily.
337.	$\text{H}_2 + \text{I}_2 \rightleftharpoons 2\text{HI}$ this reaction is not effected by: 2007-39 MEd] (a) Volume (b) Pressure (c) Temperature (d) PH	B	$\text{H}_2 + \text{I}_2 \rightleftharpoons 2\text{HI}$ this reaction is not effected by pressure because two moles of reactants gives two moles of products.
338.	For reaction $3\text{O}_{2(\text{g})} \rightleftharpoons 2\text{O}_{3(\text{g})}$ $K_c = 10^{-56}$ at 25°C one can predict 2008-198 MEd] (a) More O_3 is formed (b) more reactants are consumed (c) The forward reaction progresses to a large extent (d) The backward reaction goes to near completion.	D	As value of K_c is very small, so only little products is present, it means the backward reaction in near to complete.
339.	Reactant formation in an endothermic reaction would be favoured by which of the following? [2010-84 MEd] (a) Increase in temperature (b) Decrease in temperature (c) No change in temperature (d) First increase and then decrease in temperature Answer:	B	If reaction is endothermic, it means that It required heat to form product and its backward direction is exothermic. Decrease in temperature will favor backward direction and will form reactants.
340.	Consider the reaction $2\text{SO}_2 + \text{O}_2 \rightarrow 2\text{SO}_3$ The yield of SO_3 will be maximum if: 2008-102 MEd] (a) Both pressure & temperature are increase (b) Both pressure and temperature are decrease (c) Temperature is decreased and pressure is increased. (d) Temperature is increased and pressure is decreased	C	To get more product in this case , we should decrease the temperature because the reaction is exothermic and evolve heat. Also the increase in pressure gives more product because volume is decreased in forward direction. 3 moles reactants gives 2 moles product.
341.	The value of K (equilibrium constant) for a reaction? 2009-28 MEd] (a) Is the same at different temperatures? (b) Is different, at different temperature (c) Is negligible at room temperature. (d) Can be the same at different temperatures	B	The value of K_c is different for different temperature because it is effected by temperature.
342.	Consider the following endothermic reaction: $\text{N}_{2(\text{g})} + \text{O}_{2(\text{g})} \rightleftharpoons 2\text{NO}_{(\text{g})}$ What will happen to the equilibrium if the temperature of the system is raised? [2012-64 MEd] (a) The equilibrium will shift in the backward (b) The equilibrium position will suffer no change (c) The equilibrium will shift to forward direction (d) All of the above	C	Formation of NO is endothermic process, so increase in temperature will favor forward direction of reaction.

343. For the exothermic reaction, forward reaction is $\text{NO}_{(g)} \rightleftharpoons \text{N}_{2(g)} + \text{O}_{2(g)}$ [2010-49 MEd]
 (a) Is independent of temperature
 (b) Increases as temperature increases
 (c) Decreases as temperature increases
 (d) Varies with addition of N_2 and O_2 C The forward reaction is exothermic so it will decrease as the temperature increases.
-
344. Consider the reaction $2\text{SO}_2 + \text{O}_2 \rightarrow 2\text{SO}_3$ The yield of SO_3 will be maximum if: 2012-02 MEd]
 (a) both pressure & temperature are increase
 (b) both pressure and temperature are decrease
 (c) temperature is decreased and pressure is increased
 (d) Temperature is increased and pressure is decreased C To get more product in this case, we should decrease the temperature because the reaction is exothermic and evolve heat. Also the increase in pressure gives more product because volume is decreased in forward direction. 3 moles reactants gives 2 moles product.
-
345. In the given Exothermic reaction $\text{PCl}_3 + \text{Cl}_2(g) \rightarrow \text{PCl}_5(g)$
 an increase in yield will be favored by: 2005-102 MEd]
 (a) Decrease of temperature
 (b) Increase of temperature
 (c) Keeping temperature constant
 (d) None of these A An increase in yield will be favored by decrease in temperature because forward reaction is already exothermic.
-
346. The values of ionic product K_w are 0.64×10^{-14} at 18°C , 1×10^{-14} at 25°C . From this may be derived that [2010-100 MEd]
 (a) Endothermic process
 (b) Exothermic process
 (c) Vaporization process
 (d) Change of H_2O into O_2 and H_2 C
-
347. Which is not correct about the manufacture of ammonia by Haber – Process? The break opening of the nitrogen triple bond ($\text{N} \equiv \text{N}$) to form N_2H_2 in first step of the reaction is taken as; [2012-131 Eng]
 (a) Very difficult step
 (b) Highly unstable product
 (c) Highly endothermic
 (d) None of the above C The break opening of the nitrogen triple bond ($\text{N} \equiv \text{N}$) to form N_2H_2 in first step of the reaction is taken as highly endothermic because it involves breaking of triple bonds.
-
348. $K_p = K_c (\text{RT})^{\Delta n}$ in the equation if $\Delta n < 0$ then: [2016-88 MEd]
 (a) $K_p = K_c$ (b) $K_p < K_c$
 (c) $K_p > K_c$ (d) $K_p < 0$ B $K_p = K_c (\text{RT})^{\Delta n}$ in the equation if $\Delta n < 0$ then $K_p = K_c (\text{RT})^{-\Delta n}$
 $K_p = K_c / (\text{RT})^{\Delta n}$ it means that when we divide K_c by values of $\text{RT}^{\Delta n}$ value then it equals to K_p otherwise it is higher than K_p .
-
349. Which is not correct about the manufacture of ammonia by Haber – Process? The break opening of the nitrogen triple bond ($\text{N} \equiv \text{N}$) to form N_2H_2 in first step of the reaction is taken as: [2016-13 MEd]
 (a) Very difficult step
 (b) Highly unstable product
 (c) Highly endothermic
 (d) None of the above c The break opening of the nitrogen triple bond ($\text{N} \equiv \text{N}$) to form N_2H_2 in first step of the reaction is taken as highly endothermic because it involves breaking of triple bonds.
-
350. Choose acids that are showing leveling effect; 2017-35
 i) HClO_4 ii) HI iii) HCl iv) HF
 A. i & iv B. i, ii, & iv
 C. iii & iv D. i, ii, & ii D
-
351. K_a values of some compound are given below, select the correct order of acidic strength: 2017121 C

Med



352. Excess of Ag_2CrO_4 was dissolved in distilled water B
its solubility was found to be $1.3 \times 10^{-4} \text{ mol dm}^{-3}$.

What is the solubility product: 2017143

A. $K_{sp} = [1.3 \times 10^{-4}]^2 [1.3 \times 10^{-4}]$

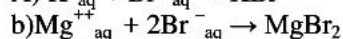
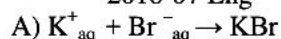
B. $K_{sp} = [2.6 \times 10^{-4}]^2 [1.3 \times 10^{-4}]$

C. $K_{sp} = [1.3 \times 10^{-8}] [1.3 \times 10^{-4}]$

D. $K_{sp} = [1.3 \times 10^{-8}] [1.3 \times 10^{-4}]$

353. Aqueous solution of KBr was added to the aqueous solution of MgBr_2 . Due to common Brions equilibrium is disturbed. To reach the state of new equilibrium which reaction will occur;

2018-07 Eng

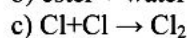
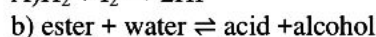
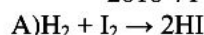


c) both are possible

d) common ion effect is not applicable to this system

354. Which reaction do you think has highest value of K_c ? A

2018-71 Eng



355. B

The solubility of $\text{Ag}_2\text{Cr}_2\text{O}_7$ at 25°C was $2.0 \times 10^{-5} \text{ M}$ K_{sp} value is; 2018-195 Eng

A) 3.2×10^{-14}

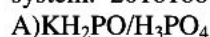
B) 4.0×10^{-10}

C) 8.0×10^{-25}

D) 8.0×10^{-10}

356. Choose the one that cannot be classed as buffer B

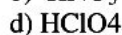
system: 2018188 Eng



CHAPTER: 8

ACIDS, BASIS AND SALTS

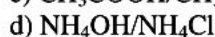
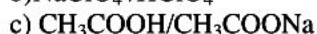
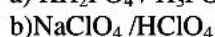
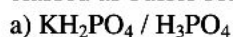
357. The specie with strongest conjugate base in the solution among the following; 2018-188-Eng



D

Weak acid have strong conjugate bases and strong acid have weak conjugate basis. As CH_3COOH is weak acid its conjugate base will be strong.

358. Choose which one of the following can not be classed as buffer solution; 2018-96-Eng



B

Buffers solution is made of;

1. Weak acid and its salt with strong base \rightarrow pH less than 7 (acidic)

2. $\text{CH}_3\text{COOH} / \text{CH}_3\text{COONa}$

3. Weak base and its salt with strong acid \rightarrow pH more than 7 (basic)

4. $\text{NH}_4\text{OH}/\text{NH}_4\text{Cl}$

359. Choose acids that are showing leveling effect.
 i] HClO_4 ii] HI
 iii] HCl iv] HF [2017-35-Med]
 a) i and iv b) i, iii and iv
 c) iii and iv d) i, ii and iii
360. K_a values of some compounds are given below, select the correct order of acidic strength
 i] $\text{H}_2\text{O} \rightleftharpoons \text{H}^+ + \text{OH}^-$ $K_a = 1 \times 10^{-14}$
 ii] $\text{ROH} \rightleftharpoons \text{H}^+ + \text{RO}^-$ $K_a = 1 \times 10^{-18}$
 iii] $\text{RCOOH} \rightleftharpoons \text{H}^+ + \text{RCOO}^-$ $K_a = 1 \times 10^{-5}$
 iv] $\text{C}_6\text{H}_5\text{OH} \rightleftharpoons \text{H}^+ + \text{C}_6\text{H}_5\text{O}^-$ $K_a = 1 \times 10^{-10}$
 [2017-121-Med]
 a) $\text{ROH} > \text{H}_2\text{O} > \text{C}_6\text{H}_5\text{OH} > \text{RCOOH}$
 b) $\text{C}_6\text{H}_5\text{OH} > \text{H}_2\text{O} > \text{ROH} > \text{RCOOH}$
 c) $\text{RCOOH} > \text{C}_6\text{H}_5\text{OH} > \text{H}_2\text{O} > \text{ROH}$
 d) $\text{RCOOH} > \text{ROH} > \text{C}_6\text{H}_5\text{OH} > \text{H}_2\text{O}$
361. Which of the following ions can act both as bronsted acid and base in solvent water? [2015-16 MEd]
 A) CN^- B) SO_4^{2-}
 C) CHO_3^- D) PO_4^{3-}
362. The proton acceptor is: [2015-135 MEd]
 A) NH_3 B) BF_3
 C) HCl D) H^+
363. Which one of the following acids has a strong conjugate base? [2015-136 MEd]
 A) CH_3COOH B) HCl
 C) HNO_3 D) H_2SO_4
364. The pH of 0.001M aqueous solution of NaOH is: [2015-146 MEd]
 A) 6 B) 13
 C) 11 D) 12
365. The aqueous solution of which one of the following compounds maintain its pH constant? [2015-154 MEd]
 A) CH_3COOH and $(\text{NH}_4)_2\text{SO}_4$
 B) NH_4NO_3 and KNO_3
 C) NH_4OH and NH_4Cl
 D) NH_4OH and NaCl
366. According to the Bronsted and Lowry concept which of the following species cannot function as an acid? [2010-101 Eng]
 (a) SO_4^{2-} (b) H_3O^+
 (c) HSO_4^- (d) NH_4^+
367. Which of the following ions can act as a bronsted acid and base in water? [2010-144 MEd]
 (a) HCO_3^- (b) CN^-
 (c) NO_3^- (d) PO_4^{3-}
368. Compounds which tend to donate electron pair are known as Lewis bases or nucleophile. Which one of the following is not a Lewis base? [2006-20 MEd]
 (a) $\text{CH}_3\text{-NH}_2$ (b) PH_3
- HClO_4 , HI and HCl shows leveling effect because these are strong acid, HF weak acid so it does not show leveling effect.
- The stronger the acid, the larger will be K_a .
 As $10^{-5} > 10^{-10} > 10^{-14} > 10^{-18}$
 so $\text{RCOOH} > \text{C}_6\text{H}_5\text{OH} > \text{H}_2\text{O} > \text{ROH}$
- Bronsted Acid is Proton donor specie & Bronsted base is proton acceptor.
 CHO_3^- can donate and accept electron
- NH_3 accepts proton and becomes NH_4^+
- Weak acid have strong conjugate bases and strong acid have weak conjugate basis. As CH_3COOH is weak acid its conjugate base will be strong.
- $\text{OH}^- = 0.001\text{M} = 10^{-3}$
 Thus $\text{pOH} = 3$,
 As $\text{pH} + \text{pOH} = 14$ so $\text{pH} = 14 - 3 = 11$
- The solution which maintain pH is called buffer solution. It is prepared from weak acid & its salt with a strong base like $\text{CH}_3\text{COOH}/\text{CH}_3\text{COONa}$ OR weak base and its salt with a strong acid e.g; NH_4OH and NH_4Cl
- SO_4^{2-} has double negative charge and can't lose more electrons, so it can't be acid.
- AlCl_3 is Lewis acid which can accept electron pair so it cannot be Lewis base but it is Lewis acid.

	(c) $AlCl_3$	(d) H_2O		
369.	Which one of the following is electron deficient compounds: [2008-110 MEd]		D	BCl_3
	(a) NH_3	(b) PH_3		
	(c) PCl_3	(d) BCl_3		
370.	The smaller the value of P_Ka : [2013-08 MEd]		C	The stronger the acid, the larger will be K_a value and smaller will be pK_a value. K_a and pK_a value are inversely proportional.
	(a) The weaker the base			
	(b) The stronger the base			
	(c) The stronger the acid			
	(d) None of the above			
371.	Which one of the following acids has the highest pH value: [2006-05 MEd]		C	$P_H \propto \frac{1}{Acidity}$, As HF is weakest acid in the options so its pH value is highest.
	(a) $HCl(aq)$	(b) $HNO_3(aq)$		
	(c) $HF(aq)$	(d) $H_2SO_4(aq)$		
372.	An acid is a substance which accepts: [2014-162 MEd]		A	An acid is a substance which accepts An electron pair or lose a proton.
	(a) An electron pair	(b) Proton		
	(c) An electron	(d) Pair of proton		
373.	P_Ka values of some acids are given below: Choose the weaker acid? [2016-112 MEd]		C	The stronger the acid, the larger will be K_a value and smaller will be pK_a value. -3 is largest value so it is weaker acid.
	(a) $HClO_4$ (-10)	(b) HBr (-9)		
	(c) H_2SO_4 (-3)	(d) HCl (-7)		
374.	What is the concentration $\frac{\text{moles}}{\text{litre}}$ of nitric acid solution having pH of 4? [2016-173 MEd]		B	
	(a) 4	(b) -4		
	(c) 10^{-4}	(d) 10^{-10}		

CHAPTER-9: CHEMICAL KINETICS

375.	The main difference between catalyst and enzyme is : [2018-95-Med]		C	catalyst are inorganic which is used in chemical industry for many product manufacturing while enzyme are organic in nature and mostly present inside the human body.
	(a) enzyme are sharp in action than catalyst.			
	(b) catalyst used in large concentration than enzymes.			
	(c) catalyst are inorganic while enzyme are organic in nature.			
	(d) enzyme need pH while catalyst does not need so.			
376.	The minimum energy below which no reaction occur on reactant molecules: [2018-166-Med]		D	Activation energy of e=the molecule are the minimum energy molecules below which no reaction occurs.
	(a) Average kinetic energy of the molecule.			
	(b) P.E of the molecule.			
	(c) Free energy of the molecule.			
	(d) Activation energy of the molecule.			
377.	Higher the activation energy of the reaction; [2018-45-Eng]		A	If activation energy is higher,less molecule will have enough energy to react and thus slow will be the rate of reaction.
	(a) Slow is the rate of reaction.			
	(b) Fast is the rate of reaction.			
	(c) Moderate is the rate of reaction.			
	(d) Activation energy is not related to the rate of reaction.			

378. In transition state, the reactant are: **2018-** C Transition state is highly unstable and impossible to separate, also it has high energy than reactants and as well as products.
197-Eng
 a) Highly stable
 b) Moderate Stable
 c) Highly unstable
 d) In the Low energy State
-
379. According to transition state, the reacting molecules form some kind of hypothetical structure, that has D Transition state has lose structure, anility to vibrate and rotate
 i) lose the structure
 ii) the ability to rotate
 iii) the ability to rotate **2017-36-Eng**
 a) i and ii b) ii and iii
 c) i and iii d) i, ii and iii
-
380. Consider the following reaction: D The order of the reaction is second.
 $2\text{FeCl}_3 + 6\text{KI} \rightarrow 2\text{Fe}_2 + 6\text{KCl} + \text{I}_2$
 Rate = $[\text{FeCl}_3]^1 [\text{KI}]^1$. Chose the correct molecularity and order of a reaction. **2017-**
18-Med
 a) 2 and 2 b) 6 and 2
 c) 8 and 3 d) 8 and 2
-
381. The rate law equation for reaction is given as $\frac{dx}{dt} =$ C Its third order
 $K [\text{FeCl}_3]^3 [\text{KI}]^2$ the reaction is: **2015-**
125 MEd
 A) First order B) Second order
 C) Third order D) Pseudo first order
-
382. The rate of reaction is defined as **2010-80 Eng**: A Its old book but Dc/dt is right.
 (a) Dc/dt (b) Dt/dc
 (c) dc.dt (d) $(dc)^2/(dt)^2$
-
383. The rate law for the reaction $A \rightarrow C + k$ is given as: C Rate = $K[A] \rightarrow \text{conc/s} = K \text{ conc} \rightarrow k = 1/s$
 Rate = $K[A]$ the unit of K will be: **2012-100 Eng**:
 (a) $\text{mole}^{-1} \text{dm}^3 \text{s}^{-1}$ (b) $\text{mole}^1 \text{dm}^{-3} \text{s}^{-1}$
 (c) s^{-1} (d) $\text{mole}^{-1} \text{dm}^3$
-
384. For which reaction of the unit of rate constant "K" is the same as that of the reaction rate? **2008-** A Zero order, its old book MCQs
139 MEd:
 (a) Zero order (b) first order
 (c) second order (d) third order
-
385. The unit of 1st order rate constant are: **2009-15** B The unit of rate is $\text{Mol.dm}^{-3} \text{sec}^{-1}$
MEd:
 (a) Sec (b) Sec^{-1}
 (c) $\text{Mol.dm}^{-3} \text{sec}^{-1}$ (d) None of above.
-
386. The unit of Kc or the system: **2006-55** C
MEd:
 $\text{N}_2\text{O}_4 \rightleftharpoons 2\text{NO}_2$ is:
 (a) Dimension (1.0 with no unit)
 (b) Mole dm^3
 (c) Mole dm^{-3}
 (d) $\text{Mole}^2 \text{dm}^3$
 $K_c = \frac{\text{produc t/ reactant}}{K_c = [\text{NO}_2]^2/[\text{N}_2\text{O}_4]}$
 $K_c = [\text{Mole dm}^{-3}]^2/[\text{Mole dm}^{-3}]$
 $K_c = \text{Mole dm}^{-3}$
-
387. Consider the following general reaction $\text{IA} + \text{IB} \rightarrow$ A The order of the reaction is second.
 Products rate of this reaction is expressed as
 $\text{Rate} = K[A]^1[B]^1$ the correct order of reaction
 The molecularity of an elementary reaction is defined as the minimum number of molecules, atoms or ions of the reactants(s) required for

and molecularity is:

- (a) 2:2 (b) 2:3
(c) 3:2 (d) 3:3

[2008-98 MEd]:

the reaction to occur and is equal to the sum of the stoichiometric coefficients of the reactants in the chemical equation of the reaction.

- | | | | |
|------|--|---|--|
| 388. | <p>A zero order reaction is one whose rate is independent of [2015-98 MEd]</p> <p>(a) Temp of the reaction
(b) Concentration of the reactants
(c) Concentration of the products
(d) Material of the vessel in which the reaction is carried out</p> | B | <p>A zero order reaction is one whose rate is independent of concentration of reactant, the change in reactant does not effect rate of reaction.</p> |
| 389. | <p>For a certain chemical reaction the slope of the plot was determined and plotted against the concentration (a — x)² and a straight line was obtained. It indicates that the reaction is of: [2012-57 MEd]:</p> <p>(a) First order (b) Second order
(c) Third order (d) Zero order</p> | B | <p>As straight line is obtained it means rate increase with increase in concentration and the concentration is square so its second order.</p> |
| 390. | <p>If half life of a certain chemical reaction is denoted by the relationship given below: $t_{1/2} = \frac{1}{Ka^1}$</p> <p>Where a is initial concentration what will be the order of the reaction? [2012-89 Eng]:</p> <p>(a) first order kinetics
(b) second order kinetics
(c) third order kinetics
(d) fractional order kinetics</p> | B | <p>Old book MCQs, not important for ETEA. But remember it.</p> |
| 391. | <p>Which of the following is correct; [2007-159 MEd]:</p> <p>a. Molecularity of a reaction is same as the order of reaction
b. In some cases molecularity of a reaction is the same as order of reaction
c. Molecularity of a reaction is more than order of reaction
d. All are correct</p> | A | <p>Molecularity of a reaction is same as the order of reaction</p> |
| 392. | <p>..... is the chemical method used for the determination of reaction rate: [2012-60 MEd]:</p> <p>(a) Conductometry
(b) Polarimetry
(c) pH metry
(d) Volumetric analysis</p> | D | <p>Volumetric analysis is the chemical method used for the determination of reaction rate:</p> |
| 393. | <p>The order of chemical reaction can be measure by: [2012-86 Eng]:</p> <p>(a) Half life method (b) differential method
(c) Ostwald method (d) all of these</p> | D | <p>The method by which order of reaction can be found is</p> <p>(a) Half life method
(b) differential method
(c) Ostwald method
(d) Isolated method
→ isolated method is in the book.</p> |
| 394. | <p>A catalyst is more effective when it is in the finely divided state because: [2009-167 MEd]:</p> <p>(a) The valence electrons are easily available
(b) This increases the surface area of the catalyst
(c) It attains equilibrium quickly
(d) All of the above</p> | B | <p>The catalyst used when such process that reaction occurs at surface, so finally divided state, the surface area increase and reaction occurs more fastly and quickly. This is for gas and solid reaction.</p> |

395. Change in concentration of a reactant is plotted against time and the slope $\frac{dx}{dt}$ determined. The value of $\frac{dx}{dt}$ are plotted against $(a-x)^2$ a straight line is obtained. It may be concluded that the reaction is: **[2014-113 MEd]**
 A) First order b) Second order
 c) Third order d) Zero order
396. The addition of a catalyst to a chemical reaction changes: **[2014-21 Eng]**:
 (a) the enthalpy
 (b) the entropy
 (c) The activation energy
 (d) The free energy
397. Choose the one which is not the assumption of collision theory of reaction rate: **[2016 -104 MEd]**
 (a) For chemical reaction to occur molecule/ particles must collide
 (b) For reacting molecules/ Particles must possess a certain minimum amount of energy, the activation of energy
 (c) Every collision is not productive
 (d) For hydrogen molecule formation from atoms require specific orientation
- B As straight line is obtained it means rate increase with increase in concentration and the concentration is square so its second order.
- C The catalyst decrease the activation energy so more molecules can react and reaction rate increases.
- D Collision molecular theory said that reaction to occur reactants must collide in specific orientation with specific energy, as hydrogen as diatomic molecule so it does not require specific orientation.

CHAPTER-10: SOLUTIONS & COLLOIDS

Molality

398. Colloidal particles can be separated by using; **2017-47**
 A. Ordinary filter paper
 B. Coarse filter paper
 C Fine Filter paper
 D. Extremely fine filter paper
399. 10.0 dm³ gas cylinder containing mixture of various gases 50cm³ of nitrogen gas is in the mixture what is the the concentration of N₂ gas in part per billion (ppb); **2017-199**
 A) $\frac{50}{1000} \times 10^9$ B) $\frac{50}{10,000} \times 10^9$
 C) $\frac{50}{100,000} \times 10^6$ D) $\frac{50}{1000} \times 10^6$
400. If the force of attraction exists between the particles of dispersed phase and the dispersion medium terms, the soil is called: **2017180 Eng**
 A. Lyophilic B. Lyophobic
 C. Hydrophilic D. Hydrophobic
401. Select completely immiscible pair of liquids: **C**
 A. Phenol-water system
 B. Trimethylamine and water system
 C. Carbon disulphide and water system
 D. Ethanol and water system

402. The molality of 2.0 g NaOH ($M_r=40$ g/mol) in 250 g distilled water at 4°C will be exactly equal to:
2018- Eng
A) 0.20 m B) 0.25 m
C) 1.20 m D) 0.5 m
-
403. The melting point of a crystalline solid by the addition of impurities; 2018118 Eng
A) Increases
B) Decreases
C) Remains the same
D) 1st decreases then increase
-
404. A student dissolved 50.5g KNO_2 ($\text{KNO}_3 = 101.0$ g/mol) in 1000g distilled water and allowed to boil. The solution started boiling at; 2018-eng
A) 100.52°C B) 100°C
C) 101.04°C D) KNO_3 is insoluble in water
-
405. Aiman in laboratory dissolve 4g of NaOH in 250ml of water. The molarity of this solution is: [2015-MEd]
A) 0.4M B) 4M
C) 0.2M D) 0.1M
- A We know that Molarity = moles/Litre,
Now moles = mass/ molar mass \rightarrow
 $4/40 = 0.1$ mol and 250ml = 0.25 L
So Molarity = no of moles/Litre =
 $0.1/0.25 = 0.4\text{M}$
-
406. 2.3 g of ethanol ($\text{C}_2\text{H}_5\text{OH}$) is added to 500g of water determine the molality of the resulting solution; [2010-MEd]
(a) 0.01 molal (b) 0.1 molal
(c) 1.1 molal (d) 1.0 molal
- B given data: mass of water = 500g or 0.5 kg, mass of ethanol = 2.3 g, we will find molar mass that is $12 \times 2 + 5 + 16 + 1 = 46$ so we can also find no of moles that is $n = \frac{m}{M} = \frac{2.3}{46} = 0.05$. now find molality by formula Molality = $\frac{\text{no of moles}}{1 \text{ kg}} = \frac{0.05}{0.5} = 0.1$ molal
-
407. The 2% solution by weight of sodium chloride solution is prepared. The molality of this solution is: [2007 MEd]
(a) .34 molal (b) 0.25 molal
(c) 2 molal (d) 0.02 molal
- A 2% solution means 2 gm NaCl dissolved in water so
Mass of NaCl = 2g and solution is 100 g or 0.1 kg as 1 kg = 1000 g
Molarity = moles/Kg and mole = n/M
Molarity = n/M kg = $2/58.5 \times 0.1 = 0.34$ molal
-
408. If 20.0 cm^3 of 0.5 M solution is diluted to 1.0 dm^3 . What will be its new concentration? [2007 - [2013 MEd]
(a) 0.001 M (b) 0.01 M
(c) 1.0 M (d) 10.0 M
- A $1000 \text{ cm}^3 = 1 \text{ dm}^3$ so $20.0 \text{ cm}^3 = 0.02 \text{ dm}^3$
and $M = n/\text{dm}^3 \rightarrow n = M \times \text{dm}^3 = 0.5 \times 0.02 = 0.01$ mole
now if solution is diluted to 1.0 dm^3 then $M = n/\text{dm}^3 = 0.01/1 = 0.01$ mol
-
409. To what volume in must 50.0ml of 3.50 M H_2SO_4 be diluted in order to make 2 M H_2SO_4 ? [2008 MEd]
(a) 25 (b) 60.1
(c) 87.5 (d) 93.2
- C : given $M = 2\text{M}$ so by using $M = n/V \rightarrow V = n/M \rightarrow V = n/2$ eqn 1, now we have to find n value for this equation from {50 ml or 0.05 L and 3.50 M} $M = n/V \rightarrow n = M \times V \rightarrow 3.50 \times 0.05 = 0.175$ mol. Equation 1 becomes $V = n/2 = 0.175/2 = 0.0875 \text{ L} = 87.5 \text{ ml}$
-
410. A solution of 2.0 g NaOH dissolved in 1000g of water has the following concentration. [2005 MEd]
(a) 0.50m (b) 0.05M
(c) 0.05N (d) 0.05m
- B $m = \frac{n}{1 \text{ kg or } 1000 \text{ g}}$ here $n = \frac{\text{mass}}{\text{Molar mass}} = \frac{2}{40} = 0.05$
so $m = \frac{0.05}{1000 \text{ g}} = 0.05$
-
411. 1.000 Mole of NaCl was dissolved in 1.000 dm^3 distilled water at 298K. The concentration of resulting solution is: [2011-Eng]
(a) 5.85 M (b) 1.00 M
(c) 0.1000 M (d) $<0.1000 \text{ M}$
- C given data; no of moles = 0.1000 mole and Volumes = 1.000 dm^3 . we know that $M = \frac{\text{no of moles}}{1 \text{ litre or } 1 \text{ dm}^3}$ so putting values, $\frac{0.1000}{1.000} = 0.1000\text{M}$

412. 10ml of 1.5 M NaOH solution is neutralized by 20ml of a M HCl solution. The value of a will be: **[2010 Eng]**
- (a) 1.0 (b) 0.75
(c) 0.5 (d) 0.25
- B given : $V = 10 \text{ mL}$, $M = 1.5$ by $M = n/L \rightarrow n = M \times L$ we will find n, which is $1.5 \times 10 \text{ mL}$. Now if V is 20 mL the new volume by formula $M = n/V$ is $V = n/M = \frac{1.5 \times 10 \text{ mL}}{20 \text{ mL}} = 1.5/2$

413. The 2% solution by weight of sodium chloride solution is prepared. The molality of this solution is: **[2006 MEd]**
- (a) .34 molal (b) 0.25 molal
(c) 2 molal (d) 0.02 molal
- A 2% solution means 2 gm NaCl dissolved in water so
Mass of NaCl = 2g and solution is 100 g or 0.1 kg as 1 kg = 1000 g
Molarity = moles/Kg and mole = n/M
Molarity = $n/M \text{ kg} = 2/58.5 \times 0.1 = 0.34 \text{ molal}$

Roult's law

414. The vapour pressure of pure acetone is 347 mm Hg. A mixture of 58.0 g acetone and 2.0 g of water is made. According to roult's law, what is the partial pressure of the acetone in this mixture? **[2011-Eng]**
- (a) 382 mm Hg (b) 298 mm Hg
(c) 242 mm Hg (d) 312 mm Hg
- d actona formula is $\text{C}_3\text{H}_6\text{O}$ and its molar mass is 58.08. its number of mole is $n = \text{mass} / \text{molar mass} \rightarrow 58/58 = 1$. The number of moles of water are $2/18 = 0.1111 \text{ mole}$.
Now mole fraction of acetone is $\frac{1}{1+0.1111} = \frac{1}{1.1111} = 0.900$. now by roult's law;
 $P_A = P_A^0 X_A = 347 \times 0.900 = 312 \text{ mmHg}$

Colligative properties of dilute solutions

415. Pure water freezes at 0°C and boils at 100°C at standard conditions. Calcium chloride was added to pure water. What do you expect about its freezing point and boiling point. **[2011-Eng]**
- A) No change in its freezing point and boiling point
B) Freezing point increases and boiling point decreases.
C) Freezing point increases and boiling point increases
D) Freezing point decreases and boiling point increases
- D According to Colligative properties of solution, Elevation of Boiling Point occurs so boiling point will increase and depression of freezing point occurs so freezing point will decrease.

Solubility

416. The solubility of solute depends on: **[2011 Eng]**
- (a) Temperature of solution (b) Quantity of solvent
(c) Quantity solute (d) All the three choices
- d solubility is amount of grams of solute dissolved in 100 gm of solvent so it depends on quantity of solute and solvent as well as it depends upon temperature and pressure.
417. Salts which dissolve in water with evolution of heat. The effect of temperature on their solubility will be: **[2015-MEd]**
- A) Increases with increase in temperature
B Decreases with increase in temperature
C) Solubility does not change
D) In some cases it increases while in others it decreases
- b as heat is evolved so it is type of exothermic solution & in such cases increase in temperature decrease the solubility because it already loss heat and does not need more. Like wise for endothermic reaction solubility increase with increase in temperature.

418. Which of the following ions has largest heat of hydration **[2007 MEd]**

- (a) Ba^{+2} (b) K^{+1}
(c) Li^{+1} (d) Be^{+2}

d heat of hydration is directly proportional to charge and inversely proportional to radius, so Ba^{+2} and Be^{+2} have more heat of hydration on basis of charge as compared to rest of other, on basis of radius Be^{+2} have small radius so it have more heat of hydration.

→ heat of hydration $\propto Q/r$

419. Water has a vapour pressure of 23.75 at 25°C what is the vapour pressure of a solution sucrose if its mole fraction is 0.25? **[2010-MEd]**

- (a) 15.2 torr (b) 17.8 torr
(c) 23.8 torr (d) 29.7 torr

b we know that $P = X_1 P^0$, here P^0 is given which is 23.75 but need X_1 which Mole fraction of solvent,

We know that $X_1 + X_2 = 1$ then $X_1 = 1 - X_2 = 1 - 0.25 = 0.75$, so putting values in $P = X_1 P^0$, we get $= 0.75 \times 23.75 = 17.8$ torr,

Mole fraction

420. A solution contains 2 moles of sucrose's in 6 moles of water. What is the mole fraction of sucrose? **[2016-Eng]**

- (a) 0.25 (b) 0.75
(c) 0.5 (d) 3.0

a $X_1 = \frac{X_1}{X_1 + X_2} = \frac{2}{2+6} = \frac{2}{8} = 0.25$

421. A solution has three components A, B and C. the mole fraction of A and C are 0.15, 0.45 respectively the mole fraction of is; **[2016-Eng]**

- (a) 0.25 (b) 0.005
(c) 0.40 (d) 0.60

c we now that sum of mole fraction = 1 so $X_1 + X_2 + X_3 = 1 \rightarrow X_2 = 1 - 0.15 - 0.45 = 0.40$

Now check $0.15 + 0.45 + 0.40 = 1$

Properties of colloids

422. The stability of colloidal system depends on: **[2016-Eng]**

- (a) Charge on the particle
(b) Solvation
(c) Brownian motion
(d) All of the above

d the charged particles attract solvent molecules which form a layer around them. Th solvation depends on the affinity of solvent towards the atoms and group of atoms forming surface of particle, while brownian motion counteracts the force of gravity on the colloidal particles and partly responsible for stability of the colloidal system.

423. The osmotic pressure of dilute solution is given below by relationship: **[2016 MEd]**

- (a) $\pi = \frac{MRT}{C}$ (b) $\pi = \frac{RCT}{M}$
(c) $\pi = \frac{MR}{TC}$ (d) $\pi = \frac{RC}{TM}$

b the osmotic pressure of dilute solution is given by: $\pi = \frac{RTC}{M}$

Parts per million, billion and trillion

424. A water sample contains 3.8×10^3 g of mercury per kilo gram of the sample. What is the concentration of mercury in parts per million? **[2016-MEd]**

- (a) 3.8 ppm (b) 38 ppm
(c) 0.38 ppm (d) 380 ppm

given data; water sample $= 3.8 \times 10^3$ g $= 3.8 \times 10^6$ kg and mercury mass 1 g.

We know that ppm $= \frac{\text{wt. or vol. of solute}}{\text{wt. or vol. of solvent}} \times 10^6 = [3.8 \times 10^6 / 1] \times 10^6 = 3.8$ ppm

CHAPTER-11: THERMOCHEMISTRY

425. A piston in a gas supply pump has an area of 500 cm^2 and it moves a distance of 30 cm during one stroke. The pump moves the gas against a fixed pressure of 4000 Pa. the work done by the piston during on stroke is: **2018-Eng**
 A) 60 J B) $6.0 \times 10^3 \text{ J}$
 C) $6.0 \times 10^5 \text{ J}$ D) $6.0 \times 10^7 \text{ J}$
-
426. Neutralization is always an exothermic phenomena. Which neutralization reaction given below evolves more heat: **2018-Eng**
 A) $\text{NaOH} + \text{HClO}_4$ B) $\text{KOH} + \text{HNO}_3$
 C) $\text{NaOH} + \text{H}_2\text{SO}_4$ D) All evolve same heat.
-
427. Students were decomposing CaCO_3 placed in a China dish by heating using burner in the laboratory. The "system" in this experiment is: **2018-Med**
 a) China dish b) Burner
 c) Laboratory d) CaCO_3
-
428. Addition of soluble impurities into a liquid & solid respectively causes: **2018-Med**
 A) Increase in boiling point of liquid and decrease in melting point of solid
 B) Increase in both boiling and melting points
 C) Decrease in boiling point of liquid and increase in melting point of solid
 D) Decrease in both boiling and melting points.
-
429. The study of heat changes accompanying a chemical reaction is known as **2005-143 Med**
 (a) Thermo – chemistry (b) Thermodynamics
 (c) Electro chemistry (d) Chemical kinetics
-
430. Which one of the following is not a state function? **2013-110 Eng**
 (a) Enbthalpy (b) Free energy
 (c) Work (d) Energy
-
431. The first law of thermodynamics has a statement which implies that: **2012-29 Med**
 (a) No heat enters or leaves the system
 (b) The temperature remains constant
 (c) All work is mechanical
 (d) Energy is conserved
-
432. A chemical system is sealed in a strong rigid container at room temp and then heated vigorously change in work done during process is: **2010-119 Med**
 (a) Positive (b) Negative
 (c) Zero (d) Constant
-
433. The change in enthalpy is a measure of the heat reaction at: **2009-45 Med**
 (a) Constant volume
 (b) Constant pressure and volume
 (c) Variable pressure
 (d) Constant pressure
-
434. The first law of thermodynamics has a statement which implies that: **2013-49 Med**
 (a) No heat enters or leaves the system
 (b) The temperature remains constant

- (c) All work is mechanical
(d) Energy is conserved

435.	The change in enthalpy at constant pressure, ΔH is equal to: 2013-142 MEd (a) $\Delta H = q + P\Delta V$ (b) $\Delta H = qp = \Delta E - P\Delta V$ (c) $\Delta H = \Delta E + P\Delta V$ (d) $\Delta H = q - P\Delta V$	C	The change in enthalpy at constant pressure: $\Delta H = \Delta E + P\Delta V$
436.	The enthalpy of the elements at 1 atm pressure and 298 K is arbitrary given the value of: 2012-141 MEd (a) 0.1 (b) 1.0 (c) 29.8 (d) Zero	D	The enthalpy at stander state has given value arbitrarily zero.
437.	The standard molar enthalpy of formation is denoted by: 2012-92 Eng (a) ΔH (b) ΔH^0 (c) ΔH^0_{273} (d) ΔH^0_{298}	B	ΔH^0 donate standard enthalpy change.
438.	Select the correct statement about lattice energy: 2012-144 MEd (a) The energy absorbed when 1 mole of ionic crystal Lattice is formed from its constituent ions in the gaseous state. (b) The energy liberated when 1 mole of an ionic crystal Lattice is formed from its constituent ions in the gaseous state (c) The energy liberated when 1 mole of an ionic crystal Lattice is splitted into its constituent ions in the gaseous state (d) None of the above	B	Definition of lattice energy; The energy liberated when 1 mole of an ionic crystal Lattice is formed from its constituent ions in the gaseous state.
439.	The net heat change in a chemical reaction is same whether it takes place in one step or several steps. This law is known as 2005-84 MEd (a) First law of thermodynamic (b) Henery's law (c) Hess's law (d) Joule's law	C	Hess' Law; The net heat change in a chemical reaction is same whether it takes place in one step or several steps.
440.	Choose the correct statement about Born Haber cycle: 2012-95 Eng (a) Born Haber cycle is a process for a applying Hess's law to the standard enthalpy changes in the formation of covalent compounds. (b) Born Haber cycle is a process for applying Hess's law to the standard enthalpy changes in the formation of ionic compound. (c) Born Haber cycle is a process for applying Hess's Law to the standard enthalpy changes in the formation of ionic and covalent compounds. (d) None	B	Born Haber cycle is a process for applying Hess's law to the standard enthalpy changes in the formation of ionic compound like NaCl.
441.	Which is not used in calculating the lattice energy of crystalline solids? (a) Haber process (b) Born Haber cycle (c) Hess's law (d) Enthalpy changes	A	Born Haber cycle is a process for applying Hess's law to the standard enthalpy changes in the formation of ionic compound like NaCl.
442.	Providing heat to the following reaction causes it shift to the right 2014-191 MEd $\text{CO}_{2(2)} + 2\text{H}_2\text{O}_{(g)} \rightarrow \text{CH}_{4(g)} + 2\text{O}_{2(g)}$ The reaction can therefore be described as: (a) Spontaneous (b) Adiabatic	C	The burning of CH_4 is exothermic process while its backwards reaction is endothermic. The given reaction is backward reaction of burning of CH_4 .

- c) Endothermic d) Exothermic

443. For which of the following standard heat of formation is not zero: **2016-128 Eng**
 (a) Cl_2 (g) (b) Na (s)
 (c) Br_2 (g) (d) $\text{Hg}(l)$
- C Only element in their standard state have zero standard heat of formation values.

CHAPTER-12: ELECTROCHEMISTRY

444. The best known and the most highly developed fuel cell is the hydrogen/ oxygen fuel cell. This is known as **2007-149 MEd**:
 (a) Proton exchange membrane cell
 (b) Bacon cell
 (c) Regenerative cell
 (d) None of the above
- B Fuel cell is also known as Bacon cell. (out of course but important for other entry test.)
-
445. Choose the incorrect statement about the corrosion? **2017-155-Med**
 a) corrosion cannot be completely eliminated
 b) Employing modern techniques corrosion can be completely eliminated.
 c) Corrosion process can be slowed down by certain methods.
 d) the presence of acid oxide in the environment can accelerate the process of corrosion.
- B corrosion cannot be completely eliminated but Corrosion process can be slowed down by certain methods
-
446. Food article spoilage involves oxidation reduction process to prevent this reaction we usually add: **2017-154-Med**
 a) an oxidizing agents b) a reducing agent
 c) an acid d) a base
- B Food article spoilage involves oxidation reduction process to prevent this reaction we usually add antioxidant means a reducing agent.
-
447. Choose the wrong statement;
 A) operating life of fuel cell is unlimited.
 b) electrode in fuel cell may be porous solid and may contain catalyst.
 c) the fuel in the fuel cell can be gas, liquid, solid or solution.
 d) in fuel cell, the cell products cannot be regenerated
- D operating life of fuel cell is unlimited, electrode in fuel cell may be porous solid and may contain catalyst, the fuel in the fuel cell can be gas, liquid, solid or solution. in fuel cell, the cell products are regenerated
-
448. The cathode in lead storage battery is made of: **2015-164 MEd**
 A) Lead B) Lead oxide
 C) Lead hydroxide D) None of the above
- B As on cathode reduction (gain of electron) takes place and lead oxide can gain electron, so cathode in lead storage battery is made of Lead oxide.
-
449. The oxidation state of carbon in Na_2C_2 is: **2015-165 MEd**
 A) +4 B) +2
 C) -1 D) -4
- C $\text{Na}_2\text{C}_2 = 0$, So $2(+1) + 2C = 0$ & $2C = -2$ Thus $C = -2/2 = -1$.
-
450. If we pass current through the sucrose solution the galvanometer will not show any deflection because sucrose molecules: **2010-21 MEd**:
 (a) Move towards cathodes (b) Move towards anode
 (c) React with water (d) Remain neutral
- D The galvanometer does not show deflection means that it remains neutral and does not move towards anode or cathode.

451. Substances dissolved in water react better because: **2008-126 MEd**; C When substance dissolved in water, it changes into ions which move easily in water towards each other and react better.
 (a) water brings them close
 (b) water helps them in bonding
 (c) water dissolves them in ions
 (d) water reacts with them
-
452. Sodium hydroxide acts on Aluminum oxide to form: **2012-98 MEd**; C $\text{NaOH} + \text{Al}_2\text{O}_3 \rightarrow \text{NaAlO}_2$
 (a) NaAlO_3 (b) $\text{Na}_3\text{Al}_2\text{O}_6$
 (c) NaAlO_2 (d) NaAl_2O_3
-
453. In a Galvanic cell the following reaction takes place: **2012-52 MEd** D As water loss electrons and we call it oxidation. Oxidation always occurs at anode.
 $2\text{H}_2\text{O} \rightleftharpoons \text{O}_2 + 4\text{H}^+ + 4\text{e}^-$, it occurs at;
 (a) Cathode (b) Anode
 (c) External conductor (d) Both a & b
-
454. Which statement is correct: **2009-72 MEd**; B SHE act as anode as well as cathode depending upon the potential of joint elements.
 (a) Standard Hydrogen Electrode (SHE) always acts as anode
 (b) 'SHE' may act as cathode or anode depending upon the reduction potential of the counterpart
 (c) 'SHE' always acts as cathode in voltaic cells
 (d) None of the above
-
455. The stronger the reduction potential the more difficult it is to: **2009-75 MEd** A The stronger the reduction the potential, the stronger it will reduce other and it will be difficult for it to oxidize other.
 (a) Oxidize the compound
 (b) Reduce the compound
 (c) Electrolyze the compound
 (d) None of the above
-
456. Which of the following cannot be displaced from their salt solution by copper? **2008-35 MEd**; D Because zinc loss electrons as compared to copper.
 (a) Ag (b) Au
 (c) Pt (d) Zn
-
457. The emf of a galvanic cell can be calculated from **2007-163 MEd**; D emf of galvanic cell depend upon E^0 of the cell and is different for different elements.
 (a) The size of the electrode
 (b) The pH of the solution
 (c) The amount of metal in the anode
 (d) The E^0 values of the half cell
-
458. What will happen if a block of copper metal is dropped into a beaker containing a solution of 1M FeSO_4 ? **2011-192 Eng** D **The Reduction of Potential of copper is high while oxidation potential of Fe is high. In this case Fe has already lost electrons so Cu can not further oxidize it.**
 $\text{Cu}^{2+} + 2\text{e}^- \rightarrow \text{Cu} \ 0.34 \text{ V}$ $\text{Fe}^{2+} + 2\text{e}^- \rightarrow \text{Fe} \ -0.44 \text{ V}$
 (a) The copper will dissolve with no other change
 (b) The copper will dissolve and Fe will be precipitated out
 (c) The copper will dissolve with the evolution of H_2 gas
 (d) No reaction will occur
-
459. What will happen if a block of copper is dropped into a beaker containing a solution of 1.0 M of ZnSO_4 ? **2013-27 Eng** D The reduction of potential of carbon is high while oxidation potential of Fe is high. In this case Fe has already lost electrons so Cu can not further oxidize it.
 (a) The copper will dissolve with no other change
 (b) The copper will dissolve zinc metal will be deposited
 (c) The copper will dissolve with the evaluation of $\text{H}_2(\text{g})$
-
460. Which statement given below is not true for the reaction? **2013-100 Eng** C Here Fe^{+3} have positive charge and can gain electrons, gaining of electrons is called reduction and so its oxidizing
 $\text{Fe}^{3+} + \text{e}^- \rightarrow \text{Fe}^{2+}$

	(a) Fe^{3+} is being reduced (b) The oxidation state of Fe has changed (c) Fe^{3+} could be referred to as a reducing agent in this reaction (d) Both Fe^{3+} and Fe^{2+} are called cations		agent not reducing agent.
461.	Select the strongest reducing agent: [2012-71 MEd]: (a) Cl^{-1} (b) Ne (c) Na^{+} (d) Ca^{+2}	A	From given option cl have negative charge and it can easily loss electron and loss of electron is called is oxidation and so reducing agent.
462.	Considering the standard reduction chart, the strong reducing agent value is: [2013-145 MEd]: (a) Small negative values (b) Large negative values (c) Small positive values (d) Large positive values	B	the more -Ve value of standard reduction potential in electrochemical series indicates the strong reducing agent.
463.	The oxidation number of Cl in $\text{Ca}(\text{ClO}_3)_2$ 2006-47 MEd]: (a) -1 (b) +3 (c) +5 (d) -6	C	
464.	What is the oxidation number of hydrogen in metal hydrides [2017-18 MEd]: (a) 0 (b) +1 (c) 2 (d) -1	D	In metal hydride the oxidation number of hydrogen is -1.
465.	Which of the following is NOT considered to be an oxidizing agent? [2010-178 MEd]: (a) MnO_2 (b) Cl_2 (c) NaOH (d) Na_2O_2	C	
466.	Primary cells are used in calculators for long service life the desirable quality of the cell is: [2010-70 MEd]: (a) Low energy densities (b) No self discharge rates (c) High self discharge rates (d) High energy densities	B	Primary cell have no losses and can be used for long time.
467.	Lithium is generally used as an electrode in high energy density batteries, because [2007-35 MEd]: (a) It is the lightest metal (b) It has high negative reduction potential (c) It is quite reactive (d) It does not corrode easily	B	Due t high reduction potential of li it is used in lithium ion batteries.
468.	$\text{PbSO}_{4(s)} + 2e^- \rightarrow \text{Pb}_{(s)} + \text{SO}_4^{2-} -0.36\text{v}$ $\text{PbO}_{2(s)} + 4\text{H}^+ + \text{SO}_4^{2-} + 3e^- \rightarrow \text{PbSO}_{4(s)} + 1.69\text{v}$ The two halfcell reactions above are involved in the discharge of a lead storage battery. The potential of a single cell lead storage is: [2013-120 Eng]: (a) 1.33 volts (b) 4.10 volts (c) 2.66 volts (d) 2.06 volts	A	Cell potential = $E_{\text{anode}} + E_{\text{cathode}}$ (Anode is PbO_2 while Cathode is Pb) $1.69 - 0.36 = 1.33 \text{ Volt}$
469.	Which statement is correct while recharging the automobile battery? [2013-148 MEd]: (a) Pb is converted to PbO_2 . (b) PbSO_4 is converted to Pb (c) Pb is converted to PbSO_4 (d) None of the above	C	During Recharging both Pb and PbO_2 are converted to PbSO_4 while the reverse occurs in Discharging
470.	The best known and the most highly developed fuel cell is the hydrogen/ oxygen fuel cell. This is known as [2013-30 Eng] (a) Proton exchange membrane cell (b) Bacon cell (c) Regenerative cell	B	Fuel cell is also known as Bacon cell. (out of course but important for other entry test.)

(d)None of the above

471.	Which of the following is the oxidizing agents in given reaction: $\text{Zn} + \text{Cu}^{2+} \longrightarrow \text{Zn}^{2+} + \text{Cu}$ (a) Cu^{+2} (b) Zn (c) Zn^{2+} (d) Cu	D	Cu can gain electrons and zinc can loss. So gain of electrons is called reduction and so its oxidizing agent, Cu is oxidizing agent.
472.	Which is strong electrolyte? (a) $\text{Ca}(\text{OH})_2$ (b) SiCl_4 (c) KCl (d) SrCl_2	C	$\text{KCl}, \text{NaOH}, \text{H}_2\text{SO}_4$ are strong electrolytes.
473.	Chromium compounds in which oxidation state of chromium is 2 + behaves as a: (a) Strong oxidizing agent (b) Strong reducing agent (c) Very weak oxidizing agent (d) Very weak reducing agent	B	Chromium have either +2 or +3. Chromium can loss one more electron to become +3 after +2 so it will loss electron. Loss of electron is called oxidation and is strong reducing agent.
474.	choose the true statement regarding the reaction given below $2\text{Na}_{(g)} + \text{Cl}_{2(g)} \rightarrow 2\text{NaCl}_{(s)}$ (a) Chloride is oxidized and sodium is reduced (b) Chlorine acts as an oxidizing agent and sodium as reducing agent (c) Chlorine acts as a reducing agent and (d) None of the above	B	Sodium loss electron and as oxidized and chlorine got reduced. So chlorine act as an oxidizing agent and sodium as reducing agent.
475.	A cell is constructed of the following two half cells. What is E^0 of the cell? $\text{Ag}^+ + e^- \rightleftharpoons \text{Ag} \quad + 0.80 \text{ V},$ $\text{Al}^{3+} + 3e^- \rightleftharpoons \text{Al} \quad - 1.67 \text{ V}$ (a) 2.47 V (b) 0.087 V (c) - 0.87 V (d) 5.81 V	A	As both values are of reduction so larger will be same and smaller value sign will be change $0.80 + 1.67 = 2.47$
476.	Which of the following is spontaneous reaction? (a) $\text{Zn} + \text{Cu}^{2+} \rightarrow \text{Zn}^{2+} + \text{Cu}$ (b) $2\text{NaCl}_{(g)} \rightarrow 2\text{Na}_{(g)} + \text{Cl}_{2(g)}$ (c) $\text{Zn}^{2+} + \text{Cu} \rightarrow \text{Zn} + \text{Cu}^{2+}$ (d) $2\text{Fe}(\text{OH})_3 \rightarrow 2\text{Fe} + 3\text{O}_2 + 3\text{H}_2$	A	A because it can occur by itself
477.	In which of the following reaction hydrogen acts as oxidizing agent. (a) $\text{H}_2 + \text{Cl}_2 \rightarrow 2\text{HCl}$ (b) $\text{C}_2\text{H}_4 + \text{H}_2 \rightarrow \text{C}_2\text{H}_6$ (c) $2\text{Na} + \text{H}_2 \rightarrow 2\text{NaH}$ (d) $\text{N}_2 + 3\text{H}_2 \rightarrow 2\text{NH}_3$	C	$2\text{Na} + \text{H}_2 \rightarrow 2\text{NaH}$, In this reaction hydrogen loss electrons and sodium gain it, so loss of electrons occurs in oxidizing agents.
478.	Which is strong electrolyte? (a) $\text{Ca}(\text{OH})_2$ (b) SiCl_4 (c) KCl (d) SrCl_2	C	KCl, NaCl and H_2SO_4 are strong electrolytes
479.	A cell is constructed of the following two half cells. What is E^+ of the cell? $\text{Ag}^0 + e^- \rightleftharpoons \text{Ag} \quad + 0.80 \text{ V},$ $\text{Al}^{3+} + 3e^- \rightleftharpoons \text{Al} \quad - 1.67 \text{ V}$ (a) 2.47 V (b) 0.087 V (c) - 0.87 V (d) 5.81 V	A	As both values are of reduction so larger will be same and smaller value sign will be change $0.80 + 1.67 = 2.47$

CHAPTER-13 S & P BLOCK ELEMENTS

360. What is the product when chlorine gas is passed over element silicon in powdered state and heated it produce colorless liquid having formula? 2017-Med B
A. SiCl_2 B. SiCl_4
C. Si_2Cl_3 D. SiCl
-
361. Chlorine gas dissolves in water to some extent to give: 2017-Med
A. Yellow Colored solution
B. Greenish Colored solution
C. Bluish Colored solution
D. Colorless solution
-
362. Compound resistant to thermal decomposition is: 2017-Med D
A. Li_2CO_3 B. NaNO_3
C. $\text{Ba}(\text{NO}_3)_2$ D. Na_2CO_3
-
363. Phosphorus (white) catches fire in air and and burns with the formation of white smoke the product formed is: 2017-Med D
A. Phosphorus (iii) oxide
B. Phosphorus (v) Oxide
C. Phosphorus (ii) oxide
D. Both (A) & (B)
-
364. Steam of chlorine is passed over heated sulphur and form an orange coloured foul smelling liquid having formula: 2017-Eng
A. SCl_2 B. S_2Cl_2
C. S_2Cl D. Mixture of SCl_2 and S_2Cl_2
-
365. The compound which purely acidic character is: C
A. $\text{Mg}(\text{OH})_2$ B. $\text{Al}(\text{OH})_3$
C. $\text{Si}(\text{OH})_4$ D. Non of the above
-
366. The flame colour of Na is yellow, Ca is brick red and Ba is apple green. Which radiations among the following travel with highest velocity 2018-Eng D
A) Yellow B) Green
C) Violet D) All travel with the same.
-
367. Thermal stability is related to the polarizing power of the cation in the compound. Which of the following compounds having cation with a strong polarizing power? 2018-Eng
A) MgCl_2 B) AlCl_3
C) LiCl D) BaCl_2
-
368. Compound having the ability of showing inert pair effect is: 2018-Eng C
A) NH_3 B) H_2O
C) SnCl_2 D) All of the above
-
369. Select hydrogen carbonate which is comparatively most stable towards thermal decomposition. 2018-Eng D
A) NaHCO_3 B) KHCO_3
C) RbHCO_3 D) CsHCO_3
-
370. White phosphorous catch fire spontaneously in air forming mixture of oxides. Select the correct oxides: 2018- Eng D
A) P_4O_6 and P_2O_3 B) P_5O_{10} and P_3O_6
C) P_2O_4 and P_4O_8 D) P_4O_6 and P_4O_{10}

371. The cation that distort the electron cloud of NO_3^- ion more and facilitates its decomposition is: 2018-Med A
 A) Mg^+ B) Mg^{++}
 C) Cs^+ D) Be^{++}
-
372. Three reactions are given A
 $\text{H}_2\text{SO}_4 + 2\text{HF} \rightarrow \text{F}_2 + \text{SO}_2 + 2\text{H}_2\text{O}$
 $\text{H}_2\text{SO}_4 + 2\text{HBr} \rightarrow \text{Br}_2 + \text{SO}_2 + 2\text{H}_2\text{O}$
 $\text{H}_2\text{SO}_4 + 8\text{HI} \rightarrow 4\text{I}_2 + \text{H}_2\text{S} + 4\text{H}_2\text{O}$
 The strongest reducing agent in these reactions is: 2018-Med,
 A) HI B) HF
 C) HBr D) All of the above
-
373. SiO_2 is the only oxide that reacts with: 2018-Med B
 A) HCl_{aq} B) KOH_{aq}
 C) Steam D) SO_3
-
374. Whenever Pb shows inert pair effect it always form: 2018-Med A
 A) Ionic bond
 B) Covalent bond
 C) Co-ordinate covalent bond
 D) Metallic bond.
-
375. Choose the correct reaction: B
[2015-185 MEd]
 A) $\text{PbO} + 4\text{NaOH} \rightarrow \text{Pb}(\text{OH})_4 + 2\text{Na}_2\text{O}$
 B) $\text{PbO} + 2\text{NaOH} + \text{H}_2\text{O} \rightarrow \text{Na}_2[\text{Pb}(\text{OH})_4]$
 C) $\text{PbO} + \text{NaOH} + \text{H}_2\text{O} \rightarrow \text{Na}[\text{Pb}(\text{OH})_3]$
 D) $\text{PbO} + 4\text{NaOH} + \text{H}_2\text{O} \rightarrow \text{Na}_4[\text{Pb}(\text{OH})_6]$
-
376. Which one would you class it as more metallic in character? B B/c in periodic table on going across a period, the Metallic character decreases i.e. with increase in Atomic number, b/c size of Atom decreases & attraction for e is greater on Right Side of Periodic Table, while in group, going down the metallic character increases
[2011-06 MEd]:
 (a) As (b) Bi
 (c) C (d) Sb
-
377. Which one of the following compounds has last ionic character? A B/c as the metallic character across a period decreases, so the halides for MEd] show a decrease in Ionic and increase in covalent character. Halides of Alkali & Alkaline metals are generally ionic while those of VI & VII are covalent in Nature.
2005-184 MEd]:
 (a) CCl_4 (b) KCl
 (c) MgCl_2 (d) BaCl_2
-
378. Hydration energy is the heat evolved or absorbed when: C
[2011- MEd]:
 (a) One mole of gaseous ions is dissolved in one mole of water
 (b) One mole of ions in solid state is dissolved in one mole of water.
 (c) One mole of gaseous ions is dissolved in water to give infinitely dilute solution
 (d) One mole of ions in solid state is dissolved to form concentrated solution

379. Which of the following ions has largest heat of hydration;
2007-59 MEd]
- (a) Ba^{+2} (b) K^{+1}
(c) Li^{+1} (d) Be^{+2}
- D B/c Hydration energy highly depend upon charge/size Ratio. Eg; for given set of ions of group; charge to size ration decreases, the hydration energy also decreases on contrary, the hydration energy increase significantly by moving from left to righting periods as the charge to size ration increases as found in metal of 3rd period.
-
380. The behavior of PbCl_2 and PbCl_4 respectively are:
[2011-13 Eng]
- (a) Ionic and covalent (b) Covalent and ionic
(c) Covalent and coordinate covalent (d) Ionic and coordinate covalent
- A B/c generally the halides of lower oxidation state are ionic & those of higher oxidation state tend to be covalent. * PbCl_2 is ionic * PbCl_4 is covalent
-
381. Which one will show ionic bonding?
[2012-04 Eng]:
- (a) NaH (b) PbCl_4
(c) HCl (gas) (d) PCl_3
- A
-
382. The hydrides of Be and Mg are classified as intermediate hydrides. Their behavior is: [2011-Eng]:
- (a) Non-volatile and ionic in nature
(b) Volatile and covalent in nature
(c) Polymeric and covalent in nature
(d) Crystalline and covalent in nature
- C
-
383. The bond form between boron and Hydrogen is:
[2011-165 MEd]:
- a) Ionic (b) Covalent
(c) Coordinate covalent none of the above
(d) None of the above
- B
-
384. In which of the following a covalent bond is not likely to exist?
[2010-149 MEd]:
- (a) Br (b) SiF_4
(c) CaO (d) CH_4
- C because ionic bond is formed between strong electro positive and least electro positive atoms.
-
385. Select the most stable covalent hydride:
[2011-19 MEd]:
- (a) BiH_3 (b) NH_3
(c) HF (d) SbH_3
- C
-
386. Most of the oxides of non-metals combine with water to form:
[2011-193 MEd]
- (a) hydrogen gas (b) salt and water
(c) a base (d) An acid
- D
-
387. A metallic oxide when added to water would most likely form a(n)
[2010-04 MEd]
- (a) Base (b) Acid
(c) Salt (d) Basic anhydride
- A
-
388. Which one of the following forms the most acidic oxide:
2009-68 MEd]
- (a) Al (b) Si
(c) Fe (d) P
- D
-
389. Select the oxide which will be acidic in nature:
[2012-71 Eng]:
- A

	(a) P_2O_5 (b) CaO (c) K_2O (d) BaO		
390.	16. Choose the correct order of decreasing basic strength. [2012-160 Eng]: (a) $MgO > Na_2O > P_4O_{10} > Al_2O_3$ (b) $Na_2O > MgO > Al_2O_3 > P_4O_{10}$ (c) $P_4O_{10} > Na_2O > MgO > Al_2O_3$ (d) $Al_2O_3 > MgO > P_4O_{10} > Na_2O$	B	
391.	Which one of the following oxides exhibit amphoteric properties? [2013-118 Med]: (a) K_2O (b) MgO (c) ZnO (d) CaO	C	Oxides of relatively less-electro-positive elements i.e.; BeO, Al_2O_3 , Bi_2O_3 & ZnO are amphoteric.
392.	Calcium is found in nature as $CaSO_4 \cdot 2H_2O$. This is commercially called: [2011-12 Eng]: (a) Epsom salt (b) Dolomite (c) Magnesite (d) Gypsum	D	Epsom salt – $MgSO_4 \cdot 7H_2O$, Dolomite – $MgCO_3 - CaCO_3$ Magnesite – $MgCO_3$
393.	Potassium is found in nature as carnallite, its composition is: [2011-23 Med]: (a) $KAlSi_3O_8$ (b) $KCl \cdot MgCl_2 \cdot 6H_2O$ (c) KCl (d) $KCl \cdot Al_2O_3 \cdot 2H_2O$	B	
394.	Fajan's rule states that small highly charged ions tend to form more: [2011-26 Med]: (a) Ionic compounds (b) polymeric compounds (c) covalent compounds (d) Coordination compound	C	
395.	Beryllium, a member of alkaline earth metal, is almost as hard as: [2011-29 Med]: (a) Calcium (b) Potassium (c) Iron (d) Magnesium	C	
396.	Beryllium, an alkaline earth metal resists towards complete oxidation because: [2011-15 Eng]: (a) It is less reactive (b) The oxidation process is slow (c) It forms hard protective coat of BeO (d) None of the above	C	
397.	Reason for alkali metals to be soft is that: [2006-Med]: (a) They are less metallic in nature (b) There is only one valency (c) They do not have close packed structures (d) They have high I.E	C	
398.	Which oxide sodium metal predominantly forms in oxygen? [2011-18 Eng]: (a) Na_2O (b) Na_2O_2 (c) Na_2O_3 (d) NaO_2	B	
399.	Select the correct statement; [2011-33 Med]: (a) All alkali metal hydroxides are stable to heat except LiOH (b) All alkali metal hydroxides are unstable to heat (c) All alkali metal hydroxides are stable to heat except CsOH (d) All alkali metal hydroxides are stable to heat	A	
400.	Refractory bricks used for furnace lining are formed by mixing and drying [2011-36 Med]: (a) MgO and clay (b) $MgCO_3$ and clay (c) $MgSO_4$ and clay (d) $MgCO_3$ $CaCO_3$	A	
401.	Which one of the following is most ionic? [2014-59 Med]	C	Charge on Cation & Cation sizes

	(a) NaCl (c) KCl	(b) MgCl ₂ (d) AlCl ₃		are directly propional to Ionic character
402.	Milk of magnesia is used for treatment of acidity in stomach, its formula is: [2014-61 MEd] (a) Mg(OH) ₂ (b) MgSO ₄ (c) Ca(OH) ₂ (d) CaSO ₄		A	
403.	The electro negativity of [III]A element first decreases and then increases. This behavior is due to poor shielding of: [2011-39 MEd] (a) S – electron (b) P– electron (c) d– electron (d) f– electron		C	
404.	Sodium tetra borate Na ₂ B ₄ O ₇ ·10H ₂ O is; [2011-43 MEd]: (a) Colemanite (b) Borax (c) Diaspore (d) bauxite		B	Colemanite → Ca ₂ B ₆ O ₁₁ ·5H ₂ O * Dias pore → Al ₂ O ₃ ·H ₂ O
405.	The compound, Borax is used in borax bead test for the detection of cations. The molecular formula of compound is: [2011-25 Eng]: (a) Ca ₂ B ₆ O ₁₁ ·5H ₂ O (b) H ₃ BO ₃ (c) Na ₂ B ₄ O ₇ ·10H ₂ O (d) (C ₂ H ₅) ₃ BO ₃		C	H ₃ BO ₃ → Boric Acid * (C ₂ H ₅) ₃ BO ₃ → Ethyl Borate
406.	On strong heating orthoboric acid gives. 2007-128 MEd] (a) Meta boric acid (b) Tetra boric acid (c) Boric anhydride (d) None of the above		C	
407.	Thermite process is: 2009-52 MEd] (a) Exothermic (b) Endothermic (c) Reversible (d) None of the above		A	
408.	Sodium hydroxide acts on Aluminum oxide to form: [2012-89 MEd]: (a) NaAlO ₃ (b) Na ₃ Al ₂ O ₆ (c) NaAlO ₂ (d) NaAl ₂ O ₃		D	
409.	Molecular formula of silica is: [2012-174 Eng]: (a) SiO ₄ (b) SiO ₃ (c) SiO ₂ (d) Na ₂ SiO ₃		C	
410.	Sodium Carbonate when fused with sand forms sodium silicate which is commonly known as: [2011-49 MEd]: (a) Soda glass (b) water glass (c) Jenna glass (d) pyrex glass		D	PbO → Flint Glass * Pyrex & Jena contain B ₂ O ₃
411.	Group 5 th elements arsenic and antimony are considered as: [2011-59 MEd]: (a) Metallic (b) Non metallic (c) Metalloids (d) Transition elements		C	
412.	Select the oxide which is in solid state at room temperature: [2011-56 MEd]: (a) NO ₂ O ₅ (b) N ₂ O (c) NO ₂ (d) N ₂ O ₃		A	
413.	Ring test is shown by compounds having: [2012-23 MEd]: (a) Sulphate radical (b) Chloride radical (c) Nitrate radical (d) None of the above		C	
414.	Nitric oxide was passed through FeSO ₄ solution a brown compound was formed as formula is: [2011-48 Eng]: (a) FeSO ₄ NO (b) FeSO ₄ (NO) ₂ (c) Fe(SO ₄) ₂ NO (d) None of above		A	

415. Nitric oxide acts as / an: [2011-38 Eng]: C
 (a) oxidizing agent (b) reducing agent
 (c) both as reducing and oxidizing agent
 (d) neither oxidizing nor reducing agent
-
416. In the action of HNO_3 on metals, the evolution of NO_2 is favored by; 2007-32 MEd]: A
 (a) Conc. HNO_3 (b) Dilute HNO_3
 (c) Fuming HNO_3 (d) Very dilute HNO_3
-
417. Phosphorus trihalides are readily hydrolysed as shown below: A
 [2013-168 MEd]:
 $\text{PX}_3 + 3\text{H}_2\text{O} \rightarrow \text{H}_3\text{PO}_3 + 3\text{HX}$
 Generally moving from fluorine to iodine rate of hydrolysis:
 (a) Increases
 (b) Decreases
 (c) Remains unchanged
 (d) First increases and then decreases
-
418. Phosphorus acid H_3PO_3 is highly soluble in water and behaves as: B
 [2011-35 Eng]:
 (a) Monobasic Acid (b) Dibasic acid
 (c) Tribasic acid (d) None of the above
-
419. Which one of the following is not a commonly occurring sulphur compound? 2005-190 MEd]: B
 (a) H_2S (b) Ag_2S
 (c) SO_2 (d) SO_3
-
420. In contact process for the manufacture of sulphuric acid, the impurity Arsenic is removed by freshly precipitated ferric hydroxide which absorb Arsenous oxide to form: [2011-45 Eng]: D
 (a) Fe As O_4 (b) $\text{Fe As}_2 \text{O}_4$
 (c) $\text{Fe As}_3 \text{O}_4$ (d) FeAsO_3
-
421. The catalyst used in the contact process is easily poisoned by: C
 2008-131 MEd]:
 (a) Nitrous oxide (b) carbon dioxide
 (c) Arsenic oxide (d) nitrogen oxide
-
422. The compound used in borax bead test for the detection of basic radicals to form colored bead is: [2014-60 MEd]: D
 (a) H_2BO_2 (b) $(\text{C}_2\text{H}_5)_3\text{BO}_3$
 (c) $\text{Ca}_2\text{B}_6\text{O}_{11} \cdot 5\text{H}_2\text{O}$ (d) $\text{Na}_2\text{B}_4\text{O}_7 \cdot 10\text{H}_2\text{O}$
-
423. Which one of the following does not exist? B
 [2014-186 MEd]:
 (a) HBO_2 (b) HFO_2
 (c) H_3PO_3 (d) HBrO_2
-
424. Select an element which exists in liquid state at room temperature. C * $\text{Cl}_2, \text{F}_2 \rightarrow$ Gases $\text{I}_2, \text{As}_2 \rightarrow$ Solid.
 [2012-11 Eng]:
 (a) Cl_2 (b) F_2
 (c) Br_2 (d) I_2
-
425. Choose the inter halogen compound; [2011-42 Eng]: B
 (a) OF_2 (b) BrF_5
 (c) HgBr_3 (d) HI
-
426. In which of the following atoms, the 1s orbital is the smallest in size? [2011-199 MEd]: C Down the group size of Halogen atom increases
 (a) Bromine (b) Chlorine
 (c) Fluorine (d) Iodine

427. Which one of the following does not have +7 oxidation; 2008- A
62 MEd]:
(a) F (b) Cl
(c) Br (d) I
-
428. $3\text{Ca}(\text{PO}_4)_2 \cdot \text{CaF}_2$ is the formula of: [2012-121 Eng]: B
(a) chlorapatite (b) fluorapatite
(c) phosphorite (d) None of these
-
429. The oxidation power of halogen depends upon: D
[2011-83 MEd]:
(a) Energy of dissociation
(b) Electron affinity of atoms
(c) Hydration energies of ions
(d) All of the above
-
430. Which of the following oxy acids of chlorine is least oxidizing in nature; 2007-154 MEd]: A
(a) HOCl (b) CHIO_2
(c) HClO_3 (d) HClO_4
-
431. Which one of the following is strongest acid? A
[2013-130 Eng]: 2009-138 MEd]:
(a) HClO_4 (b) HClO_3
(c) HClO_2 (d) HClO
-
432. The oxide of chlorine, Cl_2O_2 in nature is: [2011- Eng]: C
(a) strongly basic (b) weakly basic
(c) strongly acidic (d) weakly acidic
-
433. Which of the following is Hypo chlorous acid? [2013- A
112 MEd]:
(a) HClO (b) HClO_2
(c) HClO_3 (d) HClO_4
-
434. The bleaching action of bleaching powder is due to "available chlorine" it is the amount of chlorine. [2011- B
63 MEd]:
(a) that is required for the preparation of bleaching powder
(b) site free when excess of sulphuric acid is added to the bleaching powder.
(c) that is required for the generation of the hypochlorite
(d) Both B and C
-
435. What is the trade name of tetrafluoro ethylene polymer? 2006- D
59 MEd]:
(a) Polystoene (b) Backlite
(c) Nylone (d) Teflone
-
436. Which one of the following is thermosetting polymer? D
[2012-148 Eng]:
(a) nylon-6, 6 (b) Poly ethylene
(c) Bakelite (d) Teflon
-
437. Teflon is prepared by the polymerization of; [2012-49 Eng]: D
(a) butadiene (b) vinyl cyanide
(c) propylene (d) tetra fluoroethene
-
438. Which of the following is not correct: 2008-MEd]: D
(a) Xe is the most reactive among the rare gases.
(b) He is an inert gas.
(c) radon is obtained from decay of radium
(d) the most abundant rare gas found in atmosphere is He.

439. The formula of mustard gas is: [2011-66 MEd]: D
 (a) $(C_2H_2Cl_2)_2S$ (b) $(C_2H_4Cl_2)_2S$
 (c) $(C_2H_3Cl_2)_2S$ (d) $(C_2H_4Cl)_2S$
-
440. In which group all the elements donot belong to the same block and all the elements of valence electrons? 2007-127 MEd]: A
 (a) Zero group (b) First group
 (c) Third group (d) Seventh group
-
441. Which of the following is not correct: 2008-MEd]: D He \rightarrow 0.0005% * Ne \rightarrow 0.0015% * Ar \rightarrow 0.932%
 (a)Xe is the most reactive among the rare gases.
 (b) He is an inert gas.
 (c)radon is obtained from decay of radium
 (d) the most abundant rare gas found in atmosphere is He.
-
442. Choose the correct name of Ba_2XeO_4 ; [2011- 73 MEd] D
 (a) Barium Xenate (b) Barium Xenthate
 (c) Barium Prexenate (d) Barium Perxenthate
-
443. In the periodic table period represents: 2011- 31 Eng]: D
 (a) The number of electron in the outer most shell
 (b) The metallic and non metallic characters of the elements
 (c) The chemical properties of an element
 (d) The number of the shells in an element
-
444. The order of reducing power of halide ion is: A Eletronegativity is is inversely proportional to reduction power.
 [2015-84 MEd]
 A) $I^- > Br^- > Cl^- > F^-$ B) $F^- > Cl^- > Br^- > I^-$
 C) $I^- > Cl^- > F^- > Br^-$ D) $Br^- > Cl^- > I^- > F^-$
-
445. The first lionization energy of an atom depends on: D
 [2015-175 MEd]
 A) Charge on nucleus B) Screening effect
 C) Electronic configuration D) All of the above
-
446. Choose the correct order of decreasing basic str[Eng]th: D
 [2016-129 Eng]
 Reaction of water with magnesium is:
 (a) Slow (b) Fast
 (c) It is slow in the start and become fast at the end
 (d) It is slow in the start and become very slow at the end
-
447. Al_2O_3 Reaction of water with magnesium is: [2016-139 Eng] D
 (a) Slow (b) Fast
 (c) It is slow in the start and become fast at the end
 (d) It is slow in the start and become very slow at the end
-
448. When chlorine water is added to KI solution the solution become [2016-147 Eng]s C
 (a) Pale yellow (b) Violent
 (c) Brown (d) Red
-
449. Complementary colour of orange colour is: [2016-159 Eng] C
 (a) Red (b) Green
 (c) Green blue (d) Yellow
-
450. XYZ are the elements in the same short period of the periodic table the oxide of X is amphoteric the Exide of Y is basic and the Exide of Z is acidic what is the order of increasing atomic number for these elements? [2016-45 MEd] C
 (a) XYZ(b) XZY
 (c) YXZ (d) ZXY

451. Select the correct reaction of the following [2016-81 Med] A
(a) $\text{SnO} + 4\text{NaOH} \rightarrow \text{Sn}(\text{OH})_4 + 2\text{Na}_2\text{O}$
(b) $\text{SnO} + 4\text{NaOH} \rightarrow \text{Na}_4\text{Sn}(\text{OH})_4$
(c) $\text{SnO} + 2\text{NaOH} \rightarrow \text{Na}_2\text{Sn}(\text{OH})_4$
(d) None of the above
-
452. Lithium reacts with air to form: [2016-181 Med]
(a) Li_2O (b) Li_2N
(c) $\text{Li}_2\text{O}_2 + \text{Li}_2\text{CO}_3$ (d) Both (a) & (b)

CHAPTER-14: D & F BLOCK ELEMENTS

453. In movies during fight a blood red solution is using as an artificial blood. Which of the following complex ion is used for this solution? C
2017-Med
A. $[\text{Fe}(\text{H}_2\text{O})_6]^{+2}$
B. $[\text{Cu}(\text{NH}_3)_4(\text{H}_2\text{O})_2]^{+2}$
C. $[\text{Fe}(\text{SCN})(\text{H}_2\text{O})_5]^{+2}$
D. $\text{Fe}(\text{H}_2\text{O})_6$
-
454. Coordination number six complex having d^2sp^3 hybridization exist in: 2017-Med D
A. Tetrahedral shape
B. Square planar shape
C. Trigonal bipyramidal shape
D. Octahedral shape
-
455. Arrange the following oxide of chromium in increasing acidic character: 2017-Med B
A. $\text{CrO} > \text{Cr}_2\text{O}_3 > \text{CrO}_3$
B. $\text{CrO}_3 > \text{Cr}_2\text{O}_3 > \text{CrO}$
C. $\text{Cr}_2\text{O}_3 > \text{CrO} > \text{CrO}_3$
D. $\text{CrO}_3 > \text{CrO} > \text{Cr}_2\text{O}_3$
-
456. Many hexaaqua complex ions can undergo reaction with water as given below C
 $[\text{Fe}(\text{H}_2\text{O})_6]^{+2} \text{aq} + \text{H}_2\text{O} \rightleftharpoons [\text{Fe}(\text{H}_2\text{O})_5\text{OH}]^+ \text{H}_3\text{O}^+$
The reaction is classed as: 2017-Med
A. Redox reaction
B. Acid base reaction
C. Decomposition reaction
D. Substitution reaction
-
457. Consider the following reactions. C
i. $\text{C}_2\text{H}_2(\text{g}) + \text{H}_2(\text{g}) \rightleftharpoons \text{C}_2\text{H}_6(\text{g})$
ii. $\text{N}_2(\text{g}) + 3\text{H}_2 \rightarrow 2\text{NH}_3(\text{g})$
Choose the catalysts employed for the reaction. 2017-Med
A. Ni for both reactions (i) and (ii)
B. Fe. Or for both the reactions (i) and (ii)
C. Ni for the reaction (i) and Fe_2O_3 for (ii)
D. Fe_2O_3 for the reaction (i) and Ni (ii)
-
458. Most solutions containing ferric ions are usually yellow or yellowish brown. This is due to the formation of B
2017- Eng
A. $[\text{Fe}(\text{H}_2\text{O})_6]^{3+}$ B. $[\text{Fe}(\text{H}_2\text{O})_5(\text{OH})]^{2+}$

- C. $[\text{Fe}(\text{H}_2\text{O})_4(\text{OH})_2]^+$ D. $[\text{Fe}(\text{H}_2\text{O})_3(\text{OH})_3]^0$
-
459. Compounds of vanadium exists in the following oxidation states; B
2017-Eng
5+, 4+, 3+, 2+, The compounds in the 3+ and 2+ oxidation states behave as
A. Good oxidizing agent B. Good reducing agent
C. Weak oxidizing agent D. Weak reducing agent
-
460. Choose the correct name of the compound $\text{K}(\text{PtCl})$; 2017-Eng D
A. Potassium hexachloro platinum
B. Potassium hexachloroplatinate
C. Potassium hexachloroplatinate
D. Potassium chloroplatinate
-
461. Reaction between peroxodisulphate ions and iodide ions is given below, B
 $\text{S}_2\text{O}_8^{2-} + 2\text{I}^- \rightarrow 2\text{SO}_4^{2-} + \text{I}_2$. Choose the suitable catalyst, 2017/181 Eng
A. Ni^{+2} B. Fe^{2+} & Fe^{3+}
C. Fe^{3+} D. Fe^{2+}
-
462. The following dynamic equilibrium exists between CrO_4^{2-} and $\text{Cr}_2\text{O}_7^{2-}$ D
ions in solution.
 $\text{CrO}_4^{2-} \rightleftharpoons \text{Cr}_2\text{O}_7^{2-}$
The equilibrium is sensitive to acids and bases.. Choose the correct statement, if NaOH is added to the system under equilibrium;
2017- Eng
A. Equilibrium shifts to the right
B. $\text{Cr}_2\text{O}_7^{2-}$ is decomposed to Cr_2O_3
C. Equilibrium remains unaffected
D) Equilibrium shifts to the left
-
463. Which of the following electronic configuration is/are correct? 2017- B
Eng
i. $\text{Cu}_{29}[\text{Ar}]4\text{S}^13\text{d}^{10}$ ii. $\text{Ti}_{22}[\text{Ar}]4\text{S}^24\text{d}^2$ iii. Fe_{26}
 $[\text{Ar}]4\text{S}^13\text{d}^54\text{p}^1$
A) i only B) i & ii only
C) ii, iii only d) i and iii only
-
464. The compound of Cr (Chromium) with a strong reducing power is; B
2018-Eng
A) $\text{K}_2\text{Cr}_2\text{O}_7$ B) CrCl
C) Cr_2O_3 D) None of the above
-
465. The electronic configuration of titanium is $1\text{S}^22\text{S}^22\text{P}^64\text{s}^23\text{d}^2$; B
2018-Eng
A) K_2TiO_4 B) K_3TiF_6
C) TiCl_3 D) TiO
-
466. Choose the reagent used to test the presence of Fe ions in solution D
with the formation of intense red colour
2018-Eng
A) NaSCN B) KSCN
C) NH_4CNS D) All of the above
-
467. The chelating ligand out of the following ; 2018-Med B
A) CH_3COO^- B) $(\text{CH}_2)_2(\text{NH}_2)_2$
C) SCN^- D) NO_2^-

468. The outer electronic configuration of Cu^+ Ion is $4s^0 3d^{10}$ with this configuration the aqueous solution of copper (I) compound is: D
 A)Blue B)Greenish blue
 C)Bluish green D)Colourless.
-
469. Which of the following is NOT a member of transition metal? D
 [2010-55 MEd]:
 (a) Scandium family (b) Iron family
 (c) Titanium family (d) Beryllium family
-
470. Which one of following electronic sub-shells the lanthanides have in the process of filling? A Actinides $\rightarrow 5f$
 [2012-11 Eng]:
 (a) 4f (b) 5f
 (c) 4d (d) 5d
-
471. Elements not found in nature synthesized in nuclear reactions and involving completion of 51 orbital are known as. D
 [2010-32 MEd]:
 (a) Lanthanides (b) Transition elements
 (c) Rate gases (d) Actinides
-
472. Choose the correct electronic configuration for Scandium ($Z=21$): B
 [2012-08 Eng]:
 (a) $2s^2 2s^2 2p^6 3s^2 3p^6 3d^1 4s^1$
 (b) $1s^2 2s^2 2p^6 3s^2 3p^6 3d^1 4s^2$
 (c) $1s^2 2s^2 2p^5 3s^2 3p^6 3d^1 4s^8$
 (d) $1s^2 2s^2 2p^5 3s^2 3p^6 4s^2 4p^1$
-
473. What is the right configuration of an of an element with 24 electrons. D
 [2010-200 Eng]:
 (a) $1s^2 2s^2 2p^6 3p^6 3d^6$
 (b) $1s^2 2s^2 3s^2 2p^6 3p^6 4s^2 3d^4$
 (c) $1s^2 2s^2 2p^6 3s^2 3p^6 4s^2 3d^4$
 (d) $1s^2 2s^2 2p^6 3s^2 4s^1 3d^5$
-
474. The correct electronic configuration of Nickel (28) is: A
 [2012-118 MEd]:
 (a) $1s^2 2s^2 2p^6 3s^2 3p^6 3d^8 4s^2$
 (b) $1s^2 2s^2 2p^6 3s^2 3p^6 3d^7 4s^2 4p^1$
 (c) $1s^2 2s^2 2p^6 3s^2 3p^6 3d^6 4s^2 4p^2$
 (d) $1s^2 2s^2 2p^6 3s^2 3p^6 3d^6 4s^1 4p^3$
-
475. The electronic configuration of Cu(29)is: A
 [2011-76,[2015-85 MEd]:
 (a) $-3s^2 3p^6 3d^{10} 4s^1$
 (b) $-3s^2 3p^6 3d^9 4s^2$
 (c) $-3s^2 3p^6 3d^8 4s^2$
 (d) $-3s^2 3p^6 3d^9 4s^2$
-
476. The highest oxidation state of Manganese $-3s^2 3p^6 3d^5 4s^2$ in its compounds is: c
 [2011-79 MEd]:
 (a) +2 (b) +5
 (c) +7 (d) +8
-
477. Cobalt metal generally forms colored compounds. The color is due to: B
 [2012-125Eng]:
 (a) d.d electronic transition which falls in the visible range
 (b) p.p electronic transition which falls in the visible range
 (c) d.v electronic transition which falls in the visible range.
 (d) d.p electron transition which falls in the visible range.
-
478. The color of coordination compound is dimethylglyoximenickel(II) is: B
 [2011-96 MEd]:
 (a) Red (b) Blue

(c) Orange (d) Black

479. The oxidation number of cobalt in $[\text{Co}(\text{en})_2\text{H}_2\text{O}(\text{CN})]^{2+}$ [2011-89 MEd]: B
 (a) 2 (b) 3
 (c) 4 (d) 5
-
480. Ammonium hydroxide was added to a salt solution deep blue color was obtained. The solution contains ions of: [2011-93 MEd]: B
 (a) Zn^{+2} (b) Cu^{+2}
 (c) Fe^{+3} (d) Ba^{+2}
-
481. Which of the following is not transition element; [2010-88 Eng]: A
 (a) Zn (b) Cr
 (c) Mn (d) Ni
-
482. The oxidation number of iron in $(\text{Fe}(\text{CN})_6)^{-4}$ is: [2008-172 MEd]: B
 (a) +3 (b) +2
 (c) +4 (d) +6
-
483. Complexes with bidentate ligands are called; [2007-117 MEd]: B
 (a) Ligands (b) Chelates
 (c) Complexes (d) None of the above
-
484. 16. $[\text{NiCl}_4]^{2-}$ is tetrahedral shaped complex, the bond angle $\angle \text{Cl-Ni-Cl}$ is; [2011-28 Eng]: D
 (a) 120° (b) 107° (c) 105° (d) 109°
-
485. 17. Choose the correct geometry of the coordination compound $[\text{Ni}(\text{CN})_4]^{2-}$ [2013-160 Eng]; [2012-108 Eng]: A
 (a) Square planar (b) Tetrahedral (c) Trigonalbipyramidal
 (d) Octahedral
-
486. 18. Choose the compound tetra amine aqua Chlorocobalt(III) chloride: [2011-99 MEd]: D
 (a) $[\text{Co}(\text{NH}_3)_4(\text{H}_2\text{O})(\text{Cl}_2^{-2})]\text{Cl}_3^{-3}$ (b)
 $[\text{Co}(\text{NH}_3)_4(\text{H}_2\text{O})(\text{Cl}_2^{-2})]\text{Cl}_3^{-3}$
 (c) $[\text{Co}(\text{NH}_3)_4(\text{H}_2\text{O})(\text{Cl}_2^{-2})]\text{Cl}_3^{-3}$ (d)
 $[\text{Co}(\text{NH}_3)_4(\text{H}_2\text{O})\text{Cl}]\text{Cl}_2$
 Answer
-
487. Which is good quality iron are containing low phosphorus content? [2010-70 MEd]: D
 (a) Hematite (b) Limonite
 (c) Siderite (d) Magnetite
-
488. Which one is considered as fool's gold? [2012-34 Eng]: B
 (a) Copper metal (b) Iron pyrites FeS_2
 (c) Copper glance Cu_2s (d) None
-
489. Which of the following furnaces is used for the production of wrought iron? [2013-155 MEd]: B
 (a) Open hearth furnace (b) Reverberatory furnace

(c) Bessemer converter (d) Blast furnace

490.	Which one of the following is not a physical property; 2005-147 MEd]: (a) Corrosion (b) Solubility (c) Melting point (d) Boiling point	A	
491.	Cons: H_2SO_4 is added to mixture of $K_2Cr_2O_7$ and metal chloride is solid scale. Brown vapors are formed] which one is correct formula? [2013-70 Eng]: (a) $CrOCl_2$ (b) $COCl_2$ (c) CrO_2Cl_2 (d) $CrCl_6$	C	
492.	The formula of potassium manganate is; [2011-32 Eng]: (a) $KMnO_4$ (b) K_2MnO_4 (c) K_3MnO_4 (d) K_2MnO_3	B	
493.	The element which has the smallest atomic radius is: [2013-192 MEd] (a) Fe (b) Co (c) Ni (d) Cu	c	
494.	Ethylene diaminetetraacetate ion (EDTA) is a polydentate ligand it bonds to central metal atom through: [2013-165 MEd] (a) Two of its atoms (b) Three of its atoms (c) Four of its atoms (d) Six of its atoms	D	
495.	The coordination number of cobalt in the complex $[Co(H_2NCH_2CH_2NH_2)_3]^{+3}$ is: [2013-150 Eng]: (a) 3 (b) 4 (c) 5 (d) 6	D	The number of coordinate covalent bonds for MEd] is called coordination number. Ethylenediamine is bidentate, so 6 bonds are for MEd] by it..
496.	Identify the name of coordination compound $K_4[Fe(CN)_6]$: [2013-117 Eng]: (a) Potassium hexacyanoferrate (b) Potassium hexacyanoferrate (II) (c) Potassium hexacyanoferrate (III) (d) Potassium (I) hexacyanoferrate (IV)	B	
497.	Which of the following titrants would most likely be used as this own indicator in acid MEd]ium? [2013-88 MEd]: (a) $K_2Cr_2O_7$ (b) Iodine (c) $KMnO_4$ (d) H_2O_2	C	
498.	Chromium compounds in which oxidation state is 6+ behaves as: [2015-184 MEd] A) Strong oxidizing agent B) Strong reducing agent C) Very weak oxidizing agent D) Very weak reducing agent	a	Stable oxidation state of Chromium is +3... Below this it act as reducing agent and above it as oxidizing agent.
499.	Select the correct formula of chlorpenta-aqua-chromium (iii) chloride. [2015-195 MEd] A) $[Cr(H_2O)_5Cl]Cl_3$ B) $[Cr(H_2O)_5Cl]Cl_2$ C) $[Cr(H_2O)_5Cl_2]Cl$ D) $[Cr(H_2O)_5Cl_3]Cl$	b	

500. The components of bronze alloy are: B
[2015-196 MEd]
A) Copper and zinc B) Copper and tin
C) Zinc and tin D) Chromium and Tin
-
501. Select ligand which is bidentate and can form chelates. D A ligand which can donate two pairs is bidentate. Ethylenediamine is bidentate because it has two donatable pairs on two nitrogen atoms.
A) CH_3NH_2 B) PH_3
C) H_2O D) $\text{NH}_2-\text{CH}_2-\text{CH}_2-\text{NH}_2$
-
502. Choose the correct name of the compound given below. B
[2016-57 Eng]
 $\text{Ag}^+ \text{C} \equiv \text{C}^- \text{Ag}^+$
(a) Silver carbide (b) Alkynide
(c) Silver dicarbide (d) None of the above
-
503. The compound YBaCu_3O_7 consists of: B
[2016-69 Eng]
(a) Cu(I) and Cu(II) Cations
(b) Cu(II) and Cu(III) Cations
(c) Cu(III) and Cu(IV) Cations
(d) Cu(II) and Cu(IV) Cations
-
504. The colours of MnO_4^{2-} and Mn^{2+} solution in water are respectively: A
[2016-77 Eng]
(a) Intense dark purple colour and colourless
(b) Light purple colour and colourless
(c) Intense dark purple colour and brown colour
(d) Light purple colour and brown colour
-
505. CrO_4^{2-} and $\text{Cr}_2\text{O}_7^{2-}$ are inter convertible represented by equation: A
[2016-167 Eng]
 $\text{CrO}_4^{2-} + 2\text{H}^+ = \text{Cr}_2\text{O}_7^{2-} + \text{H}_2\text{O}$
Yellow Orange
In the above reaction
(a) CrO_4^{2-} act as base
(b) Addition of base change the color from orange to yellow
(c) The addition of acid change the state of Cr from +6 to +4
-
506. The hydrated cations of first transition series that imparts a blue color: B
[2016-8 MEd]
(a) Cr^{+2} , Co^{+2} , Cu^{+2} (b) Cu^{+2} , Zn^{+2} , Ti^{+4}
(c) Ti^{+3} , Zn^{+2} , Cu^{+2} (d) Cr^{+3} , Ti^{+4} , Cu^{+2}
-
507. Select the correct order of the acids strength? B
[2016-14 MEd]
(a) $\text{CH}_3\text{COOH} > \text{CHCl}_2\text{COOH} > \text{CH}_2\text{ClCOOH}$
(b) $\text{CHCl}_2\text{COOH} > \text{CH}_2\text{ClCOOH} > \text{CH}_3\text{COOH}$
(c) $\text{CH}_3\text{COOH} > \text{CHCl}_2\text{COOH} > \text{CH}_2\text{ClCOOH}$
(d) $\text{CHCl}_2\text{COOH} > \text{CH}_2\text{COOH} > \text{CH}_2\text{ClCOOH}$
-
508. A dilute hydrochloric acid is added to a flask containing limestone a gas is produced which is dissolved in water in a test tube a white precipitate is formed. The precipitate is of: B
[2016-27 MEd]
(a) CaSO_4 (b) CaCO_3
(c) CaCl_2 (d) MgCO_3
-
509. When small amount of ammonia is added to CuSO_4 solution in water, blue ppt of $[\text{Cu}(\text{H}_2\text{O})_4(\text{OH})_2]$ is formed. The blue ppt dissolves on addition of excess of ammonia. [2016-114 MEd]
The product formed is:
(a) $[\text{Cu}(\text{H}_2\text{O})_2(\text{NH}_3)_2(\text{OH})_2]$
(b) $[\text{Cu}(\text{NH}_3)_4(\text{OH})_2]$

- (c) $[\text{Cu}(\text{NH}_3)_4(\text{H}_2\text{O})_2]^{2+}$
 (d) $[\text{Cu}(\text{NH}_3)_3(\text{H}_2\text{O}_3)]^{2+}$

510. What is the formula of Dichloro-Bis-ethylenediamine cobalt (II)? A
 [2016-180 MEd]
 (a) $[\text{Co}(\text{en})_2\text{Cl}_2]$ (b) $[\text{Co}(\text{en})_2\text{Cl}_2]^{2-}$
 (c) $[\text{Co}(\text{en})_2\text{Cl}_2]^{1-}$ (d) $[\text{Co}(\text{en})_2\text{Cl}_2]^{1+}$

CHAPTER-15: ORGANIC COMPOUNDS

511. To differentiate between white ppt of AgCl and off-white ppt of AgBr we use; 2017-Med C

- a) Dil solution of NaOH b) Dil solution of $\text{Pb}(\text{NO}_3)_2$
 c) Dil solution of NH_3 d) Dil solution of FeCl_3

512. All the compounds are inorganic EXCEPT: 2009-132 MEd: D
 (a) CaCO_3 (b) CAC_2 (c) KCN (d) $(\text{NH}_2)\text{CO}$

513. All compounds are organic except; B
 [2011-86 MEd]:
 (a) $(\text{H}_2\text{N})_2\text{CO}$ (b) NH_4CNO (c) CH_3NO_2 (d) $\text{C}_2\text{H}_5\text{N}_2\text{HSO}_4$

514. Coal, Natural gas and petroleum are generally called: A
 [2013-65 MEd]:
 a. fossil fuels

515. When coal is heated ($500-1000^\circ\text{C}$) in the absence of air the process is called; 2010-144 Eng: B
 (a) Distillation (b) Carbonization
 (c) Cracking (d) Reforming

516. Quality of fuel is judged from its octane number the best fuels are; B
 [2010-173 Eng]:
 (a) straight chain hydrocarbons (b) branched chain hydrocarbons
 (c) cyclic compounds (d) aromatic compounds

517. Octane number one hundred is given to compound: A
 [2012-141 Eng]:
 (a) 2,2,4-Trimethylpentane (b) n-heptane
 (c) n-octane (d) Iso heptane

518. Tetraethyl lead $(\text{C}_2\text{H}_5)_4\text{Pb}$ is used as antiknock agent and is abandoned because of its hazardous product during the combustion of fuel. The hazardous product is: 2011-113 MEd: C
 (a) CO_2 (b) CO
 (c) Lead (d) Free radical ethyl (C_2H_5)

519. In reforming process open chain hydrocarbons are converted into: D
 [2011-119 MEd]
 (a) Polymers (b) branch chain hydrocarbon (c) Ring hydrocarbons (d) Branch & Ring hydrocarbon

520. Cracking problem of fuel combustion can be avoided by: D
 [2012-106 MEd]:
 (a) Reforming (b) Improving octane number (c) Adding TEL
 (d) All of the above

521. We used $\text{Pb}(\text{C}_2\text{H}_5)_4$ in the gasoline to reduce: D
 [2010-20 MEd]:
 (a) Consumption of fuel (b) Price of fuel (c) Octane number of fuel (d) Knocking of Engine
-
522. When n-heptane is heated in the absence of air at high temperature in the presence of catalyst, it changes to 2,2,4-triethylpentane. This process is called b
 2005-04 MEd]:
 (a) Cracking (b) Reforming
 (c) Polymerisation (d) Condensation
-
523. Which of the following is cycloalkane; B
 2007-182 MEd]:
 (a) C_6H_{14} (b) C_6H_{12} (c) C_6H_{10} (d) C_6H_8
-
524. Esters are represented by the general formula; C
 2005-171 MEd]:
 (a) ROP (b) BOOR (c) RCOOR (d) RCOOH
-
525. Which isomers have difference in both their physical and chemical properties? C Chain and position isomerism can exist in the same compound but functional group isomerism exists in different compounds having different physical and chemical properties.
 [2013-195 MEd]:
 (a) Chain isomers (b) Position isomers
 (c) Functional group isomers (d) Both A and B
-
526. The isomerism exhibited by $\text{C}_5\text{H}_{11}\text{OH}$ is: D 2009-155 MEd]
 (a) Position isomerism (b) Functional group isomerism
 (c) Chain isomerism (d) All of the above
-
527. Which is an isomer of ethanol? C [2010-199 MEd]; [2011-118 Eng]:
 (a) CH_3OH (b) $\text{C}_2\text{H}_5\text{OCH}_3$
 (c) CH_3OCH_3 (d) $\text{C}_2\text{H}_5\text{OC}_2\text{H}_5$
-
528. Dimethyl ether and ethanol is an example of: D
 [2012-137 Eng]:
 (a) Chain isomerism (b) position isomerism
 (c) Metamerism (d) Functional group isomerism
-
529. An organic compound having molecular formula $\text{C}_2\text{H}_6\text{O}$ can exhibit functional group isomerism. Select the correct isomers: C
 [2013-34 Eng]:
 (a) Methanol and methoxy methane
 (b) Ethanol and ethoxy ethane
 (c) Ethanol and methoxy methane
 (d) Methanol and ethoxy ethane
-
530. How many isomers are possible for pentane? B [2011-58 Eng]:
 (a) 2 (b) 3 (c) 4 (d) 5
-
531. Which isomerism is not shown by alkene; A
 2007-138 MEd]:
 (a) Metamerism (b) Chain isomerism
 (c) Position isomerism (d) Geometrical Isomerism
-
532. Which type of isomerism is being exhibited by $\text{FCH} = \text{CHF}$? C
 [2013-58 MEd]:
 (a) Chain isomerism (b) Structural isomerism (c) Geometrical isomerism (d) Position isomerism

533. Why is the boiling point of n-Pentane about 28°C higher than that of its 2,2-Dimethylpropane isomer? **A**
 (a) The area of contact between 2,2-Dimethylpropane is small which results in weak forces of attraction.
 (b) 2,2-dimethylpropane molecules repel each other
 (c) N-pentane molecules cannot come into closer contact with each other
 (d) Shapes of molecules have not effect on boiling point
-
534. Which of the following structure has a bond for **Med** by an overlay of Sp^2 hybrid orbital with that of SP hybrid orbital? **2013-48 Med** **C**
 (a) $HC = CH$ (b) $H_2C = CH_2$
 (c) $H_2C = C = CH_2$ (d) $CH_2 = CHCH_3$
-
535. The bond angle between H - C - C bond in ethane is: **A**
[2013-52 Med]:
 (a) 109.5 (b) 120 (c) 90 (d) 107.5
-
536. 25 Ethanol (CH_3CH_2OH) and dimethyl ether (CH_3OCH_3) are the best considered as: **[2014-8 Med]** **A**
 (a) Structural isomers (b) Stereo isomers (c) Enantiomers (d) Diastereomers
-
537. Which of the following compound is assigned the octane number of 100? **[2014-155 Med]** **D**
 (a) n-heptane (b) n-octane
 (c) 2,3,3-trimethyl pentane (d) 2,2,4-trimethyl pentane
-
538. Diethyl ether and Methyl propyl ether are: **[2014-20 Med]** **B**
 (a) Conformational isomers (b) Metamers
 (c) Geometrical isomers (d) Enantiomers
-
539. A tertiary carbon is bonded directly to: **2014-09 Med** **C**
 (a) 2 Hydrogens (b) 2 Carbons (c) 3 Carbons (d) 4 Carbons
-
540. Conc. HCl is added to a metal salt and then subjected to flame test on platinum wire. It Imparts crimson color to the flame. Which metal salt it is? **[2015-76 Med]** **C**
 A) Sodium B) Potassium
 C) Strontium D) Calcium
-
541. Carbon monoxide can be converted by hydrogenolysis to alkanes by the process known as: **[2016-14 Med]** **B**
 (a) Contact process
 (b) Fischer-tropsch (FT) process
 (c) Fermentation process
 (d) Haber-Bosch process

CHAPTER-16: HYDROCARBONS

542. Choose the correct statement about cycloalkanes: 2017-Med **C**
 A. Cyclopropane and cyclobutane are liquids at room temperature.
 B. Cycloalkanes are insoluble in ethanol and ether but soluble in water.
 C. Their melting & boiling points show gradual increase with increases molecular weight.
 D. Both (B) & (C) are correct
-
543. The less energetic and more stable compound among the following is: 2017-92 Med **a**
 A. Cyclobutane B. Hex-1-ene

C. Cyclopropane

D. Propene)

544. Propene react with hypochlorous acid to form; 2017-Med B

A. $\text{CH}_3\text{-CH-CH}_2\text{OH}$ B. $\text{CH}_3\text{-CH-CH}_2\text{Cl}$ C. $\text{CH}_3\text{-CH-CH}_2\text{Cl}$ D. CH-CH---CH_2 

545. Benzene gives more stable product when undergo 2017-02Med C

A) Nucleophilic addition reaction

B) Oxidation reaction

C) Electrophilic substitution reaction

D) Electrophilic addition reaction

546. The compound which can be hydrolyze by means of water is: 2017-Med B

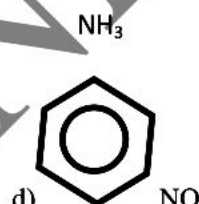
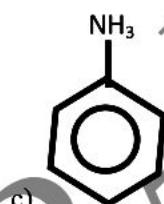
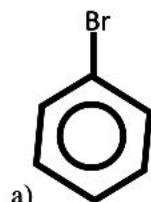
A. CCl_4 B. SiCl_4 C. CH_4

D. Non of the above

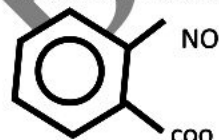
547. Which compound will undergo substitution reaction faster than benzene? B

2017-Med

The IUPAC name of the compound given below:



548. the IUPAC name of the compound given below is b



a) m-nitrobenzoic acid

B. o-nitrobenzen methanoic acid

C. o-nitrobenzoic acid

D. None of the above

549. AlBr_3 which is used in the alkylation of benzene possess the properties of: D

2017-Med

A. A catalyst

B. A lewis acid

C. An electron deficient specie

D. All of the above

550. Choose the least stable of the following butenes; A

A. 1-Butene

B. CIS-2-butene

C) Trans-2-butene D. Iso butylenes

551. 1,3-dihydroxybenzene is also known as: B
 A) Catechol B. Resorcinol
 c) hydroquinone D. Cresol
-
552. The carbon-carbon triple bond length in acetylene 2017-Eng D
 A. 1.09 \AA B. 1.119 \AA
 C) 1.39 \AA D. 1.19 \AA
-
553. The number of chiral centres in a molecular of S-bromo 3-chloro hexan-2-oil is/are: 2017-Med B
 a) 1 b) 3
 c) 2 d) 5
-
554. Which group when attached to benzene will increase its reactivity: 2017-Med A
 A. $-\text{NHR}^+$ B. $-\text{NH}_3$
 C. $-\text{C}\equiv\text{N}$ D. $-\text{COR}$
-
555. The compound that cannot undergo addition reaction is: 2017-Med D
 a) Cyclopropane B) Benzene
 C) Butyne D) None of the above
 A) More stable
-
556. The IUPAC name of the compound 2018-Eng

$$\begin{array}{c} \text{CH}_3 \\ | \\ \text{CH}_3 - \text{CH} - \text{CH}_2 - \text{CH} - \text{CH}_3 \end{array}$$
 is
 A) 2 methyl -4- hexane B) 4 isopropyl 2-butene
 c) 5-methyl-2-hexane D) 5,5-dimethyl-2. pentene
-
557. If required conditions are provided, which compound on reaction with HOCl will not follow Markownikoff's rule: 2018-Eng
 A) $\text{CH}_3 - \text{CH} = \text{CH} - \text{Br}$
 b) $\begin{array}{c} \text{CH}_3 - \text{C} = \text{CH}_2 \\ | \\ \text{F} \end{array}$
-
558. The number of Chiral center in the compound given below is/are 2018-Eng

$$\begin{array}{c} \text{O} \quad \text{H} \quad \text{O} \\ || \quad | \quad | \\ \text{CH}_3 - \text{CH}_2 - \text{C} - \text{CH} - \text{C} - \text{C}_2\text{H}_5 \end{array}$$

 A) 2 B) 3
 C) Zero D) 1
-
559. Alkene that do not follow cis-trans isomerism is: 2018Eng
 A) But-2-ene B) 1-chloroprene
 C) 1,1-dichloropropene D) 1,2-dichloroethene
-
560. Cyclic alkanes with greater angle strain are always: 2018-Med C
 A) More stable B) Less energetic
 C) More reactive
 D) Obey general formula of normal alkanes
-
561. The Friedel crafts catalyst " AlCl_3 " used in the substitution reactions of Benzene is a good: 2018-Med D
 A) Electrophile
 B) Lewis acid
 C) Electron deficient specie
 d) bear all these properties
-
562. The most reactive compound out of the following is; 2018-Med A
 A) Ortho hydroxy toluene
 B) Ortho chloro ethyl benzene
 c) Phenol

D) Para ethyl benzoic acid

563. During the formation of addition polymerization, which smaller molecules you think are eliminated; 2018-Med, D
 A) O_2 B) HCl
 C) NH_3 D) no one is eliminated

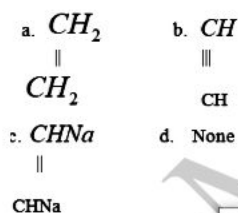
564. If the overlap of Sp^3 Hybrid orbitals in carbon atoms is smaller the bond so formed is: 2018Med A
 A) Weak B) Strong
 C) Less energetic D) More Stable

565.
$$\begin{array}{c} CH_3 \\ | \\ CH - CH - CH_3 \\ | \quad | \\ CH_3 \quad Br \end{array} + Mg \text{ ether} \rightarrow X + H_2O \rightarrow Y$$

 In the above reaction Compound Y will be an:
 [2013-24 Eng]:
 (a) Alkane (b) Alkene (c) Alcohol (d) Alkyl halide

A Hints; This reaction takes place in two steps. In the first step Grignard Reagent (X) is formed. In the second step when Grignard reagent reacts with water, then an alkane (Y) is produced.

566. You are electrolyzing potassium salt of a dicarboxylic acid in aqueous solution. Which product do you expect to be for MED? 2008-166 MED] b

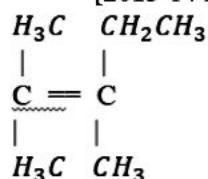


567. What are the required conditions for the following reaction? D
 $CH_4 + Cl_2 \rightarrow CH_3Cl + CH_2Cl_2 + CHCl_3 + CCl_4 + HCl$
 [2012-185 Eng]:
 (a) Low temperature (b) Al_2O_3 catalyst $400^\circ C$
 (c) $ZnCl_2$ $250^\circ C$ (d) UV light

568. CH_4 on complete oxidation in the presence of Cu as catalyst under 200 atm yield: [2012-83 MED] C
 (a) Methanol (b) Formaldehyde
 (c) Formic acid (d) Carbon dioxide gas

569. The heat of combustion of hydrocarbon is very useful source of heat and power. Considering the combustion reaction given below. A
 [2013-18 MED]:
 $CH_4^{(g)} + O_2^{(g)} \rightarrow CO_2^{(o)} + 2H_2O$ ΔH for the reaction is.
 (a) $\Delta H = 213 \text{ kcal/mole}$ (b) $\Delta H = 213 \text{ kcal/mole}$
 (c) $\Delta H = 426 \text{ kcal/mole}$ (d) $\Delta H = 312 \text{ kcal/mole}$

570. Select proper IUPAC name of the following compound: A
 [2013-14 Eng]:



a) 2-methyl-3-ethyl-2-butene

- (b) 3-ethyl-2-methyl-2-butene
(c) 2, 3-Dimethyl-2-pentene
(d) 2, isopropyl butane
-
571. Dehydrohalogenation of alkyl halide is carried with: A
2008-81 MEd]:
(a) Alcoholic KOH (b) Aqueous KOH
(c) Aqueous NaOH (d) Alcoholic HaOH
-
572. Ethene could be obtained from ethyl bromide by: D
[2012-195 Eng]:
(a) Hydrolysis (b) Nucleophilic substitution
(c) Dehydration (d) dehydrohalogenation
-
573. In which of the following solvents are alkenes the most soluble? C
2005-45 MEd]:
(a) Water (b) Ethyl alcohol
(c) Ammonia (d) Carbon tetrachloride
-
574. 2,3 dimethyl, 2butene undergoes catalytic Hydrogenation to give; A
[2011-65 Eng]:
(a) 2,2 dimethyl butane (b) 2 – methyl pentane
(c) 2,3 dimethyl butane (d) 3 – methyl pentane
-
575. Ethene and Ethyne can be distinguished by employing the test: a
[2012-103 MEd]:
(a) Br₂ in organic solvent (b) Baeyer's reagent
(c) Phenyl Hydrazine (d) Tollen's reagent
-
576. Select the o/p directing group but ring deactivators of the following? b
[2016-58 Eng]
(a) –CH₃ (b) –Cl (c) –NO₂ (d) –OH
-
577. Considering the addition of hydrogen acids to alkenes, what is the correct order of reactivity? b
[2012-66 Eng]:
(a) HCl > HBr > HI (b) HI > HBr > HCl
(c) HBr > HI > HCl (d) HCl > HI > HBr
-
578. The addition of HX to a double bond the hydrogen goes to the carbon that already has more hydrogen is a statement of: 2011-82 Eng]:
(a) Hund's rule (b) Markownikov's rule
(c) Huckel rule (d) None of the above
-
579. If HCl is added to $\text{CH}_2 = \text{CH} - \text{CH}_3$ what is for MEd]? A
2007-191 MEd]:
(a) $\text{CH}_3 - \underset{\text{Cl}}{\underset{|}{\text{CH}}} - \text{CH}_3$ (b) $\text{CH}_2 - \underset{\text{Cl}}{\underset{|}{\text{C}}} - \text{CH}_3$
(c) $\text{CH}_2 = \underset{\text{CH}_3 - \text{Cl}}{\underset{|}{\text{CH}}} - \text{CH}_3$ (d) None of these
-
580. Markownikoff's rule is NOT applicable when HBr is added to: B
[2012-177 Eng]:
(a) 3-pentene (b) 2-Butene
(c) 1-Butene (d) Propene
-
581. Carbon-carbon double bond as compared to single bond is: B
[2011-133 MEd]:
(a) less susceptible to oxidation (b) More susceptible to oxidation
(c) Equally susceptible to oxidation (d) All of these
-
582. Baeyer's reagent is: D
[2011-78 Eng]:

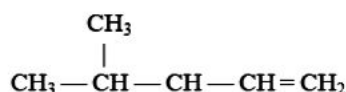
- (a) $HCl + ZnCl_2$ (b) H_2NNH_2
 (c) Br_2 in CCl_4 (d) Dil K MnO₄

583.	Which one of the following would you suggest to locate the position of the double bond between carbon atoms in an organic compound? [2011-189 MEd]:	C	
	(a) Addition of Bromine water (b) Addition of HI (c) Oxidation with ozone (d) All of the above		
584.	Which of the following compounds on hydrolyses gives Ethyne? [2011-85 Eng]:	A	
	(a) CaC_2 (b) Mg_2C_3 (c) Al_4C_3 (d) $CuCl_2$		
585.	Ethyne has a total of: [2011-126 MEd]:	a	
	(a) one σ bond, two π bonds (b) one σ bond, four π bonds (c) two σ bonds, four π bonds (d) three σ bonds, two π bonds		
586.	Which one of the following will be more acidic? [2013-104 Eng]:	B	
	(a) 1-Pentene (b) 1-Pentyne (c) 3-Hexyne (d) 2-Pentyne		
587.	Metallic carbide on treatment with water give a colourless gas which burns readily in air and gives a white precipitate with $AgNO_3 + Na_4 OH$ the gas is: 2007-23 MEd]:	B	
	(a) CH_4 (b) C_2H_2 (c) C_2H_4 (d) C_2H_6		
588.	Which of the following would you consider to be comparatively more reactive? [2013-174 Eng]:	B	Reactivity Order = Alkene > Alkyne > Alkane
	(a) C_2H_6 (b) C_2H_4 (c) C_2H_2 (d) C_3H_8		
589.	The reduction of 2-butyne to n-butane in laboratory involves: (a) The use of an oxidizing agent such as $Cr_2O_7^{2-}$ in the presence of acids. (b) The use of strong base such as KOH along with $NaNH_2$ (c) The use of hydrogen gas in the presence of Nickel as catalyst (d) The use of Al_2O_3 as catalyst and water in the form of steam	C	
590.	Benzene is the prime member of: 2009-37 MEd]:	D	
	(a) A cyclic compounds (b) All cyclic compounds (c) Hetro cyclic compounds (d) Aromatic compounds		
591.	Select the correct formula of 2-methyl pentane: [2011-116 MEd]: [2011-55 Eng]:	D	
	(a) C_5H_{12} (b) C_5H_{16} (c) C_6H_{12} (d) C_6H_{14}		
592.	Choose the correct statement; 2011-129 MEd];	A	
	(a) Resonance hybrids are the weighted average of all the resonating forms (b) Resonance hybrids are generally considered as unstable. (c) Resonance hybrids are the averagely of all the resonance forms (d) Resonance hybrids are averaged of all the less stable resonating forms		
593.	When acetylene is passed through hot iron tube at 400 °C it gives: [2011-88 Eng]:	A	
	(a) Benzene (b) O – xylene (c) Toluene (d) polythene		
594.	A nucleophile is; [2010-141 MEd]:	D	
	(a) Lewis acid (b) Bronsted acid (c) Bronsted base (d) Lewis base		
595.	Species in search of the positive charge are called; [2010-26 Eng]:	B	
	(a) Reducing agent (b) Nucleophile (c) Bases (d) Electrophile		

596. Which of the following is a nucleophile? B
 [2011-136 MEd]
 (a) AlCl_3 (b) CN^- (c) H_3O^+ (d) BF_3
-
597. Which of the following is not a nucleophile? D
 [2013-172 MEd];
 (a) NH_3 (b) HO^- (c) $\text{HC}=\text{CH}$ (d) Br^-
-
598. Which of the following is not an electrophile? C
 [2013-60 Eng]:
 (a) H_3O^+ (b) AlCl_3 (c) CN^- (d) BF_3
-
599. Compared to benzene, nitration of toluene takes place at: B
 [2012-86 MEd];
 (a) Slower rate (b) faster rate (c) same rate (d) depends on the conditions
-
600. The catalyst used in Friedel-Craft reaction; B
 [2012-126 Eng]:
 (a) Lewis base (b) Lewis acid
 (c) amphoteric compounds (d) none of these
-
601. AlCl_3 generally behaves as: A
 [2012-181 Eng]:
 (a) Lewis acid (b) Brønsted base
 (c) Brønsted acid (d) Lewis base
-
602. Benzene reacts with acetyl chloride in the presence of Lewis acid forming: B
 [2013-68 MEd]
 (a) Chlorobenzene (b) Acetophenone
 (c) Benzoic acid (d) benzophenone
-
603. The most reactive compound among the following is: B
 [2012-63 Eng]:
 (a) Nitrobenzene (b) Toluene
 (c) Benzoic acid (d) Benzene
-
604. The catalytic hydrogenation of benzene yields; B
 [2007-143 MEd]:
 (a) Xylene (b) Cyclohexane
 (c) Toluene (d) Benzoic acid
-
605. Why is it so that if aromatic compounds, burned in air, produce a very smoky flame? a
 [2012-67 MEd]
 A) Aromatic compound cannot be completely converted into CO_2 and other products during burning
 B) The available amount of oxygen present in air is not sufficient to completely burn available compound
 C) Aromatic compound produces compounds on burning that are of black colour
 D) None of the above
-
606. When a mixture of Benzene vapours and air is passed over V_2O_5 at 450°C , Benzene is oxidized with the rupture of Benzene ring. Identify the product of the reaction; B
 [2005-30 MEd]:
 (a) Carbon dioxide and water (b) Maleic anhydride
 (c) Succinic anhydride (d) Acetic anhydride
-
607. Which statement is NOT true about benzene? b
 [2012-162 Eng]:
 (a) Benzene is a planar molecule with bond angles 120°
 (b) It is completely miscible with water
 (c) It can be converted into a cyclohexane by hydrogenation
 (d) It can be converted into ethyl benzene when reacted with ethyl chloride and AlCl_3
-
608. Which of the following products is obtained from benzene is treated with chlorine in the presence of strong ultraviolet rays? C
 [2005-60 MEd]
 (a) Chlorobenzene (b) O-dichlorobenzene
 (c) Hexachlorobenzene (d) P-dichlorobenzene
-
609. Phenol is an ortho-para orienting because the hydroxyl group: D
 [2011-138 Eng]:

- (a) increases the electron density at meta position favouring nucleophilic attack
 (b) increases the electron density at meta position favouring electrophilic attack
 (c) increases the electron density at O/P positions favouring nucleophilic attack
 (d) increases the electron density at O/P positions favouring electrophilic attack

610.	Which of the following is ortho-para orienting and ring deactivating? [2011-132 Eng]:	A	
	(a) $-Cl$ (b) $-NH_2$ (c) $-OCH_3$ (d)		
611.	The Cl atom attached to benzene ring is: 2006-78 MEd]:	C	
	(a) M-directing (b) O-directing (c) O-and p-directing and deactivating (d) O—and p-directing and activating		
612.	Which of the following group is considered to have a deactivating effect during aromatic substitution? [2010-95 Eng]:	D	
	(a) $-OH$ (b) $-NH_2$ (c) $-CH_3$ (d) $-CN$		
613.	Which of the following species deactivate the Benzene ring when attached to Benzene ring. 2009-31 MEd]:	B	
	(a) C_2H_5 (b) SO_3H (c) NH_2 (d) CH_3		
614.	Which of following functional groups are deactivating and not ortho, para directing? [2013-35, [2010-46 MEd]:	B	
	(a) $-R$ (b) $-COR$ (c) $-NH_2$ (d) NR		
615.	Which one of the following molecules does not contain nitrogen? 2006-26 MEd]:	d	
	(a) Aniline (b) Pyridine (c) Hydrazine (d) Naphthalene		
616.	Benzene undergoes substitution reactions more easily than addition reactions because: [2012-19 MEd]	B	
	(a) of its cyclic nature (b) of having three double bonds (c) of aromatic character (d) of delocalization of electrons		
617.	Which of the following compounds undergoes nitration most readily? [2014-49 MEd]:	B	Substituents on benzene makes it more reactive. Ortho/para directing makes it more reactive except halogens while meta directing makes is less reactive.
	a) Benzene b) Toluene c) Benzoic acid d) Nitrobenzene		
618.	Which of the following is a lewis acid? [2014-7 MEd]:	B	
	a) CH_3OH b) $AlCl_3$ c) NH_3 d) CH_3OCH_3		
619.	Which of the following substituents is an Ortho and Para director and ring deactivating? [2014-48 MEd]:	B	
	a) $-OH$ b) $-NH_2$ c) $-Cl$ d) $-OCH_3$		
620.	Choose the IUPAC name of the following compound: [2015-36 MEd]	C	



- A) 4- Methyl-2-Pentene B) 2- Methyl-3- Pentene C) 2- Methyl-2- Pentene
D) 4,4-Dimethyl-2-Pentene

621. Select alkene of the following hydrocarbons:

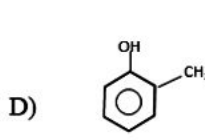
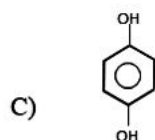
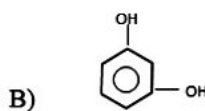
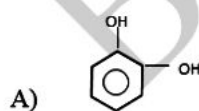
[2015-156 Med]

- A) C_5H_{22} B) C_5H_{10} C) C_5H_8 D) C_4H_{10}

622. Select cresol out of the following benzene derivatives?

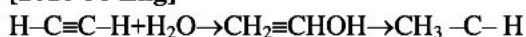
[2015-174 Med]

D



623. What is the suitable catalyst for the reaction given below?

[2016-38 Eng]



- (a) Zn, HCl (b) Li Al H₄
(c) HgSO₄, H₂SO₄ (d) Al₂O₃

C

624. What volume of oxygen is required for complete combustion of 5cm³ of CH₄ and 5cm³ of C₂H₄ in same conditions?

[2016-89 Eng]

- (a) 5cm³ (b) 10cm³
(c) 25cm³ (d) 15cm³

B

625. Which of the following compounds has acidic hydrogen?

[2016-137 Eng]

- (a) Ethylene (b) 2-butyne
(c) Propyne (d) 3-butadiene

C

626. The correct order of the reactivity of hydrocarbon given below is:

[2016-47 Med]

- (a) C₂H₄ > C₂H₂ > C₆H₆ (b) C₆H₆ > C₂H₄ > C₂H₂
(c) C₂H₄ > C₂H₂ > C₆H₆ (d)

A

627. Select meta directing group of the following?

[2016-102 Med]

- (a) -OH (b) -NR₂
(c) -CN (d) -OR

C

628. In the $\text{CH}_3\text{CH}_2\text{C}\equiv\text{CH} + \text{H}_2\text{O} \rightarrow ?$

[2016-130 Med]

- (a) CH₃CHO + CH₃CHO
(b) CH₃CH₂CH₂CH₂-OH
(c) CH₃CH₂CH₂COOH
(d) CH₃CH₂COCH₃

D

CHAPTER-17: ALKYL HALIDES

629. Which is not true about Grignard reagent?

[2015-75 Med]

- A) They are highly reactive compounds
B) They are very stable compounds & can be isolated easily
C) They have synthetic importance
D) They are represented by general formula RMgX

B

Grignard reagent are very stable and can not be isolated from ethereal solution.

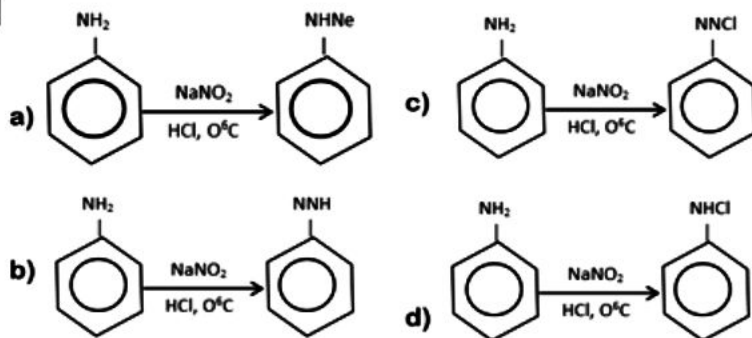
630. Propene is unsymmetrical molecule the addition of HI will result in the formation of: A
[2013-90 Eng]:
 (a) $\text{H}_3\text{C}-\text{CH}-\text{CH}_3$ (b) $\text{CH}_3\text{CH}_2\text{I}$
 (c) $\text{CH}_3\text{CHCH}_3 + \text{CH}_3\text{CH}_2\text{I}$ (d) $\text{CH}_2=\text{CH}-\text{CH}_3 + \text{H}_2$
-
631. Choose the correct product of the following reaction: $\text{CH}_3\text{CH}_2\text{OH} + \text{PCl}_5 \rightarrow$ B
[2013-107 Eng]:
 (a) $\text{CH}_3\text{Cl} + \text{POCl}_3 + \text{H}_2\text{O}$ (b) $\text{CH}_3\text{CH}_2\text{Cl} + \text{POCl}_3 + \text{H}_2\text{O}$
 (c) $\text{CH}_3\text{CH}_2\text{Cl} + \text{Cl} + \text{POCl}_3 + \text{HCl}$ (d) $\text{C}_2\text{H}_5\text{Cl} + \text{H}_3\text{PO}_3$
-
632. Which of the following reaction show nucleophilic substitution of alkyl halide $\text{R}-\text{X}$? B
2007-119 MEd]:
 (a) $\text{RX} + \text{H}_2 \rightarrow \text{RH} + \text{HX}$
 (b) $\text{RX} + \text{KCN} \rightarrow \text{RCN} + \text{KX}$
 (c) $2\text{RX} + 2\text{Na} \xrightarrow{\text{Heat}} \text{R}-\text{R} + 2\text{NaX}$
 (d) $\text{R}-\text{X} + \text{Mg} \xrightarrow{\text{Heat}} \text{RMgX}$
-
633. Displacement reaction that proceeds by the $\text{S}_\text{N}2$ mechanism are most successful with compounds that are: D
[2010-183 MEd]:
 (a) Neopentyl system
 (b) Tertiary compound with no branch
 (c) Secondary halides
 (d) Primary compound with no branch at β -carbon
-
634. Which of the following carbonium ion is most stable? A
[2011-139 MEd]:
 (a) R_3C^+ (b) R_2CH^+ (c) RCH_2^+ (d) CH_3^+
-
635. Which of the following compounds comparatively would react rapidly in an $\text{S}_\text{N}2$ reaction? C
[2011-92 Eng]:
 (a) $(\text{CH}_3)_3\text{Cl}$ (b) $(\text{CH}_3)_2\text{CHI}$
 (c) $\text{CH}_3\text{CH}_2\text{I}$ (d) $\text{CH}_2=\text{CHI}$
-
636. Methane can be prepared by the reaction of; d
[2011-62 Eng]:
 (a) iodomethane with sodium in dry ether
 (b) methanol with conc H_2SO_4
 (c) sodiummethanoate with soda lime
 (d) reduction of dimethane
-
637. The reaction of alkyl halide with ammonia is called. B
[2010-74 Eng]:
 (a) Wurtz reaction (b) Hoffman reaction
 (c) Fittig reaction (d) Friedel-Crafts reaction
-
638. When 2-Bromo-2-methyl propane undergoes unimolecular elimination reaction, the product obtained will be: B
[2013-72 MEd]
 (a) 2-Methyl propane: (b) 2-Methyl propane:
 (c) 2-Methyl-1 propanol: (d) 2-pentanol
-
639. The acid-catalyzed dehydration mechanism for alcohol is best described as a/an: B
[2011-112 Eng]:
 (a) E_1 (b) E_2 (c) $\text{S}_\text{N}1$ (d) $\text{S}_\text{N}2$
-
640. Grignard reagent is prepared by reacting: A
2009-02 MEd]
 (a) Alkyl halide and Mg (b) Alkane and Mg
 (c) Alcohol and Mg (d) None of them

641. What product is obtained when methyl magnesium chloride reacts with ammonia: 2008-31 **MEd**: A
 (a) Methane (b) Methylamine
 (c) Ethylamine (d) Methyl Chloride
-
642. Formaldehyde give and addition product with methyl magnesium iodide. Which one aqueous hydrolysis gives: 2008-169, [2011-95 **Eng**]: B
 (a) CH_3OH (b) C_2H_5OH
 (c) $(CH_3)_2CHOH$ (d)
-
643. Ketones on reaction with methyl magnesium iodide will produce: A
 [2012-198 **Eng**]:
 (a) Tertiary alcohol (b) primary alcohol
 (c) secondary alcohol (d) All of these
-
644. Select the suitable product when ethylene oxide react with hydrogen bromide: [2012-166 **Eng**]: C
 (a) 1-Bromethanol (b) Ethyl bromide (c) 2-Bromo ethanol
 (d) Ethylene glycol
-
645. Dry CO_2 is passed through Grignard reagent in the presence of ether as a solvent the intermediate is decomposed with dil HCL which gives the compound: 2008-191, [2010-162 **Eng**]: C
 (a) Primary alcohol (b) Acetone
 (c) Carboxylic acid (d) Secondary alcohol
-
646. Which one of the Grignard reaction below could give rise to $CH_3CH_2CH(OH)CH_2CH_3$ 2006-02 **MEd**: C
 (a) Propane and methyl grignard
 (b) Methyl ethyl ketone and methyl grignard
 (c) Propanaldehyde and ethyl Grignard
 (d) None of these
-
647. Choose the correct option of the following? [2016-48 **Eng**]: B
 (a) Ammonia is stronger base than Aliphatic primary amines
 (b) Aliphatic primary amines are stronger bases than ammonia
 (c) Aliphatic primary amines and ammonia have almost equal basic strength
 (d) Aliphatic amines are not basic in nature
-
648. Ethanal reacts with CH_3CH_2MgBr the product for [2016-29 **MEd**]: C
 (a) $CH_3CH_2CH_2OH$ (b) $\begin{matrix} CH_3 \\ | \\ CH_3 \end{matrix} > CHOH$
 (c) $\begin{matrix} CH_3 \\ | \\ CH_3CH_2 \end{matrix} > CHOH$ (d) $\begin{matrix} O \\ | \\ CH_3CH_2CH_2C \\ | \\ OH \end{matrix}$
-
649. Which is not true about Grignard reagent? [2016-36 **MEd**]: B
 (a) They are highly reactive compounds
 (b) They are very stable compounds and can be isolated easily
 (c) They have synthetic importance
 (d) They are represented by general formula $RMgX$.
-
650. Primary amines on treatment with alkyl halide yield: A
 [2016-71 **MEd**]:
 (a) Secondary amine (b) Tertiary amine
 (c) Quaternary ammonium salt
 (d) Mixture of (a), (b) & (c)
-
651. The compound which can form hydrogen bond with water is: 2017-Med D
 A. CH_3-O-CH_3 B. CH_3-CH_2-OH
 C. $CH_3-CH_2-NH_2$ D. Non of the above

652. $\text{OH}^-_{(\text{alcoholic})} + \text{CH}_3(\text{CH}_2)_2\text{Br} \rightarrow \text{Product}$ A
The nature of OH^- in the above reaction is: 2017-Med
A) Nucleophile B) Lewis base
C) Ligand D) All of the above
-
653. $\text{CH}_3\text{CH}_2\text{NH}_2 + \text{C}_2\text{H}_5-\text{C}-\text{C}_2\text{H}_5 \rightarrow \text{Product}$ A
2017-33 Med
A. Schiff's salt B. Diazonium salt
C. Amide D. Imine + Amide
-
654. Which one is a strong nucleophile: 2017- Med A
A. $\text{C}_6\text{H}_5-\text{O}^-$ B. $\text{H}-\text{O}^-$
C. NH_3 D. $\text{C}_2\text{H}_5-\text{O}^-$
-
655. $\text{KOH}(\text{alcoholic}) + \text{CH}(\text{CH}_3)_2\text{CH}_2\text{Br}$ (1). The reactants in the condition B
given will under go: 2017-Med
A. Nucleophilic substitution reaction.
B. Elimination reaction.
C. Nucleophilic addition.
D. None of the above
-
656. $(\text{CH}_3)_3\text{C}-\text{CH}_2-\text{Br}$ cannot undergo elimination reaction with alcoholic KOH .
It is because. 2018-Eng
A) Alcoholic KOH is not a good choice
B) It is tertiary alkyl halide
C) For elimination strong base is needed
D) There is no β -hydrogen in the compound
-
657. Which of the reactant pair you think gives fastest reaction? 2018-Eng A
A) $\text{CH}_3-\text{I} + \text{F}_2$ B) $\text{CH}_3-\text{Cl} + \text{F}_2$
C) $\text{CH}_3-\text{Br} + \text{Cl}_2$ D) $\text{CH}_3-\text{F} + \text{I}_2$
-
658. Bromo ethane on reaction with KCN gives compound "X". the compound
"X" on reduction with hydrogen (nascent) gives; 2018-Eng
A) CH_3-CH_3
B) $\text{CH}_3-\text{CH}_2-\text{CH}_2-\text{NH}_2$
C) $\text{CH}_3-\text{CH}_2-\text{COOH}$
D) $\text{CH}_3-\text{CH}_2-\text{CH}_2-\text{NO}_2$
-
659. an alkyne that gives aldehyde on hydrolysis with water under proper
condition is: 2018-Eng
A) $\text{CH}_3-\text{C} \equiv \text{C}-\text{CH}_3$ B) $\text{CH}_3-\text{C} \equiv \text{CH}$
C) $\text{CH}_3-\text{CH}_2-\text{C} \equiv \text{C}$ D) None of the above
-
660. Aqueous KOH causes S_N -reaction in alkyl halide. On which of the D
following alkyl halides KOH would like to attack easily; 2018-Med
A) $\text{CH}_3-\text{CH}_2-\text{Cl}$ B) $\text{CH}_3-\text{CH}_2-\text{Br}$
C) $\text{CH}_3-\text{CH}_2-\text{F}$ D) $\text{CH}_3-\text{CH}_2-\text{I}$.

CHAPTER-18: ALCOHOLS, PHENOLS & ETHERS

661. Choose the correct reaction



662. Four beakers containing ethanol, ethanol, propanone and phenol B

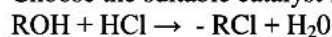
separately. Aqueous bromine was added to each beaker. A white ppt was produced in one beaker. This beaker contain: 2017-Med

- A) Ethanol B) Phenol
C) Ethanal D) Propanon

663. Select the correct order in boiling point: 2017- Eng D

- A. 1-Butanol < 2-Butanol < 2-Methyl-2-Propanol
B. 2-Butanol < 1-Butanol < 2-Methyl-2-Propanol
C. 2-Methyl-2-Propanol < 1-Butanol < 2-Butanol
D. 2-Methyl-2-Propanol < 2-Butanol < 1-Butanol

664. Choose the suitable catalyst for the following reaction: 2017-Eng B



- A) AlCl_3 B) ZnCl_2
C) TiCl_4 D) FeCl_3

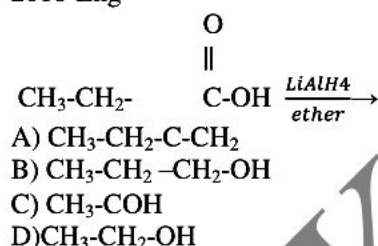
665. Diethyl ether reacts with Acetyl Chloride in the presence of anhydrous ZnCl₂ to form: 2017-Eng A

- A. $\text{C}_2\text{H}_5\text{Cl} + \text{CH}_3\text{COOC}_2\text{H}_5$
B. $\text{CH}_2=\text{CH}_2 + \text{CH}_3\text{COOC}_2\text{H}_5 + \text{HCl}$
C. $\text{C}_2\text{H}_5\text{COOC}_2\text{H}_5 + \text{Cl}_2$
D. None of the above

666. Methane Thiol and ethane Thiol is added to the natural gas: 2018-Eng C

- A) To make combustion of natural gas very easy
B) To increase the boiling point
C) To detect the gas leakage by smell
D) Both a and c

667. The correct product of the complete reduction of propionic acid is; 2018-Eng



668. 2- Bromopropene on reaction with $\text{C}_2\text{H}_5\text{S}^-$ thio alcohol under goes: 2018-Eng

- A) Elimination reaction
B) Substitution reaction
C) No reaction because $\text{C}_2\text{H}_5\text{S}^-$ is a stronger base
D) Addition reaction

669. The oxidation number of carbon in $\text{Mg}(\text{HCO}_3)_2$ is: 2018-Eng A

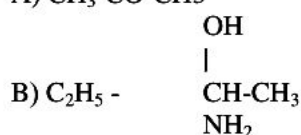
- A) +4
B) -4
C) -2
D) Zero

670. The alcohol given $\text{CH}_3\text{-CH}_2\text{-(CH}_3)_2\text{-OH}$. If oxidized with a strong oxidizing agent given: 20181-Med D

- A) Aldehyde B) Ketone
C) Ether D) None of the above

671. The non-carbonyl compound out of the following is: 2018-Med B

- A) $\text{CH}_3\text{-CO-CH}_3$



	OR D) CH ₃ - C=O	
672.	Excess of ethanol is heated with conc: sulphuric acid keeping the temperature 140°C. The product for MED is: [2015-116 MED]. A) C ₂ H ₅ OC ₂ H ₅ + H ₂ O B) C ₂ H ₄ C) C ₂ H ₅ OH D) C ₂ H ₆	
673.	Ethanol is manufactured by fermentation of starch. The starch conversion to maltose requires the enzyme; [2011-155 Eng]: (a) zymase (b) invertase (c) diastase (d) all	c
674.	Rectified spirit is: [2012-41 MED]: (a) 100% ethanol (b) 95% ethanol (c) 90 % ethanol (d) 35% ethanol	b
675.	Which compounds has highest B. Point? 2009-08 MED]: (a) C ₂ H ₆ (b) C ₂ H ₅ Cl (c) CH ₃ OCH ₃ (d) C ₂ H ₅ OH	d
676.	Which one of the following will give an ionic product? [2012-173 MED] (a) CH ₃ CH ₂ OH + PCl ₅ → (b) CH ₃ CH ₂ OH + Na → (c) CH ₃ CH ₂ OH + PCl ₃ → (d) CH ₃ CH ₂ OH + 5OCl ₂ →	b
677.	6. Methanol reacts with sodium. The product for MED] is sodium methoxide and hydrogen gas. [2013-144 Eng]: 2CH ₃ OH + 2Na → CH ₃ ONa + Na + H ₂ (g) In this reaction methanol acts as: (a) Weak base (b) Weak acid (c) Strong base (d) Weak oxidizing agent	b
678.	Select the compound that will not be easily oxidized: [2011-108 Eng]: (a) Primary Alcohol (b) Sec: Alcohol (c) Ter: Alcohol (d) Aldehyde	c
679.	Which one of the following will not undergo dehydrogenation? (a) CH ₃ OH (b) (CH ₃) ₂ CHOH (c) (CH ₃) ₃ COH (d) CH ₃ CH ₂ OH	c
680.	Lucas Test is used to detect the presence of: [2012 [2013-MED] A (a) Alcohols (b) Phenols (c) Amino acids (d) Carboxylic acids	
681.	The compound which reacts most readily with Lucas reagent is: D [2010-45MED] (a) CH ₃ CH ₂ Cl (b) (CH ₃) ₂ CHOH (c) CH ₃ CH ₂ OH (d) (CH ₃) ₃ COH	
682.	Lucas reagent is: [2011-98 Eng]: C (a) HCl / NaNO ₂ (b) H ₂ / Pb (c) HCl / ZnCl ₂ (d) HCl / HNO ₃	
683.	By reacting phenol with bromine water the product obtained is. D 2007-133 MED]: (a) O-bromophenol (b) M-bromophenol (c) P-bromophenol (d) 2,4,6-tribromophenol	
684.	Bakelite is obtained from: [2012-63 MED]: D (a) Adipic acid and hexamethylenediamine (b) Dimethyl terephthalate and ethyl glycol (c) Neoprene (d) Phenol and formaldehyde	
685.	Choose the compound in which hydrogen bonding is not possible? A [2012-11 MED] (a) CH ₃ OCH ₃ (b) H ₂ O (c) CH ₃ CH ₂ OH (d) CH ₃ COOH	
686.	Ethers are considered as: [2011-115 Eng]: B (a) lewis acids (b) lewis bases (c) both a & b (d) None of these	

687. $\text{CH}_3\text{COCl} + 2\text{NH}_3 \rightarrow$ B
Considering the above reaction which one is the true product?
[2013-47 Eng]:
(a) $\text{CH}_3\text{COO NH}_4$ (b) $\text{CH}_3 \text{CO NH}_2$
(c) $\text{H}_2\text{N COO NH}_4$ (d) CH_3Cl
-
688. Which of the following compounds will react with methyl magnesium Iodide followed by acid hydrolysis to give ethyl alcohol? D
[2014-19 MEd]
a) Ethylene b) Acetone c) Acetaldehyde d) Formaldehyde
-
689. Which of the following compounds does not give iodoform test on reaction with I_2 and NaOH ? D
[2014-40 MEd]:
a) Propanone b) Ethanol c) Butanone d) 2-Propanol
-
690. IUPAC name of the compound C
 $\text{CH}_3-\text{CH}-\text{CH}_2\text{CH}(\text{OH})-\text{CH}_3$:

$$\begin{array}{c} | \\ \text{CH}_2 \\ | \\ \text{CH}_3 \end{array}$$

 (a) 4-methyl-3-hexanol (b) Heptanol
(c) 4-methyl-2-hexanol (d) 4-ethyl pentanol-2
-
691. Hemiacetal containing both; B
[2015-46 MEd]
A) Alcohol and aldehyde functional groups
B) Alcohol and ether functional groups
C) Aldehyde and ether functional groups
D) Alcohol and carboxylic acid functional groups
-
692. Alcohols are weakly acidic with K_a values in the range of: D
[2016-47 Eng]
(a) 10^{-8} to 10^{-10} (b) 10^{-10} to 10^{-12}
(c) 10^{-12} to 10^{-25} (d) 10^{-16} to 10^{-18}
-
693. Grain spirit is: [2016-117 Eng] D
(a) Isopropyl alcohol (b) Isobutyl alcohol
(c) n-propyl alcohol (d) Ethyl alcohol
-
694. Lucas reagent is: [2016-149 Eng]s D
(a) H_2/Pb (b) HCl/NaNO_2
(c) HCl/NaNO_3 (d) HCl/ZnCl_2
-
695. 28 Methanethiol and ethanethiol is added to the natural gas: C
[2016-179 Eng]
(a) To make the combustion of natural gas very easy
(b) To increase the boiling point
(c) to detect the gas leakage by smell
(d) Both (a) & (b)
-
696. Which one of the following is carbolic acid? [2016-197 Eng] C
(a) H_2CO_3 (b) 5% solution of benzoic
(c) 5% solution of phenol
(d) 5% solution lactic acid
-
697. Choose reaction that is not correct? [2016-37 MEd] D
(a) $\text{R C}-\text{OH}+\text{SOCl}_2 \rightarrow \text{R C}-\text{Cl}+\text{HCl}+\text{SO}_2$
(b) $\text{R C}-\text{OH}+\text{PCl}_4 \rightarrow \text{R C}-\text{Cl}+\text{HCl}+\text{POCl}_3$
(c) $2\text{CH}_3\text{COOH}+\text{P}_2\text{O}_3 \rightarrow \text{CH}_3\text{C}-\text{O}+\text{CCH}_3+\text{H}_2\text{O}$
(d) $\text{CH}_3 \text{C}-\text{OH}+\text{C}_2\text{H}_5\text{Cl}_4 \rightarrow \text{CH}_3\text{C}-\text{Cl}+\text{C}_2\text{H}_5\text{OH}$
-
698. Choose reaction that does not require ZnCl_2 catalyst: [2016-80 MEd] D
(a) $\text{CH}_3\text{CH}_2\text{OH}+\text{HCl} \rightarrow \text{CH}_3\text{CH}_2\text{Cl}+\text{H}_2\text{O}$
(b) $\text{CH}_3\text{CH}_2\text{OH}+\text{HBr} \rightarrow \text{CH}_3\text{CH}_2\text{Br}+\text{H}_2\text{O}$
(c) $\text{CH}_3\text{CH}_2\text{OH}+\text{HI} \rightarrow \text{CH}_3\text{CH}_2\text{I}+\text{H}_2\text{O}$
(d) Both (b) & (c)

699. Ethoxy ethane when treated with conc: H_2SO_4 , it produces: [2016-174 Med]
 (a) Carbocation (b) Oxonium ion
 (c) Carbanion (d) Oxalate ion

CHAPTER-19:

CARBONYL COMPOUNDS 1: ALDEHYDES & KETONES

700. The oxidation of pent-2-one (2-pentanone) with nascent oxygen gives: 2017 C
 Med
 A) Propanal B) Propanoic acid
 C) Ethanoic acid D) Pentanoic acid
-
701. Alkene + $\text{O}_3 \rightarrow$ Ozonide " $\text{Zn} + \text{H}_2\text{O}$ " Propanone + Propanal. The IUPAC name of alkene is: 2017-Med D
 A. Hex-2-ene
 B. Hex-3-ene
 C. 2-methyl pent-1-ene
 D. 2-methyl pent-2-ene
-
702. Which test of the following would you suggest to distinguish between the compounds? 2018-Eng
- | | |
|---|---|
| $\begin{array}{c} \text{O} \\ \\ \text{R} - \text{C} - \text{H} \end{array}$ | $\begin{array}{c} \text{O} \\ \\ \text{R} - \text{C} - \text{R} \end{array}$ |
| A) Baeyer's reagent | B) Lucas reagent |
| C) Tollens reagent | D) None of the above |
-
703. Fehling's solution is added to the following compounds. Select the one that will show positive test. [2015-76 Eng] B **Fehling solution react with aldehyde.**
 A) CH_3COCH_3 B) $\text{CH}_3\text{COC}_2\text{H}_5$
 C) CH_3CHO D) $\text{CH}_3\text{CH}_2\text{COCH}_2\text{CH}_3$
-
704. The reduction of aldehydes and ketones in the presence of zinc amalgam and HOI is termed as: [2015-65 Med] B
 A) Grignard reduction B) Clemmenson reduction
 C) Wolf-kishner reduction D) Friedel-craft reduction
-
705. Select the test used for the estimation of glucose in blood and urine? [2015-115 Med] C
 A) Tollen's reagent test B) Fehling's solution test
 C) Benedict solution test D) All of the above
-
706. Carbon atom in carbonyl is: 2009-12 Med] B
 (a) sp hybridized (b) sp^2 hybridized (c) sp^3 Hybridized
 (d) None of the above.
-
707. Select the statement which is NOT true about carbonyl group? A
 [2012-161 Eng]:
 (a) The three atoms attached to the carbonyl carbon are not in the same plane.
 (b) The carbon in carbonyl group is sp^2 hybridized.
 (c) The bond angles around carbon attached to three atoms are approximately 120° .
 (d) The carbonyl group forms resonating structure.
-
708. The conversion of ethyne to acetaldehyde is carried out: D
 [2012-188 Eng]:
 (a) Ni 250°C (b) HgSO_4 Fe_2O_3 80°C
 (c) Al_2O_3 Fe_2O_3 150°C (d) Pd , 70°C
-
709. Ketones are prepared by the oxidation with $\text{Na}_2\text{Cr}_2\text{O}_7$ and H_2SO_4 of: B
 [2012-194 Med]
 (a) Primary alcohol (b) Secondary alcohol
 (c) Tertiary alcohol (d) All of the above

710. Isopeopyl alcohol on oxidation with $\text{Na}_2\text{Cr}_2\text{O}_7$, in the presence of H_2SO_4 gives;
[2013-10 Eng]:
 (a) Acetaldehyde (b) Ethanoic acid
 (c) Acetone (b) Propanoic acid
-
711. The σ bond for **Med]** between carbon and oxygen atoms in aldehyde and ketone is due to the overlap of:
[2012-93 Med]
 (a) $\text{sp}^2\text{—sp}$ (b) $\text{sp}^2\text{—sp}^2$ (c) $\text{sp}^3\text{—sp}^2$ (d) sp—sp
-
712. Acetaldehyde on oxidation by $\text{Na}_2\text{Cr}_2\text{O}_7/\text{H}_2\text{SO}_4$ gives;
2007-93 Med]:
 (a) CH_3COOH (b) $\text{C}_2\text{H}_5\text{OH}$
 (c) $\text{OHC}\cdot\text{CHO}$ (d) None of the above
-
713. All of the following tests are used to identify aldehyde except:
[2013-127 Eng]:
 (a) Tollen's test (b) Fehling test (c) Benedict test (d) Baeyer's test
-
714. Acetaldehyde on treatment with Fehling's solution forms red precipitate. The color is due to the formation of:
2006-75 Med]:
2005-74, [2012-154 Eng]:
 (a) silver nitrate (b) silver (c) CuO (d) Cu_2O
-
715. Aldehydes may be distinguished from ketones by the use of:
[2010-16 Med]
 (a) Hoffman reagent (b) Grignard reagent
 (c) Tollens reagent (d) Cannizzaro reagent
-
716. Metaformaldehyde is a trimer of:
[2012-82 Eng]:
 (a) ethanol (b) ethanal (c) Methanal (d) methanol
-
717. Which of the following will give a positive test with fehling solution?
[2010-01 Med], [2011-122 Eng]:
 (a) acetic acid (b) ethyl acetate
 (c) formaldehyde (d) acetone
-
718. Formaldehyde is used in the manufacture of:
[2013-77 Eng]:
 (a) Pararosaniline (b) Acetic anhydride
 (c) 1,3-Butadiene (d) Smokeless powder
-
719. Reduction of acetaldehyde with H_2/Ni gives:
[2014-174 Med]:
 (a) Ethanol (b) Ethanoic acid
 (c) Ethane (d) Ethylene
-
720. Methanal on treatment with Grignard's reagent CH_3MgBr the product for **Med]** is:
[2016-199 Eng]
 (a) $\text{CH}_3\text{CH}_2\text{OH}$ (b) CH_3OH
 (c) Manganese (d) Iodine
-
721. The compound Aldehyde hydrazone is: **[2016-68 Med]**
 (a) $\begin{matrix} R \\ | \\ H \end{matrix} > CH = N - NH_2$
 (b) $\begin{matrix} R \\ | \\ H \end{matrix} > CH - NH - O - NH_2$
 (c) $\begin{matrix} R \\ | \\ H \end{matrix} > CH - NG - NH_2$
 (d) $\begin{matrix} R \\ | \\ H \end{matrix} > CH - O - N = NH$

CHAPTER-20: CARBONYLE COMPOUNDS 2: CARBOXYLIC ACIDS & FUNCTIONAL DERIVATIVES

722. The compound which can not be hydrolysed by water is ; d
2017-Med

- a) $\text{CH}_3 - \text{CH}_2 - \overset{\overset{\text{O}}{\parallel}}{\text{C}} - \text{Br}$
 b) $\text{CH}_3 - \overset{\overset{\text{O}}{\parallel}}{\text{C}} - \text{O} - \overset{\overset{\text{O}}{\parallel}}{\text{C}} - \text{CH}_3$
 c) $\text{CH}_3 - \text{CH}_2 - \overset{\overset{\text{O}}{\parallel}}{\text{C}} - \text{NH}_2$
 d) non of the above

723. Choose the True product of the following reaction 2017-Med B
 $\text{CH}_3\text{C}\equiv\text{N} + 2\text{H}_2\text{O} + \text{HCl} \rightarrow$
 A. $\text{CH}_3\text{COOH} + \text{NH}_3$ B. $\text{CH}_3\text{COOH} + \text{NH}_4\text{Cl}$
 C. $\text{CH}_3\text{COCl} + \text{NH}_3$ D. CH_3CONH_2

724. The carbonyl group of carboxyl acid does not exhibit the characteristic A
 reaction of aldehyde and ketone due to: 2017- Eng
 A. The C of carbonyl is less positive
 B. The C of carbonyl is more positive
 C. The C of ketone is less porosity
 D. Does depend o atom

725. Which of the following reactants when react produce ester? 2018-Eng C
 A) $\text{CH}_3\text{CH}_2\text{-OH}$ and PCl_3
 B) CH_3COOH and $\text{CH}_3\text{-O-CH}_3$
 C) $\text{C}_2\text{H}_5\text{-OH}$ and HCOOH
 D) CH_3OOH and CH_3CHO

726. Regarding reactivity of the compounds having carbonyl group. C
 The most reactive compound out of the following is; 2018-Med

- a) $\text{CH}_3 - \text{CH}_2 - \overset{\overset{\text{O}}{\parallel}}{\text{C}} - \text{CH}_3$
 b) $\text{CH}_3 - \overset{\overset{\text{O}}{\parallel}}{\text{C}} - \text{OH}$
 c) $\text{CH}_3 - \overset{\overset{\text{O}}{\parallel}}{\text{C}} - \text{N}$
 d) all of these

727. Select the correct product: D
 $\text{R-C}\equiv\text{N} + \text{H}_2\text{O}$ The hydrolysis of Alkyl nitriles in the presence of acid form
 (a) R CO NH_2 (b) $\text{R CH}_2\text{NH}_2$
 (c) R-CJ-NH_2 (d) RCOOH

728. What is the name of the carboxylic acid given below? 2017-Med B
 $\text{HOOC(CH}_2)_3\text{COOH}$
 A) Propane dioic acid B) Pentane dioic acid
 C) Pentane dicarboxylic acid D) Propane dicarboxylic acid

729. Which one of the following is strongest acid? [2013-38, [2011-183 MEd] A In Carboxylic acid, electron withdrawing groups i.e. Halogens increase acidity while Electron donating groups decrease acidity.
- (a) FCH_2COOH (b) CH_3COOH
(c) ClCH_2COOH (d) $\text{C}_6\text{H}_5\text{CH}_2\text{COO}$
-
730. Which is the strongest acid? [2012-32] [2015-44 MEd] D
- (a) CH_3COOH (b) Cl_2CHCOOH
(c) ClCH_2COOH (d) Cl_3CCOOH
-
731. Which of the following carboxylic acids is the strongest? A
2009-05 MEd]; [2010-25 Eng]:
- (a) Dichloroacetic acid (b) Chloroacetic acid
(c) Formic acid (d) Acetic Acid
-
732. Which of the following statement is false about the acetic acid? A
[2012-76 Eng]:
- (a) Acetic acid is stronger acid than monochloro-acetic acid.
(b) Acetic acid is weaker acid than trichloro-acetic acid
(c) acetic acid is weaker acid than formic acid
(d) Acetic acid is weaker acid than hydrochloric acid.
-
733. Which of the following is NOT correct in case of carboxylic acids? C
2006-71 MEd]
- (a) they are polar molecules
(b) they form H – bonds
(c) they are stronger than mineral acids
(d) they have higher boiling points than corresponding alcohols.
-
734. Which of the following compounds on treatment with NaHCO_3 will liberate CO_2 ? A
[2011-125 Eng], [2012-149 MEd]
- (a) CH_3COOH (b) $\text{C}_2\text{H}_5\text{NH}_2$
(c) CH_3COCH_3 (d) $\text{CH}_3\text{CH}_2\text{OH}$
-
735. Which of the following reagent will convert acetic acid into acetyl chloride? C
[2012-47 Eng]:
- (a) NaCl (b) HCl/ZnCl_2 (c) SOCl_2 (d) Hg
-
736. What will be the product when PCl_5 reacts with acetic acid? B
[2013-55 MEd]:
- (a) CH_3Cl (b) CH_3COCl
(c) CH_3COCl_2 (d) $\text{CH}_3\text{CH}_2\text{COCl}$
-
737. Acetic acid reacts with thionyl chloride. The product obtained is: A
[2013-57 Eng]:
- (a) $\text{CH}_3\text{COCl} + \text{SO}_2 + \text{HCl}$ (b) $\text{CH}_3\text{Cl} + \text{CH}_3\text{COCl} + \text{SO}_2$
(c) $\text{CH}_3\text{COCH}_3 + \text{SO}_2$ (d) None of the above
-
738. Carboxylic acid reacts readily with alcohols in the presence of catalytic amounts of mineral acids to yield compounds called. B
[2010-122 MEd]
- (a) Azides (b) Esters (c) Ketones (d) Ethers
-
739. Acetic acid reacts with methanol in the presence of an acid catalyst to give: C
[2012-68 MEd]
- (a) Methyl formate (b) Ethyl formate
(c) Methyl acetate (d) Ethyl acetate
-
740. Acetic acid undergoes reduction with LiAlH_4 to give: D
[2011-128 Eng]:
- (a) ethanal (b) ethane (c) ethyne (d) ethanol
-
741. Carboxylic acid forms alcohol in presence of LiAlH_4 and the process is: A
[2010-176 MEd]:
- (a) Reduction (b) Oxidation
(c) Hydrolysis (d) None of above

742. Which is NOT true about amino acids? D
[2012-187 MEd]
 (a) They have two functional groups
 (b) They show both acidic and basic characteristics
 (c) They are the basic units of proteins (d) They do not exist in solid state
-
743. All amino acids found in proteins are: A
[2012-181 MEd]:
 (a) α -amino acids (b) β -amino acids
 (c) Both α and β (d) None of the above
-
744. Fatty acids are: B
[2014-29 MEd]:
 a) Unsaturated dicarboxylic acid
 b) Long chain alkanolic acid
 c) Aromatic carboxylic acid
 d) Aromatic dicarboxylic acid
-
745. Saponification of a fat: A
[2014-30 MEd]:
 (a) Always results in the formation of soaps.
 (b) Results in the formation of esters.
 (c) Results in the formation of waxes.
 (d) Results in the formation of glycerol and soap.
-
746. Carbylamine test is given by: A
[2014-31 MEd]:
 a) Primary amines b) Secondary amines
 c) Tertiary amines d) All of these
-
747. The characteristic reaction of carboxylic acid is: D
[2014-39 MEd]:
 a) Electrophillic substitutions b) Nucleophillic substitution
 c) Electrophillic addition d) Nucleophillic addition
-
748. Acetic acid reacts with methyl alcohol in the presence of acid catalyst to give: D
[2014-38 MEd]:
 a) Ethyl formate b) Ethyl acetate
 c) Methyl formate d) Methyl acetate
-
749. Choose reactants whose reaction product is ester: C
[2015-35 MEd]
 A) CH_3COOH and CH_3OCH_3
 B) CH_3COOH and $\text{C}_2\text{H}_5\text{CHO}$
 C) CH_3COOH and $\text{CH}_3\text{CH}_2\text{OH}$
 D) CH_3COOH and CH_3COCH_3
-
750. Hydrolysis of ester in the presence of KOH is called: C
[2015-105 MEd]
 A) Esterification B) Decarboxylation
 C) Saponification D) Neutralization
-
751. Carboxylic acid contains: 2009-164 MEd]:
 (a) Hydroxyl group (b) A hydroxyl and carboxyl group
 (c) A carboxyl group (d) A carboxyl and aldehydic group
-
752. Which of the following reagents may not be used for the oxidation of aldehydes and ketones to carboxylic acids? A
[2013-147 Eng]:
 (a) LiAlH_4 (b) KMnO_4
 (c) $\text{K}_2\text{Cr}_2\text{O}_7$ (d) $\text{Na}_2\text{Cr}_2\text{O}_7$
-
753. The hydrolysis of an ester proceeds most slowly under the condition of: [2011-179 MEd]:
 (a) High acidity (b) High basicity
 (c) Neutrality (d) High temperature
-
754. Choose reactants whose reaction product is ester:
[2015-35 MEd]
 A) CH_3COOH and CH_3OCH_3 B) CH_3COOH and $\text{C}_2\text{H}_5\text{OH}$
 C) CH_3COOH and CH_3CHO D) CH_3COOH and CH_3COCH_3

755. Most of the enzymes start showing activities in the range of PH between: **[2016-17 Eng]** **b**
 (a) 2-4 (b) 5-9 (c) 3-5 (d) 10-12
-
756. Hydrolysis of fats occurs in the mouth and stomach to a slight extent because: **[2016-18 Eng]** **b**
 (a) Very small amount of Lipase is secreted by the salivary glands
 (b) Small amount of lipase is secreted by the salivary glands
 (c) No lipase is secreted by the salivary glands
 (d) Large amount of lipase is secreted by the salivary glands
-
757. Which is the correct IUPAC name of the compound given below? **[2016-69 MEd]** **b**
 (a) Acetophenon (b) Phenylethanone
 (c) Phenyl ethanal (d) Phenylacetate

CHAPTER-21: BIOCHEMISTRY

758. Waxes are the esters of fatty acids with high molecular weight. **[2015-06 MEd]** **A**
 A) Monohydroxy alcohols B) Dihydroxy alcohol
 C) Trihydroxy alcohol D) All of the above
-
759. Oligosaccharides class of carbohydrates contain monosaccharides of about: **[2015-24 MEd]** **C**
 A) 2 to 8 units B) 2 to 9 units
 C) 2 to 10 units D) 2 to 11 units
-
760. Sucrose on hydrolysis yield: **[2015-94 MEd]** **B**
 A) Glucose B) Glucose and fructose
 C) Glucose and maltose D) Maltose and fructose
-
761. Lipids are chemically: **2013-178, [2012-15 MEd]** **D**
 (a) Acids (b) Alcohols
 (c) Ethers (d) Esters
-
762. Proteins, carbohydrates and fats form three great classes of foodstuffs commonly called: **[2012-77 MEd]** **B**
 (a) Trivirates (b) Triumvirates
 (c) Trisvirates (d) All of the above
-
763. High molecular mass compound was hydrolyzed the product was analyzed and found to be amino acid. The compound is: **[2014-199 MEd]** **A**
 (a) Protein (b) Carbohydrate
 (c) Lipid (d) Vitamins
-
764. Polyhydroxy aldehydes or ketones are known as: **A**
 (a) Carbohydrates (b) Proteins
 (c) Lipids ((d) Vitamins
-
765. Sucrose is considered as: **[2014-198 MEd]** **B**
 (a) Monosaccharides (b) Disaccharides
 (c) Polysaccharides (d) None of these
-
766. Sulpholipids are class of compounds that bonds fatty acids, alcohols and carbohydrates. It contains a: **[2016-19 Eng]** **C**
 (a) Sulphite group (b) Sulphide group
 (c) Sulphate group (d) bisulphite group
-
767. Secondary structure of proteins is elucidated by which of the following technique? **[2016-28 Eng]** **s**
 (a) Infrared spectroscopy
 (b) NMR spectroscopy
 (c) X-ray diffraction technique

(d) All of the above

768.	How much phosphorus is required by an adult man per day? [2016-15 MEd]	C
	(a) 500 mg (b) 400 mg (c) 800 mg (d) 1800 mg	
769.	Delayed wound healing is caused by deficiency of: [2016-120 MEd]	b
	(a) Zn (b) Fe (c) Co (d) Mn	
770.	Oligosaccharides are involved in the formation of: [2016-167 MEd](c) Sulphate group	d
	(a) Secreted proteins (b) Blood clotting factors (c) Anti-bodies (d) All of the above	
771.	The molecules of Maltose sugar is given below, it bears: 2018-Eng	A
	A)Ether linkage B)Peptide linkage C)Ester linkage D)Carbon carbon linkage	
772.	Choose the mineral considered as macronutrient and is essential for human life: 2018-Eng	D
	A)Iodine B)Iron C)Zinc D) Calcium.	

CHAPTER-22: INDUSTRIAL CHEMISTRY

773.	Polyester resin-polyurethane resin is: 2017-Eng	B
	A.Hot adhesive B.Multi part adhesive C.One part adhesive D.Contact adhesive	
774.	Which of the following is not a polymer? [2013-144 Eng]:	B
	(a) Urea (b) Starch (c) Polythene (d) Natural rubber	
775.	Which of the following statement is NOT true? [2012-200 MEd]:	B
	(a) Natural rubber is hydrocarbon (b) Natural rubber is isoprene (c) Natural rubber is polymer of 1, 3 Butadiene (d) Natural rubber can be vulcanized	
776.	Polymerization is a process of producing: 2009-115 MEd]:	A
	(a) High molecular weight compounds from monomers (b) Low molecular weight compounds from monomers (c) Intermediate molecular weight compounds form monomers (d) High molecular weight compounds from polymers	
777.	Which of the following is not a polmer? [2010-136 MEd]:	A
	(a) Plastic (b) Petroleum (c) Starch (d) Natural rubber	
778.	The widely used PVC is polymerized product of; 2007-49 MEd]	C
	(a) $\text{CH}_2 = \text{CH}_2$ (b) $\text{CH}_2 = \text{CCl}_2$ (c) $\text{ClCH}_2 = \text{CH}_2\text{Cl}$ (d) $\text{CH}_2 = \text{CHCl}$	
779.	The formation of PVC from vinyl chloride is an example of: 2008-117 MEd]:	B
	(a) Substitution reaction (b) addition polymerization (c)condensation polymerization (d) condensation reaction	

780.	Which is not correct about polyvinyl chloride? [2013-75 MEd]	B
	(a) It is used in large scale production of cable insulator	
	(b) It is a copolymer	
	(c) It is a homopolymer	
	(d) It is used in the manufacturing of pipe.	
781.	Styrene is polymerized at high temperature of about 600°C In the presence of a catalyst: [2013-94 Eng]:	A
	(a) Iron oxide (b) Platinum gauze	
	(c) ailadium (d) Nickel	
782.	Vinylacetate monomer is prepared by the reaction of acetaldehyde and acetic-anhydride. The catalyst employed is: [2013-78 MEd]	A
	(a) FeCl ₃ (b) AL ₂ O ₃	
	(c) V ₂ O ₅ (d) Cr ₂ O ₃	
783.	Polyamides are class of condensation polymers by a chemical reaction between: [2013-87 Eng]:	C
	(a) Monocarboxylic acid and diamines	
	(b) Dicarboxylic acids and diamines	
	(c) Dicarboxylic acids and simple amines	
	(d) All of the above	
784.	Which of the following is a condensation polymer? [2012-197MEd]	A
	(a) Nylon 6,6 (b) Teflon	
	(c) Polypropylene (d) Orlon	
785.	Choose the correct statement: [2012-48 MEd]:	A
	(a) The aliphatic polyamides are generally known as Nylons	
	(b) The aliphatic polyamides are generally known as Polyester	
	(c) The aliphatic polyamides are generally known as Epoxy Resins	
	(d) None of the above	
786.	Nylon-6, 6 is obtained from: 2012-145 Eng]:	A
	(a) adipic acid and hexamthylenediamine	
	(b) tetrafluoroethylene	
	(c) vinyl cyanide	
	(d) vinyl benzene	
787.	Which one of the following polymers contains nitrogen? [2012-151 Eng]:	C
	(a) PVC (b) Teflon	
	(c) Nylon (d) polypropylene	
788.	Super phosphate is made by: 2009-176 MEd]:	A
	(a) the acidulation of phosphate rock	
	(b) the alkylation of phosphate rock	
	(c) The alcoholation of phosphate rock	
	(d) The alkali addition with phosphate rock	
789.	Which one is not a nitrogenous fertilizer? [2013-85 MEd]:	B
	(a) Ammonium nitrate (b) Triple phosphate	
	(c) Urea (d) Nitro phosphate	
790.	Which is the correct formula of ammonium carbamate? [2010-173, 2009-96]	D
	(a) H ₂ NCONH ₂ (b) NH ₄ COONH ₄	
	(c) H ₂ NCOONH ₂ (d) NH ₂ COONH ₄	
791.	The conversion of carbonate to urea is: [2011-106 MEd]:	C
	(a) Slow and exothermic (b) Fast and exothermic	
	(c) Slow and endothermic (d) Fast and endothermic	

792. Which is not a raw material for the production of cement? A
 [2013-180 Eng]:
 (a) CoCO_3 (b) CaCO_3
 (c) $\text{CaSO}_4 \cdot 2\text{H}_2\text{O}$ (d) Clay
-
793. The formula $\text{CH}_3(\text{CH}_2)_{16}\text{COONa}^+$ represents a member of the B
 class of compound which are known as: [2010-72 MEd]:
 (a) Steroids (b) Soaps
 (c) Carbohydrates (d) Vitamins
-
794. Paper is biodegradable material. It produces gas whose emission is C
 environmentally objectionable. Which is that gas?
 (a) CO_2 (b) SO_2 (c) CH_4 (d) NO_2
-
795. In glass manufacturing process annealing is done for the prevention of: A
 2008-51 MEd]:
 (a) Air bubbles (b) Impurities (c) Strain (d) Shining
- . Which of the following polymers contain nitrogen?
 [2014-185 MEd]:
 (a) PVC (b) Terylene (c) Nylon (d) Teflon
-
796. In auto mobiles ethylene glycol is used to prevent: D
 [2016-119 Eng]:
 (a) Freezing of water in cold winter
 (b) Boiling of water in hot summer
 (c) Drying up radiator
 (d) Both (a) & (b)
-
797. The polymer which contain nitrogen is: [2016-168 Eng] D
 (a) Polyethene (b) Polyester
 (c) Teflon (d) Nylon
-
798. 25 The main components of lipstick are: [2016-152 MEd] D
 (a) Mixture of non-volatile oil and solid wax
 (b) Mixture of volatile oil and wax
 (c) Fats and wax (d) Fates, oil and wax
-
799. Nylon (6,6) Six carbon atom in each monomer is the example of: 2014- C
 Eng
 A .Addition polymers B.Substitution polymers
 C. Condensation polymers D.Condensation monomers

CHAPTER-23: ENVIRONMENTAL CHEMISTRY

800. If CO_2 level increase from the normal level, what will happen? 2017- B
 Med
 A. Decrease in sea level B. Increase in sea level
 C. Longer winter season D. Daytime will increase
-
801. Catalytic converter reduces the emission of ; 2017-Med D
 A) Unburnt hydrocarbons B) CO
 C) NO D) All of the above
-
802. What is the colour of oxidizing smog? 2017-Eng A
 A. Reddish brownish grey B. Bluish brownish grey
 C. Brownish grey D. Yellow
-
803. Which one of the following terms is not related to pollution? 2018-Eng D
 A) Noise B) Air
 C)Radiation D)None of the above.
-
804. Which has the lowest temperature? [2013-185 MEd] C
 (a) Troposphere (b) Stratosphere
 (c) Mesosphere (d) Thermosphere

805. Rain water becomes acidic, when the pH-value of rain water becomes. C
[2013-21 MEd]:
(a) Greater than 6 (b) Greater than 6.5
(c) Less than 5.6 (d) Less than 5
-
806. In lower atmosphere, ozone has adverse effects due to its role in the formation of: [2013-114 Eng]: D
(a) CO₂ (b) NO₂
(c) Fog (d) Photochemical smog
-
807. What is the most important source of water pollution in Pakistan. A
[2011-196MEd]
(a) industries (b) transportation
(c) mining industry (d) agricultural and municipal wastage
-
808. Commonly used coagulant used for the purification of water is: C
[2012-153 MEd]:
(a) Ca (NO₃)₂ (b) MgCl₂
(c) Al₂ (SO₄)₃ (d) Ca (OH)₂
-
809. Drinking water should be odorless, tasteless and free from turbidity and its pH should range between: [2013-22 MEd]: B
(a) 6.0 to 7.0 (b) 7.0 to 8.5
(c) 4.5 to 6.0 (d) 8.5 to 9.0
-
810. Out of the following which treatment is mostly used to kill the disease causing bacteria and other pathogens in water? [2013-43 Eng]: C
(a) ozonation (b) UV irradiation
(c) chlorination (d) boiling
-
811. Which metal's presence in fish was responsible for the Minamata disease in Japan? [2012-79 Eng]: C
(a) Lead (b) Copper
(c) Mercury (d) Cadmium
-
812. Thermal processing of industrial waste material aims at: [2013-82 MEd]: C
(a) Burning of waste material in pits
(b) Converting the solid waste into useful products by thermal treatment.
(c) Energy recovery from organic matter prior to its final disposal
(d) Size reduction and compaction by thermal process
-
813. Hydrolysis of Al₄C₃ gives: [2010-91 MEd]: A
(a) CH₄ (b) C₂H₆
(c) C₃H₄ (d) C₄H₂₀
-
814. When the nitrates of Na, Li, Ca and Sr were heated strongly in separate containers, all of them gave reddish brown colour EXCEPT the nitrate of: [2009-158 MEd]: A
(a) Na (b) Ca
(c) Sr (d) Li
-
815. Aspirin is produced by heating salicylic acid with: [2012-53 Eng]: D
(a) Phenol in the presence of Sulphuric acid.
(b) Dinitro anhydride in the presence of phosphoric acid
(c) Methyl alcohol in the presence of sulphuric acid.
(d) Acetic anhydride in the presence of sulphuric acid
-
816. Acids are classified as monoprotic or polyprotic which of the following is a polyprotic acid? [2010-112 MEd] d
(a) CH₃CO₂H(aq) (b) HOCl (aq)
(c) HCHO₂ (d) H₂CO₃
-
817. Water is said to be permanently hard when it contains: [2011-143 MEd]: D
(a) carbonates of Ca²⁺ and Mg²⁺ ions
(b) Bicarbonates of Ca²⁺ and Mg²⁺ ions

- (c) sulphates of Na^+ and Mg^{2+} ions
 (d) chlorides of Ca^{2+} and Mg^{2+} ions

818.	Acetic anhydride is obtained with acetyl chloride in the reaction with; 2007-81 MEd]:	C
	(a) P_2O_5 (b) H_2SO_3 (c) CH_3COONa (e) CH_3COOH	
819.	An organic compound after fusion with sodium gives white precipitate when concentrated nitric acid and then silver nitrate solution was added to the filtrate. The compound is likely to be: [2011-123 MEd]:	D
	(a) $\text{CH}_3\text{CH}_2\text{CHO}$ (b) $\text{CH}_3\text{CH}_2\text{CH}_2\text{OH}$ (c) $\text{CH}_3\text{CH}_2\text{COOH}$ (d) $\text{CH}_3\text{CH}_2\text{CH}_2\text{Br}$	
820.	Warmer water at 4°C is: 2008-68 MEd]:	D
	(a) Lighter (b) Highest (c) Heavier (d) Heaviest	
821.	The silky finish of mercerized cotton is obtained by treating cotton with a solution of: 2008-150 MEd]:	A
	(a) NaOH (b) NaHCO_3 (c) Na_2CO_3 (d) $\text{Na}_2\text{CO}_3 \cdot 2\text{H}_2\text{O}$	
822.	When treated with ammonical cuprous chloride, which of the following forms copper derivatives? 2008-92 MEd]:	C
	(a) C_2H_6 (b) C_2H_4 (c) C_2H_2 (d) C_6H_6	
823.	The major sources responsible for the presence of NO , N_2O , NO_2 in the atmosphere is / are: [2014-192 MEd]:	D
	(a) Fertilizers (b) Biological decay of deadly organism (c) Fossil fuel combustion (d) All of these	
824.	Which statement is correct for three way catalytic converter: [2016-132 MEd]	D
	(a) Reduces emission of unburnt HC's (b) Reduces pollutants (c) Oxidize pollutant like CO (d) All of the above	

CHAPTER-24: ANALYTICAL CHEMISTRY

825.	Choose the correct arrangement of the various regions of the electromagnetic spectrum in terms of wave length 2017-Med	C
	A. IR > UV Visible > Microwave > Radio wave B. Microwave > IR > Visible > UV > Radio C) Radio wave > Microwave > IR > Visible > UV D) Visible > IR > UV > Microwave > Radio	
826.	Which electronic transition is associated with propanol by absorbing uv/visible radiation? 2018-Eng	C
	A) $n \rightarrow \sigma^*$ B) $n \rightarrow \pi^*$ C) $n \rightarrow \pi$ D) $\sigma \rightarrow \sigma^*$	
827.	The nuclei you think is invisible in NMR spectroscopy is: 2018-Med	A
	A) N^{14} B) P^{31}	

C) C^{35} D) C^{13}

828. The empirical formula of the compound was found to be CH_2O . If the molar mass of the compound is 150g/mol. The molecular formula of the compound is: 2018-Med **D**
 A) $C_6H_{12}O_6$ B) $C_4H_8O_2$
 C) $C_5H_{10}O_4$ D) $C_5H_{10}O_5$
-
829. Molar extinction coefficient (ϵ) a constant in Beer-Lambert law is the characteristics of the: [2015-25 MED] **A**
 A) Solute B) Solvent
 C) concentration D) All of the above
-
830. Which region of electromagnetic spectrum is involved in nuclear magnetic resonance (NMR spectroscopy)? [2015-64 MED] **C**
 A) Micro wave B) Radio wave
 C) Infrared region D) X-rays
-
831. The electronic transition that is involved in the visible region is: [2015-104 MED] **B**
 A) $\sigma - \sigma$ B) $d - d$
 C) $\pi - \pi$ D) $\pi - \sigma$
-
832. Choose the correct Statement: [2014-105 MED] **A**
 (a) The most direct and accurate method for determining atomic masses uses mass spectroscopy.
 (b) The indirect but accurate method for determining molecular masses uses mass spectroscopy.
 (c) Collision between the electrons and the atoms produces negative ions by absorption of electrons by atoms or molecules.
 (d) The first application of the mass spectroscopy was the demonstration to detect various isotopes of Argon.
-
833. A sample containing aluminum weighing 10.0g yielded 2.0g of aluminum sulphide. What is the percentage of aluminum (atomic mass = 27.0) in the sample? Sulphur (atomic mass = 32.0) [2011-153 MED] **B**
- (a) $\frac{2.0 \times 100}{10.0}$

(c) $\frac{2.0}{10.0} \times \frac{27}{1500} \times 100$

(b) $\frac{2.0}{10} \times \frac{2 \times 27}{150} \times 100$

(d) $\frac{2.0}{10.0} \times \frac{150}{3 \times 27} \times 100$
- %age of an Element =**

$$\frac{\text{Given Mass of Al} \times \text{At. Mass}}{\text{Given Mass of organic Compound} \times \frac{\text{\# of atoms} \times \text{M. Mass of Al}}{\text{M. Mass of organic Compound}}} \times 100$$

$$= \frac{2.0}{10.0} \times \frac{2 \times 27}{150} \times 100$$
-
834. Natural chlorine occurs as a mixture of isotopes if a mixture contains 75% Cl^{35} and 25% Cl^{37} what will be its correct atomic weight? [2010-58 MED] **A**
- (a) 35.50
 (b) 34.50
 (c) 72.00
 (d) 70.00

Amount of $Cl^{35} = \frac{75}{100} = 0.75$
 Amount of $Cl^{37} = \frac{25}{100} = 0.25$
 Average atomic weight =
 (Amount) (At. Mass of 1st Isotope) + (Amount) (At mass of 2nd Isotope)
 = (0.75) (35) + (0.25) (37) =
 26.25 + 9.25 = **35.5**
-
835. The atoms of an element having same atomic number but different mass number are called. [2010-102 Eng]: **B**
 (a) Isotones (b) Isotopes
 (c) Isobars (d) Isomers
-
836. Benzene molecule have six carbon atoms and six hydrogen atoms the NMR spectrum of benzene will show: [2016-138 Eng] **D**

- (a) 12-peaks (b) 6-peaks
(c) 3-peaks (d) Only a single peak
-
837. The functional group region in infra-red spectrum lies between: **[2016-30 MEd]** **C**
(a) $500 - 1300\text{cm}^{-1}$ (b) $600 - 1500\text{cm}^{-1}$
(c) $1500 - 4000\text{cm}^{-1}$ (d) $2500 - 3500\text{cm}^{-1}$
-
838. Chemical shift in NMR spectroscopy is expressed as delta (δ) or tau (τ) scale. Choose the correct relationship between δ and τ : **[2016-99 MEd]** **D**
(a) $\delta = 10 - \tau$ (b) $\delta = 10 + \tau$
(c) $\tau = \delta - 10$ (d) $\tau = 10 - \delta$
-
839. The water for **[MEd]** in the combustion analysis is usually absorbed by: **[2016-113 MEd]** **B**
(a) $\text{Mg}(\text{NO}_3)_2$ (b) $\text{Mg}(\text{ClO}_4)_2$
(c) $\text{Mg}(\text{OH})_2$ (d) $\text{Mg}(\text{ClO}_2)_2$
-
840. The infrared spectra commonly referred to as IR spectra is usually expressed as: **[2016-131 MEd]** **A**
(a) Wave length (b) Wave number
(c) Frequency (d) All of the above
-
841. The electronic transition that is involved in the visible region is: **[2016-144 MEd]** **B**
(a) $\sigma - \sigma$ (b) $d - d$
(c) $\pi - \pi$ (d) $\pi - \sigma$
-
842. Tetramethylsilane (TMS) is added to the compound as standard while carrying out its NMR spectra the TMS is a: **[2016-09 Eng]** **C**
(a) Nonvolatile compound
(b) Less volatile compound
(c) **Highly volatile compound**
(d) Highly reactive compound
-
843. 15. 100% transmission in IR spectroscopy means: **[2015-145 MEd]** **A**
A) No absorption B) 50% absorption
C) 75% absorption D) 100% absorption

ETEA MEDICAL 2019 BIOLOGY PORTION

1. The genome of influenza virus is made up of a) single stranded RNA b) double stranded RNA c) single strand DNA d) double stranded RNA ans; a	A	ans; a	
2. Galantamine hydrobromide is a compound derived from a) cannabis b) Coca c) english yew d) daffodil ans; d	D	9. Purkinji fibers are connected with the impulse conducting system of: a) heart b) brain c) skin d) nephron ans; a reason ; these fibres are present in the heart and conduct impulse.	A
3. Mark the correct match a) haemophilia –blood cancer b) SA node – pacemaker c) ECG-Brain d) alpha cell- insulin ans; b	B	10. The alveoli represent total surface area of A) 10-30 m b) 30-60 m c) 70-90 m d) 90-110 m ans; c	C
4. Cells which kills cells that display foreign motifs on their surface are; a) platelets b) cytotoxic t-cells c) antigens d) red blood cells ans; b	B	11. Some marine fishes possess salt excreting organs known as; a) thyroid gland b) pituitary gland c) adrenal gland d) rectal gland ans; d reason ; rectal gland secretes salts in fishes.	D
5. Chitin is a: a) lipoprotein b) polysaccharides c) glycoprotein d) phospholipids ans: b	B	12. Tetanus is infection of a) respiratory system b) nervous system c) circulatory system d) bones and muscles ans; b reason ; tetanus is infection of nervous system and symptoms appear in joints and muscles.	B
6. Organization of photosynthetic pigment into clusters is ; a) photosynthesis b) photosystem c) photosynthetic cluster arrangements d) calvin system ans; b	B	13. _____ regulate the body temperature? a) hypothalamus b) thalamus c) hippocampus d) amygdala	A
7. Amphibians are poikilotherms, therefore they use to hibernate in a) winter b) summer c) autumn d) spring ans; a	A	14. A man had to face interview, but during his first five minutes before the interview he experiences sweating, increase heart rate and respiration, which hormone is responsible for his restlessness a) adrenocorticotrophic hormone b) insulin and glucagon c) epinephrine and norepinephrine d) aldosterone ans; c reason; epinephrine and norepinephrine control stress conditions	C
8. All of the following are macronutrient except a) Cu ions b) Ca ions c) Mg ions d) K ions	A	15. Hypothalamus connected to pituitary gland via; a) nerves b) infundibulum	B

c) blood d) no connection ans; b reason ; hypothalamus connect to pituitary gland through infundibulum		
16. 2 nd meiotic division in oocyte is completed; a) when oocyte is fertilized by sperm b) when ovum is discharged from ovary c) just before fertilization d) before the onset of menstruation	A	
17. A pure breeding tall plant was crossed to dwarf plant. What would be the probability of "T genotype in F2? a) 0 b) 0.25 c) 0.5 d) 0.75	C	
18. The number of human spinal nerves is a) 60 b) 62 c) 64 d) 66	B	
19. Diphtheria vaccines is an example of a) Inactivated vaccine b) toxoid vaccine c) subunit vaccine d) live, attenuated vaccine.	B	
20. Which one of the following items gives its correct total number? a) Cervical vertebrae-7 b) floating ribs in human-3 c) auditory ossicles - 8 d) cranium bones -4	A	
21. find mismatch a) thyroid gland-Ty and T b) parathyroid gland- calcitonin c) pancreas-insulin d) Gonads-Testes and ovaries	B	
22. The simplest form of learning is a) Imprinting b) insight learning c) Latent learning d) habituation	D	
23. To the end of first trimesters the embryo can now technically describe as a a) Zygote b) infant c) toddler d) fetus	D	
24. How many pairs of homologous chromosomes are present in Pisum sativum ? a) Seven pairs b) eight pairs c) nine pairs d) ten pairs	A	
25. 61. The percentage of fresh water on earth is a) 1% b) 3% c) 5% d) 7%	B	
26. Recombinants contains DNA from a) 2 different sources b) single source c) 2 same sources d) 3 same sources	A	
27. The inner surface of a kidney has a deep notch called a) Renal pelvis b) Hilus c) medulla d) Pyramid	B	
28. _____ is considered as chief structural and functional unit of nervous system. a) Cell b) neuron c) nephron d) brain	B	
29. The bacteriophage replicates only inside the a) Animal cell b) bacterial cell c) fungal cell d) both a and b	B	
30. _____ is stored in animal cells a) Starch b) cellulose c) sucrose d) glycogen	D	
31. A bacterium which has a group of two or more flagella inserted at one pole of the cell a) Monotrichous b) peritrichous c) lophotrichous d) amphitrichous	C	
32. The gametophyte of Lycopside is mainly a) Aerial b) partial aerial and partially underground c) underground d) Photosynthetic	D	
33. Opossum and koala bear belong to sub class a) Prototheria b) cutheria c) metatheria d) monotremata	C	
34. The form of immunity which inherit from mother a) Active immunity b) passive immunity c) acquired immunity d) innate immunity	D	
35. The least toxic excretory product is a) Ammonia b) urea c) uric acid d) fatty acid	C	
36. Chemically hormones are a) Carbohydrates b) proteins c) Steroids d) both b and c	D	
37. DNA polymerase III works always in a) 5'-2' direction b) 5'-3' direction c) 3'-5' direction d) 2'-5' direction	B	
38. The biogas plant is tank which is a) 5-10 feet deep b) 10-15 feet deep c) 15-20 feet deep d) 20-25 feet deep	B	

39. Which wavelengths are mainly absorbed by chlorophyll? a) Violet, blue and red b) green and blue c) Violet and orange d) red and indigo	A	50. the possible reason (s) for cyanosis one of the congenital heart disease is a) formation of carboxy hemoglobin b) the high concentration of oxyhemoglobin c) low level of CO d) low level of hemoglobin	A
40. For hepatitis B the incubation period is between a) 4 and 20 weeks b) 6 and 20 weeks c) 2-26 weeks d) 2-6 weeks	A	51. The deficiency of which micronutrient cause goiter formation? a) Iron b) zinc c) iodine d) sodium	C
41. Sulphur bacteria belongs to sub group of bacteria called a) Beta-proteo bacteria b) alpha proteobacteria c) Gamma proteo bacteria d) delta proteo bacteria	C	52. Phosphatases belong to which group of the following? a) Lyases b) ligases c) hydrolases d) none of the above.	C
42. Nuclear mitosis occurs in a) Plants b) animals c) fungi d) Monera	C	53. The ribosomes responsible for protein synthesis are present in the cell a) Floating in the cytosol b) Localized in the nucleus c) Bound to rough endoplasmic reticulum d) Both a and	D
43. Excess glucose is converted in the liver to glycogen in response to the hormone a) Glucagon b) insulin c) Bile d) both and b	B	54. Enzyme need a primer for the initiation of its function a) RNA polymerase b) DNA polymerase c) Primase d) Ligase	B
44. During muscles relaxation the calcium ions are a) Released from sarcoplasmic reticulum into Sarcoplasm b) Forced back from sarcoplasm to sarcoplasmic reticulum c) Further forced from sarcoplasmic reticulum into sarcoplasm d) Neither released more nor forced back but remain constant	B	55. The following histone proteins form a nucleosome complex except a) H1 b) H2A c) H2B d) H3	A
45. In male luteinizing hormone also known as a) ACTH b) CSH c) TRF d) MSH	B	56. The bond that is formed between two monosaccharide units is called a) ionic bond b) hydrogen bond c) peptide bond d) Glycosidic bond	D
46. Particular amino acid and RNA molecule binds together by the action of an enzyme named a) tRNA synthetase b) amino tRNA synthetase c) tRNA ligase d) aminoacyl tRNA synthetase	D	57. The optimum pH of enzyme urease is a) 7.8-8.7 b) 7.0 c) 4.5 d) 80	B
47. lipid bilayer makes the membrane differently permeable barrier that allows the transport of a) ionic materials b) polar materials c) non-polar materials d) Glycoproteins	C	58. Which statement about chlorophyll is not true? a) It contains terminal carbonyl group b) It contains phyto tail c) It contain porphyrin ring d) It contains magnesium	A
48. the following are sexual reproduction methods in bacteria except a) transformation b) transduction c) binary fission d) conjugation	C	59. In humans the disease symptoms develop during the a) Log phase b) lag phase c) growth phase d) decline phase	A
49. lichen is the symbiotic association of a fungus with a) bacteria b) algae c) other fungus d) animals	B	60. Independent gametophyte and sporophyte are found in a) Selaginella b) Polytrichum c) Ectocarpus d) liverworts	A
		61. Tmesipteris is an example of a) Horsetail b) club mosses c) psilopsida d) Pteropsida	C

62. The larva formed during the life cycle of Annelida is a) Glochidium larva b) Bipinnaria larva c) trochophore larva d) tornaria larva	C	75. Functionally____ pairs of cranial nerves are sensory in nature and____ pairs are mixed in nature and ____ are motor in nature. a) 3,4 and 5 b) 4,5 and 3 c) 3,5 and 4 d) 4,3 and 5	C
63. Ebners gland on the dorsal surface of the tongue secrete an enzyme a) Amylase b) Ptyalin c) Lingual lipase d) both a and b	C	76. DNA fingerprinting refer to a) Techniques used for identification of finger prints of individuals b) Molecular analysis of profiles of DNA samples c) Analysis of DNA samples using imprinting devices d) Both a and	B
64. Antibodies consists of polypeptide chains a) 2 b)4 e) 6 d) 8	B	77. Oleic acid is a fatty acid with 18 carbon atoms. It breaks down into 9 acetyl groups. It is estimated that these nine acetyl groups would generate _____ATP molecules a) 81 b) 98 c) 101 d) 108	D
65. Platyhelminthes are a) Bilaterally symmetrical and diploblastic b) Bilaterally symmetrical and triploblastic c) radially symmetrical and triploblastic d) radially symmetrical and diploblastic	B	78. Horsetails are included in class a) Pteropsida b) Lycopsida c) Psilopsida d) Sphenopsida	D
66. the scientific name of fresh water mussel is a) mytilus edulis b) loligo pealei c) anodonta grandis d) anodonta bairdi	C	79. Which one of the following bone is the only moveable portion of the skull? a) Maxilla b) frontal bone c) Mandible d) Zygomatic	C
67. potamogeton is an example of_____. a) xerophytes b) mesophytes c) hydrophytes d) halophytes	C	80. Progesterone is secreted by a) Corpus Luteum b) Ripening follicles c) Uterine epithelium d) fertilized egg	A
68. _____stimulates fruits ripening. a) Cytokinin b) abscic acid c) ethylene d) auxin	C		
69. A condition in which abnormally large volume of urine is produced is a) Polydipsia b) polyuria c) polyphagia d) polyanypsida	B		
70. The bulbourethral glands produce a) Acidic fluid b) alkaline fluid c) semen d) mucus	D		
71. HIV destroys a type of defense cell in the body called a helper lymphocyte. a) TD ₄ b) T ₄ c) C ₄ d) CD ₄	D		
72. Acetabularia crenulata has _____shaped cap a) Irregular b) umbrella c) regular d) disc	A		
73. The safranin stain is suitable for a) Fungal hyphae b) Cytoplasm/cellulose c) blood cells d) Lignin	D		
74. In the human skull the unpaired bones are a) Frontal, occipital, ethmoid and sphenoid b) Frontal, ethmoid, sphenoid and zygomatic c) Ethmoid, sphenoid zygomatic and frontal d) Temporal, Sphenoid, frontal and Ethmoid	A		

CHAPTER-1: CELL STRUCTURES & FUNCTIONS

81. Proper arrangement of layers in plant cell from inside to outwards is: [2009]
- (a) Primary wall – Secondary wall – middle lamella
 (b) Secondary wall – Primary wall – middle lamella
 (c) Primary wall – Middle lamella – Secondary wall
 (d) Secondary wall – Middle lamella – Primary wall

Answer: Secondary wall – Primary wall –

Middle lamella

82. Polysaccharide cellulose is the building material of: [2013]

- A) Primary cell-wall
 B) Secondary cell-wall
 C) Middle lamella
 D) Plasma membrane

Answer primary cell wall

Extra Points:-

- primary wall → poly saccharide cellulose
- Middle lamella => Pectin (Ca Pectate)
- Secondary wall => Lignin + cellulose

83. The middle lamella of cell-wall is composed of: [2011]

- (a) Cellulose (b) pectin
 (c) Lignin (d) Murein

Answer: pectin

Extra Points:-

- primary wall → poly saccharide cellulose
- Middle lamella => Pectin (Ca Pectate)
- Secondary wall => Lignin + cellulose

84. A special protein carrier in plasma membrane is: [2014]

- (a) Catalase (b) Lipase
 (c) Permease (d) Arginase

Answer: permease

Extra Points:-

Permease regulate diffusion, osmosis & active transport of ionic materials.

85. A botanist who proposed the cell-theory was: [2012]

- (a) Schleiden (b) Schwann
 (c) Robert Hook (d) Robert Brown

Answer: Schleiden

86. Nucleus was discovered by: [2013]

- (a) Waldyer (b) T.H. Morgan
 (c) Robert Brown (d) Kohler

Answer Robert Brown

87. All types of plastids are produced from: [2010]

- (a) Chloroplasts
 (b) Proplastids
 (c) Chromoplasts
 (d) Leucoplasts

Answer: proplast

88. Its membranes are the sites where sunlight energy is trapped and where all is formed refers to; [2005]

- (a) Chloroplast (b) Leucoplast
 (c) Chromoplast (d) Cytosol

Answer: chloroplast

89. Potatoe plastids, which store starch, are known as: [2013]

- (a) Paramylum (b) Amyloplasts
 (c) Leucoplasts (d) glycoplasts

Answer: amyloplast

Extra Points: • Chloroplast are present in plant cell & are self replicating like Mitochondria

• Chromoplast impart colour to the plant other than green & present in petals of flower & in ripened fruits & help in pollination & dispersal of seeds.

• Leucoplast are colourless & are mostly found in underground parts of the plant & store food.

90. Microvillae are also called: [2013]

- (a) Leaf veins (b) Cristae
 (c) Capillaries (d) Leaf midribs

Answer: cristae

Extra Points:- • Cisternae are found in Endoplasmic Reticulum & Golgi apparatus (Dictyosomes).

• Cristae are found in Mitochondria.

91. Smooth endoplasmic reticulum makes: [2012]

- (a) Enzymes (b) Protein
 (c) Sugar (d) Lipids

Answer: lipids

92. A cell fails to detoxify the waste substances produced in it because it does not possess enough: [2006]

- (a) Lysosomes
 (b) Ribosome
 (c) Rough endoplasmic reticulum
 (d) smooth endoplasmic reticulum

Answer: smooth endoplasmic reticulum

Extra point: RER → proteins

SER → lipids + detoxification

93. The rough endoplasmic reticulum is involved in the synthesis of; [2005]

- (a) Proteins
 (b) Carbohydrates
 (c) Phospholipids
 (d) Terpenoids

Answer: proteins

Extra point: RER → proteins

SER → lipids+ detoxificatio

94. Anthocyanins are various types of colourful pigments present in the: [2011]

- (a) chloroplasts
- (b) chromoplasts
- (c) leucoplasts
- (d) vacuoles

Answer: vacuoles

95. Plant cells synthesize sugar in the: [2011]

- (a) Thylakoid (b) grana
- (c) stroma (d) crista

Answer: stroma

96. The attachment of two sub units of ribosomes on a single mRNA is controlled by: [2009-2010]

- a. Mg⁺ ions (b) Na⁻ ions
- c. Proteins (d) Ribosomal RNA

Answer Mg⁺ ions

97. Fatty acids are converted into carbohydrates by; [2010]

- a. Glyoxisome (b) Bile juice
- c. Pancreatic juice (d) Lysosomes

Answer Glyoxisome

98. The attachment of two sub-units of ribosome along mRNA is controlled? [2009]

- (a) Sodium ions (b) Calcium ions
- (c) Potassium ions (d) Magnesium ions

Answer magnesium ions

Ext → Two subunits of ribosomes are attached

by

Mg⁺⁺

→Chlorophyll contain Mg⁺⁺

→Haemoglobin contains Fe⁺⁺

99. The size of ribosome in prokaryotic cell is: [2009]

- a. 40s (b) 60 s
- c. 70s (d) 80 s

Answer:70S

Extra points;

Ribosomes	Smaller unit	Larger unit	Total size
Prokaryotic	30 S	50 S	70 S
Eukaryotic	40 S	60 S	80 S

100. Which one of the following is found in plant cells only? [2006]

- a. Peroxisome
- b. Lysosome
- c. Glyoxisome
- d. Ribosome

answer: peroxisome

101. The growth and reproduction of eukaryotic cell is dependent upon its; [2005]

- (a) Cytoplasm
- (b) Nucleus

(c) Vacuoles

(d) Nuclear pores

Answer:nucleus

102. The chloroplast size is about.

[2015]

- A) 1-2 μm (B) 2-4 μm
- C) 4-6 μm (D) 6-8 μm

Answer: 4-6 μm

Extra points:

Organelle	Diameter
Chloroplasts	4 -6 μ m
Nucleus	10 μ m
Ribosomes	20 n m

103. 80-S ribosome is formed by the combination of: [2015]

- A) 30S and 40S
- B) 70S and 10S
- C) 50S and 30S
- D) 60S and 40S

Answer 60S and 40S

Ext

Ribosomes	Smaller unit	Larger unit	Total size
Prokaryotic	30 S	50 S	70 S
Eukaryotic	40 S	60 S	80 S

CHAPTER-2: BIOLOGICAL MOLECULES

104. Waxes are the esters of fatty acids with high molecular weight. [2015]

- a Monohydroxy alcohols
- b Dihydroxy alcohol
- c Trihydroxy alcohol
- d All of the above

Answer: monohydroxy alcohols

105. Oligosaccharides class of carbohydrates contain monosaccharide's of about: [2015]

- A) 2 to 8 units
- B) 2 to 9 units
- C) 2 to 10 units
- D) 2 to 11 units

Answer 2-10 units

106. Sucrose on hydrolysis yield: [2015]

- a) Glucose
- B) Glucose and fructose
- C) Glucose and maltose
- D) Maltose and fructose

Answer glucose and fructose

Ext

Oligosaccharides	Components
Maltose	Glucose + Glucose
Lactose	Glucose + Galactose
Sucrose	Glucose + Fructose

107. Lactose, maltose and sucrose are the important; [2005]

- (a) Polysaccharides
- (b) Disaccharides
- (c) Monosaccharides
- (d) Oligosaccharides

Answer: disaccharides

Ext Maltose, lactose and sucrose are Disaccharides

108. Amount of DNA in bacterial cell is: [2013]

- (a) 1%
- (b) 2%
- (c) 3%
- (d) 4%

Answer 1%

109. What is %age of carbohydrates in the mammalian Cell per total cell weight; [2015]

- (a) 2
- (b) 4
- (c) 8
- (d) 18

Answer: 4

Extra Points:

Contents	Bacterial Cell	Mammalian Cell
Water	70	70
Proteins	15	18

Carbohydrates	3	4
Lipids	2	3
DNA	1	0.25
RNA	6	1.1
Enzymes, Hormones	2	2
Inorganic Ions	1	1

110. Sucrose is considered as:

[2012-2014]

- (a) Monosaccharide
- (b) Disaccharides
- (c) Polysaccharides
- (d) None of these

Answer: disaccharides

Ext Maltose, lactose and sucrose are Disaccharides

111. High molecular mass compound was hydrolyzed the product was analyzed and found to be amino acid. The compound is: [2014]

- (a) Protein
- (b) Carbohydrate

- (c) Lipid
- (d) Vitamins

Answer: proteins

112. Keratinized Epithelium is found in the:

[2013]

- (a) Hair
- (b) Skin
- (c) Bone
- (d) Muscle

Answer hair

Extra Points: • Keratin is present in hair, fur, nails, claws, hooves and outer skin.

• Collagen is present in skin tendons, ligaments, bones and the cornea of the eye.

• Both Keratin & Collagen are fibrous proteins.

113. A single molecule of haemoglobin is composed of: [2013]

- (a) Three polypeptide chains
- (b) Four polypeptide chains
- (c) Five polypeptide chains
- (d) Six polypeptide chains

(Answer four polypeptide chain)

Extra Points:- • Myoglobin has one peptide chain and has tertiary structure.

• Insulin has two polypeptide chain and has primary structure.

• Haemoglobin has four peptide chain and has quaternary structure.

114. Conversion of excess glucose into fat is known as: [2012]

- (a) Glycolysis
- (b) Lipogenesis
- (c) Ketogenesis
- (d) Glycogenesis

Answer: lipogenesis

115. Sucrose sugar is considered as:

[2012]

- (a) Monosaccharide

- (b) Oligosacchides
(c) Polysaccharides
(d) All of the above

Answer oligosachharides

116. All of the following are polysaccharides except:
[2012]

- (a) Lactose (b) Cellulose
(c) Starch (d) Glucose

Answer glucose

117. All cell membranes are composed of:
[2010]

- (a) Proteins (b) Lipids
(c) Lipo protein (d) Cellulose

Answer: lipoprotein

118. All of the following are polysaccharides EXCEPT: [2010]

- (a) Cellulose
(b) Glycogen
(c) Starch
(d) Lactose

Answer: lactose

Ext Maltose, lactose and sucrose are Disaccharides

Polysaccharide	Found in
Starch	Plants
Glycogen	Animals
Cellulose	Plants
Chitin	Animals

119. All of the following structures are proteinous in nature except: [2009]

- (a) Hooves (b) Hemoglobin
(c) Enzymes (d) Steroids

Answer: steroids

120. All of the following are mono nucleotides EXCEPT: [2009]

- (a) A.M.P (b) A.T.P
(c) A.D.P. (d) F.A.D.

Answer. F.A.D

121. All of the following are carbohydrate EXCEPT: [2009]

- (a) Glycogen (b) Collagen
(c) Starch (d) Cellulose

Answer collagen

Ext

Fibrous proteins

Keratin (hair, nails and outer skin)

Myosin (in muscle cells)

Collagen (skin, ligaments, tendons and bones)

122. A coiled hemoglobin is called:
[2009]

- (a) Haemocyanine (b) Haemoprotein

- (c) Myoglobin (d) Haemorrhoids

Answer myoglobin

123. Peptide bond is formed between:
[2009]

- (a) Hydrogen groups of adjacent amino acids
(b) Functional group of the amino acids
(c) Carboxyl group and Amino group.
(d) Functional group & hydrogen group of adjacent amino acid.

Answer. Carboxyl group and Amino group.

124. The enormous diversity of protein molecules is mostly due to the diversity of ;
[2005]

- (a) Amino groups on the amino acids
(b) R groups on the amino acids
(c) Peptide bonds
(d) Amino acids sequences within protein molecules

Answer R group of the amino acid

125. Which of the following base is not present in RNA; [2005]

- (a) Thymine (b) Adonine
(c) Guanine (d) Cytosine

Answer: thymine

126. Which of the following is composed of lipids?
[2011]

- (a) Some hormones
(b) Enzymes
(c) Skin tendons
(d) Insulin

Answer:some hormones

127. in saturated fatty acids more hydrogen are not accommodated because of [2017]

- a. presenc of single bonds between carbon atoms
b. presence of double bonds between two carbon atoms
c. presence of double bonds between carbon atoms
d. absence of bond between carbon atoms

answer: presence of single bonds between carbon atoms

CHAPTER-3: ENZYMES

128. All of the following are co-enzymes except:
[2015]

- a. NAD
b. FAD
c. NADP
d. ADP

Answer: ADP

129. The optimum PH of enzyme amylase is:
[2015]

- A) 4.5
B) 5.5
C) 6.1 – 6.8
D) 6.7 – 7

Answer

Ext

Enzyme	Optimum PH
Lipase (stomach)	4 – 5
Lipase (Castor oil)	4.7
Lipase (Pancreas)	8.0
Amylase (Malt)	4.6 – 5.2
Amylase (Pancreas)	6.7 – 7.0
Protease (Stomach)	1
Pepsin	1.5 – 1.6
Invertase	4.5
Catalase	7.0
Urease	7.0
Trypsin	7.8 – 8.7

130. Which of the following is an inactive enzyme without its cofactor? [2006]

- (a) Coenzyme
- (b) Apoenzyme
- (c) Holoenzyme
- (d) Denatured enzyme

Answer: apoenzymes

131. The enzymes functions are optimum at: [2014]

- (a) Specific Temperature
- (b) Specific PH
- (c) Specific co-enzyme
- (d) All the above

Answer: all of the above

132. Enzymes are basically: [2012]

- (a) Proteins
- (b) Carbohydrates
- (c) Hydrocarbons
- (d) None of the above

Answer:proteins

133. All of the following are characteristics of enzymes EXCEPT: [2009]

- (a) The increase the activation energy
- (b) They are specific in action
- (c) They possess specific active site
- (d) They possess the dimensional shapes

Answer:.. They increase the activation energy

CHAPTER-04: BIOENERGETICS

134. Carotenoids pigments are: [2015]

- A) Yellow, Red, Green, Blue
- B) Orange, Yellow, Red, Brown
- C) Green, Yellow, Blue, Brown
- D) Blue, Red, Green, Yellow

Answer:orange,yellow, red, brown

135. Excited electrons from photo system-II are captured by: [2015]

- A) PC
- B) PQ

C) Cytochromb-b

D) Pentamerous

Answer: PQ

136. 6-NADH can yield: [2015]

- A) 12-ATP
- B) 38-ATP
- C) 18-ATP
- D) 36-ATP

Answer: 18 ATP

137. The product of light reaction travel from: [2015]

- A) Cristae to stroma
- B) Stroma to grana
- C) Grana to cristae
- D) Grana to stroma

Answer: grana to stroma

138. Photo-respiration can generate: [2015]

- A) 4-ATP
- B) 36-ATP
- C) 32-ATP
- D) No-ATP

Answer: no-ATP

139. Dark reaction gets completed by the regeneration of: [2015]

- A) PGA
- B) PGAL
- C) RUBP
- D) RUBISCO

Answer:RUBP

140. Which is least important in photosynthesis; [2005]

- (a) Red light
- (b) Blue light
- (c) Sunlight
- (d) Green light

Answer:green light

141. The product of light dependent reactions are: [2014]

- (a) RUBP + ATP
- (b) RUBP + PGAL
- (c) NADPH + ATP
- (d) PGAL + ATP

Answer: NADPH + ATP

142. Chemiosmosis occurs in the: [2014]

- (a) Grana
- (b) Stroma
- (c) Thalakoids
- (d) InterGrana

Answer: thylakoids

143. Accessory pigments are: [2014]

- (a) Red-Yellwo-Green
- (b) Red-Orange-Blue
- (c) Orange-Blue-Green
- (d) Red-Orange-Yellow

Answer: red,orange,yellow, brown

144. Light absorbing pigments in photosystem first is: [2014]
 (a) P 600
 (b) P 680
 (c) P 700
 (d) P 760
Answer: P700
-
145. "Photo-phosphorylation" is: [2014]
 (a) ATP synthesis by food energy.
 (b) ATP synthesis by solar energy.
 (c) ATP synthesis by source of water.
 (d) ATP synthesis by source of NADH_2
Answer: ATP synthesis by solar energy
-
146. In chlorophyll-b, the porphyrine ring is attached to the: [2013]-[2011]
 (a) Methyl group
 (b) Carboxyl group
 (c) Aldehyde group
 (d) Hydroxyl group
Answer: aldehyde group
Ext Chlorophyll a has methyl group (CH_3) and formula of $\text{C}_{55}\text{H}_{72}\text{O}_5\text{N}_4\text{Mg}$
 Chlorophyll b has carbonyl group (CHO) and formula of $\text{C}_{55}\text{H}_{70}\text{O}_6\text{N}_4\text{Mg}$
-
147. The centre of porphyrine ring of haemoglobin is occupied by: [2013],[2010]
 (a) Magnesium (b) Sodium
 (c) Iron (d) Potassium
Answer: iron
Ext → Two subunits of ribosomes are attached by Mg^{++}
 → Chlorophyll contains Mg^{++}
 → Haemoglobin contains Fe^{++}
-
148. The pigments of chlorophyll a, b, and carotenoids are present in: [2013]
 (a) Stroma
 (b) Grana
 (c) Thylakoid membrane
 (d) Crista
Answer: thylakoid membrane
-
149. of mitochondria are the sites of: [2013]
 (a) Electron transport chains
 (b) Photophosphorylation
 (c) Krebs cycle
 (d) Glycolysis
Answer: electron transport chain
-
150. Stroma of chloroplasts carries the fixation of: [2013]
 (a) N_2 (b) O_2
 (c) CO_2 (d) NH_3
Answer: CO_2
-
151. Glycolysis completes with the net gain of: [2012]
 (a) 2 ATP (b) 3 ATP
 (c) 4 ATP (d) 32 ATP
Answer: 2 ATP
Ext ATPs produced in non-cyclic photophosphorylation are 4
 Net gain of ATP in glycolysis 2
 The number of ATP formed directly by a single Krebs cycle is 2
 Total ATP produced in respiration of glucose is 36
-
152. The number of ATP formed directly by a single Krebs cycle is: [2012]
 (a) One ATP
 (b) Two ATP
 (c) 32 ATP
 (d) 36 ATP
Answer: one ATP
Ext ATPs produced in non-cyclic photophosphorylation are 4
 Net gain of ATP in glycolysis 2
 The number of ATP formed by a single Krebs cycle is 1
 Total ATP produced in respiration of glucose is 36
-
153. Carotenoid contains: [2012]
 (a) Carotenes (b) Xanthophylls
 (c) Chlorophyll - C (d) Both A and B
Answer: both a and b
-
154. Stream of chloroplast carries the fixation of: [2011]
 (a) Nitrogen
 (b) Oxygen
 (c) Carbon monoxide
 (d) carbon dioxide
Answer: carbon dioxide
-
155. Redox action takes place during the process of: [2012]
 (a) Respiration (b) Photosynthesis
 (c) Growth (d) Both A and B
Answer: both a and b
-
156. Chlorophyll a and b chiefly absorb: [2012]
 (a) Violet & blue light
 (b) Orange light
 (c) Blue — red light
 (d) Red, orange light
Answer: blue → red light
-
157. In chlorophyll "a" The group attached to porphyrine ring is: [2011]
 (a) hydroxyl group
 (b) methyl group
 (c) carboxyl group
 (d) aldehyde group
Answer: methyl group
Ext Chlorophyll a has methyl group (CH_3) and formula of $\text{C}_{55}\text{H}_{72}\text{O}_5\text{N}_4\text{Mg}$

Chlorophyll b has carbonyl group(CHO) and formula of $C_{55}H_{70}O_6N_4Mg$

158. Chlorophyll is protected from intense light by: [2011]

- (a) plant hormones
- (b) carotenoids
- (c) plant-enzymes
- (d) water present in mesophyll tissue

Answer: carotenoids

159. During cellular respiration $NADH_2$ produces ; [2010]

- (a) 2 ATP
- (b) 3 ATP
- (c) 4 ATP
- (d) 5ATP

Answer: 3 ATP

160. The center of porphyrine in the head region of hemoglobin is occupied by; [2010]

- (a) Iron
- (b) Magnesium
- (c) Sodium
- (d) Potassium

Answer: 3 ATP

161. Which of the following is present in the centre of Porphyrine ring of chlorophyll? [2010]

- (a) Iron
- (b) Sodium
- (c) Potassium
- (d) Magnesium

Answer: magnesium

Ext → Two subunits of ribosomes are attached by Mg^{++}

→ Chlorophyll contain Mg^{++}

→ Haemoglobin contains Fe^{++}

162. Each molecule of $NADH_2$ entering the electron transport chain produces: [2009]

- (a) Four ATPs (b) Two ATPs
- (c) One ATPs (d) Three ATPs

Answer three ATPs

163. Which one of the following bond is broken first in glycolysis to release the energy? [2008]

- (a) glycosidic (b) Peptide
- (c) ester (d) none of the above

Answer: glycosidic

164. What happens to oxygen in the electron transfer chain in respiration? [2008],[2005]

- (a) It is released as gas
- (b) It forms
- (c) CO_2
- (d) It is used as an electron carrier

Answer: it is reduced to water

165. Calvin cycle takes place within: [2008]

- (a) stroma of chloroplasts

- (b) granum of the chloroplast
- (c) cytoplasm of the cell
- (d) Mitochondria

Answer: stoma of chloroplast

Extra Points: Calvin cycle is also called Dark reaction (C_3 cycle)

166. The step in glycolysis in which energy transfer is not involved is: [2006]

- (a) Glucose phosphate → fructose diphosphate
- (b) Fructose diphosphate → DAP
- (c) $PGAL \rightarrow PGAP$
- (d) $PGAP \rightarrow PGA$

Answer:) Fructose diphosphate → DAP

CHAPTER-5: A CELLULAR LIFE

167. The genome of influenza virus is made up of :

2019-Med

- a) single stranded RNA
- b) double stranded RNA
- c) single strand DNA
- d) double stranded RNA

ans: a

168. The genome of the most animals and higher plants is: [2014],[2005]

- (a) DNA
- (b) RNA
- (c) Both DNA and RNA
- (d) Either DNA or RNA

Answer: RNA

169. H.I.V contains: [2011]

- (a) two R.N.As
- (b) a single R.N.A
- (c) D.N.A and R.N.A
- (d) D.N.A

Answer: two RNAs

170. Phage-virus secretes an enzyme "lysozyme" form its: [2011]

- (a) tail region
- (b) head region
- (c) neck region
- (d) capsule region

Answer: tail region

171. The shape of polio virus is: [2010]

- (a) Polyhedral shape
- (b) Bad shape
- (c) Tadpole shape
- (d) Golf ball shape

(d) golf ball shape

172. HIV is also known as: [2010]

- (a) AIDS (b) HAV
- (c) HTLV (d) HBV

Answer: HTLV

173. Most favorite host cell of HIV – Virus is:

[2009]

- (a) Lymphocytes (b) RBC
(c) T – Cell (d) B – Cells

Answer T-cell

174. The enzyme “Reverse transcriptase” present in HIV – virus is:

[2009]

- (a) 50 molecules per virion
(b) 40 molecules per virion
(c) 30 molecules per virion
(d) 20 molecules per virion

Answer 30 molecules per virion

175. Phages viruses are usually abundant in the intestine of man and animals because:

[2008]

- (a) Abundant bacteria are present
(b) Abundant water is present
(c) Abundant nutrients are present
(d) They can only live at human

body temperature

Answer: abundant bacteria are present176. Genome of which of the following consists of single molecule of DNA? **[2006]**

- (a) HAV (b) HBV
(c) HCV (d) HIV

Answer: HBV177. The genetic material of plant viruses mostly is; **[2005]**

- (a) DNA
(b) RNA
(c) Both DNA and RNA
(d) Proteins

Answer: RNA178. identify in which one of the following the genetic information is catalyzed using reverse transcription **[2017]**

- a. protein → DNA
b. RNA → DNA
c. DNA → RNA
d. RNA proteins

answer: RNA → DNA179. which one is not opportunistic disease related to HIV infection **[2017]**

- a. destruction of body immune system
b. recurrent pneumonia
c. pulmonary tuberculosis
d. toxoplasmosis

answer: destruction of body immune system

- a) Ecological time
b) Population time
c) Growth time
d) Generation time

Answer: log phase

181. Most disease symptoms appear during.

[2015]

- A) Lag phase
B) Log phase
C) Decline phase
D) Generation time

Answer: log phase

182. Endotoxins are released only when bacteria;

[2015]

- A) Excrete
B) Reproduce
C) Decline phase
D) Stop phase

Answer: decline phase

183. Balantidium coli lives in the intestinal tract of:

[2015]

- A) Pigs and rats
B) Pigs and monkey's
C) Rats and dogs
D) Cats and sheep

Answer pigs and rats184. Rhizobium belong to sub group of bacteria called: **[2015]**

- A) Alpha-Protobacteria
B) Beta-Protobacteria
C) Gamma-Protobacteria
D) Delta-Protobacteria

Answer: alpha photobacteria185. Bacteria living in the gut, forms the association of: **[2015]**

- A) Mutualism
B) Peridation
C) Parasitism
D) Commensalism

Answer: mutualism186. The only human disease caused by VIROID is: **[2015]**

- A) Hepatitis A
B) Hepatitis B
C) Hepatitis C
D) Hepatitis D

Answer; hepatitis D187. Milk sugar is pasteurized by heating for 15 seconds at the temperature of: **[2014],[2005]**

- (a) 60 °C (b) 71 °C
(c) 50 °C (d) 80 °C

Answer; 71°C**Ext**

Process	Temperature	Time
Pasteurization	72 degree	15 sec

CHAPTER-6: PROKARYOTES180. The interval between two successive division of bacteria is called: **[2015]**

Ultra high temperature	140 degree	3 sec
Sterilization	170 degree	2 hour
Heating	100 degree	10 min

188. When the entire body of a bacterium is covered by flagella, such a bacterium is called:

[2013]

- (a) Atrichous (b) Lopho-trichous

- (c) Lampi trichous (d) Peri-trichous

Answer: peri-trichous

189. Pigeon odour is released from the water bloom of:

[2013]

- (a) Slime mold (b) Water mold
(c) Cyanobacteria (d) Algae ponds

Answer: cyanobacteria

190. Murein cell-wall is composed of:

[2014]

- (a) Sugar and amino acids
(b) Calcium pectate.
(c) Glycoprotein
(d) Peptidoglycan

Answer: sugar and amino acids

191. A cell-wall that is composed of sugar and amino acids is called:

[2013]

- A) Murein
B) Chitin
C) Lignin
D) Pectin

Answer: murein

192. Bacteria maintain their survival by the formation of:

[2013]

- (a) Hormogonia
(b) Akinetes
(c) Endospores
(d) Zygosporos

Answer: endospores

193. Which of the following diseases is NOT caused by bacteria?

[2011]

- (a) tetanus
(b) small pox
(c) tuberculosis
(d) diphtheria

Answer: small pox

194. Food is preserved in the form of glycogen by:

[2010]

- (a) Plants
(b) Animals
(c) Cyano bacteria
(d) Both B and C

Answer: both b and c

195. The simplest oxygen producing organisms are:

[2010]

- (a) Photosynthetic bacteria
(b) Autotrophic bacteria

- (c) Cyanobacteria
(d) Chlamydomonas

Answer: cyanobacteria

196. Salmonella typhosa is a;

[2010]

- (a) Coccus bacterium
(b) Bacillus bacterium
(c) Spirillum bacterium
(d) Nitrobacterium

Answer: bacillus bacteria

197. The pneumococcus strain used by Griffith in his experiments was;

[2006]

- (a) Lophotrichous
(b) Amphitrichous
(c) Atrichous
(d) Monotrichous

Answer: amphitrichous bacteria

198. All of the following are bacterial diseases except;

[2005]

- (a) Cholera
(b) Tuberculosis
(c) Typhoid
(d) Poliomyelitis

Answer: poliomyelitis

199. Milk is pasteurized by heating at;

[2005]

- (a) 100°C
(b) 100°C for 30 min
(c) 71°C for 15 min and 62°C for 32 min
(d) 71°C for 32 min and 62°C for 15 sec

Answer: 71°C for 15 min and 62°C for 32 min

200. In which part of the human body the bacteria are normally present in abundance;

[2005]

- (a) Salivary gland
(b) Stomach
(c) Intestine
(d) Liver

Answer: intestine

201. Bacteria reproduce asexually by;

[2005]

- (a) Mitosis (b) Meiosis (c) Conjugation (d) Fission

Answer: fission

CHAPTER-7: PROTISTA & FUNGI

202. "Foraminifers" helps to determine the,

[2015]

- A) Geological age
B) Ecological time
C) Physiological age

Answer : geological age

203. Basidiomycota is also called as

[2015]

- a) Club-mosses
b) Club-fungi
c) Sac-fungi

- d) Bread mold
Answer ; club fungi
-
204. Termites cut wood with the help of enzyme produced by: [2015]
A) Trichonella
B) Tripanosoma
C) Trichonymph
D) Trichina
Answer:C) Trichonymph
-
205. A protest that forms sea-weeds is: [2015]
A. Red algae
B. Brown algae
C. Green algae
D. Diatoms
Answer: B) Brown algae
-
206. Basidiocarp is formed in the: [2015]
A) Secondary mycelium
B) Primary mycellum
C) Tertiary mycelium
D) Pathogenic parasites
Answer:C) Tertiary mycelium
-
207. Best known "Apicomplex" is the: [2015]
A) Obligate parasites
B) Facultative parasites
C) Malarial parasites
A) D)Pathogenic parasites
Answer:C) Malarial parasites
-
208. All of the following belong to phylum Protista except: [2014]
(a) Protomycota (b) Gymnomycota
(c) Oomycota (d) Deutromycota
Answer: (d) Deutromycota
-
209. The cell wall of fungus like protista is composed of: [2014]
(a) Chitin (b) Cellulose
(c) Murein (d) Lignin
Answer: (b) Cellulose
-
210. Nuclear mitosis occurs in the kingdom of: [2012],[2011]
(a) Monera (b) Protista
(c) Plantae (d) Fungi
Answer: (d) Fungi
-
211. Entamoeba belongs Bto the phylum: [2011]-77
(a) Sporozoa (b) sarcodina
(c) mastigophora(d) microspora
Answer: (b) sarcodina
-
212. Carotenoid pigments are present in: [2010]
(a) Euglenophyta (b) Pyrrophyta
(c) Chrysophyta (d) Both A and B
Answer: (d) Both A and B
-
213. The malarial patient feels chill and fever when: [2010]
(a) Merozoites increase their population in RBC and burst open the RBC
(b) Sporozoites enter the blood stream

- (c) Sporozoites enter the liver cells.
(d) Merozoites come out the liver cell
Answer: (a) merozoites increase their population in RBC and burst open the RBC
-
214. When an anopheles of mosquito bites a healthy person it injects: [2008]
(a) Merozoites (b) Sporozooite
(c) Gametocytes (d) Oocyte
Answer: (b) Sporozooite
-
215. Plasmodium is found at different stages in man and mosquito. At which stage it can be seen in both the hosts? [2005]
(a) Ookinete (b) Male gamete
(c) Oocyst (d) Sporozoite
Answer: (d) Sporozoite
-
216. The gametophyte of Ulva is: [2005]
(a) Haploid (b) Diploid
(c) Triploid (d) Polyploidy
Answer: (b) Diploid
-
217. An Ascus develops: [2014]
(a) 2-Ascospores
(b) 4-Ascospores
(c) 6-Ascospores
(d) 8-Ascospores
Answer: (d) 8-Ascospores
-
218. Sea-fungi is related to: [2014]
(a) Zygomycota (b) Ascomycota
(c) Basidiomycota (d) Deutromycota
Answer: (b) Ascomycota
-
219. Black bread mold is: [2014]
(a) Rhizopus (b) Penicillium
(c) Mucor (d) Yeast
Answer: (a) Rhizopus
-
220. Cell-wall of gram positive bacteria is composed of: [2014]
(a) Glycolipids
(b) Glycoproteins
(c) Lipoproteins
(d) Peptidoglycan
Answer: (d) Peptidoglycan
-
221. Blue green algae, besides chlorophyll also possess another pigment known as: [2014]
(a) phycocyanin
(b) phycoerythrin
(c) phycobillirubin
(d) Phycobilliprotein
Answer: (a) phycocyanin
-
222. Microsporum furfur causes: [2013],[2010]
(a) athlete's foot
(b) ring worm ergot

- (c) dandruff
(d) ergot

Answer: (c) dandruff

223. Mushrooms belong to: [2013]

- (a) Zygomycota
(b) Ascomycota
(c) Basidiomycota
(d) Deuteromycota

Answer: (c) Basidiomycota

224. Penicillin is obtained from:

[2012]

- (a) Algae
(b) Yeast
(c) Mushroom
(d) Mold

Answer: (d) Mold

Ext

Product	Obtained from
Ergotamine	Claviceps purpurea
Pencillin	Pencillium chrysogenum
Cephalosporin	Cephalosporium acremonium
Griseofulvin	Pencillium
Cyclosporine	Fungal product
Yeast	Saccharomyces cerevisiae

225. Rust and smut belong to the phylum;

[2011]

- (a) zygomycota
(b) ascomycota
(c) basidiomycota
(d) deuteromycota

Answer: (c) basidiomycota

Ext

Basidiomycota
Club fungi (club shape basidia)
Primary, secondary & tertiary mycelium
Dikaryotic cell has 2 haploid nuclei
Basidiocarp is Tertiary mycelium
Mushrooms, puffballs, shelf fungi, rusts and smuts

226. Yeast belongs to the phylum;

[2010]

- (a) Zygomycota
(b) Ascomycota
(c) Basidiomycota
(d) Deuteromycota

Answer: (b) Ascomycota

Ext

Ascomycota
Sac fungi
Parasites produces powdery mildew
40 % forms lichen (symbiotic)

Sexual spores called ascocarps

Penicillin drug from pencillium

Yeast

227. Cup-like ascocarp in fungi is:

[2009]

- (a) Apothecium
(b) Perithecium
(c) Hysterothecium
(d) Cleistothecium

Answer: (a) Apothecium

228. In fungi the important adaptation for terrestrial mode of life is disappearance of; [2005]

- (a) Rhizoids
(b) Stolons
(c) Sporangiothecia
(d) Flagellated cells

Answer: (d) Flagellated cells

229. which one of the following locomotory organ would likely to be shortest [2017]

- a) flagellum
b) cilium
c) an extended pseudopodia
d) a pellicle

answer: a cilium

CHAPTER-8: DIVERSITY AMONG PLANTS

230. Galantamine hydrobromide is a compound derived from [2019-Med]

- a) cannabis
b) Coca
c) english yew
d) daffodil
ans; d

231. Dicotyledonous flowers are usually:

[2015]

- A) Clmerous
B) Trimerous
C) Tetra, erpis
D) Pentamerous

Answer: D) Pentamerous

232. Smallest gametophyte is present in:

[2015]

- A) Adiantum
B) Funaria
C) Marchantia
D) Angiosperms

Answer: D) Angiosperms

233. Heterospory occur in: [2015]

- a) Selaginella
b) Equisetum
c) Lycopodium
d) Lepidodendron

Answer: A) Selaginella

234. All of the following are dioecious except:

[2014]

- (a) Ulva
- (b) Funaria
- (c) Marchantia
- (d) Polytricum

Answer: (b) Funaria

235. All of the following are gametophytes except:

[2014]

- (a) Club Mosses
- (b) Funaria
- (c) Liver-Worts
- (d) Horn-Worts

Answer: (a) Club Mosses

236. A spore of Fern plant develops into:

[2014]

- (a) Zygote
- (b) Sporophyte
- (c) Gametophyte
- (d) Prothallus

Answer: (d) Prothallus

237. In angiosperms the megaspore develops into:

[2014]

- (a) Embryo-Sac
- (b) Embryo
- (c) Seed
- (d) Male gametophyte

Answer: (a) Embryo-Sac

238. A spore of Fern plant develops into:

[2014]

- (a) Zygote
- (b) Sporophyte
- (c) Gametophyte
- (d) Prothallus

Answer: (d) Prothallus

239. Seaginella is the living member of:

[2013]

- (a) Psilopsida
- (b) Lycopsidea
- (c) Sphenopsida
- (d) Pteropsida

Answer: (b) Lycopsidea

240. A sporophyte that depends on gametophytes is:

[2013]

- (a) Adiantum
- (b) Pinus
- (c) Marchantia
- (d) Mustard-plant

Answer: (c) Marchantia241. Club-mosses are also called; **[2011]**

- (a) psilopsida
- (b) sphenopsida
- (c) lycopsida
- (d) pteropsida

Answer: (c) lycopsida

242. Equisetum is the living member of:

[2010]

- (a) Sphenopsida
- (b) Psilopsida
- (c) Pteropsida
- (d) Lycopsidea

Answer: (a) Sphenopsida

243. All of the following are gametophyte plants

EXCEPT:

[2010]

- (a) Liver wort
- (b) Equisetum
- (c) Funaria
- (d) Polytrichum

Answer: (b) Equisetum

244. All of the following plants possess actinomorphic flowers EXCEPT:

[2010]

- (a) Rose
- (b) Potato
- (c) Apple
- (d) Pea

Answer: (d) Pea245. A pollen-grain germinates and develops into: **[2009]**

- (a) Prothallus
- (b) Sporophyte
- (c) Micro-gametophyte
- (d) Mega-gametophyte

Answer: (c) Micro-gametophyte

246. All of the following belong to mosses Except:

[2009]

- (a) Funaria
- (b) Polytrichum
- (c) Sphagnum
- (d) Club-mosses

Answer: (d) Club-mosses247. Alternation of generations in plants is regarded a mechanism for: **[2008]**

- (a) Achieving haploidy
- (b) Promoting survival
- (c) Producing diploidy
- (d) Having no significance

Answer: (b) Promoting survival

248. Class filicinae belongs to "phylum"

[2008]

- (a) Tracheophyta
- (b) Bryophyte
- (c) Thallophyta
- (d) Embryophyta

Answer: (a) Tracheophyta249. In bryophytes sterile hair are produced between sex organs to keep them: **[2008]**

- (a) Dry
- (b) Wet
- (c) Worm
- (d) Covered

Answer: (b) Wet250. Which one of the following is necessary for evolution of seeds? **[2005]**

- (a) Introduction of heterospory
- (b) Retention of the magaspore within

megasporangium

- (c) Fertilization of the egg prior to discharge

- (d) All of the above

Answer: (d) All of the above251. All of the following are angiosperms except; **[2005]**

- (a) Cactus
- (b) Amaryllis

- (c) Spurge
(d) Firs

Answer:(a) Cactus

252. Size of the flower of chrysanthemum may be enlarged by removing: [2006]

- (a) All leaves
(b) A few leaves
(c) All branches except one
(d) All floral bud except one.

Answer:(d) All floral bud except one.

253. Consider the following names of some plants; [2005]

- 9I. Grapes
II. Mango
III. Oats
IV. Willow

254. Which of them is the most appropriate for panicle inflorescence?

- (a) I, II and III only
(b) I and II only
(c) II and IV only
(d) I and IV only

Answer:(a) I, II and III only

255. In grapes and mangoes, the inflorescence is: [2011]

- (a) panicle (b) multiparous cyme
(c) capitulum (d) umbel

Answer:(a) panicle

256. Kelps are: [2016]

- b. Diatoms
c. Red-algae
d. Green-algae
e. **Brown-algae**

Answer: brown algae

257. independent gametophyte and sporophyte are found in:

- (a) Liverworts
(b) Tracheophytes
(c) **Ectocarpus**
(d) Mosses

Answer: ectocarpus

258. The flowers come at the same level due to equal size of their pedicels in; [2007]

- (a) Corymb
(b) Umbel
(c) Catkin
(d) Panicle

Answer:(b) Umbel

259. It looks like a single flower but it is infact an inflorescence called; [2007]

- (a) Panicle
(b) Typical receme
(c) Compound umbel
(d) Capitulum

Answer: (d) Capitulum

CHAPTER-9: DIVERSITY AMONG ANIMALS

260. All of the following are triploblastic animals except: [2015]

- a) Amphibian
b) Mollusca
c) Coelentrata
d) Echinodermata

Answer: C) Coelentrata

261. Hermaphrodite phylum is: [2015]

- A) Annelida
B) Arthropoda
C) Echinodermata
D) Mollusca

Answer: A) Annelida

262. Which of the following animals is not endothermic? [2015]

- A) Salamander
B) Great white shark
C) Polar bear
D) Butterfly

Answer:A) Salamander

263. The larva of balanoglossus (Hemichordate) is called: [2015]

- A) Bipinnaria
B) Radiolaria
C) Tornaria
D) Trochophore

Answer: C) Tornaria

Ext

Organism	Larve
Echinodermata	Bipinnaria
some annelids	Trochopora
Hemichordata	Lochidium
Mollusca(balanoglossus)	Glochidium larva
Amphibian	Tadpole

264. The organs of excretion in crustacean are : [2015]

- A) Coxal glands
B) Flame cells
C) Malpighian tubules
D) Nephridia

Answer: A) Coxal glands

265. Which of the following animal is included in deuterostome? [2015]

- A) Mytilus
B) Chaetopterus
C) Penguin
D) Jelly fish

Answer:C) Penguin

266. Which of the following fish have 14 pairs of gill slits? [2014]

- (a) Dog fish
- (b) Lamprey
- (c) Cat fish
- (d) Ray fish

Answer: (b) Lamprey

267. Which of the following is include in deuterostome? [2014]

- (a) Brittlestar
- (b) Scorpion
- (c) Chaelopterus
- (d) Unio

Answer: (a) Brittlestar

268. In octopus, the foot is modified into: [2014]

- (a) Disc
- (b) Arm
- (c) Foot
- (d) Siphon

Answer: (d) Siphon

269. Which of the following animal is included in protostom? [2014]

- (a) Sea horse
- (b) Sea mouse
- (c) Seacucumber
- (d) Sea lion

Answer: (a) Sea horse

270. How many waling legs are present in arachnids? [2014]

- (a) 4
- (b) 6
- (c) 8
- (d) 10

Answer: (b) 6

271. Spiders belong to class: [2013]

- (a) Crustacean
- (b) Myriapoda
- (c) Arychnida
- (d) Hexapoda

Answer: (c) Arychnida

272. Lobsters belong to class: [2013]

- (a) Myrlapoda
- (b) Arychnida
- (c) Hexapoda
- (d) Crustacean

Answer: (d) Crustacean

273. The gills are covered by operculum in; [2013]

- (a) Bony fishes
- (b) Cartilaginous fishes
- (c) Lung fishes
- (d) Jawless fishes

Answer: (a) Bony fishes

274. Round worms, which have body cavities are partially lined with mesoderm are classified as: [2011]

- (a) Acaelomate
- (b) Ceolomates
- (c) Pseudo coelomates
- (d) Deuterostomes

Answer: (c) Pseudo coelomates

275. In spiders, the organs that contain the silk glands are called: [2011]

- (a) Spinnerets
- (b) Carapaces
- (c) Medriporite
- (d) Tube feet

Answer: (a) Spinnerets

276. Crustaceans are the only arthropods that have: [2011]

- (a) Chitin in their exoskeleton.
- (b) chelicetae
- (c) 3 pairs of legs
- (d) 2 pairs of antennae

Answer: (c) 3 pairs of legs

277. Which of the following bird structures are especially adapted to support flight? [2011]

- (a) Cloacas
- (b) Bills
- (c) Gizzard
- (d) chest muscles

Answer: (d) chest muscles

278. Hydra reproduces asexually by; [2010]

- (a) Binary fission
- (b) Multiple fission
- (c) Budding
- (d) Regeneration

Answer: (c) Budding

279. Which one of the following animals has no alimentary canal? [2010],[2005]

- (a) Ascaris
- (b) Pin worm
- (c) Planaria
- (d) Tape worm

Answer: (d) Tape worm

280. Besides mammalian diaphragm is present in; [2010]

- (a) Birds
- (b) Crocodiles
- (c) Fishes
- (d) Toads

Answer: (b) Crocodiles

281. Which of the following animals is sedentary in adult and active in larval stage? [2010],[2009]

- (a) Sponge
- (b) Leech
- (c) Salamander
- (d) Grasshopper

Answer:(a) Sponge

282. Which of the following is included in protostome? [2010]

- (a) Amphioxus
- (b) Sea horse
- (c) Cheatopterus
- (d) Sea cucumber

Answer:(c) Cheatopterus

283. Book lungs may be found in which of the following; [2010],[2009]

- (a) Clam worm
- (b) Spider
- (c) Silver fish
- (d) Leech

Answer: (b) Spider

284. Extra embryonic membranes like amnion and chorion appeared for the first time in. [2010]

- (a) Fish
- (b) Amphibian
- (c) Reptiles
- (d) None

Answer:(c) Reptiles

285. Which of the following is a swimming bird? [2010]

- (a) Penguin
- (b) Ostrich
- (c) Hawk
- (d) Kiwi

Answer:(a) Penguin

286. Tissue organization is missing in protozoa and found in: [2009]

- (a) Parazoa
- (b) Metazoa
- (c) Sporozoa
- (d) Monera

Answer:(a) Parazoa

287. The mammals termed connecting link between reptilian and mammals. [2009]

- (a) Marsupials
- (b) Eutherians
- (c) Monotremes
- (d) Metatherians

Answer: (c) Monotremes

288. Daphnia belongs to: [2009],[2008]

- (a) Insecta
- (b) Annelida
- (c) Crustacean
- (d) Arachnida

Answer:(c) Crustacean

289. Opossum belongs to: [2009]

- (a) Metatheria
- (b) Eutheria
- (c) Theria
- (d) Prototheria

Answer:(a) Metatheria

290. Feathers of birds are water proof due to the secretion of: [2009]

- (a) Sodoreferous glands
- (b) Endocrine gland
- (c) Preen gland
- (d) thymus glands

Answer:(c) Preen gland

291. Metamerism is found in: [2009]

- (a) Earth worm
- (b) Sponges
- (c) Snakes
- (d) Grass hopper

Answer:(a) Earth worm

292. Nematocysts are found in: [2009]

- (a) Nematodes
- (b) Coelenterates
- (c) Annelids
- (d) Sponges

Answer: (b) Coelenterates

293. Which of these is a fresh water sponge? [2008]

- (a) Sycon
- (b) Leucosolenia
- (c) Spongilla
- (d) Euplectella

Answer:(c) Spongilla

294. Which of the following expel imperfectly developed embryo out of the body? [2008]

- (a) prototherions
- (b) eutherians
- (c) metatherian
- (d) all of the above

Answer:(c) metatherian

295. All of the following are nematodes except: [2008]

- (a) Ascaris
- (b) Neries
- (c) Trichinella
- (d) Guinea worm

Answer: (b) Neries

296. Which one of the following animals lays eggs? [2007]

- (a) Scally ant eater
- (b) Spiny ant eater
- (c) Bat
- (d) Whale

Answer: Spiny ant eater

297. Which of the following is not present in the fish; [2005]

- (a) Middle ear
- (b) Internal ear
- (c) Gills
- (d) Fins

Answer :Middle ear

298. Which one of the following has no digestive tube; [2005]

- (a) Tape worm
- (b.) Liver fluke
- (c) Planaria
- (d) Round worm

Answer: Tape worm

CHAPTER-10: FORMS & FUNCTIONS IN PLANTS

299. Phytochrome "Pfr" absorbs red light of wave length. [2015]

- A) 600 nm B) 660 nm
- C) 560 nm D) 730 nm

Answer: D) 730 nm

300. A hormone that helps in growing seed less grapes, [2015]

- A) Auxins B) Cytokinins
- C) Ethylene D) Gibberellins

Answer: D) Gibberellins

301. Select mineral that is considered as macronutrient. [2015]

- A) Phosphorus B) Zinc C) Iron D)

Iodine

Answer: A) Phosphorus

302. Vernalization is the conversion of:

- a) Spring variety to the winter variety
- b) Winter variety to the spring variety
- c) Winter variety to the summer variety
- d) Summer variety to the winter variety

Answer: B) Winter variety to the spring

variety

303. The following elements H, N, P and Mg are included in: [2015]

- A) Macronutrients
- B) Micronutrients
- C) Trace elements
- D) Minor elements

Answer: A) Macronutrients

304. Outer wall of Guard cells is: [2015]

- A) Thin & elastic
- B) Thick & elastic
- C) Thin & non elastic
- D) Thick & non elastic

Answer: A) Thin & elastic

305. The critical day length of a short-day plant is: [2015]

- A) 11:00 hours
- B) 15:00 hours
- C) 11 ½ Hours
- D) 15 ½ hours

Answer: D) 15 ½ hours

306. Sunken-stomata are found in the leaves of: [2015]

- A) Hydrophytes
- B) Xerophytes
- C) Mesophytes
- D) Glibberellins

Answer: B) Xerophytes

307. All of the following are micronutrients except: [2015]

- A) Iron
- B) Copper
- C) Zinc
- D) Magnesium

Answer: D) Magnesium

308. Which one among the following is not macroelement needed by plants; [2007]

- a. Magnesium
- b. Sulphur
- c. Iron
- d. Potassium

Answer: C. Iron

309. Phloem tissues are composed of: [2010]

- (a) Tracheids
- (b) Trachea
- (c) Collenchyma
- (d) Sieve tubes

Answer: (d) Sieve tubes

310. Early fall of leaves and fruits in plants is caused by the deficiency of: [2011]

- (a) phosphorus
- (b) potassium
- (c) magnesium
- (d) nitrogen

Answer: (a) phosphorus

311. Chlorosis in plants is caused by the deficiency of: [2011]

- (a) nitrogen
- (b) magnesium
- (c) potassium
- (d) both a and b

Answer: (d) both a and b

312. A set of xylem tissues are: [2012]

- (a) Vessels, tracheids, parenchyma
- (b) Sieve tubes, companion cell, fibers
- (c) Parenchyma, sieve tube, vessels

- (d) Fibers, companion cells, tracheids

Answer: (a) Vessels, tracheids, parenchyma

313. Opening and closing of stomata is controlled by which of the following factor(s)? [2006]

- (a) Sugar
- (b) pH
- (c) Potassium
- (d) All of the above

Answer: (d) All of the above

314. Which of the following meristem is responsible for wood formation in plants? [2008]

- (a) lateral meristem
- (b) Apical meristem
- (c) Intercalary
- (d) None

Answer: (a) lateral meristem

315. Tobacco is a: [2012]

- A) Long day plant
- (b) Short day plant
- C) Day neutral plant
- (d) Intermediate plant

Answer: (b) Short day plant

316. Florigen is produced by: [2013]

- A) Flowers
- (b) Flower-buds
- C) Leaves
- (d) Fruits

Answer: C) Leaves

317. All of the following are growth hormones except: [2011]

- (a) Phytohormones
- (b) Gibberlin
- (c) Auxins
- (d) Cytokinins

Answer: (a) Phytohormones

318. Abcissic acid (ABA) promotes: [2012]

- (a) Triple response
- (b) Sex expression
- (c) Flower initiation
- (d) Leaf, flower and fruit fall

Answer: (d) Leaf, flower and fruit fall

319. Ripening of fruits can be promoted by: [2012]

- (a) Gibberellic acid
- (b) Indole acetic acid
- (c) Florigen
- (d) Ethylene gas

Answer: (d) Ethylene gas

320. Gibberellin was isolated from: [2012]

- (a) An algae
- (b) A fungus
- (c) A bacterium
- (d) A virus

Answer: (b) A fungus

321. Auxins inhibit the growth of: [2012]

- A) Apical buds
- (b) Lateral buds
- (d) Parthenocarpy
- (d) Root growth

Answer: (b) Lateral buds

322. Growth promoting substance in plant is: [2012]

- A) F.A.D
- (b) Chlorophyll a
- (c) I.A.A

(d) ABA

Answer: (c) I.A.A

323. A hormone that prevents senescence in leaves, is: [2013]

- A) Auxin
- (b) Gibberellins
- C) Cytokinin
- (d) Abscissic acid

Answer: C) Cytokinin

324. A living tissue which in addition to its regular function also provides support to plants is:

- [2006]
- (a) Xylem
- (b) Collendryma
- (c) sclerenchyma
- (d) Parenchyma

Answer: (b) Collendryma

325. The growth of the pollen tube through style to the ovary is a type of movement called: [2008]

- (a) Geotropism
- (b) Chemotropism
- (c) Hydrootropism
- (d) Phototropism

Answer: (b) Chemotropism

326. Pulvinus tissues are present at: [2013]

- (a) Leaf-tip
- (b) Leaf-margin
- (c) Leaf-base
- (d) Middle-vein

Answer: (c) Leaf-base

327. Growth movement of pollen tube towards the egg is: [2009]

- (a) Hydrotropism
- (b) Chemotropism
- (c) Chemotactic
- (d) Seismetactic

Answer: (b) Chemotropism

328. The epidermis of the xerophytes is covered with a waxy layer called; [2005]

- (a) Cellulose
- (b) Cuticle
- (c) Chitin
- (d) Lignin

Answer: (b) Cuticle

329. Opening of flower buds and leaf buds is called; [2010]

- (a) Epinasty
- (b) Thermonasty
- (c) Photonasty
- (d) Seismonasty

Answer: (a) Epinasty

330. For callus formation, auxin and cytokinin are required in which ratio? [2017]

- A) Balanced
- B) Only cytokinin required

- C) Low auxin, very high cytokinin
D) Only auxin

Answer: balanced

CHAPTER-11: DIGESTION

331. In stomach the pepsinogen is synthesized and secreted by: [2015]

- A) Mucus cells
B) Parietal cells
C) Hormonal cells
D) Chief cells

Answer: D) Chief cells

332. Protein is converted into peptone by which of the following enzyme; [2007]

- a. Amylase
b. Trypase
c. Lipase
d. Hipase

Answer: b. Trypase

333. Bile is released from the gall bladder by the action of: [2014]

- (a) Gastrin
(b) Cholecystokinin
(c) Secretin
(d) Renin

Answer: (c) Secretin

334. In which of the following pharynx opens directly into intestine? [2014]

- (a) Planaria
(b) Earthworm
(c) Cockroach
(d) Snail

Answer: (a) Planaria

335. Appendix is vestigial in man but may play role in: [2013],[2009]

- (a) Digestion
(b) Excretion
(c) Immunity
(d) Movement

Answer: (c) Immunity

336. Erepsin acts upon: [2013]

- (a) Polypeptides
(b) Carbohydrates
(c) Dipeptides
(d) Fats

Answer: (c) Dipeptides

337. Brunner's glands are found in: [2013]

- (a) Stomach
(b) Duodenum
(c) Ileum
(d) Colon

Answer: (b) Duodenum

338. Which one of the following animals is filter feeder? [2013]

- (a) Teeth

- (b) Sycon
(c) Fresh water muscle
(d) Jelly fish

Answer: (c) Fresh water muscle

339. An organism that adopts saprophytic mode of nutrition during part of its life is called: [2013]

- (a) Facultative saprophyte
(b) Facultative parasite
(c) Obligate saprophyte
(d) Obligate parasite

Answer: (a) Facultative saprophyte

340. Premature death of plants is caused by the deficiency of: [2013]

- (a) Magnesium
(b) Iron
(c) Phosphorus
(d) potassium

Answer: (d) potassium

341. Excretion of bile pigments in blood indicates: [2012]

- (a) Anaemia
(b) Diabetes
(c) Rickets
(d) Jaundice

Answer: (d) Jaundice

342. The amount of energy in food is measured in: [2011]

- (a) ATP
(b) Calories
(c) ADP
(d) Carbohydrates

Answer: (b) Calories

343. Much of mechanical digestion takes place in the; [2011]

- (a) oesophagus
(b) mouth
(c) stomach
(d) duodenum

Answer: (b) mouth

344. Early fall of leaves and fruits in plants is caused by the deficiency of: [2011]

- (a) phosphorus
(b) potassium
(c) magnesium
(d) nitrogen

Answer: (a) phosphorus

345. Chlorosis in plants is caused by the deficiency of: [2011]

- (a) nitrogen
(b) magnesium
(c) potassium
(d) both a and b

Answer: (d) both a and b

346. An enzyme in gastric juice of many infant mammals that precipitates milk protein is:

- (a) Rennin

- (b) Pepsinogen
- (c) Gastrin
- (d) Renin

Answer: (a) Rennin

347. Monotropa is a; [2010]

- (a) Total parasite
- (b) Total saprophyte
- (c) Partial parasite
- (d) Partial saprophyte

Answer: (b) Total saprophyte

348. The amount of bile produced by human in liver is: [2009]

- (a) 1000 ml/day
- (b) 2000ml/day
- (c) 3000 ml/day
- (d) 4000 ml/day

Answer: (a) 1000 ml/day

349. Ammonia is formed during digestion in: [2009]

- (a) Liver
- (b) Stomach
- (c) Small intestine
- (d) Large intestine

Answer: (a) Liver

350. Teeth adapted for cutting are: [2008]

- (a) canines
- (b) incisors
- (c) molars
- (d) molars

Answer: (b) incisors

351. In earthworm, mucin & enzyme are produced by: [2008]

- (a) Intestinal sac
- (b) Typhlosole
- (c) Oesophagus
- (d) Pharyngeal mass

Answer: (b) Typhlosole

352. Which of the following is Not present in the pancreatic juice? [2008]

- (a) Amylase
- (b) lipase
- (c) trypsinogen
- (d) insulin

Answer: (c) trypsinogen

353. Which enzyme helps in the digestion of carbohydrate? [2008]

- (a) Ptyalin
- (b) Pepsin
- (c) Diastase
- (d) Insulin

Answer: (a) Ptyalin

354. Which animal possesses an open circulatory system? [2008]

- (a) Amoeba
- (b) Earthworm

- (c) Grasshopper
- (d) Man

Answer: (c) Grasshopper

355. The role of bacterial population in the large intestine of man is to: [2006]

- (a) break down of cellulose
- (b) synthesize some vitamins
- (c) produce intestinal juice
- (d) absorb water and mineral salts

Answer: (b) synthesize some vitamins

356. Which one of the following plants feeds on water mites? [2006]

- (a) Nepenthes
- (b) utricularia
- (c) Dionea
- (d) Drosera

Answer: (b) utricularia

357. Extra cellular digestion occurs in: [2005]

- (a) Grasshopper and protozoa
- (b) Grasshopper and frog
- (c) Earthworm and protozoa
- (d) Frog and protozoa

Answer: (b) Grasshopper and frog

358. Where does the oesophagus open in the alimentary canal of earthworm? [2005]

- (a) Buccal chamber
- (b) Intestine
- (c) Rectum
- (d) Intestinal caecum

Answer: (b) Intestine

359. The digestion in hydra and planarian is: [2005]

- (a) Intercellular
- (b) Extracellular
- (c) Both intracellular and extracellular
- (d) None of these

Answer: (c) Both intracellular and

extracellular

CHAPTER-12: CIRCULATION

360. Incomplete double circulation is found in: [2014]

- (a) Aves
- (b) Fishes
- (c) Amphibians
- (d) Mammals

Answer: (c) Amphibians

361. Thalassaemia major is also known as: [2013]

- (a) Sickle cell anemia
- (b) Cooley's anemia
- (c) Mycotic anemia
- (d) Nutritional anemia

Answer: (b) Cooley's anemia

362. The valve between left ventricle is called:
[2013]

- (a) Semi lunar valve
- (b) Bicuspid valve
- (c) Tricuspid valve
- (d) Pulmonary valve

Answer: (b) Bicuspid valve

363. The valve between right atrium and right ventricle is called: [2011],[2006]

- (a) Bicuspid valve
- (b) Tricuspid valve
- (c) Pulmonary valve
- (d) Semi lunar valve

Answer: (b) Tricuspid valve

364. Largest lymphatic duct is the: [2012]

- (a) Abdominal duct
- (b) Thoracic duct
- (c) Femoral duct
- (d) Subclavian duct

Answer: (b) Thoracic duct

365. The diameter of human capillary is:
[2012]

- (a) 5 microns
- (b) 6 microns
- (c) 7 microns
- (d) 8 microns

Answer: (c) 7 microns

366. The interval of pace maker signals from S.A.N to AV.N is: [2012]

- (a) 01 second
- (b) 0.1 second
- (c) 02 seconds
- (d) 0.2 second

Answer: (b) 0.1 second

367. which of the following has four chambered heart? [2010]

- (a) Lizard Lizard
- (b) Turtle
- (c) Crocodile
- (d) Frog

Answer: (c) Crocodile

Answer: (b) Polycythemia

368. In fishes, the heart pumps:
[2009]

- (a) Pure blood to the body
- (b) Impure blood to the body
- (c) Pure blood to the gills
- (d) Impure blood to the gills

Answer: (d) Impure blood to the gills

369. RBCs are destroyed in the liver while WBCs are destroyed in: [2009]

- (a) Plasma
- (b) Liver
- (c) Inside various cells of body
- (d) Outside of the blood stream

Answer: (c) Inside various cells of body

370. Two chamber heart is found in:
[2008]

- (a) leopard
- (b) fish
- (c) crocodile
- (d) none of the above

Answer: (b) fish

371. Which one of the following animals possesses an open circulatory system. [2005]

- (a) Amoeba
- (b) Earthworm
- (c) Grasshopper
- (d) Man

Answer: (c) Grasshopper

372. Pumping denser blood causes the heart to be strained and waste products become concentrated in the body. What is the cause of these problems?
[2005]

- (a) Excess of water
- (b) Deficiency of mineral
- (c) Deficiency of oxygen
- (d) Dehydration

Answer: (d) Dehydration

373. The blood flow in milliliters/ minute during exercise to the skin is: [2015]

- A) 1500 ml
- B) 1600 ml
- C) 1800 ml
- D) 1900 ml

Answer: D) 1900 ml

Chap no 13. Immunity

374. Mark the correct match [2019-Med]

- a) haemophilia –blood cancer
- b) SA node – pacemaker
- c) ECG-Brain
- d) alpha cell- insulin

ans; b

375. Cells which kills cells that display foreign motifs on their surface are; [2019-Med]

- a) platelets
- b) cytotoxic t-cells
- c) antigens
- d) red blood cells

376. ans; b

377. For which purpose myeloma cells (cancerous B.lymphocytes) are used in the production of monoclonal antibodies? [2017]

- A) Increased rate of cell division
- B) Immunization with antigen
- C) To avoid contamination
- D) as nutrients in media

answer: immunization with antigen

378. Anti bodies are produced by:
[2011]

- (a) red blood cells
- (b) platelets
- (c) B-lymphocytes
- (d) Hormones

Answer: (c) B-lymphocytes

379. The inherit form of immunity through mother's milk is the: [2011]

- (a) active immunity
- (b) Innate immunity
- (c) passive immunity
- (d) Acquired immunity

Answer: (b) Innate immunity

380. A non specific defence reaction to tissue damage caused by injury or infection is known as: [2011]

- (a) active immunity
- (b) the inflammatory response
- (c) passive immunity
- (d) Acquired immunity

Answer: (b) the inflammatory response

381. The protein that helps other cells resist viral infection is; [2011]

- (a) Penicillin
- (b) histamine
- (c) interferon
- (d) antigens

Answer: (c) interferon

382. Blood cells are produced by: [2006]

- (a) Liver
- (b) Spleen
- (c) Bone marrow
- (d) Heart

Answer: (c) Bone marrow

383. Increased production of RBCs is called: [2010]

- (a) Leukaemia
- (b) Polycythemia
- (c) Edema
- (d) Anemia

CHAPTER-14: RESPIRATION

384. Myoglobin is found in: [2013]

- (a) Bone
- (b) Connective tissue
- (c) Muscles
- (d) Cartilage

Answer: muscles

385. The rate of breathing of a child of 5 years is about: [2011]

- (a) 44 times / minute
- (b) 40 times / minute
- (c) 25 times / minute
- (d) 20 times / minute

Answer: 25 times per minute

386. B.C.G vaccines are usually given to:

[2012]

- A) Children
- (b) Adults
- (c) Special persons
- (d) All of the above

Answer: children

387. Following nasal passages are composed of cartilage except: [2012]

- (a) Trachea
- (b) Bronchus
- (c) Bronchioles
- (d) Tracheoles

Answer: bronchioles

388. Myoglobin combines with: [2012]

- (a) Four oxygen molecules
- (b) Three oxygen molecules
- (c) Two oxygen molecules
- (d) One oxygen molecule

Answer: one oxygen molecules

389. Lungs are _____ in origin.

[2014]

- (a) Ectodermal
- (b) Endodermal
- (c) Mesodermal
- (d) Preformed

Answer: endodermal

390. Nicotine in tobacco:

[2011]

- (a) decreases the heart rate
- (b) decreases blood pressure
- (c) block the transport of oxygen
- (d) paralyzes cilia

Answer: block the transport of oxygen

391. Smaller the animal; [2010]

- a) More the rate of respiration
- (b) Less the rate of respiration
- (c) Rate of respiration has nothing to do with size of animal
- (d) None of these

Answer: more the rate of respiration

392. Alveoli are absent in: [2009]

- (a) Fishes
- (b) Amphibian
- (c) Birds
- (d) Mammals

Answer: birds

393. If we cover the lateral sides of the Grass-hopper with wax. The system most likely to be affected will be: [2008]

- (a) digestive
- (b) Circulatory
- (c) respiratory
- (d) Excretory

Answer: respiratory

394. Photorespiration occurs when:

[2006]

- (a) stomata are opened
- (b) day is humid
- (c) concentration of CO_2 inside leaf is high

(d) Concentration of O_2 inside leaf is high**Answer: Concentration of O_2 inside leaf is****high**395. The process responsible for energy production in animals is: **[2005]**

- (a) Photosynthesis
- (b) Digestion
- (c) Respiration
- (d) Circulation

Answer: respiration396. In hydra, planaria and earthworm the exchange of gases occur through the; **[2005]**

- (a.) Lungs
- (b) Gills
- (c) Trachea
- (d) General body surface

Answer: general body surface397. Amount of O_2 carried by red blood cells is: **[2015]**

- A) 77%
- B) 90%
- C) 87%
- D) 97%

Answer: 97%

398. The oxygen carrying capacity of haemoglobin in humans when the blood is 100% oxygenated is:

[2014]

- (a) 19.4 ml
- (b) 19.6 ml
- (c) 20 ml
- (d) 21 ml

Answer: 20 ml399. Which of the following ions play important role in the transport of carbon dioxide? **[2014]**

- (a) Sodium
- (b) Potassium
- (c) Bicarbonate
- (d) Chloride

Answer: bicarbonate400. Percentage of CO_2 carried by plasma is: **[2016]**

- (a) 5%
- (b) 6%
- (c) 7%
- (d) 8%

Answer: 7%401. 18. Otitis media is an inflammation of which part of the body? **[2017]**

- A) A) Brain

B) B) Middle ear

C) Lungs

D) Urinary tract

Answer: middle ear**CHAPTER-15: HOMEOSTASTISIS**402. A condition of excessive thirst due to diabetes is called: **[2015]**

- A) Polyuria
- B) Glycosuria
- C) Polyphagia
- D) Polydipsia

Answer: polydipsia403. Which of the following animals is not endothermic? **[2015]**

- A) Salamander
- B) Great white shark
- C) Polar bear
- D) Butterfly

Answer: salamander3. The birds excrete: **[2013]**

- (a) Ammonia
- (b) Urea
- (c) Uric acid
- (d) Acetic acid

Answer: uric acid404. Surplus amino acid in the body are broken down to form urea in: **[2012]**

- (a) Spleen
- (b) Kidneys
- (c) Liver
- (d) Pancreas

Answer: liver405. Which of the following represent the bile salts? **[2012]**

- (a) Bilirubin
- (b) Biliverdin
- (c) Hemoglobin
- (d) Both A) and B)

Answer: both a and b406. The least toxic excretory product is: **[2012]**

- (a) Ammonia
- (b) Urea
- (c) Uric acid
- (d) Fatty acid

Answer: uric acid407. Malpighian tubules convert nitrogenous waste into: **[2011]**

- (a) urine
- (b) ammonia
- (c) uric acid
- (d) urea

Answer: urea

408. When the kidney fails to form urine the condition is called. [2010]

- (a) Nephritis
- (b) Nephrosis
- (c) Ptosis
- (d) Anuria

Answer: aneuria

9. Urea formation occurs in: [2010]

- (a) Kidney
- (b) Liver
- (c) Spleen
- (d) Lungs

Answer: liver

409. Which one is isotonic to the surrounding seawater? [2009]

- (a) Bony fishes
- (b) Shark
- (c) Carp
- (d) Paramecium

Answer: carp

410. The major and immediate nitrogenous waste product of protein metabolism is: [2008]

- (a) urea
- (b) uric acid
- (c) creatinine
- (d) Ammonia

Answer: ammonia

411. Which one of the following is homoeothermic animal? [2008]

- (a) uromastrix
- (b) salamander
- (c) sea horse
- (d) kangaroo

Answer: kangaroo

13. Lithotripsy is a technique to: [2006]

- (a) Remove kidney stones without surgery
- (b) Remove kidney stones with surgery
- (c) Treat kidney with medicines
- (d) Remove appendix

Answer: remove kidney stones without

surgery

412. The glucose is reabsorbed by the; [2005]

- (a) Proximal convoluted tubule of Nephron
- (b) Distal convoluted tubule of Nephron
- (c) Glomerulus
- (d) Bowman's capsule

Answer: proximal convoluted tubules of nephrons

413. Each malpighian tubule of grasshopper is an out growth from beginning of: [2005]

- (a) Haemocoel
- (b) Nephridiopore

- (c) Urinary tubeles of kidney
- (d) Proctodaeum

Answer: proctoderm

414. The number of cortical nephrons are: [2016]

- (a) 70–80%
- (b) 80–90%
- (c) 60–70%
- (d) 60–80%

Answer: 70–80%

415. Each kidney of human being is weighing about: [2016]

- (a) 140 grams
- (b) 160 grams
- (c) 130 grams
- (d) 150 grams

Answer: 150 gm

CHAPTER-16: SUPPORT & MOVEMENT

416. The number of vertebrae in coccyx are: [2005]

- (a) 2
- (b) 3
- (c) 4
- (d) 5

Answer: 4

417. The bone dissolving cells are called: [2014]

- (a) Osteoclast
- (b) Osteoblasts
- (c) Osteocytes
- (d) Fibroblast

Answer: osteoclast

418. Contraction can be sustained for a long period of time by: [2013]

- (a) Skeletal muscles
- (b) Smooth muscles
- (c) Cardiac muscles
- (d) All of the above

Answer: smooth muscles

419. Bone is surrounded by a membrane called: [2013]

- (a) Perichondrium
- (b) Protopium
- (c) Perimylum
- (d) Periostium

Answer: peristinum

5. The colour of bone marrow is: [2012]

- (a) Red
- (b) Yellow
- (c) Orange
- (d) Both A) and B)

Answer: both a and b

420. Fatigue free muscles are: [2012]

- (a) Striped
- (b) Unstriped
- (c) Cardiac
- (d) Triceps

Answer: cardiac

421. A non-connective tissue is:

[2012]

- (a) Areolar tissue
- (b) Tendon
- (c) Neuron
- (d) Ligament

Answer: neuron

422. Regeneration of cartilage is carried on by:

[2012]

- (a) Collagenous fibers
- (b) Blood vessels
- (c) Perichondrium
- (d) Matrix

Answer: perichondrium

423. In human being, the number of cranial nerves are; **[2012]**

- (a) 8 pairs
- (b) 10 pairs
- (c) 12 pairs
- (d) 31 pairs

Answer: 12 pairs

424. Bicep muscle is attached to the humerus by: **[2012]**

- (a) Tendon
- (b) Ligaments
- (c) Elastic fibers
- (d) Areolar

Answer: tendon

425. Process of bone formation is called: **[2012]**

- (a) Calcification
- (b) Chondrification
- (c) Decalcification
- (d) Ossification

Answer: ossification

426. A network of tubules that runs through compact bone is called the: **[2011]**

- (a) Haversian canal
- (b) periosteum
- (c) marrow
- (d) joint

Answer: haversian canal

427. Heart muscles are called: **[2010]**

- (a) Smooth muscles
- (b) Myogenic muscles
- (c) Striated muscles
- (d) Skeletal muscles

Answer: myogenic muscles

428. The human sacrum consists of how many **[2008]**

- (a) Two
- (b) Three
- (c) four
- (d) five

Answer: five

429. Which of the following group of animals run very fast? **[2008]**

- (a) Digitigrade
- (b) Unguligrade
- (c) Bipedal
- (d) Plantigrade

Answer: digitigrade

430. Bones are held together of the joints by: **[2008]**

- (a) Tendons
- (b) smooth muscles
- (c) Ligaments
- (d) Nerves

Answer: ligaments

431. Organs of locomotion in earth worm are: **[2006]**

- (a) Papillae
- (b) Setae
- (c) Pseudopodia
- (d) Cuticle

Answer: satea

432. The cartilage present in trachea is: **[2006]**

- (a) Fibrous
- (b) Hyaline
- (c) Elastic
- (d) Neurotic

Answer: hyaline

433. Plantigrad locomotion is found in; **[2007]**

- a. Man
- b. Dog
- c. Horse
- d. Dolphin

Answer: man

434. in which of the following disorders the structure and function of normal spinal cord is damaged **[2017]**

- a. arthritis
- b. sciatica
- c. spondylosis
- d. disc slip

answer: spondylosis

CHAPTER 17 NERVOUS COORDINATION

435. Human body thermostat is: **[2015]**
A) Medulla

- B) Medulla oblongata
C) Body fluid
D) Hypothalamus

Answer: hypothalamus

436. CSF Is found in between: [2015]

- A) Pia mater and dura mater
B) Pia mater and arachnoid mater
C) Grey mater and pia mater
D) Dura mater and grey mater

Answer: pia matter and archanoid matter

437. Messer's capsules are the receptors for: [2013]

- (a) Temperature
(b) Pain
(c) Pressure
(d) Touch

Answer: touch

438. The sense of hearing is concerned with: [2012]

- (a) Cerebrum
(b) Cerebellum
(c) Medulla
(d) Hypothalamus

Answer: cerebrum

439. Rhymicity of respiration is maintained by. [2010]

- (a) The cardiac center
(b) Ventillation center
(c) Pons
(d) Carotid sinus

Answer: pons

440. Hunger centers are located in; [2010]

- (a) Hypothalamus
(b) Cerebellum
(c) Medulla
(d) Mid brain

Answer: hypothalamus

441. Limbic system in forebrain consists of: [2010]

- (a) Hypothalamus
(b) Hippocampus
(c) Amygdala
(d) All of the above

Answer: all of the above

442. The individual with hare-lip shows with of the following condition? [2008]

- (a) Hard Palate
(b) Polydactyl
(c) Cleft-palate
(d) Microcephale

Answer: cleft plate

443. Control centre of speech is; [2007]

- (a) Medulla oblongata

- (b) Diencephalons
(c) Cerebrum
(d) Cerebellum

Answer: cerebrun

444. Goiter is caused by deficiency of: [2006]

- (a) Sodium in water
(b) Calcium in water
(c) Iodine in water
(d) Sugar in water

Answer: iodine in water

445. A slowly progressive dis ease of the brain that is characterized by the impairment of memory and eventually by disturbance in reasoning, planning, language and perception is one of the following?

[2016]

- (a) Alzheimer's disease
(b) Meningitis
(c) Cerebrovascular accident
(d) Malignant

Answer: alzheimer's disease

446. Which of the following is correct about speed of nerve impulse: [2016]

- (a) Thicker the nerve fiber-less resistance to flow of current-faster the nerve impulse.
(b) Thicker the nerve fiber-more resistance to flow of current-slower the nerve impulse
(c) Thinner the nerve fiber-less resistance to flow of current-slower the nerve impulse
(d) None of the above

Answer: Thicker the nerve fiber-less resistance to flow of current-faster the nerve impulse.

447. C.S.F" is found in between. [2016]

- (a) Pia mater and dura mater
(b) Pia mater and arachnoid mater
(c) Pia mater and neural canal
(d) Dura mater and arachnoid mater

Answer: Pia mater and arachnoid mater

448. If medulla oblongata of a person brain is damaged which of the following process will be disturbed? [2017]

- A) Thinking
B) Sleep
C) Thirst
D) Swallowing

Answer : swallowing

449. In which of the following disorders the structure and function of normal spinal cord is damaged? [2017]

- A) Arthritis
B) Sciatica
C) Spondylosis
D) Disc slip

Answer: spondylosis

450. 16. Neuron that carries messages from sense organ to the central nervous system is:

[2006]

- (a) Afferent
- (b) Efferent
- (c) Associative
- (d) Interneuron

Answer: afferent

451. 17. nervous system that prepares itself for flight or fight [2017]

- a. para symphatatic
- b. symphatetic
- c. somatic
- d. peripheral

answer sympathetic

Chapter 18 Chemical Coordination

452. The hormone released by the posterior pituitary. That stimulates the contraction of uterine and mammary gland muscles is called:

[2014]

- A) Prolactin
- (b) LH
- (c) FSH
- (d) Oxytocin

Answer: oxytocin

453. Hypothalamus is a part of:

[2014]

- (a) Diencephalon
- (b) Myelencephalon
- (c) Metencephalon
- (d) Telencephalon

Answer: diencephalon

454. Deficiency of which of the following causes diuresis? [2014]

- (a) LH
- (b) ACTH
- (c) FSH
- (d) ADH

Answer: ADH

455. Hyper functioning of thyroid gland will cause; [2005]

- (a) Enlargement of bones
- (b) Slow heart rate and nervousness
- (c) Loss of body weight
- (d) Sexual precocity

Answer: loss of body weight

456. Speech and language area are located in: [2012]

- (a) Thalamus
- (b) Medulla oblongata
- (c) Right cerebral hemisphere
- (d) Left cerebral hemisphere

Answer: left cerebral hemisphere

457. Insulin is produced by:

[2012]

- (a) Alpha-cells

(b) Beta-cells

(c) Delta-cells

(b) Gamma-cells

Answer: beta cells

458. Cortisone is an important hormone of; [2005]

- (a) Adrenal cortex
- (b) Adrenal medulla
- (c) Cerebral cortex
- (d) Cerebral medulla

Answer: adrenal medulla

459. Increased secretion of anti diuretic hormone is due to; [2005]

- (a) Decreased water supply
- (b) Kidney disorder
- (c) Homeostatic
- (d) Increase water supply

Answer: decreased water supply

460. The target organ for vasopressin is: [2012]

- (a) Heart
- (b) Liver
- (c) Stomach
- (d) Kidneys

Answer: kidneys

461. Thirst is controlled by: [2012]

- (a) Pituitary gland
- (b) Adrenal gland
- (c) Parathyroid
- (d) Thyroid

Answer: pituitary gland

462. The rate of metabolism is regulated by: [2011]

- (a) PTH
- (b) Thyroxine
- (c) aldosterone
- (d) calcitonin

Answer: thyroxine

463. All of the following are growth hormones except: [2011]

- (a) Phytohormones
- (b) Gibberlin
- (c) auxins
- (d) cytokinins

Answer: phtochromes

464. The hormone that causes seed and bud dormancy in plants is called. [2010]

- (a) Auxins
- (b) Ethylene
- (c) Absciscic acid
- (d) Gibberellins

Answer: absciscic acid

465. First crystalline hormone is: [2010]

- (a) Thyroxine
- (b) Nor adrenalin

- (c) Adrenalin
(d) All of the above
-
466. Receptors sensitive to smell are: [2008]
(a) Mechanical
(b) Chemical
(c) Photo
(d) Physical
Answer: chemical
-
467. Which hormone prepares the body for situations of stress and emergency? [2008]
(a) Adrenaline
(b) Nor adrenaline
(c) thyroxine
(d) insulin
Answer: adrenaline
-
468. Sense of taste is called: [2016]
(a) Gustation
(b) Tactition
(c) Nociception
(d) Olfaction
Answer: gustation
-
469. Exophthalmia is a classic symptom of: [2016]
(a) Hyperthyroidism
(b) Hypocalcemia
(c) Hypochondria
(d) Hyperglycemia
Answer: Hyperthyroidism
-
470. Which of the following is non-steroidal hormone? [2016]
(a) Cortisol
(b) Testosterone
(c) Insulin
(d) Aldosterone
Answer: Insulin
-
18. Release of calcium from bone in to blood is controlled by [2016]
(a) Parathormone
(b) Calcitonin
(c) Thyroxine
(d) Both (a) & (b)
Answer: Both (a) & (b)

Chapter 20 Behavior

471. A complex form of learning that requires the manipulation of mental concepts to arrive at adaptive behavior is: [2014]
(a) Imprinting
(b) Insight learning
(c) Latent learning
(d) Trial & error learning
Answer: insight learning
-
472. Which of the following play role in Biorhythm? [2014]
(a) MSH
(b) I.H
(c) ADH
(d) Melatonin
Answer: melatonin
-
473. Corpuscular animals are active during: [2006]
(a) Night
(b) Day
(c) Twilight
(d) Spring
(e) **Answer: twilight**
-
474. Who used puzzle boxes in experiment on animal learning? [2013]
(a) Pavlove
(b) E.L. Thorndike
(c) Konrad Lorenz
(d) Kohler
Answer: K.L thomdike
-
475. The changes in the biochemical composition and physiology occurring at regular intervals in 24 hours is termed as: [2011]
(a) gioannual rhythm
(b) lunar rhythm
(c) circadian rhythm
(d) tidal rhythm
Answer: circadian rthym
-
476. Aestivation is also known as: [2010]
(a) Spring sleep
(b) Winter sleep
(c) Autumn sleep
(d) Summer sleep
Answer: summer sleep

CHAPTER-20: REPRODUCTION

477. The enlarged lining epithelium cells connected with groups of developing spermatozoa in testes is: [2014]
(a) Somatic cells
(b) Sertoll cells
(c) Stem cells
(d) Totipotent cells
Answer: totipotent cells
-
478. Which one of the following animals is viviparous? [2013]
A) Rat
B) Kangaroo
C) Duckbilled platypus
D) Spiny ant eater
Answer: kangaroo
-
479. A single ovum of human being contains: [2012]
(a) X — chromosomes
(b) XX — chromosomes
(c) YY — chromosomes
(d) XY — chromosomes

Answer: x-chromosomes

480. The genetic potential for one type of cell from a multi-cellular organism to generate a whole new organism is called:

[2011]

- (a) unipotent
- (b) multipotent
- (c) totipotent
- (d) pluripotent

Answer: totipotent

481.

482. Sperms of which animal can remain viable for years within the female genital tract? [2010], [2009]

- (a) Bat
- (b) Whale
- (c) Camel
- (d) Giraffe

Answer: bat

483. Vitro fertilization takes place in zoo:

[2007]

- (a) River
- (b) Sea
- (c) Land
- (d) Laboratory hardware

Answer: laboratory hardware

484. Man reproduction is;

[2007]

- (a) Mono estrous
- (b) Diestrous
- (c) Triestrous
- (d) Poly estrous

Answer: poly rstorous

485. Gonorrhea is a sex disease caused by:

[2006]

- (a) Bacteria
- (b) Virus
- (c) Parasite
- (d) None of the above

Answer: bacteria

486. 9. The follicle stimulating hormone secreted by the pituitary glands stimulates the growth of; [2005]

- (a) Uterus
- (b) Ovaries
- (c) Graffian follicles
- (d) Urinary bladder

Answer: graffian follicles

487. 10. World-wide, mortality rate per annum due to AIDS is more than: [2016]

- (a) One million
- (b) Two-million
- (c) Three million
- (d) five-million

Answer: two million

488. 11. hormone inhibin is produced by [2016]

- a. hypothalamus
- b. pituitary gland
- c. prostate

d. sertoli cells

answer:sertoli cells

489. When the sperm count is high, inhibin hormone release increases which: [2017]

A) Inhibits anterior pituitary release follicle stimulating g hormone**B) Increase anterior****A) pituitary release of follicle stimulating hormone****B) Inhibit release of luteinizing hormone****C) Increase release of luteinizing hormone****Answer: Inhibits anterior pituitary release follicle stimulating g hormone**

CHAPTER-21: DEVELOPMENT & AGING

490. In chick development gives rise to:

[2013]

- (a) Ectoderm & Endoderm
- (b) Ectoderm & Mesoderm
- (c) Mesoderm & Endoderm
- (d) Mesoderm only

Answer: ectoderm and mesoderm

491. Muscles develop from:

[2013]

- (a) Ectoderm
- (b) Mesoderm
- (c) Endoderm
- (d) all of the above

Answer: mesoderm

492. The organisms developed with two heads and one trunk is called; [2011]

- (a) Identical twins
- (b) Siamese twins
- (c) dizygotic twins
- (d) fraternal twins

Answer: Siamese twins

493. All of the following are derived from mesoderm except: [2011]

- (a) Muscles
- (b) Liver
- (c) Gonads
- (d) Blood vessels

Answer: liver

494. During the development of chick peripheral part of the blastoderm lies unseparated from the yolk and froms: [2010]

- (a) Area pellucida
- (b) Area opaca
- (c) Notochord
- (d) Primitive streak

Answer: area pellucide

495. Which germinal layer develops in digestive system? [2010]

- (a) Ectoderm
- (b) Mesoderm
- (c) Epidermis

(d) Endoderm

Answer: endoderm

496. Cleavage differs from mitosis in that:
[2009]

- (a) It occurs only in zygote
- (b) It occurs in all body cells
- (c) It results into haploid cells only
- (d) It results into identical cells

Answer: it occurs only in zygote

497. The developing embryo is protected against the physical trauma by: [2008]

- (a) Pericardial fluid
- (b) Allantoic fluid
- (c) Amniotic fluid
- (d) All of the above

Answer: amniotic fluid

498. Two individuals formed when two eggs are fertilized of the same time results in twins that are genetically different are:
[2008]

- (a) Identical twins
- (b) Siamese twins
- (c) Fraternal twins
- (d) Double twins

Answer: fraternal twins

499. The mesodermal cell which give rise to urinary system in frog are called; [2005]

- (a) Pincer cells
- (b) Blastomers
- (c) Nephrotome
- (d) Parietal

Answer: nephrotome

500. The transitory stage in between cleavage and gastrulation is; [2005]

- (a) Organogenesis
- (b) Blastula
- (c) Gastrula
- (d) Development

Answer: blastula

501. Implantation of zygote takes place in the:
[2015-2017]

- A) 2nd week
- B) 3rd week
- C) 4th week
- D) 5th week

Answer: 4th week

502. Mature ovum in human beings is surrounded by:
[2015]

- A) Plasma membrane
- B) Vitelline membrane
- C) Corona radiata
- D) All of the above

Answer: all of the above

503. *Acetabularia mediterranea* is [2017]

- A) fungus
- B) an algae

C) c. a protozoa

D) a prokaryotic

answer: an algae

504. the common name of rubella is [2018]

- a. whooping cough
- b. german measles
- c. African sleeping disease
- d. Tay Sachs's disease

Answer: german measles

505. The organism developed with two heads and one trunk is called [2018]

- a. Identical twins
- b. Dizygotic twins
- c. Fraternal twins
- d. Siamese twins

Answer: Siamese twins

CHAPTER-22: INHERITANCE

506. The cross between two dissimilar individuals is called: [2014]

- (a) Test cross
- (b) Interbreeding
- (c) Epistasis
- (d) Hybridization

Answer: hybridization

507. In which of the following the phenotypic and genotypic ratio is the same? [2013]

- (a) Co-dominance
- (b) Over dominance
- (c) Epistasis
- (d) Incomplete dominance

Answer: incomplete dominance

508. In a dihybrid cross, how many homozygous offsprings can be produced? [2012]

- (a) 4
- (b) 3
- (c) 2
- (d) 9

Answer: 2

509. How many genotype will be produced by crossing of two alleles "A" and "a"? [2012]

- (a) One
- (b) Two
- (c) Three
- (d) Four

Answer: one

510. In human being, the carrier of colour blind is: [2012]

- (a) Male
- (b) Female
- (c) Both male and female
- (d) None of them

Answer: female

511. Haemophilia affects males more than females because of: [2012]

- (a) Dominant autosomes
- (b) Dominant X- linked
- (c) Recessive X- linked
- (d) y- chromosome linked

Answer: recessive X linked

512. Which blood group transfusion can be made without risk? [2012]

- (a) Group A to group B
- (b) Group AB to group O
- (c) Group A to group O
- (d) Group B to group AB

Answer: group B to group AB

513. A Test cross is: [2012]

- (a) $Tt \times Tt$
- (b) $Tt \times tt$
- (c) $TT \times Tt$
- (d) $TT \times TT$

Answer: $Tt \times tt$

514. Organisms phenotypically similar but genotypically different are said to be: [2012]

- (a) Monozygous
- (b) Homozygous
- (c) Heterozygous
- (d) Multizygous

Answer: Heterozygous

515. Changes in gene frequencies in small population by chance is called: [2013],[2009]

- (a) Gene pool
- (b) Genetic drift
- (c) Gene mutation
- (d) Gene flow

Answer: genetic drift

516. Which one of the following is a sex-linked inheritance? [2013]

- (a) Baldness
- (b) Albinism
- (c) Eye colour
- (d) Myopia

Answer: eye colour

517. An individual with contrasting alleles is called: [2012]

- (a) Homozygous
- (b) Monoecious
- (c) Heterozygous
- (d) Dioecious

Answer: heterozygous

518. A Punnet square is used to determine the: [2011]

- (a) result of mitosis
- (b) result of meiosis
- (c) actual outcome of a cross
- (d) probable outcome of cross

Answer: probable outcome of cross

519. A woman is homozygous for A- negative blood type. A man has AB- negative blood type. What is

the probability that the couple's child will be type B - negative? [2011]

- (a) 0 %
- (b) 25 %
- (c) 50 %
- (d) 75 %

Answer: %

520. If two interozygous tall plants are crossed together the proportion of Phenotypically tall plants will be: [2014]

- (a) 50%
- (b) 25%
- (c) 75%
- (d) 100%

Answer: 75%

521. If father of a baby is hemophilic and mother is a carrier then chances of the baby in inheriting the disease will be: [2010]

- (a) 0%
- (b) 50%
- (c) 75%
- (d) 100%

Answer: 50%

522. If red and white colour flowers in mirabulus jalapa are crossed, the F_1 generation will show: [2008]

- (a) All red
- (b) all white
- (c) all pink
- (d) 1. Red, 2, pink & 1 white ration

Answer: 1. Red, 2, pink & 1 white ration

523. Which one of the following characteristics in man is controlled by a recessive gene? [2008]

- (a) tongue rolling
- (b) Diabetes
- (c) Skin colour
- (d) Eye colour

Answer: diabetes

524. In which case the genotypic and phenotypic ratio will be 1:2:1? [2008]

- (a) Complete dominance
- (b) incomplete dominance
- (c) Co-dominance
- (d) None

Answer: incomplete dominance

525. A cross between F_1 hybrid with either of parents is called; [2007]

- (a) Back cross
- (b) Test cross
- (c) Reverse cross
- (d) None of the above

Answer: back cross

526. Who is considered to be the father of genetics? [2007]

- (a) Weisman
- (b) Bateson
- (c) Mendel
- (d) Morgan

Answer: mendel

527. In geneaction the gene that mark the expression of another gene is formed as:

[2006]

- (a) Hypostatic
- (b) Epistatic
- (c) Hemistatic
- (d) Neostatic

Answer: epistatic

528. The total of all the allele in a population is called:

[2006]

- (a) genetic drift
- (b) genotype
- (c) gene pool
- (d) gene mutation

Answer: gene pool

529. The allele that exist in more than two different forms are called ;

[2005]

- (a) Polygenic alleles
- (b) Multigenic alleles
- (c) Multiple alleles
- (d) Hetrogenic alleles

Answer: multiple allele

530. Law of independent assortment cannot be applied on;

[2005]

- (a) Dominant genes
- (b) Recessive genes
- (c) Linked genes
- (d) Autosomalgenes

Answer: linked genes

531. The florescent pigments in the eyes of fruit fly is an example of:

[2016]

- (a) Over dominance
- (b) Complete dominance
- (c) Incomplite
- (d) Co-dominance

Answer: Over dominance

CHAPTER-23: CHROMOSOME & DNA

532. In Eukaryotes, DNA replication proceeds at the rate of:

[2014]

- (a) 50 base pairs per seconds
- (b) 40 base pairs per seconds
- (c) 20 base pairs per seconds
- (d) 30 base pairs per seconds

Answer: 50 base pairs per seconds

533. The particular array of chromosomes that an individual possessed is called its:

[2014]

- (a) Genotype

- (b) Phenotype
- (c) Karyotype
- (d) Genome

Answer: karyotype

534. If the coding sequence on the DNA is AATIGCT, the sequence in the mRNA will be:

[2014]

- (a) AAUOCGT
- (b) UUAACGA
- (c) TTAACGA
- (d) UUTTCGT

Answer: TTAACGA

535. Gene and chromosomes show parallel behavior except:

[2014]

- (a) Number
- (b) Inheritance
- (c) Heredity
- (d) Composition

Answer: number

536. Replication progresses at a rate of about 50 base pairs per second in:

[2013]

- (a) Bacteria
- (b) Virus
- (c) Eukaryote
- (d) All of the above

Answer: eukaryote

537. Avery, Macleod and McCarty repeated the Griffith experiment in the year:

[2013]

- (a) 1869
- (b) 1928
- (c) 1944
- (d) 1952

Answer: promoter

538. The two chains of DNA occur side by side in a:

[2013]

- (a) Straight direction
- (b) Parallel but straight
- (c) Parallel but opposite
- (d) Parallel, opposite and folded spirally

Answer: parallel, opposite and folded spirally

539. What will be the anti-coden of AUG?

[2013],[2008]

- (a) TAC
- (b) ATC
- (c) UAC
- (d) UTC

Answer: UAC

540. A specific nudeotide sequence on DNA molecule to which RNA polymerase attaches to initiate transcription of mRNA from a gene is called:

[2014]

- (a) Poly genes
- (b) Genome
- (c) Promoter
- (d) Pletoropy

Answer: paromoter

541. How many atoms of oxygen in R.N.A are greater than D.N.A? [2012]

- (a) One
- (b) Two
- (c) Three
- (d) Four

Answer: one

542. During replication which sequence of nucleotides would bond with the DNA sequence TATGA? [2011]

- (a) AUAGA
- (b) ATACA
- (c) UAUGA
- (d) ATACT

Answer: ATACT

543. Diameter of histone is: [2011]

- (a) 1 nm
- (b) 2 nm
- (c) 3 nm
- (d) 4 nm

Answer: 2nm

544. The number of nitrogenous base common in both D.N.A and R.N.A are; [2011]

- (a) Two
- (b) three
- (c) five
- (d) four

Answer: three

545. Which one of the following diseases is due to point mutation? [2010]

- (a) Down syndrome
- (b) Klinefelter syndrome
- (c) Phenylketonuria
- (d) Turner syndrome

Answer: phenylketonuria

546. The term Gene was coined by: [2010]

- (a) Johnson
- (b) Corren
- (c) Tschmarch
- (d) Purkinje

Answer: johanson

547. Two parents strands of DNA molecules are: [2009]

- (a) Parallel
- (b) Antiparallel
- (c) both
- (d) None

Answer: antiparallel

548. In chromosome, the material controlling heredity is: [2009]

- (a) Histone
- (b) RNA
- (c) DNA
- (d) All of above

Answer: DNA

549. The term BIVALENT means:

[2008]

- (a) Two chromatids
- (b) Two chromosomes
- (c) Four chromatids
- (d) Four chromosomes

Answer: two chromosomes

550. If the sequence of the one strand of DNA is ATGCTC, the sequence of the other strand would be: [2008]

- (a) CACGTC
- (b) TAGCATG
- (c) TACGAG
- (d) GACGTG

Answer: TACGAG

551. Which of these are carries of genetic information? [2006]

- (a) rRNA
- (b) mRNA
- (c) DNA
- (d) Nucleotides

Answer: DNA

552. Which one of the following is the additional function of the embryonic membranes? [2005]

- (a) Respiration and reproduction
- (b) Reproduction and nourishment
- (c) Storage of waste products
- (d) Respiration and storage of waste products

Answer: respiration and storage of waste products

553. DNA and histones together form a bead like structure called; [2005]

- (a) Mesosome
- (b) Polysome
- (c) Nucleosome
- (d) Centrosome

Answer: nucleosome

554. In sickle cell haemoglobin only one glumatic acid of normal haemoglobin is replaced by; [2005]

- (a) Valine acid
- (b) Alanine acid
- (c) Arginine acid
- (d) Methionine acid

Answer: valine acid

555. The process of cell division result in: [2011]

- (a) two daughter cells
- (b) sister chromatids
- (c) mitosis
- (d) unregulated growth

Answer: two daughter cells

556. Replication of DNA occurs during: [2014], [2012]

- (a) Interphase
- (b) Prophase
- (c) Metaphase
- (d) Anaphase

Answer: interphase

557. Cell death due to tissue damage is called: [2013]

- (a) Cancer
- (b) Apoptosis
- (c) Necrosis
- (d) Metastasis

Answer: necrosis

558. Condensation of chromosomes reaches to its peak during early; [2010], [2009]

- (a) Prophase
- (b) Metaphase
- (c) Anaphase
- (d) Telophase

Answer: metaphase

559. In which of the following organs of man does meiosis occur; [2005]

- (a) Liver
- (b) Kidney
- (c) Ovaries
- (d) Heart

Answer: ovaries

560. In mitochondria UGA Codon act to specify; [2015]

- A) Arginine
- B) Glutamic acid
- C) Tryptophan
- D) Valine

Answer: tryptophan

561. Both DNA and RNA are synthesized by the process of; [2014]

- (a) Transcription
- (b) Replication
- (c) Polymerization
- (d) PCR

Answer: polymerization

562. The fluorescent pigments in the eyes of fruit fly is an example of; [2016]

- (a) Over dominance
- (b) Complete dominance
- (c) Incomplete
- (d) Co-dominance

Answer: Over dominance

563. Stop codons are: [2016]

- (a) UAA,UAG,UGA
- (b) UGC,UCG,AAA
- (c) UUG,UCG,UCA
- (d) UAA,UGC,UCA

Answer: (a) UAA,UAG,UGA

564. 33 DNA polymerase adds nucleotides to the 3' end of the primer so the direction of replication will be? [2017]

- A) 5' to 3'
- B) 3' to 5'
- C) 3' end of the primer to 3' end of template strand
- D) 3' end of the template strand to the 3' end of the primer

answer: 5' to 3'

565. XX-XY type of sex determination pattern is present in which of the following organisms?

[2017]

- A) Humans
- B) Butterflies
- C) Grasshopper
- D) Drosophila

Answer: butterfly

566. how many nucleotides are there in 12 mRNA codons [2017]

- a. 12
- b. 24
- c. 36
- d. 48

answer: 36

567. 36. which one of the following is non sense codons [2017]

- a. UGA
- b. UAU
- c. CAU
- d. GAU

answer: UGA

568. . if a disorder is not present in a child family but the fetus itself is infected before birth, it is known as [2017]

- a. somatic mutation
- b. heredity mutation
- c. germ line mutation
- d. de novo mutation

answer: de novo mutation

569. what will happen when nucleotide is deleted from a gene having 9 nucleotides in its transcriptional units [2017]

- a. change in phenotype
- b. no change in phenotype
- c. syntheses of three amino acids
- d. syntheses of four amino acids

answer: change in phenotype

570. 39. male having Down syndrome have sex chromosomes [2018]

- a. XXY
- b. XY
- c. XYY
- d. XYYY

Answer XY

571. in protein synthesis the initiator tRNA carrying amino acid methionine land on which site of ribosome [2018]

- a. E site
- b. P site

- c. A site
d. C site

Answer: P site

572. polyploidy is more common in [2018]
a. plants
b. animals
c. bacteria
d. Virus

answer: plants

573. amino acid leucine is coded by how many codons [2018]
a. 1
b. 2
c. 4
d. 6

Answer: 6

CHAPTER-24: EVOLUTION

574. Human arm is homologous with: [2014]
(a) Sea flipper
(b) Octopus Tentacle
(c) Bird wing
(d) Both A and C

Answer: both a and c

575. A bird's wings are homologous to: [2011]
(a) fishes tail fin
(b) dog's front legs
(c) mosquito's wings
(d) alligator's claws

Answer: dogs front legs

576. An inherited characteristic that increases an organism's ability to survive and reproduce in its specific environment is called: [2011]
(a) radiation
(b) adaptation
(c) vestigial organ
(d) speciation

Answer: adaptation

577. Appendix is vestigial in man but may play a role in: [2013], [2009]
(a) Digestion
(b) Excretion
(c) Movement
(d) Immunity

Answer: immunity

578. The modern horse is called: [2008]
(a) equus
(b) Eohippus
(c) Meshippus
(d) Miohippus

Answer: equus

579. Crop rotation leads to: [2008]
(a) Increase in the soil nutrient
(b) more aeration of soil
(c) Soil fertility
(d) All

Answer: all

580. Wings of a bird and fore limbs of man are: [2008]
(a) Homologous
(b) Analogous
(c) Acquired
(d) Vestigial

Answer: homologous

581. In the human body all the given organs are vestigial except: [2005]
(a) Appendix
(b) Leg muscles
(c) Coccyx
(d) Nictitating membrane

Answer: leg muscles

582. The theory of uniformitarianism was proposed by: [2014]
(a) Hutton and Lyell
(b) Lamarck
(c) George Cuvier
(d) Darwin

Answer: hutton and lyell

583. The theory of new creation was composed by: [2014]
(a) George Cuvier
(b) James Hutton
(c) Louis Agassiz
(d) Wallace

Answer: Louis Agassiz

CHAPTER-25: MAN AND HIS ENVIRONMENT

584. Ozone layer is present in the: [2011]
(a) Troposphere
(b) stratosphere
(c) Mesosphere
(d) atmosphere

Answer: (b) stratosphere

585. All of the following are non-renewable resources of energy EXCEPT. [2010]
(a) Forests
(b) Iron
(c) Petroleum
(d) Natural gas

Answer: (a) Forests

586. Chlorofluorocarbons are mainly responsible for: [2010]
(a) Air pollution

- (b) Water pollution
- (c) Acid rain
- (d) Ozone layer depletion

Answer: (d) Ozone layer depletion

587. Food is renewable resource due to: **[2008]**

- (a) Mechanical forming
- (b) Improved crop varieties
- (c) Continuous photosynthesis
- (d) pest control

Answer: (c) Continuous photosynthesis

588. Green house effect is NOT produced by the abundance of the gas called; **[2006]**

- (a) Methane
- (b) CO_2
- (c) Nitrous oxide
- (d) Sulphur dioxide

Answer: (d) Sulphur dioxide

589. A study of communities in relation to environment is called: **[2014]**

- (a) Social ecology
- (b) Synecology
- (c) Autoecology
- (d) Heteroecology

Answer: (b) Synecology

590. Abacterium that converts NO_2 to NO_3 is: **[2012]**

- (a) Rhizobium
- (b) Bacillus
- (c) Nitrosomonas
- (d) Nitrobacter

Answer: (d) Nitrobacter

591. The association in which an organism gets advantage and the other suffers is called: **[2008]**

- (a) symbiosis
- (b) parasitism
- (c) predation
- (d) mutualism

Answer: (b) parasitism

592. Each organism has a definite functional position different from either organism s of the locally is called: **[2008]**

- (a) Community
- (b) Niche
- (c) Habitat
- (d) species

Answer: (b) Niche

593. The ecological factor which does NOT change from place to place is: **[2006]**

- (a) Precipitation
- (b) Temperature
- (c) Gravity
- (d) Light

Answer: (c) Gravity

594. In an ecosystem having four trophic levels. The amount of energy fixed at producers level is 23197

kcal. About how much energy will be fixed by the primary carnivores? **[2006]**

- (a) 2317 Kcal
- (b) 232 kcal
- (c) 1564 kcal
- (d) None of the above

Answer: (a) 2317 Kcal

595. Rabbits, pabulus, rats grasshoppers and grasses constitute a: **[2006]**

- (a) Habitat
- (b) Biome
- (c) Community
- (d) Population

Answer: (c) Community

596. Which one of the following is a marine alga; **[2005]**

- (a) Nostoc
- (b) Volvox
- (c) Spirogyra
- (d) Ulva

Answer: (b) Volvox

597. Ozone gas is: **[2013]**

- (a) Greenish, tasteless and light
- (b) Greenish blue, bitter in taste
- (c) Blue. Poisonous and explosive
- (d) Purple yellow, non poisonous, non explosive

Answer: (c) Blue. Poisonous and explosive

598. C.F.C gases are produced from: **[2011]**

- (a) Burning of coal
- (b) burning of charcoal
- (c) Automobiles engines
- (d) Refrigeration and air conditions

Answer: (d) Refrigeration and air conditions

599. bacterium that converts NO_2 to NO_3 is **[2018]**

- a) Rhizobium
- b) Bacillus
- c) Nitrosomonas
- d) Nitrobacter

Answer: nitrobacter

600. rabbits, pabulus, rats grasshopper constitute a **[2018]**

- a) Habitat
- b) Biome
- c) Community
- d) Population

Answer: community

601. The first stage in development of xerose is appearance of **[2018]**

- A) Foliose lichen
- B) Crustose lichen
- C) Fructose lichen
- D) Climax stage

Answer:

19. Which one of the following is a shrub
[2018]

- a. Parmelia
- b. Aster
- c. Rhus
- d. Banana

Answer: rhus

Chapter-26: Biotechnology

602. Any DNA molecule having foreign DNA is called: [2014]

- (a) Mutant
- (b) Recombinant
- (c) Crossing over
- (d) All of the above

Answer: (b) Recombinant

603. A plant or animal modified by genetic engineering is called:
[2013]

- (a) Transgenic
- (b) Probe
- (c) Recombinant
- (d) Plasmid

Answer: (a) Transgenic

604. The primers used in polymerase chain reaction has a sequence of bases: [2013], [2009]

- (a) 8
- (b) 12
- (c) 16
- (d) 20

Answer: (d) 20

605. Restriction enzymes are of great use in genetic engineering because: [2012]

- (a) They cut DNA at a specific base level
- (b) They cut D.N.A at several specific levels
- (c) They help in binding the pieces of D.N.A
- (d) They are nuclease

Answer: (a) They cut DNA at a specific base

level

606. A cross between dissimilar individuals to bring together their best characteristics is called:

[2011]

- (a) Genetic Engineering
- (b) Hybridization
- (c) Interbreeding
- (d) Sequencing

Answer: (b) Hybridization

607. Organism that contain genes from other organisms are called:

[2011]

- (a) Mutagenic
- (b) Transgenic
- (c) Clones
- (d) Sequencing

Answer: (b) Transgenic

608. Tissue plasminogen activator (TPA) is used for:
[2010]

- (a) Treating anemia
- (b) Bonemarrow transplant
- (c) Dissolving blood clot
- (d) Treatment of cancer

Answer: (c) Dissolving blood clot

609. Which one of the following comes into existence when bacterial plasmid naturally modified to produce it?

[2016]

- (a) pBR 322
- (b) Npq 303
- (c) oSR 210
- (d) kMG 319

Answer : pBR322

610. That 1st field trial of genetically engineered plants occurred in France and USA in: [2016]

- (a) 1980
- (b) 1982
- (c) 1984
- (d) 1986

Answer: 1986

611. Individuality of every persons is maintained by nucleotide genome sequence difference of:

- a. 1%
- b. 2%
- c. 3%
- d. 5%

Answer: 1%

612. which one of the following is suitable vector to be incorporated with the large external DNA fragment [2017]

- a) Small size vector
- b) Large size vector
- c) Large size vector with no origin of replication
- d) Small size of vector with no origin of replication

Answer: small size vector

613. if one of the following component is missing , bacteria cannot increase the number of its plasmid copies [2017]

- a) Antibiotic resistance genes
- b) Origin of replication
- c) Cloning site
- d) Ligase enzyme

Answer origin or replication

614. what will happen if a vector (plasmid) is cut with a different restriction enzyme which cuts the external DNA to be incorporated in the vector [2018]

- a) Ligation
- b) No ligation
- c) Tight ligation
- d) Cloning

Answer: ligation

615. all of the following acts as cloning vectors except [2018]

- a. BAC
- b. YAC
- c. Cosmids
- d. EcoRI

Answer EcoRI

CHAPTER-27: BIOLOGY AND HUMAN WELFARE

616. Live attenuated vaccines are used to treat all of the following diseases except: [2012],[2010]

- (a) Typhoid and plague
- (b) Polio and measles
- (c) Cholera and rabies
- (d) Mumps and influenza

Answer: (c) Cholera and rabies

617. A cloned baby sheep "Dolly" was attributed to: [2011]

- (a) Four Parents
- (b) Three Parents
- (c) Two parents
- (d) One Parent only

Answer: (d) One Parent only

618. A cloned baby sheep Dolly was identical to the parent that: [2010],[2009]

- (a) Gave birth to the dolly
- (b) Donated reproductive cells
- (c) Donated somatic cell
- (d) Both A and B

Answer: (c) Donated somatic cell

619. Live attenuated vaccines are used to treat all of the following diseases EXCEPT? [2010]

- (a) Cholera and rabies
- (b) Typhoid and plague
- (c) Mumps and measles
- (d) Yellow fever and rubella

Answer: (a) Cholera and rabies

620. Cloned dolly was identical to the: [2009]

- (a) Parents, who gestated and gave birth to dolly
- (b) Parent, who donated egg-cell

(c.) Parent, who donated somatic-cell

(d) Both (b) and (c)

Answer: (c.) Parent, who donated somatic-cell

cell

621. Quinine, a drug very effective against malaria, is derived from the bark of; [2005]

- (a) Quina quina
- (b) Lathyrus plant
- (c) Calotropis plant
- (d) Cinchona plant

Answer: (d) Cinchona plant.

622. which of the following vaccine has least side effect [2017]

- a) Attended vaccine
- b) Killed vaccine
- c) Subunit vaccine
- d) Toxoid vaccine

623. which of the following is not daughter cell [2018]

- a) Buffalo
- b) Mule
- c) Elephant
- d) Yak

Answer: buffalo

624. which of the following is summer variety [2018]

- a) Figs
- b) Cabbages
- c) Oranges
- d) Pears

Answer: figs

625. the amount of methane in biogas is approximately [2018]

- A) 10-30%
- B) 50-90%
- C) 50-75%
- D) 60-75%

Answer: 50-75%

MATHS

ETEA Engineering 2019

1. $\int_1^2 (\sqrt{x} + \frac{1}{\sqrt{x}}) \sqrt{x} dx :$
 a) 5/2 b) $2^{3/2} - 1$
 c) $\frac{1}{2}$ d) 2

2. The maclaurin's expansion of coshx is:

3. If $f(x) = 16\sqrt{x}$ then $f''(4) =$
 a) 1/4 b) -1/4
 c) 1/16 d) -1/2

4. Maths

5. Maths

6. $\int \frac{1}{\cos^2 2x} dx =$
 a) $\frac{1}{2} \csc 2x + c$
 b) $\frac{1}{2} \ln[\sec 2x + \tan 2x] + c$
 c) $\frac{1}{2} \tan 2x + c$
 d) $\frac{1}{2} \ln[\cos(2x) - \cot(2x)] + c$

7. Limit

8. For a function $f(x) = x^2 - 5x + 2$. Newton's-Raphson method fails for
 a) $x_0 = 2/5$ b) $x_0 = -5/2$
 c) $x_0 = 5/2$ d) $x_0 = -2/5$

9. $\frac{d}{dx} x^a = ?$
 a) ax^{a-1} b) 0
 c) $x^a \log_a a$ d) x^a

10. $\frac{d}{dx} \left(\frac{1}{x} \right) =$
 a) x^2 b) $-x^2$
 c) $\frac{1}{x^2}$ d) $-\frac{1}{x^2}$

11. The sign of the tangent to the curve $y = x^3 + 5$ at the point (1,2) is:
 a) 6 b) 2
 c) 5 d) 3

12. Maths

13. A homogenous equation of degree two has parallel lines only, when :

14. The order of equation $(2x - y + 3)dx - (y - 2x - 2)dy = 0$
 a) 0 b) 1
 c) 2 d) 3

15. Which one of the following function are homogenous?
 a) $x \sin y + y \sin x$
 b) $x e^{y/x} + y e^{x/y}$
 c) $x^2 - x^2 y$
 d) $\arcsin xy$

16. Find f_0 of $f(x, y) = \frac{\sin^{-1} xy}{x}$ is
 a) $\frac{x}{\sqrt{1-x^2 y^2}}$ b) $\frac{x}{\sqrt{1-x-y^3}}$
 c) $\frac{-y}{\sqrt{1-x^2 y^2}}$ d) $\frac{-y}{1-x^2 y^2}$

17. For non linear function $f(x) = 0$, Newton-

Naphson method is

a) b) c) d)

18. The accuracy of the approximation can be improved when approximating strip has:
 a) parabolic arc
 b) squares
 c) tripozoids
 d) rectangles

19. A vector can be multiplied by a number, the number may be
 a) Dimensionless
 b) dimension scalar
 c) negative
 d) all a, b and c are correct

20. Equations having a common solution are called.
 a) Linear equations
 b) homogeneous equations
 c) simultaneous equations
 d) none of the above

21. Transpose of a rectangular matrix is a:
 a) rectangular matric
 b) diagonol matrix
 c) square matrix
 d) scalar matrix

22. When a selection of objects is made without paying regard to order of selection, it is called the:
 a) permutation b) combination
 c) series d) sequence

23. Two factorization of $x^2 + x$ is;
 a) $(z + \sqrt{6})(x - \sqrt{6})$
 b) $(z + 6)^2$
 c) $(z + \sqrt{6}t)(x + \sqrt{6}t)$
 d) $(z + \sqrt{6}t)(x - \sqrt{6}t)$

24. if slope of a line is 2 then slope of the line perpendicular to this line is equal to
 a) -2 b) -1/2
 c) 2 d) 0

25. A line $x =$
 B touch a circle
 $x^2 + y^2 - 6x - 4y - 12 = 0$ at:
 a) (2,8) b) (8,-2)
 c) (8,2) d) (-2,8)

26. The line $y = mx + c$ intersects the circle $x^2 + y^2 = a^2$ at the mast of ____ points
 a) 1 b) 2
 c) 3 d) 4

27. The equation $(x+4)^2 + (y-1)^2 = b$ represents a circle with radius
 a) \sqrt{b} b) 6
 c) 0 d) 1

28. A line $y = -x - c$, will touch a parabola $x^2 - \beta y$ only when
 a) $\frac{1}{2}$ b) -2
 c) 2 d) $-\frac{1}{2}$
29. The focus of the parabola $y^2 = -B(x-3)$ is ?
 a) $(0,1)$ b) $(1,0)$
 c) $(0,1)$ d) $(1,1)$
30. A differential equation is considered to be ordinary if it has;
 a) more dependent variable
 b) more than one dependent variable
 c) one independent variable
 d) more than one independent variable
31. The differential equation $2\frac{dy}{dx} + x^2y = x+2$
 a) linear
 b) non linear
 c) linear with fixed points
 d) undeterminable to be linear or non linear
32. The dimensions of angular momentum are C
 a) MLT^2 b) ML^2T^{-2}
 c) ML^2T^{-1} d) ML^3T^{-1}
33. Which one of the following statements is incorrect for vectors? C
 a) $|\vec{AB}| = |\vec{BA}|$ b) $|\vec{AB}| = |\vec{AB}|$
 c) $\vec{AB} = -\vec{AB}$ d) \vec{AB} north = \vec{AB} south
34. The reciprocal of the number 'i' is
 a) 1 b) -1
 c) i d) -i
35. $a^2 + b^2 =$
 a) $(a+b)(a-b)$ b) $(a+ib)(a-ib)$
 c) $(a+b)(a-ib)$ d) $(a+ib^2)(a-b)$
36. If A is a symmetric matrix, then A^t is
 a) A b) $|A|$
 c) 0 d) Diagonal matrix
37. If A is a matrix of order $m \times n$ and B is matrix of order $n \times p$ then order of BA is:
 a) $p \times m$ b) $p \times n$
 c) $n \times p$ d) $m \times p$
38. The scalar triple product of i, j, k and k, i is?
 a) 1 b) 0
 c) -1 d) 3
39. For three vectors a, b, c, $d(b+c) = b(d+c)$, then ?
 a) $a(b+c) = 0$ b) $c(a+b) = 0$
 c) $b(a+c) = 0$ d) $c(a+b) = 0$
40. For non-collinear vector A and B, the correct result is
 a) $pA + qB = 0$, $p \neq 0$, $q \neq 0$
 b) $pA + qB = 0$, $p = 0$, $q = 0$
 c) $pA + qB \neq 0$, $p = 0$, $q = 0$
 d) $pA + qB \neq 0$, $p \neq 0$, $q \neq 0$
41. Arithmetic mean between $2 + \sqrt{2}$ and $2 - \sqrt{2}$ is:
 a) 2 b) $\sqrt{2}$
 c) 0 d) 4
42. A function whose domain is the set of natural numbers is called
 a) identity function
 b) series
 c) sequence
 d) onto function
43. If sum of five arithmetic mean b/w a and b is 50, then their arithmetic mean is;
 a) 25 b) 50
 c) 10 d) 20
44. $\frac{\cos x \sec x}{\cos x} =$
 a) $\tan x$ b)
 c) d)
45. $\frac{\cos \theta - \tan \theta}{\sin \theta \sin \theta} =$
 a) $\tan(\frac{\theta - \varphi}{2})$ b) $\tan(\theta - \varphi)$
 c) $\tan(\frac{\theta - \varphi}{2})$ d) $-\tan(\theta - \varphi)$
46. The expression $\tan(3\theta) =$?
 a) $\frac{1 \tan \theta - \tan^3 \theta}{1 - \tan^3 \theta}$
 b) $\frac{3 \tan \theta - \tan^3 \theta}{1 + 3 \tan^3 \theta}$
 c) $\frac{3 \tan \theta - \tan^3 \theta}{1 - 3 \tan^3 \theta}$
 d) $\frac{1 \tan \theta + \tan^3 \theta}{1 - 3 \tan^3 \theta}$
47. Law of cosine states that :
 a) $a^2 = b^2 + c^2 - 2bc \cos \gamma$
 b) $b^2 = a^2 + c^2 + 2bc \cos \beta$
 c) $c^2 = a^2 + b^2 - 2bc \cos \gamma$
 d) $a^2 = b^2 + c^2 - 2bc \cos \alpha$
48. Numerical integration for single function is also called
 a) area b) volume
 c) numerical quadrature d) both A and C
49. Domain of $\sec[x]$ is ;
 a) $[-1, 1]$
 b) \mathbb{R}
 c) $\mathbb{R} \rightarrow [x]x = (2n+1)\pi/2, n \in \mathbb{Z}$
 d) $\mathbb{R} \rightarrow [x]x = n\pi, n \in \mathbb{Z}$
50. Principle value of $\cos^{-1}[\cos(5)]$?
 a) 5 b) $\pi - 5$
 c) $5 - \pi$ d) $2\pi - 5$
51. The relation $\sec[\arctan x] =$?
 a) $\sqrt{x^2 - 1}$ b) $\frac{1}{\sqrt{1+x^2}}$
 c) $\sqrt{x^2 + 1}$ d) $\frac{1}{\sqrt{1-x^2}}$
52. $\int x^2 dx =$ C
 a) $x^2 + c$ b) $\pi^2 + c$

- c) $\frac{x^{x+3}}{x+3} + c$ d) $\pi x^{x-1} + c$
53. The n^{th} term of arithmetic geometric mean is
 a) $[a+(n-1d)]r^n$ b) $[a+(n-1d)]r^{n-1}$
 c) $[a+(n-1d)]r$ d) $[a+nd]r^{n-1}$
54. ${}^5C_2 + {}^5C_3 =$
 a) 5C_3 b) 4C_1
 c) 5C_2 d) 4C_1
55. For independent events A and B, $P(A \cap B) = ?$
 a) $P(A) \cdot P(B/A)$ b) $P(A) \cup P(B)$
 c) $P(A) \cdot P(B)$ d) $P(A) \cap P(B)$
56. For a random experiment, all possible outcome are
 a) numerical space b) sample space
 c) event space d) both b and c
57. If x is so small that square and higher powers can be neglected then $(1+3x)^{-2} =$
 a) $1+9x$ b) $1-9x$
 c) $1+6x$ d) $1-6x$
58. The last term of the expansion are $(3x+3y)^{-2}$ is
 a) $7y^7$ b) $3^7 y^7$
 c) $21y^7$ d) y^7

59. Which one of the following equations is not a function of y with respect to x/
 a) $2x+3y = 6$
 b) $x^2 - y = 6x-5$
 c) $x^2 + y^2 = 16$
 d) $y = 4x^3 - 5x^3 + 3x - 7$

60. The inverse function for the following

functions $f(x) = \frac{x}{x+1}$ is:

- a) $f^{-1}(x) = \frac{x}{x+1}$ b) $f^{-3}(x) = xy+x$
 c) $f^{-3}(x) = -x-1$ d) $f^{-1}(x) = -\frac{x}{x+1}$

61. There may be _____ feasible solution of the feasible region.

- a) infinite b) limited
 c) finite d) defined

62. In linear programming, objective function and objective constants are

- a) solved b) linear
 c) quadric d) adjacent

CHAP NO 1 COMPLEX NUMBERS

- I) The multiplicative identity in the set of complex of number is ; **2018**
 a) (0,0) b) (0,1)
 c) (1,0) d) (1,1)
 ans: C
- II) For a non zero complex number number z , which of the following is true for " $1/z$ " **2018**
 a) $\frac{z}{|z|^2}$ b) $\frac{\bar{z}}{|z|^2}$
 c) $\frac{1}{|z|^2}$ d) $\frac{1}{z}$
 ans: a
- III) Which option is true for imaginary part of $(x-iy)^{-1}$: **2018**
 a) $\frac{-y}{x^2+y^2}$ b) $\frac{y}{x^2+y^2}$
 c) $\frac{iy}{x^2+y^2}$ d) $\frac{-y}{x^2+y^2} i$
 ans: b
- IV) One factor of polynomial $p(z) = z^3 + 5z^2 + 19z - 25$; **2018**
 a) $z+1$ b) $z-1$
 c) $z+i$ d) $z-i$
 ans: b
- V) $|Z| = |-Z|$ for a complex number Z , if only and if ot holds that: **2017**
 i) $Z = -Z$ ii) $Z = \bar{Z}$ iii) $Z = -\bar{Z}$
 a) only i holds b) i and ii both holds
 c) i, ii and iii holds d) either i and ii holds
 ans: c
- VI) If $x+iy = (5-3i)^3$, then x _____ **2017**
 a) (10,198) b) (10,-198)
 c) (-10,+198) d) (-10,-198)
 ans: d
- VII) Complexes exists in various coordination numbers, choose the coordination number which is less common
 a) 2 b) 4
 c) 55 d) 6
 ans: c
- VIII) Let $(f \circ g)(x) = \sqrt{x^2 - 1} - 1$ and $g(x) = x^2 + 1$, then $f(4) =$ _____ **2017**
 a) 1 b) -1
 c) 2 d) -2
 ans: a
- 1) $(5-4i)^{-1}$ can be written in the form of $x+iy$ as: **2010-79 Eng**
 (a) $\frac{5}{41} - \frac{4}{41}i$ (b) $\frac{5}{41} + \frac{4}{41}i$ (c) $\frac{5}{9} + \frac{4}{9}i$ (d) $\frac{5}{9} - \frac{4}{9}i$
- Hint:** Since $(a+ib)^{-1} = \frac{a}{a^2+b^2} + i \frac{-b}{a^2+b^2} \Rightarrow (5-4i)^{-1} = (5+(-4)i)^{-1} = \frac{5}{5^2+(-4)^2} + i \frac{-(-4)}{5^2+(-4)^2} = \frac{5}{41} + i \frac{4}{41}$
-
- 2) Which of the following is not the binary operation in \mathbb{N} **2010-86 Eng**
 (a) + (b) - (c) \times (d) None
- Hint:** As difference of two natural numbers is not always a natural number, e.g; $1-2 = -1 \notin \mathbb{N}$, so subtraction $(-)$ is not a binary operation in \mathbb{N}
-
- 3) Let $G = \{1, -1, i, -i\}$, then (G, \times) is **2010-117 Eng**
 (a) Group (b) Not a group (c) A belian group (d) None of the above

Hint:

4) From the adjacent table, it is clear that;

- (i) G is closed w r t \times (ii) \times is associative and commutative in G ,
 (iii) The identity element 1 and inverses of each element exist in G , so
 (G, \times) is an abelian group.

\times	1	-1	i	$-i$
1	1	-1	i	$-i$
-1	-1	1	$-i$	i
i	i	$-i$	-1	1
$-i$	$-i$	i	1	-1

2010-164 Eng

5) Product of the roots of the equation $ax^2 + bx + c = 0$, where
 $a, b, c \in \square$ and $a \neq 0$, is

- (a) $\frac{c}{a}$ (b) $-\frac{c}{a}$ (c) Undefined (d) 0

Hints: Products of the roots = $\frac{\text{Constant term}}{\text{Coefficient of } x^2} = \frac{c}{a}$ 6) Modulus of $a + bi$ is:**1 Eng**

- (a) $a^2 + b^2$ (b) $\sqrt{a^2 + b^2}$ (c) $\sqrt{a^2 - b^2}$ (d) $a - bi$

Hint: $|a + bi| = \sqrt{a^2 + b^2}$ 7) $(-1)^{-\frac{21}{2}} = \dots\dots\dots$

- (a) $-i$ (b) i (c) 1 (d) -1

2011-7 Eng

Hint: $(-1)^{-\frac{21}{2}} = (i^2)^{-\frac{21}{2}} = i^{-21} = i^{-1} = \frac{1}{i} = \frac{i}{i^2} = -i$ 8) The roots of equation $25x^2 - 30x + 9 = 0$, are.....

2011-27 Eng

- (a) Imaginary (b) rational and equal (c) rational and unequal (d) irrational and equal

Hint: As $b^2 - 4ac = (-30)^2 - 4(25)(9) = 900 - 900 = 0 \Rightarrow$ the roots are rational and equal.9) For what value of λ will the equation $x^2 - kx + 4 = 0$, have sum of roots equal to product of roots:

2011-34 Eng

- (a) 3 (b) -2 (c) -4 (d) 4

Hint: Sum of roots = Product of roots $\Rightarrow -\frac{-k}{1} = \frac{4}{1} \Rightarrow k = 4$ 10) $x^2 + 3 = \dots\dots\dots$

2011-47 Eng

- (a) $(x + i\sqrt{3})(x - i\sqrt{3})$ (b) $(x - i\sqrt{3})(x - i\sqrt{3})$ (c) $(x + i\sqrt{3})(x + i\sqrt{3})$ (d) $(ix + \sqrt{3})(ix - \sqrt{3})$

Hint: $x^2 + 3 = x^2 - (-1)(\sqrt{3})^2 = x^2 - (i\sqrt{3})^2 = (x + i\sqrt{3})(x - i\sqrt{3})$ 11) π in term of numbers is:

2011-134 Eng

- (a) a symbol (b) an integer (c) a rational number (d) an irrational number

Hint: π is the ratio of circumference of a circle to its diameter. It is an irrational number. Its approximate value is $\frac{22}{7}$ or 3.1412) $\forall a, b \in \square$ the property either $a = b$ or $a > b$ or $a < b$ is called:

2011-137 Eng

- (a) Archimedean (b) Trichotomy (c) Closure (d) Transitive

13) $\omega^{12} + \omega^{58} + \omega^{95} = \dots\dots\dots$

2011-141 Eng

- (a) 0 (b) 1 (c) ω (d) -1

Hint: $\omega^{12} + \omega^{58} + \omega^{95} = \omega^{12} + \omega^{57} \omega + \omega^{93} \omega^2 = (\omega^3)^4 + (\omega^3)^{19} \omega + (\omega^3)^{31} \omega^2 = 1 + \omega + \omega^2 = 0$

14) The set $G = \{1, -1, i, -i\}$ is a group under:

2011-151 Eng

- (a) + (addition) (b) - (subtraction) (c) \times (multiplication) (d) \div (division)

15) The compound proposition $(p \wedge q) \wedge \sim (p \vee q)$ is a.....

2011-154 Eng

- (a) Tautology (b) Sequence (c) Quantity (d) Self-contradiction

Hint: $(p \wedge q) \wedge \sim (p \vee q) \equiv (p \wedge q) \wedge (\sim p \wedge \sim q)$

Since $p \wedge q$ is true only if p and q are both true, while $(\sim p \wedge \sim q)$ is true only if both p and q are false, so

$(p \wedge q) \wedge (\sim p \wedge \sim q)$ is always false. Hence $(p \wedge q) \wedge \sim (p \vee q)$ is self-contradiction.

16) The multiplicative inverse of a complex number (a, b) is:

2011-157 Eng

- (a) $\left(\frac{a}{a^2+b^2}, \frac{-b}{a^2+b^2}\right)$ (b) $\left(\frac{a}{a^2+b^2}, \frac{-b}{a^2-b^2}\right)$ (c) $\left(\frac{-a}{a^2+b^2}, \frac{b}{a^2+b^2}\right)$ (d) $\left(\frac{-a}{a^2+b^2}, \frac{-b}{a^2+b^2}\right)$

17) If $(1+3i)$ is one of the roots of the quadratic equation, then the equation is:

2011-161 Eng

- (a) $x^2 - 2x + 10 = 0$ (b) $x^2 + 2x - 10 = 0$ (c) $x^2 - 4x + 8 = 0$ (d) $x^2 - 10 = 0$

Hint: If $\alpha = 1+3i$, then $\beta = 1-3i$, so $S = \alpha + \beta = 1+3i+1-3i = 2$ and $P = \alpha\beta = (1+3i)(1-3i) = 10$

$$\therefore x^2 - Sx + P = 0 \Rightarrow x^2 - 2x + 10 = 0$$

18) Which of the following is correct?

2012-44 Eng

- (a) Sum of the cube roots of unity is 0 (b) Product of the cube roots of unity is 1
(c) Each complex cube root of unity is reciprocal of the other (d) All of the above

19) The concept of complex numbers as $a + ib$ was given by

2012-48 Eng

- (a) Gauss (b) Newton (c) Archimedes (d) Leibniz

20) $\left(\frac{-1}{x}\right)^{-1} = \dots\dots\dots$

2012-52 Eng

- (a) $\frac{1}{x}$ (b) x (c) $-\frac{1}{x}$ (d) -x

Hint: $\left(\frac{-1}{x}\right)^{-1} = \left(\frac{x}{-1}\right)^1 = -x$

21) What will be the remainder when $x^4 + 2x^3 - 2x - 3$, is divided by $(x + 2)$?

2012-60 Eng

- (a) -7 (b) -23 (c) -1 (d) None

Hint: $x - a = x + 2 \Rightarrow a = -2$, So Remainder = $P(a) = P(-2) = (-2)^4 + 2(-2)^3 - 2(-2) - 3 = 1$

22) $|Z_1 + Z_2|$ is:

2012-64 Eng

- (a) $= |Z_1| + |Z_2|$ (b) $\geq |Z_1| + |Z_2|$ (c) $= |Z_1||Z_2|$ (d) $\leq |Z_1| + |Z_2|$

23) The $x + iy$ form of $(1 - 3i)^{-1}$ is:

2012-77 Eng

- (a) $\frac{1}{10} + \frac{3i}{10}$ (b) $-\frac{1}{10} - \frac{3i}{10}$ (c) $\frac{1}{3} + \frac{3i}{5}$ (d) $\frac{3}{10} - \frac{3i}{10}$

Hint: As $Z^{-1} = \frac{\bar{Z}}{|Z|^2}$, so $(1 - 3i)^{-1} = \frac{(1 + 3i)}{|1 - 3i|^2} = \frac{1 + 3i}{1^2 + (-3)^2} = \frac{1}{10} + \frac{3}{10}i$

24) Which of the following is a conditional equation?

2012-112 Eng

- (a) $(x + 2)^3 = x^3 + 6x^2 + 12x + 8$ (b) $(x - 5)^2 = x^2 - 10x + 25$
(c) $\sin^2 \theta = 1 - \cos^2 \theta$ (d) $x - 1 = 5$

Hint: An equation which is true for finite number of values of the variable(s) is called a conditional equation.

25) $ax^2 + bx + c = 0$ will NOT be a quadratic equation if:

2012-127 Eng

- (a) $b \neq 0, c = 0$ (b) $a \neq 0, b = 0$ (c) $a = 0$ (d) $b = 0$

Hint: If $a = 0$, $ax^2 + bx + c = 0$, becomes $bx + c = 0$, which is linear and not quadratic

26) $-i^{48} = \dots\dots\dots$

2012-146 Eng

- (a) i (b) -i (c) -1 (d) 1

Hint: If r is the remainder obtained when an integer $n > 3$ is divided by 4, then $i^n = i^r$ and $i^{-n} = i^{-r}$ where $0 \leq r < 4$.

Hence $-i^{48} = -i^0 = -1$

27) Factors of $x^2 + 9$ are:

2012-149 Eng

- (a) $(x + 3)(x - 3)$ (b) $(x + 3i)(x - 3i)$ (c) $(x - 3)(x - 3)$ (d) $(x + 3i)(x + 3i)$

Hint: $x^2 + 9 = x^2 - (-1)3^2 = x^2 - i^2 3^2 = x^2 - (3i)^2 = (x + 3i)(x - 3i)$

28) $ax + \frac{b^2}{a} = c^2$ is:

2012-164 Eng

- (a) an equation of power 5 (b) a linear equation (c) a cubic equation (d) a quadratic equation

Hint: An equation in variable x is linear if the highest power of x in the equation is 1.

29) If $A = \{0\}$ then the number of elements in the power set of $A = \dots$

2012-170 Eng

- (a) 0 (b) 1 (c) 2 (d) 3

Hint: If number of elements in a set $A = n$, then number of elements in the power set of $A = 2^n$

30) The quadratic equation whose roots are 3 and 4 is

2012-196 Eng

- (a) $x^2 - 7x + 12 = 0$ (b) $x^3 + 7x + 12$ (c) $x^3 + 12x + 7$ (d) $x^2 - 12x + 7$

Hint: Here, $S = 3 + 4 = 7$, $P = 3 \times 4 = 12$, so $x^2 - Sx + P = 0 \Rightarrow x^2 - 7x + 12 = 0$

31) The sum of the squares of two numbers is 100. One number is 2 more than the other. The numbers are:

2013-3 Eng

- (a) 4, 6 (b) 6, 8 (c) 8, 10 (d) 10, 12

Hint: Let the numbers are x and $x + 2$, then $x^2 + (x + 2)^2 = 100 \Rightarrow 2x^2 + 4x - 96 = 0 \Rightarrow x^2 + 2x - 48 = 0$
 $\Rightarrow (x + 8)(x - 6) = 0 \Rightarrow x = -8, 6$. If we take $x = 6$, then $x + 2 = 8$

32) A groupoid $(S, *)$ is called a semi group, if $*$ is:

2013-6 Eng

- (a) Commutative in S (b) Associative in S (c) Distributive in S (d) Transitive in S

33) If $a, b, c \in \mathbb{Q}$ and $a > b > c \Rightarrow a > c$, then this property is called:

2013-23 Eng

- (a) Multiplicative property of inequality (b) Additive property of inequality
 (c) Transitive property of inequality (d) Trichotomy property of inequality

34) If A and B are two sets, then $A' \cup B' = \dots$

2013-53 Eng

- (a) $(A \cup B)'$ (b) $(A \cap B)'$ (c) $A' \cap B'$ (d) $(B \cup A)'$

Hint: By De-Morgan's law, $A' \cup B' = (A \cap B)'$

35) Let Z be the set of all integers and "o" is defined as, $a \circ b = 3a - b$, where $a, b \in Z$, then "o" is not:

2013-59 Eng

- (a) Commutative (b) Associative (c) Distributive (d) All of the above

36) In the quadratic equation $ax^2 + bx + c = 0$, product of the roots is:

2013-69 Eng

- (a) $\frac{b}{a}$ (b) $\frac{c}{a}$ (c) $\frac{c}{a}$ (d) $-\frac{b}{a}$

37) In the quadratic equation, $ax^2 + bx + c = 0$, if $a = 0$, then it:

2013-76 Eng

- (a) Becomes a linear equation (b) Becomes a polynomial
 (c) Becomes an exponential equation (d) Remains quadratic equation

38) The numbers which have $\sqrt{-1}$ as one factor are called:

2013-83 Eng

- (a) Real numbers (b) Complex numbers (c) Irrational numbers (d) Imaginary numbers

39) The roots of the equation $25x^2 - 30x + 9 = 0$ are:

2013-96 Eng

- (a) Imaginary (b) Rational and equal (c) Rational and unequal (d) Irrational and equal

Hint: For, $25x^2 - 30x + 9 = 0$, we have $a = 25$, $b = -30$, $c = 9$. Since $b^2 - 4ac = (-30)^2 - 4(25)(9) = 900 - 900 = 0$

So the roots are rational and equal.

40) For what value of k will equation, $x^2 - kx + 4 = 0$, have the sum of roots equal to the product of roots?

2013-109 Eng

- (a) 3 (b) -2 (c) -4 (d) 4

Hint: Sum of roots = Product of roots $\Rightarrow \frac{-b}{a} = \frac{c}{a} \Rightarrow \frac{-(-k)}{1} = \frac{4}{1} \Rightarrow k = 4$

41) The product of the fourth roots of unity is:

2013-113 Eng

- (a) Zero (b) 1 (c) -1 (d) $-i$

Hint: $1(-1)(i)(-i) = i^2 = -1$

42) Which of the following sets has closure property with respect to multiplication? 2013-119 Eng

- (a) $\{-1, 1\}$ (b) $\{-1\}$ (c) $\{-1, 0\}$ (d) $\{0, 2\}$

Hint: $(-1)(-1) = 1, (-1)(1) = -1, 1 \times 1 = 1$

43) If A and B are two sets, Then $A' \cap B' = \dots\dots\dots$

2014-4 Eng

- (a) $(A \cap B)'$ (b) $A' \cup B'$ (c) $(A \cup B)'$ (d) $(B \cap A)'$

Hint: By De-Morgan's Law, $A' \cap B' = (A \cup B)'$

44) Modulus of complex number $4 - 3i$ is:

2014-6 Eng

- (a) -5 (b) 7 (c) 1 (d) 5

Hint: $|4 - 3i| = \sqrt{4^2 + (-3)^2} = \sqrt{16 + 9} = \sqrt{25} = 5$

45) The Concept of complex numbers as $a + bi$ was given in 1795 by: _____

2014-15 Eng

- (a) Gauss (b) Archimedes (c) George Cantor (d) Rene Descartes

46) $(-1)^{\frac{31}{2}}$ is equal to:

2014-16 Eng

- (a) $-i$ (b) i (c) 1 (d) -1

Hint: $(-1)^{\frac{31}{2}} = (i^2)^{\frac{31}{2}} = i^{-31} = i^{-3} = \frac{1}{i^3} = \frac{i}{i^4} = i$

47) Which of the following is false?

2014-24 Eng

- (a) The cancellation laws hold in a group (b) Each element in a group has a unique inverse.
(c) A group can be an empty group (d) None of the above

48) If α and β are the roots of the equation, $5x^2 + 5x + 4 = 0$, then $\alpha\beta = \dots\dots\dots$

2014-25 Eng

- (a) $\frac{4}{5}$ (b) $\frac{5}{4}$ (c) $\frac{2}{3}$ (d) -1

Hint: For $5x^2 + 5x + 4 = 0$, we have $a = 5, b = 5, c = 4$ and Product of roots $= \alpha\beta = \frac{c}{a} = \frac{4}{5}$

49) For what value of k will equation, $x^2 + kx - 5 = 0$, have the sum of roots equal to the product of roots?

2014-34 Eng

- (a) 3 (b) -5 (c) -2 (d) 5

Hint: For $x^2 + kx - 5 = 0$, we have $a = 1, b = k, c = -5$. As $\alpha + \beta = \alpha\beta \Rightarrow \frac{-b}{a} = \frac{c}{a} \Rightarrow \frac{-k}{1} = \frac{-5}{1} \Rightarrow k = 5$

50) Which of the following is not a quadratic equation?

2014-36 Eng

- (a) $5x^2 + 3x = 0$ (b) $3x^2 - 37 = 0$ (c) $x + 3 = \frac{5}{x}$ (d) $3 - \frac{1}{x} = 5$

Hint: A 2nd degree equation is called quadratic. The equation $3 - \frac{1}{x} = 5 \Rightarrow \frac{1}{x} = -2 \Rightarrow x = -\frac{1}{2}$, is not quadratic.

51) Which of the following sets has closure property w.r.t multiplication?

2014-54 Eng

- (a) $\{-1\}$ (b) $\{-1, 0\}$ (c) $\{0, 2\}$ (d) $\{-1, 0, +1\}$

Hint: From the table, it is clear that $\{-1, 0, +1\}$ is closed w.r.t \times .

\times	-1	0	1
-1	1	0	-1
0	0	0	0
1	-1	0	1

52) The sum of the squares of two numbers is 65. The sum of two numbers is 11.

The numbers are :

2014-

55 Eng

(a) 2, 9

(b) 4, 7

(c) 3, 8

(d) 5, 6

Hint: Let one number = x , then the other number = $11 - x$. According to the given condition, we have

$$x^2 + (11 - x)^2 = 65 \Rightarrow 2x^2 - 22x + 121 = 65 \Rightarrow 2x^2 - 22x + 56 = 0 \Rightarrow x^2 - 11x + 28 = 0 \Rightarrow x^2 - 7x - 4x + 28 = 0 \\ \Rightarrow x(x - 7) - 4(x - 7) = 0 \Rightarrow (x - 7)(x - 4) = 0 \Rightarrow x = 4, 7$$

53) The reflective property of equality of real numbers is that, $\forall a \in \mathbb{R}$

2014-56 Eng

(a) $a = a$

(b) $a \neq a$

(c) $a \leq a$

(d) $a \geq a$

54) Let “*” and “o” be the two binary operations in a non-empty sets S. The operation “*” is said to be left distributive over “o” if:

2014-74 Eng

(a) $a * (b \circ c) = (a * b) \circ (a * c)$

(b) $(b \circ c) * a = (b * a) \circ (c * a)$

(c) $a \circ (b * c) = (a \circ b) * (a \circ c)$

(d) $(b * c) \circ a = (b \circ a) * (c \circ a)$

55) Which of the following is not property of fourth roots of unity?

2014-76 Eng

(a) Complex fourth roots of unity are conjugate of each other.

(b) Sum of the fourth roots of unity is 0.

(c) Product of fourth roots of unity is 1.

(d) Real fourth roots of unity are additive inverse of each other.

Hint: $1(-1)(i)(-i) = i^2 = -1 \neq 1$

56) Which of the following is a factor of $x^3 + 2x^2 - 5x - 6$?

2014-84 Eng

(a) $x - 1$

(b) $x - 2$

(c) $x + 2$

(d) $x - 3$

Hint: Here $P(x) = x^3 + 2x^2 - 5x - 6 \Rightarrow P(2) = 2^3 + 2(2)^2 - 5(2) - 6 = 0 \Rightarrow x - 2$ is a factor of $P(x)$

57) The quadratic equation having 3, -4 as its roots is:

2014-85 Eng

(a) $x^2 - x + 12 = 0$

(b) $x^2 - x - 12 = 0$

(c) $x^2 + x + 12 = 0$

(d) $x^2 - x + 12 = 0$

Hint: Here $S = 3 + (-4) = -1$, $P = (3)(-4) = -12$. Hence, $x^2 - Sx + P = 0 \Rightarrow x^2 + x - 12 = 0$

58) Roots of $x^2 - x - 12 = 0$ are:

2014-86 Eng

(a) unequal and complex

(b) Equal and real

(c) unequal and irrational

(d) Unequal and rational

Hint: Here $a = 1$, $b = -1$, $c = -12$ and $b^2 - 4ac = (-1)^2 - 4(1)(-12) = 1 + 48 = 49 = 7^2 \Rightarrow$ roots are unequal and rational

59) For any complex number z , $z\bar{z} = \dots\dots\dots$

2015-74 Eng

(a) $\bar{z}z$

(b) $|z|^2$

(c) $|\bar{z}|^2$

(d) All of the above

Hint: Let $z = x + iy$, then $\bar{z} = x - iy$. Now $z\bar{z} = \bar{z}z = (x - iy)(x + iy) = x^2 + y^2 = (\sqrt{x^2 + y^2})^2 = |z|^2 = |\bar{z}|^2$

60) If $Z = a + ib$, then $Z\bar{Z} = \dots\dots\dots$

2015-80 Eng

(a) $\sqrt{a^2 + b^2}$

(b) $\sqrt{a^2 - b^2}$

(c) $a^2 + b^2$

(d) $-(a^2 + b^2)$

Hint: $\forall Z = (a + ib) \in \mathbb{C}$, $Z\bar{Z} = |Z|^2 = (\sqrt{a^2 + b^2})^2 = a^2 + b^2$

61) $\forall Z_1, Z_2 \in \mathbb{C}$, $\overline{Z_1 - Z_2} = \dots\dots\dots$

2015-130 Eng

(a) $\bar{Z}_1 + \bar{Z}_2$

(b) $\bar{Z}_1 - \bar{Z}_2$

(c) $\bar{Z}_1 \bar{Z}_2$

(d) $\bar{Z}_2 - \bar{Z}_1$

62) Multiplicative inverse of $-2 - 3i$ is: 2016-04

- (a) $-\frac{2}{13} + \frac{3}{13}i$ (b) $\frac{2}{13} - \frac{3}{13}i$ (c) $-\frac{2}{13} - \frac{3}{13}i$ (d) All of the above

1. B	9. D	17. A	25. C	33. C	41. C	49. D	57. A
2. B	10. A	18. C	26. C	34. B	42. A	50. D	58. D
3. C	11. D	19. A	27. B	35. D	43. C	51. D	59. D
4. C	12. B	20. D	28. B	36. C	44. D	52. B	60. C
5. A	13. A	21. D	29. C	37. A	45. A	53. A	61. B
6. B	14. C	22. D	30. A	38. D	46. B	54. A	62. A
7. A	15. D	23. A	31. B	39. B	47. C	55. C	
8. B	16. A	24. D	32. B	40. D	48. A	56. B	

CHAP NO 2 MATRICES & DETERMINANTS

- I) If $A = \begin{bmatrix} 2 & \lambda \\ 3 & 1 \end{bmatrix}$ is a non cellular matric, then can takes/ all the real values except for : **2017**
 a) 0 b) 2/3 c) -2/3 d) 3/2
 ans: c
- II) If $\det(A+I) = 5$, then $\det(A) =$ **2018**
 a) 5 b) -5 c) 1/5 d) -1/5
 ans: c
- III) For a square matrix $A = [A_{ij}]$, the condition $a_{ij} = 0 \forall i \neq j$ and $a_{ij} = -1, \forall i=j$ holds for; **2018**
 a) diagonal matrix b) unit matrix c) scalar matrix d) skew-symmetric
 ans: a

- 61) If A, B, C are conformable for multiplication, then $(ABC)^t = \dots\dots\dots$ **2010-63 Eng**
 (a) $C^t B^t A^t$ (b) $B^t C^t A^t$ (c) $A^t B^t C^t$ (d) $B^t A^t C^t$

Hint: Transpose reverse the order of matrices in matrix multiplication, so $(ABC)^t = C^t B^t A^t$

- 62) Let A be a matrix of order $n \times n$, then $|A| = \dots\dots\dots$ **2010-124 Eng**
 (a) $|-A|$ (b) $|A^{-1}|$ (c) $|A^t|$ (d) None

Hint: For any square matrix A, we have $|A| = |A^t|$

- 63) The transpose of a row matrix is a **2010-170 Eng**
 (a) Column matrix (b) Row matrix (c) Square matrix (d) None of the above

Hint: The transpose of a matrix is obtained by interchanging rows into columns, so the transpose of a row matrix is a column matrix.

- 64) If $\begin{vmatrix} k-2 & 1 \\ 5 & k+2 \end{vmatrix} = 0$, then $k =$ **2011-17 Eng**
 (a) 0 (b) 3 (c) -3 (d) ± 3

Hint: $\begin{vmatrix} k-2 & 1 \\ 5 & k+2 \end{vmatrix} = 0 \Rightarrow (k-2)(k+2) - 5 = 0 \Rightarrow k^2 - 4 - 5 = 0 \Rightarrow k^2 = 9 \Rightarrow k = \pm 3$

- 65) The co-factor of an element a_{ij} denoted by A_{ij} is: **2011-21 Eng**
 (a) $(-1)^{ij} M_{ij}$ (b) $(-1)^{i+j} M_{ij}$ (c) $(-1)^{i-j} M_{ij}$ (d) $(1)^{i+j} M_{ij}$

- 66) Let A and B any two matrices of the same order then $(A+B)^t = \dots\dots\dots$ **2011-167 Eng**
 (a) $A^t - B^t$ (b) $A^t + B^t$ (c) $A + B^t$ (d) $A^t + B$

- 67) For a given matrix A, if $|A| \neq 0$, then $(A^{-1})^t = \dots\dots\dots$ **2012-54 Eng**

- (a) $(A^t)^{-1}$ (b) (A^{-1}) (c) $(A^{-1})^{-1}$ (d) $(A^t)^{-t}$

68) Order of a matrix A is $p \times q$, order of matrix B = $q \times r$, then the order of matrix $C = A \times B$ will be.....
 (a) $p \times r$ (b) $p \times q$ (c) $q \times r$ (d) $r \times p$ **2012-83 Eng**

69) If C and D are two matrices, then $(C+D)^t = \dots\dots\dots$ **2013-16 Eng**
 (a) $C^t + D^t$ (b) $C^t D^t$ (c) $D^t C^t$ (d) $(CD)^t$

70) If a system of linear equations has no solution, it is called: **2013-33 Eng**
 (a) Invertible (b) Indeterminate (c) Consistent (d) Inconsistent

71) If A is a non-singular matrix, then $A^{-1} = \dots\dots\dots$ **2013-56 Eng**
 (a) $\frac{1}{|A|} \text{adj } A$ (b) $A^{-1} \text{adj } A$ (c) $\frac{1}{A^{-1}} \text{adj } A$ (d) $\frac{|A|}{\text{adj } A}$

Hint: $A^{-1} = \frac{1}{|A|} \text{adj } A$

72) If A is a square matrix of order 3×3 , then AA^t is: **2013-86 Eng**
 (a) Symmetric (b) Skew-symmetric (c) Triangular (d) None of the above

Hint: $(AA^t)^t = (A^t)^t A^t = AA^t \Rightarrow A$ is symmetric matrix

73) Identity matrix is always: **2014-64 Eng**
 (a) Rectangular (b) Skew-symmetric (c) Singular (d) Non-singular

Hint: Let I_n be an identity matrix of order n, then $\det(I_n) = |I_n| = 1 \neq 0 \Rightarrow I_n$ is non-singular

74) The matrix $\begin{bmatrix} 0 & 1-2i \\ -1-2i & 0 \end{bmatrix}$ is : **2014-75 Eng**
 (a) Hermitian Matrix (b) Skew Hermitian Matrix
 (c) Symmetric Matrix (d) Skew Symmetric Matrix

Hint: $(\bar{A})^t = -A \Rightarrow A$ is skew-hermitian matrix

75) If any two rows or two columns in a square matrix A are interchanged, then the determinant of the resulting matrix is: **2015-2 Eng**
 (a) $|A|$ (b) $|A-2|$ (c) $|A|^{-1}$ (d) $-|A|$

76) A square matrix $M = [a_{ij}]$ of order n with complex entries. If $(\bar{M})^t = -M$, then which is correct? **2015-36 Eng**

- (a) M is skew-hermitian (b) $\bar{a}_{ij} = -a_{ji}$, for $i, j = 1, 2, 3, \dots, n$
 (c) M is Anti-hermitian (d) All of the above

77) Generally $B - B^t$ is a: **2015-168 Eng**
 (a) Symmetric matrix (b) Skew-symmetric matrix (c) Singular matrix (d) Additive inverse

Hint: $(B - B^t)^t = B^t - (B^t)^t = B^t - B = -(B - B^t) \Rightarrow B - B^t$ is skew-symmetric matrix.

Answer Key

61. (a)	68. (a) $p \times r$	74. (b) Skew Hermitian Matrix
62. (c)	69. (a)	75. (d)
63. (a) Column matrix	70. (a)	76. (d) All of the above
64. (d) +3	71. (a) adj A	77. (b) Skew-symmetric matrix
65. (b)	72. (a) Symmetric	
66. (b)	73. (d) Non-singular	
67. (a)		

CHAP NO 3 VECTORS

- I) If $|\vec{a} + \vec{b}| = |\vec{a} - \vec{b}|$ for two non zero vectors \vec{a} and \vec{b} , then it holds that **2017**
 a) \vec{a} and \vec{b} are perpendicular b) \vec{a} and \vec{b} are parallel
 c) \vec{a} and \vec{b} are coplanar d) all values except $t=0$
 ans: a

- II) Let $\vec{G}(t) = t\vec{i} - (t+1)^2\vec{j} + t^3\vec{k}$ **2017**
 a) all values of t b) only non negatives values of t
 c) all positive values of t d) all values except $t=0$
 ans: d

- III) If a, b , and c are three non zero vectors, then the expression $a \cdot (b \cdot c)$ is: **2018**
 a) scalar triple product b) volume of parallelepiped
 c) dot product d) meaningless
 ans:

- 79) If the scalar product of two non-zero vectors \vec{A} and \vec{B} is zero then the magnitude of their vector product will be: **2010-65 Eng**

- (a) AB (b) Zero (c) $AB \sin \theta$ (d) $AB \cos \theta$

Hint: $\vec{A} \cdot \vec{B} = AB \cos \theta = 0 \Rightarrow \theta = 90^\circ$, so $|\vec{A} \times \vec{B}| = AB \sin 90^\circ = AB$

- 80) If the vectors $m\vec{a} + n\vec{b}$ and $p\vec{a} + q\vec{b}$ are parallel then: **2010-66 Eng**

- (a) $m = p, n = q$ (b) $m + n = p + q$ (c) $\frac{m}{p} = \frac{n}{q}$ (d) None

Hint: $(m\vec{a} + n\vec{b}) \parallel (p\vec{a} + q\vec{b}) \Rightarrow m\vec{a} + n\vec{b} = k(p\vec{a} + q\vec{b}) \Rightarrow m = kp, n = kq \Rightarrow \frac{m}{p} = k = \frac{n}{q} \Rightarrow \frac{m}{p} = \frac{n}{q}$

- 81) The vector produce of vector \vec{a} by itself is: **2010-19 Eng**

- (a) 1 (b) Zero (c) -1 (d) Null vector

Hint: $\vec{a} \times \vec{a} = |\vec{a}|^2 \sin 0 \vec{n} = \vec{0}$

- 82) Let $\vec{OP} = \vec{a}$ and $\vec{OR} = \vec{b}$, then $\vec{PR} = \dots\dots$ **2010-129 Eng**

- (a) $\vec{a} - \vec{b}$ (b) $\vec{b} - \vec{a}$ (c) $\vec{a} + \vec{b}$ (d) None

Hint: $\vec{PR} = \vec{OR} - \vec{OP} = \vec{b} - \vec{a}$

- 83) If $\vec{A} = \hat{i} + \hat{k}$ and $\vec{B} = \hat{i} + \hat{j}$, Then the angle between \vec{A} and \vec{B} **2011-13 Eng**

- (a) 60° (b) 75° (c) 45° (d) 30°

Hint: $\vec{A} = \hat{i} + \hat{k} = [1, 0, 1]$, $\vec{B} = \hat{i} + \hat{j} = [1, 1, 0]$, so $\theta = \cos^{-1} \left(\frac{1 \cdot 1 + 0 \cdot 1 + 1 \cdot 0}{\sqrt{1^2 + 0^2 + 1^2} \cdot \sqrt{1^2 + 1^2 + 0^2}} \right) = \cos^{-1} \left(\frac{1}{2} \right) = 60^\circ$

- 84) If $\vec{A} \cdot \vec{B} = 0$, then $\vec{A} \times \vec{B}$ will be equal to: **2011-16 Eng**

- (a) ABn (b) Zero (c) $AB \sin \theta n$ (d) $AB \cos \theta$

Hint: As $\vec{A} \cdot \vec{B} = AB \cos \theta = 0 \Rightarrow AB = 0$, so $\vec{A} \times \vec{B} = AB \sin \theta n = (0) \sin \theta n = \vec{0}$

- 85) Cosine of the angle between two non zero vectors \vec{a} and \vec{b} is: **2011-101 Eng**

- (a) $\frac{\vec{a} \cdot \vec{b}}{|\vec{a}| |\vec{b}|}$ (b) $\frac{|\vec{a}| |\vec{b}|}{\vec{a} \cdot \vec{b}}$ (c) $\frac{\vec{a} \times \vec{b}}{|\vec{a}| |\vec{b}|}$ (d) $\vec{a} \cdot \vec{b}$

Hint: If θ be the angle between two non-zero vectors \vec{a} and \vec{b} , then cosine of θ is $\cos\theta = \frac{\vec{a} \cdot \vec{b}}{|\vec{a}| |\vec{b}|}$

86) $\hat{j} \cdot (\vec{k} \times \hat{i}) =$ **2011-107 Eng**

- (a) 1 (b) \hat{i} (c) \hat{j} (d) k

Hint: $\hat{j} \cdot (\vec{k} \times \hat{i}) = \hat{j} \cdot \hat{j} = 1$

87) Magnitude of the vector $\vec{a} = (i - j) + (j - i) + (k - j)$ is..... **2011-144 Eng**

- (a) $\sqrt{3}$ (b) $\sqrt{2}$ (c) $2\sqrt{2}$ (d) $2\sqrt{3}$

Hint: $\vec{a} = (i - j) + (j - i) + (k - j) = k - j \Rightarrow |\vec{a}| = |k - j| = \sqrt{1^2 + (-1)^2} = \sqrt{2}$

88) Two or more vectors are said to be collinear if they are: **2012-25 Eng**

- (a) Intersecting the same line (b) Parallel to the same line
(c) Perpendicular to the same line (d) Both a. and c.

89) Which one of the following is scalar quantity? **2012-42 Eng**

- (a) Mass (b) acceleration (c) Momentum (d) electric intensity

Hint: The physical quantity which has magnitude only is called scalar quantity.

90) If \vec{a} and \vec{b} are non-collinear vectors then $p\vec{a} + q\vec{b} = \vec{0}$ implies: **2012-101 Eng**

- (a) $p \neq 0, q \neq 0$ (b) $p = q = 0$ (c) $p \neq 0, q = 0$ (d) $p = 0, q \neq 0$

91) Let \vec{a} and \vec{b} be any two vectors and θ be the angle between them, then $|\vec{b}| \cos \theta$ is projection of: **2012-122 Eng**

- (a) \vec{b} in the direction of \vec{a} (b) \vec{a} in the direction of \vec{b}
(c) \vec{b} in the direction of x-axis (d) \vec{a} is in the direction of y-axis

92) Which of the following pairs contains one vector and one scalar quantity? **2013-35 Eng**

- (a) Displacement, acceleration (b) Force, kinetic energy
(c) Momentum, velocity (d) Power, speed

Hint: $\vec{F} = m \vec{a}$ and $K.E = \frac{1}{2} mv^2$

93) If $\vec{a} \cdot (\vec{b} + \vec{c}) = \vec{a} \cdot \vec{b} + \vec{a} \cdot \vec{c}$, then: **2013-176 Eng**

- (a) Vector product is distributive over multiplication
(b) Scalar product is distributive over multiplication
(c) Vector product is associative over addition
(d) Scalar product is distributive over addition

94) If \vec{a} and \vec{b} are parallel vectors but opposite in direction and $\theta = 180^\circ$, then $\vec{a} \cdot \vec{b} = \dots\dots\dots$ **2013-196 Eng**

- (a) 1 (b) -1 (c) -ab (d) ab

Hint: $\vec{a} \cdot \vec{b} = ab \cos \theta = ab \cos 180^\circ = ab(-1) = -ab$

95) If $|\vec{a}| = 3$, $|\vec{b}| = 4$ and $\theta = 60^\circ$, then $\vec{a} \cdot \vec{b} = \dots\dots\dots$ **2013-199 Eng**

- (a) $\frac{1}{2}$ (b) $\frac{\sqrt{3}}{2}$ (c) 6 (d) 2

Hint: $\vec{a} \cdot \vec{b} = |\vec{a}| |\vec{b}| \cos \theta = 3(4) \cos 60^\circ = \frac{12}{2} = 6$

96) A Vector which is used to represent the direction of a given vector is called: **2014-145 Eng**

- (a) Position vector (b) Unit vector (c) Null vector (d) Zero vector

97) A vector is called zero vector if:

2014-166 Eng

- (a) It has magnitude and no arbitrary direction.
- (b) It has no magnitude but has arbitrary direction.
- (c) It has only magnitude and direction
- (d) It has direction only.

98) Let \vec{a} and \vec{b} be the position vectors of the point A and B. If C divides \overline{AB} internally in the ratio $p : q$, then the position vector \vec{c} of C is given by:

2014-174 Eng

- (a) $\vec{c} = \frac{q\vec{b} + p\vec{a}}{q + p}$
- (b) $\vec{c} = \frac{q\vec{b} + p\vec{a}}{q - p}$
- (c) $\vec{c} = \frac{q\vec{b} - p\vec{a}}{q + p}$
- (d) $\vec{c} = \frac{\vec{a}q + \vec{b}p}{q + p}$

99) If $\vec{a} \cdot (\vec{b} + \vec{c}) = \vec{a} \cdot \vec{b} + \vec{a} \cdot \vec{c}$, then

2014-175 Eng

- (a) Scalar product is distributive over addition
- (b) Scalar product is distributive over multiplication.
- (c) Vector product is distributive over multiplication.
- (d) Vector product is associative over addition.

100) Gives the vectors $\vec{a} = a_1\vec{i} + a_2\vec{j} + a_3\vec{k}$ and $\vec{b} = b_1\vec{i} + b_2\vec{j} + b_3\vec{k}$, the vector product $\vec{a} \times \vec{b}$ can be written in determinant form as:

2014-176 Eng

- (a) $\begin{vmatrix} \vec{i} & \vec{j} & \vec{k} \\ a_1 & b_1 & a_3 \\ a_2 & b_2 & a_3 \end{vmatrix}$
- (b) $\begin{vmatrix} \vec{i} & \vec{j} & \vec{k} \\ a_1 & b_1 & b_2 \\ a_2 & b_1 & b_3 \end{vmatrix}$
- (c) $\begin{vmatrix} \vec{i} & \vec{j} & \vec{k} \\ a_1 & a_2 & a_3 \\ b_1 & b_2 & b_3 \end{vmatrix}$
- (d) $\begin{vmatrix} \vec{i} & \vec{j} & \vec{k} \\ b_1 & b_3 & b_2 \\ a_1 & b_3 & b_2 \end{vmatrix}$

101) If $|\vec{a}| = 3$, $|\vec{b}| = 4$ and $\theta = 60^\circ$ then $\vec{a} \cdot \vec{b} = \dots\dots\dots$

2014-185 Eng

- (a) $\frac{1}{2}$
- (b) $\frac{\sqrt{3}}{2}$
- (c) 2
- (d) 6

Hint: $\vec{a} \cdot \vec{b} = |\vec{a}| |\vec{b}| \cos \theta = (3)(4) \cos 60^\circ = 12 \times \frac{1}{2} = 6$

102) Two vectors \vec{A} and \vec{B} are such that $\vec{A} + \vec{B} = \vec{C}$ and $A^2 + B^2 = C^2$. If θ is the angle between positive direction of \vec{A} and \vec{B} , then θ is:

2015-69 Eng

- (a) $\theta = 0$
- (b) $\frac{\pi}{2}$
- (c) $\theta = \frac{\pi}{3}$
- (d) $\theta = \pi$

Hint: $(\vec{A} + \vec{B}) \cdot (\vec{A} + \vec{B}) = \vec{C} \cdot \vec{C} \Rightarrow A^2 + B^2 + 2\vec{A} \cdot \vec{B} = C^2 \Rightarrow C^2 + 2\vec{A} \cdot \vec{B} = C^2 \Rightarrow 2\vec{A} \cdot \vec{B} = 0 \Rightarrow \vec{A} \cdot \vec{B} = 0 \Rightarrow \vec{A} \perp \vec{B}$

103) If \vec{n} is a unit vector in the direction of \vec{A} , then

2015-103 Eng

- (a) $\vec{n} = \frac{\vec{A}}{|\vec{A}|}$
- (b) $\vec{n} = \frac{|\vec{A}|}{\vec{A}}$
- (c) $\vec{n} = \frac{\vec{A}}{|\vec{A}|}$
- (d) $\vec{n} = \vec{n} \cdot \vec{A}$

104) The initial point of the vector $\vec{r} = (-2, -1, 2)$ for the terminal point $(4, -1, -2)$ is: 2015-113 Eng

- (a) $(2, 1, -2)$
- (b) $(-4, 1, 2)$
- (c) $(6, 0, -4)$
- (d) $(-6, 0, 4)$

Hint: Here, terminal point = $B = (4, -1, -2)$. Let initial point = $A = (x, y, z)$, then

$$\vec{AB} = \vec{r} \Rightarrow (4 - x, -1 - y, -2 - z) = (-2, -1, 2) \Rightarrow (x, y, z) = (6, 0, -4)$$

105) Area of triangle having vertices $A(2, 2, 0)$, $B(-1, 0, 2)$, $C(0, 4, 3)$ is: 2015-114 Eng

- (a) 30
- (b) 15
- (c) $\frac{15}{2}$
- (d) 16

Hint: $\vec{AB} = (-1, 0, 2) - (2, 2, 0) = (-3, -2, 2)$ and $\vec{AC} = (0, 4, 3) - (2, 2, 0) = (-2, 2, 3)$, $\Delta = \frac{1}{2} |\vec{AB} \times \vec{AC}|$

106) For any two vectors \vec{a} and \vec{b} making an angle θ between them, then $\vec{a} \cdot \vec{b} = 0$, if and only if:

- (a) $\vec{a} \perp \vec{b}$ (b) $\theta = \frac{\pi}{2}$ (c) Either $\vec{a} = \vec{0}$ or $\vec{b} = \vec{0}$ (d) All of the above

Answers

79. (a) AB

80. (c)

81. (d) Null vector

82. (b)

83. (a) 600

84. (b) Zero

85. (a)

86. (a) 1

87. (b)

88. (b) Parallel to the same line

89. (a) Mass

90. (b) $p = q = 0$

91. (a) in the direction of

92. (b) Force, kinetic energy

93. (d) Scalar product is distributive over addition

94. (c) $-ab$

95. (c) 6

96. (b) Unit vector

97. (b) It has no magnitude but has arbitrary direction.

98. (d)

99. (a) Scalar product is distributive over addition

100. (c)

101. (d) 6

102. (b)

103. (a)

104. (c)

105. (c)

106. (d) All of the above

CHAP NO 4 SEQUENCES

- I) The n^{th} term formula for 2, 3, 5, 6, 11..... is **2018**
 a) $2n-1$ b) $2n+1$ c) a_n d) non of the above
 ans: D

- II) If G_1, G_2, G_3 and G_4 are four geometric means between two numbers a and b then $(G_1, G_2, G_3, G_4)^4 = \underline{\hspace{2cm}}$ **2018**
 A) G^4 B) $G^{1/4}$ C) G^8 D) G^{16}
 Ans: d

- III) If $a_{10} = x$, and $a_{12} = y$ and $a_{16} = z$, are terms of G.P then; **2018**
 a) $x, y = z^2$ b) $x, z = y^2$ c) $y, z = x^2$ d) $x, y = z$
 ans: A

- IV) The common ratio of the geometric sequence $\{a_n\} = 2^{-n}$ is given by: **2017**
 a) 2 b) $1/2n$ c) $1/2$ d) $-1/2$
 ans: C

- V) A sequence is a function, whose domain is set of:
 a) real numbers b) natural numbers c) integers d) positive
 ans: b

- 1) $\sum_{j=1}^{\infty} \frac{1}{2^j} =$ **2010-36 Eng**

(a) 1

(b) ∞

(c) $\frac{1}{2}$

(d) $\frac{1}{2^n}$

Hint: $\sum_{j=1}^{\infty} \frac{1}{2^j} = \frac{1}{2} + \frac{1}{4} + \frac{1}{8} + \dots = \frac{1/2}{1-1/2} = \frac{1/2}{1/2} = 1$ $\left(\because S_{\infty} = \frac{a}{1-r} \right)$

- 2) Harmonic means between 3 and 7 is: 2011-51 Eng
- (a) $\frac{5}{21}$ (b) $\frac{21}{5}$ (c) 5 (d) $\sqrt{21}$
- Hint:** $H.M = \frac{2ab}{a+b} = \frac{2(3)(7)}{3+7} = \frac{42}{10} = \frac{21}{5}$
-
- 3) The sum of an infinite G.P is 4 and the sum of the cubes of its terms is 92. The common ratio of the original G.P is: 2011-181 Eng
- (a) $\frac{1}{2}$ (b) $\frac{2}{3}$ (c) $\frac{1}{3}$ (d) $-\frac{1}{2}$
- Hint:** Given that, $a + ar + ar^2 + \dots = \frac{a}{1-r} = 4 \Rightarrow \frac{a^3}{(1-r)^3} = 64 \rightarrow (i)$ and
- $$a^3 + a^3 r^3 + a^3 r^6 + \dots = \frac{a^3}{1-r^3} = 192 \rightarrow (ii)$$
- $(ii) \div (i) \Rightarrow \frac{1-2r+r^2}{1+r+r^2} = 3 \Rightarrow 2r^2 + 5r + 2 = 0 \Rightarrow r = -2, -\frac{1}{2}$. Since $|r| = |-2| = 2 > 1$, so $r = -2$ is not possible.
- Hence $r = -\frac{1}{2}$
-
- 4) If $x > 0$, $xy = 1$, then minimum value of $x + y$ is: 2011-184 Eng
- (a) 2 (b) -2 (c) 1 (d) -1
- Hint:** As $G.M \leq A.M \Rightarrow \frac{x+y}{2} \leq \sqrt{xy} = \sqrt{1} = 1 \Rightarrow x+y \leq 2 \Rightarrow$ minimum value of $x+y$ is 2
-
- 5) In a G.P if $a_{10} = \ell$, $a_{13} = m$, $a_{16} = n$, then 2011-194 Eng
- (a) $\ell n = m^2$ (b) $\ell n = n^2$ (c) $mn = \ell^2$ (d) $mn = \ell$
- Hint:** $a_{10} = \ell = ar^9$, $m = ar^{12}$, $n = ar^{15} \Rightarrow \ell n = m^2$
-
- 6) In an A.P if $a_1 = 4$, $a_{10} = 22$, then $a_{15} = ?$ 2012-41 Eng
- (a) 30 (b) 32 (c) 33 (d) 56
- Hint:** As $a_{10} = a_1 + 9d \Rightarrow 22 = 4 + 9d \Rightarrow d = 2$. Hence $a_{15} = a_1 + 14d = 4 + 14(2) = 4 + 28 = 32$
-
- 7) If $\frac{a^{n+1} + b^{n+1}}{a^n + b^n}$ be an A.M between a and b then $n = \dots\dots\dots$ 2012-134 Eng
- (a) -2 (b) 0 (c) 1 (d) -1
- Hint:** For $n=0$, $\frac{a^{n+1} + b^{n+1}}{a^n + b^n} = \frac{a^{0+1} + b^{0+1}}{a^0 + b^0} = \frac{a^1 + b^1}{1+1} = \frac{a+b}{2}$, which is an A.M between a and b .
-
- 8) $\frac{1}{10}, \frac{1}{14}, \frac{1}{18}, \dots\dots\dots$ is 2012-13Eng
- (a) Geometric sequence (b) Arithmetic sequence
(c) Asymptotic sequence (d) Harmonic sequence
- Hint:** Since $10, 14, 18, 22, \dots\dots\dots$ is an A.P, so $\frac{1}{10}, \frac{1}{14}, \frac{1}{18}, \frac{1}{22}, \dots\dots\dots$ is an H.P
-
- 9) If A, G and H be respectively the A.M, G.M and H.M between a and b , then which of the following relation is correct? 2012-140 Eng
- (a) $G^2 = A.H$ (b) $G > A > H$ (c) $H > A > G$ (d) $A < G < H$
- Hint:** For A, G, H, we have $G^2 = A.H$ and $A > G > H$
-
- 10) A sequence is a function whose domain is: 2012-155 Eng
- (a) \square (b) \square (c) W (d) \square
-
- 11) If $a, G_1, G_2, G_3, \dots\dots G_n, b$ is a G.P, then $G_n = \dots\dots\dots$ 2012-159 Eng
- (a) $b \left(\frac{a^n}{b^{n-1}} \right)^{\frac{n}{n+1}}$ (b) $b \left(\frac{a}{b} \right)^{\frac{n}{n+1}}$ (c) $\left(\frac{a}{b} \right)^{\frac{n}{n+1}}$ (d) None

Hint: $G_n = a \left(\frac{b}{a} \right)^{\frac{n}{n+1}}$

- 12) For a geometric series $a_1 + a_2 + a_3 + \dots + a_n$ with common ratio r , **2013-93 Eng**
 (a) $\frac{r^n - 1}{r - 1}$ (b) $\frac{r - 1}{r^n - 1}$ (c) $\frac{a_1(r^n - 1)}{r - 1}$ (d) $\frac{a_1(r^n + 1)}{r + 1}$
- 13) Which of the following is true: **2014-96 Eng**
 (a) $AM > GM > HM$ (b) $AM < GM < HM$ (c) $GM > AM > HM$ (d) $AM > HM > GM$
- 14) G.M of 4 and is: **2014-105 Eng**
 (a) 34 (b) 16 (c) 8 (d) 2
- Hint:** G.M between two positive numbers a and b is: $G.M = \sqrt{ab} = \sqrt{4 \times 64} = \sqrt{256} = \sqrt{16^2} = 16$
- 15) For a geometric series $a_1 + a_2 + a_3 + \dots + a_n$, with common ratio $r \neq 1$, $S_n = \dots$ **2015-126 Eng**
 (a) $\frac{r^n - 1}{r - 1}$ (b) $\frac{r - 1}{r^n - 1}$ (c) $\frac{a_1(r^n - 1)}{r - 1}$ (d) $\frac{a_2(r^n - 1)}{r - 1}$
- 16) If A, G, H are Arithmetic, Geometric and Harmonic Means between two positive numbers a, b , then; **2015-147 Eng**
 (a) $G > H$ (b) $G^2 = AH$ (c) $A > G$ (d) All of the above

Hint: $A > G > H$ and $G^2 = AH$

Answers:

- | | | | |
|-----------|---------------|---------------------------|--------------------------|
| 1. (a) 1 | 7. (b) 0 | 8. (d). Harmonic sequence | 12. (c) |
| 2. (b) | 9. (a) | 10. (a) | 13. (a) $AM > GM > HM$ |
| 3. (d) | 11. (d). None | | 14. (b) 16 |
| 4. (a) 2 | | | 15. (c) |
| 5. (a) | | | 16. (d) All of the above |
| 6. (b) 32 | | | |

CHAP NO 5 MISCELLANEOUS SERIES

- 1) The k th term of the series $1^2 + (1^2 + 2^2) + (1^2 + 2^2 + 3^2) + \dots$, is: **2010-32 Eng**
 (a) k^2 (b) $\frac{k(k+1)(2k+1)}{6}$ (c) $\frac{k^2(k+1)^2}{4}$ (d) None
- Hint:** $T_k = 1^2 + 2^2 + 3^2 + \dots + k^2 = \sum_{n=1}^k n^2 = \frac{k(k+1)(2k+1)}{6}$
- 2) For any natural number n , $1 + 3 + 5 + \dots + (2n-1) = \dots$ **2013-12 Eng**
 (a) $\frac{n(n+1)}{2}$ (b) $\frac{n^2(n+1)^2}{4}$ (c) $\frac{n(n+1)(n+2)}{2}$ (d) n^2
- Hint:** $1 + 3 + 5 + \dots + (2n-1) = \sum_{k=1}^n (2k-1) = 2 \sum_{k=1}^n k - \sum_{k=1}^n 1 = 2 \frac{n(n+1)}{2} - n = n^2$
- 3) Sum of first 100 natural numbers = **2014-104 Eng**
 (a) 50050 (b) 5005 (c) 5151 (d) 5050
- Hint:** Sum of 1^{st} n natural numbers $= S_n = \frac{n(n+1)}{2} \Rightarrow S_{100} = \frac{100(100+1)}{2} = \frac{100(101)}{2} = 50(101) = 5050$
- 4) The sigma notation for the series $a_1 + a_2 + a_3 + \dots + a_n = \dots$ **2015-45 Eng**
 (a) $\sum_{k=1}^n a_k$ (b) $\sum_{j=1}^n a_j$ (c) $\sum_{r=1}^n a_r$ (d) All of the above
- 5) For $n \in \mathbb{N}$, $\sum_{k=1}^{2n-1} (-1)^k = \dots$ **2015-75 Eng**
 (a) 1 (b) 0 (c) ∞ (d) -1

Hint: $\sum_{k=1}^{2n-1} (-1)^k = -1 + 1 - 1 + 1 - 1 + \dots + (-1)^{2n-1} = -1$. One can understand it better if give some value to n.

- 6) N^{th} term of Arithmetical-Geometric series is: **2015-102 Eng**
 (a) ar^n (b) $[a + (n-1)d]r^{n-1}$ (c) $(n-1)r^n$ (d) All of the above

- 7) $\sum_{j=2}^{10} \frac{1}{j} - \sum_{j=1}^8 \frac{1}{j+2} =$ **2017**
 a) zero b) 9/10 c) 1/2 d) 1/10

- 8) the geometrical statement 's concides with b or lies left of b' is expressed as; **2018**
 a) $a < b$ b) $a > b$ c) $a \leq b$ d) $a \geq b$

9. the series $1, + 3 + 5 + \dots + 9$, can be expressed as: **2018**
 a) $\sum_{k=1}^{99} (2k-1)^2$ b) $\sum_{k=1}^{99} (2k+1)^2$ c) $\sum_{k=1}^{50} (2k-1)^2$ d) $\sum_{k=1}^{50} (2k+1)^2$

10. the sum of infinite geometric series is : **2018**
 a) $\frac{a}{1-r} + \frac{dr}{1-r}$ b) $\frac{a}{1-r} - \frac{dr}{(1-r)^2}$ c) $\frac{a}{1-r} + \frac{dr}{(1-r)^2}$ d) $\frac{a}{1-r}$ if $|r| < 1$

Answers:

- | | | |
|-------------------------|--------|---------|
| 1. (b) | 5. (d) | 9. (C) |
| 2. (d) | 6. (b) | 10. (C) |
| 3. (d) 5050 | 7. (c) | |
| 4. (d) All of the above | 8. (a) | |

CHAP NO 6 PERMUTATION, COMBINATION & PROBABILITY

- 1) By definition $\frac{P(A \cap B)}{P(B)}$ defines: **2010-7 Eng**
 (a) $P(A/B)$ (b) $P(B/A)$ (c) $P(A \cap B)$ (d) $P(A \cup B)$

Hint: $P(A/B) = \frac{P(A \cap B)}{P(B)}$

- 2) When ${}^nP_2 = 30$, then n = **2010-60 Eng**
 (a) 5 (b) 3 (c) 6 (d) 0

Hint: ${}^nP_2 = 30 \Rightarrow \frac{n!}{(n-2)!} = 30 \Rightarrow n(n-1) = 6 \times 5 \Rightarrow n = 6$

- 3) ${}^nC_r + {}^nC_{r-1} = \dots$ **2010-151 Eng**
 (a) nC_r (b) nP_r (c) ${}^{n+1}C_{r+1}$ (d) ${}^{n+1}C_r$

Hint: ${}^nC_r + {}^nC_{r-1} = {}^nC_{r-1} + {}^nC_r = {}^{n+1}C_r$

- 4) If A and B are any two complementary events in a sample space S, then $P(A) + P(B) - P(A \cap B) = \dots$ **2010-179 Eng**
 (a) 1 (b) 0 (c) $P(A \cap B)$ (d) $P(A \cup B)$

Hint: Since A and B are complementary events relative to the sample space S, so $P(A) + P(B) = P(S) = 1$ and $P(A \cap B) = 0$. Hence $P(A) + P(B) - P(A \cap B) = 1 - 0 = 1$

- 5) ${}^nC_r = ?$ **2011-57 Eng**
 (a) $\frac{n!}{(n-r)!r!}$ (b) $\frac{n!}{(n-r)!}$ (c) $\frac{n!}{r!}$ (d) $\frac{(n-1)!+1}{n!}$

- 6) If A and B are not mutually exclusive events then $P(A \cup B) =$ **2011-77 Eng**

- (a) $P(A) + P(B)$ (b) $P(A) + P(B) - P(A \cap B)$ (c) $P(A) + P(B) + P(A \cap B)$ (d) $P(A) - P(B)$

- 7) If a 4-digit number is formed by using the digit. 1, 2, 3, and 5 with no repetition then the probability that the number is divided by 5 is: **2011-187 Eng**

- (a) $\frac{1}{2}$ (b) $\frac{1}{1}$ (c) $\frac{2}{3}$ (d) $\frac{1}{4}$

Hint: Total number of 4-digits numbers formed using the digits 1, 2, 3, 5 is $4! = 24$

We know that a number is divisible by 5 if the digit at its unit place is either 0 or 5, so when 5 is fixed at the unit place, then the total number of 4-digit numbers formed is $3! = 6$, hence the required probability is

$$\frac{6}{24} = \frac{1}{4}$$

- 8) The probability of either less than 1 or greater than 6 in rolling die is : **2012-5 Eng**

- (a) zero (b) 1 (c) $\frac{1}{3}$ (d) $\frac{1}{4}$

Hint: It is an impossible event so its probability is zero

- 9) If A and B are mutually exclusive events then: **2012-87 Eng**

- (a) $P(A \cup B) = P(A) + P(B) - P(A \cap B)$ (b) $P(A \cup B) = P(A) + P(B)$
(c) $P(A \cup B) = P(A) \cup P(B)$ (d) $P(A \cup B) = P(A) \cap P(B)$

- 10) A coin is flipped thrice. The number of sample points in the sample space is: **2012-182 Eng**

- (a) 3 (b) 6 (c) 8 (d) 9

Hint: As a coin has two faces, so when it is flipped thrice, then the number of sample points in the sample space is $2^3 = 8$

The sample space is: $S = \{HHH, HHT, HTH, HTT, THH, THT, TTH, TTT\}$

- 11) If A and B are any two events defined in a sample space, then $P(A - B) = \dots\dots\dots$ **2013-39 Eng**

- (a) $P(A) - P(A \cup B)$ (b) $P(A \cup B) - P(A)$ (c) $P(A) - P(A \cap B)$ (d) $P(A \cap B)$

Hint: As, $A - B = A - (A \cap B)$, so $P(A - B) = P(A) - P(A \cap B)$

- 12) ${}^nP_r = \dots\dots\dots$ **2013-43 Eng**

- (a) $\frac{n(n-1)!}{n-r}$ (b) $\frac{n(n-1)!}{n+r}$ (c) $\frac{n!}{(n-r)!}$ (d) $\frac{n(n-r)!}{n-r}$

- 13) If ${}^nC_6 = {}^nC_{12}$, then $n = \dots\dots\dots$ **2013-73 Eng**

- (a) 6 (b) 18 (c) 12 (d) 4

Hint: ${}^nC_6 = {}^nC_{12} = {}^nC_{n-6} \Rightarrow n-6=12 \Rightarrow n=18$ ($\because {}^nC_r = {}^nC_{n-r}$)

- 14) If A and B are two mutually exclusive events, then $P(A \cup B) = \dots\dots\dots$ **2014-95 Eng**

- (a) $P(A) \cup P(B)$ (b) $P(B) \cup A$ (c) $P(A) + P(B)$ (d) $P(A \cap B)$

Hints: As A and B are mutually exclusive, so $P(A \cap B) = 0$, so $P(A \cup B) = P(A) + P(B) - P(A \cap B) = P(A) + P(B)$

- 15) If ${}^nC_6 = {}^nC_{12}$, then $n = \dots\dots\dots$ **2014-134 Eng**

- (a) 18 (b) 12 (c) 0 (d) 4

Hint: ${}^nC_6 = {}^nC_{12} = {}^nC_{n-6} \Rightarrow n-6=12 \Rightarrow n=18$ ($\because {}^nC_r = {}^nC_{n-r}$)

- 16) If A and B are any two events defined in a sample space, then $P(A - B) = \dots\dots\dots$ **2015-125 Eng**

- (a) $P(A) - P(A \cap B)$ (b) $P(A) - P(A \cup B)$ (c) $P(A \cap B) - P(A)$ (d) $P(A \cap B)$

Hint: As, $A - B = A - (A \cap B)$, so $P(A - B) = P(A) - P(A \cap B)$

- 17) The 3rd term of expression $n^2 - 2/n$ is : **2017**

- a) $7/3$ b) $-7/3$ c) 3 d) 1

$$18) \frac{k!}{(k+1)!} = \underline{\hspace{2cm}}$$

2017

- a) $(k+1)$ b) k c) $1/$ d) $1/(k+1)$

19. if a and b are disjoint events, then $P(A \cup B) = \underline{\hspace{2cm}}$ 2017

- A) $P(A)+P(B)$ B) $P(A)+P(B) - P(A \cap B)$
 C) $P(A) \cup P(B)$ D) $N \frac{(A \cup B)}{n(S)}$

20. In frictional term, $n(n-1)(n-2)$ can be written as: 2018

- a) $n!$ b) $\frac{n!}{(n-3)!}$ c) $\frac{(n-1)!}{(n-2)!}$ d) $(n-2)!$

21. the correct option for $5! C_5^{10}$ is : 2018

- i) C_5^{10} ii) P_5^{10} iii) C_5^{11}
 a) I only b) ii only c) I and ii d) ii and iii only

22. a student estimate that possibility of passing ETEA is $8/9$, what is the possibility of passing the test:

- a) $7/9$ b) $2/9$ c) $1/9$ d) $3/9$

Answers:

- 1.(a)
 2. (c) 6 3.(d)
 4. (a) 1
 5. (a)
 6. Ans: (b)
 7. (d)
 8.(a) zero
 9. Ans: (a)

10. (c) 8
 11. (c) $P(A) - P(A \cap B)$
 12. (c)
 13. (b) 18
 14. (c) $P(A) + P(B)$
 15. (a) 18
 16. (a)
 17. a

- 18.d
 19.a
 20.b
 21.b
 22.c

CHAP NO 7 MATHEMATICAL INDUCTION & BINOMIAL THEOREM

- 1) If the sum of the coefficients in the expansion of $(1+x)^n$ is 2^n , then the sum of the coefficients in the expansions of $(1+x)^m$ is: 2010-128 Eng

- (a) 2^m (b) $m+1$ (c) 2^{m+n} (d) 2^{n-1}

- 2) In the expansion $(1+x)^n$, if n is rational, then the number of terms are----- provided $|x| < 1$: 2010-139 Eng

- (a) $n+1$ (b) $n-1$ (c) finite (d) infinite

Hint: If n is a fraction or a negative integer and $|x| < 1$, then $(1+x)^n = 1 + nx + \frac{n(n-1)}{2!}x^2 + \dots \infty$

- 3) The sum of exponents of a and b in every term of the expansion $(a+b)^n$ is: 2011-91 Eng

- (a) n (b) 1 (c) 0 (d) $2n$

- 4) Second term in the expansion of $(1-2x)^{\frac{1}{3}}$, is : 2011-94 Eng

- (a) $\frac{7}{2}$ (b) $\frac{x}{2}$ (c) $\frac{2x}{3}$ (d) $-\frac{2x}{3}$

Hint: $(1-2x)^{\frac{1}{3}} = 1 + \frac{1}{3}(-2x) + \dots = 1 - \frac{2x}{3} + \dots$

- 5) Expansion of $(8-2x)^{-1}$ is valid only if..... 2011-97 Eng

- (a) $|x| > 4$ (b) $|x| < 4$ (c) $|x| = 0$ (d) $|x| = 4$

Hint: Since $(8-2x)^{-1} = 8^{-1} \left(1 + \left(-\frac{x}{4}\right)\right)^{-1}$, so its expansion is valid only if, $\left|-\frac{x}{4}\right| < 1 \Rightarrow |x| < 4$

6) If n is a negative integer or a fraction, then the binomial expansion $(a+b)^n$ terminates:

2011-164 Eng

- (a) after n terms (b) after $(n+1)$ terms (c) after $(n+2)$ terms (d) Never

7) In binomial expansion $(a+b)^n$ Pascal's triangle is used to find:

2011-171 Eng

- (a) n (b) a, b (c) Binomial coefficients (d) None

8) The general term T_{r+1} in $(a+b)^n$ is:

2011-130 Eng

- (a) $\binom{n}{r} a^{n-r-1} \cdot b^r$ (b) $\binom{n}{r} a^{n-r}$ (c) $\binom{n}{r} a^{n-r} \cdot b^r$ (d) $\binom{n}{r} a^{n-r+1} \cdot b^r$

9) If n is even, then the middle term in the expansion $(a+b)^n$ is:

2014-154 Eng

- (a) $\left(\frac{n+1}{2}\right)$ th (b) $\left(\frac{n+2}{2}\right)$ th (c) $\left(\frac{n}{2}+1\right)$ th (d) Both (b) and (c)

10) If n is even in $(a+b)^n$, then the number of middle term is:

2015-3 Eng

- (a) One (b) Two (c) No middle term (d) Three

Hint: If n is even then $(n+1)$ is odd, so there will be just one middle term in the expansion of $(a+b)^n$, and $\left(\frac{n}{2}+1\right)$ th term is the middle term in this case.

11) If 1, 3, 3, 1 are the binomial coefficients in the expansion of $(a+b)^n$, then the index n in the expansion is:

2015-46 Eng

- (a) 4 (b) 2 (c) 3 (d) 8

Hint: As number of terms in the expansion of $(a+b)^n$ are $(n+1)$, so for 4 terms $n=3$

12) In the expansion $(a+b)^n$, ${}^nC_0 = \dots\dots\dots$

2015-148 Eng

- (a) nC_1 (b) nC_2 (c) ${}^nC_{n-1}$ (d) nC_n

Hint: As ${}^nC_r = {}^nC_{n-r} \Rightarrow {}^nC_0 = {}^nC_{n-0} \Rightarrow {}^nC_0 = {}^nC_n$

13. $\frac{1}{6!} + \frac{2}{7!} + \frac{3}{8!} =$

2017

- a) $6/8$ b) $6!/8!$ c) $75/8!$ d) $6/21$

14. the expression $(9+2/x)^{-1/2}$ is valid only when _____? **2018**

- a) $|x| > 9/2$ b) $|x| < 2/9$ c) $> 9/2$ d) $> 2/9$

15. the co-efficient of middle term of $\left(\frac{x}{9} + \frac{9}{x}\right)^{21}$ is: **2018**

- a) $\binom{2}{0}$ b) $\binom{2}{1}$ c) $\binom{2}{2}$ d) none of the above

16. if sum of even co-efficient in the expansion of $(1+x)^n$ is 256, the value of n is: **2018**

- a) 7 b) 8 c) 9 d) 10

hint: $2^{n-1} = 256 \rightarrow 2^{n-1} = 2^8 \rightarrow n-1 = 8 \rightarrow n = 9$

Answers:

1. (a)
2. (d) infinite
3. (a) n 4. (d)
5. (b)
6. (d) Never

7. (c) Binomial coefficients
8. (c).
9. (d) Both (b) and (c)
10. (a) One
11. (c) 3

12. (d)
13. c
14
15. b
16. C

CHAP NO 8 FUNCTIONS & GRAPHS

- 1) If $X = \{a, b, c, d\}$, $Y = \{1, 2, 3, 4\}$. Then which of the following is a bijective function from X to Y ?

2012-13 Eng

- (a) $\{(a, 1), (b, 4), (c, 2), (d, 1)\}$ (b) $\{(c, 1), (d, 4), (b, 1), (a, 3)\}$
 (c) $\{(d, 3), (b, 4), (a, 2), (c, 1)\}$ (d) $\{(b, 2), (c, 2), (a, 3), (d, 4)\}$

Hint: A function f from X to Y is bijective if the 2nd elements of any two ordered pairs in f are not the same and range of $f=Y$

- 2) If $f(x) = x^2 + x - 1$, then the images of 2, 3, 5 are:

2013-133 Eng

- (a) 7, 13, 31 (b) 5, 12, 26 (c) 5, 11, 29 (d) 3, 8, 24

Hint: $f(2) = 2^2 + 2 - 1 = 5$, $f(3) = 3^2 + 3 - 1 = 11$, $f(5) = 5^2 + 5 - 1 = 29$

- 3) The set of all first elements of the ordered pairs in a relation R is called:

2013-159 Eng

- (a) Domain of R (b) Range of R (c) Co-domain of R (d) Subset of R

- 4) If $f(x) = \frac{2x}{2x+1}$, then $[f(2)]^{-1} = \dots\dots$

2014-26 Eng

- (a) $\frac{4}{7}$ (b) $\frac{5}{4}$ (c) $\frac{-7}{4}$ (d) $\frac{-4}{7}$

Hint: $[f(2)]^{-1} = \left[\frac{2(2)}{2(2)+1} \right]^{-1} = \left[\frac{4}{5} \right]^{-1} = \frac{5}{4}$

- 5) If set A has 3 and set B has 2 elements then how many ordered pairs are there in $B \times A$? 2014-65 Eng

- (a) 9 (b) 6 (c) 5 (d) 34

Hint: No. of ordered pairs in $B \times A = (\text{No. of elements in } A) \times (\text{No. of elements in } B) = 2 \times 3 = 6$

- 6) If $A = \{c, d\}$ and $B = \{e, f\}$ then $\{(c, f), (d, e), (c, e), (d, f)\}$ is..... 2014-66 Eng

- (a) Not a function (b) an onto function from A into B
 (c) An onto function from B into A (d) On to and one-one function.

Hint: The 1st elements of (c, f) and (c, e) are the same. So the given set of ordered pairs is not a function.

- 7) What is the inverse of $f(x) = 4 + \sqrt{2x}$?

2015-78 Eng

- (a) $\frac{1}{2}(x-4)^2$ (b) $2-x^2$ (c) $4-x^2$ (d) $(4-x)^2$

Hint: Let, $4 + \sqrt{2x} = y \Rightarrow x = \frac{1}{2}(y-4)^2 \Rightarrow f^{-1}(y) = \frac{1}{2}(y-4)^2 \Rightarrow f^{-1}(x) = \frac{1}{2}(x-4)^2$
 $(\because f(x) = y \Leftrightarrow x = f^{-1}(y))$

- 8) for continuous function $f(x)$ on $[a, b]$ the appropriate root lies in interval $[c, b]$ if:

- a) $f(x)$ has opposite signs at $x=a$ and $x=b$
 b) $f(x)$ has opposite signs at $x=a$ and $x=c$
 c) $f(x)$ has same signs at $x=a$ and $x=b$
 d) $f(x)$ has opposite signs at $x=c$ and $x=b$

- 9) let $f(x) = \frac{2x-1}{x-1}$ then fomain of $f^{-1}x$ is :

- a) $R - \{1\}$ b) $R - \{2\}$ c) $R - \{-1\}$ d) $R - \{-2\}$

- 10) the range of the function, $f(x) = \begin{cases} (3x+4), & \text{for } 3x+4 > 0 \\ -(3x+4), & \text{for } 3x+4 < 0 \end{cases}$ is: 2018

- a) $(\infty, 0)$ b) $(0, \infty)$ c) $(0, -\infty)$ d) $(\infty, 0)$

Answers:

1. (c) $\{(d, 3), (b, 4), (a, 2), (c, 1)\}$	2. (c) 5, 11, 29	3. (a) Domain of R	4. (b) $\frac{5}{4}$
5. (b) 6	6. (a) Not a function	7. (a) $\frac{1}{2}(x-4)^2$	8. d
9. b	10. b		

CHAPTER NO 9

LINEAR PROGRAMMING

- 1) The variables involve in a linear problem are called _____ constraints: **2010-11 Eng**
 (a) Non negative (b) Positive (c) Problem (d) Both (a) and (c)
- 2) The solution of $ax + 3y \leq c$ is: **2011-74 Eng**
 (a) closed half plane (b) open half plane (c) circle (d) parabola
- 3) Which of the following is not a solution of the equation $2x + 3y = 24$? **2011-191 Eng**
 (a) (9, -2) (b) (0, 8) (c) (12, 0) (d) (6, 4)
- Hint:** As $2(9) + 3(-2) = 18 - 6 = 12 \neq 24 \Rightarrow (9, -2)$ is not a solution of $2x + 3y = 24$
- 4) the objective function in a linear programming is usually denoted by: **2017**
 a) $f(x, x) = ax$ b) $f(x, x) = ax + by$ $a, b \in \mathbb{R}$
 c) $f(x, y) = (ax)(by)$ d) $f(x, y) = ax + by + c^2$
- 5) non-negative constraints in a linear problem is given by: **2017**
 a) $x > 0, y < 0$ b) $x \geq 0, y \geq 0$ c) $x = 0, y = 0$ d) $x \leq 0, y \geq 0$
 a) (5, -2) b) (5, 2) c) (-2, 5) d) (-2, -5)
- 6) $x = 0$, is the solution of inequality; **2018**
 a) $x > 0$ b) $3x + 4 < 0$ c) $2x + 3 < 0$ d) $x - 2 < 0$

Answers:

1. (d) Both (a) and (c)
 2. (a) closed half plane
 3. a
 4. B

5. D
 6. A
 7. D

CHAP NO 10 TRIGONOMETRIC IDENTITIES OF SUM AND DIFFERENCE OF ANGLES

- 1) The trigonometric ratios of $405\frac{\pi}{2}$ are the same as that of: **2010-23 Eng**
 (a) $\frac{3\pi}{2}$ (b) $\frac{3\pi}{4}$ (c) $\frac{5\pi}{4}$ (d) $\frac{\pi}{2}$
- Hint:** As $405\frac{\pi}{2} = \frac{\pi}{2} + 202\pi = \frac{\pi}{2} + 101(2\pi)$, so the trigonometric ratios of $405\frac{\pi}{2}$ are the same as that of $\frac{\pi}{2}$
- 2) The terminal ray of $\left(-\frac{2\pi}{3}\right)$ lies in **2010-90 Eng**
 (a) 1st quadrant (b) 2nd quadrant (c) 3rd quadrant (d) 4th quadrant
- Hint:** $-\frac{2\pi}{3} \text{ rad} = -\left(\frac{2 \times 180}{3}\right)^\circ = -(2 \times 60)^\circ = -120^\circ$ and so the terminal ray of $\left(-\frac{2\pi}{3}\right)$ lies in the 3rd quadrant.
- 3) $\sin 30^\circ \cdot \cos 60^\circ + \cos 30^\circ \cdot \sin 60^\circ = \dots\dots\dots$ **2010-121 Eng**
 (a) 0 (b) $\frac{1}{2}$ (c) 1 (d) ∞
- Hint:** $\sin 30^\circ \cdot \cos 60^\circ + \cos 30^\circ \cdot \sin 60^\circ = \sin(30^\circ + 60^\circ) = \sin 90^\circ = 1$
- 4) $\sin(\alpha + \beta) - \sin(\alpha - \beta) = \dots\dots\dots$ **2010-160 Eng**
 (a) $2\cos\alpha \sin\beta$ (b) $2\sin\beta \cos\alpha$ (c) $2\sin\alpha \sin\beta$ (d) $-2\sin\alpha \sin\beta$
- Hint:** $\sin(\alpha + \beta) - \sin(\alpha - \beta) = \sin\alpha \cos\beta + \cos\alpha \sin\beta - (\sin\alpha \cos\beta - \cos\alpha \sin\beta) = 2\cos\alpha \sin\beta$
- 5) $\sin^2 x + \cos^2 x = 1$, is true for: **2010-182 Eng**
 (a) One value of x (b) Some values of x (c) No value of x (d) All values of x

Hint: $\sin^2 x + \cos^2 x = 1$, is an identity, i.e. it is true for all real values of x

- 6) If $\cot \theta > 0$ and $\sin \theta < 0$, then terminal ray of the angle lies in quadrant: **2011-104 Eng**
 (a) I (b) II (c) III (d) IV

Hint: As $\cot \theta > 0$ in I and III quadrants while $\sin \theta < 0$ in III and IV quadrants so if $\cot \theta > 0$ and $\sin \theta < 0$, then the terminal ray of the angle lies in III quadrant

- 7) $\sin 3\alpha = \dots\dots\dots$ **2011-111 Eng**
 (a) $4\cos^3 \alpha - 3\cos \alpha$ (b) $3\cos^3 \alpha - 4\cos \alpha$ (c) $3\sin \alpha - 4\sin^3 \alpha$ (d) $4\sin \alpha - 3\sin^3 \alpha$

Hint: $\sin 3\alpha = \sin(\alpha + 2\alpha) = \sin \alpha \cdot \cos 2\alpha + \cos \alpha \cdot \sin 2\alpha = \sin \alpha(1 - 2\sin^2 \alpha) + \cos \alpha(2\sin \alpha \cdot \cos \alpha)$
 $= \sin \alpha - 2\sin^3 \alpha + 2\sin \alpha \cdot \cos^2 \alpha = \sin \alpha - 2\sin^3 \alpha + 2\sin \alpha(1 - \sin^2 \alpha) = 3\sin \alpha - 4\sin^3 \alpha$

- 8) $\sin\left(\frac{3\pi}{2} - \theta\right) = \dots\dots\dots$ **2011-114 Eng**
 (a) $\sin \theta$ (b) $\cos \theta$ (c) $-\sin \theta$ (d) $-\cos \theta$

Hint: $\sin\left(\frac{3\pi}{2} - \theta\right) = \sin \frac{3\pi}{2} \cdot \cos \theta - \cos \frac{3\pi}{2} \cdot \sin \theta = -\cos \theta$

- 9) The length of ℓ of an arc of a circle in terms of r and θ is: **2011-174 Eng**
 (a) $\frac{r}{\theta}$ (b) $r\theta$ (c) $\frac{\theta}{r}$ (d) None of these

Hint: $\ell = r\theta$, where ℓ is length of the arc of a circle of radius r and θ is the central angle (in radians) subtended by the arc.

- 10) The associated angle of $\frac{8\pi}{3}$ is: **2012-178 Eng**
 (a) $\frac{\pi}{3}$ (b) $\frac{\pi}{4}$ (c) $\frac{2\pi}{3}$ (d) $\frac{4\pi}{3}$

Hint: As $\frac{8\pi}{3} - 2\pi = \frac{2\pi}{3}$, so Associated angle of $\frac{8\pi}{3}$ = associated angle of $\frac{2\pi}{3} = \pi - \frac{2\pi}{3} = \frac{\pi}{3}$

- 11) $\frac{\cos 75^\circ + \cos 15^\circ}{\sin 75^\circ - \sin 15^\circ} = \dots\dots\dots$ **2012-186 Eng**
 (a) $\sqrt{3}$ (b) $\frac{\sqrt{3}}{2}$ (c) $\frac{1}{2}$ (d) $\frac{1}{\sqrt{2}}$

Hint: $\frac{\cos 75^\circ + \cos 15^\circ}{\sin 75^\circ - \sin 15^\circ} = \frac{2\cos\left(\frac{75^\circ + 15^\circ}{2}\right)\cos\left(\frac{75^\circ - 15^\circ}{2}\right)}{2\cos\left(\frac{75^\circ + 15^\circ}{2}\right)\sin\left(\frac{75^\circ - 15^\circ}{2}\right)} = \frac{\cos 30^\circ}{\sin 30^\circ} = \frac{\frac{\sqrt{3}}{2}}{\frac{1}{2}} = \sqrt{3}$

- 12) $\sin 20^\circ \cos 70^\circ + \cos 20^\circ \sin 70^\circ = \dots\dots\dots$ **2013-9 Eng**
 (a) 1 (b) -1 (c) $\frac{-1}{\sqrt{3}}$ (d) $\frac{2}{\sqrt{3}}$

Hint: $\sin 20^\circ \cos 70^\circ + \cos 20^\circ \sin 70^\circ = \sin(20^\circ + 70^\circ) = \sin 90^\circ = 1$

- 13) $\tan \frac{\theta}{2} = \dots\dots\dots$ **2013-2 9 Eng**
 (a) $\pm \frac{\sqrt{1 + \cos \theta}}{1 - \cos \theta}$ (b) $\pm \frac{\sqrt{1 - \cos \theta}}{\sqrt{1 + \cos \theta}}$ (c) $\frac{1 - \cos \theta}{1 + \cos \theta}$ (d) $\frac{1 + \cos \theta}{1 - \cos \theta}$

Hint: $\tan \frac{\theta}{2} = \frac{\sin \theta/2}{\cos \theta/2} = \frac{\pm \sqrt{\frac{1 - \cos \theta}{2}}}{\pm \sqrt{\frac{1 + \cos \theta}{2}}} = \pm \frac{\sqrt{1 - \cos \theta}}{\sqrt{1 + \cos \theta}}$

14) $(\sec \theta - 1)(\sec \theta + 1) = \dots\dots\dots$ **2013-79 Eng**

- (a) $\cot^2 \theta$ (b) $\sec^2 \theta$ (c) $\tan^2 \theta$ (d) $\operatorname{cosec}^2 \theta$

Hint: $(\sec \theta - 1)(\sec \theta + 1) = \sec^2 \theta - 1 = \tan^2 \theta$

15) $\sin\left(\alpha + \frac{\pi}{2}\right) = \dots\dots\dots$ **2013-89 Eng**

- (a) $\sin \alpha$ (b) $-\sin \alpha$ (c) $\cos \alpha$ (d) $-\cos \alpha$

Hint: $\sin\left(\alpha + \frac{\pi}{2}\right) = \sin \alpha \cdot \cos \frac{\pi}{2} + \cos \alpha \cdot \sin \frac{\pi}{2} = \sin \alpha (0) + \cos \alpha (1) = \cos \alpha$

16) π radians = $\dots\dots\dots$ **2013-106 Eng**

- (a) 60° (b) 90° (c) 360° (d) 180°

17) $\sin 40^\circ \cos 50^\circ + \cos 40^\circ \sin 50^\circ = \dots\dots\dots$ **2014-14 Eng**

- (a) 1 (b) -1 (c) 0 (d) ∞

Hint: $\sin 40^\circ \cos 50^\circ + \cos 40^\circ \sin 50^\circ = \sin(40^\circ + 50^\circ) = \sin 90^\circ = 1$

18) $\tan 2\theta = \dots\dots\dots$ **2014-45 Eng**

- (a) $\frac{2\tan \theta}{1 - \tan^2 \theta}$ (b) $\frac{1 - \tan^2 \theta}{2\tan \theta}$ (c) $\frac{2\tan \theta}{1 + \tan^2 \theta}$ (d) $\frac{1 + \tan^2 \theta}{2\tan \theta}$

Hint: $\tan(\theta + \phi) = \frac{\tan \theta + \tan \phi}{1 - \tan \theta \tan \phi} \Rightarrow \tan(\theta + \theta) = \frac{\tan \theta + \tan \theta}{1 - \tan \theta \tan \theta} \Rightarrow \tan 2\theta = \frac{2\tan \theta}{1 - \tan^2 \theta}$

19) $\frac{\cos^3 \alpha - \sin^3 \alpha}{\cos \alpha - \sin \alpha} = \dots\dots\dots$ **2015-79 Eng**

- (a) $1 + 2\sin \alpha \cdot \cos \alpha$ (b) $1 - 2\sin \alpha \cdot \cos \alpha$ (c) $1 + \sin \alpha \cdot \cos \alpha$ (d) $1 - \sin \alpha \cdot \cos \alpha$

Hint: $\frac{\cos^3 \alpha - \sin^3 \alpha}{\cos \alpha - \sin \alpha} = \frac{(\cos \alpha - \sin \alpha)(\cos^2 \alpha + \sin^2 \alpha + 2\sin \alpha \cdot \cos \alpha)}{(\cos \alpha - \sin \alpha)} = 1 + 2\sin \alpha \cdot \cos \alpha$

20) $\sin(2\pi - \beta) = \dots\dots\dots$ **2015-112 Eng**

- (a) $\sin \beta$ (b) $\sin 2\pi$ (c) $\cos \beta$ (d) $\sin 2\pi$

21) If measure of the centre angle of a minor arc is θ , the measure of the angle subtended by the correspondent major arc:

- a) 2θ b) θ c) θ^2 d) $\theta^2/2$

22) If $\theta/2$ lies in the 3rd or 4th quadrant, then $\sin \rho/2 = \dots\dots\dots$ **2017**

- a) $\sqrt{\frac{1+\cos \theta}{2}}$ b) $\sqrt{\frac{1-\cos \theta}{2}}$ c) $-\sqrt{\frac{1+\cos \theta}{2}}$ d) $\pm \sqrt{\frac{1+\cos \theta}{2}}$

23) If $\theta < \pi$, then the relation between $\theta/2$ and $\pi/2$ is given by: **2017**

- a) $\frac{\theta}{2} = \frac{\pi}{2}$ b) $\frac{\theta}{2} < \frac{\pi}{2}$ c) $\frac{\theta}{2} > \frac{\pi}{2}$ d) $\frac{\theta}{2} \geq \frac{\pi}{2}$

24) $\frac{\cos 5\theta + \cos 3\theta}{\sin 5\theta + \sin 3\theta} = \dots\dots\dots$ **2017**

- a) b) c) d)

25) The correct option for $\tan 3\theta$ is : **2018**

- a) $\frac{3\tan \theta - \tan^3 \theta}{1 + 3\tan^2 \theta}$ b) $\frac{3\tan \theta - \tan^3 \theta}{1 - 3\tan^2 \theta}$ c) $\frac{3\tan \theta - \tan^3 \theta}{1 + 3\tan \theta}$ d) $\frac{3\tan \theta \tan^2 \theta}{1 - 3\tan^2 \theta}$

26) The identity $\frac{2\tan \theta}{1 + \tan^2 \theta}$ is true for :

- a) $\cos 2\theta$ b) $\tan 2\theta$ c) $\sin 2\theta$ d) $\cot 2\theta$

Answers:

- | | | |
|---------------------|------------------------|---------|
| 1. (d) | 5. (d) All values of x | 9. (b) |
| 2. (c) 3rd quadrant | 6. (c) III 7. (c) | 10. (a) |
| 3. (c) 1 4. (a) | 8. (d) | 11. (a) |

12. (a)
13. (b)
14. (c)
15. (c) cos
16. (d) 180°

17. (a)
18. (a)
19. (c)
20. (a)
21. d

22. c
23. b
24. c
25. a
26. c

CHAP NO 11 APPLICATION OF TRIGONOMETRY

1. The point of intersection of the medians of a triangle is called:
(a) in-center (b) centroid (c) orthocenter (d) circumcenter **2011-64 Eng**

2. With usual notation, the value of $a - b + c$ is:
(a) $s + b$ (b) $s - b$ (c) $2s - b$ (d) $2(s - b)$ **2011-121 Eng**

Hint: $a - b + c = a + b + c - 2b = 2s - 2b = 2(s - b)$ ($\because 2s = a + b + c$)

3. Radius of the described circle opposite to the vertex A is: **2011-124 Eng**
(a) $\frac{\Delta}{a}$ (b) $\frac{\Delta}{s}$ (c) $\frac{\Delta}{s - a}$ (d) $\frac{s - a}{\Delta}$

4. The radius R of the circum-circle is: **2011-183 Eng**
(a) $\frac{a}{2\sin\alpha}$ (b) $\frac{b}{2\sin\beta}$ (c) $\frac{abc}{4\Delta}$ (d) All

Hint: $R = \frac{a}{2\sin\alpha} = \frac{b}{2\sin\beta} = \frac{c}{2\sin\gamma} = \frac{abc}{4\Delta}$

5. If a, b, c are sides of a triangle and $s = \frac{a+b+c}{2}$, then area of the triangle is: **2013-19 Eng**

- (a) $\sqrt{2s(s-a)(s-b)(s-c)}$ (b) $\sqrt{s(s+a)(s+b)(s+c)}$
(d) $\sqrt{2s(s+a)(s+b)(s+c)}$ (d) $\sqrt{s(s-a)(s-b)(s-c)}$

6. A circle passing through the vertices of any triangle is called: **2013-49 Eng**
(a) Semi circle (b) Circum-circle (c) In-circle (d) Escribed circle

7. If a, b, c are the sides of a triangle and α, β, γ are the respective angles, then area of the triangle is: **2013-103 Eng**

- (a) $\frac{1}{2} a^2 \sin\alpha$ (b) $\frac{1}{2} b^2 \sin\gamma$ (c) $\frac{1}{2} \sin\alpha$ (d) $\frac{1}{2} bc \sin\alpha$

8. $(\operatorname{cosec}\theta - 1)(\operatorname{cosec}\theta + 1) = \dots\dots\dots$ **2014-5 Eng**
(a) $\tan^2\theta$ (b) $\cot^2\theta$ (c) $\sec^2\theta$ (d) $\sin^2\theta$

Hint: $(\operatorname{cosec}\theta - 1)(\operatorname{cosec}\theta + 1) = \operatorname{cosec}^2\theta - 1 = \cot^2\theta$

9. $15^\circ = \dots\dots\dots$ **2014-35 Eng**
(a) $\frac{\pi}{6}$ radians (b) $\frac{\pi}{12}$ radians (c) $\frac{\pi}{18}$ radians (d) $\frac{\pi}{24}$ radians

Hint: $15^\circ = 15 \times \frac{\pi}{180} \text{ rad} = \frac{\pi}{12} \text{ rad}$

10. If a, b, c are the lengths of the sides of a triangle and α, β, γ are its included angles then $\frac{b^2 + c^2 - a^2}{2bc} =$

- (a) $\sin\alpha$ (b) $\cos\alpha$ (c) $\cos\beta$ (d) $\cos\gamma$ **2014-106 Eng**

Hint: $\cos\alpha = \frac{b^2 + c^2 - a^2}{2bc}$

11. The in-radius of circle inscribed in a triangle with sides a, b, c is: **2015-47 Eng**
 (a) $\frac{\Delta}{S-a}$ (b) $\frac{\Delta}{S-b}$ (c) $\frac{\Delta}{S-c}$ (d) $\frac{\Delta}{S}$
12. $a^2 = b^2 + c^2 - 2bc\cos\alpha$, is called: **2015-128 Eng**
 (a) Law of sines (b) Law of cosines (c) Law of tangents (d) Law of cotangents
13. If a, b, c are the sides of a triangle and α, β, γ are the respectively angles, then area of the triangle is; **2015-183 Eng**
 (a) $\frac{1}{2}a^2\sin\alpha$ (b) $\frac{1}{2}b^2\sin\gamma$ (c) $\frac{1}{2}c^2\sin\beta$ (d) $\frac{1}{2}bc\sin\alpha$
- Hints:** $\Delta = \frac{1}{2}bc\sin\alpha = \frac{1}{2}ac\sin\beta = \frac{1}{2}ab\sin\gamma = \frac{1}{2}a^2 \frac{\sin\beta\sin\gamma}{\sin\alpha} = \frac{1}{2}b^2 \frac{\sin\alpha\sin\gamma}{\sin\beta} = \frac{1}{2}c^2 \frac{\sin\alpha\sin\beta}{\sin\gamma}$
14. $\pm \sqrt{\frac{1-\cos^2 2\alpha}{2}} =$
 a) $-\sin\alpha$ b) $\cos\alpha$ c) $\sin\alpha$ d) $-\cos\alpha$
15. if measure of the central angle of the minor arc is θ , then measure of the angle made by the major arc is; **2016**
 a) $\frac{1}{2}\theta$ b) θ c) 3θ d) 10
16. in terms of Δ , $\sin a =$ _____, where a, b and c as its sides of triangle; **2016**
 a) $4s/bc$ b) Δ/bc c) $2\Delta/bc$ d) $2\Delta/a$
17. if α, β and γ are angles of the triangles with a, b and c as its sides, then which is the correct statement.
 a) $a^2 = b^2 + c^2 + 2bccos\theta$ b) $a^2 = b^2 - c^2 - 2bccos\theta$ c) $a^2 = b^2 + c^2 - 2bccos\theta$ d) $a^2 = b^2 - c^2 + 2bccos\theta$
18. let an oblique triangle with dimensions $a=30, b=7$ and $\beta = 85^\circ$, then for finding α , we use _____? **2018**
 a) sin law b) cosine law c) tangent law d) both a and b

Answers:

1. (b). centroid
 2. (d)
 3. (c)
 4. (d) All
 5. (d)
 6. (b) Circum-circle

7. (d)
 8. (b)
 9. (b)
 10. (b)
 11. (d)
 12. (b) Law of cosines

13. (d)
 14. c
 15. b
 16. c
 17. c
 18. d

CHAP NO 12 GRAPHS OF TRIGONOMETRIC AND INVERSE TRIGONOMETRIC FUNCTIONS AND SOLUTIONS OF TRIGONOMETRIC EQUATIONS

- 1) The period of $3\sin \frac{x}{3}$ is **2011-117 Eng**
 (a) π (b) 2π (c) 3π (d) 6π
- Hint:** Period of $3\sin \frac{x}{3} = \frac{\text{period of } \sin x}{1/3} = \frac{2\pi}{1/3} = 6\pi$
- 2) The domain of the function $y = \cos^{-1}x$ is: **2011-127 Eng**
 (a) $0 \leq x \leq 1$ (b) $-1 \leq x \leq 1$ (c) $1 \leq x \leq 2$ (d) $-2 \leq x \leq 2$
- Hint:** $\cos y = x \Leftrightarrow y = \cos^{-1}x, -\frac{\pi}{2} \leq y \leq \frac{\pi}{2}, -1 \leq x \leq 1$
- 3) The domain of principal sine function is: **2011-131 Eng**
 (a) $\left[0, \frac{\pi}{2}\right]$ (b) $\left[-\frac{\pi}{2}, \frac{\pi}{2}\right]$ (c) $\left[0, \frac{3\pi}{2}\right]$ (d) $[0, 2\pi]$
- 4) $\tan^{-1}\left(\frac{5}{6}\right) + \tan^{-1}\left(\frac{1}{11}\right) = \dots\dots\dots$ **2012-35 Eng**

(a) $\frac{\pi}{2}$

(b) $\frac{\pi}{4}$

(c) $\frac{3\pi}{2}$

(d) $\frac{\pi}{3}$

Hint: $\tan^{-1}\left(\frac{5}{6}\right) + \tan^{-1}\left(\frac{1}{11}\right) = \tan^{-1}\left(\frac{5/6 + 1/11}{1 - (5/6)(1/11)}\right) = \tan^{-1}\left(\frac{61/66}{61/66}\right) = \tan^{-1}(1) = \frac{\pi}{4}$

5) Period of $\frac{1}{2} \tan 3x$ is

2012-109 Eng

(a) $\frac{\pi}{6}$

(b) $\frac{\pi}{3}$

(c) $\frac{2}{\pi}$

(d) $\frac{\pi}{7}$

Hint: Period of $\frac{1}{3} \tan 3x = \frac{\text{Period of } \tan x}{3} = \frac{\pi}{3}$

6) Period of $\sin x$ is.....

2012-119 Eng

(a) $\frac{\pi}{2}$

(b) 2π

(c) π

(d) $\frac{3\pi}{2}$

7) If A (x_1, y_1), B(x_2, y_2), C(x_3, y_3) are the vertices of a triangle ABC and a, b, c be the lengths of its side then $\left(\frac{ax_1 + bx_2 + cx_3}{a+b+c}, \frac{ay_1 + by_2 + cy_3}{a+b+c}\right)$ is the:

2012-138 Eng

(a) Ortho-center

(b) Centroid

(c) In-centre

(d) Circum-centre

Hint: In-centre is the centre of the circle drawn inside a triangle touching all of its three sides internally.

8) The domain of principal sine function is:

2013-26 Eng

(a) $\left[0, \frac{\pi}{2}\right]$

(b) $\left[-\frac{\pi}{2}, \frac{\pi}{2}\right]$

(c) $\left[0, \frac{3\pi}{2}\right]$

(d) $[0, 2\pi]$

9) The inverse relation of $y = \sin x$, is defined by the equation:

2013-126 Eng

(a) $y = \sin^{-1} x$

(b) $x = \sin^{-1} y$

(c) $y = \cos^{-1} x$

(d) $x = \cos^{-1} y$

Hint: $R^{-1} = \{(y, x) : (x, y) \in R\}$, where R^{-1} is inverse relation of a relation R

10) The period of $\tan x$ is:

2014-44 Eng

(a) 2π

(b) -2π

(c) π

(d) $-\pi$

11) The domain of principle Sine function is:

2015-1 Eng

(a) $\left[0, \frac{\pi}{2}\right]$

(b) $\left[-\frac{\pi}{2}, \frac{\pi}{2}\right]$

(c) $\left[0, \frac{3\pi}{2}\right]$

(d) $[0, 2\pi]$

12) the range of $y = \cos^{-1} x$ is:

2016

(a) $\left[-\frac{\pi}{2}, \frac{\pi}{2}\right]$

(b) $\left[\frac{\pi}{2}, \frac{\pi}{2}\right]$

(c) $[0, \pi]$

(d) $[0, 2\pi]$

13) if $g(x) = 3x+1$, then $g^{-1}(g(x)) =$

2016

(a) zero

(b) x

(c) g(x)

(d) none of the above

14) if $\theta = 0, \pm\pi, \pm 2\pi, \dots, \pm n\pi, n \in \mathbb{Z}$, then $R = \{t | t = n\pi, n \in \mathbb{Z}\}$, is the domain of

2016

(a) sine

(b) cosine

(c) tangent

(d) cotangent

15) period of the function $y = 5 \sin 3x$, is

2016

(a) $5\pi/2$

(b) $3\pi/2$

(c) $2\pi/3$

(d) 2π

16) $\tan^{-1}(5/6) + \tan^{-1}(1/11) = ?$

(a) $-\pi/4$

(b) $\pi/4$

(c) $\pi/5$

(d) $\pi/11$

17) domain and range of the relation $x^2 + y^2 = 9$, is

2016

(a) R

(b) $\{a | a \in \mathbb{R}, a > 0\}$ (c) $\{-3, -3\}$ (d) $\{-3, 3\}$

18) graph of the function $y = \sin x$ over the interval $[0, 2\pi]$ intersects with x-axis at:

2017

(a) $\sin(-\theta) = -\sin\theta$

(b) $\sin(\theta \pm 2\pi)$

(c) $\sin(\theta - \pi) = -\sin\theta$

(d) $\sin(\pi - \theta) = \sin\theta$

(a) one point

(b) two points

(c) three points

(d) infinite points

19) which one of the following expresses periodic property

(a) $\sin(-\theta) = -\sin\theta$

(b) $\sin(\theta \pm 2\pi) = \sin\theta$

(c) $\sin(\theta - \pi) = -\sin\theta$

(d) $\sin(\pi - \theta) = \sin\theta$

20) the correct option for $\cos^{-1}(-x) + \cos^{-1}(-x) =$

2018

	a) zero	b) π	c) $\pi/2$	d) $3\pi/2$
21)	the graph of the $y = \sec x$, does not meet:			2018
	a) x-axis	b) y-axis	c) at $x = 0^0$	d) none of the above
22)	the domain of $f(x) = \sec x$ is;			2018
	a) $(0, \pi) - \{\pi/2\}$	b) $[-\pi/2, \pi/2]$	c) $[0, \pi] - \{\pi/2\}$	d) $(-\pi/2, \pi/2)$

Answers:

1. (d) 6π	2. (b) $-1 \leq x \leq 1$	3. (b) $\left[-\frac{\pi}{2}, \frac{\pi}{2}\right]$	4. (b) $\frac{\pi}{4}$	5. (b) $\frac{\pi}{3}$	6. (b) 2π
7. (c) In-centre	8. (b) $\left[-\frac{\pi}{2}, \frac{\pi}{2}\right]$	9. (b) $x = \sin^{-1}y$	10. (c) π	11. (b) $\left[-\frac{\pi}{2}, \frac{\pi}{2}\right]$	12. c
13. b	14. d	15. c	16. b	17. d	18. a
19. b	20. a	21. a	22. c		

CHAP NO 1 FUNCTIONS & LIMITS

1) $\lim_{n \rightarrow \infty} \left(1 + \frac{1}{n}\right)^n =$

2010-14 Eng

(a) e

(b) $\lim_{n \rightarrow 0} (1+n)^{\frac{1}{n}}$

(c) 1

(d) Both (a) & (b)

Hint: $\lim_{n \rightarrow \infty} \left(1 + \frac{1}{n}\right)^n = \lim_{n \rightarrow 0} (1+n)^{\frac{1}{n}} = e \approx 2.71828$

2) If $X = \{a, b, c, d\}$, $Y = \{1, 2, 3, 4\}$ and $g = \{(a, 3), (b, 2), (c, 3)\}$, then g is ___ function from x to y .

2010-20 Eng

(a) 1-1

(b) Onto

(c) Bijective

(d) None

Hint: As $\text{Dom}(g) = X$, $\text{Rang}(g) = \{2, 3\} \neq Y$ but distinct elements of X have distinct images in Y , so g is a 1-1 function

3) $\lim_{x \rightarrow \infty} \left(\frac{\sqrt{1+x} - 1}{x} \right) =$

2010-28 Eng

(a) $\frac{0}{0}$ (b) $\frac{1}{2}$ (c) ∞

(d) 0

Hint: $\lim_{x \rightarrow \infty} \left(\frac{\sqrt{1+x} - 1}{x} \right) = \lim_{x \rightarrow \infty} \left(\frac{\sqrt{1+x} - 1}{x} \times \frac{\sqrt{1+x} + 1}{\sqrt{1+x} + 1} \right) = \lim_{x \rightarrow \infty} \left(\frac{x}{x(\sqrt{1+x} + 1)} \right) = \lim_{x \rightarrow \infty} \frac{1}{\sqrt{1+x} + 1} = \frac{1}{\infty} = 0$

4) $y = -2^x$ is the reflection of:

2010-44 Eng

(a) $y = \frac{1}{2^x}$ (b) $y = 2^x$ (c) $y = (-2)^x$ (d) $y = \frac{1}{-2^x}$

Hint: $y = f(-x)$ is the reflection of $y = f(x)$ about y -axis and $-y = f(x)$ is the reflection of $y = f(x)$ about x -axis so $y = -2^x$ is the reflection $y = 2^x$ about x -axis.

5) $\lim_{x \rightarrow \infty} \left(\frac{2x^2 + 5x + 1}{20x^2 - 1} \right) =$

2010-54 Eng

(a) $\frac{1}{10}$ (b) ∞

(c) -1

(d) 0

Hint: $\lim_{x \rightarrow \infty} \left(\frac{2x^2 + 5x + 1}{20x^2 - 1} \right) = \lim_{x \rightarrow \infty} \left(\frac{2 + 5/x + 1/x^2}{20 - 1/x^2} \right) = \frac{1}{10}$

- 6) The Function $f : x \rightarrow \sqrt{x}$ is called: **2010-76 Eng**
 (a) Identity function (b) linear function (c) Square root function (d) None

- 7) $\lim_{m \rightarrow \infty} \left(1 + \frac{1}{m}\right)^{20} = \dots\dots\dots$ **2010-97 Eng**
 (a) 0 (b) ∞ (c) e (d) 1

Hint: $\lim_{m \rightarrow \infty} \left(1 + \frac{1}{m}\right)^{20} = \left(1 + \lim_{m \rightarrow \infty} \frac{1}{m}\right)^{20} = (1+0)^{20} = 1^{20} = 1$

- 8) Range of the function $f(x) = x^2 + 1$, is..... **2010-132 Eng**
 (a) \emptyset (b) $f(x) > 1$ (c) $f(x) \geq 1$ (d) ∞

Hint: We know that, $\forall x \in \mathbb{R}, x^2 \geq 0 \Rightarrow x^2 + 1 \geq 1 \Rightarrow f(x) \geq 1$

- 9) If $f(x) = \frac{1}{x}$ and $g(x) = x^3$, then: **2010-175 Eng**
 (a) $f \circ g < g \circ f$ (b) $f \circ g \neq g \circ f$ (c) $f \circ g = g \circ f$ (d) $f \circ g > g \circ f$

Hint: $f \circ g(x) = f(g(x)) = f(x^3) = \frac{1}{x^3}$ and $g \circ f(x) = g(f(x)) = g\left(\frac{1}{x}\right) = \left(\frac{1}{x}\right)^3 = \frac{1}{x^3}$, so $f \circ g = g \circ f$

- 10) The inverse of $y = 2^x$, is: **2010-188 Eng**
 (a) $y = \log_2 x$ (b) $y = 2 - x$ (c) $y = -2x$ (d) (None of above d)

Hint: $f(x) = y = 2^x \Rightarrow \ln y = \ln 2^x = x \ln 2 \Rightarrow x = \frac{\ln y}{\ln 2} \Rightarrow f^{-1}(y) = \frac{\ln y}{\ln 2} \Rightarrow f^{-1}(x) = \frac{\ln x}{\ln 2}$ ($\because y = f(x) \Rightarrow x = f^{-1}(y)$)

- 11) $\lim_{x \rightarrow \infty} \frac{\sin x}{x} = \dots\dots\dots$ **2011-4 Eng**
 (a) 0 (b) 1 (c) 2 (d) 6

- 12) If $\lim_{n \rightarrow \infty} \left(1 + \frac{1}{n}\right)^{2n} =$ **2011-11 Eng**
 (a) e^{-1} (b) $e^{\frac{1}{2}}$ (c) e^2 (d) e^3

Hint: $\lim_{n \rightarrow \infty} \left(1 + \frac{1}{n}\right)^{2n} = \left(\lim_{n \rightarrow \infty} \left(1 + \frac{1}{n}\right)^n\right)^2 = (e)^2 = e^2$

- 13) $\lim_{x \rightarrow \infty} \left(1 + \frac{1}{x}\right)^x = \dots\dots\dots$ **2012-7 Eng**
 (a) x (b) $\frac{1}{x}$ (c) e (d) ∞

Hint: $\lim_{x \rightarrow \infty} \left(1 + \frac{1}{x}\right)^x = \lim_{x \rightarrow 0} (1+x)^{\frac{1}{x}} = e$

- 14) $\lim_{x \rightarrow 0^+} \frac{x}{\log_a x} = \dots\dots\dots$ **2012-105 Eng**
 (a) 0 (b) 2 (c) 3 (d) ∞

Hint: $\lim_{x \rightarrow 0^+} \frac{x}{\log_a x} = \lim_{x \rightarrow 0^+} \frac{\frac{d}{dx}(x)}{\frac{d}{dx} \log_a x} = \lim_{x \rightarrow 0^+} \frac{1}{\frac{1}{x \ln a}} = \lim_{x \rightarrow 0^+} x \ln a = 0 \cdot \ln a = 0$

- 15) If $f(x) = \frac{x}{x+1}$ then $[f(2)]^{-1} = \dots\dots\dots$ **2013-99 Eng**

(a) $\frac{1}{2}$

(b) $\frac{-2}{3}$

(c) $\frac{2}{3}$

(d) $\frac{3}{2}$

Hint: $[f(2)]^{-1} = \left[\frac{2}{2+1}\right]^{-1} = \left[\frac{2}{3}\right]^{-1} = \frac{3}{2}$

16) $\sinh x = \dots\dots\dots$

2013-136 Eng

(a) $\frac{1}{2}(e^{-x} + e^x)$

(b) $\frac{1}{2}(e^x - e^{-x})$

(c) $\frac{1}{2}(e^{-x} - e^x)$

(d) $\frac{1}{2}(e^x + e^{-x})$

17) Let $f(x) = 2x - 1$ and $g(x) = \sqrt{2x + 5}$, then $f(g(2)) = \dots\dots\dots$

2015-35 Eng

(a) 5

(b) $\sqrt{11}$

(c) Undefined

(d) -5

Hint: $f(g(2)) = f(\sqrt{2(2)+5}) = f(\sqrt{9}) = f(3) = 2(3) - 1 = 6 - 1 = 5$

18) if $y=f(x)$ is continuous on (a,b) then $f(x)$ has inflection point at $x = c$, if:

2016

a) $f''(c) = 0$

b) $f''(c) > 0$

c) $f''(c), 0$

d) $f''(c) = 0$

19) the approximate solution of a function $y=f(x)$ lies in the interval (a,b) is:

2011

a) $f(a).f(b) > 0$

b) $f(a) < 0$

c) $f(a).f(b) < 0$

d) $f(b) > 0$

20) if $f(x)$ and $g(x)$ are two functions then $(f \circ g)^{-1}(x) = ?$

2016

a) $(g \circ f)(x)$

b) $(f^{-1} \circ g^{-1})(x)$

c) $(g^{-1} \circ f^{-1})$

d) $(g \circ f)(1/x)$

21) $\log_a a \cdot \log_a b = ?$

2016

a) $\log_c a$

b) $\log_b c$

c) $\log_c b$

d) 1

22) if $f(x) = \begin{cases} 3x+2 & \text{for } x \leq 1 \\ x^2-1 & \text{for } x > 1 \end{cases}$, then $f(1)$ is

2016

a) -1

b) 0

c) 3

d) 5

23) $\lim_{(x,y) \rightarrow (-1,1)} f(x,y) = \frac{x^2}{x^2+y^2+2}$ is:

[2017]

a) $1/4$

b) $-1/4$

c) $1/2$

d) $1/2$

24) degrees of the homogenous function $f(x,y) = \frac{\sqrt{x}+\sqrt{y}}{x+y}$ is;

[2017]

a) 1

b) 0

c) $1/2$

d) $-1/2$

25) if $\begin{cases} +k(x+1), & \text{if } x \leq 0 \\ k(1-x^2), & \text{if } x > 0 \\ 0, & \text{if } x = 0 \end{cases}$ then If $f(2) = 5$, $k =$

a) 0

b) $5/3$

c) $-5/3$

d) $-1/2$

26) let $f(x)$ be a differentiable function on (a,b) then $f(x)$ is strictly decreasing on (a,b) if: [2017]

a) $f'(x) > 0$ for $a < x < b$

b) $f'(x) < 0$ for $a < x < b$

c) $f'(x) = 0$ for $a < x < b$

d) $f'(x) \leq 0$ for $a < x < b$

27) which of the following is the correct option for the expression $\lim_{x \rightarrow 8} \frac{\sqrt{x}-\sqrt{8}}{x-8} =$ [2018]

a) $8\sqrt{2}$

b) $4\sqrt{2}$

c) $2\sqrt{2}$

d) $1/4\sqrt{2}$

28) $\lim_{x \rightarrow 0} \frac{(1+x)^{50} - 1}{x} =$

[2018]

a) 50

b) 0

c) 1

d) n

Answers:

1. (d) Both (a)&(b)
2. (d) None
3. (d) 0 4. (b)
5. (a)
6. (c) Square root function
7. (d) 1
8. (c)
9. (c)
10. (None of above d)

11. (b) 1
12. (c)
13. (c) e
14. (a) 0
15. (d)
16. (b)
17. (a) 5
18. d
19. c

20. c
21. c
22. d
23. a
24. c
25. c
26. b
27. d
28. a

CHAP NO 2

DIFFERENTIATION

1) $\frac{d}{dx} a^x = \dots\dots\dots$

2010-106 Eng

(a) a^x

(b) $a^x \cdot \ln a$

(c) $\frac{ax}{\ln a}$

(d) $a^x \cdot \ln x$

Hint: $\frac{d}{dx} a^x = a^x \cdot \ln a$

2) $\frac{d}{dx} (\cos x \cdot \sec x) =$

2010-110 Eng

(a) 1

(b) 0

(c) $\sec^2 x$

(d) None of above

Hint: $\frac{d}{dx} (\cos x \cdot \sec x) = \frac{d}{dx} \left(\cos x \cdot \frac{1}{\cos x} \right) = \frac{d}{dx} (1) = 0$

3) $\frac{d}{dx} \left(\frac{1}{g(x)} \right) = \dots\dots\dots$, where $g(x) \neq 0$

2010-146 Eng

(a) $-g(x)$

(b) $-\frac{g'(x)}{[g(x)]^2}$

(c) 0

(d) None

Hint: $\frac{d}{dx} \left(\frac{1}{g(x)} \right) = \frac{d}{dx} [g(x)]^{-1} = -[g(x)]^{-2} g'(x) = -\frac{g'(x)}{[g(x)]^2}$

4) $\frac{d}{dx} \log_e (\sin x) = \dots\dots\dots$

2010-156 Eng

(a) $\tan x$

(b) $\operatorname{Cosec} x$

(c) $\cos x$

(d) $\cot x$

Hint: $\frac{d}{dx} \log_e (\sin x) = \frac{d}{dx} \ln (\sin x) = \frac{1}{\sin x} \frac{d}{dx} (\sin x) = \frac{\cos x}{\sin x} = \cot x$

5) If x be the height of a person and t be the time taken for x then $\frac{dx}{dt}$ is _____ 2012-2 Eng

(a) Velocity

(b) acceleration

(c) Growth

(d) None

6) $\frac{d}{dx} \operatorname{sech} x = \dots\dots\dots$

2012-15 Eng

(a) $\tan h x \operatorname{sech} x$

(b) $-\tanh x \cdot \operatorname{sech} x$

(c) $\cosh x$

(d) $-\cosh x$

7) $\frac{d}{dx} \sinh^{-1} x = \dots\dots\dots$

2012-18 Eng

(a) $\frac{1}{\sqrt{1+x^2}}$, $x \in \mathbb{R}$

(b) $\frac{1}{\sqrt{x^2-1}}$, $x \in \mathbb{R}$

(c) $\frac{1}{1-x^2}$

(d) $\frac{1}{1+x^2}$

8) $\frac{d}{dx}(|x|) = \dots\dots\dots$ **2012-96 Eng**

- (a) $\frac{x}{x^2}$ (b) $\frac{x^x}{x}$ (c) $\frac{x}{|x|}$ (d) $\frac{|x|}{x}$

Hint: $\frac{d}{dx}(|x|) = \frac{d}{dx}(\sqrt{x^2}) = \frac{d}{dx}(x^2)^{\frac{1}{2}} = \frac{1}{2}(x^2)^{\frac{1}{2}-1} \frac{d}{dx}(x^2) = \frac{1}{2}(x^2)^{-\frac{1}{2}}(2x) = \frac{x}{(x^2)^{\frac{1}{2}}} = \frac{x}{\sqrt{x^2}} = \frac{x}{|x|}$

9) $\frac{d}{dx} \text{Cosh}x = \dots\dots\dots$ **2012-132 Eng**

- (a) **Sinhx** (b) Sec h x (c) -Sinhx (d) Tanhx

10) The derivative of $-8x^5$ is: **2013-139 Eng**

- (a) -8 (b) $-40x$ (c) $-40x^5$ (d) $-40x^4$

Hint: $\frac{d}{dx}(-8x^5) = -8 \frac{d}{dx}x^5 = -8(5x^4) = -40x^4$

11) $\frac{d}{dx} \cos \text{csc}x = \dots\dots\dots$ **2013-163 Eng**

- (a) Tan x. cosec x (b) $-\cot x \cdot \sec x$ (c) $-\tan x \cdot \sec x$ (d) $-\cot x \cdot \text{cosec} x$

12) $\frac{d}{dx} \cos \text{ec}^{-1}x = ?$, where $x \in [-1, 1]$ **2013-166 Eng**

- (a) $\frac{1}{x\sqrt{x^2+1}}$ (b) $\frac{1}{x\sqrt{x^2-1}}$ (c) $\frac{-1}{|x|\sqrt{x^2+1}}$ (d) $\frac{-1}{|x|\sqrt{x^2-1}}$

13) $\frac{d}{dx} \text{Cos}^{-1}x = \dots\dots\dots$ **2014-156 Eng**

- (a) $\frac{1}{\sqrt{1-x^2}}$, $x \in (-1, 1)$ (b) $\frac{1}{\sqrt{x^2+1}}$, $x \in \square$ (c) $\frac{-1}{\sqrt{1-x^2}}$, $x \in (-1, 1)$ (d) $\frac{-1}{\sqrt{x^2+1}}$, $x \in \square$

Hint: $\frac{d}{dx} \text{Cos}^{-1}x = \frac{-1}{\sqrt{1-x^2}}$, $x \in (-1, 1)$

14) Derivative of e^{-3x} is..... **2014-164 Eng**

- (a) $-3e^{-3x}$ (b) e^{-3x} (c) $-e^{-3x}$ (d) $3e^{-3x}$

Hint: $\frac{d}{dx} e^{-3x} = e^{-3x} \frac{d}{dx}(-3x) = -3e^{-3x}$

15) If $y = (3x^2 - 6x + 4)^{-1}$, then $\frac{dy}{dx} = \dots\dots\dots$ **2014-165 Eng**

- (a) $\frac{6(x-1)}{(3x^2-6x+4)^2}$ (b) $\frac{-6(x+1)}{(3x^2-6x+4)^2}$ (c) $\frac{-6(x-1)}{(3x^2-6x+4)^2}$ (d) $\frac{-6(1-x)}{(3x^2-6x+4)^2}$

Hint: $\frac{d}{dx}(3x^2 - 6x + 4)^{-1} = -1(3x^2 - 6x + 4)^{-1-1} \frac{d}{dx}(3x^2 - 6x + 4) = -(3x^2 - 6x + 4)^{-2}(6x - 6) = \frac{-6(x-1)}{(3x^2 - 6x + 4)^2}$

16) If $x = f(t)$ and $y = g(t)$, then $\frac{dy}{dx} = \dots\dots\dots$ **2015-13 Eng**

- (a) $\frac{dy}{dt} \cdot \frac{dt}{dx}$ (b) $\frac{dy}{dt} \cdot \frac{1}{\frac{dx}{dt}}$ (c) $\frac{\left(\frac{dy}{dt}\right)}{\left(\frac{dx}{dt}\right)}$ (d) All of the above

Hint: By chain rule, $\frac{dy}{dx} = \frac{dy}{dt} \cdot \frac{dt}{dx} = \frac{dy}{dt} \cdot \frac{1}{\frac{dx}{dt}} = \frac{\left(\frac{dy}{dt}\right)}{\left(\frac{dx}{dt}\right)}$

17) The ratio of dy to dx for $xy = 2$, is **2015-23 Eng**

- (a) $\frac{dy}{dx} = y$ (b) $\frac{dy}{dx} = \frac{2}{y}$ (c) $\frac{dy}{dx} = \frac{-y}{x}$ (d) $\frac{dy}{dx} = \frac{-x}{y}$

Hint: $\frac{d}{dx}(xy) = \frac{d}{dx}(2) \Rightarrow x \frac{dy}{dx} + y \frac{dx}{dx} = 0 \Rightarrow x \frac{dy}{dx} + y = 0 \Rightarrow \frac{dy}{dx} = \frac{-y}{x}$

18) If n is a positive integer and $f(x) = x^{-n}$, where $x \neq 0$, then $f'(x) = \dots\dots\dots$ **2015-100 Eng**

- (a) nx^{n-1} (b) $-nx^{-n}$ (c) $-nx^{-n-1}$ (d) nx^{-n-1}

Hint: $f'(x) = \frac{d}{dx}(x^{-n}) = -nx^{-n-1}$

19) If $x = t^2 + 3t - 2$, $y = 2 - t - t^2$, then $\frac{dy}{dx} = \dots\dots\dots$ **2015-101 Eng**

- (a) $\frac{t^2 + 3t - 2}{2 - t - t^2}$ (b) $\frac{2t^2 + 3t - 2}{-t - t^2}$ (c) $\frac{-(2t+1)}{2t+3}$ (d) $\frac{2t+3}{-2t-1}$

Hint: Since, $\frac{dx}{dt} = \frac{d}{dt}(t^2 + 3t - 2) = 2t + 3$, $\frac{dy}{dt} = \frac{d}{dt}(2 - t - t^2) = -1 - 2t = -(2t + 1)$, so $\frac{dy}{dx} = \frac{dy}{dt} \div \frac{dx}{dt} = \frac{-(2t+1)}{2t+3}$

20) $\frac{d}{dx} \cos^{-1} x = \dots\dots\dots$ **2015-141 Eng**

- (a) $\frac{1}{\sqrt{1+x^2}}$ (b) $\frac{-1}{\sqrt{1-x^2}}$ (c) $\frac{-1}{\sqrt{1+x^2}}$ (d) $\frac{1}{\sqrt{1-x^2}}$

21) If v denotes the velocity, then $\lim_{h \rightarrow 0} \frac{v(t+h) - v(t)}{h}$, defines; **2015-175 Eng**

(a) Velocity (b) Distance (c) Acceleration (d) Average velocity

Hint: Acceleration = $a = \lim_{h \rightarrow 0} \frac{v(t+h) - v(t)}{h}$

22) $m^n \cdot a^{mx} (\log a)^n$ is the nth derivative of; **2015-176 Eng**

- (a) ma^{mx} (b) a^{mx} (c) $m^n a^{nx}$ (d) $(ma^{mx})^n$

Hint: $f(x) = a^{mx} \Rightarrow f'(x) = m a^{mx} (\log a)$, $f''(x) = m^2 a^{mx} (\log a)^2, \dots\dots\dots, f^{(n)}(x) = m^n a^{mx} (\log a)^n$

23. if $f(x,y)$ is a given function, then $\lim_{\Delta y \rightarrow 0} \frac{f(x,y+\Delta y) - f(x,y)}{\Delta y} = ?$ **2016**

a) f_x b) f_y c) $f(x,y)$ d) none of the above

24. for a function $f(x,y,z) = xyz \sin(xyz)$, $\frac{d}{dz} f(1,1,\pi/2) =$ **2017**

a) $\pi/2$ b) $3\pi/2$ c) π d) 1

25. if $y = \operatorname{cosec}^{-1}(e^{-x})$, then $dy/dx =$ **2017**

a) $\frac{e^{-x}}{\sqrt{e^{-2x}-1}}$ b) $\frac{-e^{-x}}{\sqrt{e^{-2x}-1}}$ c) $\frac{+1}{\sqrt{e^{-2x}-1}}$ d) $\frac{-1}{\sqrt{e^{-2x}-1}}$

26. the slope of the tangent to each point on the graph is definitely measured by: **2018**

a) $f(x)$ b) $f(y)$ c) $f'(x)$ d) $f(f(x)) dx$

27. a particle moves along a curve with position $R = \cos \hat{i} + t\hat{j} + \sin t \hat{k}$, then its speed for $t=2$ sec, will be: **2018**

a) $\sqrt{2}$ b) $\sqrt{3}$ c) 1 d) none of the above

28. the derivative of the function in $[\cos(\ln x)]$ is; **2018**

a) $\frac{x}{\tan(\ln x)}$ b) $\frac{\tan(\ln x)}{x}$ c) $-\frac{\tan(\ln x)}{x}$ d) $\frac{\cot(\ln x)}{x}$ e) none of them

29. if $z = f(x,y)$ is a function of the two variables x and y , then F_x will be; **2018**

$$A) \lim_{\Delta x \rightarrow 0} \frac{f(x+\Delta x, y) - f(x, y)}{\Delta y}$$

$$B) \lim_{\Delta x \rightarrow 0} \frac{f(x+\Delta x) - f(x, y)}{\Delta y}$$

$$C) \lim_{\Delta x \rightarrow 0} \frac{f(x+\Delta x, y) - f(x, y)}{\Delta x}$$

$$D) \lim_{\Delta x \rightarrow 0} \frac{f(x, y+\Delta y) - f(x, y)}{\Delta y}$$

$$30. \frac{d}{dx} \frac{\sin \alpha}{\cos \alpha} = \text{---?}$$

2018

a) $-\cos \alpha \sin \alpha$

b) $-\sin \alpha \cos \alpha$

c) $-\sin \alpha \sin \alpha$

d) $-\cos \alpha \cos \alpha$

Answers:

1. (d)

2. (b) 0

3. (b)

4. (d)

5. (c) Growth

6. (b) $-\tanh x \cdot \operatorname{sech} x$

7. (a),

8. (c)

9. (a)

10. (d)

11. (d) $-\cot x \cdot \operatorname{cosec} x$

12. (d)

13. (c)

14. (a) $-3e^{-3x}$

15. (c)

16. (d) All of the above

17. (c) 18. (c)

19. (c)

20. (d)

21. (c). Acceleration

22. (b)

23. b

24. a

25. c

26. c

27.

28. e

29. b

30. c

CHAP NO 3 HIGHER ORDER DERIVATIVES AND APPLICATIONS

- 1) $f(x) = f(0) + xf'(0) + \frac{x^2}{2!}f''(0) + \dots + \frac{x^n}{n!}f^{(n)}(0)$, is called..... **2011-24 Eng**
 (a) Taylor series (b) Binomial series (c) Laurent series (d) Maclaurin series

- 2) The minimum value of the function $f(x) = x^2 - x - 2$ is: **2011-31 Eng**
 (a) -2 (b) $-\frac{9}{4}$ (c) -1 (d) 0

Hint: $f'(x) = 2x - 1 = 0 \Rightarrow x = \frac{1}{2}$, and $f''(x) = 2 \Rightarrow f''(\frac{1}{2}) = 2 > 0$, So $f(x)$ has minimum value at $x = \frac{1}{2}$, and the minimum value of $f(x)$ is $f(\frac{1}{2}) = (\frac{1}{2})^2 - \frac{1}{2} - 2 = -\frac{9}{4}$

- 3) The critical values of $f(x) = 2x^3 + 3x^2 - 12x - 5$ (for relative extreme) are: **2015-24 Eng**
 (a) 1 and 2 (b) -1 and -2 (c) 1 and -2 (d) -1 and 2

Hint: For critical values, we have (i) $f'(x) = 0$, (ii) $f'(x)$ does not exist or (iii) both (i) and (ii). For the given function, we have, $f'(x) = 6x^2 + 6x - 12 = 0 \Rightarrow x^2 + x - 2 = 0 \Rightarrow x = 1, -2$

- 4) $1 - x + \frac{x^2}{2} - \frac{x^3}{6} + \frac{x^4}{24} - \dots =$ **2015-64 Eng**
 (a) $\sin x$ (b) $\cos x$ (c) e^{-x} (d) $\log x$

Hint: As $e^x = 1 + x + \frac{x^2}{2!} + \frac{x^3}{3!} + \frac{x^4}{4!} + \dots$, so

$$e^{-x} = 1 + (-x) + \frac{(-x)^2}{2!} + \frac{(-x)^3}{3!} + \frac{(-x)^4}{4!} + \dots = 1 - x + \frac{x^2}{2} - \frac{x^3}{6} + \frac{x^4}{24} - \dots$$

5. $\frac{(-1)^{n-1}(n-1)a^n}{(ax+b)^n}$ is the nth derivative of: **2016**
 a) $f(x) = \ln(ax+b)$ b) $f(x) = \ln(ax+b)^{-n}$
 c) $f(x) = \ln(ax+b)^n$ d) $f(x) = \ln(ax+b)$

6. if $y = \cos^2 x$, then $y_3 =$ **2016**
 a) $4\cos 2x$ b) $4\sin 2x$ c) $4\cos 2x$ d) $4\sin 2x$

7. $\frac{d}{dn}(\ln|x|) = 1/x$, then $\int \ln x dx =$
 a) $1/x$ b) $\ln x$ c) $x \ln x - 1$ d) $x \ln x - x$

8. the fourth derivative of $f(x) =$ is:
 a) $64 \cdot 8^{4x} (\log 8)$ b) $256 \cdot 8^{4x} (\log 8)^4$ c) $256 \cdot 8^{4x} (\log 8)$ d) $64 \cdot 8^{4x} (\log 8)^8$

9. let $f(x)$ be a function such that $f'(c)=0$. If $f'(c) > 0$ then which of the following is true [2018]
 a) relative mini, concave down b) relative max; concave up
 c) relative max; concave down d) relative mini; concave up

Answers:

1. (d) Maclaurin series 6.a
 2. (b) 7.a
 3. (c) 1 and 2 8.c
 4. (c) 9.b
 5. a

CHAP NO 5 INTEGRATION

- 1) $\int e^{\sin x} \cos x dx = \dots\dots$ **2010-100 Eng**
 (a) $\sin x \cdot e^{\sin x} + C$ (b) $e^{\sin x} + C$ (c) $\cos x \cdot e^{\sin x} + C$ (d) None

Hint: $\int e^{f(x)} \cdot f'(x) dx = e^{f(x)} + C \Rightarrow \int e^{\sin x} \cdot \cos x dx = e^{\sin x} + C$

- 2) $\int \sin kx dx =$ **2010-82 Eng**
 (a) $\sin kx + C$ (b) $-\cos kx + C$ (c) $-\frac{\cos kx}{k} + C$ (d) None

Hint: $\frac{d}{dx} \left(-\frac{\cos kx}{k} + C \right) = \sin kx \Rightarrow \int \sin kx dx = -\frac{\cos kx}{k} + C$

- 3) In the fraction $\frac{4}{(x^2+1)(x^4-1)}$, the total different real factors in the denominator are: **2010-184 Eng**
 (a) 6 (b) 3 (c) 4 (d) 5

Hint: $(x^2+1)(x^4-1) = (x^2+1)(x^2+1)(x^2-1) = (x^2+1)^2(x+1)(x-1)$, so total different real factors are 3

- 4) $\int xe^x dx = \dots\dots$ **2011-37 Eng**
 (a) $xe^x - e^x + c$ (b) $xe^x + e^x + c$ (c) $e^x + cx + c$ (d) $xe^x + c$

Hint: $\int xe^x dx = x \int e^x dx - \int \left(\frac{d}{dx} x \right) \int e^x dx = xe^x - \int e^x dx = xe^x - e^x + C$

- 5) $\int \frac{dx}{\sqrt{a^2 - x^2}} = \dots\dots$ **2011-41 Eng**
 (a) $\cos^{-1} \left(\frac{x}{a} \right) + c$ (b) $\sin^{-1} \left(\frac{a}{x} \right) + c$ (c) $\sin^{-1} \left(\frac{x}{a} \right) + c$ (d) $\sin^{-1} x + c$

Hint: $\int \frac{dx}{\sqrt{a^2 - x^2}} = \sin^{-1} \left(\frac{x}{a} \right) + c$

- 6) $\int_0^{\frac{1}{\sqrt{3}}} \frac{dx}{1+x^2} = ?$ **2011-54 Eng**
 (a) $\frac{\pi}{2}$ (b) $\frac{\pi}{4}$ (c) $\frac{\pi}{3}$ (d) $\frac{\pi}{6}$

Hint: $\int_0^{\frac{1}{\sqrt{3}}} \frac{dx}{1+x^2} = \left[\tan^{-1} x \right]_0^{\frac{1}{\sqrt{3}}} = \tan^{-1} \left(\frac{1}{\sqrt{3}} \right) - \tan^{-1}(0) = \frac{\pi}{6}$

7) $\frac{5x+2}{(x+1)(x-2)} = \dots\dots\dots$

2011-197 Eng

(a) $\frac{1}{x+1} - \frac{4}{x-2}$

(b) $\frac{2}{x+1} - \frac{3}{x-2}$

(c) $\frac{5x}{x+1} - \frac{2}{x-2}$

(d) $\frac{1}{x+1} + \frac{4}{x-2}$

Hint: $\frac{1}{x+1} + \frac{4}{x-2} = \frac{1(x-2)+4(x+1)}{(x+1)(x-2)} = \frac{5x-2}{(x+1)(x-2)}$

8) $\int e^{-10x} dx = \dots\dots\dots$

2012-28 Eng

(a) $\frac{e^{-10x}}{-10} + c$

(b) e^{-10x}

(c) $\frac{e^{10x}}{10} + c$

(d) $\frac{e^{-10x}}{10} + c$

Hint: $\int e^{ax+b} dx = \frac{e^{ax+b}}{\frac{d}{dx}(ax+b)} + c = \frac{e^{ax+b}}{a} + c$

9) $\int \frac{1}{x} dx = \dots\dots\dots$

2012-90 Eng

(a) $\log_e kx + c$

(b) $\log_e x + c$

(c) $\frac{x^2}{k} + c$

(d) None

Hint: $\frac{d}{dx}(\log_e x + c) = \frac{d}{dx}(\ln x + c) = \frac{1}{x} \Rightarrow \int \frac{1}{x} dx = \log_e x + c$

10) $\int \sec^2 10x dx = \dots\dots\dots$

2013-66 Eng

(a) $\frac{\cos e c^2 10x}{10} + C$

(b) $\frac{\tan 10x}{10} + C$

(c) $\frac{\sec 10x}{10} + C$

(d) $\frac{\cos 10x \cdot \cos e c 10x}{10} + C$

11) $\int x^n dx = \dots\dots\dots$

2013-116 Eng

(a) $\frac{x^{n+1}}{n+1} + C, n \neq -1$

(b) $nx^{n+1} + c, n \neq -1$

(c) $\frac{nx^{n-1}}{n-1} + c, n \neq -1$

(d) $\frac{x^{n-1}}{n-1} + c, n \neq -1$

12) In the form of partial fractions the rational function $\frac{x^2}{(x-1)^3(x+1)}$ can be written as: **2013-46 Eng**

(a) $\frac{A}{x+1} + \frac{B}{(x-1)^3}$

(b) $\frac{A}{(x+1)^2} + \frac{Bx+C}{x+1}$

(c) $\frac{A}{x-1} + \frac{B}{(x-1)^2} + \frac{C}{(x-1)^3} + \frac{Dx+E}{x+1}$

(d) $\frac{A}{x-1} + \frac{B}{(x-1)^2} + \frac{C}{(x-1)^3} + \frac{D}{x+1}$

13) $\int_1^2 x dx = \dots\dots\dots$

2013-143 Eng

(a) 3

(b) $\frac{3}{2}$

(c) 2

(d) $\frac{2}{3}$

Hint: $\int_1^2 x dx = \left[\frac{x^2}{2} \right]_1^2 = \frac{2^2 - 1^2}{2} = \frac{4-1}{2} = \frac{3}{2}$

14) In the form of partial fractions, the rational function $\frac{x}{(x-1)^2(x+1)}$ can be written as: **2014-94 Eng**

(a) $\frac{A}{x+1} + \frac{B}{(x+1)^3}$

(b) $\frac{A}{(x+1)^2} + \frac{Bx+C}{x+1}$

(c) $\frac{A}{x-1} + \frac{B}{(x-1)^2} + \frac{C}{x+1}$

(d) $\frac{A}{x-1} + \frac{Bx+C}{(x-1)^2} + \frac{D}{x+1}$

Hint: $\frac{x}{(x-1)^2(x+1)} = \frac{A}{x-1} + \frac{B}{(x-1)^2} + \frac{C}{x+1}$

15) $\int \cos \operatorname{ec}^2 kx dx = \dots\dots\dots$

2014-114 Eng

(a) $-\frac{\cos kx}{k} + C$

(b) $-\frac{\sin kx}{k} + C$

(c) $-\frac{\cot kx}{k} + C$

(d) $-\frac{\tan kx}{k} + C$

Hint: $\int \cos \operatorname{ec}^2 kx dx = -\frac{\cot kx}{k} + C$

16) $\int \cosh kx dx = \dots\dots\dots$

2014-115 Eng

(a) $\frac{\sinh kx}{k} + C$

(b) $-\frac{\cosh kx}{k} + C$

(c) $-\frac{\tanh kx}{k} + C$

(d) $-\frac{\sec h kx}{k} + C$

Hint: $\int \cosh kx dx = \frac{\sinh kx}{k} + C$

17) $\int_1^2 x dx = \dots\dots\dots$

2014-135 Eng

(a) 3

(b) 2

(c) $\frac{2}{3}$

(d) $\frac{3}{2}$

Hint: $\int_1^2 x dx = \left[\frac{x^2}{2} \right]_1^2 = \frac{2^2 - 1^2}{2} = \frac{3}{2}$

18) $\int e^{10x} dx = \dots\dots\dots$

2014-155 Eng

(a) $e^{10x} + C$

(b) $\frac{e^{10x}}{10} + C$

(c) $10e^{10x} + C$

(d) $(10e)^x + C$

Hint: $\int e^{10x} dx = \frac{e^{10x}}{10} + C$

19) $\int u dv = \dots\dots\dots$

2015-14 Eng

(a) uv

(b) $uv - \int u du$

(c) $u - \int v du$

(d) All of the above

Hint: Let $u = f(x)$ and $\int g(x) dx = v \Rightarrow g(x) = \frac{dv}{dx}$, then

$$\int f(x) \cdot g(x) dx = f(x) \int g(x) dx - \int \left(\frac{df(x)}{dx} \cdot \int g(x) dx \right) dx \Rightarrow$$

$$\int u \cdot \left(\frac{dv}{dx} \right) dx = uv - \int \left(\frac{du}{dx} \cdot v \right) dx \Rightarrow \int u dv = uv - \int v du$$

20) $\int \frac{x}{x^2 + 1} dx = \dots\dots\dots$

2015-22 Eng

(a) $\ln|x^2 + 1| + C$

(b) $\frac{1}{2} \ln|x^2 + 1| + C$

(c) $-\ln|x^2 + 1| + C$

(d) $-\frac{1}{2} \ln|x^2 + 1| + C$

21) $\int_0^1 \frac{1}{x^2 + 1} dx = \dots\dots\dots$

2015-57 Eng

(a) $\frac{\pi}{2}$

(b) 2π

(c) $\frac{\pi}{4}$

(d) -2π

Hint: $\int_0^1 \frac{1}{x^2 + 1} dx = \left[\tan^{-1} x \right]_0^1 = \tan^{-1}(1) - \tan^{-1}(0) = \frac{\pi}{4} - 0 = \frac{\pi}{4}$

22) $\int a^{kx} dx = \dots\dots\dots$

2015-155 Eng

(a) $\frac{a^x}{k} + C$

(b) $\frac{a^{kx}}{k \ln a} + C$

(c) $a^{kx} \ln a + C$

(d) $\frac{\ln a}{k} a^{kx} + C$

Hint: As $\frac{d}{dx} \left(\frac{\ln a}{k} a^{kx} + C \right) = a^{kx} \Rightarrow \int a^{kx} dx = \frac{\ln a}{k} a^{kx} + C$

- 23) The anti derivative of zero is; **2015-177 Eng**
 (a) Zero (b) +1 (c) Any constant (d) -1
- Hint:** As, $\frac{d}{dx}(\text{any constant}) = 0$, so $\int 0 dx = \text{any constant}$
- 24) if $f(x)$ is integrable on the interval $[a, b]$ and has indefinite integral $F(x)$, then $\int_a^b f(x) dx = ?$ 2016
 a) $f[b] - f[a]$ b) $\int_a^b f(x) dx$ c) $\{F(a) - F(b)\}$ d) all of the above
- 25) if $\int_{-1}^2 f(x) dx = 6$, $\int_{-1}^2 g(x) dx = 9$, then $\int_{-1}^2 [3f(x) + 4g(x)] dx =$ [2016]
 a) 18 b) 54 c) 35 d) 60
- 26) coordinates of the focus of the parabola $y^2 = -x$ is given by; [2016]
 a) (1, 0) b) $[1/4, 0]$ c) (4, 0) d) (4, 0)
- 27) the point $p(x_1, y_1)$ lies above the line $ax + by + c = -x$ is given by: [2017]
 a) $ax_1 + by_1 + c = 0, b = 0$ b) $ax_1 + by_1 + c > 0, b < 0$
 c) $ax_1 + by_1 + c > 0, b > 0$ d) $ax_1 + by_1 + c < 0, b > 0$
- 28) equation of a line parallel negative y-axis at a distance of b units to the left of y-axis is given by: [2017]
 a) $x = b$ b) $x = -b$ c) $y + b = 0$ d) $y = -b$
- 29) the integration, $\int_e^{\ln x} \frac{1}{x} dx =$ [2018]
 a) $\ln(\ln x)$ b) $1 - \ln(\ln x)$ c) $\ln(\ln x) - 1$ d) $\ln(\ln x) + 1$
- 30) $\int \frac{1}{\frac{1}{4} - x^2} dx =$ [2018]
 a) $\ln \left| \frac{1-2x}{1+2x} \right|$ b) $\ln \left| \frac{1+2x}{1-2x} \right|$ c) $\ln \left| \frac{4+x}{4-x} \right|$ d) $\ln \left| \frac{1+4x}{1-4x} \right|$
- 31) if $f(-x) = -f(x)$, then $\int_{-3}^3 f(x) dx = ?$ [2018]
 a) $\int_0^3 f(x) dx$ b) $2 \int_0^3 f(x) dx$ c) $3 \int_0^3 f(x) dx$ d) zero

Answers:

- | | | |
|----------|--------------|----------------------|
| 1. (b) | 12. Ans: (d) | 23. (c) Any constant |
| 2. (c) | 13. (b) | 24. a |
| 3. (b) 3 | 14. (c) | 25. b |
| 4. (a) | 15. (c) | 26. c |
| 5. (c) | 16. (a) | 27. c |
| 6. (d) | 17. (d) | 28. b |
| 7. (d) | 18. (b) | 29. c |
| 8. (a) | 19. (b) | 30. |
| 9. (b) | 20. (b) | 31. d |
| 10. (b) | 21. (c) | |
| 11. (a) | 22. (d) | |

CHAP NO 6 PLANE ANALYTIC GEOMETRY-STRAIGHT LINE

- 1) The lines $6x + 2y + 8 = 0$, & $x - 3y + 7 = 0$ are: **2010-5 Eng**
 (a) Perpendicular (b) Parallel (c) Passing through origin (d) None

Hint: Here $m_1 = -\frac{6}{2} = -3$ and $m_2 = -\frac{1}{-3} = \frac{1}{3} \Rightarrow m_1 m_2 = -3 \cdot \frac{1}{3} = -1 \Rightarrow$ the lines are perpendicular

- 2) Three points A, B, C are said to be collinear if they lie on the same: **2010-69 Eng**
 (a) Line (b) Plane (c) Quadrant (d) None

- 3) The lines represented by $x^2 + 5xy + y^2 = 0$, are..... **2010-135 Eng**
 (a) Coincident (b) Perpendicular (c) Imaginary (d) None of the above

Hint: Equating $x^2 + 5xy + y^2 = 0$ with $ax^2 + 2hxy + by^2 = 0$, we have $a = b = 1, h = \frac{5}{2}$.

As $h^2 - ab = \left(\frac{5}{2}\right)^2 - 1.1 = \frac{21}{4} > 0$ and $a + b = 1 + 1 = 2 \neq 0$, so the lines are real, distinct and are not perpendicular.

- 4) If P_1 and P_2 are any two points on a coordinate plane then $|P_1P_2|$ denotes: **2010-161 Eng**
 (a) Directed distance (b) Length (c) Undirected distance (d) Both (b) and (c)

Hint: $|P_1P_2|$ represents undirected distance (length) between two points P_1 and P_2 .

- 5) The ratio in which y-axis divides the line joining points $(2, -3)$ and $(-5, 6)$ is: **2011-61 Eng**
 (a) 2 : 3 (b) 1 : 2 (c) 3 : 5 (d) 2 : 5

Hint: Let $k_1 : k_2$ be the required ratio, then $\frac{k_1x_2 + k_2x_1}{k_1 + k_2} = 0 \Rightarrow \frac{-5k_1 + 2k_2}{k_1 + k_2} = 0 \Rightarrow k_1 : k_2 = 2 : 5$

- 6) Two lines $a_1x + b_1y + c_1 = 0$ and $a_2x + b_2y + c_2 = 0$ are parallel if: **2011-67 Eng**

- (a) $\frac{a_1}{a_2} = \frac{b_1}{b_2}$ (b) $\frac{a_1}{a_2} = -\frac{b_1}{b_2}$ (c) $\frac{b_1}{c_2} = \frac{b_1}{c_2}$ (d) $\frac{a_1}{c_1} = \frac{a_2}{c_2}$

Hint: Two lines L_1 and L_2 are $\square \Leftrightarrow$ slope of $L_1 =$ slope of $L_2 \Leftrightarrow \frac{-a_1}{b_1} = \frac{-a_2}{b_2} \Leftrightarrow \frac{a_1}{a_2} = \frac{b_1}{b_2}$

- 7) The lines represented by $ax^2 + 2hxy + by^2 = 0$, are parallel if: **2011-71 Eng**
 (a) $h^2 - ab = 0$ (b) $h^2 - ab < 0$ (c) $h^2 - ab > 0$ (d) $h^2 + ab = 0$

Hint: As $\tan \theta = \frac{2\sqrt{h^2 - ab}}{a + b}$, so the lines are $\square \Leftrightarrow \theta = 0^\circ, 180^\circ \Rightarrow \frac{2\sqrt{h^2 - ab}}{a + b} = 0 \Rightarrow h^2 - ab = 0$

- 8) Let m_1 and m_2 be the slopes of the lines L_1 and L_2 respectively L_1 is perpendicular to L_2 if:

2011-147 Eng

- (a) $m_1 = m_2$ (b) $m_1 m_2 = 1$ (c) $m_1 m_2 = -1$ (d) $m_1 + m_2 = 0$

- 9) Straight lines represented by $ax^2 + 2hxy + by^2 = 0$ are perpendicular if: **2012-22 Eng**
 (a) $h^2 = ab$ (b) $ab < h^2$ (c) $h^2 < ab$ (d) $a + b = 0$

Hint: The angle θ between the lines represented by the given equation is given by, $\tan \theta = \frac{2\sqrt{h^2 - ab}}{a + b}$

If $\theta = 90^\circ$, then $\tan 90^\circ = \frac{\sin 90^\circ}{\cos 90^\circ} = \frac{1}{0} = \frac{2\sqrt{h^2 - ab}}{a + b} \Rightarrow a + b = 0$

- 10) If $(x_1, y_1), (x_2, y_2), (x_3, y_3)$ be the vertices of a triangle ABC then the area of the triangular region is..... **2012-72 Eng**

- (a) $x_1(y_2 - y_3) + x_2(y_3 - y_1) + x_3(y_1 - y_2)$ (b) $\frac{1}{2} [x_1(y_2 - y_3) + x_2(y_3 - y_1) + x_3(y_1 - y_2)]$
 (c) $\frac{1}{2} [x_1(y_2 + y_3) + x_2(y_2 + y_1) + x_3(y_1 + y_3)]$ (d) $2 [x_1(y_2 - y_3) + x_2(y_2 - y_1) + x_3(y_1 - y_3)]$

Hint: $\Delta = \frac{1}{2} \begin{vmatrix} x_1 & y_1 & 1 \\ x_2 & y_2 & 1 \\ x_3 & y_3 & 1 \end{vmatrix} = \frac{1}{2} \{x_1(y_2 - y_3) + x_2(y_3 - y_1) + x_3(y_1 - y_2)\}$

- 11) The acute angle formed by two non-perpendicular intersecting lines is given by: **2012-93 Eng**

- (a) $\tan \theta = \left| \frac{m_2 - m_1}{1 + m_1 m_2} \right|$ (b) $\tan \theta = \left| \frac{m_1 - m_2}{1 + m_2 m_3} \right|$

$$(c) \tan \theta = \left| \frac{m_1 - m_2}{1 - m_1 m_2} \right| \quad (d) \tan \theta = \left| \frac{1 + m_2 - m_3}{m_2 m_3} \right|$$

- 12) Which of the following is correct? **2012-167 Eng**
 (a) Right bisectors of a triangle are concurrent (b) Medians of a triangle are concurrent
 (c) Altitudes of a triangle are concurrent (d) All of the above

- 13) The distance "d" from the point $P(x_1, y_1)$ to the line $ax + by + c = 0$, is given by $d = \dots\dots\dots$ **2013-63 Eng**

$$(a) \frac{|ax - by + c|}{\sqrt{a^2 + b^2}} \quad (b) \frac{|ax_1 + by_1 + c|}{\sqrt{a^2 - b^2}} \quad (c) \frac{|ax + by - c|}{\sqrt{a^2 - b^2}} \quad (d) \frac{|ax_1 + by_1 + c|}{\sqrt{a^2 + b^2}}$$

- 14) The coordinates of the midpoint of the line segment whose end points are $P_1(-10, 4)$, $P_2(7, -5)$ are: **2013-123 Eng**

$$(a) \left(4, \frac{-1}{2} \right) \quad (b) \left(\frac{2}{3}, 2 \right) \quad (c) \left(\frac{3}{2}, \frac{1}{2} \right) \quad (d) \left(\frac{-3}{2}, \frac{-1}{2} \right)$$

Hint: Mid-point = $\left(\frac{-10+7}{2}, \frac{4-5}{2} \right) = \left(\frac{-3}{2}, \frac{-1}{2} \right)$

- 15) Parallel sides of a trapezium are x and y . the distance between these two sides is z . Area of the trapezium = **2013-129 Eng**

$$(a) \frac{1}{2}(x+y)z \quad (b) \frac{(x-y)2}{z} \quad (c) 2z(x+y) \quad (d) \frac{2z}{x+y}$$

Hint: Area of trapezium = $\frac{1}{2}(\text{sum of sides})(\perp \text{ distance between sides}) = \frac{1}{2}(x+y)z$

- 16) If the point P_1 and P_2 have the coordinates $x_1 = 7$, $x_2 = -9$, then $|P_1 P_2| = \dots\dots\dots$ **2013-146 Eng**
 (a) -2 (b) 16 (c) 2 (d) -16

Hint: $|P_1 P_2| = |x_2 - x_1| = |-9 - 7| = |-16| = 16$

- 17) Two lines with slope m_1 and m_2 respectively are parallel if: **2013-149 Eng**
 (a) $m_1 + m_2 = 0$ (b) $m_1 - m_2 = 0$ (c) $m_1 \cdot m_2 = 1$ (d) $m_1 = m_2$

Hint: Lines are $\parallel \Leftrightarrow m_1 = m_2 \Leftrightarrow m_1 - m_2 = 0$

- 18) The distance of a point $(-2, 8)$ from a line $4x + 3y - 11 = 0$, is: **2013-156 Eng**
 (a) -6 (b) 1 (c) 3 (d) 5

Hint: $d = \frac{|ax_1 + by_1 + c|}{\sqrt{a^2 + b^2}} = \frac{|4(-2) + 3(8) - 11|}{\sqrt{4^2 + 3^2}} = \frac{5}{5} = 1$

- 19) If m_1 and m_2 are the slopes of two lines l_1 and l_2 respectively, then the angle from l_1 to l_2 is given by: **2013-169 Eng**

$$(a) \tan \theta = \frac{m_2 - m_1}{1 + m_2 m_1} \quad (b) \tan \theta = \frac{m_2 + m_1}{1 - m_2 m_1} \quad (c) \cot \theta = \frac{m_2 - m_1}{1 + m_2 m_1} \quad (d) \cot \theta = \frac{m_2 + m_1}{1 - m_2 m_1}$$

- 20) $a_1 x + b_1 y + c_1 = 0$, $a_2 x + b_2 y + c_2 = 0$ and $a_3 x + b_3 y + c_3 = 0$ are three non-parallel lines.

These lines are concurrent if $\begin{vmatrix} a_1 & b_1 & c_1 \\ a_2 & b_2 & c_2 \\ a_3 & b_3 & c_3 \end{vmatrix} = \dots\dots\dots$

2013-173 Eng

$$(a) -1 \quad (b) 1 \quad (c) 0 \quad (d) -2$$

21) Distance of point $(4, -3)$ from the line $2x - 5y + 3 = 0$ is: **2014-46 Eng**

- (a) $\frac{4}{5}$ (b) $\frac{26}{5}$ (c) $\frac{4}{\sqrt{7}}$ (d) $\frac{26}{\sqrt{29}}$

Hint: Distance "d" of (x_1, y_1) from $ax + by + c = 0$, is $d = \frac{|ax_1 + by_1 + c|}{\sqrt{a^2 + b^2}}$

22) The line $y = mx + c$ be the tangent to the parabola $y^2 = 4ax$ if: **2014-146 Eng**

- (a) $c = \frac{a}{m}$ (b) $a = cm$ (c) $m = \frac{a}{c}$ (d) All of these

23) If $A(x_1, y_1, z_1)$ and $B(x_2, y_2, z_2)$ by any two points in space then distance $|AB| = \dots\dots\dots$ **2014-184 Eng**

- (a) $\sqrt{(x_1 + x_2)^2 + (y_1 + y_2)^2 + (z_1 + z_2)^2}$ (b) $\sqrt{(x_2 - x_1)^2 + (y_2 - y_1)^2 + (z_2 - z_1)^2}$
 (c) $\sqrt{(x_2 - x_1)^2 + (y_2 - y_1)^2 + (z_1 - z_1)^2}$ (d) $\sqrt{(x_2 - x_1)^2 - (y_2 - y_1)^2 - (z_1 - z_1)^2}$

24) If m_1 and m_2 are the slopes of two lines L_1 and L_2 respectively then the angle from L_1 to L_2 is given by: **2014-194 Eng**

- (a) $\tan \theta = \frac{m_2 + m_1}{1 - m_2 m_1}$ (b) $\cot \theta = \frac{m_2 - m_1}{1 + m_2 m_1}$ (c) $\tan \theta = \frac{m_2 - m_1}{1 + m_2 m_1}$ (d) $\cot \theta = \frac{m_2 + m_1}{1 - m_2 m_1}$

25) The coordinates of the midpoint of the line segment whose end points are $P_1(-10, 4)$, $P(7, -5)$ are: **2014-195 Eng**

- (a) $\left(4, \frac{-1}{2}\right)$ (b) $\left(\frac{-3}{2}, \frac{-1}{2}\right)$ (c) $(3, 2)$ (d) $\left(\frac{3}{2}, \frac{1}{2}\right)$

Hint: Mid-point = $\left(\frac{x_1 + x_2}{2}, \frac{y_1 + y_2}{2}\right) = \left(\frac{-10 + 7}{2}, \frac{4 - 5}{2}\right) = \left(\frac{-3}{2}, \frac{-1}{2}\right)$

26) If (x, y) are the co-ordinates of a point 'P' then the 1st component of the order pair is called: **2014-196 Eng**

- (a) Abscissa (b) y-coordinate (c) Ordinate (d) xy-coordinate

27) The lines $a_1x + b_1y + c_1 = 0$, $a_2x + b_2y + c_2 = 0$ and $a_3x + b_3y + c_3 = 0$, are three non-collinear lines, then these three lines are concurrent if: **2015-28 Eng**

- (a) $\begin{vmatrix} a_1 & b_1 & c_1 \\ a_2 & b_2 & c_2 \\ a_3 & b_3 & c_3 \end{vmatrix} = -1$ (b) $\begin{vmatrix} a_1 & b_1 & c_1 \\ a_2 & b_2 & c_2 \\ a_3 & b_3 & c_3 \end{vmatrix} = 1$ (c) $\begin{vmatrix} a_1 & b_1 & c_1 \\ a_2 & b_2 & c_2 \\ a_3 & b_3 & c_3 \end{vmatrix} = 0$ (d) $\begin{vmatrix} b_1 & c_1 & c_1 \\ c_2 & b_2 & a_2 \\ b_3 & a_3 & c_3 \end{vmatrix} = 0$

28) If $\frac{m_1 - m_2}{1 + m_1 m_2} < 0$, then the angle formed will be: **2015-58 Eng**

- (a) Acute (b) Obtuse (c) Right (d) All of the above

Hint: As $\tan \theta = \frac{m_1 - m_2}{1 + m_1 m_2} < 0 \Rightarrow \tan \theta < 0 \Rightarrow 90^\circ < \theta < 180^\circ$

29) The slope of a line is a measure of the: **2015-87 Eng**

- (a) Height of a line (b) Steepness of a line (c) Thickness of a line (d) None of these

30) If $h^2 < ab$, then the equation $ax^2 + 2hxy + by^2 = 0$, represents a pair of straight lines, which are: **2015-157 Eng**

- (a) Real (b) Coincident (c) Imaginary (d) Perpendicular

Hint: $ax^2 + 2hxy + by^2 = 0 \Rightarrow b\left(\frac{y}{x}\right)^2 + 2h\left(\frac{y}{x}\right) + a = 0 \Rightarrow \frac{y}{x} = \frac{-2h \pm \sqrt{4h^2 - 4ab}}{2b} \Rightarrow y = \left(\frac{-h \pm \sqrt{h^2 - ab}}{b}\right)x$

If $h^2 < ab \Rightarrow h^2 - ab < 0 \Rightarrow \sqrt{h^2 - ab}$ is imaginary. Hence the lines are imaginary.

31) If m_1 and m_2 are the slopes of two lines L_1 and L_2 respectively, then the angle from L_1 to L_2 is given by;

(a) $\tan \theta = \frac{m_2 - m_1}{1 + m_1 m_2}$ (b) $\tan \theta = \frac{m_2 + m_1}{1 + m_1 m_2}$ (c) $\tan \theta = \frac{m_2 + m_1}{1 - m_1 m_2}$ (d) $\tan \theta = \frac{m_1 - m_2}{1 + m_1 m_2}$

32) the order of steepness of lines: [2017]

L_1 ; $y - x + 3 = 0$, $L_2 = y - (1/3)x - 5$, $L_3 = y - 0.3x + 6$ is:

a) L_1, L_2, L_3 b) L_2, L_3, L_1 c) L_3, L_2, L_1 d) L_1, L_3, L_2

34) if an ABC is an equilateral triangle with side "C", then the area is; [2018]

a) $\frac{\sqrt{3}c}{4}$ b) $\frac{\sqrt{3}c^2}{4}$ c) $\frac{\sqrt{3}c}{2}$ d) $\frac{\sqrt{3}c^2}{2}$

35) which pair of lines have a single point of intersection? [2018]

a) $x + y = 1, 2x + 2y = 2$ b) $x + y = 1, x + y = 0$ c) $x + y = 1, x - y = 0$ d) none of the above

36) the line $ax + by + c = 0$, will be vertical, when _____? [2018]

a) $B = 0$ b) $A = 0$ c) $A \neq 0, b \neq 0$ d) $A \neq 0, a \neq 0$

37) the shortest distance of line $ax + by + c = 0$ from origin is: [2018]

a) $\frac{ax_1 + by_1 + c}{\sqrt{a^2 + b^2}}$ b) $\frac{ax + by + c}{\sqrt{a^2 + b^2}}$ c) $\frac{|c|}{\sqrt{a^2 + b^2}}$ d) $\sqrt{a^2 + b^2}$

Answers:

1.a	9.d	17.b	25.b	33.c
2.a	10.b	18.b	26.a	34.b
3.d	11.a	19.a	27.c	35.c
4.d	12.d	20.c	28.b	36.c
5.d	13.d	21.d	29.b	37.a
6.a	14.d	22.a	30.c	
7.a	15.b	23.b	31.a	
8.c	16.b	24.c	32.c	

CHAPTER NO 7 CONICS-I

1) Which of the following points lie on the circle $x^2 + y^2 - 13x - 5y + 16 = 0$? 2010-40 Eng

(a) (1, 1) (b) (3, -1) (c) (0, 0) (d) Both (a)&(b)

Hint: As $1^2 + 1^2 - 13(1) - 5(1) + 16 = 18 - 18 = 0$, so (1, 1) lies on the given circle

2) The lines represented by $x^2 + 5xy - y^2 = 0$, are: 2010-103 Eng

(a) Parallel (b) Coincident (c) Perpendicular (d) None

Hint: Equating $x^2 + 5xy - y^2 = 0$ with $ax^2 + 2hxy + by^2 = 0$, we have, $a = 1, h = \frac{5}{2}, b = -1$. Since $a + b = 1 + (-1) = 0$, so the lines are perpendicular.

3) If a circle has its centre at the origin then it passes through 2010-147 Eng

(a) X-axis (b) Y-axis (c) Both (a) & (b) (d) None

Hint: A circle having centre at the origin passes through both the X-axis and Y-axis.

4) The length of a quarter of a circle, whose radius is r_1 is: 2011-44 Eng

(a) $4\pi r_1$ (b) $2\pi r_1$ (c) $\frac{1}{4}\pi r_1$ (d) $\frac{1}{2}\pi r_1$

Hint: Circumference of a circle of radius $r_1 = 2\pi r_1$, so length of a quarter of the circle = $\frac{2\pi r_1}{4} = \frac{1}{2}\pi r_1$

5) The radius of the circle $x^2 + y^2 + 2gx + 2fy + c = 0$, is: 2011-84 Eng

(a) $\sqrt{g^2 + f^2 + c}$ (b) $\sqrt{g^2 - f^2 + c}$ (c) $\sqrt{g^2 + f^2 - c}$ (d) $g^2 + f^2 - c$

- 6) The equation $ax^2 + by^2 + 2hxy + 2gx + 2fy + c = 0$ represent a circle if: **2011-87 Eng**
 (a) $a \neq b, h \neq 0$ (b) $a \neq b, h = 0$ (c) $a = b, h \neq 0$ The line $y = mx + c$, becomes tangent to the circle $x^2 + y^2 = a^2$, If **2012-38 Eng**
 (a) $c = \frac{a}{m}$ (b) $c = \frac{m}{a}$ (d) $a = b, h = 0$ (d) $c = \pm a\sqrt{1-m^2}$

- 7) If $x^2 + y^2 + 2gx + 2fy + c = 0$ is the general form of the equation of circle, then radius = **2013-179 Eng**
 (a) $c = \pm a\sqrt{1+m^2}$ (b) $g^2 + f^2 - c$ (c) $\sqrt{g^2 + f^2 + c}$ (d) $g^2 + f^2 + c$

- 8) The equation of the circle whose centre is the origin and radius is 3 units is: **2013-183 Eng**
 (a) $x^2 + y^2 = 3$ (b) $x^2 - y^2 = 3$ (a) $\sqrt{g^2 + f^2 - c}$ (d) $x^2 - y^2 = 9$

Hint: The equation of circle whose centre is the origin and radius is r , is: $x^2 + y^2 = r^2$

- 9) The radius of the circle passing through the point $(6, 2)$ and two of whose diameters are $x + y = 6$ and $x + 2y = 4$ is: **2014-116 Eng**
 (a) 4 (b) 5 (d) $\sqrt{2}$

Hint: Here point = $P(6, 2)$ and centre $C(x, y) = C(8, 2)$ is obtained by solving the given equations of the diameters, So radius = $r = |PC| = \sqrt{(8-6)^2 + (2-2)^2} = 2$

- 10) Radius of a circle whose equation is $x^2 + y^2 - 6x + 8y + 21 = 0$ is: **2014-144 Eng**
 (a) 79 (c) 2 (c) 4 (d) 5

Hint: Equating the given equation of circle with $x^2 + y^2 + 2gx + 2fy + c = 0$, we have, $g = -3, f = 4, c = 21$
 So radius is $r = \sqrt{g^2 + f^2 - c} = \sqrt{(-3)^2 + 4^2 - 21} = \sqrt{25 - 21} = \sqrt{4} = 2$

- 11) Equation of the normal at (x_1, y_1) to the circle $x^2 + y^2 + 2gx + 2fy + c = 0$, is.... **2014-186 Eng**

- (a) $y_1 - y = \frac{y_1 - f}{x_1 - g}(x + x_1)$ (b) $y_1 + y = \frac{y_1 + f}{x_1 - g}(x - x_1)$
 (c) $y + y_1 = \frac{y_1 - f}{x_1 - g}(x + x_1)$ $y - y_1 = \frac{y_1 + f}{x_1 + g}(x - x_1)$

Hint: $\frac{d}{dx}(x^2 + y^2 + 2gx + 2fy + c) = \frac{d}{dx}(0) \Rightarrow 2x + 2y \frac{dy}{dx} + 2g + 2f \frac{dy}{dx} = 0 \Rightarrow (y + f) \frac{dy}{dx} = -(x + g) \Rightarrow \frac{dy}{dx} = -\frac{(x + g)}{(y + f)}$

$$m = \left[\frac{dy}{dx} \right]_{(x_1, y_1)} = -\frac{(x_1 + g)}{(y_1 + f)} \Rightarrow \frac{-1}{m} = \frac{y_1 + f}{x_1 + g} \text{ . The equation of normal is } y - y_1 = \frac{-1}{m}(x - x_1)$$

$$\Rightarrow y - y_1 = \frac{y_1 + f}{x_1 + g}(x - x_1)$$

- 12) If for the circle $x^2 + y^2 + 2gx + 2fy + c = 0$, $g^2 + f^2 - c < 0$, then it is called: **2015-12 Eng**
 (a) Real circle (b) Point circle (c) Imaginary circle (d) Circum circle

Hint: As $r = \sqrt{g^2 + f^2 - c}$, so if $g^2 + f^2 - c < 0$, then r is imaginary and hence the circle is imaginary.

- 13) Equation of the normal at (x_1, y_1) to the circle $x^2 + y^2 + 2gx + 2fy + c = 0$, is. **2015-29 Eng**

- (a) $y_1 - y = \frac{y_1 - f}{x_1 - g}(x + x_1)$ (b) $y_1 + y = \frac{y_1 + f}{x_1 - g}(x - x_1)$
 (c) $y + y_1 = \frac{y_1 - f}{x_1 - g}(x + x_1)$ d. $y - y_1 = \frac{y_1 + f}{x_1 + g}(x - x_1)$

Hint: Same as question No 12.

- 14) slope of the tangent to the circle $x^2 + y^2 + 2 = 0$, which makes an angle 30° with the x-axis is ; [2016]
 a) 0 b) -1 c) $\frac{1}{\sqrt{3}}$ d) undefined
- 15) in equation $2x^2 + 2y^2 + 4x - 6y + 8 = 0$, centre is; [2018]
 a) (-2,3) b) (-ag, -af) c) (-1, 3/2) d) (2,3)
- 16) equation of normal to the circle $x^2 + y^2 = a^2$ at the point (x_1, y_1) is; [2016]
 a) $xx_1 - yy_1 = 0$ b) $xx_1 + yy_1 = 0$
 c) $xx_1 - yy_1 = 0$ d) $xx_1 - yy_1 = 0$
- 17) equation of tangent to the circle $x^2 + y^2 = a^2$ at the point (x_1, y_1) is; [2017]
 a) $xx_1 - yy_1 = 0$ b) $xx_1 + yy_1 = a^2$
 c) $xx_1 - yy_1 = a$ d) $xx_1 - yy_1 = a^2$
- 18) what is the circumference of the circle whose area is 100π ? [2018]
 a) 10π b) 20π c) 10 d) 20
- 19) a circle of radius 3 touch both the axis of 4th quadrant has centre. [2018]
 a) (-, -3) b) (-3, 3) c) (3, 3) d) (-3, -3)
- 20) choose the correct option for the line $ex=8$, and circle $x^2 + y^2 - 6x - 4y - 12 = 0$; [2018]
 a) touch each other b) intersect each other c) passes outside d) none
- 21) when equation of normal to the circle $x^2 + y^2 + 5 = 0$ is $2x - y = 0$, then equation of tangent will be; [2018]
 a) $x - 2y = 5$ b) $x + 2y = 5$ c) $2x + y = 5$ d) $2x + y = 0$
- 22) equation of centre at (-5, 4) and tangent to y-axis is ; [2018]
 a) $(x+5)^2 - (y-4)^2 = 25$ b) $(x+5)^2 - (y-4)^2 = 16$
 c) $(x+5)^2 + (y-4)^2 = 25$ d) $(x+5)^2 + (y-4)^2 = 16$

Answer Key

- | | | |
|-----------------------|----------------------------|------|
| 1. (a) | 7. (a) | 15.a |
| 2. (c) Perpendicular | 8. (a) | 16.a |
| | 9. (c) $x^2 + y^2 - 9 = 0$ | 17.b |
| 3. (c) Both (a) & (b) | 10. (c) 2 | 18.b |
| | 11. (b) 2 | 19.a |
| 4. (d) | 12. (c) Imaginary circle | 20.c |
| 5. (c) | 13. d. | 21.b |
| 6. (d) | 14. c | 22.b |

Chapter No 8

Conics-II

- 1) The graph of $y^2 = 4ax$ is symmetric about: **2010-1 Eng**
 (a) y - axis (b) x - axis (c) Origin (d) None
Hint: The graph of a parabola is symmetric about the x - axis (or y - axis) according as its standard equation contains the " y^2 - term" (or " x^2 - term").
- 2) The asymptotes of the hyperbola $\frac{x^2}{9} - \frac{y^2}{4} = 1$, are: **2010-16 Eng**
 (a) $y = \pm \frac{2}{3}x$ (b) $x = \pm \frac{2}{3}y$ (c) $y = \pm x$ (d) None
Hint: Asymptote of the parabola are $\frac{x^2}{9} - \frac{y^2}{4} = 0 \Rightarrow y = \pm \frac{2}{3}x$
- 3) Equation of latus rectum of the parabola $y^2 = 4ax$ is: **2010-39 Eng**
 (a) $x = a$ (b) $y = 0$ (c) $x + a = 0$ (d) $x = 0$

Hint: As the equation of parabola contains y^2 term, the axis of symmetry of the parabola is the x -axis so the equation of latus-rectum is $x = a$, if $a > 0$ and $x = -a \Rightarrow x + a = 0$, if $a < 0$.

- 4) The eccentricity of hyperbola is: **2011-81 Eng**
 (a) $e < 0$ (b) $0 < e < 1$ (c) $e = 1$ (d) $e > 1$

- 5) The asymptotes of the hyperbola $\frac{x^2}{a^2} - \frac{y^2}{b^2} = 1$ are; **2012-32 Eng**
 (a) $x = \pm \frac{b}{a} y$ (b) $y = \pm \frac{a}{b} x$ (c) $y = \pm \frac{b}{a} x$ (d) $x = \pm \frac{a}{b} y$

Hint: $\frac{x^2}{a^2} - \frac{y^2}{b^2} = 0 \Rightarrow \frac{y^2}{b^2} = \frac{x^2}{a^2} \Rightarrow y = \pm \frac{b}{a} x$

- 6) Equation of the parabola with vertex at (0,0) and directrix $y + 2 = 0$ is; **2012-68 Eng**
 (a) $y^2 = 8x + 8y$ (b) $x^2 = -8y$ (c) $y^2 = 8x$ (d) $x^2 = 8y$

Hint: $y + 2 = 0 \Rightarrow y = -2 = -a \Rightarrow a = 2$, so equation of parabola is $x^2 = 4ay \Rightarrow x^2 = 8y$

- 7) The eccentricity and foci of the ellipse $16x^2 + 25y^2 = 400$ are: **2012-75 Eng**
 (a) $-\frac{3}{5}(0, \pm 3)$ (b) $-\frac{4}{5}(0, \pm 4)$ (c) $\frac{3}{5}, (\pm 3, 0)$ (d) $\frac{4}{5}, (\pm 4, 0)$

Hint: $16x^2 + 25y^2 = 400 \Rightarrow \frac{x^2}{5^2} + \frac{y^2}{4^2} = 1 \Rightarrow a = 5, b = 4$. Hence, $e = \frac{\sqrt{a^2 - b^2}}{a} = \frac{\sqrt{5^2 - 4^2}}{5} = \frac{3}{5}$
 and $F(\pm ae, 0) = F\left(\pm 5 \times \frac{3}{5}, 0\right) = F(\pm 3, 0)$

- 8) Conic is a parabola if: **2012-115 Eng**
 (a) $e = 1$ (b) $e = \frac{1}{2}$ (c) $e = \frac{2}{1}$ (d) $e = 2$

- 9) The line $y = mx + c$ is tangent to the ellipse $\frac{x^2}{a^2} + \frac{y^2}{b^2} = 1$, If..... **2012-190 Eng**
 (a) $c = \pm \sqrt{a^2 m^2 + b^2}$ (b) $c = \pm \sqrt{a^2 m^2 - b^2}$ (c) $c = \pm \sqrt{1 + m^2}$ (d) $c = \pm \sqrt{a^2 + b^2 m^2}$

- 10) Length of the latus-rectum of $3x^2 = 4y$ is: **2013-153 Eng**
 (a) 4 (b) -4 (c) $\frac{4}{3}$ (d) $\frac{3}{4}$

Hint: $3x^2 = 4y \Rightarrow x^2 = \frac{4}{3}y = 4py \Rightarrow 4p = \frac{4}{3} \Rightarrow \text{length of latus-rectum} = |4p| = \left|\frac{4}{3}\right| = \frac{4}{3}$

- 11) Equation of the ellipse is: **2013-186 Eng**
 (a) $\frac{x^2}{a^2} + \frac{y^2}{b^2} = 1$ (b) $\frac{a^2}{x^2} + \frac{y^2}{b^2} = 1$ (c) $\frac{x^2}{a^2} - \frac{y^2}{b^2} = 1$ (d) $\frac{x^2}{a^2} + \frac{b^2}{y^2} = 1$

- 12) Equation of the normal at the point (x_1, y_1) to the parabola $y^2 = 4ax$ is: **2013-189 Eng**
 (a) $y - y_1 = \frac{-y_1}{2a}(x - x_1)$ (b) $y - y_1 = \frac{2a}{y_1}(x - x_1)$ (c) $y + y_1 = \frac{2a}{y_1}(x + x_1)$ (d) $y - y_1 = 2a(x - x_1)$

Hint: $\frac{dy^2}{dx} = \frac{d(4ax)}{dx} \Rightarrow 2yy' = 4a \Rightarrow y' = \frac{2a}{y} \Rightarrow m = \frac{2a}{y_1} \Rightarrow \frac{-1}{m} = \frac{-y_1}{2a}$. Hence the equation of normal at (x_1, y_1) is
 $y - y_1 = \frac{-1}{m}(x - x_1) \Rightarrow y - y_1 = \frac{-y_1}{2a}(x - x_1)$

- 13) The conic having eccentricity $e > 1$, is called: **2013-193 Eng**
 (a) **Hyperbola** (b) Ellipse (c) Parabola (d) Circle

14) If (0,0) and (0, -3) are respectively the vertex and focus of a parabola then its equation is:

- (a) $y^2 = 12x$ (b) $y^2 = -12x$ (c) $x^2 = 12y$ (d) $x^2 = -12y$ **2014-124 Eng**

Hint: Here $V(0,0)$ and $F(0, p) = F(0, -3) \Rightarrow p = -3$, As the axis of parabola is the y-axis, so
 $x^2 = 4py \Rightarrow x^2 = -12y$

15) For the ellipse $16x^2 + 25y^2 = 400$ the eccentricity, $e = \dots\dots\dots$ **2014-125 Eng**

- (a) $\frac{2}{5}$ (c) $\frac{4}{5}$ (d) $\frac{1}{5}$

Hint: $16x^2 + 25y^2 = 400 \Rightarrow \frac{x^2}{5^2} + \frac{y^2}{4^2} = 1 \Rightarrow a = 5, b = 4$, so $e = \frac{\sqrt{a^2 - b^2}}{a} = \frac{\sqrt{5^2 - 4^2}}{5} = \frac{\sqrt{9}}{5} = \frac{3}{5}$

16) When $e = 1$ the conic is a/an..... **2014-126 Eng**

- (a) Circle (b) Ellipse (c) Hyperbola (d) Parabola

17) Latus rectum of the parabola $3x^2 = 4y$ is: **2014-136 Eng**

- (a) $x = \frac{1}{3}$ (b) $x = -\frac{4}{3}$ (c) $y = \frac{3}{4}$ (d) $y = \frac{1}{3}$

Hint: $3x^2 = 4y \Rightarrow x^2 = \frac{4}{3}y = 4py \Rightarrow p = \frac{1}{3}$. Since the axis of parabola is the y-axis, so latus-rectum is
 $y = p \Rightarrow y = \frac{1}{3}$

18) Length of latus-rectum of $3x^2 = 4y$, is..... **2015-59 Eng**

- (a) 4 (b) -4 (c) $\frac{4}{3}$ (d) $\frac{3}{4}$

Hint: $3x^2 = 4y \Rightarrow x^2 = \frac{4}{3}y = 4py \Rightarrow 4p = \frac{4}{3}$, i.e., length of latus rectum $= 4p = \frac{4}{3}$

19) In a hyperbola, $e = \dots\dots\dots$ **2015-66 Eng**

- (a) $\sqrt{\frac{a^2 + b^2}{a^2}}$ (b) $\sqrt{\frac{a^2 - b^2}{a^2}}$ (c) 1 (d) 0

20) Equation of the normal at the point (x_1, y_1) to the parabola $y^2 = 4ax$, is: **2015-142 Eng**

- (a) $yy_1 = 2a(x + x_1)$ (b) $y - y_1 = \frac{-y_1}{2a}(x - x_1)$ (c) $y - y_1 = \frac{-2a}{y_1}(x - x_1)$ (d) $y - y_1 = 2a(x - x_1)$

Hint: $\frac{dy^2}{dx} = \frac{d}{dx}(4ax) \Rightarrow 2y \frac{dy}{dx} = 4a \Rightarrow \frac{dy}{dx} = \frac{2a}{y} \Rightarrow m = \left[\frac{dy}{dx} \right]_{(x_1, y_1)} = \frac{2a}{y_1} \Rightarrow \frac{-1}{m} = \frac{-y_1}{2a}$. The equation of normal is
 $y - y_1 = \frac{-1}{m}(x - x_1) \Rightarrow y - y_1 = \frac{-y_1}{2a}(x - x_1)$

21) The conic having eccentricity $e > 1$, is called: **2015-143 Eng**

- (a) Hyperbola (b) Ellipse (c) Parabola (d) Asymptotes

22) What will be equation of parabola having focus at $F(0, -2)$ and directrix $= 2$? **2015-194 Eng**

- (a) $x^2 = 2y$ (b) $y^2 = 2x$ (c) $x^2 = -8y$ (d) $y^2 = 8x$

Hint: $F(0, -2) = F(0, p) \Rightarrow p = -2$. As the x-coordinate of the focus is zero so the focus is on y-axis. Hence the equation of parabola is, $x^2 = 4py \Rightarrow x^2 = 4(-2)y \Rightarrow x^2 = -8y$

23) for a parabola $y^2 = -4ax$, the end points of latus-rectum are: **[2016]**
 a) $(-a, +2a), (-a, -2a)$ b) $(a, 2a), (a, -2a)$ c) $(2a, a), (-2a, a)$ d) $(2a, 2a), (-2a, -2a)$

24) the tangent line $x + y = 0$, intersects the parabola $x^2 = y_1$ at: **[2016]**
 a) two coincident point b) two real distinct point c) two imaginary points d) all

25) the eccentricity of an ellipse, $9x^2 + 4y^2 = 36$, is **[2016]**

- a) $\frac{3}{5}$ b) $\frac{\sqrt{5}}{3}$ c) $\frac{3}{\sqrt{5}}$ d) $\frac{5}{\sqrt{3}}$
- 26) equation of a tangent to the parabola $y^2 + 4zx$ in the slope form is : [2016]
a) $y = mx + \frac{m}{a}$ b) $y = mx + \frac{a}{m}$ c) $my = m^2 x + a^2$ d) non of these
- 27) the asymptotes of the hyperbola $\frac{x^2}{a^2} - \frac{y^2}{b^2} = 1$ is given by; [2017]
a) $y = \pm \frac{b}{a}x$ b) $y = \pm \frac{a}{b}x$ c) $y = \pm \frac{c}{a}x$ d) $y = \pm \frac{a}{c}x$
- 28) in the equation $4px = y^2$, if $p > 0$, then the parabola is symmetric with respect to: [2017]
a) negative x-axis b) positive y-axis c) positive x-axis d) x-axis
- 29) in the horizontal ellipse, if foci are $F_1(h-c, k)$; [2017]
a) $\frac{x^2}{a^2} + \frac{y^2}{b^2} = 1$ b) $\frac{(x-k)^2}{a^2} + \frac{(y-k)^2}{b^2} = 1$ c) $\frac{(x-h)^2}{a^2} + \frac{(y-k)^2}{b^2} = 1$ d) $\frac{(x-c)^2}{a^2} + \frac{(y-k)^2}{b^2} = 1$
- 30) the line $2x - y + c = 0$ will touch the ellipse $\frac{x^2}{3} + \frac{y^2}{4} = 1$, if $c =$ [2017]
a) ± 4 b) ± 7 c) ± 9 d) ± 11
- 31) the equation of directrix for parabola $y^2 = -4px$ is: [2017]
a) $y = -p$ b) $y = p$ c) $x = -p$ d) $x = p$
- 32) the major axis of the ellipse $4x^2 + 25y^2 - 8x + 100y + 4 = 0$
a) parallel to x-axis b) parallel to y-axis c) on x-axis d) on y-axis
- 33) choose the correct option for parabola $f(x) = -4x^2 + 4x - 5$; [2018]
a) vertex $(-2, 1)$ opens upwards b) vertex $(2, 1)$ opens downward
c) vertex $(2, -1)$ opens downward d) vertex $(2, 1)$ opens upward
- 34) a line $y = mx + c$ will be tangent to parabola $y^2 = 4px$, if [2018]
a) $p + mc = 0$ b) $pm = c$ c) $pc - m = 0$ d) $p - mc = 0$
- 35) the equation of the ellipse whose foci are $(\pm 2, 0)$ and eccentricity $\frac{1}{2}$ is ; [2018]
a) $\frac{x^2}{12} + \frac{y^2}{16} = 1$ b) $\frac{x^2}{12} + \frac{y^2}{12} = 1$ c) $\frac{x^2}{16} + \frac{y^2}{8} = 1$ d) $\frac{x^2}{12} - \frac{y^2}{16} = 1$

Answer Key

- | | | |
|-------------------|----------------------|-------|
| 1. (b) x axis | 13. (a) Hyperbola | 25. B |
| 2. (a) | 14. (d) $x^2 = -12y$ | 26. B |
| 3. (a) | 15. (a) | 27. A |
| 4. (d) $e > 1$ | 16. (d) Parabola | 28. C |
| 5. (c) | 17. (d) | 29. C |
| 6. (d) $x^2 = 8y$ | 18. (c) | 30. A |
| 7. (c) | 19. (b) | 31. D |
| 8. (a) $e = 1$ | 20. (b) | 32. A |
| 9. (a) | 21. a) Hyperbola | 33. C |
| 10. (c) | 22. (c) | 34. D |
| 11. (a) | 23. C | 35. C |
| 12. (a) | 24. B | |

CHAPTER NO 9

DIFFERENTIAL EQUATIONS

- 1) Power of highest derivative appearing in a differential equation is called its: **2012-152 Eng**
(a) Degree (b) Order (c) Power (d) Index
- 2) Degree of the equation $\left(\frac{dy}{dx}\right) + \left(\frac{d^2y}{dx^2}\right) + y = 3$, is..... **2015-89 Eng**
(a) 5 (b) 2 (c) 3 (d) 1

Hint: If a D.E is free from radicals and fractions, then the exponent of the highest derivative occurring in the D.E is called degree of the D.E.

- 3) non-linear equation in the following equation is : [2017]
 a) $\frac{dv}{dt} = -32$ b) $\frac{dy}{dx} = x + 1$ c) $\frac{d^2y}{dx^2} + 2x \frac{dy}{dx} + y = 3$ d) $\frac{d^2y}{dx^2} + 4y \frac{dy}{dx} + y = \cos x$
- 4) $2x^2 + 2y^2 - xy - 2y = 0$, does not represent a circle, because; [2016]
 a) degree is not two b) involving the term xy c) coefficient of x^2 and y^2 are equal d) none
- 5) $ady + by \sin x \, dx = 0$ is; [2017]
 a) non-linear differential equation b) homogeneous differential equations
 c) separable differential equation d) non separable differential equation
- 6) which of the following ordinary differential equation is non-linear ; [2018]
 a) $\frac{d^2y}{dx^2} + 2x \frac{dy}{dx} + y = 3$ b) $\frac{d^2y}{dx^2} + 4y \frac{dy}{dx} + y = \cos x$
 c) $\frac{dv}{dt} = -32$ d) $\frac{d^2y}{dx^2} + 3 \frac{dy}{dx} + 11y = 3x$
- 7) the differential equation of orthogonal trajectories of the curve $y = cx^3$ is; [2018]
 a) $\frac{dy}{dx} = -\frac{3y}{x}$ b) $\frac{dy}{dx} = -\frac{x}{3y}$ c) $\frac{dy}{dx} = -\frac{3x}{y}$ d) $\frac{dy}{dx} = -\frac{3x}{y}$

Answer Key

1. (a) Degree
 2. (d) 1
 3. D
 4. B

5. A
 6. B
 7.

CHAPTER NO 10

PARTIAL DIFFERENTIATION

- 1) If $f(x, y, z) = e^x + \sin(y + z)$, then $\frac{\partial f}{\partial x} + \frac{\partial f}{\partial z}$ at the point $(0, 0, 0)$ is; **2015-Eng**
 (a) 0 (b) 1 (c) 2 (d) 5
Hint: $\frac{\partial f}{\partial x} + \frac{\partial f}{\partial z} = \frac{\partial}{\partial x}(e^x + \sin(y + z)) + \frac{\partial}{\partial z}(e^x + \sin(y + z)) = e^x + 0 + 0 + \cos(y + z) = e^x + \cos(y + z)$
 $\Rightarrow \left[\frac{\partial f}{\partial x} + \frac{\partial f}{\partial z} \right]_{(0,0,0)} = [e^x + \cos(y + z)]_{(0,0,0)} = e^0 + \cos 0 = 1 + 1 = 2$
- 2) For a homogeneous function $f(z)$ of degree n , if $x \frac{\partial z}{\partial x} + y \frac{\partial z}{\partial y} = nz$, then this rule is; **2015Eng**
 (a) Mean value theorem (b) Euler theorem (c) Taylor's theorem (d) Maclaurin's theorem
- 3) If $f(x, y) = \sin xy$, then $f_y = ?$ [2015]
 a) $\cos xy$ b) $x \cos xy$ c) $-x \cos xy$ d) $xy \cos xy$
- 4) Newton Raphson method for numerical approximation of a function $f(x) = 0$ is: [2016]
 a) $x_{i+1} = x_i - \frac{f(x_i)}{f'(x_i)}$, $i = 0, 1, 2, 3, \dots$ b) $x_{i+1} = x_i + \frac{f(x_i)}{f'(x_i)}$, $i = 0, 1, 2, 3, \dots$
 c) $c = a - \frac{(a-b)f(a)}{f(a)-f(b)}$ d) $c = a + \frac{(a-b)f(a)}{f(a)-f(b)}$
- 5) if $f(x, y, z) = x + y = \frac{1}{2}$ then $1/az \, f(0, 0, z)$: [2016]
 a) z^2 b) $1/z^2$ c) $2 + 1/z^2$ d) $-1/z^2$
- 6) if $f(x, y, z) = x^2 y e^{2x} + (x + y - z)^2$, then $\frac{\partial}{\partial x} f(x, x, x) =$
 a) $3x^3 e^{2x} + 2x^2 e^{2x} + 2x$ b) $2^3 e^{2x} + 2x$ c) $2x^3 e^{2x} + 2x^2 e^{2x} + 2x$ d) $3x^2 e^{2x} + 2x$
- 7) Newton Raphson method is; [2017]
 a) two points iterative b) one point iterative
 c) many points iterative d) infinite points iterative
- 8) $Z = f(x, y) = \frac{x^3 e^y}{y} - 3 \frac{y^2}{x} \sqrt{x^2 y^2}$ is homogeneous of degree: [2017]
 a) 0 b) 1 c) 2 d) 3
- 9) if an equation involves the derivative of dependent variable of one independent variable, is called ; [2017]

	a) ordinary differential equation c) integral equation	b) partial differential equation d) partial integro-differential equation	
10)	y = x + aA is a solution of D.E. a) $dy + dx = 0$ b) $dy/dx = 0$ c) $dy/dx = 1$ d) $dy/dx = C$		[2017]
11)	which function obeys Euler's theorem directly? a) $\tan^{-1}\left(\frac{x^2+y^2}{x-y}\right)$ b) $\sin\left(\frac{xy^2}{x^3+y^3}\right)$ c) $\tan\left(\frac{x^2-y^2}{x+y}\right)$ d) $\ln(\sqrt{x} - \sqrt{y})$		[2018]
12)	if the initial approximation is $x_0 = 0$, then for which of the following function Newton's Raphson is applicable ; a) $f(x) = x^3 + 2x - 1$ b) $f(x) = 1/\sin x$ c) $f(x) = 1/x$ d) $f(x) = \cot x$		[2018]

ANSWERS

1. (c) 2

2. (b) Euler theorem

3. B

4. A

5. B

6. C

7. B

8. D

9. A

1. C

11. B

12. A

ENGLISH;

ETEA medical + engineering 2019

- | | |
|--|--|
| <p>1) Sadia wore her rain boots; _____ her feet stayed dry during the storm. 2019-Med</p> <p>a) however
b) therefore
c) on the other hand
d) still
ans; b</p> | <p>10) Choose the word opposite in meaning to "VOCIFEROUS" 2019-Med</p> <p>a) Silent
b) boisterous
c) blatant
d) noisy</p> |
| <p>2) Anum asked me, "did you see the drama on television, last night" [choose the correct indirect speech] 2019-Med</p> <p>a) Anum asked me wheather I saw the dram on television the earlier night.
b) Anum asked me wheather I had seen the drama on television the earlier night.
c) Anum asked me did I see the drama on television the last night.
d) Anum asked me wheather I had seen the drama on television last night.</p> | <p>11) I'm sorry the house is not available any longer, it _____ to a timber tycoon</p> <p>a) Was being sold
b) will be sold
c) is sold
d) has been sold</p> |
| <p>3) Donot make so much noise, Farrah _____ to study for her ESL test.</p> <p>a) Try
b) tries
c) tried
d) is trying</p> | <p>12) I always like to lean the side of mercy</p> <p>a) Over
b) one
c) towards
d) about</p> |
| <p>4) Zara changed the flat tire. Choose the passive voice</p> <p>a) The flat tire was changed by Zara
b) The flat tire is changed by Zara
c) The flat tire has been changed by Zara
d) The flat tire had changed by Zara</p> | <p>13) _____ you win first place, you will receive a prize</p> <p>a) Whenever
b) if
c) unless
d) so forth</p> |
| <p>5) Sorry, she can't come to the phone. She _____ bath</p> <p>a) Is having
b) having
c) have
d) has</p> | <p>14) The train was _____</p> <p>a) Halt
b) halted
c) had halted
d) has halted</p> |
| <p>6) Choose the word nearest in meaning to "ENIGMA"</p> <p>a) Evaluation
b) puzzle
c) answer
d) account</p> | <p>15) Be patient, please Choose the passive voice</p> <p>a) You are requested to be patient.
b) You are ordered to be patient
c) You are advised to be patient
d) You are embarrassed to be patient</p> |
| <p>7) When I went back to my home town three years ago, I found that a lot of changes</p> <p>a) Had taken place
b) have taken place
c) Are taken place
d) were taken place</p> | <p>16) Mr. Saad _____ his teeth before breakfast every morning</p> <p>a) Will cleaned
b) is cleaning
c) cleans
d) clean</p> |
| <p>8) Choose the correct sentence</p> <p>a) He is clever but he lacks experience
b) He is clever but he is lacking experience.
c) He is clever but he lacked experience
d) He is clever but he is lack experience</p> | <p>17) I plan to take my vacation _____ in June _____ July</p> <p>a) Whether/or
b) either/or
c) as it
d) if as</p> |
| <p>9) Look! A hamster _____ by a cat 2019-Med</p> <p>a) Has been chased
b) was being chased
c) Is being chased
d) is chased</p> | <p>18) _____ many times every winter in Skardu.</p> <p>a) It snows
b) it showed
c) it is snowing
d) it is snow</p> |
| | <p>19) Work hard _____ you should fail</p> <p>a) Or
b) lest
c) that
d) none of the above</p> |
| | <p>20) Citizens are _____ stricter immigration laws.</p> <p>a) Asking for
b) recommending
c) demanding
d) none of the above</p> |
| | <p>21) Nadia doesn't like to drive, _____ she takes the bus everywhere</p> <p>a) But
b) yet
c) so
d) if</p> |
| | <p>22) She insisted _____ helping me with the dishes</p> <p>a) On
b) with
c) for
d) about</p> |
| | <p>23) A large sum of money _____ stolen.</p> <p>a) Were
b) was
c) have
d) had</p> |

24) Think not of it [Choose the correct passive voice] a) It should not be thought. b) Let it not be thought of. c) It must not be thought. d) Let not be think of it-	B	31) He said to me, how long will you stay here?" [Choose the correct indirect speech a) He said to me how long I would stay here b) He asked me how long I will stay here c) He asked me how long I would stay there. d) He inquired for how long I will stay there.	C
25) We are very excited _____ our trip to Karachi next week a) At b) with c) about d) over	C	32) The leader, as well as his brothers, _____ to the same tribe a) Belonging b) belongs c) belong d) belonged	B
26) Choose the word opposite in meaning to "RETAIN" a) Reject b) spare c) renounce d) eject	D	33) instead of beating _____ the brush, straightaway come to the point a) Away b) out c) about d) on	C
27) I am looking forward _____ having meeting with you next week a) With b) at c) to d) from	C	34) passengers _____ to smoke in the train a) Was not allowed b) had not allowed c) will not allow d) are not allowed	D
28) Choose the correct sentence a) She is busy at the work and won't be home before 10:30 b) She is busy at work and would not be home before 10:30 c) She is busy at work and won't be home before 10:30 d) She is busy in work and would not be home before 10:30	C	35) Can you _____ a few lines from wordsworth to prove that he is a poet of nature? a) Side b) site c) site d) cite	D
29) Choose the word nearest in meaning to "DEplete" a) Destroy b) finish c) exhaust d) vanish	C		
30) He is quite deaf _____ my requests a) With b) about c) to d) of	C		

VOCABULARY:

1. 'CHUCKLE' means: A) Bouquet of flowers B) Displeasing manner C) Suppressed laughter D) Religious movement	2014-04 Med
2. 'Money Grubbing' implies: A) Money saving B) Money making C) Money hunting D) Money spending	2014-15 Med
3. 'Get into a soup' implies: A) Face a predicament B) play a game of cards C) Swallow a fly in soup D) go for hot spicy soup	2014-26 Med
4. 'ARABLE' means: A) Not grown since long B) Recently ploughed field C) Watered the night before D) Fit for cultivation	2014-56 Med
5. 'ACQUAINTANCE' means a person whom: A) One loves but whom one cannot marry. B) One knows but who is not a close friend. C) One can depend on for help in hour of need. D) One can hire for attempting a question paper.	2014-93Med
6. 'APPRAISE' means: A) Praise a man out of place. B) Tell a story at bed time. C) Evaluate the equality of D) Do shopping in a bazar	2014-140, 2013-100 Med
7. 'Mortal stay' implies: A) Life that a man will have after death. B) Life spent in the company of friend. C) Life passed in hostel without studying. D) Life in this world which is short lived.	2014-152Med

8. 'Break the ice' implies: 2014-171, 2013-160 Med
A) Walk on ice-sheet B) Swallow ice-cube C) Chisel an ice-block D) to make beginning
9. The committee dissented from the report's conclusions. The underlined word means: 2014-128 Med
A) Differed B) Joined C) Deliberated D) Agreed
10. An 'elegy' is a poem written: 2014-182, 2013-140 Med
A) In the memory of little child B) On the death of someone dear.
C) On the sighting of an old tutor D) In the love of dear sweetheart.
11. 'Commencement' means: 2014-20 Eng
(a) The beginning (b) The conclusion (c) The impending (d) The interloping
12. Aboriginal means: 2014-10 Eng
a) Alley b) Native c) Migrate d) Displaced
13. 'Endowed' means: 2014-30 Eng;
(a) Checked or corrected (b) Betrayed or decived (c) Alarmed or disturbed (d) Awarded or gifted
14. 'Archive' means: 2014-40 Eng;
(a) A model of building behind museum. (b) A sequential statement of inventions.
(c) A collection of record about the past. (d) A chronological order of discoveries.
15. 'Incipient' means; 2014-50 Eng;
(a) In coma due to accidental injury (b) Just starting to be or happening.
(c) The recipient of gallantry award. (d) Practitioner of domestic recipes.
16. Blot and smudges implies: 2014-150 Eng
(a) Spot of ink and dirty marks (b) Foul smelling polluted water
(c) Bracelet and bangles of gold (d) Beautiful neat way of writing.
17. 'Get hold or oneself' implies: 2014-160 Eng
(a) To feel exhausted (b) To start running (c) To catch a chief (d) To become calm
18. 'No Wonder' implies: 2014-170 Eng
(a) Not surprising (b) Traffic mishap (c) Nothing weird (d) Seeing strange
19. Some government officials have an irritating Habit of *throwing their weight around everywhere*.
The italicized idiom means: 2014-80 Eng
(a) To redress public grievances. (b) To deliver satisfactory services.
(c) To use power and influence. (d) To Avail facilities.
20. The part of the newspaper in which letters to the editor are published is generally called the agory column.
The underlined word most nearly means: 2014-70 Eng;
(a) Hilarious jokes (b) aggregated problems (c) Intense excitement (d) acute pain
21. Mr. Feroz would rop the dull and wayward students across the knuckles. The Italicized idiom means;
2014-60 Eng;
(a) Reprove (b) Scold (c) admire (d) amuse
22. 'ALLUSION' means: 2013-40 Med
(a) An idea haunting one's mind (b) A casual or indirect reference
(c) Have a low frequency (d) Do not affect a photographic plate
23. GET HOLD OF ONESELF Implies: 2013-50 Med
A) To start running B) To catch a thief C) To become calm D) To feel exhausted
24. In a composition writing exercise, 'PRECISE' means: 2013-70 Med
A) A synopsis for writing an essay in a degree level examination
B) A critique highlighting the weak point of a feature film story
C) A resume of the commercial achievements spread over a year
D) A short summary of the crucial ideas of a longer composition.
25. 'CRANKY SPOUSE' implies: 2013-120 Med, 2015-111 Eng
A) A carefully selected loving partner of life B) Fussy and bad-tempered wife or husband
C) Money squandering younger second wife D) A device fitted behind the rear seat of a car.
26. 'DENOUNCE' means: 2013-180 Med
A) To reject straight away B) To praise in a meeting C) To condemn publicly D) To negotiate secretly
27. ALL BY ONESELF implies: 2013-11 Eng
A) keeping aloof not joining anybody's company B) in company and all those present join in ghands
C) passing one's life singly like a chronic bachelor
D) completely alone with no help from someone else
28. 'INNUMERABLE' means: 2013-31 Eng

- A) In equal numbers B) Numerically scant C) Not in a formation D) Too many to count
29. 'PRECISE' is a short summary of the essential ideas of: 2013-91Eng
A) A mixture of passages B) The underlying them C) The overview practice
D) A longer composition
30. 'COME OF AGE' implies: 2013-101Eng
A) To get married off B) To become very old C) To reach maturity D) To fall ill and expire
31. 'ENTOURAGE' means: 2013-161 Eng
A) Group of companions B) Embark on long tons C) Place one visits daily D) Albums of folk singer
32. 'HAVE CLEAN HANDS' implies: 2013-191 Eng
A) Wash one's hands B) Go for corruption C) Not being guilty D) Prepare for prayers
33. 'Hue and cry' means a: 2012-58 Eng
(a) colorful cooking (b) shouting at the people (c) Noisy public protest (d) Loud confused talking
34. 'Be poles apart' means 2012-107 Eng 2015-70 Med
(a) either of the two poles (b) have nothing in common (c) leading position in a race (d) affect somebody greatly
35. 'Frown on somebody' means to: 2012- 124 Eng, 2015-200 Med
(a) Fall flat upon a stranger (b) Stay alive working hard (c) Disapprove of somebody (d) Unable to be successful
36. 'Cynic' and '_____' are synonyms . 2011-141 Med
(a) skeptic (b) secret (c) solitary (d) truthful
37. A good business man should not be unscrupulous while making profits the underlined word means: 2011-131 MED
(a) unprincipled (b) careless (c) illegal (d) miserly
38. Sabiha's dress fits her like a glove. The underlined phrase means: 2011-40 Eng
(a) is too big (b) is too short (c) fits her very well (d) is very comfortable
39. Many People don't want their dirty linen washed in public The underline phrase means: 2011-50Eng
(a) To have their dirty clothes drying on clothes line
(b) To have their private affairs talked about in public
(c) to speak about and criticize something in public d. to ask the public to help with a noble cause
40. "MISOGYNIST" most nearly means A person who: 2011-90 Eng
(a) misses his shots (b) hates marriage (c) is against hunting (d) is left out of a sporting team
41. "CEMETERY" most nearly means: 2011-130 Eng
(a) graveyard (b) factory (c) system (d) pattern
42. 'ABORIGINAL' most nearly means: 2011-180 Eng
(a) unoriginal (b) native (c) cheap (d) second rate
43. There is no dearth of talent in our country. The underlined word means: 2011-190Eng
(a) training (b) shortcoming (c) encouragement (d) shortage
44. Their hospitality is proverbial. The underlined word means; 2011-200Eng
(a) sensible (b) well-known (c) exceptional (d) matchless
45. MAKESHIFT is closest in meaning to: 2010-07 Med
a. Impulsive b. Revolving c. Substitute d. Practical
46. FORESHADOW is closest in meaning to; 2010-33 Med
a. Dread b. Disguise c. Endanger d. Indicate
47. To have an old head on young shoulders means: 2010-123 Med
a) To be wiser than one's age b) To be young but appear old
c) To have ache in the shoulders d) To be old but appear young
48. BRILLIANT is closest in meaning to: 2010-41 Eng
a. Sparklin b. Glorious c. Talented d. Showy
49. INVALUABLE is closest in meaning to: 2009-20 Med
a. External valuable b. Worthless c. Highly expensive d. Fertile
50. 'FORGO' is closest in meaning to: 2009-110Med
a. run away b. Do without c. Safeguard d. Precede
51. The word GAUNT means: 2008-92 Med
a. ill health b. glove c. slout d. gravel

52. To have a windfall refers to: 2008-85 Med
a. Bad weather b. receiving gifts c. receiving profits d. sudden calamity
53. The word REPROACH means: 2008-90 Med
a. Approach again b. reach again c. blame d. praise
54. The word PROSCRIBE means : 2008-101 Med
a. say with authority b. unwanted behavior c. denounce d. supporting teacher
55. To burn the Candle at both ends refers to: 2008-105 Med
a. Hard work b. face great loss c. face challenge d. waste money
56. The word LEVITY means; 2008-109 Med
a. Impose one's viewpoint b. serious attitude c. Non-serious attitude d. Enjoy frequent leave
57. The word INCENSE means: 2008-130 Med
a. Make angry b. Alert c. fool ill d. encourage
58. The word PRODIGAL means. 2008-135 Med
a. careful with money b. wasteful with money c. wonderful d. helpful to people
59. The word PREDILECTION means: 2008-184 Med
a. preference b. prediction c. reverence d. induction
60. Our plays have been very capricious in their performance. The underlined word means 2007-42 Med
a. Wonderful b. Unpredictable c. Adventurous d. Tricky
61. Homicide 2007-68 Med
a. Is a poison b. Means killing members of one's species
c. Means murder d. Means the murderer of one's own family
62. Autocracy is the government of. 2007-97 Med
a. One person with absolute power b. Lawyers fraternity
c. Elected representatives of the masses d. Intelligentsia
63. The bottom line is that we cannot ignore the cultural aspect in education. The underlined expression means. 2007-100 Med
a. Most important thing b. The last line in an essay c. Conclusion d. Trend
64. The word SEISMOLOGY stands for. 2007-113 Med
a. An instrument for detecting earthquakes b. Study of sea creatures
c. A branch of astrology d. Scientific study if earthquakes
65. 'Browned off' means: 2006-06 Med
a. grilled properly b. bored c. discouraged d. cleaned
66. 'Blow great trumpet / horn' refers to: 2006-30 Med
a. boast b. violent flow of wind c. celebrate enthusiastically d. eruption of war
67. A man of letters is; 2005-149 Med
a. A postman b. A person who is fond of writing letters
c. A man well versed in literature d. A man who writes letters for others
68. Choose the word closest in meaning to the word GENOCIDE; 2005-180 Med
a. Self destruction b. Murder of a father c. Murder of a kin d. killing an entire race
69. He extolled the virtues of the Russian people. [The underlined word means:] 2015-10 Med
A) Admired B) Praised C) Censured D) Adopted
70. The local inns are bursting at the seams and may not be able to accommodate anymore. [The underlined phrase means:] 2015-140 Med
A) Unhygienic B) Overcrowded C) Empty D) Shutting Down
71. 'NEPOTISM' means: 2015-73 Eng
A) Criticism B) Socialism C) Favoritism D) Monotheism
72. She found too late that her precious art pieces were not worth a dime. The underlined phrase means: 2015-86 Eng
A) In good state B) New C) of little value D) Priceless
73. A pale moon and watery sun are known as prognostics of rain. The underlined word means; 2015-109 Eng
A) Indications B) Start C) Cause D) Friends
74. DAUNTED means: 2015-145 Eng
A) Intimidate B) Speculate C) Emancipate D) Evacuate
75. Choose the word most similar in meaning to the capitalized word "REVILE": 2016-190 Eng
(a) Perceive (b) Pawn (c) Abuse (d) Prevent

76. "Be Poles apart" means: 2016-170 Eng
(a) Either of the two poles
(b) **Having nothing in common**
(c) Leading position in a race
(d) Affect somebody greatly
77. Choose the word most similar in meaning to the capitalized word "VESTIGE": 2016-140 Eng
(a) Servile (b) Embark (c) Hunch (d) **Indication**
78. Chose the word most similar in meaning to the capitalized word "IGNOMINY": 2016-120 Eng
(a) **Dishonor** (b) Enthusiasm (c) Besiege (d) Contrary
- 79) Choose the word opposite in meaning to the capitalized word ANARCHIC: 2016-143 Med
(a) Riotous (b) Turbulent (c) Disordered (d) Organized
- 80) Frown on somebody means to: 2016-151 Med
(a) Fall flat upon a stranger (b) Stay alive working hard
(c) Unable to be successful (d) Disapprove of somebody
- 81) Choose the word most similar in meaning to the capitalized word "PRODIGIOUS": 2016-166 Med
(a) Enormous (b) Sacred (c) Seismic (d) Tiny
- 82) Choose the word most similar in meaning to the capitalized word "OBLITERATE": 2016-67 Med
(a) Offend (b) Haul
(c) Rent (d) Destroy
- 83) That a driver swerves in order to avoid an accident can be proven by examining the marks on the pavements. 2017-150 Med
(The underlined word nearly means)
A.Stops quickly B.Turns sharply C.Hits something else D.Goes backward
- 84) Choose the synonym for the word "ABRIDGE" 2017165 Med
A. To make a bridge B.Shorten
C. Magnify D.Divert
85. It is a general perception that doctors have a callous disregard for feeling of others;
(The underlined word nearly means) 2017176 Med
A.Respectable B.Careful C.Unfeeling D.Sensitive
- 86) A thrifty buyer purchases fruits and vegetables in season. 2017198 Med
(The under lined word nearly means)
a.Careful B. Professional c. Disinterested D. Healthy

Answer Key:

- | | | | |
|--|---|------------------------|--|
| 1. C) Suppressed laughter | 17. (d) To become calm | 18. (a) Not surprising | 32. C) Not being guilty |
| 2. B) Money making | 19. (c) To use power and influence. | | 33. (c) Noisy public protest |
| 3. A) Face a predicament | 20. (b) aggregated problems | | 34. (b) have nothing in common |
| 4. D) Fit for cultivation | 21. (b) Scold | | 35. (c) Disapprove of somebody |
| 5. B) One knows but who is not a close friend. | 22. (b) A casual or indirect reference | | 36. (a) skeptic |
| 6. C) Evaluate the equality of | 23. C) To become calm | | 37. (a) unprincipled |
| 7. D) Life in this world which is short lived. | 24. D) A short summary of the crucial ideas of a longer composition | | 38. (c) fits her very well |
| 8. D) to make beginning | 25. B) Fussy and bad-tempered wife or husband | | 39. (b) To have their private affairs talked about in public |
| 9. A) Differed | 26. C) To condemn publicly | | 40. (b) hates marriage |
| 10. B) On the death of someone dear | 27. D) completely alone with no help from someone else | | 41. (a) graveyard |
| 11. (a) The beginning | 28. D) Too many to count | | 42. (b) native |
| 12. b) Native | 29. D) A longer composition | | 43. (d) shortage |
| 13. (d) Awarded or gifted | 30. C) To reach maturity | | 44. (b) well-known |
| 14. (c) A collection of record about the past | 31. A) Group of companions | | 45. a. Impulsive |
| 15. (b) Just starting to be or happening. | | | 46. d. Indicate |
| 16. (a) Spot of ink and dirty marks | | | 47. a) To be wiser than one's age |
| | | | 48. c. Talented |
| | | | 49. c. Highly expensive |
| | | | 50. b. Do without |
| | | | 51. a. ill health |

- | | | |
|---------------------------------------|--|----------------------------------|
| 52. b. receiving gifts | 64. a. An instrument for detecting earthquakes | 75. (c) Abuse |
| 53. c. blame | 65. c. discouraged | 76. (b) Having nothing in common |
| 54. c. denounce | 66. a. boast | 77. (d) Indication |
| 55. d. waste money | 67. c. A man well versed in literature | 78.(a) Dishonor |
| 56. c. Non-serious attitude | 68. d. killing an entire race | 79. D |
| 57. a. Make angry | 69. | 80.A |
| 58. b. wasteful with money | 70. B) Overcrowded | 81.D |
| 59. a. preference | 71. C) Favoritism | 82. |
| 60. b. Unpredictable | 72. C) of little value | 83.B |
| 61. c. Means murder | 73. A) Indications | 84.B |
| 62. a. One person with absolute power | 74. C) Emancipate | 85.C |
| 63. a. Most important thing | | 86.A |

Antonyms;

- | | |
|---|--------------|
| 1. AMICABLE is nearly opposite in meaning to;
(a) Hostile (b) Indispensable (c) Inimical (d) Amiable | 2007-13 Med |
| 2. 'Professional' and '_____' are antonyms.
(a) unemployed (b) entrepreneur (c) amateur (d) capitalist | 2011-151 Med |
| 3. Choose the word opposite in meaning to the capitalized word 'TABGIBLE'
a)emboided b) conceptual c) phenomenal d) verifiable | [2016] |
| 4. choose the antonym of the word 'UNTENABLE'
a)tender b) sheepish c) susupportable d) tremulous | [2017] |
| 5. choose the antonym from the word; 'ABROGATE'
A)transgress B) signify C) alleviate D) ratify | [2017] |

Answer Key

1. (a) Hostile
2. (c) amateur
3. B
4.C
5.D

Preposition;

- | | |
|---|--------------|
| 1. It has been raining continuously last night.
A) Since B) for C) from D) with | 2015-60 Med |
| 2. I insist _____ the withdrawal of your statement.
A) for B) on C) at D) in | 2015-120 Med |
| 3. The lady sitting _____ me has an elegant style.
A) at B) beside C) about D) around | 2015-150 Med |
| 4. There are _____ fish in this pond.
A) Many B) Much C) Any D) More | 2015-170 Med |
| 5. She is very nice to look _____.
A) at B) by C) beside D) on | 2015-44 Eng |
| 6. The police are looking _____ the recent state of burglaries.
A) into B) to C) at D) for | 2015-162 Eng |
| 7. You will be the perfect in charge _____ this group.
A) of B) to C) by D) on | 2014-47 Med |
| 8. I eagerly look forward _____ seeing you again
A) at B) to C) on D) by | 2014-37 Med |
| 9. The senator is opposed _____ this new legislation. | 2014-160 Med |

	A) at	B) to	C) try	D) on
10.	He was arrested and charged _____ murder.			2014-190 Med
	A) with	B) into	C) over	D) about
11.	_____ second thoughts I opted for a cold drink;			2014-197 Med
	A) At	B) By	C) On	D) For
12.	Add some milk and sugar _____ the afternoon tea.			2014-167 Med , 2013-20 Med
	A) with	B) in	C) on	D) to
13.	Please help someone the house islife.			2013-110 Med
	A) At	B) In	C) On	D) By
14.	My children don't approve..... my smoking.			2013-150 Med
	A) I	B) Of	C) On	D) at
15.	Marvin was arrested and charged... murder.			2013-51-Eng
	A) Into	B) Over	C) With	D) Near
16.	Leagerly-look forward... seeing her again.			2013-131 Eng
	A) At	B) To	C) On	D) by
17.	The senator is opposed this new legislation.			2013-151 Eng
	A) To	B) At	C) By	D) on
18.	Please come to the point; don't beat __ the bush.			2012-39 Med
	A) across	B) about	C) along	D) around
19.	She has complained _____ me to the Principal.			2012-46 Med
	A) about	B) from	C) against	D) over
20.	Allah, the Almighty, has blessed him _____ a son.			2012-81 Med
	A) by	B) along	C) from	D) with
21.	There are _____ fish in this pond.			2012-20 Eng
	(a) much	(b) any	(c) more	(d) many
22.	I insist _____ the withdrawal of your statement.			2012-99 Eng
	(a) for	(b) at	(c) in	(d) on
23.	It has been raining continuously _____ last night.			2012-171 Eng
	(a) Since	(b) For	(c) From	(d) With
24.	She has let _____ her house fully furnished to a Korean couple.			2011-22 Med
	(a) out	(b) at	(c) up	(d) in
25.	When everyone hung _____ the leader picked on the most suitable person to do the job.			2010-63 Med
	(a) Out	(b) About	(c) Back	(d) On
26.	The thief ran _____ the street to the other side and hid under the bridge.			2010-97 Med
	(a) Over	(b) Across	(c) Along	(d) Beside
27.	You should not swim _____ a meal.			2010-166 Med
	(a) After	(b) Over	(c) About	(d) Across
28.	The students will go camping _____ the vacations.			2010-17 Eng
	(a) At	(b) During	(c) For	(d) In
29.	I can't make _____ what he has written.			2010-104 Eng
	(a) Out	(b) Up	(c) After	(d) For
30.	Have you made _____ your mind about acting in the play?			2010-83 Eng
	(a) Out	(b) Over	(c) Up	(d) On
31.	Most people are afraid to go _____ the beaten track.			2010-176 Eng
	(a) From	(b) To	(c) off	(d) Against
32.	When she came _____ senses, she asked to see her son.			2009-140 Med
	(a) in	(b) to	(c) at	(d) into
33.	The boys got _____ the bus at the terminal.			2009-150 Med
	(a) From	(b) of	(c) off	(d) all
34.	Which one is a preposition?			2008-116 Med
	(a) against	(b) loudly	(c) so	(d) be
35.	If you like sport, this is a great place, there is a lot to choose _____			[2016]
	a) among	b) from	c) at	d) for
36.	I insist _____ the withdrawal of your statement.			[2016]
	a) for	b) on	c) at	d) in

37. he is grieving _____ his deceased father
a)at b)for c)on d)over

Answer Key

- | | | |
|--------------|----------------|-----------------|
| 1. A) Since | 13. C) On | 27. (a) After |
| 2. B) on | 14. B) Of | 28. (b) During |
| 3. B) beside | 15 C) With. | 29. (a) Out |
| 4. A) Many | 16. B) To | 30. (c) Up |
| 5. A) at | 17. A) To | 31. (c) off |
| 6. A) into | 18. B) about | 32. (b) to |
| 7. A) of | 19. C) against | 33. (c) off |
| 8. B) to | 20. D) with | 34. (a) against |
| 9. B) to | 21. (d) many | 35.B (againsy) |
| 10. A) with | 22. (d) on | 36.B (from) |
| 11. B) By | 23. (a) Since | 37.A (AT) |
| 12. D) to | 24. (b) at | |
| | 25. (b) About | |
| | 26. (b) Across | |

Correct Sentences;

- | | |
|---|---|
| 1. Choose the correct sentence: | 2015-110 Med |
| A) If I knew him better, I would have insisted that he change the hour of the lecture. | |
| B) If I knew him better, I would have insisted that he changed the hour of the lecture. | |
| C) If I knew him better, I would insist that have change the hour of the lecture. | |
| D) knew him better, I would insist for him to change the hour of the lecture. | |
| 2. Choose the Correct sentence: | 2015-40 Med |
| A) He throwed it out the window. | B) He threw it out the window. |
| C) He thrown it out the window. | D) He thrown it out the window. |
| 3. Choose the correct sentence: | 2015-180 Med |
| A) As far as I know he bears a good moral character. B) So far as I know, he bears a good moral character. | |
| C) As long as I know, he bears a good moral character. D) Not that I know, he bears a good moral character. | |
| 4. Choose the correct sentence; | 2015-124 Eng |
| A) I am a Pakistani and so is she | B) I am, a Pakistani and she is also |
| C) she and me are Pakistani | D) I am a Pakistani as is she |
| 5. Choose the correct sentence: | 2015-174 Eng |
| A) One must not boast of his own success. | B) One must not boast of her own success. |
| C)One must not boast of one's own success. | D) One must not boast of ones own success. |
| 6. The correct sentence is; | 2015-193 Eng |
| A) I came across a friend of yours the pther day | B) I came across a friend of yours the other day |
| C) I came across a friend of your the other day | D) I came across a friend of yours the other day |
| 7. Choose the Correct Sentence: | 2014-87Med |
| A) The lecture was long a bore and uninspired. | B) The lecture was long a bore and uninspiring. |
| C) The lecture was long boring and uninspiring | D) The lecture awas a long a bore and an uninspiring. |
| 8. Choose the correct sentence. | 2014-72 Med |
| A) We bought some new clothing. | B) We bought some new clothings. |
| C) We bought some new piece of clothings | D) We bought some new pieces of clothings. |
| 9. Select the correct sentence: | 2014-180 Eng |
| A) She possesses some small charming silver ornaments. | |
| B) She possesses some charming smal silver ornaments. | |
| C) Some charming small silver ornaments she possesses. | |
| D) Some small silver charming ornaments the possesses. | |
| 9. Select the correct sentence: | 2014-190 Eng |
| A) Across the rooftop the thief silently crept. | B) The rooftop across silentlycrept the thief. |
| C) Thief crept silently across the rooftop. | D) Silently the thief crept across the rooftop. |

10. Select the correct sentence: 2014-200 Eng;
 A) The best person certainly she is for the job. B) Certainly she is the best person for the job.
 C) She is the best person for the job certainly. D) She is certainly the best person for the job.
11. Some one is walking behind us. I think: 2014-100 Eng;
 (a) We are being followed (b) We have been followed.
 (c) We are followed. (d) We were being followed.
12. Select the correct sentence: 2013-60 Med
 A) My feet seemed hardly to touch the earth. B) My feet hardly seemed to touch the earth.
 C) Hardly my feet seemed to touch the earth. D) My feet seemed to touch the earth hardly.
13. Fire destroyed the top floor of the building: 2013-90 Med
 A) The top floor of building got destroyed by fire. B) By fire was destroyed top floor of the building.
 C) Destroyed by fire was the top floor of the building. D) The top floor of building was destroyed by fire.
14. Select the correct sentence: 2013-130 Med
 A) Farid and javed both are good swimmers. B) Both farid and javed are good swimmers.
 C) Good swimmers are Farid and faved both. D) Swimmers are good both Farid and faved.
15. Select the correct sentence: 2013-170 Med
 A) Certainly she is the best person for the job. B) She is the best person for the job certainly.
 C) She is certainly the best person for the job. D) The best person certainly she is for the job.
16. Select the correct sentence: 2013-41 Eng
 A) Last night we watched a barbaric movie. B) Last night we watched a turmeric movie.
 C) Last night we watched a agnostic movie. D) Last night we watched a fantastic movie.
17. Select the correct sentence: 2013-71 Eng
 A) She possesses some small charming silver ornaments.
 B) Some charming small silver ornaments she possesses.
 C) Some small silver charming ornaments she possesses.
 D) She possesses some charming small silver ornaments.
18. Select the correct sentence: 2013-141 Eng
 A) But brightly polished were the old shoes. B) Old were the shoes but brightly polished
 C) The shoes were old but polished brightly. D) The shoes were old but brightly polished
19. When you go to Karachi, please; 2012-06 Med
 A) Collect a good watch for me B) Acquire a good watch for me.
 C) Bring a good watch for me. D) Arrange a good watch for me.
20. Choose the correct sentence out of the following:- 2012-25 Med
 A) The country was hard hit by the war. B) The country was hardly hit by the war.
 C) The country was severely hit by the war D) The country was more hardly hit by the war.
21. If you want to play cricket, 2012-79 Med
 A) you ought to join our club. B) you ought to join with our club.
 C) you ought joined our club. D) you ought to join in our club.
22. They arrived at about mid night; 2012-192 Med
 A) because their flight was detained. B) because their flight was delayed.
 C) because their flight was derailed. D) because their flight was diverted.
23. As you have not prepared your work ____ 2012-10 Eng
 a) you may not fall in the examination b) you could prepare harder next time
 c) you would do better in the examination d) you are not likely to do well this time.
24. Do you go shopping often? Yes, ____ 2012-40 Eng
 (a) I go shopping on Mondays (b) I go shopping once a week
 (c) I go shopping every days (d) I go shopping at Super Market.
25. Choose the correct sentence of the following : 2012-46 Eng
 (a) I am much thankful to you. (b) I am quite thankful to you
 (c) I am just thankful to you (d) I am very thankful to you
26. Choose the correct sentence out of the following: 2012-85 Eng
 (a) every one of the two students got a prize. (b) any one of the two students got a prize.
 (c) each of the two students got a prize. (d) each one of the two students got a prize.
27. Choose the correct sentence out of the following: 2012-197 Eng
 (a) As far as I know he bears good moral character (b) As long as I know, he bears good moral character
 (c) So far as I know, he bears good moral character (d) Not that I know, he bears good moral character

28. Don't worry what other people think 2011-70 Eng
(a) just take not note of them (b) just take no sign of them
(c) just take not hint of them (d) just take no notice of them
29. You can't agree with both of them 2011-60 Eng
(a) make your opinion up (b) make your mind up (c) make brain up (d) make up your mind
30. Driving to work, 2011-100 Eng
(a) he saw many children going to school (b) the traffic made him late
(c) the traffic jams infuriated him (d) his car broke down many times
31. Running into room, 2011-120 Eng
(a) a rug caught her foot and she fell (b) she caught her foot on a rug and she fell
(c) her foot was caught on a rug and she fell (d) she had fallen after catching her foot on a rug.
32. As soon as he reached home, he realized that he had lost a five ; 2007-140 Med
a)Thousands rupees note b) Thousands rupees' note c)Thousand rupees note d)Thousand rupee note
Choose the correct sentence. 2016-30 Eng
(a) I got outside and looked in at the field (b) I went outside and look out at the field.
(c) I went outside and looking out in the field (d) **I went outside and looked out at the field**
33. Choose the correct sentence 2016-100 Eng
(a) My father is thinking that I should stop smoking
(b) **My father thinks I should stop smoking**
(c) My father through I should stop smoking
(d) My father think I should stop smoking
34. Choose the correct sentence 2016-110 Eng
(a) He probably isn't going to come to school tomorrow.
(b) He probably doesn't go to school tomorrow
(c) He probably isn't go to come to school tomorrow
(d) **He probably won't come to school tomorrow**
35. Choose the correct sentence; 2016-160 Eng
(a) I am much thankful to you (b) I am quite thankful to you
(c) I am just thankful to you (d) **I am very thankful to you**
36. Choose the correct sentence. 2016-60
(a) **With the vial set inside the fly box, all the flies could be put to sleep within seconds.**
(b) With the vial settled inside the fly box, all the flies could be put to sleep within seconds.
(c) With the vial set inside the fly box, all the flies could be putting to sleep within seconds.
(d) With the vial set inside the fly box, all the fly could be put to sleep in seconds.
37. Choose the correct sentence. 2016-07 Med
(a) Each contained a different specie of insect.
(b) Each contained a different species of insect.
(c) Each contained a different species of insects.
(d) Each contained a different species of insect.
38. Choose the correct sentence. 2016-12 Med
(a) He can speak Japanese because he was born in Canada.
(b) He can speak Japanese until he was born in Canada.
(c) He can speak Japanese even though he was born in Canada.
(d) He can speak Japanese so he was born in Canada.
39. Choose the correct sentence 2016- Med
(A) Tom left by the crossroads when you reachit
(b) Tum lent by the crossroads until you reach
(c) Turn left with the crossroads when you reach it
(d) Tum left at the crossroads when you reach it
40. Choose the correct sentence. 2017-20 Med
A) Naila was exhausted that on she laid down for a nap
B) Naila was so exhausted that on she laid down for a nap
C) Naila was so exhausted that on she was lying down for a nap
D) Naiia' was so exhausted that on she will lay down for a nap
41. Choose the correct sentence 2017-42 Med
A.How long your wearing glasses?
B. How long do you wear the glasse?

C. How long you wear glasses ?

D. How long have you been wearing glasses?

42. Choose the correct sentence. 2017-57 Med
 A. The village folk were present. B. The village folk was present.
 C. The village folks were present. D. The village folks was present.
43. Which of the following is correct in all respects? 2018155 Med, Paper-D
 A) I have done matric in 2010 B) This is an utensil.
 C) The population of the world rises D. This is the best peach producing valley

Answer Key

- | | |
|--|---|
| 1. B) If I knew him better, I would have insisted that he changed the hour of the lecture. | 22. B) because their flight was delayed |
| 2. B) He threw it out the window. | 23. d) you are not likely to do well this time |
| 3. A) As far as I know he bears a good moral character. | 24. (b) I go shopping once a week |
| 4. A) I am a Pakistani and so is she | 25. (d) I am very thankful to you |
| 5. C) One must not boast of one's own success. | 26. (c) each of the two students got a prize |
| 6. A) I came across a friend of yours the pther day | 27. |
| 7. C) The lecture was long boring and uninspiring | 28. (d) just take no notice of them |
| 8. A) We bought some new clothing. | 29. (d) make up your mind |
| 9. C) Thief crept silently across the rooftop | 30. (a) he saw many children going to school |
| 10. B) Certainly she is the best person for the job | 31. (d) she had fallen after catching her foot on a rug |
| 11. (a) We are being followed | 32.. (d) I went outside and looked out at the field |
| 12. B) My feet hardly seemed to touch the earth | 33. (b) My father thinks I should stop smoking. |
| 13. D) The top floor of building was destroyed by fire | 34. (d) He probably won't come to school tomorrow. |
| 14. B) Both farid and javed are good swimmers. | 35. (d) I am very thankful to you |
| 15. A) Certainly she is the best person for the job | 36.a. (a) With the vial set inside the fly box, all the flies could be put to sleep within seconds. |
| 16. D) Last night we watched a fantastic mo | 37. B |
| 17. D) She possesses some charming small silver ornaments. | 38. C |
| 18. D) The shoes were old but brightly polished | 39. D |
| 19. C) Bring a good watch for me | 40. C |
| 20. C) The country was severely hit by the war | 41. D |
| 21. A) you ought to join our club | 42. A |
| | 43. D |

Fill in the Blanks:

- | | |
|---|----------------------------|
| 1. He was _____ in bed all day yesterday.
A) Laying B) Lying C) Lieing D) Lied | 2015-20 Med |
| 2. The rising price of electricity has _____ affected the less fortunate.
A) Positively B) Not C) Adversely D) Slowly | 2015-80 Med |
| 3. Your friend proved more sympathetic than I expected he _____ do.
A) will B) Shall C) would D) should | 2015-100 Med, 2012-191 Eng |
| 4. You _____ have told me the sad news earlier.
A) Would B) Must C) Should D) Ought | 2015-11 Eng |
| 5. Student's _____ submit their assignments in time or they will be marked absent.
A) Would B) Shall C) Must D) May | 2015-21 Eng |
| 6. If you had _____ her on the matter, you would not have made this blunder.
A) Advised B) Consulted C) Discussed D) Referred | 2015-77 Eng |
| 7. A _____ child, she was soon bored in class; she already knew more mathematics than her junior school teachers.
A) Contemporary B) Lethargic C) Obdurate D) Precocious | 2014-76; Med |
| 8. The boys loved the zoo. They _____ wild:
(a) have never seen (b) never saw (c) had never seen (d) All are correct | 2014-90 Eng; |
| 9. In Pakistan, the more electricity you use, _____ you bill will be: | 2014-110 Eng |

	(a) The more high	(b) The more highly	(c) The highest	(d) The higher	
10.	The flat be alright. If the people above us _____ not so noisy ;				2014-130 Eng
	(a) are	(b) would be	(c) were	(d) will be	
11.	I shall see you tomorrow _____ I have to work late _____				2014-140 Eng
	(a) in case	(b) unless	(c) if	(d) as	
12.	In grammatical context, 'ARTICLES' allude to:				2013-181 Eng
	A) A, an and the	B) For and since	C) Lexical verbs	D) Word classes	
13.	Mathematics difficult but is fascinating.				2012-35 Med
	A) seems	B) is seeming	C) seemed	D) seem	
14.	You need to go to the hospital _____ possible. An erratic heart-beat can be very dangerous.				2012-91 Med
	A) as good as	B) as long as	C) as much as	D) as soon as	
15.	Ghani Khan is _____ of Pashto.				2012-120 Med
	A) John Keats	B) a John Keat	C) the John Keats	D) like John Keats	
16.	If it did not rain in time, there _____ a horrible famine.				2012-163 Med
	A) would have been	B) will be	C) would be	D) will have been	
17.	They should have arrived by now _____ I wonder:				2012-143 Eng
	(a) what has kept them	(b) what has got them	(c) what has held them	(d) what has done them	
18.	Your friend proved more sympathetic than expected he do.				2012-191 Eng
	(a) will	(b) Shall	(c) should	(d) would	
19.	We need _____ guidelines to start with.				2011-01 Med
	(a) a few	(b) any	(c) little	(d) some	
20.	Which one would you class it as more We need _____ guidelines to start with.				2011-06 Med
	(a) few	(b) any	(c) little	(d) some	
21.	The authorities have _____ that the plane to Beirut was hijacked over the Indian ocean.				2011-12 Med
	(a) assured	(b) confirmed	(c) committed	(d) ensured	
22.	Your _____ too long: you had better go to the hairdresser today.				2011-42 Med
	(a) hair is	(b) hair are	(c) hairs are	(d) hairs is	
23.	I have no _____ to listen to the budget speech.				2011-32 Med
	(a) trouble	(b) convenience	(c) patience	(d) perseverance	
24.	You can always count on me. I will not let you _____				2011-52 Med
	(a) alone	(b) down	(c) off	(d) through	
25.	She _____ her parents. They must be worried about her health.				2011-72 Med
	(a) had better call	(b) had better called	(c) had better to call	(d) better call	
26.	Styles _____ popular in the 1960s are reappearing in high fashion boutiques.				2011-62 Med
	(a) what have been	(b) which have been	(c) that have been	(d) that were	
27.	Styles _____ popular in the 1960s are reappearing in high fashion boutiques.				2011-82 Med
	(a) what have been	(b) which have been	(c) that have been	(d) that were	
28.	She _____ her parents. They must be worried about her health.				2011-94 Med
	(a) had better call	(b) had better called	(c) had better to call	(d) better call	
29.	He _____ before the interview board.				2011-101 Med
	(a) was afraid to appear	(b) was afraid of appearing	(c) was afraid of appearing	(d) feared appearance	
30.	_____ in the world.				2011-121 Med
	(a) our's is not one of the quickest response system	(b) our is not one of the quickest response systems	(c) Ours is not one of the quickest response systems	(d) our is not one of the quickest response system	
31.	Secrets leak when the _____ are many.				2011-161 Med
	(a) Enemies	(b) ill-whishers	(c) confidants	(d) detractors	
32.	The guard looked at me _____ and then asked me to identify myself.				2011-171 Med
	(a) Dangerously	(b) hurriedly	(c) suspiciously	(d) nervously	
33.	Her _____ lasted for one month. They were the longest wedding celebrations in that area.				2011-191 Med
	(a) Rituals	(b) matrimonial	(c) nuptials	(d) rites	
34.	She tried to _____ my question, but I persisted in having an answer.				2011-181 Med
	(a) Refrain	(b) evade	(c) refuse	(d) deny	
35.	Most people like the _____ of not having to work.				2011-20 Eng

	(a) Scheme	(b) suggestion	(c) design	(d) idea	
36.	Many people have _____ about winning a big prize in the lottery.				2011-10 Eng
	(a) Imagined	(b) visualized	(c) fantasized	(d) discovered	
37.	When I told him about it, he				2011-30 Eng
	(a) Is just laughing	(b) has just laughed	(c) was just laughing	(d) just laughed	
38.	I don't like pasta and my sister doesn't				2011-80 Eng
	(a) too	(b) neither	(c) either	(d) also	
39.	The president ____ on TV tonight.				2011-110 Eng
	(a) speaks	(b) will speak	(c) has spoken	(d) is speaking	
40.	More than one student _____ absent the day before yesterday.				2011-140 Eng
	(a) was	(b) were	(c) had been	(d) have been	
41.	'Moon' is to 'Satellite' as 'Earth' is to _____				2011-160 Eng
	(a) solar system	(b) sun	(c) planet	(d) asteroid	
42.	Only after my wife asked me the time _____ that I had lost my watch.				2011-150 Eng
	(a) did I realized	(b) I realized	(c) I did realized	(d) I did realize	
43.	"Influenza" is to "Virus" as 'Typhoid' is to _____				2011-170 Eng
	(a) bacteria	(b) bacillus	(c) parasites	(d) protozoa	
44.	Mother is _____ the baby dinner in the kitchen.				2010-05 Med
	a. Preparing	b. Prepared	c. Preparation	d. Preparatory	
45.	We were moved _____ the cat struggling to live her kitten.				2010-17 Med
	a. See	b. Saw	c. To have seen	d. To see	
46.	A _____ is a person who is dissatisfied and inclined to rebel.				2010-39 Med
	a. Delinquent	b. Revolutionary	c. Pessimist	d. Non conformist	
47.	Rashid spoke _____ that he was praised by all the debaters.				2010-92 Med
	a. Well	b. As well	c. Very well	d. So well	
48.	He is rather an _____ teacher he never accepts the students excuses.				2010-109 Med
	a. Incredulous	b. Unbelievable	c. Interesting	d. Indiscriminate	
49.	Do you have _____ difficulty with the language?				2010-138 Med
	a. Any	b. Some	c. Every	d. Many	
50.	Here are your shoes, I _____ them .				2010-145 Med
	a. Just clean	b. Just cleaned	c. Have just cleaned	d. Have just cleaned	
51.	The actress traveled _____ to avoid being recognized by her fans.				2010-160 Med
	a. Unknown	b. Concealed	c. Incognito	d. Anonymously	
52.	The stranger _____ the little girl with some sweets.				2010-150 Med
	a. Deceived	b. Attracted	c. Enticed	d. Praised	
53.	The military coup in the country brought an end to _____ rule by the emperor.				2010-192 Med
	a. Omnipotent	b. Almighty	c. Dictatorial	d. Monopolistic	
54.	He has _____ his pen and is buying another one.				2010-180 Med
	a. Lose	b. Lost	c. Loser	d. Loss	
55.	A constellation is made up of stars a troupe is made up of:				2010-103 Med
	a. Starlets	b. Speakers	c. Actors	d. Beggars	
56.	She wears sun glasses to _____ her eyes from the harmful rays of the sun.				2010-02 Eng
	a. Prevent	b. Protect	c. Defend	d. Shelter	
57.	The noisy behavior of the children _____ their teacher.				2010-08 Eng
	a. Aggrieved	b. Impeached	c. Tempered	d. Incensed	
58.	The librarian can provide you a/an _____ edition of the book.				2010-33 Eng
	a. Abridged	b. Summarized	c. Abbreviated	d. Shortened	
59.	We are eager _____ the scientist .				2010-67 Eng
	a. To meet	b. Meet	c. To have met	d. Meeting	
60.	_____ property was damaged by the typhoon.				2010-55 Eng
	a. Many	b. Much	c. More	d. Several	
61.	The building was completely _____ by the fire.				2010-77 Eng
	a. Obliterated	b. Demolished	c. Annihilated	d. Destroyed	
62.	There are many _____ organization here which need voluntary workers.				2010-87 Eng

	a. Sympathetic	b. Charitable	c. Generous	d. Sociable
63.	I am much obliged to you for your ____ assistance.	2010-114 Eng		
	a. Valuable	b. Value	c. Valuation	d. Valueless
64.	The young officer was ____ because of his excellent performance.	2010-122 Eng		
	a. Raised	b. Progressed	c. Improved	d. Promoted
65.	They heard the sirens ____ as the fire engines approached:	2010-126 Eng		
	a. To will	b. Wail	c. Willd	d. Willing
66.	Sarwar ____ collect antiques but now he has other pastimes.	2010-136 Eng		
	a. Used to	b. Was used to	c. Used to be	d. Using to
67.	There is sufficient ____ to charge the man with fraud:	2010-157 Eng		
	a. Data	b. Information	c. Evidence	d. Clue
68.	Mr. Alif Din is a/an ____ figure in the political scandal.	2010-165 Eng		
	a. Prominent	b. Outstanding	c. Conspicuous	d. Remarkable
69.	The championship games is on this weekend ____ I am feeling a little nervous:	2010-172 Eng		
	a. since	b. But	c. Although	d. And
70.	He has ____ his pen and is buying another one.	2010-180 Eng		
	a. Lose	b. Lost	c. Loser	d. Loss
71.	The military coup in the county has brought an end to ____ rule by the emperor.	2010-192 Eng		
	a. Tyrant	b. democratic rule	c. Eclipse	d. Lasting
72.	It is useless ____ them; they are sure to have left the house by now.	2009-10 Med		
	a. to call	b. Call	c. Called	d. calling
73.	If you had passed your examination we ____ a celebration:	2009-39 Med		
	a. Would have had	b. Must have	c. would have	d. Will have
Hints: Conditional Sentences:				
➤ If clause is Present Indefinite than reward clause will be in Future Indefinite.				
➤ If clause is Past Indefinite than reward clause will be "Would"				
➤ If clause is Past Perfect than reward clause will be "Would have"				
74.	Tell him not ____ anyone enter the enclosure .	2009-40 Med		
	a. To let	b. Let	c. to have let	d. Telling
75.	When I got up yesterday, the ground was wet it ____:	2009-50 Med		
	a. Has rained	b. Was rained	c. had rained	d. Rained
76.	He reads ____ magazine he can lay his hands on:	2009-60 Med		
	a. Some	b. Every	c. The	d. Any
77.	When the man failed to answer where ____ the police became suspicious:	2009-70 Med		
	a. did he belong to	b. was he belonging to	c. he belonged to	d. he was belonging to
78.	A train is ____ different bogeys.	2009-80 Med		
	a. Made of	b. Make up of	c. Made with	d. made up of
79.	<u>They</u> had a quarreled about their holiday destination. The underlined word is:	2009-90 Med		
	a. an adverb	b. an adjective	c. an auxiliary	d. a pronoun
80.	We waited ____ dark.	2009-100 Med		
	a. beyond	b. before	c. until	d. unless
81.	A fool and his ____ are soon parted:	2009-120 Med		
	a. Family	b. Friends	c. Riches	d. Money
82.	I've hung out the clothes. It's lovely and sunny: if it like this they Dry in two hours:	2009-130 Med		
	a. Stayed would be	b. Stays, will be	c. Had stayed, would have been	d. will stay, will be
83.	My stay in Gilgit will remain ____ fond memory to me.	2009-169 Med		
	a. a	b. the	c. my	d. any
84.	The students were ____ and the teacher, therefore did not take the class.	2008-01 Med		
	a. Only few	b. a few	c. no much	d. few
85.	Many ancient civilizations ____ on the banks of major rivers.	2008-39 Med		
	a. dashed	b. Flourished	c. Sprawled	d. Succeeded
86.	The managing director ____ staff to work hard with a promise of high salary:	2008-125 Med		
	a. motivates	b. mitigates	c. maneuvers	d. minces
87.	She was ____ of the result of the interview which she attended.	2008-140 Med		

- a. reluctant b. apprehensive c. pervasive d. bounced
88. Which one is an interjection? 2008-179 Med
a. How b. Hurrah c. Go d. Otherwise
89. His driving is rather _____. He moves smoothly and then all of a sudden becomes negligent; 2007-24 Med
a. Careless b. Erratic c. Relentless d. Carefree
90. Most people think _____ is an essential feature of modern life ; 2007-33 MED
a. The television b. A television c. The TV d. Television
91. Going to _____ is considered vulgar by the elders of our village. 2007-52 Med
a. The cinema b. Cinema c. A cinema d. Cinemas
92. The air we _____ today has many harmful elements in it ; 2007-64 Med
a. Breathe b. Are breathing c. Breath d. Have breathed
93. She dresses with great _____ and that is how she impresses people ; 2007-72 Med
a. Pride b. Otrageousness c. Ostentation d. Pancche
94. It is very difficult to relax while working with their new boss because he is a hard; 2007-82 Med
a. Worker b. Hearted c. Taskmaster d. Nut to crack
95. The building with numerous arches looked _____ in the moonlight; 2007-156 Med
a. Brightly b. splendidly c. Mysteiously d. Magnificent
96. The man sitting next to me on the plane was nervous because he _____ before; 2007-199 Med
a. Had not flown b. Did not fly c. Has not flown d. Has not been flying
97. Many ancient civilizations _____ on the banks of major rivers. 2006-39 Med
a. dashed b. flourished c. sprawled d. succeeded
98. Which one is an auxiliary? 2006-58 Med
a. Did b. at c. on d. by
99. His fondness for _____ makes his writings difficult to understand because most readers don't know the newly invented words. 2006-106 Med
a. archaic words b. sking c. advanced words d. neologisms
100. The building with numerous arches looked _____ in the moonlight. 2006-126 Med
a. Brightly b. Splendidly c. mysteriously d. magnificent
101. Her brother along with her parents _____ that she remain in school. 2005-29 Med
a. Insist b. Insists c. Are insisting d. Were insisting
102. Interpret 2005-73 Med
a. Non _____ b. Un _____ c. Dis _____ d. Mis _____
103. Note: Fill in the blank.
He asked me to bring a chair and sit _____ him; 2005-123 Med
a. Next to b. Besides c. Towards d. Among
104. Fill in the blank: Two and two _____ four ; 2005-174 Med
a. Can be b. Make c. Makes d Is equal to
105. Each occupation has its own _____; bankers, lawyers and computer professionals, for example, all use among themselves language which outsiders have difficult following. 2016-40 Eng
(a) Merits (b) Disadvantages (c) Rewards (d) Jargon
106. Abid is _____ in his field; no other contemporary scientist commands the same respect. 2016-70 Eng
(a) Disparaged (b) Ignominious (c) Intelligent (d) Preeminent
107. The foreign ministers would not _____ on the talks ended in a dead lock. 2016-200 Eng
(a) Consult (b) Negotiate (c) concede (d) Compromise
108. The custom department _____ the goods which were being smuggled into Pakistan. 2016-150 Eng
(a) Usurped (b) Grabbed (c) Confiscated (d) Possessed
109. The Govt. is making arrangements to _____ the fugitive who is now being detained in a foreign country. 2016-130 Eng
(a) Exile (b) Extradite (c) Exonerate (d) Expel
110. Your friend proved more sympathetic than I expected he _____ do. 2016-44 Med
(a) will (b) shall (c) would (d) should
111. The revolution in art has not lost its steam; it _____ on as fiercely as ever 2016-78 Med
(a) Trudges (b) Meanders (c) Ambles (d) Rages
112. As you have not prepared your work _____ 2016-Med

- (a) You may not fail in the examination (b) You could prepare harder next time
(c) You would do better in the examination (d) You are not likely to do well this time
113. The candidate _____ when asked why he had left his last job; he did not want to admit that he had been dismissed. 2016-Med
(a) Demurred (b) Confided (C) Dissembled (d) Rejoiced
114. I enjoy _____ tennis. 2017-09 Med
A) to play B) plays C) to playing D) playing
115. The path _____ paved, so we were able to walk through the path. 2017-19 Med
A) had been B) was C) has been D) being
116. While the city has earned record revenue this year, _____ well behind in exports: 2017-67 Med
A. It still lag B. It still lags C. It lag still D. It lags stil
117. Every person must learn _____? 2017-78 Med
A. That how wisely his time can be used. B. To make wise use of his time.
C. That this time need a wise uses D. To using his time in a wisely manner.
118. Though Aleem is poor _____ he is honest. 2017155 Med
A. but B. nevertheless C. yet D. still
119. I am afraid we have not got _____ sugar for making tea. 2018114 Med, Paper-D
A) some B) no C) any D) plenty
120. I had an unexpected guest today _____ my old classmate. 2018-176 Med Paper-D
A) it was B) it is C) he was d) she was
121. It's raining cats and dogs. So there are _____ cars on the road today. 2018-56 Med, Paper-D
A) few B) a few C) a big number of D) a great deal of.

Answer Key

- | | | |
|---|--------------------------|-----------------------|
| 1. B) Lying | 32. (c) suspiciously | 64. d. Promoted |
| 2. C) Adversely | 33. (b) matrimonial | 65. b. Wail |
| 3. C) would | 34. (b) evade | 66. a. Used to |
| 4. C) Should | 35. (d) idea | 67. c. Evidence |
| 5. C) Must | 36. (a) Imagined | 68. c. Conspicuous |
| 6. B) Consulted | 37. (d) just laughed | 69. d. And |
| 7. D) Precocious | 38. (c) either | 70. b. Lost |
| 8. (c) had never seen | 39. (b) will speak | 71. a. Tyrant |
| 9. (d) The higher | 40. (b) were | 72. d. calling |
| 10. (c) were | 41. (c) planet | 73. c. would have |
| 11. (a) in case | 42. (b) I realized | 74. a. To let |
| 12. A) A, an and the | 43. (a) bacteria | 75. c. had rained |
| 13. A) seems | 44. a. Preparing | 76. d. Any |
| 14. D) as soon as | 45. d. To see | 77. he belonged to |
| 15. C) the John Keats | 46. a. Delinquent | 78. d. made up of |
| 16. D) will have been | 47. d. So well | 79. d. a pronoun |
| 17. (c) what has held them | 48. a. Incredulous | 80. c. until |
| 18. (d) would | 49. a. Any | 81. d. Money |
| 19. (a) a few | 50. c. Have just cleaned | 82. b. Stays, will be |
| 20. (b) any | 51. c. Incognito | 83. a. a 84. b. a few |
| 21. (b) confirmed | 52. c. Enticed | 85. c. Sprawled |
| 22. (c) hairs are | 53. c. Dictatorial | 86. a. motivates |
| 23. (d) perseverance | 54. b. Lost | 87. b. apprehensive |
| 24. (d) through | 55. c. Actors | 88. b. Hurrah |
| 25. (c) had better to call | 56. b. Protect | 89. b. Erratic |
| 26. (c) that have been | 57. a. Aggrieved | 90. d. Television |
| 27. (a) what have been | 58. a. Abridged | 91. a. The cinema |
| 28. (a) had better call | 59. a. To meet | 92. a. Breathe |
| 29. (b) was afraid of appearing | 60. b. Much | 93. c. Ostentation |
| 30. (c) Ours is not one of the
quickest response systems | 61. d. Destroyed | 94. d. Nut to crack |
| 31. (c) confidants | 62. b. Charitable | 95. d. Magnificent |
| | 63. a. Valuable | 96. c. Has not flown |

97. c. sprawled	106. (d) Preeminent	115.A
98. a. Did	107. (d) Compromise	116.B
99. d. neologisms	108. (c) Confiscated	117.B
100. d. magnificent	109. (b) Extradite	118.C
101. a. Insist	110.C	119.C
102. d. Mis_____	111.A	120.A
103. a. Next to	112.D	121. A
104. b. Make	113.C	
105. (d) Jargon	114.	

Miscellaneous Mcqs

1.	Out of the following indicate the matching item for PUPPIES	2018-02 Med Paper-D
	A)School B)Litter C) COVEY D)Group	
2.	Choose the related word for Rat on the analogy of Elephant: Stride	2018-15 Med,Paper-D
	A)Scamper B)Loiter C)Whimper D) gallop	
3.	Choose the related word for Broom on the analogy of Water: Splash.	2018196 Med. Paper-D
	A)Whisper B)Gush C)Swish D)Screech	
4.	Don't poke your nose my affairs_____ my affairs.	2018-39 Med Paper-D
	A)in B)on C)into d)by	
5.	A person who leaves his country and settles in another country is called:	2018-44 Med,Paper-D
	A)Emigrant B)Immigrant C)Migrant D)Aborigine	
6.	To the letter' means:	2018-75 Med,Paper-D
	A)Cursory B)Enveloping a letter C)Precisely D)Reporting a problem	
7.	<u>Which</u> way shall we go? [The underlined word is:	2018-89 Med Paper-D
	A)Demonstrative adjective B)Interrogative pronoun C)Interrogative adjective D)Exclamatory adjective	
8.	Which one of the following is opposite in meaning to word SYMPATHY	7201894 Med Paper-D
	A)Apathy B)Pathos C)Empathy D)Jealousy	
9.	Saba was sick on the bus. The underlined prepositional phrase functions as a in this sentence:)	2018- Med.
	A)Adjunct B)Disjunct C)Conjunct D)Adverbial	
10.	Enlarge upon' means	2018-Med
	A)Explain in more detail B)To make taller C) To become large D) To measure	
11.	My mother offered me milk. <u>But for my life</u> . I could not drink it	
	[The underlined expression means:	2018-Med
	A)However hard I may try B)Because of my life C)For the sake of my life D)During my life.	

Answers

1.B	5.B	9.D
2.A	6.C	10.A
3.C	7.C	11.A
4.C	8.D	

Direct & Indirect;

1.	He said to me, "Why have you come late?" [Indirect form of the sentence is:]	2015-30 Med
	A) He asked me why I had come late B) He asked me why I came late. C) He asked me why I have come late. D) He told me as to why I had come late.	
2.	He said, "May this child live long!" [Indirect form of the sentence is:]	2015-90 Med
	A) He prayed that that child may live long. B) He prayed that that child will live long. C) He prayed that that child might live long. D) He said that that child might live long.	
3.	He said to me, "What a stupid fellow you are!" [Indirect form of the sentence is:]	2015-160 Med
	A) He exclaimed that I was a very stupid fellow.B) He told me that you were a stupid fellow. C) He exclaimed that what a stupid fellow was. D) He did tell me that I had been a stupid fellow.	
4.	She said to him, "where did you go yesterday" select the correct indirect speech.	2015-167 Eng
	A) She asked him where he had gone the previous day.	

- B) She told him where he had gone the previous day.
 C) She asked him where had he gone the previous day.
 D) She asked me where he had gone yesterday.
-
5. Have you got a computer? She said.
Select the correct indirect speech: 2013-10 Med;
 A) She wanted to find whether I have a computer. B) She wanted to know whether I had a computer.
 C) She wanted to know if I could use computer. D) She was interested to know about my computer.
-
6. "I saw him yesterday" she said.
Select the correct indirect speech: 2013-80 Med
 A) She told that she had seen him yesterday.
 B) She said that she had seen him the day before.
 C) She told that she could see him the previous day.
 D) She said that she would see him the day before.
-
7. "I have bee to Spain," he told me. Select the correct indirect speech: 2013-200Med
 A) He told me that he could visit Spain. B) He told me that he has visited Spain.
 C) He told me that he had been to Spain. D) He told me that he has been to Spain.
-
8. "You really took good care of your sister," I said. Select the correct indirect speech: 2013-81Eng
 A) I said that he had really taken good care of his sister.
 B) I said that he had really cared good for his' sister.
 C) I said that he really had taken good care of his sister.
 D) I said that he had really good care taken of his sister.
-
9. "I shall be in Geneva on Monday," he said. Select the correct indirect speech: 2013-111Eng
 A) He said that he would be in Geneva on Monday.
 B) He said that he shall be in Geneva on Monday.
 C) He told that he would be in Geneva on Monday.
 D) He hoped that he could be in Geneva on Monday.
-
10. "Remember to brush your teeth after dinner," she said.
Indirect form of the sentence is: 2012-17 Med
 A) She told him to remember to brush his teeth after dinner.
 B) She reminded him to brush his teeth after dinner.
 C) She advised him to remember to brush his teeth after dinner.
 D) She said to him to remember to brush his teeth after dinner.
-
11. I said to him, "Can you read this letter?"
Indirect form of the sentence is: 2012-50 Med
 A) I said to him whether he read that letter. B) I asked him if could he read this letter.
 C) I told him that he could read that letter. D) I asked him if he could read that letter.
-
12. He said to me, "Why have you come late" *Indirect form of the sentence is:* 2012-70 Med
 (a) He asked me why I came late. (b) He asked me why I had come late.
 (c) He asked me why I have come late. (d) He told me as to why I had come late.
-
13. He said to me, " what a stupid fellow you are" *Indirect form of the sentence is* 2012-147 Eng
 (a) he told me that you were a stupid fellow. (b) He exclaimed that I was a very stupid fellow.
 (c) he exclaimed that what stupid fellow I was. (d) he did tell me that I had been stupid fellow.
-
14. He said "May this child live long" *Indirect form of the sentence is:* 2012-180 Eng
 (a) He prayed that that child may live long. (b) He prayed that child will live long.
 (c) He said that that child might live long. (d) He prayed that that child might live long.
-
15. He said, "If I were you, I would protest" can be indirectly reported as: 2011-111 Med
 (a) if he had been me, he would have protested (b) he advised us to protest
 (c) if he were me, he would protest (d) if he had been I, he would have protested
-
16. Consider the following sentence: He shouted, "Let me go". Which one of the following stands for the "indirect speech" of the above sentence; 2005-92 Med
 a. He requested that let him go b. He shouted to let him go
 c. He shouted to them to let him go d. He imported them to let me go.
-
17. He said to me, "I have been looking for work, but haven't found a job". 2016-20 Eng
 (a) He told me that he had been looking for work, but hadn't found a job
 (b) He told me that he had looked for work, but hadn't found a job.
 (c) He told me that he had being looked for work, but haven't found a job.
 (d) He tolded me that he was looking for work, but hadn't find a job.

18. He said to her, "What a hot day!" Select the correct Indirect speech: 2016-90 Eng
 (a) He exclaimed sorrowfully that it was hot day (b) He told her that it was a hot day
 (c) **He exclaimed that it was a very hot day** (d) He said that it was a hot day
19. He said, "May this child live long." Indirect form of the sentence is: 2016-180 Eng
 (a) He prayed that that child may live king (b) He prayed that that child will living king
 (c) **He prayed that that child might live king** (d) He said that that child might live king
20. Anwar said, "Naveed must go tomorrow". Select the correct indirect speech: 2016-197 Med
 (a) Anwar declared that Naveed must have gone the following day
 (b) Anwar exclaimed that Naveed would have to go the following day
 (c) Anwar said that Naveed would have to go the following day
 (d) Anwar said that Naveed shall go the following day.
21. "I am disappointed that you feel you have to lie to me, Jason." said his father 2016-59 Med
 Select the correct indirect speech:
 (a) His father said to Jason that he is sorry to feel disappointed that he has to lie to me
 (b) Jason's father said to him that he was sorry that he felt he had to lie to me.
 (c) Jason's father said that he was disappointed to know that he felt he had to lie to him.
 (d) Jason's father was disappointed and sorry that he had to lie to him and that he felt it.
22. He asked me what my name was and what I did 2017-30 Med
 A) He said to me, "What was my name and what did I do?"
 B) He said to me, "What is your name and what do you do?"
 C) He said to me, "What my name was and what I did?"
 D) He said to me, "What his name was and what did he do?"
23. "He is busy. Would you like to leave a message?" Said the assistant 2017-91 Med
 A. The assistant told that he is busy and asked me to leave a message.
 B. The assistant told that he is busy and ask me to leave a message.
 C. The assistant told that he was busy and asked me to leave a message
 D. The assistant told that he was busy and asked me to leave a message.
24. He said, "What is the matter"? Choose the correct indirect speech: 2018-28 Med Paper
 A) He said what the matter was B) He asked what the matter was
 C) He enquired that what was the matter. D) He asked that what the matter had been
25. She said, "What a lovely dress it is." [Choose the correct indirect speech: 2018-176 Med.
 A) She exclaimed that it is a lovely dress. B) She exclaimed that it was a lovely dress.
 C) She exclaimed that what a lovely dress it was D) She exclaimed what a lovely dress it is.
26. The teacher said, "Amna, watch your steps." 2018-77 Med. Paper-D
 [Choose the correct indirect speech:
 A) The teacher ordered Amna that She should watch her steps.
 B) The teacher ordered Amna to watch your steps.
 C) The teacher ordered Amna to watch her steps
 D) The teacher requested Amna to watch your steps
27. He said to me, "traitor". 2018-57 Med Paper-D
 [Choose the correct indirect speech:
 A) He said to me that I was a traitor B) He told me that I have been a traitor.
 C) He called me a traitor. D) He exclaimed with anger that I was a traitor.

Answer Key

1. A) He asked me why I had come late
 2. C) He prayed that that child might live long
 3. A) He exclaimed that I was a very stupid fellow
 4. A) She asked him where he had gone the previous day
 5. B) She wanted to know whether I had a computer.
 6. C) She told that she could see him the previous day
 8. A) I said that he had really taken good care of his sister.
 9. C) He told that he would be in Geneva on Monday
 10. B) She reminded him to brush his teeth after dinner
 11. d 1 asked him if he could read that letter.
 12. (c) He asked me why I have come late
 13. (b) He exclaimed that I was a very stupid fellow

- | | |
|---|------|
| 14. (d) He prayed that that child might live long | 21.C |
| 15. (d) if he had been I, he would have protested | 22.B |
| 16. b. He shouted to let him go | 23.A |
| 17. (a) He told me that he had been looking for work, | 24.B |
| but hadn't found a job | 25.A |
| 18.c(c) He exclaimed that it was a very hot day | 26.C |
| 19.c(c) He prayed that that child might live king | 27.C |
| 20. A | |

Passive/Active Voice;

- | | |
|--|--------------|
| 1. "His bad friends will ruin him". Passive form of the sentence is. | 2015-50 Med |
| A) He will ruin his bad friends. B) He is ruined by his bad friends. | |
| C) He will be ruined by his bad friends. D) He is being ruined by his bad friends. | |
| 2. She does not wash clothes on Fridays. [Passive form of the sentence is:] | 2015-130 Med |
| A) Clothes are not being washed by her on Fridays. B) Clothes were not washed by her on Fridays. | |
| C) Clothes were not being washed by her on Fridays. D) Clothes are not washed by her on Fridays. | |
| 3. Will you give me your bicycle? [Passive form of the sentence is:] | 2015-190 Med |
| A) Will your bicycle be given to me by you B) Shall you be given to me by your bicycle? | |
| C) I shall be given your bicycle by you? D) Your bicycle will be given to me by you? | |
| 4. The police arrested him for dangerous driving. (Select the correct passive voice:) | 2015-99 Eng |
| A) He was arrested by the police for dangerous driving. | |
| B) He was arrested by the police for dangerous driving. | |
| C) For dangerous driving he was arrested by the police. | |
| D) By the police was he arrested for dangerous driving. | |
| 5. I keep the butter in the fridge. | 2013-30Med |
| Select the correct passive voice: | |
| a) In the fridge the butter is kept by me . b) By me is the butter kept in the fridge. | |
| c) The butter is kept by me in the fridge. d) Kept in the fridge by me is the butter. | |
| 6. The police arrested him for dangerous driving. | 2013-190 Med |
| Select the correct passive voice: | |
| a) He was arrested for dangerous driving by police. | |
| b) He was arrested by police for dangerous driving. | |
| c) For dangerous driving he was arrested by police. | |
| d) By police was he arrested for dangerous driving. | |
| 7. Traffic constables direct traffic. | 2013-21 Eng |
| Select the correct passive voice: | |
| a) Directed by traffic constables is traffic. b) By traffic constables is directed traffic. | |
| c) Traffic by traffic constables is directed. d) Traffic is directed by traffic constables. | |
| 8. Fire destroyed the top floor of the building: | 2013-90 Med |
| a) The top floor of the building got destroyed by fire | |
| b) By fire was destroyed the top floor of the building. | |
| c) Destroyed by fire was the top floor of the building. | |
| d) The top floor of building was destroyed by fire. | |
| 9. The might promote Javed next year. | 2013-121 Eng |
| Select the correct passive voice: | |
| A) Javed might be promoted by them next year. B) Promoted by them Javed might be next year. | |
| C) By them Javed might be promoted next year. D) Next year Javed might be promoted by them. | |
| 10. Your essay impressed the lecturer. | 2013-171 Eng |
| Select the correct passive voice: | |
| A) The lecturer got impressed by your essay. B) The lecturer felt impressed by your essay. | |
| C) By your essay the lecturer was impressed D) The lecturer was impressed by your essay | |
| 11. Why have you broken this jug? | 2012-13Med |
| Passive form of the sentence is: | |
| A) Why has this jug been broken by you? B) Why have this jug been broken by you? | |
| C) Why this jug has been broken by you? D) Why had that jug been broken by you? | |
| 12. You did not kill a lion in the forest. | |

- Passive form of the sentence as:* 2012-30 Med
 A) A lion is not killed by you In the forest
 C) A lion is killed not by you in the forest. B) A lion was not killed by you in the forest.
 D) A lion has not killed by you in the forest.
-
13. Did he buy a car yesterday? 2012-140Med
Passive form of the sentence is:
 A) Was a car bought by him yesterday? B) Has a car been bought by him yesterday?
 C) Is a car bought by him the other day? D) Had a car been bought by him yesterday?
-
14. She does not wash clothes on Friday:
Passive form of the sentence is: 2012-30 Eng
 (a) clothers are not being washed by her on Fridays. (b) clothes are not washed by her on Fridays.
 (c) Clothes were not wasfhed by her on Fridays (d) clothes were not being washed by her on Fridays.
-
15. Will you give me your bicycle? Passive form of the sentence is: 2012-61Eng
 (a) Will your bicycle be given to me by you? (b) Shall you be given to me by your bicycle?
 (c) I shall be given your bicycle by you? (d) Your bicycle will be given to me by you?
-
16. "His bad friends will ruin him" Passive form of the sentence is: 2012-157 Eng
 (a) he will ruin his bad friends (b) he is ruined by his bad friend
 (c) he will be ruined by his bad friends (d) he is being ruined by his bad friends.
-
17. Consider the sentence "they made him king", four choices are given below for this sentence to be rendered into 'passive voice'. Select the correct one ; 2005-53Med
 (a) He has been made king by them (b) He will be made king
 (c) They will make king to him (d) He was made king
-
18. Aslam can readily answer any question about what is going on
 Select the correct passive voice 2016-10 Eng
 (a) A question is readily answered on about what is going on
 (b) About what is going on, Islam can't answer readily the questions.
 (c) Aslam readily answered about ongoing questions
 (d) Any question about what is going on can be readily answered by Aslam
-
19. Somebody broke into our bungalow last Friday 2016-50 Eng
 Select the correct passive voice:
 (a) Our bungalow was broken into last Friday (b) Our bungalow was broken in last Friday
 (c) Our bungalow is broken in last Friday (d) Our bungalow was broken by somebody on last Friday
-
20. They don't allow people to park in front of their gate
 Select the correct passive voice: 2016-80 Eng
 (A) People are not allowed to park in front of their gate
 (B) People are un-allowed to park in front of their gate
 (c) People were not allowed to park in front of their gate
 (d) People were not being allowed to park in front of their gate
-
21. The principal has forbidden smoking on the campus.
 Select the correct passive voice: 2016-79 Med
 (a) Smoking has been forbidden on the campus by the principal.
 (b) Smoking had been forbidden on the campus by the principal.
 (c) Smoking was being forbidden on the campus by the principal.
 (d) It is forbidden by the principal to smoke on campus.
-
22. Together the old man and the young boy washed the dishes
 Select the correct passive voice: 2016-97.
 (a) The old man and the young boy were washing the dishes together
 (b) The old man and the young boy together washed the dishes
 (C) The dishes were washed by the old man and the young boy together
 (D) Together, the old man and the young boy wash the dishes
-
23. Communication technology has brought a tremendous revolution in modern societies
 Select the correct passive voice 2016-111 Med
 (a) A tremendous revolution has been brought in communication technology in modern societies
 (6) In modern societies a tremendous revolutions has been brought in communication technology
 (c) A tremendous revolution has brought in communication technology in modern societies
 (d) Communication technology has tremendous revolution brought in modern societies
-
24. Why did your supervisor take such a strong disciplinary action when you were innocent? 2017- Mod
 A. Why has such a strong disciplinary action taken by your supervisor when you were innocent?

- B. Why was such a strong disciplinary action being taken by your supervisor when you were innocent?
C. Why was such a strong disciplinary action taken by your supervisor when you were innocent?
D. Why such a strong disciplinary action was taken by your supervisor when you were innocent?

25. The rules forbid passenger to cross the railway line. 2017-185 Med

- A. Passenger were forbidden by the rules to cross the railway line,
B. Passenger are being forbidden by the rules to cross the railway line
C. Passengers are forbidden by the rules to cross the railway line
D. Passenger are forbid by the rules to cross the railway line.

26. You are called names by him [Choose the correct voice: 2018- Med Paper-D

- A) He is calling you names B) He calls you names
C) He called you names D) You are being called names by him.

ANSWERS

1. C
2. D
3. A
4. B
5. C
6. B
7. D
8. D
9. A

10. D
11. A
12. B
13. A
14. B
15. A
16. C
17. D
18. D

19. A
20. A
21. A
22. C
23. A
24. C
25. C
26. B

Measurements

- Smallest unit of measurement by;
- Measurement tape $\rightarrow 1 \text{ cm}$ or 1 mm
- Meter rule or half meter rule $\rightarrow 0.1 \text{ cm}$ or 1 mm
- Vernier caliper $\rightarrow 0.01 \text{ cm}$ or 0.1 mm
- Screw gauge $\rightarrow 0.001 \text{ cm}$ or 0.01 mm
- $\theta = s/r$
- $2\pi \text{ rad} = 360^\circ$
- $360^\circ = 1 \text{ revolution}$
- $1 \text{ radian} = 57.3^\circ$
- $1 \text{ degree} = 60 \text{ minute}$
- $1 \text{ minute} = 60 \text{ seconds}$
- Angle at circle is $2\pi \text{ radian}$.
- Angle at sphere is $4\pi \text{ steradian}$.
- Volume of solid cylinder $= \pi r^2 l$
- Area of sphere $= 4\pi r^2$
- Volume of sphere $= \frac{4}{3} \pi r^3$
- Dimension of velocity $= [LT^{-1}]$
- Dimension of acceleration $= [LT^{-2}]$
- Energy of photon; $E = hf$

• Time period of pendulum; $T = 2\pi \sqrt{\frac{l}{g}}$

Vectors and equilibrium

- Commutative property of vector $= A+B = B+A$
- $F_x = F \cos \theta$
- $F_y = F \sin \theta$
- $F = \sqrt{F_x^2 + F_y^2}$
- $A \cdot B = AB \cos \theta$
- $A \times B = AB \sin \theta$
- Scalar product; work and power
- Vector product; torque
- $\tau = r \times F$
- First condition of equilibrium; $\Sigma F = 0$
- Second condition of equilibrium; $\Sigma \tau = 0$

Motion and Force

- $v = s/t$
- $a = v/t$
- $v_f = v_i + at$
- $s = v_i t + \frac{1}{2} at^2$
- $2as = v_f^2 - v_i^2$
- $S = v_{ave} \times t$
- $v_{ave} = (v_i + v_f)/2$
- $g = 9.8 \text{ ms}^{-2} = 32 \text{ ft}^{-2}$
- $F = ma$
- $a = v/t$
- $P = mv$
- $P = F \cdot t$
- Impulse; $J = F \times t = \Delta P$
- $J = \Delta P$
- Law of conservation of momentum; $\Delta p = 0$
- Elastic collision in one dimension; $[v_1 + v_2] = [v_1' + v_2']$
- Magnitude of projectile velocity; $V_f = \sqrt{v_{fx}^2 + v_{fy}^2}$

- Height of projectile; $H = v_i^2 \sin^2 \theta / 2g$
- Time of flight; $T = 2 v_i \sin \theta / g$
- Time of summit or time to reach to highest point; $T = v_i \sin \theta / g$
- Range; $R = v_i^2 \sin 2\theta / g$
- $R_{max} = v_i^2 / g$
- $R = R_{max}$ at 45°

Work and Energy

- $W = Fd \cos \theta$
- Power; $p = W/t$ or $p = Fv$
- $1 \text{ watt} = \text{Js}^{-1}$
- $1 \text{ hp} = 746 \text{ watts}$
- $K.E = \frac{1}{2} mv^2$
- $P.E = mgh$
- Efficiency $= \text{output/input} = W \times D/P \times d$
- Circular motion

- Absolute potential energy $= Fr = -GmM_e/R_e$
(- because work is done against gravity)
- Gravitational potential $= E/m = GM_e/R_e$
- For escape velocity compare K.E with

Absolute potential energy; $v_{esc} = \sqrt{\frac{2GM_e}{r_e}} \rightarrow$

- $v_{esc} = \sqrt{2gr_e}$
- $G = 6.67 \times 10^{-11} \text{ Nm}^2 \text{kg}^{-2}$
- $R_e = 6.4 \times 10^6 \text{ m}$
- $M_e = 6 \times 10^{24} \text{ kg}$
- $v_{esc} = 11.2 \times 10^3 \text{ ms}^{-1}$
- $Wh = K.E + fh \rightarrow (Wh = \text{loss in potential energy})$
- Loss in P.E = Gain in K.E + work done against friction
- $E = mc^2 \rightarrow (c = 3 \times 10^8 \text{ ms}^{-1})$
- Rotational and circular motion
- Angular velocity; $\omega = \Delta \theta / \Delta t$
- Angular acceleration; $\alpha = \Delta \omega / \Delta t \rightarrow a = \alpha \times r$

- $v = r \omega$
- $F_c = mv^2/r$
- $a_c = -(v^2/r)$
- Centrifugal force $= mv^2/r$
- $F \sin \theta = mv^2/r$
- $F \cos \theta = mg$
- $\tan \theta = v^2/gr$
- Torque $= r F = rma = rm(\alpha) = (r^2 m) \alpha = I \alpha$
- Moment of inertia; $I = mr^2$
- Ring or thin walled cylinder inertia $(I) = MR^2$
- Disc or solid cylinder inertia $= \frac{1}{2} MR^2$
- Disc inertia $= \frac{1}{2} M (R_2^2 + R_1^2)$
- Solid sphere inertia $= \frac{2}{5} MR^2$
- Solid rod or meter stick inertia $= \frac{1}{12} ML^2$
- Rectangular plate inertia $= \frac{1}{12} M (a^2 + b^2)$
- Angular momentum $= L = r \times p = r mv = r m r \omega = r^2 m \omega = I \omega$
- $L = r mv \rightarrow L/t = r mv/t = rma = rF = \tau$
- $L/t = \tau$
- Linear kinetic energy $= \frac{1}{2} mv^2$
- Rotational kinetic energy $= \frac{1}{2} I \omega^2$
- Velocity of hoop $= v = \sqrt{gh}$

- Velocity of disc $= v = \sqrt{\frac{4}{3} gh}$
- Critical velocity $= v = 7.9 \text{ km}^2$
- The orbital velocity $= v = \sqrt{\frac{GM_e}{r}}$
- Lift at rest $\rightarrow T = w$
- Lift moving downward $\rightarrow T = w - ma$
- Lift moving upward $\rightarrow T = w + ma$
- Lift falling freely $= T - mg - ma = 0$
- Frequency for artificial satellite $\rightarrow f = \frac{1}{2\pi} \sqrt{\frac{g}{r}}$

Fluid dynamics

- Drag force $\rightarrow F_d = 6 \pi \eta r v$
- Terminal velocity $\rightarrow v_t = \frac{2\rho g r^2}{9\eta}$
- Continuity equation $\rightarrow A_1 v_1 = A_2 v_2$
- $\Delta v = \Delta V / \Delta t = \text{constant}$
- $\Delta m / \Delta t = \rho \Delta V / \Delta t$
- Bernoulli's Equation $= P + \frac{1}{2} \rho v^2 + \rho gh = \text{constant}$
- Torricelli's Theorem $\rightarrow v = \sqrt{2gh}$
- Flow meter or the venture meter $\rightarrow v_1 = \sqrt{\frac{2gh}{\frac{A_2^2}{A_1^2} - 1}}$

Oscillation

- Frequency $\rightarrow f = 1/T$
- Angular frequency $\rightarrow \omega = 2\pi f$
- Time period $\rightarrow T = 2\pi/\omega$
- Velocity of projection $\rightarrow v_y = \omega \sqrt{r^2 - x^2}$

- Simple pendulum time period $\rightarrow T = 2\pi \sqrt{\frac{l}{g}}$
- Simple pendulum potential energy $= \frac{1}{2} kx^2$
- Simple pendulum kinetic energy $= \frac{1}{2} kx_0^2 - \frac{1}{2} kx^2$
- Total energy of simple pendulum $= \frac{1}{2} kx_0^2$
- Resonance frequency $= F_n = nf_1$
- Phase $\rightarrow \theta = \omega t$

Waves

- Transverse wave speed $\rightarrow v = \frac{\sqrt{T \times L}}{M}$ or $v = \frac{\sqrt{T}}{m}$
- Longitudinal waves speed $\rightarrow v = \frac{\sqrt{E}}{\rho}$
- Phase change $\rightarrow 2\pi = \lambda$
- Phase difference $\rightarrow \delta = 2\pi \lambda$
- Speed of sound by newton $\rightarrow v = \sqrt{\frac{\rho_m g h}{\rho}} = 281 \text{ ms}^{-1}$
- Laplace correction $\rightarrow v = \sqrt{\frac{\gamma \rho_m g h}{\rho}} = 332 \text{ ms}^{-1}$

Chap No.11 ELECTROSTATICS

- $1 \text{ e} = 1.602 \times 10^{-19} \text{ C}$
- $Q = ne$
- Coulomb's Law; $F = k \frac{q_1 q_2}{r^2}$
- $K = \frac{1}{4\pi\epsilon_0}$
- $K = 9.0 \times 10^9 \text{ N m}^2 \text{C}^{-2}$
- $\epsilon_0 = 8.85 \times 10^{-12} \text{ C}^2 \text{N}^{-1} \text{m}^{-2}$
- $E_r = \frac{E}{\epsilon_0}$
- $F_{med} = \frac{F_{vac}}{\epsilon_r}$
- $E = \frac{F}{q} = \frac{V}{d} = K \frac{q}{r^2}$
- $\Phi = E A \cos \theta = \text{N m}^2 \text{C}^{-1}$
- $\Phi = \frac{Q}{\epsilon_0}$
- E due to sheet of charge; $E = \frac{\sigma}{2\epsilon_0}$
- E due to charge plates; $E = \frac{\sigma}{\epsilon_0}$
- $V = \frac{W}{Q} = \frac{U}{Q}$ Volt = Joule / Coulomb
- Electric potential energy; $U = K \frac{Qq}{r}$
- Electric potential; $V = \frac{W}{Q} = \frac{Fr}{Q} = K \frac{Q}{r}$
- Potential Gradient $= E = -\frac{\Delta V}{\Delta r}$
- $1 \text{ eV} = 1.602 \times 10^{-19} \text{ C} \times 1 \text{ V} \rightarrow (1 \text{ eV} = 1.602 \times 10^{-19} \text{ J})$
- $C = \frac{Q}{V} = \text{C V}^{-1} = \text{farad}$
- Charge density; $\sigma = \frac{Q}{A}$
- $C_{vac} = \frac{Q}{V} = \frac{\epsilon_0 A}{d} = \frac{\epsilon_0 \epsilon_r A}{d}$
- $\epsilon_r = C_{med} / C_{vac}$
- Capacitors In Series;
- $Q = Q_1 = Q_2 = Q_3$
- $V = V_1 + V_2 + V_3$
- $1/C_e = 1/C_1 + 1/C_2 + 1/C_3$
- Capacitors In Parallel;
- $Q = Q_1 = Q_2 = Q_3$
- $V = V_1 + V_2 + V_3$
- $C_e = C_1 + C_2 + C_3$
- Electric dipole; $P = q d$
- Energy $= U = \frac{UV}{2} = \frac{CV^2}{2} = \frac{1}{2} \frac{A \epsilon_0 \epsilon_r}{d} (Ed)^2$
- Energy density; $\mu = \frac{U}{Ad} = \frac{1}{2} \epsilon_0 \epsilon_r E^2$
- Maximum charge on capacitor $= C \times \text{e.m.f}$
- $q/q_0 = 63.2\% \rightarrow \text{for charging}$
- $q/q_0 = 36.7\% \rightarrow \text{for discharging}$
- $q = q_0 (1 - e^{-t/RC}) \rightarrow \text{for charging}$
- $q = q_0 e^{-t/RC} \rightarrow \text{for discharging}$

CURRENT ELECTRICITY

- Current, $I = Q/t \rightarrow \text{Cs}^{-1} = \text{A}$
- Drift velocity order $= 10^{-5} \text{ m/s}$.
- $V = IR$
- $\tan \theta = I/V = 1/R$
- Resistance, $R = V/I \rightarrow 1\Omega = 1\text{V}/1\text{A}$

- $R = \rho L/A \rightarrow \Omega.m$
- Conductance, $G = 1/R \rightarrow \text{Siemen(S) or mho}$
- Conductivity, $\sigma = 1/\rho = L/RA \rightarrow \text{mho/m or S/m}$
- Pure metals R inc with T inc.
- Electrolytes and insulators, R dec with T inc.
- $\Delta R = \alpha R_0 T \rightarrow R_T = R_0 (1 + \alpha T)$
- Temperature co-efficient of Resistance, $\alpha = (R_T - R_0)/R_0 T \rightarrow K^{-1}$
- Resistivity, $\rho_T = \rho_0 (1 + \alpha T)$ OR $\alpha = (\rho_T - \rho_0)/\rho_0 T \rightarrow K^{-1}$
- Electromotive Force, $\epsilon = W/q \rightarrow 1 \text{ volt} = 1 \text{ joule/coulomb}$
- Open circuit, $I = 0$ so $V = \epsilon$
- Terminal Voltage, $V_t = \epsilon - Ir$
- Power, $P = W/t = VI \rightarrow 1 \text{ Watt} = 1V \times 1A$
- $1 \text{ kWh} = 1 \text{ unit of electrical energy}$
- $1 J = 1W \times 1s$
- Maximum output power, $(P_{out})_{max} = \epsilon^2/4r = \epsilon^2/4R$
- Thermo emf, $\epsilon = \alpha T + \frac{1}{2} \beta T^2$
- KCL, $\sum I = 0$
- KVL, $\sum \epsilon = \sum V = \sum IR$
- KCL based on L.O.C.O.CHARGE
- KVL based on L.O.C.O.ENERGY
- Wheatstone Bridge, $X = PQ/R$
- Potentiometer, $\epsilon_2/\epsilon_1 = l_2/l_1$
- $\tan \theta = I/V = 1/R$

ELECTROMAGNETISM

- Force on current carrying wire, $F = BIL \sin \theta$.
- Magnetic field or magnetic induction, $B = F/IL \rightarrow 1 \text{ tesla} = 1 \text{ NA}^{-1} \text{ m}^{-1} = 1 \text{ Wb m}^{-2}$
- $1 T = 10^4 G$
- Magnetic Flux, $\Phi = B A \cos \theta \rightarrow 1 \text{ Wb} = 1 \text{ N m A}^{-1}$.
- Ampere's Law, $B \propto I/r = \mu_0 (I/2\pi r)$ OR $\oint B \cdot dL = \mu_0 I$
- $B_{net} = B_1 + B_2$
- Magnetic field due to current carrying solenoid, $B = \mu_0 n I \rightarrow n = N/L$
- Motion of charge particle in uniform magnetic field, $F = qvB \sin \theta$
- Centripetal Force = Magnetic force $\rightarrow mv^2/r = qvB$
- Time period of charge particle in B, $T = 2\pi m/qB$
- Frequency of charge particle in B, $f = qB/2\pi m$
- Velocity selector, $F_E = F_M \rightarrow qE = qvB \rightarrow v = E/B$
- Torque on current carrying coil, $\tau = NBIA \cos \theta$
- Restoring torque, $\tau = C \theta$
- Galvanometer, $NBIA \cos \theta = C \theta \rightarrow I = C\theta/NAB \rightarrow I \propto \theta$
- Conversion of galvanometer into ammeter, small R connected in parallel
- Conversion of galvanometer into voltmeter, large R in series are connected
- Ammeter, $R_s = R_g I_g / (I - I_g) \rightarrow \text{Ideal ammeter} \rightarrow 0 R$

- Voltmeter, $R_h = (V/I_g) - R_g \rightarrow \text{Ideal voltmeter} \rightarrow \text{infinite } R$

ELECTROMAGNETIC INDUCTION

- Faraday's Law, $\epsilon \propto N (\Delta\Phi/\Delta t) \rightarrow \epsilon = N (\Delta\Phi/\Delta t)$
- Lenz Law, $\epsilon = -N (\Delta\Phi/\Delta t)$
- Flux motional emf, $\epsilon = Blv \sin \theta$
- Rate of work done, $W = Bilv$
- Rate of production of electrical energy, energy $= \epsilon I$
- $W = \text{energy} \rightarrow Bilv = \epsilon I \rightarrow \epsilon = Blv$
- Power, $P = Fv$
- $\epsilon = L \Delta I/\Delta t$ or $\epsilon = N \Delta\Phi/\Delta t \rightarrow LI = N\Phi$
- Self-Inductance, $L = N\Phi/I$
- $\epsilon = M \Delta I/\Delta t$ or $\epsilon = N \Delta\Phi/\Delta t \rightarrow MI = N\Phi$
- Mutually inductance, $M = N\Phi/I$
- $F = 1/T$
- Induced emf, $\epsilon = NAB \cos \omega t$ or $NAB \omega \sin \omega t$
- $\epsilon = \epsilon_{max} \sin \omega t$
- Back emf, $V = \epsilon + IR$
- $N_s / N_p = V_s / V_p = I_p / I_s$

PHYSICS OF SOLIDS

- Elastic modulus = $\frac{\text{Stress}}{\text{Strain}}$
- Tensile stress = $\frac{F}{A}$
- Tensile strain = $\frac{\Delta L}{L}$
- Young modulus = $\frac{F}{\frac{\Delta L}{L}} = \frac{FL}{\Delta L} = Nm^{-2}$
- Shear stress = $\frac{F}{A}$
- Shear strain = $\frac{\Delta x}{y} = \tan \theta$
- Shear modulus = rigidity modulus = $\frac{F}{\frac{\Delta x}{y}} = \frac{Fy}{\Delta x} = \frac{F}{A\theta}$
- Bulk or volume stress = $\frac{P}{A}$
- Bulk modulus (in fluids) = $\Delta p = \frac{F}{A}$
- Volume strain = $\frac{\Delta V}{V}$
- Bulk modulus = $\frac{P}{-\frac{\Delta V}{V}} = -\frac{\Delta p}{\frac{\Delta V}{V}}$
- Stress \propto strain (Hook's law)
- $A = \pi r^2$
- $W = \frac{1}{2} Fe$ (work done on stretching wire).
- Strain energy = $\frac{1}{2} Fe$
- Strain energy per unit volume = $\frac{1}{2} \frac{F}{A} \frac{x}{l} = \frac{1}{2} (\text{stress}) (\text{strain})$

DAWN OF MODERN PHYSICS

- $E = m_0 c^2$
- $L = L_0 \sqrt{\frac{1-v^2}{c^2}}$
- $T = t_0 \sqrt{\frac{1-v^2}{c^2}}$
- $M = m_0 \sqrt{\frac{1-v^2}{c^2}}$
- $\lambda_{max} T = 0.2898 \times 10^{-2} \text{ m K}$ (Wein's displacement law)
- $E = \sigma T^4$ (Steffan-Bolts Law)
- $\sigma = 5.67 \times 10^{-8} \text{ Wm}^{-2} \text{ K}^{-4}$
- $E = nhf$
- $K.E_{max} = eV_0$
- $K.E_{max} = hf - \Phi$

- $hf_0 = \Phi = \frac{hc}{\lambda}$
- $K.E_{max} = hf - hf_0$
- $hf = K.E + hf_0$
- $P = \frac{E}{c}$
- $\Delta \lambda = \frac{E}{m_0 c} (1 - \cos \theta)$
- $\frac{1}{f'} = \frac{1}{f} + \frac{E}{m_0 c} (1 - \cos \theta)$
- $E_{photon} = E_{electron} + E_{positron}$
- Photon rest mass energy = $2m_0 c^2 = 1.02 \text{ MeV}$
- $\frac{h}{f c} = mv_{e^-} + mv_{e^+}$
- $\lambda = \frac{h}{p} = \frac{h}{mv}$
- $\Delta p = \frac{h}{\lambda}$ and $\Delta x = \lambda$
- $(\Delta p)(\Delta x) = h$
- $(\Delta E)(\Delta t) = h$

ATOMIC SPECTRA

- $\frac{1}{\lambda} = R \left(\frac{1}{P^2} - \frac{1}{n^2} \right)$
- $R = E_0 / hc$
- $R = 1.097 \times 10^7 \text{ m}^{-1}$.
- $mvr = nh/2\pi$.
- $h = \text{planks constant} = 6.6256 \times 10^{-34} \text{ J s}$.
- $E = hf = E_n - E_p$
- $r_n = \frac{n^2 h^2}{4\pi^2 k m e^2}$
- $E_p = -\frac{E_0}{n^2} = -\frac{13.6 \text{ eV}}{n^2}$
- $E_n = -\frac{E_0}{n^2} = 2.17 \times 10^{-18} \text{ J} / n^2 = +13.6 \text{ eV} / n^2$
- $r_n = n^2 r_1 \rightarrow r_1 = 0.53 \text{ \AA}$.
- $1 \text{ \AA} = 10^{-10} \text{ m}$
- $2\pi r = n\lambda$
- $eV \rightarrow hf_{max} = hc/\lambda_{min}$
- $\lambda_{min} = hc/eV$
- excited state for 10^{-8} s .
- metastable state for 10^{-3} s

NUCLEAR PHYSICS

- Nuclear size is of the order of 10^{-14} m .
- The mass of the nucleus is of the order of 10^{-27} kg .
- $\frac{1}{2} mv^2 = Vq$
- $Bqv = mv^2/r \rightarrow m = Bqr/v$
- $\frac{1}{2} mv^2 = Vq \rightarrow v^2 = 2Vq/m$
- So $m = qr^2 B^2 / 2V$
- $\Delta m = Zm_p + Nm_n - M_{(A,Z)}$
- The binding energy in MeV is $931 \times \Delta m$.
- The binding energy per nucleon = E_b/A .
- ${}^0_1 n^1 \rightarrow {}^1_1 H^1 + {}^1_{-1} \beta^0 + \text{antineutrino}$ 12 MIN
- $\Delta N/\Delta t = -\lambda N$
- $R = -\Delta N/\Delta t = \lambda N$
- $N = N_0 e^{-\lambda t}$
- $1 Bq = 1 \text{ decay per second}$
- $1 Ci = 3.70 \times 10^{10} \text{ decay/s}$
- $\lambda T_{1/2} = 0.693$
- The charge on u, t and c, in term of electron is $+2/3e$.
- The charge on s, t and b in term of electron is $-1/3e$.
- proton $= 2U \rightarrow D$.
- neutron $= U \rightarrow C$